

$$X[m] = \sum_{n=0}^{N-1} x[n]e^{-j2\pi\frac{mn}{N}}$$

# Signals and Systems

Second Edition

Steven T. Karris

with MATLAB® Applications

*Includes  
step-by-step  
procedures  
for designing  
analog and  
digital filters*



Orchard Publications  
[www.orchardpublications.com](http://www.orchardpublications.com)

# Signals and Systems

with MATLAB® Applications  
Second Edition

Steven T. Karris

Students and working professionals will find Signals and Systems with MATLAB® Applications, Second Edition, to be a concise and easy-to-learn text. It provides complete, clear, and detailed explanations of the principal analog and digital signal processing concepts and analog and digital filter design illustrated with numerous practical examples.

This text includes the following chapters and appendices:

- Elementary Signals • The Laplace Transformation • The Inverse Laplace Transformation
- Circuit Analysis with Laplace Transforms • State Variables and State Equations • The Impulse Response and Convolution • Fourier Series • The Fourier Transform • Discrete Time Systems and the Z Transform • The DFT and The FFT Algorithm • Analog and Digital Filters
- Introduction to MATLAB • Review of Complex Numbers • Review of Matrices and Determinants

Each chapter contains numerous practical applications supplemented with detailed instructions for using MATLAB to obtain quick solutions.

Steven T. Karris is the president and founder of Orchard Publications. He earned a bachelors degree in electrical engineering at Christian Brothers University, Memphis, Tennessee, a masters degree in electrical engineering at Florida Institute of Technology, Melbourne, Florida, and has done post-master work at the latter. He is a registered professional engineer in California and Florida. He has over 30 years of professional engineering experience in industry. In addition, he has over 25 years of teaching experience that he acquired at several educational institutions as an adjunct professor. He is currently with UC Berkeley Extension.



**Orchard Publications**, Fremont, California

Visit us on the Internet  
[www.orchardpublications.com](http://www.orchardpublications.com)  
or email us: [info@orchardpublications.com](mailto:info@orchardpublications.com)

ISBN 0-9709511-8-3

\$39.95 U.S.A.

# *Signals and Systems*

*with MATLAB® Applications*

*Second Edition*

**Steven T. Karris**



Orchard Publications  
[www.orchardpublications.com](http://www.orchardpublications.com)

Signals and Systems with MATLAB Applications, Second Edition

Copyright © 2003 Orchard Publications. All rights reserved. Printed in the United States of America. No part of this publication may be reproduced or distributed in any form or by any means, or stored in a data base or retrieval system, without the prior written permission of the publisher.

Direct all inquiries to Orchard Publications, 39510 Paseo Padre Parkway, Fremont, California 94538

Product and corporate names are trademarks or registered trademarks of the Microsoft™ Corporation and The MathWorks™ Inc. They are used only for identification and explanation, without intent to infringe.

### **Library of Congress Cataloging-in-Publication Data**

Library of Congress Control Number: 2003091595

**ISBN 0-9709511-8-3**

Copyright TX 5-471-562

---

# Preface

This text contains a comprehensive discussion on continuous and discrete time signals and systems with many MATLAB® examples. It is written for junior and senior electrical engineering students, and for self-study by working professionals. The prerequisites are a basic course in differential and integral calculus, and basic electric circuit theory.

This book can be used in a two-quarter, or one semester course. This author has taught the subject material for many years at San Jose State University, San Jose, California, and was able to cover all material in 16 weeks, with 2½ lecture hours per week.

To get the most out of this text, it is highly recommended that Appendix A is thoroughly reviewed. This appendix serves as an introduction to MATLAB, and is intended for those who are not familiar with it. The Student Edition of MATLAB is an inexpensive, and yet a very powerful software package; it can be found in many college bookstores, or can be obtained directly from

*The MathWorks™ Inc., 3 Apple Hill Drive , Natick, MA 01760-2098*

*Phone: 508 647-7000, Fax: 508 647-7001*

*<http://www.mathworks.com>*

*e-mail: [info@mathwork.com](mailto:info@mathwork.com)*

The elementary signals are reviewed in Chapter 1 and several examples are presented. The intent of this chapter is to enable the reader to express any waveform in terms of the unit step function, and subsequently the derivation of the Laplace transform of it. Chapters 2 through 4 are devoted to Laplace transformation and circuit analysis using this transform. Chapter 5 discusses the state variable method, and Chapter 6 the impulse response. Chapters 7 and 8 are devoted to Fourier series and transform respectively. Chapter 9 introduces discrete-time signals and the  $\mathcal{Z}$  transform. Considerable time was spent on Chapter 10 to present the Discrete Fourier transform and FFT with the simplest possible explanations. Chapter 11 contains a thorough discussion to analog and digital filters analysis and design procedures. As mentioned above, Appendix A is an introduction to MATLAB. Appendix B contains a review of complex numbers, and Appendix C discusses matrices.

## **New to the Second Edition**

This is an refined revision of the first edition. The most notable changes are chapter-end summaries, and detailed solutions to all exercises. The latter is in response to many students and working professionals who expressed a desire to obtain the author's solutions for comparison with their own. The author has prepared more exercises and they are available with their solutions to those instructors who adopt this text for their class.

The chapter-end summaries will undoubtedly be a valuable aid to instructors for the preparation of presentation material.

---

---

The last major change is the improvement of the plots generated by the latest revisions of the MATLAB® Student Version, Release 13.

Orchard Publications

Fremont, California

[www.orchardpublications.com](http://www.orchardpublications.com)

[info@orchardpublications.com](mailto:info@orchardpublications.com)

---

# Table of Contents

## Chapter 1

### *Elementary Signals*

Signals Described in Math Form .....	1-1
The Unit Step Function .....	1-2
The Unit Ramp Function .....	1-10
The Delta Function .....	1-12
Sampling Property of the Delta Function.....	1-12
Sifting Property of the Delta Function.....	1-13
Higher Order Delta Functions.....	1-15
Summary.....	1-19
Exercises.....	1-20
Solutions to Exercises .....	1-21

## Chapter 2

### *The Laplace Transformation*

Definition of the Laplace Transformation.....	2-1
Properties of the Laplace Transform.....	2-2
The Laplace Transform of Common Functions of Time .....	2-12
The Laplace Transform of Common Waveforms .....	2-23
Summary.....	2-29
Exercises.....	2-34
Solutions to Exercises .....	2-37

## Chapter 3

### *The Inverse Laplace Transformation*

The Inverse Laplace Transform Integral.....	3-1
Partial Fraction Expansion .....	3-1
Case where $F(s)$ is Improper Rational Function ( $m \geq n$ ).....	3-13
Alternate Method of Partial Fraction Expansion.....	3-15
Summary.....	3-18

---

Exercises .....	3-20
Solutions to Exercises .....	3-22

## ***Chapter 4***

### ***Circuit Analysis with Laplace Transforms***

Circuit Transformation from Time to Complex Frequency.....	4-1
Complex Impedance $Z(s)$ .....	4-8
Complex Admittance $Y(s)$ .....	4-10
Transfer Functions .....	4-13
Summary .....	4-16
Exercises .....	4-18
Solutions to Exercises.....	4-21

## ***Chapter 5***

### ***State Variables and State Equations***

Expressing Differential Equations in State Equation Form.....	5-1
Solution of Single State Equations.....	5-7
The State Transition Matrix .....	5-9
Computation of the State Transition Matrix.....	5-11
Eigenvectors.....	5-18
Circuit Analysis with State Variables .....	5-22
Relationship between State Equations and Laplace Transform.....	5-28
Summary .....	5-35
Exercises .....	5-39
Solutions to Exercises.....	5-41

## ***Chapter 6***

### ***The Impulse Response and Convolution***

The Impulse Response in Time Domain.....	6-1
Even and Odd Functions of Time.....	6-5
Convolution.....	6-7
Graphical Evaluation of the Convolution Integral .....	6-8
Circuit Analysis with the Convolution Integral.....	6-18
Summary .....	6-20



---

Exercises.....	6-22
Solutions to Exercises .....	6-24

## *Chapter 7*

### *Fourier Series*

Wave Analysis.....	7-1
Evaluation of the Coefficients .....	7-2
Symmetry.....	7-7
Waveforms in Trigonometric Form of Fourier Series .....	7-11
Gibbs Phenomenon.....	7-24
Alternate Forms of the Trigonometric Fourier Series .....	7-25
Circuit Analysis with Trigonometric Fourier Series .....	7-29
The Exponential Form of the Fourier Series .....	7-31
Line Spectra .....	7-35
Computation of RMS Values from Fourier Series .....	7-40
Computation of Average Power from Fourier Series .....	7-42
Numerical Evaluation of Fourier Coefficients.....	7-44
Summary.....	7-48
Exercises.....	7-51
Solutions to Exercises .....	7-53

## *Chapter 8*

### *The Fourier Transform*

Definition and Special Forms .....	8-1
Special Forms of the Fourier Transform .....	8-2
Properties and Theorems of the Fourier Transform.....	8-9
Fourier Transform Pairs of Common Functions .....	8-17
Finding the Fourier Transform from Laplace Transform.....	8-25
Fourier Transforms of Common Waveforms.....	8-27
Using MATLAB to Compute the Fourier Transform .....	8-33
The System Function and Applications to Circuit Analysis.....	8-34
Summary.....	8-41
Exercises.....	8-47
Solutions to Exercises .....	8-49

---

## Chapter 9

### *Discrete Time Systems and the $\mathcal{Z}$ Transform*

Definition and Special Forms .....	9-1
Properties and Theorems of the $\mathcal{Z}$ Transform .....	9-3
The $\mathcal{Z}$ Transform of Common Discrete Time Functions.....	9-11
Computation of the $\mathcal{Z}$ transform with Contour Integration .....	9-20
Transformation Between $s$ and $z$ Domains.....	9-22
The Inverse $\mathcal{Z}$ Transform.....	9-24
The Transfer Function of Discrete Time Systems .....	9-38
State Equations for Discrete Time Systems .....	9-43
Summary .....	9-47
Exercises .....	9-52
Solutions to Exercises .....	9-54

## Chapter 10

### *The DFT and the FFT Algorithm*

The Discrete Fourier Transform (DFT) .....	10-1
Even and Odd Properties of the DFT .....	10-8
Properties and Theorems of the DFT.....	10-10
The Sampling Theorem .....	10-13
Number of Operations Required to Compute the DFT.....	10-16
The Fast Fourier Transform (FFT) .....	10-17
Summary .....	10-28
Exercises .....	10-31
Solutions to Exercises.....	10-33

## Chapter 11

### *Analog and Digital Filters*

Filter Types and Classifications .....	11-1
Basic Analog Filters.....	11-2
Low-Pass Analog Filters .....	11-7
Design of Butterworth Analog Low-Pass Filters .....	11-11
Design of Type I Chebyshev Analog Low-Pass Filters.....	11-22
Other Low-Pass Filter Approximations.....	11-34
High-Pass, Band-Pass, and Band-Elimination Filters.....	11-39

---

Digital Filters .....	11-49
Summary.....	11-69
Exercises.....	11-73
Solutions to Exercises .....	11-79

## *Appendix A*

### *Introduction to MATLAB®*

MATLAB® and Simulink®.....	A-1
Command Window.....	A-1
Roots of Polynomials .....	A-3
Polynomial Construction from Known Roots.....	A-4
Evaluation of a Polynomial at Specified Values.....	A-6
Rational Polynomials .....	A-8
Using MATLAB to Make Plots .....	A-10
Subplots .....	A-18
Multiplication, Division and Exponentiation .....	A-18
Script and Function Files .....	A-25
Display Formats .....	A-30

## *Appendix B*

### *Review of Complex Numbers*

Definition of a Complex Number.....	B-1
Addition and Subtraction of Complex Numbers.....	B-2
Multiplication of Complex Numbers.....	B-3
Division of Complex Numbers .....	B-4
Exponential and Polar Forms of Complex Numbers .....	B-4

## *Appendix C*

### *Matrices and Determinants*

Matrix Definition .....	C-1
Matrix Operations.....	C-2
Special Forms of Matrices .....	C-5
Determinants .....	C-9
Minors and Cofactors.....	C-12

---

---

Cramer’s Rule .....	C-16
Gaussian Elimination Method.....	C-19
The Adjoint of a Matrix.....	C-20
Singular and Non-Singular Matrices .....	C-21
The Inverse of a Matrix .....	C-21
Solution of Simultaneous Equations with Matrices .....	C-23
Exercises .....	C-30

This chapter begins with a discussion of elementary signals that may be applied to electric networks. The unit step, unit ramp, and delta functions are introduced. The sampling and sifting properties of the delta function are defined and derived. Several examples for expressing a variety of waveforms in terms of these elementary signals are provided.

### 1.1 Signals Described in Math Form

Consider the network of Figure 1.1 where the switch is closed at time  $t = 0$ .

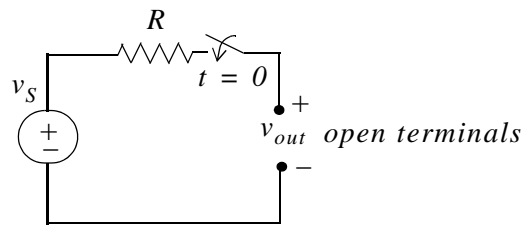


Figure 1.1. A switched network with open terminals.

We wish to describe  $v_{out}$  in a math form for the time interval  $-\infty < t < +\infty$ . To do this, it is convenient to divide the time interval into two parts,  $-\infty < t < 0$ , and  $0 < t < \infty$ .

For the time interval  $-\infty < t < 0$ , the switch is open and therefore, the output voltage  $v_{out}$  is zero. In other words,

$$v_{out} = 0 \text{ for } -\infty < t < 0 \quad (1.1)$$

For the time interval  $0 < t < \infty$ , the switch is closed. Then, the input voltage  $v_S$  appears at the output, i.e.,

$$v_{out} = v_S \text{ for } 0 < t < \infty \quad (1.2)$$

Combining (1.1) and (1.2) into a single relationship, we get

$$v_{out} = \begin{cases} 0 & -\infty < t < 0 \\ v_S & 0 < t < \infty \end{cases} \quad (1.3)$$

We can express (1.3) by the waveform shown in Figure 1.2.

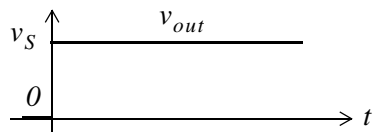


Figure 1.2. Waveform for  $v_{out}$  as defined in relation (1.3)

The waveform of Figure 1.2 is an example of a discontinuous function. A function is said to be *discontinuous* if it exhibits points of discontinuity, that is, the function jumps from one value to another without taking on any intermediate values.

### 1.2 The Unit Step Function $u_0(t)$

A well-known discontinuous function is the *unit step function*  $u_0(t)$ \* that is defined as

$$u_0(t) = \begin{cases} 0 & t < 0 \\ 1 & t > 0 \end{cases} \quad (1.4)$$

It is also represented by the waveform of Figure 1.3.

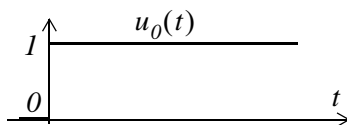


Figure 1.3. Waveform for  $u_0(t)$

In the waveform of Figure 1.3, the unit step function  $u_0(t)$  changes abruptly from 0 to 1 at  $t = 0$ . But if it changes at  $t = t_0$  instead, it is denoted as  $u_0(t - t_0)$ . Its waveform and definition are as shown in Figure 1.4 and relation (1.5).

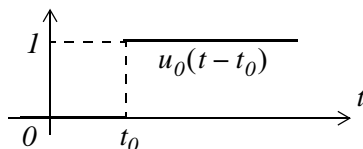


Figure 1.4. Waveform for  $u_0(t - t_0)$

---

\* In some books, the unit step function is denoted as  $u(t)$ , that is, without the subscript 0. In this text, however, we will reserve the  $u(t)$  designation for any input when we discuss state variables in a later chapter.

---

$$u_0(t - t_0) = \begin{cases} 0 & t < t_0 \\ 1 & t > t_0 \end{cases} \quad (1.5)$$

If the unit step function changes abruptly from 0 to 1 at  $t = -t_0$ , it is denoted as  $u_0(t + t_0)$ . Its waveform and definition are as shown in Figure 1.5 and relation (1.6).

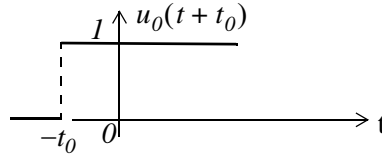


Figure 1.5. Waveform for  $u_0(t + t_0)$

$$u_0(t + t_0) = \begin{cases} 0 & t < -t_0 \\ 1 & t > -t_0 \end{cases} \quad (1.6)$$

### Example 1.1

Consider the network of Figure 1.6, where the switch is closed at time  $t = T$ .

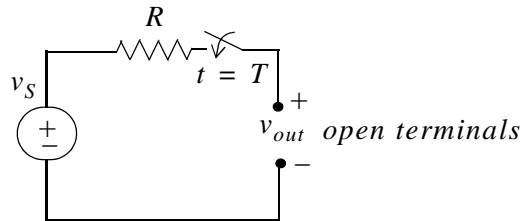


Figure 1.6. Network for Example 1.1

Express the output voltage  $v_{out}$  as a function of the unit step function, and sketch the appropriate waveform.

#### Solution:

For this example, the output voltage  $v_{out} = 0$  for  $t < T$ , and  $v_{out} = v_S$  for  $t > T$ . Therefore,

$$v_{out} = v_S u_0(t - T) \quad (1.7)$$

and the waveform is shown in Figure 1.7.

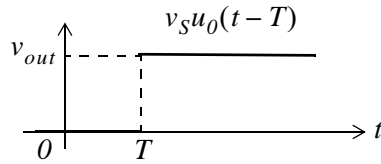


Figure 1.7. Waveform for Example 1.1

Other forms of the unit step function are shown in Figure 1.8.

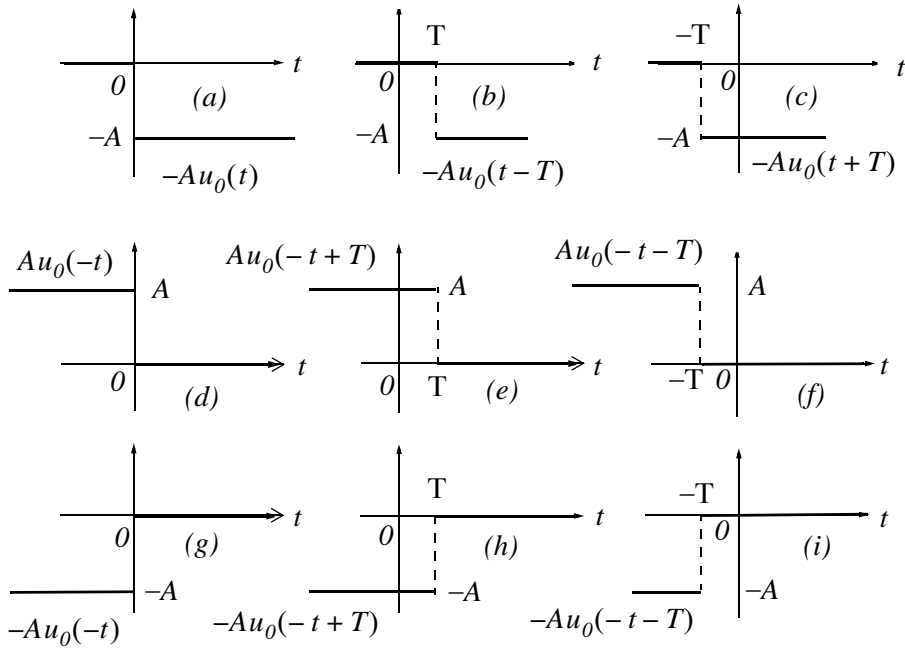


Figure 1.8. Other forms of the unit step function

Unit step functions can be used to represent other time-varying functions such as the rectangular pulse shown in Figure 1.9.

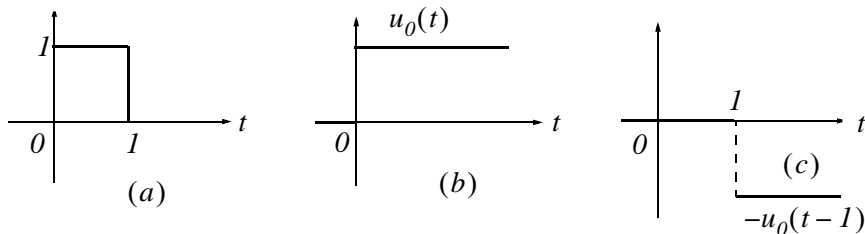


Figure 1.9. A rectangular pulse expressed as the sum of two unit step functions

Thus, the pulse of Figure 1.9(a) is the sum of the unit step functions of Figures 1.9(b) and 1.9(c) is represented as  $u_0(t) - u_0(t-1)$ .



The unit step function offers a convenient method of describing the sudden application of a voltage or current source. For example, a constant voltage source of  $24\text{ V}$  applied at  $t = 0$ , can be denoted as  $24u_0(t)\text{ V}$ . Likewise, a sinusoidal voltage source  $v(t) = V_m \cos \omega t\text{ V}$  that is applied to a circuit at  $t = t_0$ , can be described as  $v(t) = (V_m \cos \omega t)u_0(t - t_0)\text{ V}$ . Also, if the excitation in a circuit is a rectangular, or triangular, or sawtooth, or any other recurring pulse, it can be represented as a sum (difference) of unit step functions.

### Example 1.2

Express the square waveform of Figure 1.10 as a sum of unit step functions. The vertical dotted lines indicate the discontinuities at  $T, 2T, 3T$  and so on.

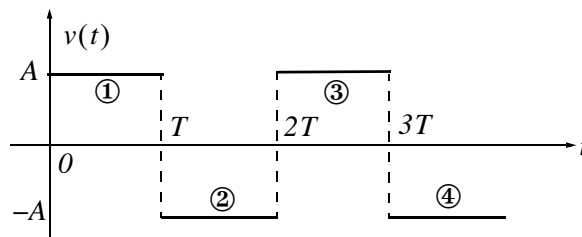


Figure 1.10. Square waveform for Example 1.2

### Solution:

Line segment ① has height  $A$ , starts at  $t = 0$ , and terminates at  $t = T$ . Then, as in Example 1.1, this segment is expressed as

$$v_1(t) = A[u_0(t) - u_0(t - T)] \quad (1.8)$$

Line segment ② has height  $-A$ , starts at  $t = T$  and terminates at  $t = 2T$ . This segment is expressed as

$$v_2(t) = -A[u_0(t - T) - u_0(t - 2T)] \quad (1.9)$$

Line segment ③ has height  $A$ , starts at  $t = 2T$  and terminates at  $t = 3T$ . This segment is expressed as

$$v_3(t) = A[u_0(t - 2T) - u_0(t - 3T)] \quad (1.10)$$

Line segment ④ has height  $-A$ , starts at  $t = 3T$ , and terminates at  $t = 4T$ . It is expressed as

$$v_4(t) = -A[u_0(t - 3T) - u_0(t - 4T)] \quad (1.11)$$

Thus, the square waveform of Figure 1.10 can be expressed as the summation of (1.8) through (1.11), that is,

$$\begin{aligned}
 v(t) &= v_1(t) + v_2(t) + v_3(t) + v_4(t) \\
 &= A[u_0(t) - u_0(t - T)] - A[u_0(t - T) - u_0(t - 2T)] \\
 &\quad + A[u_0(t - 2T) - u_0(t - 3T)] - A[u_0(t - 3T) - u_0(t - 4T)]
 \end{aligned} \tag{1.12}$$

Combining like terms, we get

$$v(t) = A[u_0(t) - 2u_0(t - T) + 2u_0(t - 2T) - 2u_0(t - 3T) + \dots] \tag{1.13}$$

### Example 1.3

Express the symmetric rectangular pulse of Figure 1.11 as a sum of unit step functions.

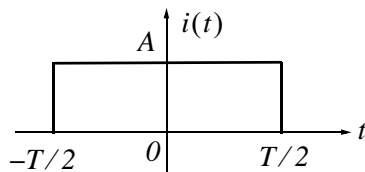


Figure 1.11. Symmetric rectangular pulse for Example 1.3

#### Solution:

This pulse has height  $A$ , starts at  $t = -T/2$ , and terminates at  $t = T/2$ . Therefore, with reference to Figures 1.5 and 1.8 (b), we get

$$i(t) = Au_0\left(t + \frac{T}{2}\right) - Au_0\left(t - \frac{T}{2}\right) = A\left[u_0\left(t + \frac{T}{2}\right) - u_0\left(t - \frac{T}{2}\right)\right] \tag{1.14}$$

### Example 1.4

Express the symmetric triangular waveform of Figure 1.12 as a sum of unit step functions.

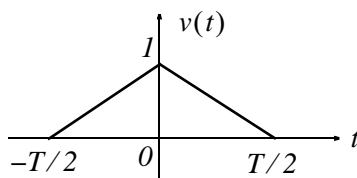


Figure 1.12. Symmetric triangular waveform for Example 1.4

#### Solution:

We first derive the equations for the linear segments ① and ② shown in Figure 1.13.

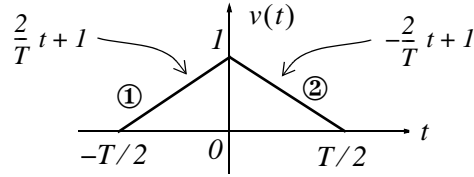


Figure 1.13. Equations for the linear segments of Figure 1.12

For line segment ①,

$$v_1(t) = \left(\frac{2}{T}t + 1\right) \left[ u_0\left(t + \frac{T}{2}\right) - u_0(t) \right] \quad (1.15)$$

and for line segment ②,

$$v_2(t) = \left(-\frac{2}{T}t + 1\right) \left[ u_0(t) - u_0\left(t - \frac{T}{2}\right) \right] \quad (1.16)$$

Combining (1.15) and (1.16), we get

$$\begin{aligned} v(t) &= v_1(t) + v_2(t) \\ &= \left(\frac{2}{T}t + 1\right) \left[ u_0\left(t + \frac{T}{2}\right) - u_0(t) \right] + \left(-\frac{2}{T}t + 1\right) \left[ u_0(t) - u_0\left(t - \frac{T}{2}\right) \right] \end{aligned} \quad (1.17)$$

### Example 1.5

Express the waveform of Figure 1.14 as a sum of unit step functions.

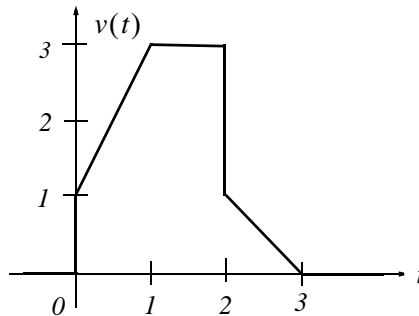


Figure 1.14. Waveform for Example 1.5.

### Solution:

As in the previous example, we first find the equations of the linear segments ① and ② shown in Figure 1.15.

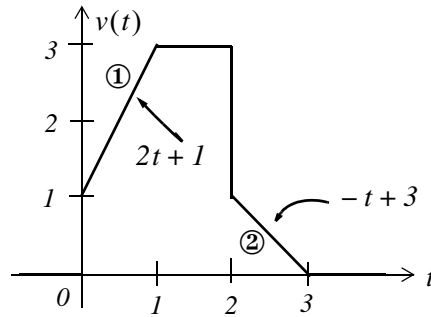


Figure 1.15. Equations for the linear segments of Figure 1.14

Following the same procedure as in the previous examples, we get

$$v(t) = (2t + 1)[u_0(t) - u_0(t - 1)] + 3[u_0(t - 1) - u_0(t - 2)] + (-t + 3)[u_0(t - 2) - u_0(t - 3)]$$

Multiplying the values in parentheses by the values in the brackets, we get

$$v(t) = (2t + 1)u_0(t) - (2t + 1)u_0(t - 1) + 3u_0(t - 1) - 3u_0(t - 2) + (-t + 3)u_0(t - 2) - (-t + 3)u_0(t - 3)$$

or

$$v(t) = (2t + 1)u_0(t) + [-(2t + 1) + 3]u_0(t - 1) + [-3 + (-t + 3)]u_0(t - 2) - (-t + 3)u_0(t - 3)$$

and combining terms inside the brackets, we get

$$v(t) = (2t + 1)u_0(t) - 2(t - 1)u_0(t - 1) - tu_0(t - 2) + (t - 3)u_0(t - 3) \tag{1.18}$$

Two other functions of interest are the *unit ramp function*, and the *unit impulse* or *delta function*. We will introduce them with the examples that follow.

**Example 1.6**

In the network of Figure 1.16  $i_S$  is a constant current source and the switch is closed at time  $t = 0$ .

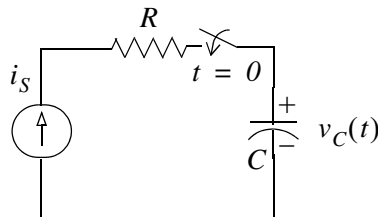


Figure 1.16. Network for Example 1.6

Express the capacitor voltage  $v_C(t)$  as a function of the unit step.

**Solution:**

The current through the capacitor is  $i_C(t) = i_S = \text{constant}$ , and the capacitor voltage  $v_C(t)$  is

$$v_C(t) = \frac{1}{C} \int_{-\infty}^t i_C(\tau) d\tau \quad * \quad (1.19)$$

where  $\tau$  is a dummy variable.

Since the switch closes at  $t = 0$ , we can express the current  $i_C(t)$  as

$$i_C(t) = i_S u_0(t) \quad (1.20)$$

and assuming that  $v_C(t) = 0$  for  $t < 0$ , we can write (1.19) as

$$v_C(t) = \frac{1}{C} \int_{-\infty}^t i_S u_0(\tau) d\tau = \underbrace{\frac{i_S}{C} \int_{-\infty}^0 u_0(\tau) d\tau}_0 + \frac{i_S}{C} \int_0^t u_0(\tau) d\tau \quad (1.21)$$

or

$$\boxed{v_C(t) = \frac{i_S}{C} t u_0(t)} \quad (1.22)$$

Therefore, we see that when a capacitor is charged with a constant current, the voltage across it is a linear function and forms a *ramp* with slope  $i_S / C$  as shown in Figure 1.17.

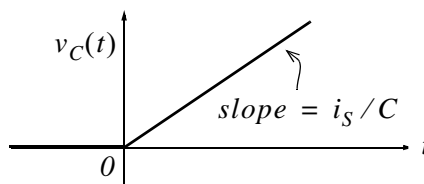


Figure 1.17. Voltage across a capacitor when charged with a constant current source.

---

\* Since the initial condition for the capacitor voltage was not specified, we express this integral with  $-\infty$  at the lower limit of integration so that any non-zero value prior to  $t < 0$  would be included in the integration.

**1.3 The Unit Ramp Function  $u_1(t)$** 

The *unit ramp function*, denoted as  $u_1(t)$ , is defined as

$$\boxed{u_1(t) = \int_{-\infty}^t u_0(\tau) d\tau} \quad (1.23)$$

where  $\tau$  is a dummy variable.

We can evaluate the integral of (1.23) by considering the area under the unit step function  $u_0(t)$  from  $-\infty$  to  $t$  as shown in Figure 1.18.

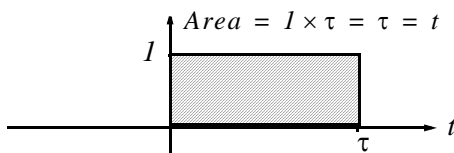


Figure 1.18. Area under the unit step function from  $-\infty$  to  $t$

Therefore, we define  $u_1(t)$  as

$$\boxed{u_1(t) = \begin{cases} 0 & t < 0 \\ t & t \geq 0 \end{cases}} \quad (1.24)$$

Since  $u_1(t)$  is the integral of  $u_0(t)$ , then  $u_0(t)$  must be the derivative of  $u_1(t)$ , i.e.,

$$\boxed{\frac{d}{dt}u_1(t) = u_0(t)} \quad (1.25)$$

Higher order functions of  $t$  can be generated by repeated integration of the unit step function. For example, integrating  $u_0(t)$  twice and multiplying by 2, we define  $u_2(t)$  as

$$u_2(t) = \begin{cases} 0 & t < 0 \\ t^2 & t \geq 0 \end{cases} \quad \text{or} \quad u_2(t) = 2 \int_{-\infty}^t u_1(\tau) d\tau \quad (1.26)$$

Similarly,

$$u_3(t) = \begin{cases} 0 & t < 0 \\ t^3 & t \geq 0 \end{cases} \quad \text{or} \quad u_3(t) = 3 \int_{-\infty}^t u_2(\tau) d\tau \quad (1.27)$$

and in general,

$$u_n(t) = \begin{cases} 0 & t < 0 \\ t^n & t \geq 0 \end{cases} \quad \text{or} \quad u_n(t) = 3 \int_{-\infty}^t u_{n-1}(\tau) d\tau \quad (1.28)$$

Also,

$$u_{n-1}(t) = \frac{1}{n} \frac{d}{dt} u_n(t) \quad (1.29)$$

**Example 1.7**

In the network of Figure 1.19, the switch is closed at time  $t = 0$  and  $i_L(t) = 0$  for  $t < 0$ .

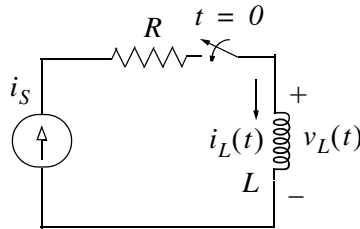


Figure 1.19. Network for Example 1.7

Express the inductor current  $i_L(t)$  in terms of the unit step function.

**Solution:**

The voltage across the inductor is

$$v_L(t) = L \frac{di_L}{dt} \quad (1.30)$$

and since the switch closes at  $t = 0$ ,

$$i_L(t) = i_S u_0(t) \quad (1.31)$$

Therefore, we can write (1.30) as

$$\boxed{v_L(t) = L i_S \frac{d}{dt} u_0(t)} \quad (1.32)$$

But, as we know,  $u_0(t)$  is constant ( $0$  or  $1$ ) for all time except at  $t = 0$  where it is discontinuous. Since the derivative of any constant is zero, the derivative of the unit step  $u_0(t)$  has a non-zero value only at  $t = 0$ . The derivative of the unit step function is defined in the next section.

### 1.4 The Delta Function $\delta(t)$

The *unit impulse* or *delta function*, denoted as  $\delta(t)$ , is the derivative of the unit step  $u_0(t)$ . It is also defined as

$$\int_{-\infty}^t \delta(\tau) d\tau = u_0(t) \quad (1.33)$$

and

$$\delta(t) = 0 \text{ for all } t \neq 0 \quad (1.34)$$

To better understand the delta function  $\delta(t)$ , let us represent the unit step  $u_0(t)$  as shown in Figure 1.20 (a).

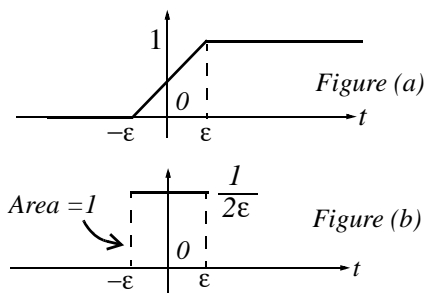


Figure 1.20. Representation of the unit step as a limit.

The function of Figure 1.20 (a) becomes the unit step as  $\epsilon \rightarrow 0$ . Figure 1.20 (b) is the derivative of Figure 1.20 (a), where we see that as  $\epsilon \rightarrow 0$ ,  $1/2\epsilon$  becomes unbounded, but the area of the rectangle remains 1. Therefore, in the limit, we can think of  $\delta(t)$  as approaching a very large spike or impulse at the origin, with unbounded amplitude, zero width, and area equal to 1.

Two useful properties of the delta function are the sampling property and the sifting property.

### 1.5 Sampling Property of the Delta Function $\delta(t)$

The *sampling property of the delta function* states that

$$f(t)\delta(t-a) = f(a)\delta(t) \quad (1.35)$$

or, when  $a = 0$ ,

$$f(t)\delta(t) = f(0)\delta(t) \quad (1.36)$$



that is, multiplication of any function  $f(t)$  by the delta function  $\delta(t)$  results in sampling the function at the time instants where the delta function is not zero. The study of discrete-time systems is based on this property.

**Proof:**

Since  $\delta(t) = 0$  for  $t < 0$  and  $t > 0$  then,

$$f(t)\delta(t) = 0 \text{ for } t < 0 \text{ and } t > 0 \quad (1.37)$$

We rewrite  $f(t)$  as

$$f(t) = f(0) + [f(t) - f(0)] \quad (1.38)$$

Integrating (1.37) over the interval  $-\infty$  to  $t$  and using (1.38), we get

$$\boxed{\int_{-\infty}^t f(\tau)\delta(\tau)d\tau = \int_{-\infty}^t f(0)\delta(\tau)d\tau + \int_{-\infty}^t [f(\tau) - f(0)]\delta(\tau)d\tau} \quad (1.39)$$

The first integral on the right side of (1.39) contains the constant term  $f(0)$ ; this can be written outside the integral, that is,

$$\int_{-\infty}^t f(0)\delta(\tau)d\tau = f(0)\int_{-\infty}^t \delta(\tau)d\tau \quad (1.40)$$

The second integral of the right side of (1.39) is always zero because

$$\delta(t) = 0 \text{ for } t < 0 \text{ and } t > 0$$

and

$$[f(\tau) - f(0)]|_{\tau=0} = f(0) - f(0) = 0$$

Therefore, (1.39) reduces to

$$\int_{-\infty}^t f(\tau)\delta(\tau)d\tau = f(0)\int_{-\infty}^t \delta(\tau)d\tau \quad (1.41)$$

Differentiating both sides of (1.41), and replacing  $\tau$  with  $t$ , we get

$$\boxed{f(t)\delta(t) = f(0)\delta(t)} \quad (1.42)$$

*Sampling Property of  $\delta(t)$*

## 1.6 Sifting Property of the Delta Function $\delta(t)$

The *sifting property of the delta function* states that

$$\boxed{\int_{-\infty}^{\infty} f(t)\delta(t-\alpha)dt = f(\alpha)} \quad (1.43)$$

that is, if we multiply any function  $f(t)$  by  $\delta(t-\alpha)$ , and integrate from  $-\infty$  to  $+\infty$ , we will obtain the value of  $f(t)$  evaluated at  $t = \alpha$ .

**Proof:**

Let us consider the integral

$$\int_a^b f(t)\delta(t-\alpha)dt \quad \text{where } a < \alpha < b \quad (1.44)$$

We will use integration by parts to evaluate this integral. We recall from the derivative of products that

$$d(xy) = xdy + ydx \quad \text{or} \quad xdy = d(xy) - ydx \quad (1.45)$$

and integrating both sides we get

$$\int xdy = xy - \int ydx \quad (1.46)$$

Now, we let  $x = f(t)$ ; then,  $dx = f'(t)$ . We also let  $dy = \delta(t-\alpha)$ ; then,  $y = u_0(t-\alpha)$ . By substitution into (1.46), we get

$$\int_a^b f(t)\delta(t-\alpha)dt = f(t)u_0(t-\alpha)\Big|_a^b - \int_a^b u_0(t-\alpha)f'(t)dt \quad (1.47)$$

We have assumed that  $a < \alpha < b$ ; therefore,  $u_0(t-\alpha) = 0$  for  $\alpha < a$ , and thus the first term of the right side of (1.47) reduces to  $f(b)$ . Also, the integral on the right side is zero for  $\alpha < a$ , and therefore, we can replace the lower limit of integration  $a$  by  $\alpha$ . We can now rewrite (1.47) as

$$\int_a^b f(t)\delta(t-\alpha)dt = f(b) - \int_{\alpha}^b f'(t)dt = f(b) - f(b) + f(\alpha)$$

and letting  $a \rightarrow -\infty$  and  $b \rightarrow \infty$  for any  $|\alpha| < \infty$ , we get

$$\boxed{\int_{-\infty}^{\infty} f(t)\delta(t-\alpha)dt = f(\alpha)} \quad (1.48)$$

*Sifting Property of  $\delta(t)$*

## 1.7 Higher Order Delta Functions

An  $n$ th-order delta function is defined as the  $n$ th derivative of  $u_0(t)$ , that is,

$$\boxed{\delta^n(t) = \frac{d^n}{dt^n}[u_0(t)]} \quad (1.49)$$

The function  $\delta'(t)$  is called *doublet*,  $\delta''(t)$  is called *triplet*, and so on. By a procedure similar to the derivation of the sampling property of the delta function, we can show that

$$\boxed{f(t)\delta'(t-a) = f(a)\delta'(t-a) - f'(a)\delta(t-a)} \quad (1.50)$$

Also, the derivation of the sifting property of the delta function can be extended to show that

$$\boxed{\int_{-\infty}^{\infty} f(t)\delta^n(t-\alpha)dt = (-1)^n \left. \frac{d^n}{dt^n}[f(t)] \right|_{t=\alpha}} \quad (1.51)$$

### Example 1.8

Evaluate the following expressions:

- a.  $3t^4\delta(t-1)$
- b.  $\int_{-\infty}^{\infty} t\delta(t-2)dt$
- c.  $t^2\delta'(t-3)$

#### Solution:

- a. The sampling property states that  $f(t)\delta(t-a) = f(a)\delta(t-a)$ . For this example,  $f(t) = 3t^4$  and  $a = 1$ . Then,

$$3t^4\delta(t-1) = \{3t^4|_{t=1}\}\delta(t-1) = 3\delta(t-1)$$

- b. The sifting property states that  $\int_{-\infty}^{\infty} f(t)\delta(t-\alpha)dt = f(\alpha)$ . For this example,  $f(t) = t$  and  $\alpha = 2$ .

Then,

$$\int_{-\infty}^{\infty} t\delta(t-2)dt = f(2) = t|_{t=2} = 2$$

- c. The given expression contains the doublet; therefore, we use the relation

$$f(t)\delta'(t-a) = f(a)\delta'(t-a) - f'(a)\delta(t-a)$$

Then, for this example,

$$\begin{aligned} t^2\delta'(t-3) &= t^2\Big|_{t=3}\delta'(t-3) - \frac{d}{dt}t^2\Big|_{t=3}\delta(t-3) \\ &= 9\delta'(t-3) - 6\delta(t-3) \end{aligned}$$

### Example 1.9

- Express the voltage waveform  $v(t)$  shown in Figure 1.21 as a sum of unit step functions for the time interval  $-1 < t < 7$  s.
- Using the result of part (a), compute the derivative of  $v(t)$  and sketch its waveform.

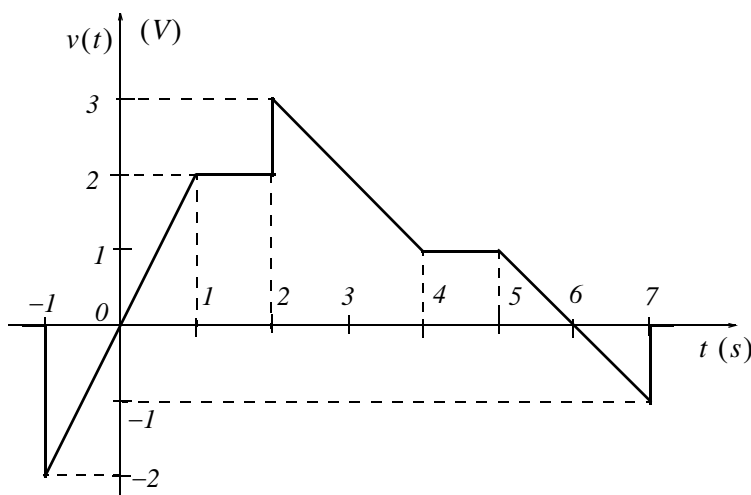


Figure 1.21. Waveform for Example 1.9

### Solution:

- We first derive the equations for the linear segments of the given waveform. These are shown in Figure 1.22.

Next, we express  $v(t)$  in terms of the unit step function  $u_0(t)$ , and we get

$$\begin{aligned} v(t) &= 2t[u_0(t+1) - u_0(t-1)] + 2[u_0(t-1) - u_0(t-2)] \\ &\quad + (-t+5)[u_0(t-2) - u_0(t-4)] + [u_0(t-4) - u_0(t-5)] \\ &\quad + (-t+6)[u_0(t-5) - u_0(t-7)] \end{aligned} \tag{1.52}$$

Multiplying and collecting like terms in (1.52), we get

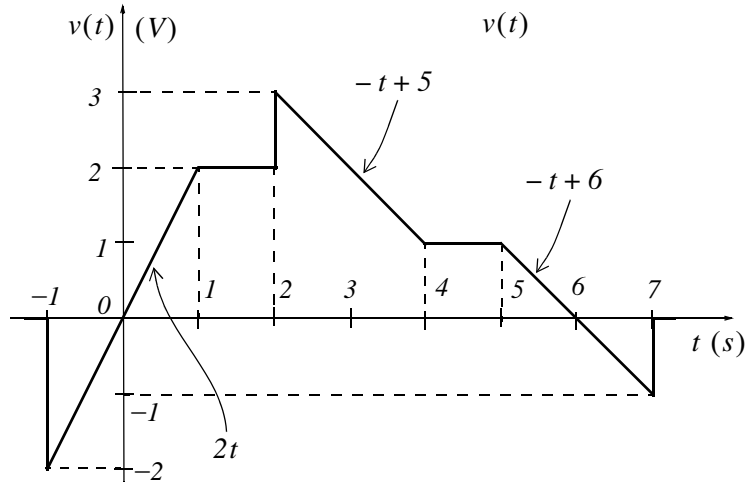


Figure 1.22. Equations for the linear segments of Figure 1.21

$$v(t) = 2tu_0(t+1) - 2tu_0(t-1) - 2u_0(t-1) - 2u_0(t-2) - tu_0(t-2) + 5u_0(t-2) + tu_0(t-4) - 5u_0(t-4) + u_0(t-4) - u_0(t-5) - tu_0(t-5) + 6u_0(t-5) + tu_0(t-7) - 6u_0(t-7)$$

or

$$v(t) = 2tu_0(t+1) + (-2t+2)u_0(t-1) + (-t+3)u_0(t-2) + (t-4)u_0(t-4) + (-t+5)u_0(t-5) + (t-6)u_0(t-7)$$

b. The derivative of  $v(t)$  is

$$\begin{aligned} \frac{dv}{dt} = & 2u_0(t+1) + 2t\delta(t+1) - 2u_0(t-1) + (-2t+2)\delta(t-1) \\ & - u_0(t-2) + (-t+3)\delta(t-2) + u_0(t-4) + (t-4)\delta(t-4) \\ & - u_0(t-5) + (-t+5)\delta(t-5) + u_0(t-7) + (t-6)\delta(t-7) \end{aligned} \quad (1.53)$$

From the given waveform, we observe that discontinuities occur only at  $t = -1$ ,  $t = 2$ , and  $t = 7$ . Therefore,  $\delta(t-1) = 0$ ,  $\delta(t-4) = 0$ , and  $\delta(t-5) = 0$ , and the terms that contain these delta functions vanish. Also, by application of the sampling property,

$$\begin{aligned} 2t\delta(t+1) &= \{2t|_{t=-1}\}\delta(t+1) = -2\delta(t+1) \\ (-t+3)\delta(t-2) &= \{(-t+3)|_{t=2}\}\delta(t-2) = \delta(t-2) \\ (t-6)\delta(t-7) &= \{(t-6)|_{t=7}\}\delta(t-7) = \delta(t-7) \end{aligned}$$

and by substitution into (1.53), we get

$$\begin{aligned} \frac{dv}{dt} = & 2u_0(t+1) - 2\delta(t+1) - 2u_0(t-1) - u_0(t-2) \\ & + \delta(t-2) + u_0(t-4) - u_0(t-5) + u_0(t-7) + \delta(t-7) \end{aligned} \quad (1.54)$$

The plot of  $dv/dt$  is shown in Figure 1.23.

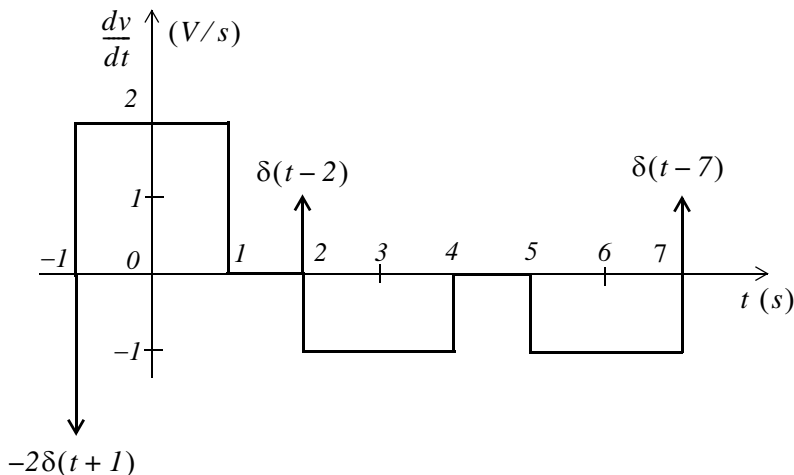


Figure 1.23. Plot of the derivative of the waveform of Figure 1.21.

We observe that a negative spike of magnitude 2 occurs at  $t = -1$ , and two positive spikes of magnitude 1 occur at  $t = 2$ , and  $t = 7$ . These spikes occur because of the discontinuities at these points.

MATLAB<sup>\*</sup> has built-in functions for the unit step, and the delta functions. These are denoted by the names of the mathematicians who used them in their work. The unit step function  $u_0(t)$  is referred to as **Heaviside(t)**, and the delta function  $\delta(t)$  is referred to as **Dirac(t)**. Their use is illustrated with the examples below.

```
syms k a t;           % Define symbolic variables
u=k*sym('Heaviside(t-a)') % Create unit step function at t = a

u =
k*Heaviside(t-a)

d=diff(u)             % Compute the derivative of the unit step function

d =
k*Dirac(t-a)
```

\* An introduction to MATLAB<sup>®</sup> is given in Appendix A.



## 1.9 Exercises

1. Evaluate the following functions:

a.  $\sin t \delta\left(t - \frac{\pi}{6}\right)$

b.  $\cos 2t \delta\left(t - \frac{\pi}{4}\right)$

c.  $\cos^2 t \delta\left(t - \frac{\pi}{2}\right)$

d.  $\tan 2t \delta\left(t - \frac{\pi}{8}\right)$

e.  $\int_{-\infty}^{\infty} t^2 e^{-t} \delta(t-2) dt$

f.  $\sin^2 t \delta'\left(t - \frac{\pi}{2}\right)$

2.

a. Express the voltage waveform  $v(t)$  shown in Figure 1.24, as a sum of unit step functions for the time interval  $0 < t < 7$  s.

b. Using the result of part (a), compute the derivative of  $v(t)$ , and sketch its waveform.

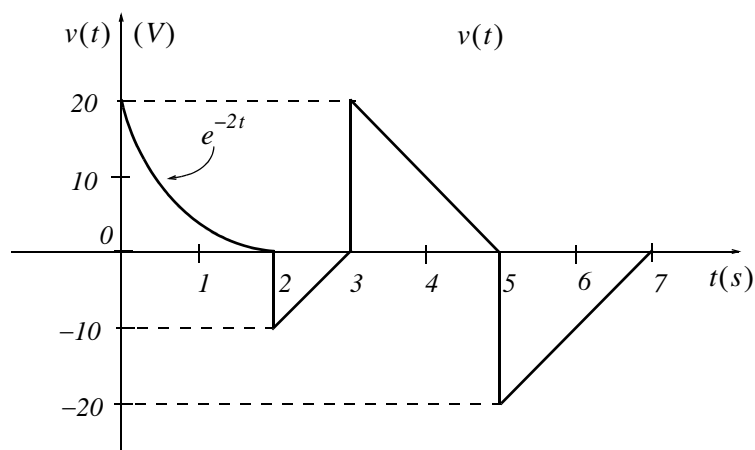


Figure 1.24. Waveform for Exercise 2



## **1.10 Solutions to Exercises**

Dear Reader:

The remaining pages on this chapter contain the solutions to the exercises.

You must, for your benefit, make an honest effort to solve the problems without first looking at the solutions that follow. It is recommended that first you go through and solve those you feel that you know. For the exercises that you are uncertain, review this chapter and try again. If your results do not agree with those provided, look over your procedures for inconsistencies and computational errors. Refer to the solutions as a last resort and rework those problems at a later date.

You should follow this practice with the exercises on all chapters of this book.

---

## Chapter 1 Elementary Signals

---

1. We apply the sampling property of the  $\delta(t)$  function for all expressions except (e) where we apply the sifting property. For part (f) we apply the sampling property of the doublet.

We recall that the sampling property states that  $f(t)\delta(t-a) = f(a)\delta(t-a)$ . Thus,

$$\text{a. } \sin t \delta\left(t - \frac{\pi}{6}\right) = \sin t \Big|_{t=\pi/6} \delta\left(t - \frac{\pi}{6}\right) = \sin \frac{\pi}{6} \delta\left(t - \frac{\pi}{6}\right) = 0.5 \delta\left(t - \frac{\pi}{6}\right)$$

$$\text{b. } \cos 2t \delta\left(t - \frac{\pi}{4}\right) = \cos 2t \Big|_{t=\pi/4} \delta\left(t - \frac{\pi}{4}\right) = \cos \frac{\pi}{2} \delta\left(t - \frac{\pi}{4}\right) = 0$$

$$\text{c. } \cos^2 t \delta\left(t - \frac{\pi}{2}\right) = \frac{1}{2}(1 + \cos 2t) \Big|_{t=\pi/2} \delta\left(t - \frac{\pi}{2}\right) = \frac{1}{2}(1 + \cos \pi) \delta\left(t - \frac{\pi}{2}\right) = \frac{1}{2}(1 - 1) \delta\left(t - \frac{\pi}{2}\right) = 0$$

$$\text{d. } \tan 2t \delta\left(t - \frac{\pi}{8}\right) = \tan 2t \Big|_{t=\pi/8} \delta\left(t - \frac{\pi}{8}\right) = \tan \frac{\pi}{4} \delta\left(t - \frac{\pi}{8}\right) = \delta\left(t - \frac{\pi}{8}\right)$$

We recall that the sampling property states that  $\int_{-\infty}^{\infty} f(t)\delta(t-\alpha)dt = f(\alpha)$ . Thus,

$$\text{e. } \int_{-\infty}^{\infty} t^2 e^{-t} \delta(t-2)dt = t^2 e^{-t} \Big|_{t=2} = 4e^{-2} = 0.54$$

We recall that the sampling property for the doublet states that

$$f(t)\delta'(t-a) = f(a)\delta'(t-a) - f'(a)\delta(t-a)$$

Thus,

$$\begin{aligned} \text{f. } \sin^2 t \delta'\left(t - \frac{\pi}{2}\right) &= \sin^2 t \Big|_{t=\pi/2} \delta'\left(t - \frac{\pi}{2}\right) - \frac{d}{dt} \sin^2 t \Big|_{t=\pi/2} \delta\left(t - \frac{\pi}{2}\right) \\ &= \frac{1}{2}(1 - \cos 2t) \Big|_{t=\pi/2} \delta'\left(t - \frac{\pi}{2}\right) - \sin 2t \Big|_{t=\pi/2} \delta\left(t - \frac{\pi}{2}\right) \\ &= \frac{1}{2}(1 + 1) \delta'\left(t - \frac{\pi}{2}\right) - \sin \pi \delta\left(t - \frac{\pi}{2}\right) = \delta'\left(t - \frac{\pi}{2}\right) \end{aligned}$$

2.

$$\begin{aligned} \text{a. } v(t) &= e^{-2t}[u_0(t) - u_0(t-2)] + (10t - 30)[u_0(t-2) - u_0(t-3)] \\ &\quad + (-10t + 50)[u_0(t-3) - u_0(t-5)] + (10t - 70)[u_0(t-5) - u_0(t-7)] \end{aligned}$$

or

$$\begin{aligned}
 v(t) &= e^{-2t}u_0(t) - e^{-2t}u_0(t-2) + 10tu_0(t-2) - 30u_0(t-2) - 10tu_0(t-3) + 30u_0(t-3) \\
 &\quad - 10tu_0(t-3) + 50u_0(t-3) + 10tu_0(t-5) - 50u_0(t-5) + 10tu_0(t-5) \\
 &\quad - 70u_0(t-5) - 10tu_0(t-7) + 70u_0(t-7) \\
 &= e^{-2t}u_0(t) + (-e^{-2t} + 10t - 30)u_0(t-2) + (-20t + 80)u_0(t-3) + (20t - 120)u_0(t-5) \\
 &\quad + (-10t + 70)u_0(t-7)
 \end{aligned}$$

b.

$$\begin{aligned}
 \frac{dv}{dt} &= -2e^{-2t}u_0(t) + e^{-2t}\delta(t) + (2e^{-2t} + 10)u_0(t-2) + (-e^{-2t} + 10t - 30)\delta(t-2) \\
 &\quad - 20u_0(t-3) + (-20t + 80)\delta(t-3) + 20u_0(t-5) + (20t - 120)\delta(t-5) \\
 &\quad - 10u_0(t-7) + (-10t + 70)\delta(t-7) \quad (1)
 \end{aligned}$$

Referring to the given waveform we observe that discontinuities occur only at  $t = 2$ ,  $t = 3$ , and  $t = 5$ . Therefore,  $\delta(t) = 0$  and  $\delta(t-7) = 0$ . Also, by the sampling property of the delta function

$$(-e^{-2t} + 10t - 30)\delta(t-2) = (-e^{-2t} + 10t - 30)|_{t=2}\delta(t-2) \approx -10\delta(t-2)$$

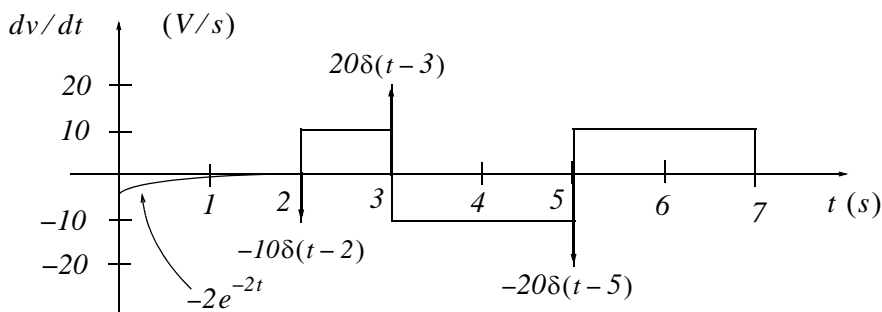
$$(-20t + 80)\delta(t-3) = (-20t + 80)|_{t=3}\delta(t-3) = 20\delta(t-3)$$

$$(20t - 120)\delta(t-5) = (20t - 120)|_{t=5}\delta(t-5) = -20\delta(t-5)$$

and with these simplifications (1) above reduces to

$$\begin{aligned}
 dv/dt &= -2e^{-2t}u_0(t) + 2e^{-2t}u_0(t-2) + 10u_0(t-2) - 10\delta(t-2) \\
 &\quad - 20u_0(t-3) + 20\delta(t-3) + 20u_0(t-5) - 20\delta(t-5) - 10u_0(t-7) \\
 &= -2e^{-2t}[u_0(t) - u_0(t-2)] - 10\delta(t-2) + 10[u_0(t-2) - u_0(t-3)] + 20\delta(t-3) \\
 &\quad - 10[u_0(t-3) - u_0(t-5)] - 20\delta(t-5) + 10[u_0(t-5) - u_0(t-7)]
 \end{aligned}$$

The waveform for  $dv/dt$  is shown below.



### NOTES

This chapter begins with an introduction to the Laplace transformation, definitions, and properties of the Laplace transformation. The initial value and final value theorems are also discussed and proved. It concludes with the derivation of the Laplace transform of common functions of time, and the Laplace transforms of common waveforms.

### 2.1 Definition of the Laplace Transformation

The *two-sided* or *bilateral* Laplace Transform pair is defined as

$$\mathcal{L}\{f(t)\} = F(s) = \int_{-\infty}^{\infty} f(t)e^{-st} dt \quad (2.1)$$

$$\mathcal{L}^{-1}\{F(s)\} = f(t) = \frac{1}{2\pi j} \int_{\sigma-j\omega}^{\sigma+j\omega} F(s)e^{st} ds \quad (2.2)$$

where  $\mathcal{L}\{f(t)\}$  denotes the Laplace transform of the time function  $f(t)$ ,  $\mathcal{L}^{-1}\{F(s)\}$  denotes the Inverse Laplace transform, and  $s$  is a complex variable whose real part is  $\sigma$ , and imaginary part  $\omega$ , that is,  $s = \sigma + j\omega$ .

In most problems, we are concerned with values of time  $t$  greater than some reference time, say  $t = t_0 = 0$ , and since the initial conditions are generally known, the two-sided Laplace transform pair of (2.1) and (2.2) simplifies to the *unilateral* or *one-sided Laplace transform* defined as

$$\mathcal{L}\{f(t)\} = F(s) = \int_{t_0}^{\infty} f(t)e^{-st} dt = \int_0^{\infty} f(t)e^{-st} dt \quad (2.3)$$

$$\mathcal{L}^{-1}\{F(s)\} = f(t) = \frac{1}{2\pi j} \int_{\sigma-j\omega}^{\sigma+j\omega} F(s)e^{st} ds \quad (2.4)$$

The Laplace Transform of (2.3) has meaning only if the integral converges (reaches a limit), that is, if

$$\left| \int_0^{\infty} f(t)e^{-st} dt \right| < \infty \quad (2.5)$$

To determine the conditions that will ensure us that the integral of (2.3) converges, we rewrite (2.5)

as

$$\left| \int_0^{\infty} f(t) e^{-\sigma t} e^{-j\omega t} dt \right| < \infty \quad (2.6)$$

The term  $e^{-j\omega t}$  in the integral of (2.6) has magnitude of unity, i.e.,  $|e^{-j\omega t}| = 1$ , and thus the condition for convergence becomes

$$\left| \int_0^{\infty} f(t) e^{-\sigma t} dt \right| < \infty \quad (2.7)$$

Fortunately, in most engineering applications the functions  $f(t)$  are of *exponential order*\*. Then, we can express (2.7) as,

$$\left| \int_0^{\infty} f(t) e^{-\sigma t} dt \right| < \left| \int_0^{\infty} k e^{\sigma_0 t} e^{-\sigma t} dt \right| \quad (2.8)$$

and we see that the integral on the right side of the inequality sign in (2.8), converges if  $\sigma > \sigma_0$ . Therefore, we conclude that if  $f(t)$  is of exponential order,  $\mathcal{L}\{f(t)\}$  exists if

$$\text{Re}\{s\} = \sigma > \sigma_0 \quad (2.9)$$

where  $\text{Re}\{s\}$  denotes the real part of the complex variable  $s$ .

Evaluation of the integral of (2.4) involves contour integration in the complex plane, and thus, it will not be attempted in this chapter. We will see, in the next chapter, that many Laplace transforms can be inverted with the use of a few standard pairs, and therefore, there is no need to use (2.4) to obtain the Inverse Laplace transform.

In our subsequent discussion, we will denote transformation from the time domain to the complex frequency domain, and vice versa, as

$$f(t) \Leftrightarrow F(s) \quad (2.10)$$

## 2.2 Properties of the Laplace Transform

### 1. Linearity Property

The *linearity property* states that if

$$f_1(t), f_2(t), \dots, f_n(t)$$

have Laplace transforms

---

\* A function  $f(t)$  is said to be of exponential order if  $|f(t)| < k e^{\sigma_0 t}$  for all  $t \geq 0$ .

$$F_1(s), F_2(s), \dots, F_n(s)$$

respectively, and

$$c_1, c_2, \dots, c_n$$

are arbitrary constants, then,

$$\boxed{c_1 f_1(t) + c_2 f_2(t) + \dots + c_n f_n(t) \Leftrightarrow c_1 F_1(s) + c_2 F_2(s) + \dots + c_n F_n(s)} \quad (2.11)$$

**Proof:**

$$\begin{aligned} \mathcal{L} \{c_1 f_1(t) + c_2 f_2(t) + \dots + c_n f_n(t)\} &= \int_{t_0}^{\infty} [c_1 f_1(t) + c_2 f_2(t) + \dots + c_n f_n(t)] dt \\ &= c_1 \int_{t_0}^{\infty} f_1(t) e^{-st} dt + c_2 \int_{t_0}^{\infty} f_2(t) e^{-st} dt + \dots + c_n \int_{t_0}^{\infty} f_n(t) e^{-st} dt \\ &= c_1 F_1(s) + c_2 F_2(s) + \dots + c_n F_n(s) \end{aligned}$$

**Note 1:**

It is desirable to multiply  $f(t)$  by  $u_0(t)$  to eliminate any unwanted non-zero values of  $f(t)$  for  $t < 0$ .

## 2. Time Shifting Property

The *time shifting property* states that a right shift in the time domain by  $a$  units, corresponds to multiplication by  $e^{-as}$  in the complex frequency domain. Thus,

$$\boxed{f(t-a)u_0(t-a) \Leftrightarrow e^{-as} F(s)} \quad (2.12)$$

**Proof:**

$$\mathcal{L} \{f(t-a)u_0(t-a)\} = \int_0^a 0 e^{-st} dt + \int_a^{\infty} f(t-a) e^{-st} dt \quad (2.13)$$

Now, we let  $t-a = \tau$ ; then,  $t = \tau+a$  and  $dt = d\tau$ . With these substitutions, the second integral on the right side of (2.13) becomes

$$\int_0^{\infty} f(\tau) e^{-s(\tau+a)} d\tau = e^{-as} \int_0^{\infty} f(\tau) e^{-s\tau} d\tau = e^{-as} F(s)$$

## 3. Frequency Shifting Property

The *frequency shifting property* states that if we multiply some time domain function  $f(t)$  by an exponential function  $e^{-at}$  where  $a$  is an arbitrary positive constant, this multiplication will produce a shift of the  $s$  variable in the complex frequency domain by  $a$  units. Thus,

$$\boxed{e^{-at}f(t) \Leftrightarrow F(s+a)} \quad (2.14)$$

**Proof:**

$$\mathcal{L}\{e^{-at}f(t)\} = \int_0^{\infty} e^{-at}f(t)e^{-st} dt = \int_0^{\infty} f(t)e^{-(s+a)t} dt = F(s+a)$$

**Note 2:**

A change of scale is represented by multiplication of the time variable  $t$  by a positive scaling factor  $a$ . Thus, the function  $f(t)$  after scaling the time axis, becomes  $f(at)$ .

### 4. Scaling Property

Let  $a$  be an arbitrary positive constant; then, the *scaling property* states that

$$\boxed{f(at) \Leftrightarrow \frac{1}{a}F\left(\frac{s}{a}\right)} \quad (2.15)$$

**Proof:**

$$\mathcal{L}\{f(at)\} = \int_0^{\infty} f(at)e^{-st} dt$$

and letting  $t = \tau/a$ , we get

$$\mathcal{L}\{f(at)\} = \int_0^{\infty} f(\tau)e^{-s(\tau/a)} d\left(\frac{\tau}{a}\right) = \frac{1}{a} \int_0^{\infty} f(\tau)e^{-(s/a)\tau} d(\tau) = \frac{1}{a}F\left(\frac{s}{a}\right)$$

**Note 3:**

Generally, the initial value of  $f(t)$  is taken at  $t = 0^-$  to include any discontinuity that may be present at  $t = 0$ . If it is known that no such discontinuity exists at  $t = 0^-$ , we simply interpret  $f(0^-)$  as  $f(0)$ .

### 5. Differentiation in Time Domain

The *differentiation in time domain* property states that differentiation in the time domain corresponds to multiplication by  $s$  in the complex frequency domain, minus the initial value of  $f(t)$  at  $t = 0^-$ . Thus,

$$\boxed{f'(t) = \frac{d}{dt}f(t) \Leftrightarrow sF(s) - f(0^-)} \quad (2.16)$$

**Proof:**

$$\mathcal{L}\{f'(t)\} = \int_0^{\infty} f'(t)e^{-st} dt$$



Using integration by parts where

$$\int v du = uv - \int u dv \tag{2.17}$$

we let  $du = f'(t)$  and  $v = e^{-st}$ . Then,  $u = f(t)$ ,  $dv = -se^{-st}$ , and thus

$$\begin{aligned} \mathcal{L}\{f'(t)\} &= f(t)e^{-st}\Big|_{0^-}^{\infty} + s\int_{0^-}^{\infty} f(t)e^{-st} dt = \lim_{a \rightarrow \infty} \left[ f(t)e^{-st}\Big|_{0^-}^a \right] + sF(s) \\ &= \lim_{a \rightarrow \infty} [e^{-sa}f(a) - f(0^-)] + sF(s) = 0 - f(0^-) + sF(s) \end{aligned}$$

The time differentiation property can be extended to show that

$$\boxed{\frac{d^2}{dt^2} f(t) \Leftrightarrow s^2 F(s) - sf(0^-) - f'(0^-)} \tag{2.18}$$

$$\boxed{\frac{d^3}{dt^3} f(t) \Leftrightarrow s^3 F(s) - s^2 f(0^-) - sf'(0^-) - f''(0^-)} \tag{2.19}$$

and in general

$$\boxed{\frac{d^n}{dt^n} f(t) \Leftrightarrow s^n F(s) - s^{n-1} f(0^-) - s^{n-2} f'(0^-) - \dots - f^{(n-1)}(0^-)} \tag{2.20}$$

To prove (2.18), we let

$$g(t) = f'(t) = \frac{d}{dt} f(t)$$

and as we found above,

$$\mathcal{L}\{g'(t)\} = s\mathcal{L}\{g(t)\} - g(0^-)$$

Then,

$$\begin{aligned} \mathcal{L}\{f''(t)\} &= s\mathcal{L}\{f'(t)\} - f'(0^-) = s[s\mathcal{L}\{f(t)\} - f(0^-)] - f'(0^-) \\ &= s^2 F(s) - sf(0^-) - f'(0^-) \end{aligned}$$

Relations (2.19) and (2.20) can be proved by similar procedures.

We must remember that the terms  $f(0^-)$ ,  $f'(0^-)$ ,  $f''(0^-)$ , and so on, represent the initial conditions. Therefore, when all initial conditions are zero, and we differentiate a time function  $f(t)$   $n$  times, this corresponds to  $F(s)$  multiplied by  $s$  to the  $n$ th power.

---

## Chapter 2 The Laplace Transformation

---

### 6. Differentiation in Complex Frequency Domain

This property states that *differentiation in complex frequency domain* and multiplication by minus one, corresponds to multiplication of  $f(t)$  by  $t$  in the time domain. In other words,

$$\boxed{tf(t) \Leftrightarrow -\frac{d}{ds}F(s)} \quad (2.21)$$

**Proof:**

$$\mathcal{L}\{f(t)\} = F(s) = \int_0^{\infty} f(t)e^{-st} dt$$

Differentiating with respect to  $s$ , and applying *Leibnitz's rule*\* for differentiation under the integral, we get

$$\begin{aligned} \frac{d}{ds}F(s) &= \frac{d}{ds} \int_0^{\infty} f(t)e^{-st} dt = \int_0^{\infty} \frac{\partial}{\partial s} e^{-st} f(t) dt = \int_0^{\infty} -te^{-st} f(t) dt \\ &= -\int_0^{\infty} [tf(t)]e^{-st} dt = -\mathcal{L}[tf(t)] \end{aligned}$$

In general,

$$\boxed{t^n f(t) \Leftrightarrow (-1)^n \frac{d^n}{ds^n} F(s)} \quad (2.22)$$

The proof for  $n \geq 2$  follows by taking the second and higher-order derivatives of  $F(s)$  with respect to  $s$ .

### 7. Integration in Time Domain

This property states that *integration in time domain* corresponds to  $F(s)$  divided by  $s$  plus the initial value of  $f(t)$  at  $t = 0^-$ , also divided by  $s$ . That is,

$$\boxed{\int_{-\infty}^t f(\tau) d\tau \Leftrightarrow \frac{F(s)}{s} + \frac{f(0^-)}{s}} \quad (2.23)$$

---

\* This rule states that if a function of a parameter  $\alpha$  is defined by the equation  $F(\alpha) = \int_a^b f(x, \alpha) dx$  where  $f$  is some known function of integration  $x$  and the parameter  $\alpha$ ,  $a$  and  $b$  are constants independent of  $x$  and  $\alpha$ , and the partial derivative  $\partial f / \partial \alpha$  exists and it is continuous, then  $\frac{dF}{d\alpha} = \int_a^b \frac{\partial f(x, \alpha)}{\partial \alpha} dx$ .

**Proof:**

We express the integral of (2.23) as two integrals, that is,

$$\int_{-\infty}^t f(\tau) d\tau = \int_{-\infty}^0 f(\tau) d\tau + \int_0^t f(\tau) d\tau \quad (2.24)$$

The first integral on the right side of (2.24), represents a constant value since neither the upper, nor the lower limits of integration are functions of time, and this constant is an initial condition denoted as  $f(0^-)$ . We will find the Laplace transform of this constant, the transform of the second integral on the right side of (2.24), and will prove (2.23) by the linearity property. Thus,

$$\begin{aligned} \mathcal{L}\{f(0^-)\} &= \int_0^{\infty} f(0^-) e^{-st} dt = f(0^-) \int_0^{\infty} e^{-st} dt = f(0^-) \left. \frac{e^{-st}}{-s} \right|_0^{\infty} \\ &= f(0^-) \times 0 - \left( \frac{-f(0^-)}{s} \right) = \frac{f(0^-)}{s} \end{aligned} \quad (2.25)$$

This is the value of the first integral in (2.24). Next, we will show that

$$\int_0^t f(\tau) d\tau \Leftrightarrow \frac{F(s)}{s}$$

We let

$$g(t) = \int_0^t f(\tau) d\tau$$

then,

$$g'(t) = f(t)$$

and

$$g(0) = \int_0^0 f(\tau) d\tau = 0$$

Now,

$$\mathcal{L}\{g'(t)\} = G(s) = s\mathcal{L}\{g(t)\} - g(0^-) = G(s) - 0$$

$$s\mathcal{L}\{g(t)\} = G(s)$$

$$\mathcal{L}\{g(t)\} = \frac{G(s)}{s}$$

$$\mathcal{L}\left\{\int_0^t f(\tau) d\tau\right\} = \frac{F(s)}{s} \quad (2.26)$$

and the proof of (2.23) follows from (2.25) and (2.26).

---

## Chapter 2 The Laplace Transformation

---

### 8. Integration in Complex Frequency Domain

This property states that *integration in complex frequency domain* with respect to  $s$  corresponds to division of a time function  $f(t)$  by the variable  $t$ , provided that the limit  $\lim_{t \rightarrow 0} \frac{f(t)}{t}$  exists. Thus,

$$\boxed{\frac{f(t)}{t} \Leftrightarrow \int_s^\infty F(s) ds} \quad (2.27)$$

**Proof:**

$$F(s) = \int_0^\infty f(t)e^{-st} dt$$

Integrating both sides from  $s$  to  $\infty$ , we get

$$\int_s^\infty F(s) ds = \int_s^\infty \left[ \int_0^\infty f(t)e^{-st} dt \right] ds$$

Next, we interchange the order of integration, i.e.,

$$\int_s^\infty F(s) ds = \int_0^\infty \left[ \int_s^\infty e^{-st} ds \right] f(t) dt$$

and performing the inner integration on the right side integral with respect to  $s$ , we get

$$\int_s^\infty F(s) ds = \int_0^\infty \left[ -\frac{1}{t} e^{-st} \Big|_s^\infty \right] f(t) dt = \int_0^\infty \frac{f(t)}{t} e^{-st} dt = \mathcal{L} \left\{ \frac{f(t)}{t} \right\}$$

### 9. Time Periodicity

The *time periodicity* property states that a periodic function of time with period  $T$  corresponds to the integral  $\int_0^T f(t)e^{-st} dt$  divided by  $(1 - e^{-sT})$  in the complex frequency domain. Thus, if we let  $f(t)$  be a periodic function with period  $T$ , that is,  $f(t) = f(t + nT)$ , for  $n = 1, 2, 3, \dots$  we get the transform pair

$$\boxed{f(t + nT) \Leftrightarrow \frac{\int_0^T f(t)e^{-st} dt}{1 - e^{-sT}}} \quad (2.28)$$

**Proof:**

The Laplace transform of a periodic function can be expressed as

$$\mathcal{L}\{f(t)\} = \int_0^{\infty} f(t)e^{-st} dt = \int_0^T f(t)e^{-st} dt + \int_T^{2T} f(t)e^{-st} dt + \int_{2T}^{3T} f(t)e^{-st} dt + \dots$$

In the first integral of the right side, we let  $t = \tau$ , in the second  $t = \tau + T$ , in the third  $t = \tau + 2T$ , and so on. The areas under each period of  $f(t)$  are equal, and thus the upper and lower limits of integration are the same for each integral. Then,

$$\mathcal{L}\{f(t)\} = \int_0^T f(\tau)e^{-s\tau} d\tau + \int_0^T f(\tau + T)e^{-s(\tau+T)} d\tau + \int_0^T f(\tau + 2T)e^{-s(\tau+2T)} d\tau + \dots \quad (2.29)$$

Since the function is periodic, i.e.,  $f(\tau) = f(\tau + T) = f(\tau + 2T) = \dots = f(\tau + nT)$ , we can write (2.29) as

$$\mathcal{L}\{f(\tau)\} = (1 + e^{-sT} + e^{-2sT} + \dots) \int_0^T f(\tau)e^{-s\tau} d\tau \quad (2.30)$$

By application of the binomial theorem, that is,

$$1 + a + a^2 + a^3 + \dots = \frac{1}{1-a} \quad (2.31)$$

we find that expression (2.30) reduces to

$$\mathcal{L}\{f(\tau)\} = \frac{\int_0^T f(\tau)e^{-s\tau} d\tau}{1 - e^{-sT}}$$

**10. Initial Value Theorem**

The *initial value theorem* states that the initial value  $f(0^-)$  of the time function  $f(t)$  can be found from its Laplace transform multiplied by  $s$  and letting  $s \rightarrow \infty$ . That is,

$$\boxed{\lim_{t \rightarrow 0} f(t) = \lim_{s \rightarrow \infty} sF(s) = f(0^-)} \quad (2.32)$$

**Proof:**

From the time domain differentiation property,

$$\frac{d}{dt} f(t) \Leftrightarrow sF(s) - f(0^-)$$

or

$$\mathcal{L} \left\{ \frac{d}{dt} f(t) \right\} = sF(s) - f(0^-) = \int_0^\infty \frac{d}{dt} f(t) e^{-st} dt$$

Taking the limit of both sides by letting  $s \rightarrow \infty$ , we get

$$\lim_{s \rightarrow \infty} [sF(s) - f(0^-)] = \lim_{s \rightarrow \infty} \left[ \lim_{\substack{T \rightarrow \infty \\ \varepsilon \rightarrow 0}} \int_\varepsilon^T \frac{d}{dt} f(t) e^{-st} dt \right]$$

Interchanging the limiting process, we get

$$\lim_{s \rightarrow \infty} [sF(s) - f(0^-)] = \lim_{\substack{T \rightarrow \infty \\ \varepsilon \rightarrow 0}} \int_\varepsilon^T \frac{d}{dt} f(t) \left[ \lim_{s \rightarrow \infty} e^{-st} \right] dt$$

and since

$$\lim_{s \rightarrow \infty} e^{-st} = 0$$

the above expression reduces to

$$\lim_{s \rightarrow \infty} [sF(s) - f(0^-)] = 0$$

or

$$\lim_{s \rightarrow \infty} sF(s) = f(0^-)$$

### 11. Final Value Theorem

The *final value theorem* states that the final value  $f(\infty)$  of the time function  $f(t)$  can be found from its Laplace transform multiplied by  $s$ , then, letting  $s \rightarrow 0$ . That is,

$$\boxed{\lim_{t \rightarrow \infty} f(t) = \lim_{s \rightarrow 0} sF(s) = f(\infty)} \quad (2.33)$$

**Proof:**

From the time domain differentiation property,

$$\frac{d}{dt} f(t) \Leftrightarrow sF(s) - f(0^-)$$

or

$$\mathcal{L} \left\{ \frac{d}{dt} f(t) \right\} = sF(s) - f(0^-) = \int_0^\infty \frac{d}{dt} f(t) e^{-st} dt$$

Taking the limit of both sides by letting  $s \rightarrow 0$ , we get

$$\lim_{s \rightarrow 0} [sF(s) - f(0^-)] = \lim_{s \rightarrow 0} \left[ \lim_{\substack{T \rightarrow \infty \\ \varepsilon \rightarrow 0}} \int_{\varepsilon}^T \frac{d}{dt} f(t) e^{-st} dt \right]$$

and by interchanging the limiting process, we get

$$\lim_{s \rightarrow 0} [sF(s) - f(0^-)] = \lim_{\substack{T \rightarrow \infty \\ \varepsilon \rightarrow 0}} \int_{\varepsilon}^T \frac{d}{dt} f(t) \left[ \lim_{s \rightarrow 0} e^{-st} \right] dt$$

Also, since

$$\lim_{s \rightarrow 0} e^{-st} = 1$$

the above expression reduces to

$$\begin{aligned} \lim_{s \rightarrow 0} [sF(s) - f(0^-)] &= \lim_{\substack{T \rightarrow \infty \\ \varepsilon \rightarrow 0}} \int_{\varepsilon}^T \frac{d}{dt} f(t) dt = \lim_{\substack{T \rightarrow \infty \\ \varepsilon \rightarrow 0}} \int_{\varepsilon}^T f(t) dt \\ &= \lim_{\substack{T \rightarrow \infty \\ \varepsilon \rightarrow 0}} [f(T) - f(\varepsilon)] = f(\infty) - f(0^-) \end{aligned}$$

and therefore,

$$\lim_{s \rightarrow 0} sF(s) = f(\infty)$$

## 12. Convolution in the Time Domain

*Convolution\** in the time domain corresponds to multiplication in the complex frequency domain, that is,

$$f_1(t) * f_2(t) \Leftrightarrow F_1(s)F_2(s) \tag{2.34}$$

**Proof:**

$$\begin{aligned} \mathcal{L} \{f_1(t) * f_2(t)\} &= \mathcal{L} \left[ \int_{-\infty}^{\infty} f_1(\tau) f_2(t - \tau) d\tau \right] = \int_0^{\infty} \left[ \int_0^{\infty} f_1(\tau) f_2(t - \tau) d\tau \right] e^{-st} dt \\ &= \int_0^{\infty} f_1(\tau) \left[ \int_0^{\infty} f_2(t - \tau) e^{-st} dt \right] d\tau \end{aligned} \tag{2.35}$$

We let  $t - \tau = \lambda$ ; then,  $t = \lambda + \tau$ , and  $dt = d\lambda$ . By substitution into (2.35),

---

\* *Convolution is the process of overlapping two signals. The convolution of two time functions  $f_1(t)$  and  $f_2(t)$  is denoted as  $f_1(t) * f_2(t)$ , and by definition,  $f_1(t) * f_2(t) = \int_{-\infty}^{\infty} f_1(\tau) f_2(t - \tau) d\tau$  where  $\tau$  is a dummy variable. We will discuss it in detail in Chapter 6.*

---

## Chapter 2 The Laplace Transformation

---

$$\begin{aligned}\mathcal{L}\{f_1(t)*f_2(t)\} &= \int_0^\infty f_1(\tau) \left[ \int_0^\infty f_2(\lambda) e^{-s(\lambda+\tau)} d\lambda \right] d\tau = \int_0^\infty f_1(\tau) e^{-s\tau} d\tau \int_0^\infty f_2(\lambda) e^{-s\lambda} d\lambda \\ &= F_1(s)F_2(s)\end{aligned}$$

### 13. Convolution in the Complex Frequency Domain

Convolution in the complex frequency domain divided by  $1/2\pi j$ , corresponds to multiplication in the time domain. That is,

$$f_1(t)f_2(t) \Leftrightarrow \frac{1}{2\pi j} F_1(s)*F_2(s) \quad (2.36)$$

**Proof:**

$$\mathcal{L}\{f_1(t)f_2(t)\} = \int_0^\infty f_1(t)f_2(t)e^{-st} dt \quad (2.37)$$

and recalling that the Inverse Laplace transform from (2.2) is

$$f_1(t) = \frac{1}{2\pi j} \int_{\sigma-j\omega}^{\sigma+j\omega} F_1(\mu) e^{\mu t} d\mu$$

by substitution into (2.37), we get

$$\begin{aligned}\mathcal{L}\{f_1(t)f_2(t)\} &= \int_0^\infty \left[ \frac{1}{2\pi j} \int_{\sigma-j\omega}^{\sigma+j\omega} F_1(\mu) e^{\mu t} d\mu \right] f_2(t) e^{-st} dt \\ &= \frac{1}{2\pi j} \int_{\sigma-j\omega}^{\sigma+j\omega} F_1(\mu) \left[ \int_0^\infty f_2(t) e^{-(s-\mu)t} dt \right] d\mu\end{aligned}$$

We observe that the bracketed integral is  $F_2(s-\mu)$ ; therefore,

$$L\{f_1(t)f_2(t)\} = \frac{1}{2\pi j} \int_{\sigma-j\omega}^{\sigma+j\omega} F_1(\mu) F_2(s-\mu) d\mu = \frac{1}{2\pi j} F_1(s)*F_2(s)$$

For easy reference, we have summarized the Laplace transform pairs and theorems in Table 2.1.

### 2.3 The Laplace Transform of Common Functions of Time

In this section, we will present several examples for finding the Laplace transform of common functions of time.

#### Example 2.1

Find  $\mathcal{L}\{u_0(t)\}$



# The Laplace Transform of Common Functions of Time

TABLE 2.1 Summary of Laplace Transform Properties and Theorems

	<b>Property/Theorem</b>	<b>Time Domain</b>	<b>Complex Frequency Domain</b>
1	Linearity	$c_1 f_1(t) + c_2 f_2(t)$ $+ \dots + c_n f_n(t)$	$c_1 F_1(s) + c_2 F_2(s)$ $+ \dots + c_n F_n(s)$
2	Time Shifting	$f(t-a)u_0(t-a)$	$e^{-as} F(s)$
3	Frequency Shifting	$e^{-as} f(t)$	$F(s+a)$
4	Time Scaling	$f(at)$	$\frac{1}{a} F\left(\frac{s}{a}\right)$
5	Time Differentiation See also (2.18) through (2.20)	$\frac{d}{dt} f(t)$	$sF(s) - f(0^-)$
6	Frequency Differentiation See also (2.22)	$tf(t)$	$-\frac{d}{ds} F(s)$
7	Time Integration	$\int_{-\infty}^t f(\tau) d\tau$	$\frac{F(s)}{s} + \frac{f(0^-)}{s}$
8	Frequency Integration	$\frac{f(t)}{t}$	$\int_s^{\infty} F(s) ds$
9	Time Periodicity	$f(t+nT)$	$\frac{\int_0^T f(t)e^{-st} dt}{1 - e^{-sT}}$
10	Initial Value Theorem	$\lim_{t \rightarrow 0} f(t)$	$\lim_{s \rightarrow \infty} sF(s) = f(0^-)$
11	Final Value Theorem	$\lim_{t \rightarrow \infty} f(t)$	$\lim_{s \rightarrow 0} sF(s) = f(\infty)$
12	Time Convolution	$f_1(t)*f_2(t)$	$F_1(s)F_2(s)$
13	Frequency Convolution	$f_1(t)f_2(t)$	$\frac{1}{2\pi j} F_1(s)*F_2(s)$

---

## Chapter 2 The Laplace Transformation

---

### Solution:

We start with the definition of the Laplace transform, that is,

$$\mathcal{L}\{f(t)\} = F(s) = \int_0^{\infty} f(t)e^{-st} dt$$

For this example,

$$\mathcal{L}\{u_0(t)\} = \int_0^{\infty} 1e^{-st} dt = \left. \frac{-e^{-st}}{s} \right|_0^{\infty} = 0 - \left( -\frac{1}{s} \right) = \frac{1}{s}$$

Thus, we have obtained the transform pair

$$\boxed{u_0(t) \Leftrightarrow \frac{1}{s}} \quad (2.38)$$

for  $\operatorname{Re}\{s\} = \sigma > 0$ .\*

### Example 2.2

Find  $\mathcal{L}\{u_1(t)\}$

### Solution:

We apply the definition

$$\mathcal{L}\{f(t)\} = F(s) = \int_0^{\infty} f(t)e^{-st} dt$$

and for this example,

$$\mathcal{L}\{u_1(t)\} = \mathcal{L}\{t\} = \int_0^{\infty} te^{-st} dt$$

We will perform integration by parts recalling that

$$\int u dv = uv - \int v du \quad (2.39)$$

We let

$$u = t \text{ and } dv = e^{-st}$$

then,

$$du = 1 \text{ and } v = \frac{-e^{-st}}{s}$$

---

\* This condition was established in (2.9).

By substitution into (2.39),

$$\mathcal{L}\{t\} = \frac{-te^{-st}}{s} \Big|_0^\infty - \int_0^\infty \frac{-e^{-st}}{s} dt = \left[ \frac{-te^{-st}}{s} - \frac{e^{-st}}{s^2} \right] \Big|_0^\infty \quad (2.40)$$

Since the upper limit of integration in (2.40) produces an indeterminate form, we apply *L'Hôpital's rule\**, that is,

$$\lim_{t \rightarrow \infty} te^{-st} = \lim_{t \rightarrow \infty} \frac{t}{e^{st}} = \lim_{t \rightarrow \infty} \frac{\frac{d}{dt}(t)}{\frac{d}{dt}(e^{st})} = \lim_{t \rightarrow \infty} \frac{1}{se^{st}} = 0$$

Evaluating the second term of (2.40), we get  $\mathcal{L}\{t\} = \frac{1}{s^2}$

Thus, we have obtained the transform pair

$$\boxed{t \leftrightarrow \frac{1}{s^2}} \quad (2.41)$$

for  $\sigma > 0$ .

### Example 2.3

Find  $\mathcal{L}\{t^n u_0(t)\}$

**Solution:**

To find the Laplace transform of this function, we must first review the *gamma* or *generalized factorial function*  $\Gamma(n)$  which is defined as

$$\boxed{\Gamma(n) = \int_0^\infty x^{n-1} e^{-x} dx} \quad (2.42)$$

---

\* Often, the ratio of two functions, such as  $\frac{f(x)}{g(x)}$ , for some value of  $x$ , say  $a$ , results in an indeterminate form. To work around this problem, we consider the limit  $\lim_{x \rightarrow a} \frac{f(x)}{g(x)}$ , and we wish to find this limit, if it exists. To find this limit, we use *L'Hôpital's rule* which states that if  $f(a) = g(a) = 0$ , and if the limit  $\frac{d}{dx}f(x)/\frac{d}{dx}g(x)$  as  $x$  approaches  $a$  exists, then,  $\lim_{x \rightarrow a} \frac{f(x)}{g(x)} = \lim_{x \rightarrow a} \left( \frac{d}{dx}f(x)/\frac{d}{dx}g(x) \right)$

## Chapter 2 The Laplace Transformation

The integral of (2.42) is an *improper integral*\* but converges (approaches a limit) for all  $n > 0$ .

We will now derive the basic properties of the gamma function, and its relation to the well known factorial function

$$n! = n(n-1)(n-2) \cdot \cdot \cdot 3 \cdot 2 \cdot 1$$

The integral of (2.42) can be evaluated by performing integration by parts. Thus, in (2.39) we let

$$u = e^{-x} \quad \text{and} \quad dv = x^{n-1}$$

Then,

$$du = -e^{-x} dx \quad \text{and} \quad v = \frac{x^n}{n}$$

and (2.42) is written as

$$\Gamma(n) = \frac{x^n e^{-x}}{n} \Big|_{x=0}^{\infty} + \frac{1}{n} \int_0^{\infty} x^n e^{-x} dx \quad (2.43)$$

With the condition that  $n > 0$ , the first term on the right side of (2.43) vanishes at the lower limit  $x = 0$ . It also vanishes at the upper limit as  $x \rightarrow \infty$ . This can be proved with L' Hôpital's rule by differentiating both numerator and denominator  $m$  times, where  $m \geq n$ . Then,

$$\begin{aligned} \lim_{x \rightarrow \infty} \frac{x^n e^{-x}}{n} &= \lim_{x \rightarrow \infty} \frac{x^n}{n e^x} = \lim_{x \rightarrow \infty} \frac{\frac{d^m}{dx^m} x^n}{\frac{d^m}{dx^m} n e^x} = \lim_{x \rightarrow \infty} \frac{\frac{d^{m-1}}{dx^{m-1}} n x^{n-1}}{\frac{d^{m-1}}{dx^{m-1}} n e^x} = \dots \\ &= \lim_{x \rightarrow \infty} \frac{n(n-1)(n-2) \dots (n-m+1) x^{n-m}}{n e^x} = \lim_{x \rightarrow \infty} \frac{(n-1)(n-2) \dots (n-m+1)}{x^{m-n} e^x} = 0 \end{aligned}$$

Therefore, (2.43) reduces to

$$\Gamma(n) = \frac{1}{n} \int_0^{\infty} x^n e^{-x} dx$$

and with (2.42), we have

\* *Improper integrals are two types and these are:*

- a.  $\int_a^b f(x) dx$  where the limits of integration  $a$  or  $b$  or both are infinite
- b.  $\int_a^b f(x) dx$  where  $f(x)$  becomes infinite at a value  $x$  between the lower and upper limits of integration inclusive.

---

## The Laplace Transform of Common Functions of Time

---

$$\Gamma(n) = \int_0^{\infty} x^{n-1} e^{-x} dx = \frac{1}{n} \int_0^{\infty} x^n e^{-x} dx \quad (2.44)$$

By comparing the integrals in (2.44), we observe that

$$\boxed{\Gamma(n) = \frac{\Gamma(n+1)}{n}} \quad (2.45)$$

or

$$\boxed{n\Gamma(n) = \Gamma(n+1)} \quad (2.46)$$

It is convenient to use (2.45) for  $n < 0$ , and (2.46) for  $n > 0$ . From (2.45), we see that  $\Gamma(n)$  becomes infinite as  $n \rightarrow 0$ .

For  $n = 1$ , (2.42) yields

$$\Gamma(1) = \int_0^{\infty} e^{-x} dx = -e^{-x} \Big|_0^{\infty} = 1 \quad (2.47)$$

and thus we have the important relation,

$$\Gamma(1) = 1 \quad (2.48)$$

From the recurring relation of (2.46), we obtain

$$\begin{aligned} \Gamma(2) &= 1 \cdot \Gamma(1) = 1 \\ \Gamma(3) &= 2 \cdot \Gamma(2) = 2 \cdot 1 = 2! \\ \Gamma(4) &= 3 \cdot \Gamma(3) = 3 \cdot 2 = 3! \end{aligned} \quad (2.49)$$

and in general

$$\boxed{\Gamma(n+1) = n!} \quad (2.50)$$

for  $n = 1, 2, 3, \dots$

The formula of (2.50) is a noteworthy relation; it establishes the relationship between the  $\Gamma(n)$  function and the factorial  $n!$

We now return to the problem of finding the Laplace transform pair for  $t^n u_0 t$ , that is,

$$\mathcal{L} \{t^n u_0 t\} = \int_0^{\infty} t^n e^{-st} dt \quad (2.51)$$

To make this integral resemble the integral of the gamma function, we let  $st = y$ , or  $t = y/s$ , and

---

## Chapter 2 The Laplace Transformation

---

thus  $dt = dy/s$ . Now, we rewrite (2.51) as

$$\mathcal{L}\{t^n u_0 t\} = \int_0^\infty \left(\frac{y}{s}\right)^n e^{-y} d\left(\frac{y}{s}\right) = \frac{1}{s^{n+1}} \int_0^\infty y^n e^{-y} dy = \frac{\Gamma(n+1)}{s^{n+1}} = \frac{n!}{s^{n+1}}$$

Therefore, we have obtained the transform pair

$$\boxed{t^n u_0(t) \Leftrightarrow \frac{n!}{s^{n+1}}} \quad (2.52)$$

for positive integers of  $n$  and  $\sigma > 0$ .

### Example 2.4

Find  $\mathcal{L}\{\delta(t)\}$

**Solution:**

$$\mathcal{L}\{\delta(t)\} = \int_0^\infty \delta(t) e^{-st} dt$$

and using the sifting property of the delta function, we get

$$\mathcal{L}\{\delta(t)\} = \int_0^\infty \delta(t) e^{-st} dt = e^{-s(0)} = 1$$

Thus, we have the transform pair

$$\boxed{\delta(t) \Leftrightarrow 1} \quad (2.53)$$

for all  $\sigma$ .

### Example 2.5

Find  $\mathcal{L}\{\delta(t-a)\}$

**Solution:**

$$\mathcal{L}\{\delta(t-a)\} = \int_0^\infty \delta(t-a) e^{-st} dt$$

and again, using the sifting property of the delta function, we get

$$\mathcal{L} \{ \delta(t-a) \} = \int_0^{\infty} \delta(t-a) e^{-st} dt = e^{-as}$$

Thus, we have the transform pair

$$\boxed{\delta(t-a) \Leftrightarrow e^{-as}} \quad (2.54)$$

for  $\sigma > 0$ .

### Example 2.6

Find  $\mathcal{L} \{ e^{-at} u_0(t) \}$

**Solution:**

$$\begin{aligned} \mathcal{L} \{ e^{-at} u_0(t) \} &= \int_0^{\infty} e^{-at} e^{-st} dt = \int_0^{\infty} e^{-(s+a)t} dt \\ &= \left( -\frac{1}{s+a} \right) e^{-(s+a)t} \Big|_0^{\infty} = \frac{1}{s+a} \end{aligned}$$

Thus, we have the transform pair

$$\boxed{e^{-at} u_0(t) \Leftrightarrow \frac{1}{s+a}} \quad (2.55)$$

for  $\sigma > -a$ .

### Example 2.7

Find  $\mathcal{L} \left\{ t^n e^{-at} u_0(t) \right\}$

**Solution:**

For this example, we will use the transform pair of (2.52), i.e.,

$$t^n u_0(t) \Leftrightarrow \frac{n!}{s^{n+1}} \quad (2.56)$$

and the frequency shifting property of (2.14), that is,

$$e^{-at} f(t) \Leftrightarrow F(s+a) \quad (2.57)$$

---

## Chapter 2 The Laplace Transformation

---

Then, replacing  $s$  with  $s + a$  in (2.56), we get the transform pair

$$t^n e^{-at} u_0(t) \Leftrightarrow \frac{n!}{(s+a)^{n+1}} \quad (2.58)$$

where  $n$  is a positive integer, and  $\sigma > -a$ . Thus, for  $n = 1$ , we get the transform pair

$$t e^{-at} u_0(t) \Leftrightarrow \frac{1}{(s+a)^2} \quad (2.59)$$

for  $\sigma > -a$ .

For  $n = 2$ , we get the transform

$$t^2 e^{-at} u_0(t) \Leftrightarrow \frac{2!}{(s+a)^3} \quad (2.60)$$

and in general,

$$t^n e^{-at} u_0(t) \Leftrightarrow \frac{n!}{(s+a)^{n+1}} \quad (2.61)$$

for  $\sigma > -a$ .

### Example 2.8

Find  $\mathcal{L} \{ \sin \omega t u_0(t) \}$

**Solution:**

$$\mathcal{L} \{ \sin \omega t u_0(t) \} = \int_0^{\infty} (\sin \omega t) e^{-st} dt = \lim_{a \rightarrow \infty} \int_0^a (\sin \omega t) e^{-st} dt$$

and from tables of integrals\*

---

\* This can also be derived from  $\sin \omega t = \frac{1}{j2}(e^{j\omega t} - e^{-j\omega t})$ , and the use of (2.55) where  $e^{-at} u_0(t) \Leftrightarrow \frac{1}{s+a}$ . By the linearity property, the sum of these terms corresponds to the sum of their Laplace transforms. Therefore,

$$L[\sin \omega t u_0(t)] = \frac{1}{j2} \left( \frac{1}{s-j\omega} - \frac{1}{s+j\omega} \right) = \frac{\omega}{s^2 + \omega^2}$$



$$\int e^{ax} \sin bx dx = \frac{e^{ax}(a \sin bx - b \cos bx)}{a^2 + b^2}$$

Then,

$$\begin{aligned} \mathcal{L} \{ \sin \omega t u_0(t) \} &= \lim_{a \rightarrow \infty} \left. \frac{e^{-st}(-s \sin \omega t - \omega \cos \omega t)}{s^2 + \omega^2} \right|_0^a \\ &= \lim_{a \rightarrow \infty} \left[ \frac{e^{-as}(-s \sin \omega a - \omega \cos \omega a)}{s^2 + \omega^2} + \frac{\omega}{s^2 + \omega^2} \right] = \frac{\omega}{s^2 + \omega^2} \end{aligned}$$

Thus, we have obtained the transform pair

$$\boxed{\sin \omega t u_0 t \Leftrightarrow \frac{\omega}{s^2 + \omega^2}} \quad (2.62)$$

for  $\sigma > 0$ .

### Example 2.9

Find  $\mathcal{L} \{ \cos \omega t u_0(t) \}$

**Solution:**

$$L \{ \cos \omega t u_0(t) \} = \int_0^{\infty} (\cos \omega t) e^{-st} dt = \lim_{a \rightarrow \infty} \int_0^a (\cos \omega t) e^{-st} dt$$

and from tables of integrals\*

$$\int e^{ax} \cos bx dx = \frac{e^{ax}(a \cos bx + b \sin bx)}{a^2 + b^2}$$

Then,

---

\* We can use the relation  $\cos \omega t = \frac{1}{2}(e^{j\omega t} + e^{-j\omega t})$  and the linearity property, as in the derivation of the transform of  $\sin \omega t$  on the footnote of the previous page. We can also use the transform pair  $\frac{d}{dt} f(t) \Leftrightarrow sF(s) - f(0^-)$ ; this is the time differentiation property of (2.16). Applying this transform pair for this derivation, we get

$$L [\cos \omega t u_0(t)] = L \left[ \frac{1}{\omega} \frac{d}{dt} \sin \omega t u_0(t) \right] = \frac{1}{\omega} L \left[ \frac{d}{dt} \sin \omega t u_0(t) \right] = \frac{1}{\omega} s \frac{\omega}{s^2 + \omega^2} = \frac{s}{s^2 + \omega^2}$$

$$\begin{aligned}\mathcal{L}\{\cos\omega t u_0(t)\} &= \lim_{a \rightarrow \infty} \left. \frac{e^{-st}(-s\cos\omega t + \omega\sin\omega t)}{s^2 + \omega^2} \right|_0^a \\ &= \lim_{a \rightarrow \infty} \left[ \frac{e^{-as}(-s\cos\omega a + \omega\sin\omega a)}{s^2 + \omega^2} + \frac{s}{s^2 + \omega^2} \right] = \frac{s}{s^2 + \omega^2}\end{aligned}$$

Thus, we have the transform pair

$$\boxed{\cos\omega t u_0 t \Leftrightarrow \frac{s}{s^2 + \omega^2}} \quad (2.63)$$

for  $\sigma > 0$ .

### Example 2.10

Find  $\mathcal{L}\{e^{-at}\sin\omega t u_0(t)\}$

**Solution:**

Since

$$\sin\omega t u_0 t \Leftrightarrow \frac{\omega}{s^2 + \omega^2}$$

using the frequency shifting property of (2.14), that is,

$$\boxed{e^{-at}f(t) \Leftrightarrow F(s+a)} \quad (2.64)$$

we replace  $s$  with  $s+a$ , and we get

$$\boxed{e^{-at}\sin\omega t u_0(t) \Leftrightarrow \frac{\omega}{(s+a)^2 + \omega^2}} \quad (2.65)$$

for  $\sigma > 0$  and  $a > 0$ .

### Example 2.11

Find  $\mathcal{L}\{e^{-at}\cos\omega t u_0(t)\}$

**Solution:**

Since

$$\cos\omega t u_0(t) \Leftrightarrow \frac{s}{s^2 + \omega^2}$$

using the frequency shifting property of (2.14), we replace  $s$  with  $s + a$ , and we get

$$\boxed{e^{-at} \cos \omega t u_0(t) \Leftrightarrow \frac{s + a}{(s + a)^2 + \omega^2}} \quad (2.66)$$

for  $\sigma > 0$  and  $a > 0$ .

For easy reference, we have summarized the above derivations in Table 2.2.

*TABLE 2.2 Laplace Transform Pairs for Common Functions*

	$f(t)$	$F(s)$
1	$u_0(t)$	$1/s$
2	$t u_0(t)$	$1/s^2$
3	$t^n u_0(t)$	$\frac{n!}{s^{n+1}}$
4	$\delta(t)$	$1$
5	$\delta(t - a)$	$e^{-as}$
6	$e^{-at} u_0(t)$	$\frac{1}{s + a}$
7	$t^n e^{-at} u_0(t)$	$\frac{n!}{(s + a)^{n+1}}$
8	$\sin \omega t u_0(t)$	$\frac{\omega}{s^2 + \omega^2}$
9	$\cos \omega t u_0(t)$	$\frac{s}{s^2 + \omega^2}$
10	$e^{-at} \sin \omega t u_0(t)$	$\frac{\omega}{(s + a)^2 + \omega^2}$
11	$e^{-at} \cos \omega t u_0(t)$	$\frac{s + a}{(s + a)^2 + \omega^2}$

## 2.4 The Laplace Transform of Common Waveforms

In this section, we will present some examples for deriving the Laplace transform of several waveforms using the transform pairs of Tables 1 and 2.

---

## Chapter 2 The Laplace Transformation

---

### Example 2.12

Find the Laplace transform of the waveform  $f_P(t)$  of Figure 2.1. The subscript  $P$  stands for pulse.

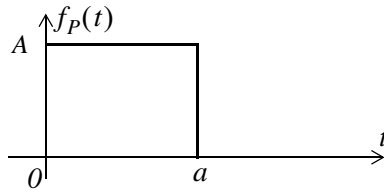


Figure 2.1. Waveform for Example 2.12

### Solution:

We first express the given waveform as a sum of unit step functions. Then,

$$f_P(t) = A[u_0(t) - u_0(t-a)] \quad (2.67)$$

Next, from Table 2.1,

$$f(t-a)u_0(t-a) \Leftrightarrow e^{-as}F(s)$$

and from Table 2.2,

$$u_0(t) \Leftrightarrow 1/s$$

For this example,

$$Au_0(t) \Leftrightarrow A/s$$

and

$$Au_0(t-a) \Leftrightarrow e^{-as}\frac{A}{s}$$

Then, by the linearity property, the Laplace transform of the pulse of Figure 2.1 is

$$A[u_0(t) - u_0(t-a)] \Leftrightarrow \frac{A}{s} - e^{-as}\frac{A}{s} = \frac{A}{s}(1 - e^{-as})$$

### Example 2.13

Find the Laplace transform for the waveform  $f_L(t)$  of Figure 2.2. The subscript  $L$  stands for line.

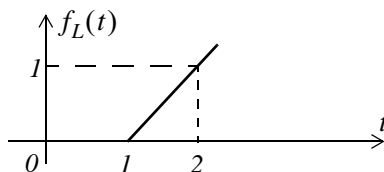


Figure 2.2. Waveform for Example 2.13

**Solution:**

We must first derive the equation of the linear segment. This is shown in Figure 2.3. Then, we express the given waveform in terms of the unit step function.

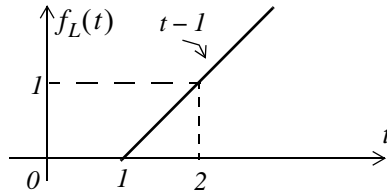


Figure 2.3. Waveform for Example 2.13 with the equation of the linear segment

For this example,

$$f_L(t) = (t - 1)u_0(t - 1)$$

From Table 2.1,

$$f(t - a)u_0(t - a) \Leftrightarrow e^{-as} F(s)$$

and from Table 2.2,

$$tu_0(t) \Leftrightarrow \frac{1}{s^2}$$

Therefore, the Laplace transform of the linear segment of Figure 2.2 is

$$\boxed{(t - 1)u_0(t - 1) \Leftrightarrow e^{-s} \frac{1}{s^2}} \quad (2.68)$$

**Example 2.14**

Find the Laplace transform for the triangular waveform  $f_T(t)$  of Figure 2.4.

**Solution:**

We must first derive the equations of the linear segments. These are shown in Figure 2.5. Then, we express the given waveform in terms of the unit step function.

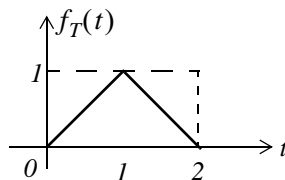


Figure 2.4. Waveform for Example 2.14

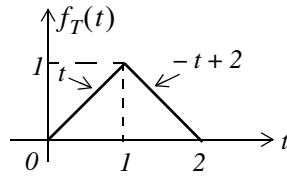


Figure 2.5. Waveform for Example 2.13 with the equations of the linear segments

For this example,

$$\begin{aligned} f_T(t) &= t[u_0(t) - u_0(t-1)] + (-t+2)[u_0(t-1) - u_0(t-2)] \\ &= tu_0(t) - tu_0(t-1) - tu_0(t-1) + 2u_0(t-1) + tu_0(t-2) - 2u_0(t-2) \end{aligned}$$

and collecting like terms,

$$f_T(t) = tu_0(t) - 2(t-1)u_0(t-1) + (t-2)u_0(t-2)$$

From Table 2.1,

$$f(t-a)u_0(t-a) \Leftrightarrow e^{-as}F(s)$$

and from Table 2.2,

$$tu_0(t) \Leftrightarrow \frac{1}{s^2}$$

Then,

$$tu_0(t) - 2(t-1)u_0(t-1) + (t-2)u_0(t-2) \Leftrightarrow \frac{1}{s^2} - 2e^{-s}\frac{1}{s^2} + e^{-2s}\frac{1}{s^2}$$

or

$$tu_0(t) - 2(t-1)u_0(t-1) + (t-2)u_0(t-2) \Leftrightarrow \frac{1}{s^2}(1 - 2e^{-s} + e^{-2s})$$

Therefore, the Laplace transform of the triangular waveform of Figure 2.4 is

$$\boxed{f_T(t) \Leftrightarrow \frac{1}{s^2}(1 - e^{-s})^2} \quad (2.69)$$

### Example 2.15

Find the Laplace transform for the rectangular periodic waveform  $f_R(t)$  of Figure 2.6.

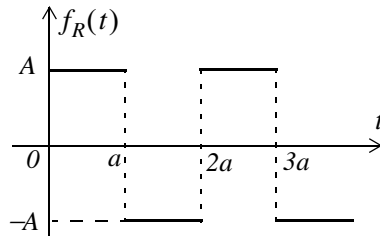


Figure 2.6. Waveform for Example 2.15

**Solution:**

This is a periodic waveform with period  $T = 2a$ , and thus we can apply the time periodicity property

$$\mathcal{L}\{f(\tau)\} = \frac{\int_0^T f(\tau)e^{-s\tau} d\tau}{1 - e^{-sT}}$$

where the denominator represents the periodicity of  $f(t)$ . For this example,

$$\begin{aligned} \mathcal{L}\{f_R(t)\} &= \frac{1}{1 - e^{-2as}} \int_0^{2a} f_R(t)e^{-st} dt = \frac{1}{1 - e^{-2as}} \left[ \int_0^a A e^{-st} dt + \int_a^{2a} (-A) e^{-st} dt \right] \\ &= \frac{A}{1 - e^{-2as}} \left[ \left. \frac{-e^{-st}}{s} \right|_0^a + \left. \frac{e^{-st}}{s} \right|_a^{2a} \right] \end{aligned}$$

or

$$\begin{aligned} \mathcal{L}\{f_R(t)\} &= \frac{A}{s(1 - e^{-2as})} (-e^{-as} + 1 + e^{-2as} - e^{-as}) \\ &= \frac{A}{s(1 - e^{-2as})} (1 - 2e^{-as} + e^{-2as}) = \frac{A(1 - e^{-as})^2}{s(1 + e^{-as})(1 - e^{-as})} \\ &= \left( \frac{A(1 - e^{-as})}{s(1 + e^{-as})} = \frac{A}{s} \left( \frac{e^{as/2} e^{-as/2} - e^{-as/2} e^{-as/2}}{e^{as/2} e^{-as/2} + e^{-as/2} e^{-as/2}} \right) \right) \\ &= \frac{A}{s} \frac{e^{-as/2} (e^{as/2} - e^{-as/2})}{e^{-as/2} (e^{as/2} + e^{-as/2})} = \frac{A \sinh(as/2)}{s \cosh(as/2)} \end{aligned}$$

or

$$\boxed{f_R(t) \Leftrightarrow \frac{A}{s} \tanh\left(\frac{as}{2}\right)} \tag{2.70}$$

## Chapter 2 The Laplace Transformation

### Example 2.16

Find the Laplace transform for the half-rectified sine wave  $f_{HW}(t)$  of Figure 2.7.

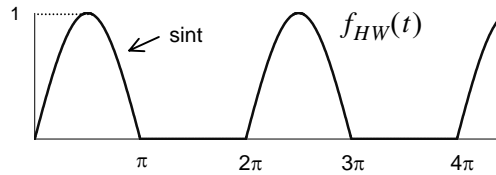


Figure 2.7. Waveform for Example 2.16

### Solution:

This is a periodic waveform with period  $T = 2\pi$ . We will apply the time periodicity property

$$\mathcal{L}\{f(\tau)\} = \frac{\int_0^T f(\tau)e^{-s\tau} d\tau}{1 - e^{-sT}}$$

where the denominator represents the periodicity of  $f(t)$ . For this example,

$$\begin{aligned} \mathcal{L}\{f_{HW}(t)\} &= \frac{1}{1 - e^{-2\pi s}} \int_0^{2\pi} f(t)e^{-st} dt = \frac{1}{1 - e^{-2\pi s}} \int_0^{\pi} \sin t e^{-st} dt \\ &= \frac{1}{1 - e^{-2\pi s}} \left[ \frac{e^{-st}(s \sin t - \cos t)}{s^2 + 1} \right] \Bigg|_0^{\pi} = \frac{1}{(s^2 + 1)(1 - e^{-2\pi s})} (1 + e^{-\pi s}) \end{aligned}$$

$$\mathcal{L}\{f_{HW}(t)\} = \frac{1}{(s^2 + 1)(1 + e^{-\pi s})(1 - e^{-\pi s})}$$

or

$$\boxed{f_{HW}(t) \Leftrightarrow \frac{1}{(s^2 + 1)(1 - e^{-\pi s})}} \quad (2.71)$$



## 2.5 Summary

- The two-sided or bilateral Laplace Transform pair is defined as

$$\mathcal{L}\{f(t)\} = F(s) = \int_{-\infty}^{\infty} f(t)e^{-st} dt$$

$$\mathcal{L}^{-1}\{F(s)\} = f(t) = \frac{1}{2\pi j} \int_{\sigma-j\omega}^{\sigma+j\omega} F(s)e^{st} ds$$

where  $\mathcal{L}\{f(t)\}$  denotes the Laplace transform of the time function  $f(t)$ ,  $\mathcal{L}^{-1}\{F(s)\}$  denotes the Inverse Laplace transform, and  $s$  is a complex variable whose real part is  $\sigma$ , and imaginary part  $\omega$ , that is,  $s = \sigma + j\omega$ .

- The unilateral or one-sided Laplace transform defined as

$$\mathcal{L}\{f(t)\} = F(s) = \int_{t_0}^{\infty} f(t)e^{-st} dt = \int_0^{\infty} f(t)e^{-st} dt$$

- We denote transformation from the time domain to the complex frequency domain, and vice versa, as

$$f(t) \Leftrightarrow F(s)$$

- The linearity property states that

$$c_1 f_1(t) + c_2 f_2(t) + \dots + c_n f_n(t) \Leftrightarrow c_1 F_1(s) + c_2 F_2(s) + \dots + c_n F_n(s)$$

- The time shifting property states that

$$f(t-a)u_0(t-a) \Leftrightarrow e^{-as}F(s)$$

- The frequency shifting property states that

$$e^{-at}f(t) \Leftrightarrow F(s+a)$$

- The scaling property states that

$$f(at) \Leftrightarrow \frac{1}{a}F\left(\frac{s}{a}\right)$$

- The differentiation in time domain property states that

$$f'(t) = \frac{d}{dt} f(t) \Leftrightarrow sF(s) - f(0^-)$$

$$\frac{d^2}{dt^2} f(t) \Leftrightarrow s^2 F(s) - sf(0^-) - f'(0^-)$$

---

## Chapter 2 The Laplace Transformation

---

$$\frac{d^3}{dt^3}f(t) \Leftrightarrow s^3F(s) - s^2f(0^-) - sf'(0^-) - f''(0^-)$$

and in general

$$\frac{d^n}{dt^n}f(t) \Leftrightarrow s^nF(s) - s^{n-1}f(0^-) - s^{n-2}f'(0^-) - \dots - f^{(n-1)}(0^-)$$

where the terms  $f(0^-)$ ,  $f'(0^-)$ ,  $f''(0^-)$ , and so on, represent the initial conditions.

- The differentiation in complex frequency domain property states that

$$tf(t) \Leftrightarrow -\frac{d}{ds}F(s)$$

and in general,

$$t^n f(t) \Leftrightarrow (-1)^n \frac{d^n}{ds^n} F(s)$$

- The integration in time domain property states that

$$\int_{-\infty}^t f(\tau) d\tau \Leftrightarrow \frac{F(s)}{s} + \frac{f(0^-)}{s}$$

- The integration in complex frequency domain property states that

$$\frac{f(t)}{t} \Leftrightarrow \int_s^{\infty} F(s) ds$$

provided that the limit  $\lim_{t \rightarrow 0} \frac{f(t)}{t}$  exists.

- The time periodicity property states that

$$f(t + nT) \Leftrightarrow \frac{\int_0^T f(t)e^{-st} dt}{1 - e^{-sT}}$$

- The initial value theorem states that

$$\lim_{t \rightarrow 0} f(t) = \lim_{s \rightarrow \infty} sF(s) = f(0^-)$$

- The final value theorem states that

$$\lim_{t \rightarrow \infty} f(t) = \lim_{s \rightarrow 0} sF(s) = f(\infty)$$

- Convolution in the time domain corresponds to multiplication in the complex frequency domain, that is,

$$f_1(t)*f_2(t) \Leftrightarrow F_1(s)F_2(s)$$

- Convolution in the complex frequency domain divided by  $1/2\pi j$ , corresponds to multiplication in the time domain. That is,

$$f_1(t)f_2(t) \Leftrightarrow \frac{1}{2\pi j} F_1(s)*F_2(s)$$

- The Laplace transforms of some common functions of time are shown below.

$$u_0(t) \Leftrightarrow 1/s$$

$$t \Leftrightarrow 1/s^2$$

$$t^n u_0(t) \Leftrightarrow \frac{n!}{s^{n+1}}$$

$$\delta(t) \Leftrightarrow 1$$

$$\delta(t-a) \Leftrightarrow e^{-as}$$

$$e^{-at} u_0(t) \Leftrightarrow \frac{1}{s+a}$$

$$te^{-at} u_0(t) \Leftrightarrow \frac{1}{(s+a)^2}$$

$$t^2 e^{-at} u_0(t) \Leftrightarrow \frac{2!}{(s+a)^3}$$

$$t^n e^{-at} u_0(t) \Leftrightarrow \frac{n!}{(s+a)^{n+1}}$$

$$\sin \omega t u_0 t \Leftrightarrow \frac{\omega}{s^2 + \omega^2}$$

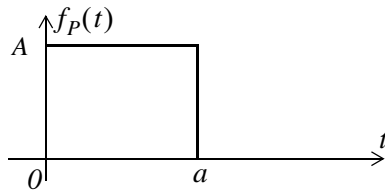
$$\cos \omega t u_0 t \Leftrightarrow \frac{s}{s^2 + \omega^2}$$

$$e^{-at} \sin \omega t u_0(t) \Leftrightarrow \frac{\omega}{(s+a)^2 + \omega^2}$$

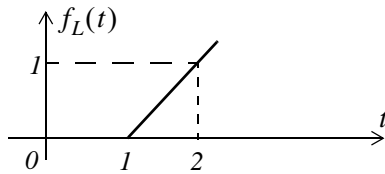
$$e^{-at} \cos \omega t u_0(t) \Leftrightarrow \frac{s+a}{(s+a)^2 + \omega^2}$$

## Chapter 2 The Laplace Transformation

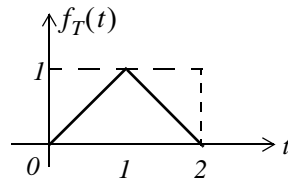
- The Laplace transforms of some common waveforms are shown below.



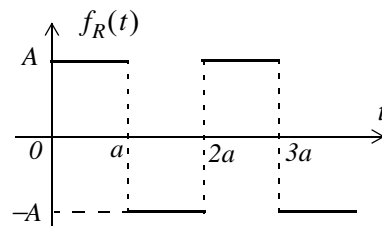
$$A[u_0(t) - u_0(t-a)] \Leftrightarrow \frac{A}{s} - e^{-as} \frac{A}{s} = \frac{A}{s}(1 - e^{-as})$$



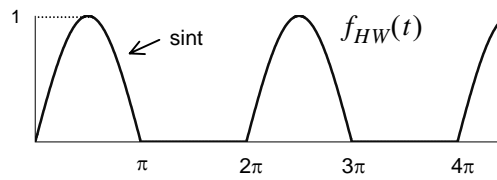
$$(t-1)u_0(t-1) \Leftrightarrow e^{-s} \frac{1}{s^2}$$



$$f_T(t) \Leftrightarrow \frac{1}{s^2}(1 - e^{-s})^2$$



$$f_R(t) \Leftrightarrow \frac{A}{s} \tanh\left(\frac{as}{2}\right)$$



$$f_{HW}(t) \Leftrightarrow \frac{1}{(s^2 + 1)(1 - e^{-\pi s})}$$

### 2.6 Exercises

- Find the Laplace transform of the following time domain functions:
  - 12
  - $6u_0(t)$
  - $24u_0(t-12)$
  - $5tu_0(t)$
  - $4t^5u_0(t)$
- Find the Laplace transform of the following time domain functions:
  - $j8$
  - $j5\angle-90^\circ$
  - $5e^{-5t}u_0(t)$
  - $8t^7e^{-5t}u_0(t)$
  - $15\delta(t-4)$
- Find the Laplace transform of the following time domain functions:
  - $(t^3 + 3t^2 + 4t + 3)u_0(t)$
  - $3(2t-3)\delta(t-3)$
  - $(3\sin 5t)u_0(t)$
  - $(5\cos 3t)u_0(t)$
  - $(2\tan 4t)u_0(t)$  Be careful with this! Comment and skip derivation.
- Find the Laplace transform of the following time domain functions:
  - $3t(\sin 5t)u_0(t)$
  - $2t^2(\cos 3t)u_0(t)$
  - $2e^{-5t}\sin 5t$

- d.  $8e^{-3t}\cos 4t$
- e.  $(\cos t)\delta(t - \pi/4)$
5. Find the Laplace transform of the following time domain functions:
- a.  $5tu_0(t - 3)$
- b.  $(2t^2 - 5t + 4)u_0(t - 3)$
- c.  $(t - 3)e^{-2t}u_0(t - 2)$
- d.  $(2t - 4)e^{2(t-2)}u_0(t - 3)$
- e.  $4te^{-3t}(\cos 2t)u_0(t)$
6. Find the Laplace transform of the following time domain functions:
- a.  $\frac{d}{dt}(\sin 3t)$
- b.  $\frac{d}{dt}(3e^{-4t})$
- c.  $\frac{d}{dt}(t^2 \cos 2t)$
- d.  $\frac{d}{dt}(e^{-2t} \sin 2t)$
- e.  $\frac{d}{dt}(t^2 e^{-2t})$
7. Find the Laplace transform of the following time domain functions:
- a.  $\frac{\sin t}{t}$
- b.  $\int_0^t \frac{\sin \tau}{\tau} d\tau$
- c.  $\frac{\sin at}{t}$
- d.  $\int_t^\infty \frac{\cos \tau}{\tau} d\tau$

---

## Chapter 2 The Laplace Transformation

---

e.  $\int_t^{\infty} \frac{e^{-\tau}}{\tau} d\tau$

8. Find the Laplace transform for the sawtooth waveform  $f_{ST}(t)$  of Figure 2.8.

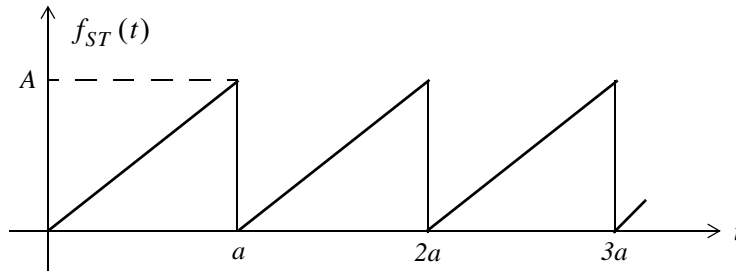


Figure 2.8. Waveform for Exercise 8.

9. Find the Laplace transform for the full rectification waveform  $f_{FR}(t)$  of Figure 2.9.

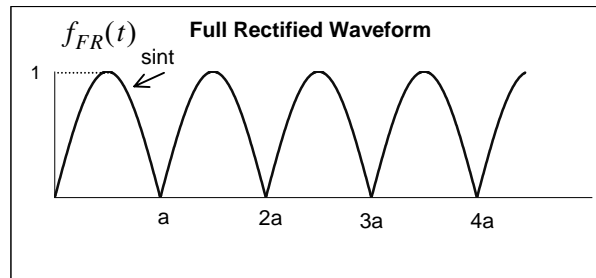


Figure 2.9. Waveform for Exercise 9



## 2.7 Solutions to Exercises

1. From the definition of the Laplace transform or from Table 2.2 we get:

a.  $12/s$  b.  $6/s$  c.  $e^{-12s} \cdot \frac{24}{s}$  d.  $5/s^2$  e.  $4 \cdot \frac{5!}{s^6}$

2. From the definition of the Laplace transform or from Table 2.2 we get:

a.  $j8/s$  b.  $5/s$  c.  $\frac{5}{s+5}$  d.  $8 \cdot \frac{7!}{(s+5)^8}$  e.  $15e^{-4s}$

3.

a. From Table 2.2 and the linearity property  $\frac{3!}{s^4} + \frac{3 \times 2!}{s^3} + \frac{4}{s^2} + \frac{3}{s}$

b.  $3(2t-3)\delta(t-3) = 3(2t-3)|_{t=3}\delta(t-3) = 9\delta(t-3)$  and  $9\delta(t-3) \Leftrightarrow 9e^{-3s}$

c.  $3 \cdot \frac{5}{s^2+5^2}$  d.  $5 \cdot \frac{s}{s^2+3^2}$  e.  $2 \tan 4t = 2 \cdot \frac{\sin 4t}{\cos 4t} \Leftrightarrow 2 \cdot \frac{4/(s^2+2^2)}{s/(s^2+2^2)} = \frac{8}{s}$

This answer looks suspicious because  $8/s \Leftrightarrow 8u_0(t)$  and the Laplace transform is unilateral, that is, there is one-to-one correspondence between the time domain and the complex frequency domain. The fallacy with this procedure is that we assumed that if  $f_1(t) \Leftrightarrow F_1(s)$  and

$$f_2(t) \Leftrightarrow F_2(s), \text{ we cannot conclude that } \frac{f_1(t)}{f_2(t)} \Leftrightarrow \frac{F_1(s)}{F_2(s)}.$$

For this exercise  $f_1(t) \cdot f_2(t) = \sin 4t \cdot \frac{1}{\cos 4t}$  and as we've learned multiplication in the time domain corresponds to convolution in the complex frequency domain. Accordingly, we must use the Laplace transform definition  $\int_0^\infty (2 \tan 4t) e^{-st} dt$  and this requires integration by parts. We

skip this analytical derivation. The interested reader may try to find the answer with the MATLAB code `syms s t; 2*laplace(sin(4*t)/cos(4*t))`

4. From (2.22)

$$t^n f(t) \Leftrightarrow (-1)^n \frac{d^n}{ds^n} F(s)$$

Then,

a.

$$3(-1)^1 \frac{d}{ds} \left( \frac{5}{s^2+5^2} \right) = -3 \left[ \frac{-5 \cdot (2s)}{(s^2+25)^2} \right] = \frac{30s}{(s^2+25)^2}$$

b.

$$\begin{aligned}
 2(-1)^2 \frac{d^2}{ds^2} \left( \frac{s}{s^2 + 3^2} \right) &= 2 \frac{d}{ds} \left[ \frac{s^2 + 3^2 - s(2s)}{(s^2 + 9)^2} \right] = 2 \frac{d}{ds} \left( \frac{-s^2 + 9}{(s^2 + 9)^2} \right) \\
 &= 2 \cdot \frac{(s^2 + 9)^2 (-2s) - 2(s^2 + 9)(2s)(-s^2 + 9)}{(s^2 + 9)^4} \\
 &= 2 \cdot \frac{(s^2 + 9)(-2s) - 4s(-s^2 + 9)}{(s^2 + 9)^3} = 2 \cdot \frac{-2s^3 - 18s + 4s^3 - 36s}{(s^2 + 9)^3} \\
 &= 2 \cdot \frac{2s^3 - 54s}{(s^2 + 9)^3} = 2 \cdot \frac{2s(s^2 - 27)}{(s^2 + 9)^3} = \frac{4s(s^2 - 27)}{(s^2 + 9)^3}
 \end{aligned}$$

c.

$$\frac{2 \times 5}{(s+5)^2 + 5^2} = \frac{10}{(s+5)^2 + 25}$$

d.

$$\frac{8(s+3)}{(s+3)^2 + 4^2} = \frac{8(s+3)}{(s+3)^2 + 16}$$

e.

$$\cos t \Big|_{\pi/4} \delta(t - \pi/4) = (\sqrt{2}/2) \delta(t - \pi/4) \text{ and } (\sqrt{2}/2) \delta(t - \pi/4) \Leftrightarrow (\sqrt{2}/2) e^{-(\pi/4)s}$$

5.

a.

$$5tu_0(t-3) = [5(t-3) + 15]u_0(t-3) \Leftrightarrow e^{-3s} \left( \frac{5}{s^2} + \frac{15}{s} \right) = \frac{5}{s} e^{-3s} \left( \frac{1}{s} + 3 \right)$$

b.

$$\begin{aligned}
 (2t^2 - 5t + 4)u_0(t-3) &= [2(t-3)^2 + 12t - 18 - 5t + 4]u_0(t-3) \\
 &= [2(t-3)^2 + 7t - 14]u_0(t-3) \\
 &= [2(t-3)^2 + 7(t-3) + 21 - 14]u_0(t-3) \\
 &= [2(t-3)^2 + 7(t-3) + 7]u_0(t-3) \Leftrightarrow e^{-3s} \left( \frac{2 \times 2!}{s^3} + \frac{7}{s^2} + \frac{7}{s} \right)
 \end{aligned}$$

c.

$$\begin{aligned}
 (t-3)e^{-2t}u_0(t-2) &= [(t-2) - 1]e^{-2(t-2)} \cdot e^{-4}u_0(t-2) \\
 &\Leftrightarrow e^{-4} \cdot e^{-2s} \left[ \frac{1}{(s+2)^2} - \frac{1}{(s+2)} \right] = e^{-4} \cdot e^{-2s} \left[ \frac{-(s+1)}{(s+2)^2} \right]
 \end{aligned}$$

d.

$$(2t-4)e^{2(t-2)}u_0(t-3) = [2(t-3) + 6 - 4]e^{-2(t-3)} \cdot e^{-2}u_0(t-3)$$

$$\Leftrightarrow e^{-2} \cdot e^{-3s} \left[ \frac{2}{(s+3)^2} + \frac{2}{(s+3)} \right] = 2e^{-2} \cdot e^{-3s} \left[ \frac{s+4}{(s+3)^2} \right]$$

e.

$$4te^{-3t}(\cos 2t)u_0(t) \Leftrightarrow 4(-1)^l \frac{d}{ds} \left[ \frac{s+3}{(s+3)^2 + 2^2} \right] = -4 \frac{d}{ds} \left[ \frac{s+3}{s^2 + 6s + 9 + 4} \right]$$

$$\Leftrightarrow -4 \frac{d}{ds} \left[ \frac{s+3}{s^2 + 6s + 13} \right] = -4 \left[ \frac{s^2 + 6s + 13 - (s+3)(2s+6)}{(s^2 + 6s + 13)^2} \right]$$

$$\Leftrightarrow -4 \left[ \frac{s^2 + 6s + 13 - 2s^2 - 6s - 6s - 18}{(s^2 + 6s + 13)^2} \right] = \frac{4(s^2 + 6s + 5)}{(s^2 + 6s + 13)^2}$$

6.

a.

$$\sin 3t \Leftrightarrow \frac{3}{s^2 + 3^2} \quad \frac{d}{dt}f(t) \Leftrightarrow sF(s) - f(0^-) \quad f(0^-) = \sin 3t|_{t=0} = 0$$

$$\frac{d}{dt}(\sin 3t) \Leftrightarrow s \frac{3}{s^2 + 3^2} - 0 = \frac{3s}{s^2 + 9}$$

b.

$$3e^{-4t} \Leftrightarrow \frac{3}{s+4} \quad \frac{d}{dt}f(t) \Leftrightarrow sF(s) - f(0^-) \quad f(0^-) = 3e^{-4t}|_{t=0} = 3$$

$$\frac{d}{dt}(3e^{-4t}) \Leftrightarrow s \frac{3}{s+4} - 3 = \frac{3s}{s+4} - \frac{3(s+4)}{s+4} = \frac{-12}{s+4}$$

c.

$$\cos 2t \Leftrightarrow \frac{s}{s^2 + 2^2} \quad t^2 \cos 2t \Leftrightarrow (-1)^2 \frac{d^2}{ds^2} \left[ \frac{s}{s^2 + 4} \right]$$

$$\frac{d}{ds} \left[ \frac{s^2 + 4 - s(2s)}{(s^2 + 4)^2} \right] = \frac{d}{ds} \left[ \frac{-s^2 + 4}{(s^2 + 4)^2} \right] = \frac{(s^2 + 4)^2(-2s) - (-s^2 + 4)(s^2 + 4)2(2s)}{(s^2 + 4)^4}$$

$$= \frac{(s^2 + 4)(-2s) - (-s^2 + 4)(4s)}{(s^2 + 4)^3} = \frac{-2s^3 - 8s + 4s^3 - 16s}{(s^2 + 4)^3} = \frac{2s(s^2 - 12)}{(s^2 + 4)^3}$$

Thus,

$$t^2 \cos 2t \Leftrightarrow \frac{2s(s^2 - 12)}{(s^2 + 4)^3}$$

and

$$\begin{aligned} \frac{d}{dt}(t^2 \cos 2t) &\Leftrightarrow sF(s) - f(0^-) \\ &\Leftrightarrow s \frac{2s(s^2 - 12)}{(s^2 + 4)^3} - 0 = \frac{2s^2(s^2 - 12)}{(s^2 + 4)^3} \end{aligned}$$

d.

$$\begin{aligned} \sin 2t &\Leftrightarrow \frac{2}{s^2 + 2^2} & e^{-2t} \sin 2t &\Leftrightarrow \frac{2}{(s + 2)^2 + 4} & \frac{d}{dt}f(t) &\Leftrightarrow sF(s) - f(0^-) \\ \frac{d}{dt}(e^{-2t} \sin 2t) &\Leftrightarrow s \frac{2}{(s + 2)^2 + 4} - 0 = \frac{2s}{(s + 2)^2 + 4} \end{aligned}$$

e.

$$\begin{aligned} t^2 &\Leftrightarrow \frac{2!}{s^3} & t^2 e^{-2t} &\Leftrightarrow \frac{2!}{(s + 2)^3} & \frac{d}{dt}f(t) &\Leftrightarrow sF(s) - f(0^-) \\ \frac{d}{dt}(t^2 e^{-2t}) &\Leftrightarrow s \frac{2!}{(s + 2)^3} - 0 = \frac{2s}{(s + 2)^3} \end{aligned}$$

7.

a.

$\sin t \Leftrightarrow \frac{1}{s^2 + 1}$  but to find  $\mathcal{L}\left\{\frac{\sin t}{t}\right\}$  we must show that the limit  $\lim_{t \rightarrow 0} \frac{\sin t}{t}$  exists. Since

$\lim_{x \rightarrow 0} \frac{\sin x}{x} = 1$  this condition is satisfied and thus  $\frac{\sin t}{t} \Leftrightarrow \int_s^\infty \frac{1}{s^2 + 1} ds$ . From tables of integrals

$\int \frac{1}{x^2 + a^2} dx = \frac{1}{a} \tan^{-1}(x/a) + C$ . Then,  $\int \frac{1}{s^2 + 1} ds = \tan^{-1}(1/s) + C$  and the constant of inte-

gration  $C$  is evaluated from the final value theorem. Thus,

$$\lim_{t \rightarrow \infty} f(t) = \lim_{s \rightarrow 0} sF(s) = \lim_{s \rightarrow 0} s[\tan^{-1}(1/s) + C] = 0 \text{ and } \frac{\sin t}{t} \Leftrightarrow \tan^{-1}(1/s)$$

b.

From (a) above  $\frac{\sin t}{t} \Leftrightarrow \tan^{-1}(1/s)$  and since  $\int_{-\infty}^t f(\tau) d\tau \Leftrightarrow \frac{F(s)}{s} + \frac{f(0^-)}{s}$ , it follows that

$$\int_0^t \frac{\sin \tau}{\tau} d\tau \Leftrightarrow \frac{1}{s} \tan^{-1}(1/s)$$

c.

From (a) above  $\frac{\sin t}{t} \Leftrightarrow \tan^{-1}(1/s)$  and since  $f(at) \Leftrightarrow \frac{1}{a}F\left(\frac{s}{a}\right)$ , it follows that

$$\frac{\sin at}{at} \Leftrightarrow \frac{1}{a} \tan^{-1}\left(\frac{1/s}{a}\right) \text{ or } \frac{\sin at}{t} \Leftrightarrow \tan^{-1}(a/s)$$

d.

$\cos t \Leftrightarrow \frac{s}{s^2+1}$ ,  $\frac{\cos t}{t} \Leftrightarrow \int_s^\infty \frac{s}{s^2+1} ds$ , and from tables of integrals

$\int \frac{x}{x^2+a^2} dx = \frac{1}{2} \ln(x^2+a^2) + C$ . Then,  $\int \frac{s}{s^2+1} ds = \frac{1}{2} \ln(s^2+1) + C$  and the constant of integration  $C$  is evaluated from the final value theorem. Thus,

$$\lim_{t \rightarrow \infty} f(t) = \lim_{s \rightarrow 0} sF(s) = \lim_{s \rightarrow 0} s \left[ \frac{1}{2} \ln(s^2+1) + C \right] = 0 \text{ and using } \int_{-\infty}^t f(\tau) d\tau \Leftrightarrow \frac{F(s)}{s} + \frac{f(0^-)}{s} \text{ we}$$

$$\text{get } \int_t^\infty \frac{\cos \tau}{\tau} d\tau \Leftrightarrow \frac{1}{2s} \ln(s^2+1)$$

e.

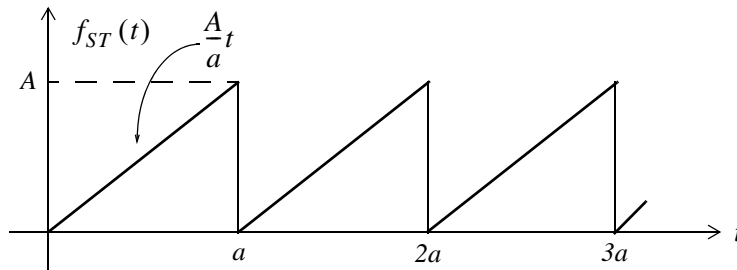
$e^{-t} \Leftrightarrow \frac{1}{s+1}$ ,  $\frac{e^{-t}}{t} \Leftrightarrow \int_s^\infty \frac{1}{s+1} ds$ , and from tables of integrals

$\int \frac{1}{ax+b} dx = \frac{1}{a} \ln(ax+b)$ . Then,  $\int \frac{1}{s+1} ds = \ln(s+1) + C$  and the constant of integration  $C$  is evaluated from the final value theorem. Thus,

$$\lim_{t \rightarrow \infty} f(t) = \lim_{s \rightarrow 0} sF(s) = \lim_{s \rightarrow 0} s [\ln(s+1) + C] = 0 \text{ and using } \int_{-\infty}^t f(\tau) d\tau \Leftrightarrow \frac{F(s)}{s} + \frac{f(0^-)}{s} \text{ we}$$

$$\text{get } \int_t^\infty \frac{e^{-\tau}}{\tau} d\tau \Leftrightarrow \frac{1}{s} \ln(s+1)$$

8.



This is a periodic waveform with period  $T = a$  and its Laplace transform is

$$F(s) = \frac{1}{1 - e^{-as}} \int_0^a \frac{A}{a} t e^{-st} dt = \frac{A}{a(1 - e^{-as})} \int_0^a t e^{-st} dt \quad (1)$$

and from (2.40) of Example 2.2 and limits of integration 0 to  $a$  we get

$$\begin{aligned} \mathcal{L}\{t\} \Big|_0^a &= \int_0^a t e^{-st} dt = \left[ -\frac{t e^{-st}}{s} - \frac{e^{-st}}{s^2} \right] \Big|_0^a = \left[ \frac{t e^{-st}}{s} + \frac{e^{-st}}{s^2} \right] \Big|_0^a \\ &= \left[ \frac{1}{s^2} - \frac{a e^{-as}}{s} - \frac{e^{-as}}{s^2} \right] = \frac{1}{s^2} [1 - (1 + as)e^{-as}] \end{aligned}$$

Adding and subtracting  $as$  we get

$$\mathcal{L}\{t\} \Big|_0^a = \frac{1}{s^2} [(1 + as) - (1 + as)e^{-as} - as] = \frac{1}{s^2} [(1 + as)(1 - e^{-as}) - as]$$

By substitution into (1) we get

$$\begin{aligned} F(s) &= \frac{A}{a(1 - e^{-as})} \cdot \frac{1}{s^2} [(1 + as)(1 - e^{-as}) - as] = \frac{A}{as^2(1 - e^{-as})} \cdot [(1 + as)(1 - e^{-as}) - as] \\ &= \frac{A(1 + as)}{as^2} - \frac{Aa}{as(1 - e^{-as})} = \frac{A}{as} \left[ \frac{(1 + as)}{s} - \frac{a}{(1 - e^{-as})} \right] \end{aligned}$$

9.

This is a periodic waveform with period  $T = a = \pi$  and its Laplace transform is

$$F(s) = \frac{1}{1 - e^{-sT}} \int_0^T f(t) e^{-st} dt = \frac{1}{(1 - e^{-\pi s})} \int_0^\pi \sin t e^{-st} dt$$

From tables of integrals

$$\int \sin bx e^{ax} dx = \frac{e^{ax} (a \sin bx - b \cos bx)}{a^2 + b^2}$$

Then,

$$\begin{aligned} F(s) &= \frac{1}{1 - e^{-\pi s}} \cdot \frac{e^{-st} (s \sin t - \cos t)}{s^2 + 1} \Big|_0^\pi = \frac{1}{1 - e^{-\pi s}} \cdot \frac{1 + e^{-\pi s}}{s^2 + 1} \\ &= \frac{1}{s^2 + 1} \cdot \frac{1 + e^{-\pi s}}{1 - e^{-\pi s}} = \frac{1}{s^2 + 1} \coth\left(\frac{\pi s}{2}\right) \end{aligned}$$

This chapter is a continuation to the Laplace transformation topic of the previous chapter and presents several methods of finding the Inverse Laplace Transformation. The partial fraction expansion method is explained thoroughly and it is illustrated with several examples.

### 3.1 The Inverse Laplace Transform Integral

The *Inverse Laplace Transform Integral* was stated in the previous chapter; it is repeated here for convenience.

$$\mathcal{L}^{-1}\{F(s)\} = f(t) = \frac{1}{2\pi j} \int_{\sigma-j\omega}^{\sigma+j\omega} F(s)e^{st} ds \quad (3.1)$$

This integral is difficult to evaluate because it requires contour integration using complex variables theory. Fortunately, for most engineering problems we can refer to Tables of Properties, and Common Laplace transform pairs to lookup the Inverse Laplace transform.

### 3.2 Partial Fraction Expansion

Quite often the Laplace transform expressions are not in recognizable form, but in most cases appear in a rational form of  $s$ , that is,

$$F(s) = \frac{N(s)}{D(s)} \quad (3.2)$$

where  $N(s)$  and  $D(s)$  are polynomials, and thus (3.2) can be expressed as

$$F(s) = \frac{N(s)}{D(s)} = \frac{b_m s^m + b_{m-1} s^{m-1} + b_{m-2} s^{m-2} + \dots + b_1 s + b_0}{a_n s^n + a_{n-1} s^{n-1} + a_{n-2} s^{n-2} + \dots + a_1 s + a_0} \quad (3.3)$$

The coefficients  $a_k$  and  $b_k$  are real numbers for  $k = 1, 2, \dots, n$ , and if the highest power  $m$  of  $N(s)$  is less than the highest power  $n$  of  $D(s)$ , i.e.,  $m < n$ ,  $F(s)$  is said to be expressed as a *proper rational function*. If  $m \geq n$ ,  $F(s)$  is an *improper rational function*.

In a proper rational function, the roots of  $N(s)$  in (3.3) are found by setting  $N(s) = 0$ ; these are called the *zeros* of  $F(s)$ . The roots of  $D(s)$ , found by setting  $D(s) = 0$ , are called the *poles* of  $F(s)$ . We assume that  $F(s)$  in (3.3) is a proper rational function. Then, it is customary and very convenient

to make the coefficient of  $s^n$  unity; thus, we rewrite  $F(s)$  as

$$F(s) = \frac{N(s)}{D(s)} = \frac{\frac{1}{a_n}(b_m s^m + b_{m-1} s^{m-1} + b_{m-2} s^{m-2} + \dots + b_1 s + b_0)}{s^n + \frac{a_{n-1}}{a_n} s^{n-1} + \frac{a_{n-2}}{a_n} s^{n-2} + \dots + \frac{a_1}{a_n} s + \frac{a_0}{a_n}} \quad (3.4)$$

The zeros and poles of (3.4) can be real and distinct, or repeated, or complex conjugates, or combinations of real and complex conjugates. However, we are mostly interested in the nature of the poles, so we will consider each case separately.

### Case I: Distinct Poles

If all the poles  $p_1, p_2, p_3, \dots, p_n$  of  $F(s)$  are *distinct* (different from each other), we can factor the denominator of  $F(s)$  in the form

$$F(s) = \frac{N(s)}{(s-p_1) \cdot (s-p_2) \cdot (s-p_3) \cdot \dots \cdot (s-p_n)} \quad (3.5)$$

where  $p_k$  is distinct from all other poles. Next, using the *partial fraction expansion method*,\* we can express (3.5) as

$$F(s) = \frac{r_1}{(s-p_1)} + \frac{r_2}{(s-p_2)} + \frac{r_3}{(s-p_3)} + \dots + \frac{r_n}{(s-p_n)} \quad (3.6)$$

where  $r_1, r_2, r_3, \dots, r_n$  are the *residues*, and  $p_1, p_2, p_3, \dots, p_n$  are the *poles* of  $F(s)$ .

To evaluate the residue  $r_k$ , we multiply both sides of (3.6) by  $(s-p_k)$ ; then, we let  $s \rightarrow p_k$ , that is,

$$r_k = \lim_{s \rightarrow p_k} (s-p_k)F(s) = (s-p_k)F(s) \Big|_{s=p_k} \quad (3.7)$$

### Example 3.1

Use the partial fraction expansion method to simplify  $F_1(s)$  of (3.8) below, and find the time domain function  $f_1(t)$  corresponding to  $F_1(s)$ .

$$F_1(s) = \frac{3s+2}{s^2+3s+2} \quad (3.8)$$

---

\* The partial fraction expansion method applies only to proper rational functions. It is used extensively in integration, and in finding the inverses of the Laplace transform, the Fourier transform, and the z-transform. This method allows us to decompose a rational polynomial into smaller rational polynomials with simpler denominators from which we can easily recognize their integrals and inverse transformations. This method is also being taught in intermediate algebra and introductory calculus courses.



**Solution:**

Using (3.6), we get

$$F_1(s) = \frac{3s+2}{s^2+3s+2} = \frac{3s+2}{(s+1)(s+2)} = \frac{r_1}{(s+1)} + \frac{r_2}{(s+2)} \quad (3.9)$$

The residues are

$$r_1 = \lim_{s \rightarrow -1} (s+1)F(s) = \left. \frac{3s+2}{(s+2)} \right|_{s=-1} = -1 \quad (3.10)$$

and

$$r_2 = \lim_{s \rightarrow -2} (s+2)F(s) = \left. \frac{3s+2}{(s+1)} \right|_{s=-2} = 4 \quad (3.11)$$

Therefore, we express (3.9) as

$$F_1(s) = \frac{3s+2}{s^2+3s+2} = \frac{-1}{(s+1)} + \frac{4}{(s+2)} \quad (3.12)$$

and from Table 2.2 of Chapter 2

$$e^{-at} u_0(t) \Leftrightarrow \frac{1}{s+a} \quad (3.13)$$

Then,

$$F_1(s) = \frac{-1}{(s+1)} + \frac{4}{(s+2)} \Leftrightarrow (-e^{-t} + 4e^{-2t}) u_0(t) = f_1(t) \quad (3.14)$$

The residues and poles of a rational function of polynomials such as (3.8), can be found easily using the MATLAB **residue(a,b)** function. For this example, we use the code

```
Ns = [3, 2]; Ds = [1, 3, 2]; [r, p, k] = residue(Ns, Ds)
```

and MATLAB returns the values

```
r =
     4
    -1
p =
    -2
    -1
k =
     []
```

---

## Chapter 3 The Inverse Laplace Transformation

---

For this MATLAB code, we defined **Ns** and **Ds** as two vectors that contain the numerator and denominator coefficients of  $F(s)$ . When this code is executed, MATLAB displays the **r** and **p** vectors that represent the residues and poles respectively. The first value of the vector **r** is associated with the first value of the vector **p**, the second value of **r** is associated with the second value of **p**, and so on.

The vector **k** is referred to as the *direct term* and it is always empty (has no value) whenever  $F(s)$  is a proper rational function, that is, when the highest degree of the denominator is larger than that of the numerator. For this example, we observe that the highest power of the denominator is  $s^2$ , whereas the highest power of the numerator is  $s$  and therefore the direct term is empty.

We can also use the MATLAB **ilaplace(f)** function to obtain the time domain function directly from  $F(s)$ . This is done with the code that follows.

```
syms s t; Fs=(3*s+2)/(s^2+3*s+2); ft=ilaplace(Fs); pretty(ft)
```

When this code is executed, MATLAB displays the expression

$$4 \exp(-2 t) - \exp(-t)$$

### Example 3.2

Use the partial fraction expansion method to simplify  $F_2(s)$  of (3.15) below, and find the time domain function  $f_2(t)$  corresponding to  $F_2(s)$ .

$$F_2(s) = \frac{3s^2 + 2s + 5}{s^3 + 12s^2 + 44s + 48} \quad (3.15)$$

#### Solution:

First, we use the MATLAB **factor(s)** symbolic function to express the denominator polynomial of  $F_2(s)$  in factored form. For this example,

```
syms s; factor(s^3 + 12*s^2 + 44*s + 48)
```

```
ans =  
(s+2) * (s+4) * (s+6)
```

Then,

$$F_2(s) = \frac{3s^2 + 2s + 5}{s^3 + 12s^2 + 44s + 48} = \frac{3s^2 + 2s + 5}{(s+2)(s+4)(s+6)} = \frac{r_1}{(s+2)} + \frac{r_2}{(s+4)} + \frac{r_3}{(s+6)} \quad (3.16)$$

The residues are

$$r_1 = \left. \frac{3s^2 + 2s + 5}{(s+4)(s+6)} \right|_{s=-2} = \frac{9}{8} \quad (3.17)$$

$$r_2 = \left. \frac{3s^2 + 2s + 5}{(s+2)(s+6)} \right|_{s=-4} = -\frac{37}{4} \quad (3.18)$$

$$r_3 = \left. \frac{3s^2 + 2s + 5}{(s+2)(s+4)} \right|_{s=-6} = \frac{89}{8} \quad (3.19)$$

Then, by substitution into (3.16) we get

$$F_2(s) = \frac{3s^2 + 2s + 5}{s^3 + 12s^2 + 44s + 48} = \frac{9/8}{(s+2)} + \frac{-37/4}{(s+4)} + \frac{89/8}{(s+6)} \quad (3.20)$$

From Table 2.2 of Chapter 2

$$e^{-at} u_0(t) \Leftrightarrow \frac{1}{s+a} \quad (3.21)$$

Then,

$$F_2(s) = \frac{9/8}{(s+2)} + \frac{-37/4}{(s+4)} + \frac{89/8}{(s+6)} \Leftrightarrow \left( \frac{9}{8} e^{-2t} - \frac{37}{4} e^{-4t} + \frac{89}{8} e^{-6t} \right) u_0(t) = f_2(t) \quad (3.22)$$

Check with MATLAB:

```
syms s t; Fs = (3*s^2 + 4*s + 5) / (s^3 + 12*s^2 + 44*s + 48); ft = ilaplace(Fs)
```

```
ft =
```

```
-37/4*exp(-4*t) + 9/8*exp(-2*t) + 89/8*exp(-6*t)
```

### Case II: Complex Poles

Quite often, the poles of  $F(s)$  are complex<sup>\*</sup>, and since complex poles occur in complex conjugate pairs, the number of complex poles is even. Thus, if  $p_k$  is a complex root of  $D(s)$ , then, its complex conjugate pole, denoted as  $p_k^*$ , is also a root of  $D(s)$ . The partial fraction expansion method can also be used in this case, but it may be necessary to manipulate the terms of the expansion in order to express them in a recognizable form. The procedure is illustrated with the following example.

#### Example 3.3

Use the partial fraction expansion method to simplify  $F_3(s)$  of (3.23) below, and find the time domain function  $f_3(t)$  corresponding to  $F_3(s)$ .

$$F_3(s) = \frac{s+3}{s^3 + 5s^2 + 12s + 8} \quad (3.23)$$

---

<sup>\*</sup> A review of complex numbers is presented in Appendix B

---

## Chapter 3 The Inverse Laplace Transformation

---

### Solution:

Let us first express the denominator in factored form to identify the poles of  $F_3(s)$  using the MATLAB **factor(s)** function. Then,

```
syms s; factor(s^3 + 5*s^2 + 12*s + 8)
```

```
ans =  
(s+1)*(s^2+4*s+8)
```

The **factor(s)** function did not factor the quadratic term. We will use the **roots(p)** function.

```
p=[1 4 8]; roots_p=roots(p)
```

```
roots_p =  
-2.0000 + 2.0000i  
-2.0000 - 2.0000i
```

Then,

$$F_3(s) = \frac{s+3}{s^3+5s^2+12s+8} = \frac{s+3}{(s+1)(s+2+j2)(s+2-j2)}$$

$$F_3(s) = \frac{s+3}{s^3+5s^2+12s+8} = \frac{r_1}{(s+1)} + \frac{r_2}{(s+2+j2)} + \frac{r_2^*}{(s+2-j2)} \quad (3.24)$$

The residues are

$$r_1 = \left. \frac{s+3}{s^2+4s+8} \right|_{s=-1} = \frac{2}{5} \quad (3.25)$$

$$\begin{aligned} r_2 &= \left. \frac{s+3}{(s+1)(s+2-j2)} \right|_{s=-2-j2} = \frac{1-j2}{(-1-j2)(-j4)} = \frac{1-j2}{-8+j4} \\ &= \frac{(1-j2)(-8-j4)}{(-8+j4)(-8-j4)} = \frac{-16+j12}{80} = -\frac{1}{5} + \frac{j3}{20} \end{aligned} \quad (3.26)$$

$$r_2^* = \left(-\frac{1}{5} + \frac{j3}{20}\right)^* = -\frac{1}{5} - \frac{j3}{20} \quad (3.27)$$

By substitution into (3.24),

$$F_3(s) = \frac{2/5}{(s+1)} + \frac{-1/5+j3/20}{(s+2+j2)} + \frac{-1/5-j3/20}{(s+2-j2)} \quad (3.28)$$

The last two terms on the right side of (3.28), do not resemble any Laplace transform pair that we derived in Chapter 2. Therefore, we will express them in a different form. We combine them into a single term<sup>\*</sup>, and now (3.28) is written as

$$F_3(s) = \frac{2/5}{(s+1)} - \frac{1}{5} \cdot \frac{(2s+1)}{(s^2+4s+8)} \quad (3.29)$$

For convenience, we denote the first term on the right side of (3.29) as  $F_{31}(s)$ , and the second as  $F_{32}(s)$ . Then,

$$F_{31}(s) = \frac{2/5}{(s+1)} \Leftrightarrow \frac{2}{5}e^{-t} = f_{31}(t) \quad (3.30)$$

Next, for  $F_{32}(s)$

$$F_{32}(s) = -\frac{1}{5} \cdot \frac{(2s+1)}{(s^2+4s+8)} \quad (3.31)$$

and recalling that

$$\begin{aligned} e^{-at} \sin \omega t u_0 t &\Leftrightarrow \frac{\omega}{(s+a)^2 + \omega^2} \\ e^{-at} \cos \omega t u_0 t &\Leftrightarrow \frac{s+a}{(s+a)^2 + \omega^2} \end{aligned} \quad (3.32)$$

we express  $F_{32}(s)$  as

$$\begin{aligned} F_{32}(s) &= -\frac{2}{5} \left( \frac{s + \frac{1}{2} + \frac{3}{2} - \frac{3}{2}}{(s+2)^2 + 2^2} \right) = -\frac{2}{5} \left( \frac{s+2}{(s+2)^2 + 2^2} + \frac{-3/2}{(s+2)^2 + 2^2} \right) \\ &= -\frac{2}{5} \left( \frac{s+2}{(s+2)^2 + 2^2} \right) + \frac{6/10}{2} \left( \frac{2}{(s+2)^2 + 2^2} \right) \\ &= -\frac{2}{5} \left( \frac{s+2}{(s+2)^2 + 2^2} \right) + \frac{3}{10} \left( \frac{2}{(s+2)^2 + 2^2} \right) \end{aligned} \quad (3.33)$$

Addition of (3.30) with (3.33) yields

$$\begin{aligned} F_3(s) = F_{31}(s) + F_{32}(s) &= \frac{2/5}{(s+1)} - \frac{2}{5} \left( \frac{s+2}{(s+2)^2 + 2^2} \right) + \frac{3}{10} \left( \frac{2}{(s+2)^2 + 2^2} \right) \\ &\Leftrightarrow \frac{2}{5}e^{-t} - \frac{2}{5}e^{-2t} \cos 2t + \frac{3}{10}e^{-2t} \sin 2t = f_3(t) \end{aligned}$$

Check with MATLAB:

---

\* Here, we used MATLAB with `simple((-1/5 + 3j/20)/(s+2+2j) + (-1/5 - 3j/20)/(s+2-2j))`. The **simple** function, after several simplification tools that were displayed on the screen, returned `(-2*s-1)/(5*s^2+20*s+40)`

---

## Chapter 3 The Inverse Laplace Transformation

---

```
syms a s t w;          % Define several symbolic variables
Fs=(s + 3)/(s ^ 3 + 5*s ^ 2 + 12*s + 8); ft=ilaplace(Fs)
ft =
2/5*exp(-t) - 2/5*exp(-2*t) *cos(2*t)
+3/10*exp(-2*t) *sin(2*t)
```

### Case III: Multiple (Repeated) Poles

In this case,  $F(s)$  has simple poles, but one of the poles, say  $p_1$ , has a multiplicity  $m$ . For this condition, we express it as

$$F(s) = \frac{N(s)}{(s-p_1)^m (s-p_2)\dots(s-p_{n-1})(s-p_n)} \quad (3.34)$$

Denoting the  $m$  residues corresponding to multiple pole  $p_1$  as  $r_{11}, r_{12}, r_{13}, \dots, r_{1m}$ , the partial fraction expansion of (3.34) is written as

$$F(s) = \frac{r_{11}}{(s-p_1)^m} + \frac{r_{12}}{(s-p_1)^{m-1}} + \frac{r_{13}}{(s-p_1)^{m-2}} + \dots + \frac{r_{1m}}{(s-p_1)} \\ + \frac{r_2}{(s-p_2)} + \frac{r_3}{(s-p_3)} + \dots + \frac{r_n}{(s-p_n)} \quad (3.35)$$

For the simple poles  $p_1, p_2, \dots, p_n$ , we proceed as before, that is, we find the residues as

$$r_k = \lim_{s \rightarrow p_k} (s-p_k)F(s) = (s-p_k)F(s)\Big|_{s=p_k} \quad (3.36)$$

The residues  $r_{11}, r_{12}, r_{13}, \dots, r_{1m}$  corresponding to the repeated poles, are found by multiplication of both sides of (3.35) by  $(s-p)^m$ . Then,

$$(s-p_1)^m F(s) = r_{11} + (s-p_1)r_{12} + (s-p_1)^2 r_{13} + \dots + (s-p_1)^{m-1} r_{1m} \\ + (s-p_1)^m \left( \frac{r_2}{(s-p_2)} + \frac{r_3}{(s-p_3)} + \dots + \frac{r_n}{(s-p_n)} \right) \quad (3.37)$$

Next, taking the limit as  $s \rightarrow p_1$  on both sides of (3.37), we get

$$\lim_{s \rightarrow p_1} (s-p_1)^m F(s) = r_{11} + \lim_{s \rightarrow p_1} [(s-p_1)r_{12} + (s-p_1)^2 r_{13} + \dots + (s-p_1)^{m-1} r_{1m}] \\ + \lim_{s \rightarrow p_1} \left[ (s-p_1)^m \left( \frac{r_2}{(s-p_2)} + \frac{r_3}{(s-p_3)} + \dots + \frac{r_n}{(s-p_n)} \right) \right]$$

or

$$r_{11} = \lim_{s \rightarrow p_1} (s - p_1)^m F(s) \quad (3.38)$$

and thus (3.38) yields the residue of the first repeated pole.

The residue  $r_{12}$  for the second repeated pole  $p_1$ , is found by differentiating (3.37) with respect to  $s$  and again, we let  $s \rightarrow p_1$ , that is,

$$r_{12} = \lim_{s \rightarrow p_1} \frac{d}{ds} [(s - p_1)^m F(s)] \quad (3.39)$$

In general, the residue  $r_{1k}$  can be found from

$$(s - p_1)^m F(s) = r_{11} + r_{12}(s - p_1) + r_{13}(s - p_1)^2 + \dots \quad (3.40)$$

whose  $(m - 1)$ th derivative of both sides is

$$(k - 1)! r_{1k} = \lim_{s \rightarrow p_1} \frac{1}{(k - 1)!} \frac{d^{k-1}}{ds^{k-1}} [(s - p_1)^m F(s)] \quad (3.41)$$

or

$$r_{1k} = \lim_{s \rightarrow p_1} \frac{1}{(k - 1)!} \frac{d^{k-1}}{ds^{k-1}} [(s - p_1)^m F(s)] \quad (3.42)$$

### Example 3.4

Use the partial fraction expansion method to simplify  $F_4(s)$  of (3.43) below, and find the time domain function  $f_4(t)$  corresponding to  $F_4(s)$ .

$$F_4(s) = \frac{s + 3}{(s + 2)(s + 1)^2} \quad (3.43)$$

#### Solution:

We observe that there is a pole of multiplicity 2 at  $s = -1$ , and thus in partial fraction expansion form,  $F_4(s)$  is written as

$$F_4(s) = \frac{s + 3}{(s + 2)(s + 1)^2} = \frac{r_{11}}{(s + 2)} + \frac{r_{21}}{(s + 1)^2} + \frac{r_{22}}{(s + 1)} \quad (3.44)$$

The residues are

## Chapter 3 The Inverse Laplace Transformation

$$r_1 = \left. \frac{s+3}{(s+1)^2} \right|_{s=-2} = 1$$

$$r_{21} = \left. \frac{s+3}{s+2} \right|_{s=-1} = 2$$

$$r_{22} = \left. \frac{d}{ds} \left( \frac{s+3}{s+2} \right) \right|_{s=-1} = \left. \frac{(s+2) - (s+3)}{(s+2)^2} \right|_{s=-1} = -1$$

The value of the residue  $r_{22}$  can also be found without differentiation as follows:

Substitution of the already known values of  $r_1$  and  $r_{21}$  into (3.44), and letting  $s = 0^*$ , we get

$$\left. \frac{s+3}{(s+1)^2(s+2)} \right|_{s=0} = \left. \frac{1}{(s+2)} \right|_{s=0} + \left. \frac{2}{(s+1)^2} \right|_{s=0} + \left. \frac{r_{22}}{(s+1)} \right|_{s=0}$$

or

$$\frac{3}{2} = \frac{1}{2} + 2 + r_{22}$$

from which  $r_{22} = -1$  as before. Finally,

$$F_4(s) = \frac{s+3}{(s+2)(s+1)^2} = \frac{1}{(s+2)} + \frac{2}{(s+1)^2} + \frac{-1}{(s+1)} \Leftrightarrow e^{-2t} + 2te^{-t} - e^{-t} = f_4(t) \quad (3.45)$$

Check with MATLAB:

```
syms s t; Fs=(s+3)/((s+2)*(s+1)^2); ft=ilaplace(Fs)
```

```
ft = exp(-2*t)+2*t*exp(-t)-exp(-t)
```

We can use the following code to check the partial fraction expansion.

```
syms s
Ns = [1 3]; % Coefficients of the numerator N(s) of F(s)
expand((s+1)^2); % Expands (s+1)^2 to s^2 + 2*s + 1;
d1 = [1 2 1]; % Coefficients of (s+1)^2 = s^2 + 2*s + 1 term in D(s)
d2 = [0 1 2]; % Coefficients of (s+2) term in D(s)
Ds=conv(d1,d2); % Multiplies polynomials d1 and d2 to express the
% denominator D(s) of F(s) as a polynomial

[r,p,k]=residue(Ns,Ds)
```

\* This is permissible since (3.44) is an identity.



```

r =
    1.0000
   -1.0000
    2.0000
p =
   -2.0000
   -1.0000
   -1.0000
k =
    []

```

### Example 3.5

Use the partial fraction expansion method to simplify  $F_5(s)$  of (3.46) below, and find the time domain function  $f_5(t)$  corresponding to the given  $F_5(s)$ .

$$F_5(s) = \frac{s^2 + 3s + 1}{(s + 1)^3(s + 2)^2} \quad (3.46)$$

#### Solution:

We observe that there is a pole of multiplicity 3 at  $s = -1$ , and a pole of multiplicity 2 at  $s = -2$ . Then, in partial fraction expansion form,  $F_5(s)$  is written as

$$F_5(s) = \frac{r_{11}}{(s + 1)^3} + \frac{r_{12}}{(s + 1)^2} + \frac{r_{13}}{(s + 1)} + \frac{r_{21}}{(s + 2)^2} + \frac{r_{22}}{(s + 2)} \quad (3.47)$$

The residues are

$$\begin{aligned}
 r_{11} &= \left. \frac{s^2 + 3s + 1}{(s + 2)^2} \right|_{s = -1} = -1 \\
 r_{12} &= \left. \frac{d}{ds} \left( \frac{s^2 + 3s + 1}{(s + 2)^2} \right) \right|_{s = -1} \\
 &= \left. \frac{(s + 2)^2(2s + 3) - 2(s + 2)(s^2 + 3s + 1)}{(s + 2)^4} \right|_{s = -1} = \left. \frac{s + 4}{(s + 2)^3} \right|_{s = -1} = 3
 \end{aligned}$$

$$\begin{aligned}
 r_{13} &= \frac{1}{2!} \frac{d^2}{ds^2} \left( \frac{s^2 + 3s + 1}{(s+2)^2} \right) \Big|_{s=-1} = \frac{1}{2} \frac{d}{ds} \left[ \frac{d}{ds} \left( \frac{s^2 + 3s + 1}{(s+2)^2} \right) \right] \Big|_{s=-1} \\
 &= \frac{1}{2} \frac{d}{ds} \left( \frac{s+4}{(s+2)^3} \right) \Big|_{s=-1} = \frac{1}{2} \left[ \frac{(s+2)^3 - 3(s+2)^2(s+4)}{(s+2)^6} \right] \Big|_{s=-1} \\
 &= \frac{1}{2} \left( \frac{s+2-3s-12}{(s+2)^4} \right) \Big|_{s=-1} = \frac{-s-5}{(s+2)^4} \Big|_{s=-1} = -4
 \end{aligned}$$

Next, for the pole at  $s = -2$ ,

$$r_{21} = \frac{s^2 + 3s + 1}{(s+1)^3} \Big|_{s=-2} = 1$$

and

$$\begin{aligned}
 r_{22} &= \frac{d}{ds} \left( \frac{s^2 + 3s + 1}{(s+1)^3} \right) \Big|_{s=-2} = \frac{(s+1)^3(2s+3) - 3(s+1)^2(s^2 + 3s + 1)}{(s+1)^6} \Big|_{s=-2} \\
 &= \frac{(s+1)(2s+3) - 3(s^2 + 3s + 1)}{(s+1)^4} \Big|_{s=-2} = \frac{-s^2 - 4s}{(s+1)^4} \Big|_{s=-2} = 4
 \end{aligned}$$

By substitution of the residues into (3.47), we get

$$F_5(s) = \frac{-1}{(s+1)^3} + \frac{3}{(s+1)^2} + \frac{-4}{(s+1)} + \frac{1}{(s+2)^2} + \frac{4}{(s+2)} \quad (3.48)$$

We will check the values of these residues with the MATLAB code below.

```

syms s; % The function collect(s) below multiplies (s+1) ^ 3 by (s+2) ^ 2
% and we use it to express the denominator D(s) as a polynomial so that we can
% we can use the coefficients of the resulting polynomial with the residue function
Ds=collect(((s+1) ^ 3)*((s+2) ^ 2))
Ds =
s^5+7*s^4+19*s^3+25*s^2+16*s+4
Ns=[1 3 1]; Ds=[1 7 19 25 16 4]; [r,p,k]=residue(Ns,Ds)
r =
4.0000
1.0000
-4.0000
3.0000
-1.0000
    
```

```

p =
    -2.0000
    -2.0000
    -1.0000
    -1.0000
    -1.0000
k =
    []

```

From Table 2.2 of Chapter 2

$$e^{-at} \Leftrightarrow \frac{1}{s+a} \quad te^{-at} \Leftrightarrow \frac{1}{(s+a)^2} \quad t^{n-1}e^{-at} \Leftrightarrow \frac{(n-1)!}{(s+a)^n}$$

and with these, we derive  $f_5(t)$  from (3.48) as

$$f_5(t) = -\frac{1}{2}t^2e^{-t} + 3te^{-t} - 4e^{-t} + te^{-2t} + 4e^{-2t} \quad (3.49)$$

We can verify (3.49) with MATLAB as follows:

```

syms s t; Fs=-1/((s+1)^3) + 3/((s+1)^2) - 4/(s+1) + 1/((s+2)^2) + 4/(s+2);
ft=ilaplace(Fs)

ft = -1/2*t^2*exp(-t) + 3*t*exp(-t) - 4*exp(-t)
      + t*exp(-2*t) + 4*exp(-2*t)

```

### 3.3 Case for $m \geq n$

Our discussion thus far, was based on the condition that  $F(s)$  is a proper rational function. However, if  $F(s)$  is an improper rational function, that is, if  $m \geq n$ , we must first divide the numerator  $N(s)$  by the denominator  $D(s)$  to obtain an expression of the form

$$F(s) = k_0 + k_1s + k_2s^2 + \dots + k_{m-n}s^{m-n} + \frac{N(s)}{D(s)} \quad (3.50)$$

where  $N(s)/D(s)$  is a proper rational function.

#### Example 3.6

Derive the Inverse Laplace transform  $f_6(t)$  of

$$F_6(s) = \frac{s^2 + 2s + 2}{s + 1} \quad (3.51)$$

---

## Chapter 3 The Inverse Laplace Transformation

---

### Solution:

For this example,  $F_6(s)$  is an improper rational function. Therefore, we must express it in the form of (3.50) before we use the partial fraction expansion method.

By long division, we get

$$F_6(s) = \frac{s^2 + 2s + 2}{s + 1} = \frac{1}{s + 1} + 1 + s$$

Now, we recognize that

$$\frac{1}{s + 1} \Leftrightarrow e^{-t}$$

and

$$1 \Leftrightarrow \delta(t)$$

but

$$s \Leftrightarrow ?$$

To answer that question, we recall that

$$u_0'(t) = \delta(t)$$

and

$$u_0''(t) = \delta'(t)$$

where  $\delta'(t)$  is the doublet of the delta function. Also, by the time differentiation property

$$u_0''(t) = \delta'(t) \Leftrightarrow s^2 F(s) - sf(0) - f'(0) = s^2 F(s) = s^2 \cdot \frac{1}{s} = s$$

Therefore, we have the new transform pair

$$s \Leftrightarrow \delta'(t) \tag{3.52}$$

and thus,

$$F_6(s) = \frac{s^2 + 2s + 2}{s + 1} = \frac{1}{s + 1} + 1 + s \Leftrightarrow e^{-t} + \delta(t) + \delta'(t) = f_6(t) \tag{3.53}$$

In general,

$$\frac{d^n}{dt^n} \delta(t) \Leftrightarrow s^n \tag{3.54}$$

We verify (3.53) with MATLAB as follows:

```
Ns = [1 2 2]; Ds = [1 1]; [r, p, k] = residue(Ns, Ds)
```

```
r =  
    1
```

$$\begin{aligned}
 p &= \\
 &\quad -1 \\
 k &= \\
 &\quad 1 \quad 1
 \end{aligned}$$

Here, the direct terms  $k = [1 \ 1]$  are the coefficients of  $\delta(t)$  and  $\delta'(t)$  respectively.

### 3.4 Alternate Method of Partial Fraction Expansion

Partial fraction expansion can also be performed with the *method of clearing the fractions*, that is, making the denominators of both sides the same, then equating the numerators. As before, we assume that  $F(s)$  is a proper rational function. If not, we first perform a long division, and then work with the quotient and the remainder as we did in Example 3.6. We also assume that the denominator  $D(s)$  can be expressed as a product of real linear and quadratic factors. If these assumptions prevail, we let  $(s - a)$  be a linear factor of  $D(s)$ , and we assume that  $(s - a)^m$  is the highest power of  $(s - a)$  that divides  $D(s)$ . Then, we can express  $F(s)$  as

$$F(s) = \frac{N(s)}{D(s)} = \frac{r_1}{s - a} + \frac{r_2}{(s - a)^2} + \dots + \frac{r_m}{(s - a)^m} \quad (3.55)$$

Let  $s^2 + \alpha s + \beta$  be a quadratic factor of  $D(s)$ , and suppose that  $(s^2 + \alpha s + \beta)^n$  is the highest power of this factor that divides  $D(s)$ . Now, we perform the following steps:

1. To this factor, we assign the sum of  $n$  partial fractions, that is,

$$\frac{r_1 s + k_1}{s^2 + \alpha s + \beta} + \frac{r_2 s + k_2}{(s^2 + \alpha s + \beta)^2} + \dots + \frac{r_n s + k_n}{(s^2 + \alpha s + \beta)^n}$$

2. We repeat step 1 for each of the distinct linear and quadratic factors of  $D(s)$

3. We set the given  $F(s)$  equal to the sum of these partial fractions

4. We clear the resulting expression of fractions and arrange the terms in decreasing powers of  $s$

5. We equate the coefficients of corresponding powers of  $s$

6. We solve the resulting equations for the residues

#### Example 3.7

Express  $F_7(s)$  of (3.56) below as a sum of partial fractions using the method of clearing the fractions.

$$F_7(s) = \frac{-2s + 4}{(s^2 + 1)(s - 1)^2} \quad (3.56)$$

---

## Chapter 3 The Inverse Laplace Transformation

---

### Solution:

Using Steps 1 through 3 above, we get

$$F_7(s) = \frac{-2s + 4}{(s^2 + 1)(s - 1)^2} = \frac{r_1 s + A}{(s^2 + 1)} + \frac{r_{21}}{(s - 1)^2} + \frac{r_{22}}{(s - 1)} \quad (3.57)$$

With Step 4,

$$-2s + 4 = (r_1 s + A)(s - 1)^2 + r_{21}(s^2 + 1) + r_{22}(s - 1)(s^2 + 1) \quad (3.58)$$

and with Step 5,

$$\begin{aligned} -2s + 4 &= (r_1 + r_{22})s^3 + (-2r_1 + A - r_{22} + r_{21})s^2 \\ &\quad + (r_1 - 2A + r_{22})s + (A - r_{22} + r_{21}) \end{aligned} \quad (3.59)$$

Relation (3.59) will be an identity in  $s$  if each power of  $s$  is the same on both sides of this relation. Therefore, we equate like powers of  $s$  and we get

$$\begin{aligned} 0 &= r_1 + r_{22} \\ 0 &= -2r_1 + A - r_{22} + r_{21} \\ -2 &= r_1 - 2A + r_{22} \\ 4 &= A - r_{22} + r_{21} \end{aligned} \quad (3.60)$$

Subtracting the second equation of (3.60) from the fourth, we get

$$4 = 2r_1$$

or

$$r_1 = 2 \quad (3.61)$$

By substitution of (3.61) into the first equation of (3.60), we get

$$0 = 2 + r_{22}$$

or

$$r_{22} = -2 \quad (3.62)$$

Next, substitution of (3.61) and (3.62) into the third equation of (3.60) yields

$$-2 = 2 - 2A - 2$$

or

$$A = 1 \quad (3.63)$$

Finally by substitution of (3.61), (3.62), and (3.63) into the fourth equation of (3.60), we get

$$4 = 1 + 2 + r_{21}$$

or

$$r_{21} = 1 \quad (3.64)$$

Substitution of these values into (3.57) yields

$$F_7(s) = \frac{-2s + 4}{(s^2 + 1)(s - 1)^2} = \frac{2s + 1}{(s^2 + 1)} + \frac{1}{(s - 1)^2} - \frac{2}{(s - 1)} \quad (3.65)$$

### Example 3.8

Use partial fraction expansion to simplify  $F_8(s)$  of (3.66) below, and find the time domain function  $f_8(t)$  corresponding to  $F_8(s)$ .

$$F_8(s) = \frac{s + 3}{s^3 + 5s^2 + 12s + 8} \quad (3.66)$$

#### Solution:

This is the same transform as in Example 3.3, where we found that the denominator  $D(s)$  can be expressed in factored form of a linear term and a quadratic. Thus, we write  $F_8(s)$  as

$$F_8(s) = \frac{s + 3}{(s + 1)(s^2 + 4s + 8)} \quad (3.67)$$

and using the method of clearing the fractions, we rewrite (3.67) as

$$F_8(s) = \frac{s + 3}{(s + 1)(s^2 + 4s + 8)} = \frac{r_1}{s + 1} + \frac{r_2s + r_3}{s^2 + 4s + 8} \quad (3.68)$$

As in Example 3.3,

$$r_1 = \frac{s + 3}{s^2 + 4s + 8} \Big|_{s=-1} = \frac{2}{5} \quad (3.69)$$

Next, to compute  $r_2$  and  $r_3$ , we follow the procedure of this section and we get

$$(s + 3) = r_1(s^2 + 4s + 8) + (r_2s + r_3)(s + 1) \quad (3.70)$$

Since  $r_1$  is already known, we only need two equations in  $r_2$  and  $r_3$ . Equating the coefficient of  $s^2$  on the left side, which is zero, with the coefficients of  $s^2$  on the right side of (3.70), we get

$$0 = r_1 + r_2 \quad (3.71)$$

---

## Chapter 3 The Inverse Laplace Transformation

---

and since  $r_1 = 2/5$ , then  $r_2 = -2/5$ .

To obtain the third residue  $r_3$ , we equate the constant terms of (3.70). Then,  $3 = 8r_1 + r_3$  or  $3 = 8 \times 2/5 + r_3$ , or  $r_3 = -1/5$ . Then, by substitution into (3.68), we get

$$F_8(s) = \frac{2/5}{(s+1)} - \frac{1}{5} \cdot \frac{(2s+1)}{(s^2+4s+8)} \quad (3.72)$$

as before.

The remaining steps are the same as in Example 3.3, and thus  $f_8(t)$  is the same as  $f_3(t)$ , that is,

$$f_8(t) = f_3(t) = \left( \frac{2}{5}e^{-t} - \frac{2}{5}e^{-2t} \cos 2t + \frac{3}{10}e^{-2t} \sin 2t \right) u_0(t)$$

### 3.5 Summary

- The Inverse Laplace Transform Integral defined as

$$\mathcal{L}^{-1}\{F(s)\} = f(t) = \frac{1}{2\pi j} \int_{\sigma-j\omega}^{\sigma+j\omega} F(s)e^{st} ds$$

is difficult to evaluate because it requires contour integration using complex variables theory.

- For most engineering problems we can refer to Tables of Properties, and Common Laplace transform pairs to lookup the Inverse Laplace transform.
- The partial fraction expansion method offers a convenient means of expressing Laplace transforms in a recognizable form from which we can obtain the equivalent time-domain functions.
- If the highest power  $m$  of the numerator  $N(s)$  is less than the highest power  $n$  of the denominator  $D(s)$ , i.e.,  $m < n$ ,  $F(s)$  is said to be expressed as a proper rational function. If  $m \geq n$ ,  $F(s)$  is an improper rational function.
- The Laplace transform  $F(s)$  must be expressed as a proper rational function before applying the partial fraction expansion. If  $F(s)$  is an improper rational function, that is, if  $m \geq n$ , we must first divide the numerator  $N(s)$  by the denominator  $D(s)$  to obtain an expression of the form

$$F(s) = k_0 + k_1s + k_2s^2 + \dots + k_{m-n}s^{m-n} + \frac{N(s)}{D(s)}$$

- In a proper rational function, the roots of numerator  $N(s)$  are called the zeros of  $F(s)$  and the roots of the denominator  $D(s)$  are called the poles of  $F(s)$ .



- The partial fraction expansion method can be applied whether the poles of  $F(s)$  are distinct, complex conjugates, repeated, or a combination of these.
- When  $F(s)$  is expressed as

$$F(s) = \frac{r_1}{(s-p_1)} + \frac{r_2}{(s-p_2)} + \frac{r_3}{(s-p_3)} + \dots + \frac{r_n}{(s-p_n)}$$

$r_1, r_2, r_3, \dots, r_n$  are called the residues and  $p_1, p_2, p_3, \dots, p_n$  are the poles of  $F(s)$ .

- The residues and poles of a rational function of polynomials can be found easily using the MATLAB **residue(a,b)** function. The direct term is always empty (has no value) whenever  $F(s)$  is a proper rational function.
- We can use the MATLAB **factor(s)** symbolic function to convert the denominator polynomial form of  $F_2(s)$  into a factored form.
- We can use the MATLAB **collect(s)** and **expand(s)** symbolic functions to convert the denominator factored form of  $F_2(s)$  into a polynomial form.
- In this chapter we developed the new transform pair

$$s \Leftrightarrow \delta'(t)$$

and in general,

$$\frac{d^n}{dt^n} \delta(t) \Leftrightarrow s^n$$

- The method of clearing the fractions is an alternate method of partial fraction expansion.

### 3.6 Exercises

1. Find the Inverse Laplace transform of the following:

a.  $\frac{4}{s+3}$

b.  $\frac{4}{(s+3)^2}$

c.  $\frac{4}{(s+3)^4}$

d.  $\frac{3s+4}{(s+3)^5}$

e.  $\frac{s^2+6s+3}{(s+3)^5}$

2. Find the Inverse Laplace transform of the following:

a.  $\frac{3s+4}{s^2+4s+85}$

b.  $\frac{4s+5}{s^2+5s+18.5}$

c.  $\frac{s^2+3s+2}{s^3+5s^2+10.5s+9}$

d.  $\frac{s^2-16}{s^3+8s^2+24s+32}$

e.  $\frac{s+1}{s^3+6s^2+11s+6}$

3. Find the Inverse Laplace transform of the following:

a.  $\frac{3s+2}{s^2+25}$

b.  $\frac{5s^2+3}{(s^2+4)^2}$  (See hint on next page)

$$\text{Hint: } \left\{ \begin{array}{l} \frac{1}{2\alpha}(\sin\alpha t + \alpha t \cos\alpha t) \Leftrightarrow \frac{s^2}{(s^2 + \alpha^2)^2} \\ \frac{1}{2\alpha^3}(\sin\alpha t - \alpha t \cos\alpha t) \Leftrightarrow \frac{1}{(s^2 + \alpha^2)^2} \end{array} \right\}$$

c.  $\frac{2s + 3}{s^2 + 4.25s + 1}$

d.  $\frac{s^3 + 8s^2 + 24s + 32}{s^2 + 6s + 8}$

e.  $e^{-2s} \frac{3}{(2s + 3)^3}$

4. Use the Initial Value Theorem to find  $f(0)$  given that the Laplace transform of  $f(t)$  is

$$\frac{2s + 3}{s^2 + 4.25s + 1}$$

Compare your answer with that of Exercise 3(c).

5. It is known that the Laplace transform  $F(s)$  has two distinct poles, one at  $s = 0$ , the other at  $s = -1$ . It also has a single zero at  $s = 1$ , and we know that  $\lim_{t \rightarrow \infty} f(t) = 10$ . Find  $F(s)$  and  $f(t)$ .

## 3.7 Solutions to Exercises

1.

a.

$$\frac{4}{s+3} \Leftrightarrow 4e^{-3t} \quad \text{b.} \quad \frac{4}{(s+3)^2} \Leftrightarrow 4te^{-3t} \quad \text{c.} \quad \frac{4}{(s+3)^4} \Leftrightarrow \frac{4}{3!}t^3e^{-3t} = \frac{2}{3}t^3e^{-3t}$$

d.

$$\begin{aligned} \frac{3s+4}{(s+3)^5} &= \frac{3(s+4/3+5/3-5/3)}{(s+3)^5} = 3 \cdot \frac{(s+3)-5/3}{(s+3)^5} = 3 \cdot \frac{1}{(s+3)^4} - 5 \cdot \frac{1}{(s+3)^5} \\ &\Leftrightarrow \frac{3}{3!}t^3e^{-3t} - \frac{5}{4!}t^4e^{-3t} = \frac{1}{2} \left( t^3e^{-3t} - \frac{5}{12}t^4e^{-3t} \right) \end{aligned}$$

e.

$$\begin{aligned} \frac{s^2+6s+3}{(s+3)^5} &= \frac{s^2+6s+9-6}{(s+3)^5} = \frac{(s+3)^2-6}{(s+3)^5} = \frac{1}{(s+3)^3} - 6 \cdot \frac{1}{(s+3)^5} \\ &\Leftrightarrow \frac{1}{2!}t^2e^{-3t} - \frac{6}{4!}t^4e^{-3t} = \frac{1}{2} \left( t^2e^{-3t} - \frac{1}{2}t^4e^{-3t} \right) \end{aligned}$$

2.

a.

$$\begin{aligned} \frac{3s+4}{s^2+4s+85} &= \frac{3(s+4/3+2/3-2/3)}{(s+2)^2+81} = 3 \cdot \frac{(s+2)-2/3}{(s+2)^2+9^2} = 3 \cdot \frac{(s+2)}{(s+2)^2+9^2} - \frac{1}{9} \cdot \frac{2 \times 9}{(s+2)^2+9^2} \\ &= 3 \cdot \frac{(s+2)}{(s+2)^2+9^2} - \frac{2}{9} \cdot \frac{9}{(s+2)^2+9^2} \Leftrightarrow 3e^{-2t} \cos 9t - \frac{2}{9}e^{-2t} \sin 9t \end{aligned}$$

b.

$$\begin{aligned} \frac{4s+5}{s^2+5s+18.5} &= \frac{4s+5}{s^2+5s+6.25+12.25} = \frac{4s+5}{(s+2.5)^2+3.5^2} = 4 \cdot \frac{s+5/4}{(s+2.5)^2+3.5^2} \\ &= 4 \cdot \frac{s+10/4-10/4+5/4}{(s+2.5)^2+3.5^2} = 4 \cdot \frac{s+2.5}{(s+2.5)^2+3.5^2} - \frac{1}{3.5} \cdot \frac{5 \times 3.5}{(s+2.5)^2+3.5^2} \\ &= 4 \cdot \frac{(s+2.5)}{(s+2.5)^2+3.5^2} - \frac{10}{7} \cdot \frac{3.5}{(s+2.5)^2+3.5^2} \Leftrightarrow 4e^{-2.5t} \cos 3.5t - \frac{10}{7}e^{-2.5t} \sin 3.5t \end{aligned}$$

c. Using the MATLAB **factor(s)** function we get:

```
syms s; factor(s^2+3*s+2), factor(s^3+5*s^2+10.5*s+9)
```

```
ans = (s+2) * (s+1)
```

```
ans = 1/2 * (s+2) * (2*s^2+6*s+9)
```

Then,

$$\begin{aligned} \frac{s^2 + 3s + 2}{s^3 + 5s^2 + 10.5s + 9} &= \frac{(s+1)(s+2)}{(s+2)(s^2 + 3s + 4.5)} = \frac{(s+1)}{(s^2 + 3s + 4.5)} = \frac{s+1}{s^2 + 3s + 2.25 - 2.25 + 4.5} \\ &= \frac{s+1.5-1.5+1}{(s+1.5)^2 + (1.5)^2} = \frac{s+1.5}{(s+1.5)^2 + (1.5)^2} - \frac{1}{1.5} \cdot \frac{0.5 \times 1.5}{(s+1.5)^2 + (1.5)^2} \\ &= \frac{s+1.5}{(s+1.5)^2 + (1.5)^2} - \frac{1}{3} \cdot \frac{1.5}{(s+2.5)^2 + 3.5^2} \Leftrightarrow e^{-1.5t} \cos 1.5t - \frac{1}{3} e^{-1.5t} \sin 1.5t \end{aligned}$$

d.

$$\begin{aligned} \frac{s^2 - 16}{s^3 + 8s^2 + 24s + 32} &= \frac{(s+4)(s-4)}{(s+4)(s^2 + 4s + 8)} = \frac{(s-4)}{(s+2)^2 + 2^2} = \frac{s+2-2-4}{(s+2)^2 + 2^2} \\ &= \frac{s+2}{(s+2)^2 + 2^2} - \frac{1}{2} \cdot \frac{6 \times 2}{(s+2)^2 + 2^2} \\ &= \frac{s+2}{(s+2)^2 + 2^2} - 3 \cdot \frac{2}{(s+2)^2 + 2^2} \Leftrightarrow e^{-2t} \cos 2t - 3e^{-2t} \sin 2t \end{aligned}$$

e.

$$\begin{aligned} \frac{s+1}{s^3 + 6s^2 + 11s + 6} &= \frac{(s+1)}{(s+1)(s+2)(s+3)} = \frac{1}{(s+2)(s+3)} \\ &= \frac{1}{(s+2)(s+3)} = \frac{r_1}{s+2} + \frac{r_2}{s+3} \quad r_1 = \frac{1}{s+3} \Big|_{s=-2} = 1 \quad r_2 = \frac{1}{s+2} \Big|_{s=-3} = -1 \\ &= \frac{1}{(s+2)(s+3)} = \left[ \frac{1}{s+2} - \frac{1}{s+3} \right] \Leftrightarrow e^{-2t} - e^{-3t} \end{aligned}$$

3.

a.

$$\frac{3s+2}{s^2+25} = \frac{3s}{s^2+5^2} + \frac{1}{5} \cdot \frac{2 \times 5}{s^2+5^2} = 3 \cdot \frac{s}{s^2+5^2} + \frac{2}{5} \cdot \frac{5}{s^2+5^2} \Leftrightarrow 3 \cos 5t + \frac{2}{5} \sin 5t$$

b.

$$\begin{aligned} \frac{5s^2+3}{(s^2+4)^2} &= \frac{5s^2}{(s^2+2^2)^2} + \frac{3}{(s^2+2^2)^2} \Leftrightarrow 5 \cdot \frac{1}{2 \times 2} (\sin 2t + 2t \cos 2t) + 3 \cdot \frac{1}{2 \times 8} (\sin 2t - 2t \cos 2t) \\ &\Leftrightarrow \left( \frac{5}{4} + \frac{3}{16} \right) \sin 2t + \left( \frac{5}{4} - \frac{3}{16} \right) 2t \cos 2t = \frac{23}{16} \sin 2t + \frac{17}{8} t \cos 2t \end{aligned}$$

c.

$$\frac{2s+3}{s^2+4.25s+1} = \frac{2s+3}{(s+4)(s+1/4)} = \frac{r_1}{s+4} + \frac{r_2}{s+1/4}$$

$$r_1 = \left. \frac{2s+3}{s+1/4} \right|_{s=-4} = \frac{-5}{-15/4} = \frac{4}{3} \quad r_2 = \left. \frac{2s+3}{s+4} \right|_{s=-1/4} = \frac{5/2}{15/4} = \frac{2}{3}$$

$$\frac{4/3}{s+4} + \frac{2/3}{s+1/4} \Leftrightarrow \frac{2}{3}(2e^{-4t} + e^{-t/4})$$

d.

$$\frac{s^3+8s^2+24s+32}{s^2+6s+8} = \frac{(s+4)(s^2+4s+8)}{(s+2)(s+4)} = \frac{(s^2+4s+8)}{(s+2)} \quad \text{and by long division}$$

$$\frac{s^2+4s+8}{s+2} = s+2 + \frac{4}{s+2} \Leftrightarrow \delta'(t) + 2\delta(t) + 4e^{-2t}$$

e.

$$e^{-2s} \frac{3}{(2s+3)^3} \quad e^{-2s} F(s) \Leftrightarrow f(t-2)u_0(t-2)$$

$$F(s) = \frac{3}{(2s+3)^3} = \frac{3/2^3}{(2s+3)^3/2^3} = \frac{3/8}{[(2s+3)/2]^3} = \frac{3/8}{(s+3/2)^3} \Leftrightarrow \frac{3}{8} \left( \frac{1}{2!} t^2 e^{-(3/2)t} \right) = \frac{3}{16} t^2 e^{-(3/2)t}$$

$$e^{-2s} F(s) = e^{-2s} \frac{3}{(2s+3)^3} \Leftrightarrow \frac{3}{16} (t-2)^2 e^{-(3/2)(t-2)} u_0(t-2)$$

4. The initial value theorem states that  $\lim_{t \rightarrow 0} f(t) = \lim_{s \rightarrow \infty} sF(s)$ . Then,

$$\begin{aligned} f(0) &= \lim_{s \rightarrow \infty} s \frac{2s+3}{s^2+4.25s+1} = \lim_{s \rightarrow \infty} \frac{2s^2+3s}{s^2+4.25s+1} \\ &= \lim_{s \rightarrow \infty} \frac{2s^2/s^2+3s/s^2}{s^2/s^2+4.25s/s^2+1/s^2} = \lim_{s \rightarrow \infty} \frac{2+3/s}{1+4.25/s+1/s^2} = 2 \end{aligned}$$

The value  $f(0) = 2$  is the same as in the time domain expression that we found in Exercise 3(c).

5. We are given that  $F(s) = \frac{A(s-1)}{s(s+1)}$  and  $\lim_{t \rightarrow \infty} f(t) = \lim_{s \rightarrow 0} sF(s) = 10$ . Then,

$$\lim_{s \rightarrow 0} s \frac{A(s-1)}{s(s+1)} = A \lim_{s \rightarrow 0} \frac{(s-1)}{(s+1)} = -A = 10. \text{ Therefore,}$$

$$F(s) = \frac{-10(s-1)}{s(s+1)} = \frac{r_1}{s} + \frac{r_2}{s+1} = \frac{10}{s} - \frac{20}{s+1} \Leftrightarrow (10-20e^{-t})u_0(t), \text{ that is,}$$

$$f(t) = (10-20e^{-t})u_0(t) \text{ and we see that } \lim_{t \rightarrow \infty} f(t) = 10$$

This chapter presents applications of the Laplace transform. Several examples are given to illustrate how the Laplace transformation is applied to circuit analysis. Complex impedance, complex admittance, and transfer functions are also defined.

### 4.1 Circuit Transformation from Time to Complex Frequency

In this section we will derive the voltage-current relationships for the three basic passive circuit devices, i.e., resistors, inductors, and capacitors in the complex frequency domain.

#### a. Resistor

The time and complex frequency domains for purely resistive circuits are shown in Figure 4.1.

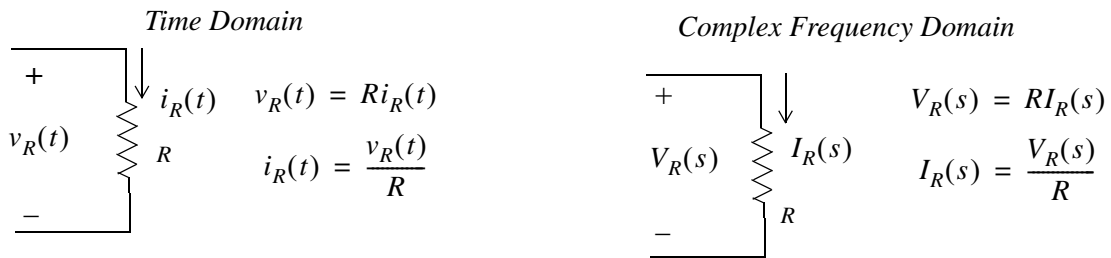


Figure 4.1. Resistive circuit in time domain and complex frequency domain

#### b. Inductor

The time and complex frequency domains for purely inductive circuits is shown in Figure 4.2.

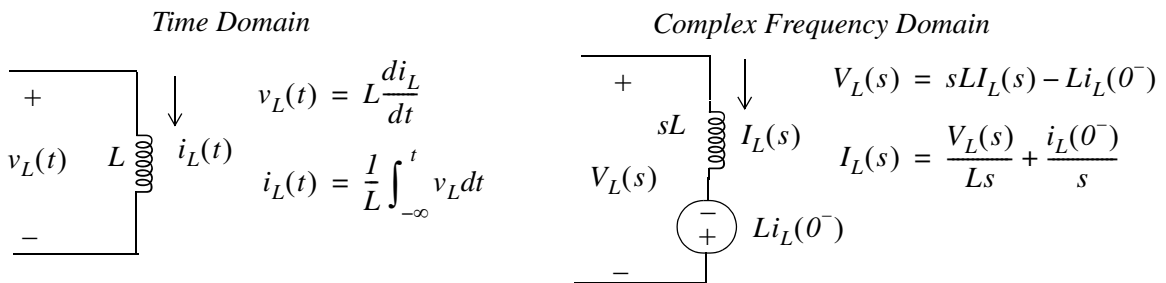


Figure 4.2. Inductive circuit in time domain and complex frequency domain

#### c. Capacitor

The time and complex frequency domains for purely capacitive circuits is shown in Figure 4.3.

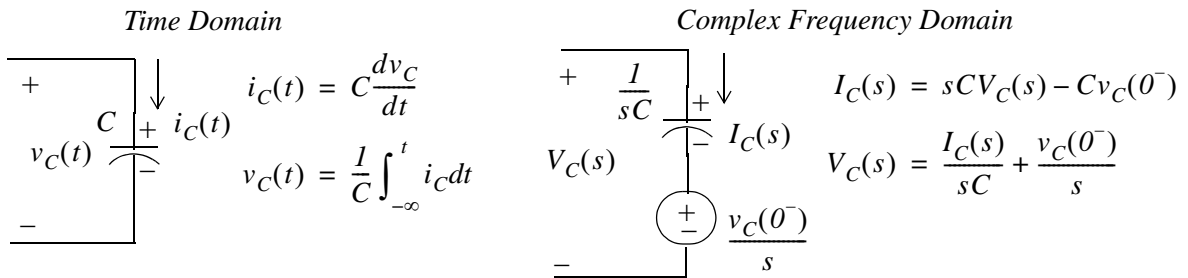


Figure 4.3. Capacitive circuit in time domain and complex frequency domain

**Note:**

In the complex frequency domain, the terms  $sL$  and  $1/sC$  are called *complex inductive impedance*, and *complex capacitive impedance* respectively. Likewise, the terms  $sC$  and  $1/sL$  are called *complex capacitive admittance* and *complex inductive admittance* respectively.

**Example 4.1**

Use the Laplace transform method to find the voltage  $v_C(t)$  across the capacitor for the circuit of Figure 4.4, given that  $v_C(0^-) = 6\text{ V}$ .

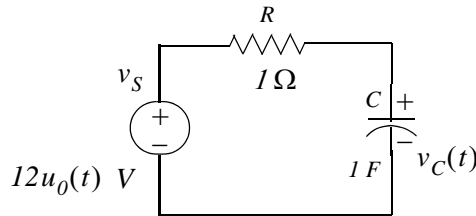


Figure 4.4. Circuit for Example 4.1

**Solution:**

We apply KCL at node A as shown in Figure 4.5.

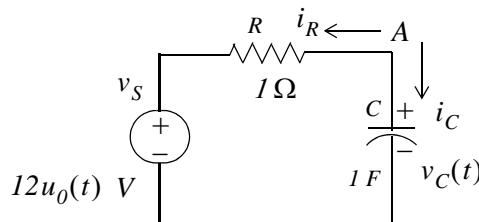


Figure 4.5. Application of KCL for the circuit of Example 4.1

Then,

$$i_R + i_C = 0$$

or



$$\frac{v_C(t) - 12u_0(t)}{1} + 1 \cdot \frac{dv_C}{dt} = 0$$

or

$$\frac{dv_C}{dt} + v_C(t) = 12u_0(t) \quad (4.1)$$

The Laplace transform of (4.1) is

$$sV_C(s) - v_C(0^-) + V_C(s) = \frac{12}{s}$$

or

$$(s + 1)V_C(s) = \frac{12}{s} + 6$$

or

$$V_C(s) = \frac{6s + 12}{s(s + 1)}$$

By partial fraction expansion,

$$V_C(s) = \frac{6s + 12}{s(s + 1)} = \frac{r_1}{s} + \frac{r_2}{(s + 1)}$$

$$r_1 = \left. \frac{6s + 12}{(s + 1)} \right|_{s=0} = 12$$

$$r_2 = \left. \frac{6s + 12}{s} \right|_{s=-1} = -6$$

Therefore,

$$V_C(s) = \frac{12}{s} - \frac{6}{s + 1} \Leftrightarrow 12 - 6e^{-t} = (12 - 6e^{-t})u_0(t) = v_C(t)$$

**Example 4.2**

Use the Laplace transform method to find the current  $i_C(t)$  through the capacitor for the circuit of Figure 4.6, given that  $v_C(0^-) = 6 \text{ V}$ .

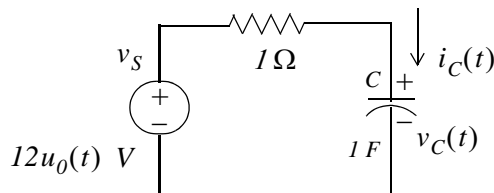


Figure 4.6. Circuit for Example 4.2

### Solution:

This is the same circuit as in Example 4.1. We apply KVL for the loop shown in Figure 4.7.

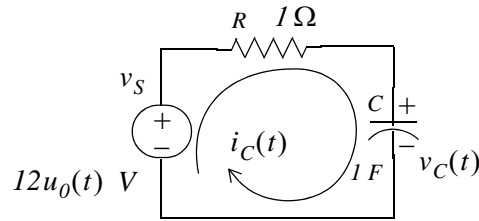


Figure 4.7. Application of KVL for the circuit of Example 4.2

$$Ri_C(t) + \frac{1}{C} \int_{-\infty}^t i_C(t) dt = 12u_0(t)$$

and with  $R = 1$  and  $C = 1$ , we get

$$i_C(t) + \int_{-\infty}^t i_C(t) dt = 12u_0(t) \quad (4.2)$$

Next, taking the Laplace transform of both sides of (4.2), we get

$$I_C(s) + \frac{I_C(s)}{s} + \frac{v_C(0^-)}{s} = \frac{12}{s}$$

$$\left(1 + \frac{1}{s}\right)I_C(s) = \frac{12}{s} - \frac{6}{s} = \frac{6}{s}$$

$$\left(\frac{s+1}{s}\right)I_C(s) = \frac{6}{s}$$

or

$$I_C(s) = \frac{6}{s+1} \Leftrightarrow i_C(t) = 6e^{-t}u_0(t)$$

**Check:** From Example 4.1,

$$v_C(t) = (12 - 6e^{-t})u_0(t)$$

Then,

$$i_C(t) = C \frac{dv_C}{dt} = \frac{dv_C}{dt} = \frac{d}{dt}(12 - 6e^{-t})u_0(t) = 6e^{-t}u_0(t) + 6\delta(t) \quad (4.3)$$

The presence of the delta function in (4.3) is a result of the unit step that is applied at  $t = 0$ .

**Example 4.3**

In the circuit of Figure 4.8, switch  $S_1$  closes at  $t = 0$ , while at the same time, switch  $S_2$  opens. Use the Laplace transform method to find  $v_{out}(t)$  for  $t > 0$ .

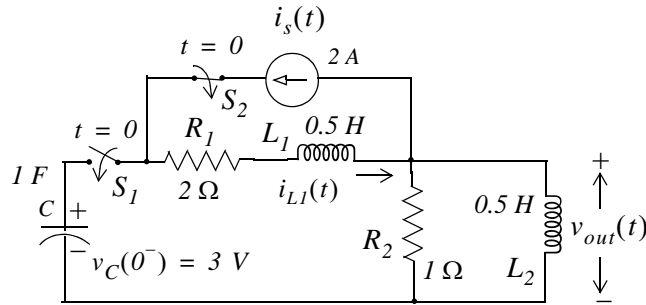


Figure 4.8. Circuit for Example 4.3

**Solution:**

Since the circuit contains a capacitor and an inductor, we must consider two initial conditions. One is given as  $v_C(0^-) = 3$  V. The other initial condition is obtained by observing that there is an initial current of 2 A in inductor  $L_1$ ; this is provided by the 2 A current source just before switch  $S_2$  opens. Therefore, our second initial condition is  $i_{L_1}(0^-) = 2$  A.

For  $t > 0$ , we transform the circuit of Figure 4.8 into its *s-domain*\* equivalent shown in Figure 4.9.

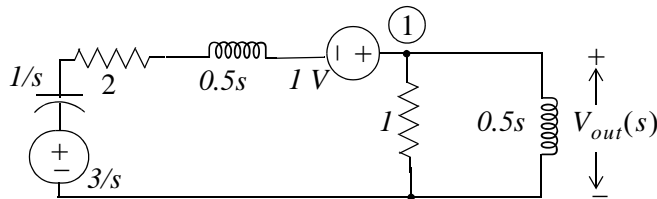


Figure 4.9. Transformed circuit of Example 4.3

In Figure 4.9 the current in  $L_1$  has been replaced by a voltage source of 1 V. This is found from the relation

$$L_1 i_{L_1}(0^-) = \frac{1}{2} \times 2 = 1 \text{ V} \tag{4.4}$$

The polarity of this voltage source is as shown in Figure 4.9 so that it is consistent with the direction of the current  $i_{L_1}(t)$  in the circuit of Figure 4.8 just before switch  $S_2$  opens.

\* Henceforth, for convenience, we will refer the time domain as *t-domain* and the complex frequency domain as *s-domain*

---

## Chapter 4 Circuit Analysis with Laplace Transforms

---

The initial capacitor voltage is replaced by a voltage source equal to  $3/s$ .

Applying KCL at node ①, we get

$$\frac{V_{out}(s) - 1 - 3/s}{1/s + 2 + s/2} + \frac{V_{out}(s)}{1} + \frac{V_{out}(s)}{s/2} = 0 \quad (4.5)$$

and after simplification

$$V_{out}(s) = \frac{2s(s+3)}{s^3 + 8s^2 + 10s + 4} \quad (4.6)$$

We will use MATLAB to factor the denominator  $D(s)$  of (4.6) into a linear and a quadratic factor.

```
p=[1 8 10 4]; r=roots(p) % Find the roots of D(s)
```

```
r =  
-6.5708  
-0.7146 + 0.3132i  
-0.7146 - 0.3132i
```

```
y=expand((s + 0.7146 - 0.3132j)*(s + 0.7146 + 0.3132j))% Find quadratic form
```

```
y =  
s^2+3573/2500*s+3043737/5000000
```

```
3573/2500 % Find coefficient of s
```

```
ans =  
1.4292
```

```
3043737/5000000 % Find constant term
```

```
ans =  
0.6087
```

Therefore,

$$V_{out}(s) = \frac{2s(s+3)}{s^3 + 8s^2 + 10s + 4} = \frac{2s(s+3)}{(s+6.57)(s^2 + 1.43s + 0.61)} \quad (4.7)$$

Now, we perform partial fraction expansion.

$$V_{out}(s) = \frac{2s(s+3)}{(s+6.57)(s^2 + 1.43s + 0.61)} = \frac{r_1}{s+6.57} + \frac{r_2 s + r_3}{s^2 + 1.43s + 0.61} \quad (4.8)$$

$$r_1 = \left. \frac{2s(s+3)}{s^2 + 1.43s + 0.61} \right|_{s=-6.57} = 1.36 \quad (4.9)$$

The residues  $r_2$  and  $r_3$  are found from the equality

$$2s(s+3) = r_1(s^2 + 1.43s + 0.61) + (r_2s + r_3)(s + 6.57) \quad (4.10)$$

Equating constant terms of (4.10), we get

$$0 = 0.61r_1 + 6.57r_3$$

and by substitution of the known value of  $r_1$  from (4.9), we get

$$r_3 = -0.12$$

Similarly, equating coefficients of  $s^2$ , we get

$$2 = r_1 + r_2$$

and using the known value of  $r_1$ , we get

$$r_2 = 0.64 \quad (4.11)$$

By substitution into (4.8),

$$V_{out}(s) = \frac{1.36}{s+6.57} + \frac{0.64s-0.12}{s^2+1.43s+0.61} = \frac{1.36}{s+6.57} + \frac{0.64s+0.46-0.58}{s^2+1.43s+0.51+0.1} *$$

or

$$\begin{aligned} V_{out}(s) &= \frac{1.36}{s+6.57} + (0.64) \frac{s+0.715-0.91}{(s+0.715)^2+(0.316)^2} \\ &= \frac{1.36}{s+6.57} + \frac{0.64(s+0.715)}{(s+0.715)^2+(0.316)^2} - \frac{0.58}{(s+0.715)^2+(0.316)^2} \\ &= \frac{1.36}{s+6.57} + \frac{0.64(s+0.715)}{(s+0.715)^2+(0.316)^2} - \frac{1.84 \times 0.316}{(s+0.715)^2+(0.316)^2} \end{aligned} \quad (4.12)$$

Taking the Inverse Laplace of (4.12), we get

$$v_{out}(t) = (1.36e^{-6.57t} + 0.64e^{-0.715t} \cos 0.316t - 1.84e^{-0.715t} \sin 0.316t)u_0(t) \quad (4.13)$$

---

\* We perform these steps to express the term  $\frac{0.64s-0.12}{s^2+1.43s+0.61}$  in a form that resembles the transform pairs

$e^{-at} \cos \omega t u_0(t) \Leftrightarrow \frac{s+a}{(s+a)^2 + \omega^2}$  and  $e^{-at} \sin \omega t u_0(t) \Leftrightarrow \frac{\omega}{(s+a)^2 + \omega^2}$ . The remaining steps are carried out in (4.12).

## 4.2 Complex Impedance $Z(s)$

Consider the  $s$ -domain RLC series circuit of Figure 4.10, where the initial conditions are assumed to be zero.

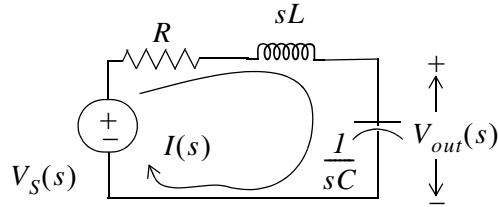


Figure 4.10. Series RLC circuit in  $s$ -domain

For this circuit, the sum  $R + sL + \frac{1}{sC}$  represents the total opposition to current flow. Then,

$$I(s) = \frac{V_S(s)}{R + sL + \frac{1}{sC}} \quad (4.14)$$

and defining the ratio  $V_S(s)/I(s)$  as  $Z(s)$ , we get

$$Z(s) \equiv \frac{V_S(s)}{I(s)} = R + sL + \frac{1}{sC} \quad (4.15)$$

and thus, the  $s$ -domain current  $I(s)$  can be found from

$$I(s) = \frac{V_S(s)}{Z(s)} \quad (4.16)$$

where

$$Z(s) = R + sL + \frac{1}{sC} \quad (4.17)$$

We recall that  $s = \sigma + j\omega$ . Therefore,  $Z(s)$  is a complex quantity, and it is referred to as the *complex input impedance* of an  $s$ -domain RLC series circuit. In other words,  $Z(s)$  is the ratio of the voltage excitation  $V_S(s)$  to the current response  $I(s)$  under *zero state* (zero initial conditions).

### Example 4.4

Find  $Z(s)$  for the circuit of Figure 4.11. All values are in  $\Omega$  (ohms).

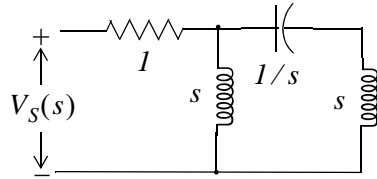


Figure 4.11. Circuit for Example 4.4

**Solution:**

First Method:

We will first find  $I(s)$ , and we will compute  $Z(s)$  from (4.15). We assign the voltage  $V_A(s)$  at node A as shown in Figure 4.12.

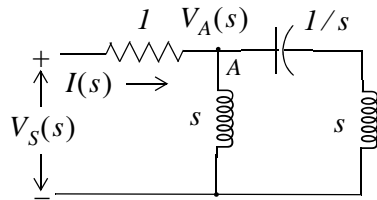


Figure 4.12. Circuit for finding  $I(s)$  in Example 4.4

By nodal analysis,

$$\frac{V_A(s) - V_S(s)}{1} + \frac{V_A(s)}{s} + \frac{V_A(s)}{s + 1/s} = 0$$

$$\left(1 + \frac{1}{s} + \frac{1}{s + 1/s}\right) V_A(s) = V_S(s)$$

$$V_A(s) = \frac{s^3 + 1}{s^3 + 2s^2 + s + 1} \cdot V_S(s)$$

The current  $I(s)$  is now found as

$$I(s) = \frac{V_S(s) - V_A(s)}{1} = \left(1 - \frac{s^3 + 1}{s^3 + 2s^2 + s + 1}\right) V_S(s) = \frac{2s^2 + 1}{s^3 + 2s^2 + s + 1} \cdot V_S(s)$$

and thus,

$$Z(s) = \frac{V_S(s)}{I(s)} = \frac{s^3 + 2s^2 + s + 1}{2s^2 + 1} \tag{4.18}$$

Second Method:

## Chapter 4 Circuit Analysis with Laplace Transforms

We can also compute  $Z(s)$  by successive combinations of series and parallel impedances, as it is done with series and parallel resistances. For this example, we denote the network devices as  $Z_1, Z_2, Z_3$  and  $Z_4$  shown in Figure 4.13.

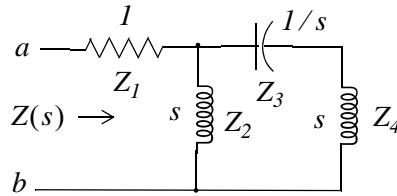


Figure 4.13. Computation of the impedance of Example 4.4 by series – parallel combinations

To find the equivalent impedance  $Z(s)$ , looking to the right of terminals  $a$  and  $b$ , we start on the right side of the network and we proceed to the left combining impedances as we combine resistances. Then,

$$Z(s) = [(Z_3 + Z_4) \parallel Z_2] + Z_1$$

$$Z(s) = \frac{s(s + 1/s)}{s + s + 1/s} + 1 = \frac{s^2 + 1}{(2s^2 + 1)/s} + 1 = \frac{s^3 + s}{2s^2 + 1} + 1 = \frac{s^3 + 2s^2 + s + 1}{2s^2 + 1} \quad (4.19)$$

We observe that (4.19) is the same as (4.18).

### 4.3 Complex Admittance $Y(s)$

Consider the  $s$  – domain GLC parallel circuit of Figure 4.14 where the initial conditions are zero.

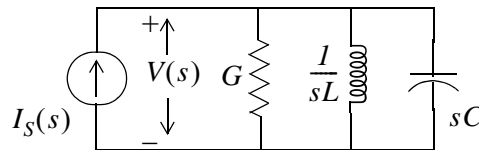


Figure 4.14. Parallel GLC circuit in  $s$ -domain

For this circuit,

$$GV(s) + \frac{1}{sL}V(s) + sCV(s) = I(s)$$

$$\left(G + \frac{1}{sL} + sC\right)(V(s)) = I(s)$$

Defining the ratio  $I_s(s)/V(s)$  as  $Y(s)$ , we get

$$Y(s) \equiv \frac{I(s)}{V(s)} = G + \frac{1}{sL} + sC = \frac{1}{Z(s)} \quad (4.20)$$



and thus the  $s$ -domain voltage  $V(s)$  can be found from

$$V(s) = \frac{I_S(s)}{Y(s)} \quad (4.21)$$

where

$$Y(s) = G + \frac{1}{sL} + sC \quad (4.22)$$

We recall that  $s = \sigma + j\omega$ . Therefore,  $Y(s)$  is a complex quantity, and it is referred to as the *complex input admittance* of an  $s$ -domain GLC parallel circuit. In other words,  $Y(s)$  is the ratio of the current excitation  $I_S(s)$  to the voltage response  $V(s)$  under *zero state* (zero initial conditions).

**Example 4.5**

Compute  $Z(s)$  and  $Y(s)$  for the circuit of Figure 4.15. All values are in  $\Omega$  (ohms). Verify your answers with MATLAB.

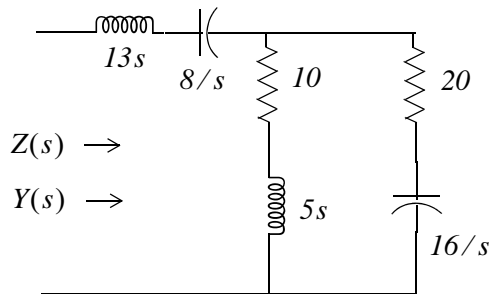


Figure 4.15. Circuit for Example 4.5

**Solution:**

It is convenient to represent the given circuit as shown in Figure 4.16.

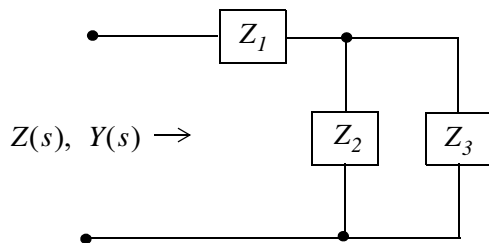


Figure 4.16. Simplified circuit for Example 4.5

where

$$Z_1 = 13s + \frac{8}{s} = \frac{13s^2 + 8}{s}$$

$$Z_2 = 10 + 5s$$

$$Z_3 = 20 + \frac{16}{s} = \frac{4(5s + 4)}{s}$$

Then,

$$\begin{aligned} Z(s) &= Z_1 + \frac{Z_2 Z_3}{Z_2 + Z_3} = \frac{13s^2 + 8}{s} + \frac{(10 + 5s) \left( \frac{4(5s + 4)}{s} \right)}{10 + 5s + \frac{4(5s + 4)}{s}} \\ &= \frac{13s^2 + 8}{s} + \frac{(10 + 5s) \left( \frac{4(5s + 4)}{s} \right)}{\frac{5s^2 + 10s + 4(5s + 4)}{s}} = \frac{13s^2 + 8}{s} + \frac{20(5s^2 + 14s + 8)}{5s^2 + 30s + 16} \\ &= \frac{65s^4 + 490s^3 + 528s^2 + 400s + 128}{s(5s^2 + 30s + 16)} \end{aligned}$$

Check with MATLAB:

```
syms s; z1 = 13*s + 8/s; z2 = 5*s + 10; z3 = 20 + 16/s; z = z1 + z2 * z3 / (z2+z3)
```

```
z =  
13*s+8/s+(5*s+10)*(20+16/s)/(5*s+30+16/s)
```

```
z10 = simplify(z)
```

```
z10 =  
(65*s^4+490*s^3+528*s^2+400*s+128)/s/(5*s^2+30*s+16)
```

```
pretty(z10)
```

$$\frac{65 s^4 + 490 s^3 + 528 s^2 + 400 s + 128}{s (5 s^2 + 30 s + 16)}$$

The complex input admittance  $Y(s)$  is found by taking the reciprocal of  $Z(s)$ , that is,

$$Y(s) = \frac{1}{Z(s)} = \frac{s(5s^2 + 30s + 16)}{65s^4 + 490s^3 + 528s^2 + 400s + 128} \quad (4.23)$$

### 4.4 Transfer Functions

In an  $s$ -domain circuit, the ratio of the output voltage  $V_{out}(s)$  to the input voltage  $V_{in}(s)$  under zero state conditions, is of great interest in network analysis. This ratio is referred to as the *voltage transfer function* and it is denoted as  $G_v(s)$ , that is,

$$G_v(s) \equiv \frac{V_{out}(s)}{V_{in}(s)} \tag{4.24}$$

Similarly, the ratio of the output current  $I_{out}(s)$  to the input current  $I_{in}(s)$  under zero state conditions, is called the *current transfer function* denoted as  $G_i(s)$ , that is,

$$G_i(s) \equiv \frac{I_{out}(s)}{I_{in}(s)} \tag{4.25}$$

The current transfer function of (4.25) is rarely used; therefore, from now on, the transfer function will have the meaning of the voltage transfer function, i.e.,

$$G(s) \equiv \frac{V_{out}(s)}{V_{in}(s)} \tag{4.26}$$

#### Example 4.6

Derive an expression for the transfer function  $G(s)$  for the circuit of Figure 4.17, where  $R_g$  represents the internal resistance of the applied (source) voltage  $V_s$ , and  $R_L$  represents the resistance of the load that consists of  $R_L$ ,  $L$ , and  $C$ .

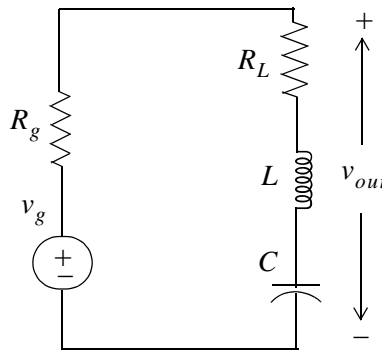


Figure 4.17. Circuit for Example 4.6

#### Solution:

No initial conditions are given, and even if they were, we would disregard them since the transfer function was defined as the ratio of the output voltage  $V_{out}(s)$  to the input voltage  $V_{in}(s)$  under

zero initial conditions. The  $s$  – domain circuit is shown in Figure 4.18.

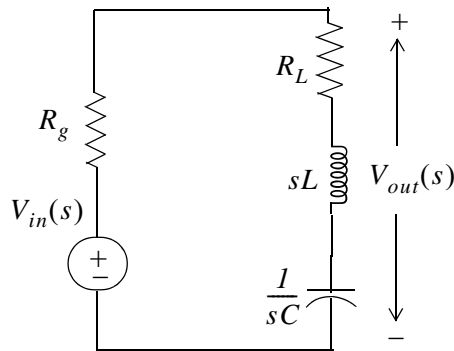


Figure 4.18. The  $s$ -domain circuit for Example 4.6

The transfer function  $G(s)$  is readily found by application of the voltage division expression of the  $s$  – domain circuit of Figure 4.18, i.e.,

$$V_{out}(s) = \frac{R_L + sL + 1/sC}{R_g + R_L + sL + 1/sC} V_{in}(s)$$

Then,

$$G(s) = \frac{V_{out}(s)}{V_{in}(s)} = \frac{R_L + Ls + 1/sC}{R_g + R_L + Ls + 1/sC} \quad (4.27)$$

### Example 4.7

Compute the transfer function  $G(s)$  for the circuit of Figure 4.19 in terms of the circuit constants  $R_1, R_2, R_3, C_1,$  and  $C_2$ . Then, replace the complex variable  $s$  with  $j\omega$ , and the circuit constants with their numerical values and plot the magnitude  $|G(s)| = V_{out}(s)/V_{in}(s)$  versus radian frequency  $\omega$ .

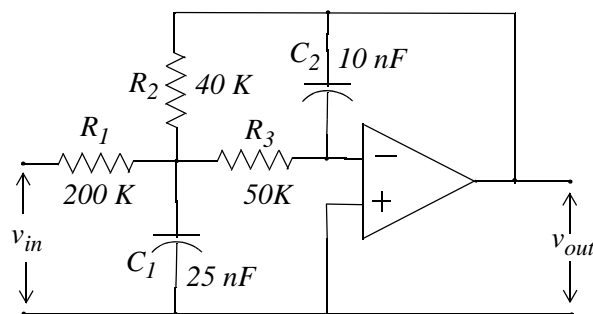


Figure 4.19. Circuit for Example 4.7

### Solution:

The complex frequency domain equivalent circuit is shown in Figure 4.20.

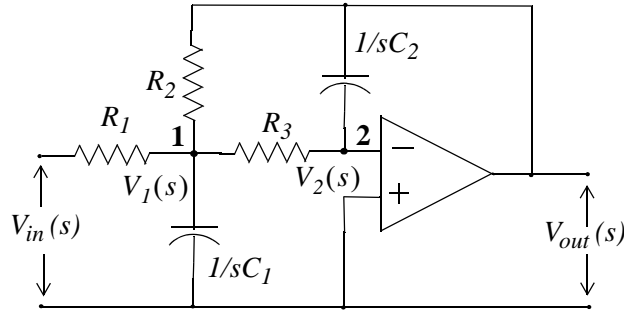


Figure 4.20. The  $s$ -domain circuit for Example 4.7

Next, we write nodal equations at nodes 1 and 2.

At node 1,

$$\frac{V_1(s) - V_{in}(s)}{R_1} + \frac{V_1}{1/sC_1} + \frac{V_1(s) - V_{out}(s)}{R_2} + \frac{V_1(s) - V_2(s)}{R_3} = 0 \quad (4.28)$$

At node 2,

$$\frac{V_2(s) - V_1(s)}{R_3} = \frac{V_{out}(s)}{1/sC_2} \quad (4.29)$$

Since  $V_2(s) = 0$  (virtual ground), we express (4.29) as

$$V_1(s) = (-sR_3C_2)V_{out}(s) \quad (4.30)$$

and by substitution of (4.30) into (4.28), rearranging, and collecting like terms, we get:

$$\left[ \left( \frac{1}{R_1} + \frac{1}{R_2} + \frac{1}{R_3} + sC_1 \right) (-sR_3C_2) - \frac{1}{R_2} \right] V_{out}(s) = \frac{1}{R_1} V_{in}(s)$$

or

$$G(s) = \frac{V_{out}(s)}{V_{in}(s)} = \frac{-1}{R_1 \left[ \left( \frac{1}{R_1} + \frac{1}{R_2} + \frac{1}{R_3} + sC_1 \right) (sR_3C_2) + \frac{1}{R_2} \right]} \quad (4.31)$$

By substitution of  $s$  with  $j\omega$  and the given values for resistors and capacitors, we get

$$G(j\omega) = \frac{-1}{2 \times 10^5 \left[ \left( \frac{1}{20 \times 10^3} + j2.5 \times 10^{-8} \omega \right) (j5 \times 10^4 \times 10^{-8} \omega) + \frac{1}{4 \times 10^4} \right]}$$

or

$$G(j\omega) = \frac{V_{out}(j\omega)}{V_{in}(j\omega)} = \frac{-1}{2.5 \times 10^{-6} \omega^2 - j5 \times 10^{-3} \omega + 5} \quad (4.32)$$

We use MATLAB to plot the magnitude of (4.32) on a semilog scale with the following code:

```
w=1:10:10000; Gs=-1./(2.5.*10.^(-6).*w.^2-5.*j.*10.^(-3).*w+5);  
semilogx(w,abs(Gs)); grid; hold on  
xlabel('Radian Frequency w'); ylabel('|Vout/Vin|');  
title('Magnitude Vout/Vin vs. Radian Frequency')
```

The plot is shown in Figure 4.21. We observe that the given op amp circuit is a second order low-pass filter whose cutoff frequency ( $-3 \text{ dB}$ ) occurs at about  $700 \text{ r/s}$ .

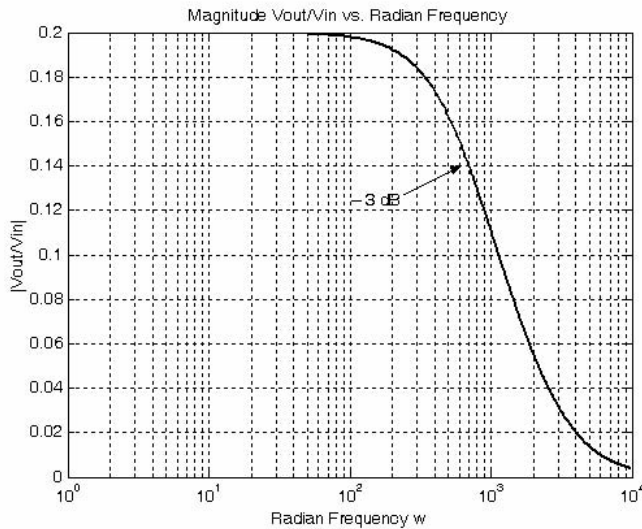


Figure 4.21.  $|G(j\omega)|$  versus  $\omega$  for the circuit of Example 4.7

## 4.5 Summary

- The Laplace transformation provides a convenient method of analyzing electric circuits since integrodifferential equations in the  $t$ -domain are transformed to algebraic equations in the  $s$ -domain.
- In the  $s$ -domain the terms  $sL$  and  $1/sC$  are called complex inductive impedance, and complex capacitive impedance respectively. Likewise, the terms  $sC$  and  $1/sL$  are called complex capacitive admittance and complex inductive admittance respectively.
- The expression

$$Z(s) = R + sL + \frac{1}{sC}$$

is a complex quantity, and it is referred to as the complex input impedance of an  $s$ -domain  $RLC$  series circuit.

- In the  $s$ -domain the current  $I(s)$  can be found from

$$I(s) = \frac{V_s(s)}{Z(s)}$$

- The expression

$$Y(s) = G + \frac{1}{sL} + sC$$

is a complex quantity, and it is referred to as the complex input admittance of an  $s$ -domain  $GLC$  parallel circuit.

- In the  $s$ -domain the voltage  $V(s)$  can be found from

$$V(s) = \frac{I_s(s)}{Y(s)}$$

- In an  $s$ -domain circuit, the ratio of the output voltage  $V_{out}(s)$  to the input voltage  $V_{in}(s)$  under zero state conditions is referred to as the voltage transfer function and it is denoted as  $G(s)$ , that is,

$$G(s) \equiv \frac{V_{out}(s)}{V_{in}(s)}$$

## 4.6 Exercises

1. In the circuit of Figure 4.22, switch  $S$  has been closed for a long time, and opens at  $t = 0$ . Use the Laplace transform method to compute  $i_L(t)$  for  $t > 0$ .

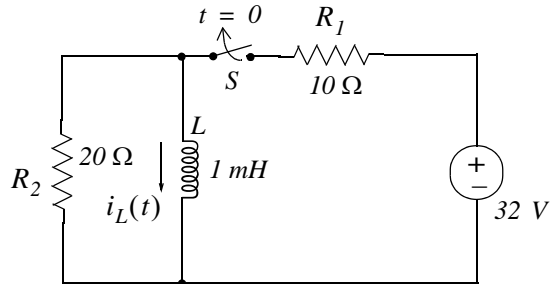


Figure 4.22. Circuit for Exercise 1

2. In the circuit of Figure 4.23, switch  $S$  has been closed for a long time, and opens at  $t = 0$ . Use the Laplace transform method to compute  $v_C(t)$  for  $t > 0$ .

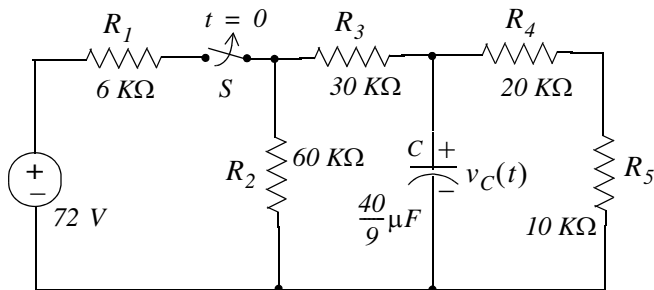


Figure 4.23. Circuit for Exercise 2

3. Use mesh analysis and the Laplace transform method, to compute  $i_1(t)$  and  $i_2(t)$  for the circuit of Figure 4.24, given that  $i_L(0^-) = 0$  and  $v_C(0^-) = 0$ .

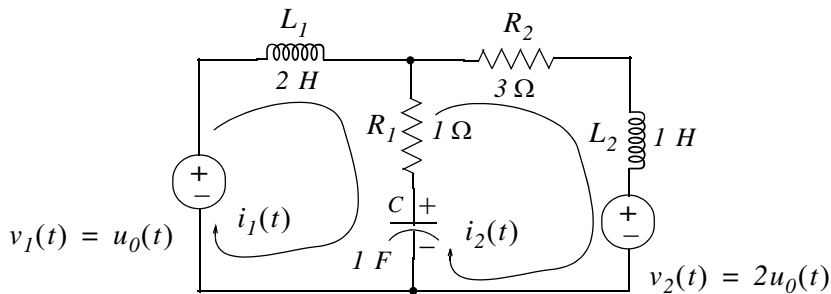


Figure 4.24. Circuit for Exercise 3



4. For the  $s$ -domain circuit of Figure 4.25,
- compute the admittance  $Y(s) = I_1(s)/V_1(s)$
  - compute the  $t$ -domain value of  $i_1(t)$  when  $v_1(t) = u_0(t)$ , and all initial conditions are zero.

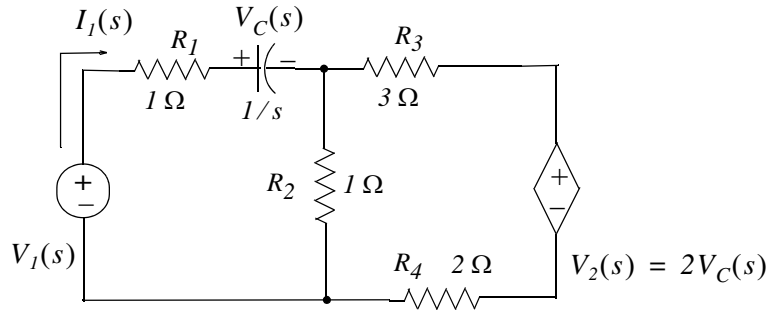


Figure 4.25. Circuit for Exercise 4

5. Derive the transfer functions for the networks (a) and (b) of Figure 4.26.

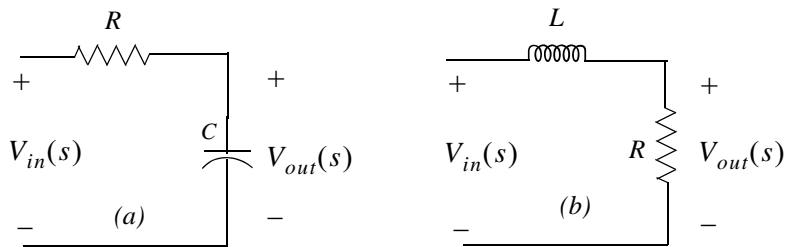


Figure 4.26. Networks for Exercise 5

6. Derive the transfer functions for the networks (a) and (b) of Figure 4.27.

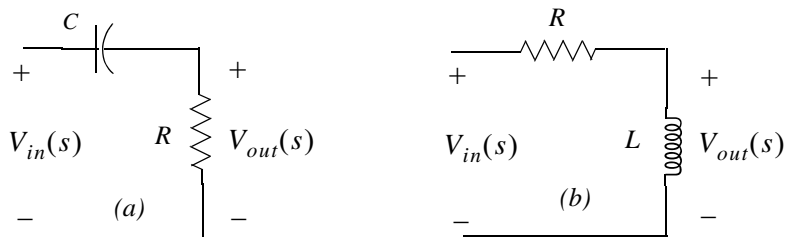


Figure 4.27. Networks for Exercise 6

7. Derive the transfer functions for the networks (a) and (b) of Figure 4.28.

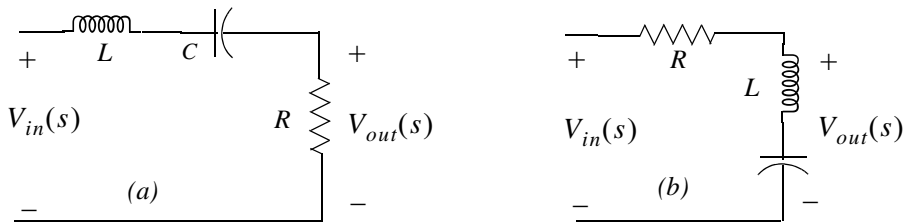


Figure 4.28. Networks for Exercise 7

8. Derive the transfer function for the networks (a) and (b) of Figure 4.29.

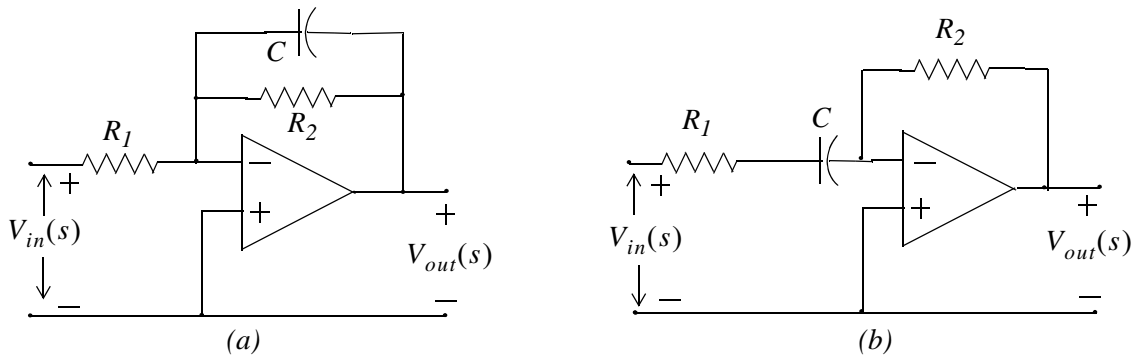


Figure 4.29. Networks for Exercise 8

9. Derive the transfer function for the network of Figure 4.30. Using MATLAB, plot  $|G(s)|$  versus frequency in Hertz, on a semilog scale.

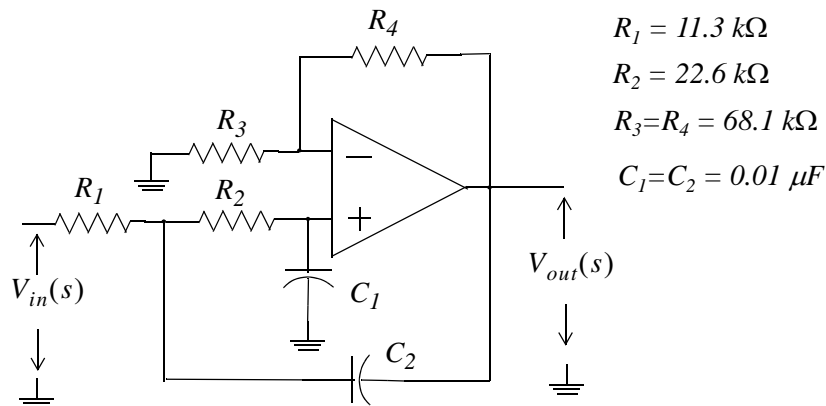
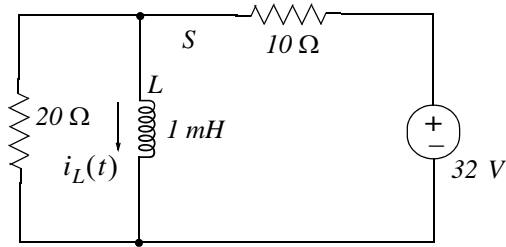


Figure 4.30. Network for Exercise 9

## 4.7 Solutions to Exercises

1. At  $t = 0^-$  the  $t$ -domain circuit is as shown below and the  $20\ \Omega$  resistor is shorted out by the inductor.

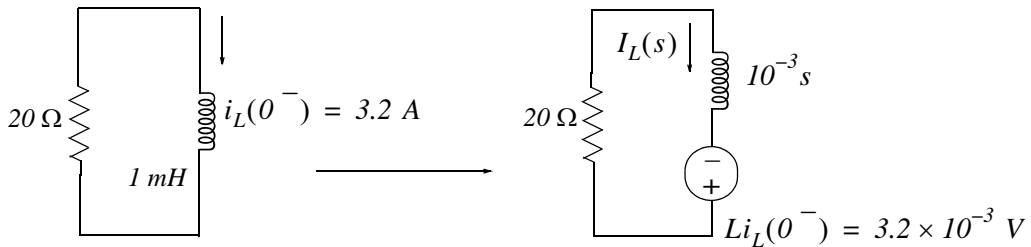


Then,

$$i_L(t)\Big|_{t=0^-} = \frac{32}{10} = 3.2\text{ A}$$

and thus the initial condition has been established as  $i_L(0^-) = 3.2\text{ A}$

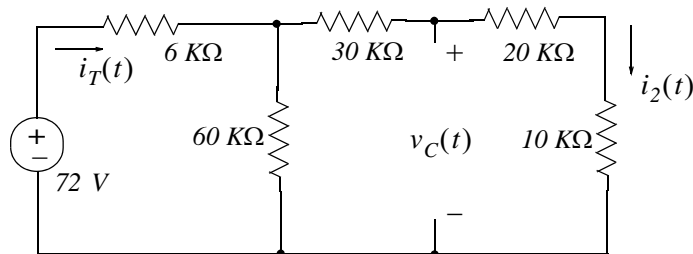
For all  $t > 0$  the  $t$ -domain and  $s$ -domain circuits are as shown below.



From the  $s$ -domain circuit above we get

$$I_L(s) = \frac{3.2 \times 10^{-3}}{20 + 10^{-3}s} = \frac{3.2}{s + 20000} \Leftrightarrow 3.2e^{-20000t}u_0(t) = i_L(t)$$

2. At  $t = 0^-$  the  $t$ -domain circuit is as shown below.



Then,

$$i_T(0^-) = \frac{72 \text{ V}}{6 \text{ K}\Omega + 60 \text{ K}\Omega \parallel 60 \text{ K}\Omega} = \frac{72 \text{ V}}{6 \text{ K}\Omega + 30 \text{ K}\Omega} = \frac{72 \text{ V}}{36 \text{ K}\Omega} = 2 \text{ mA}$$

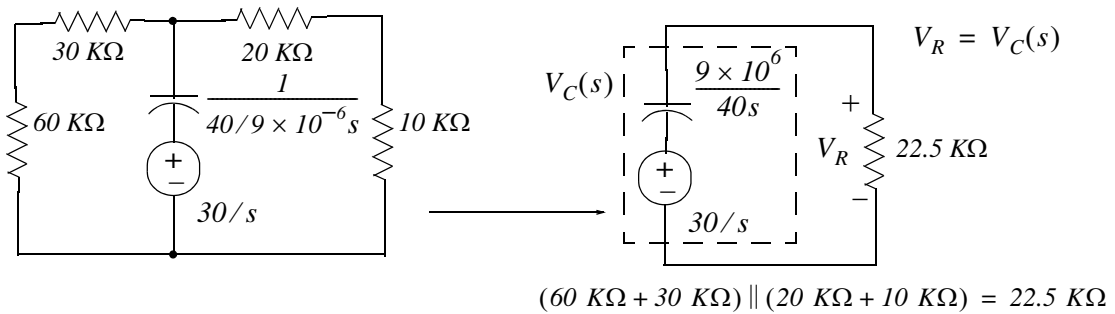
and

$$i_2(0^-) = \frac{1}{2}i_T(0^-) = 1 \text{ mA}$$

Therefore, the initial condition is

$$v_C(0^-) = (20 \text{ K}\Omega + 10 \text{ K}\Omega) \cdot i_2(0^-) = (30 \text{ K}\Omega) \cdot (1 \text{ mA}) = 30 \text{ V}$$

For all  $t > 0$  the  $s$ -domain circuit is as shown below.



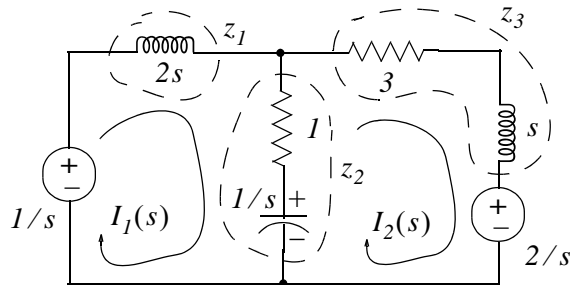
$$V_C(s) = V_R = \frac{22.5 \times 10^3}{9 \times 10^6 / 40s + 22.5 \times 10^3} \cdot \frac{30}{s} = \frac{30 \times 22.5 \times 10^3}{9 \times 10^6 / 40 + 22.5 \times 10^3 s}$$

$$= \frac{(30 \times 22.5 \times 10^3) / (22.5 \times 10^3)}{9 \times 10^6 / (40 \times 22.5 \times 10^3) + s} = \frac{30}{9 \times 10^6 / 90 \times 10^4 + s} = \frac{30}{10 + s}$$

Then,

$$V_C(s) = \frac{30}{s + 10} \Leftrightarrow 30e^{-10t} u_0(t) \text{ V} = v_C(t)$$

3. The  $s$ -domain circuit is shown below where  $z_1 = 2s$ ,  $z_2 = 1 + 1/s$ , and  $z_3 = s + 3$



Then,

$$\begin{aligned}(z_1 + z_2)I_1(s) - z_2I_2(s) &= 1/s \\ -z_2I_1(s) + (z_2 + z_3)I_2(s) &= -2/s\end{aligned}$$

and in matrix form

$$\begin{bmatrix} z_1 + z_2 & -z_2 \\ -z_2 & z_2 + z_3 \end{bmatrix} \cdot \begin{bmatrix} I_1(s) \\ I_2(s) \end{bmatrix} = \begin{bmatrix} 1/s \\ -2/s \end{bmatrix}$$

Using MATLAB we get

```
Z=[z1+z2 -z2; -z2 z2+z3]; Vs=[1/s -2/s]'; Is=Z\Vs; fprintf(' \n');...
disp('Is1 = '); pretty(Is(1)); disp('Is2 = '); pretty(Is(2))
```

Is1 =

$$\frac{s^2 - 2s + 1}{(6s^3 + 9s^2 + 3s + 2) \operatorname{conj}(s)}$$

Is2 =

$$-\frac{4s^2 + s + 1}{(6s^3 + 9s^2 + 3s + 2) \operatorname{conj}(s)}$$

Therefore,

$$I_1(s) = \frac{s^2 + 2s - 1}{2s^3 + 9s^2 + 6s + 3} \quad (1)$$

$$I_2(s) = -\frac{4s^2 + s + 1}{2s^3 + 9s^2 + 6s + 3} \quad (2)$$

We express the denominator of (1) as a product of a linear and quadratic term using MATLAB.

```
p=[2 9 6 3]; r=roots(p); fprintf(' \n'); disp('root1 ='); disp(r(1));...
disp('root2 ='); disp(r(2)); disp('root3 ='); disp(r(3)); disp('root2 + root3 =');
disp(r(2)+r(3));...
disp('root2 * root3 ='); disp(r(2)*r(3))
```

```
root1 =
-3.8170
```

```
root2 =  
    -0.3415 + 0.5257i  
root3 =  
    -0.3415 - 0.5257i  
root2 + root3 =  
    -0.6830  
root2 * root3 =  
    0.3930
```

and with these values (1) is written as

$$I_1(s) = \frac{s^2 + 2s - 1}{(s + 3.817) \cdot (s^2 + 0.683s + 0.393)} = \frac{r_1}{(s + 3.817)} + \frac{r_2s + r_3}{(s^2 + 0.683s + 0.393)} \quad (3)$$

Multiplying every term by the denominator and equating numerators we get

$$s^2 + 2s - 1 = r_1(s^2 + 0.683s + 0.393) + (r_2s + r_3)(s + 3.817)$$

Equating  $s^2$ ,  $s$ , and constant terms we get

$$\begin{aligned} r_1 + r_2 &= 1 \\ 0.683r_1 + 3.817r_2 + r_3 &= 2 \\ 0.393r_1 + 3.817r_3 &= -1 \end{aligned}$$

We will use MATLAB to find these residues.

```
A=[1 1 0; 0.683 3.817 1; 0.393 0 3.817]; B=[1 2 -1]'; r=A\B; fprintf(' \n');...  
fprintf('r1 = %5.2f \t',r(1)); fprintf('r2 = %5.2f \t',r(2)); fprintf('r3 = %5.2f',r(3))  
r1 = 0.48    r2 = 0.52    r3 = -0.31
```

By substitution of these values into (3) we get

$$I_1(s) = \frac{r_1}{(s + 3.817)} + \frac{r_2s + r_3}{(s^2 + 0.683s + 0.393)} = \frac{0.48}{(s + 3.817)} + \frac{0.52s - 0.31}{(s^2 + 0.683s + 0.393)} \quad (4)$$

By inspection, the Inverse Laplace of first term on the right side of (4) is

$$\frac{0.48}{(s + 3.82)} \Leftrightarrow 0.48e^{-3.82t} \quad (5)$$

The second term on the right side of (4) requires some manipulation. Therefore, we will use the MATLAB **ilaplace(s)** function to find the Inverse Laplace as shown below.

```
syms s t
```

```
IL=ilaplace((0.52*s-0.31)/(s^2+0.68*s+0.39));
```

```
pretty(IL)
```

$$- \frac{1217}{4900} \exp\left(-\frac{17}{50}t\right) \frac{1}{14} \sin\left(\frac{7}{50} \frac{1}{14} t\right)$$

$$+ \frac{13}{25} \exp\left(-\frac{17}{50}t\right) \frac{1}{14} \cos\left(\frac{7}{50} \frac{1}{14} t\right)$$

Thus,

$$i_1(t) = 0.48e^{-3.82t} - 0.93e^{-0.34t} \sin 0.53t + 0.52e^{-0.34t} \cos 0.53t$$

Next, we will find  $I_2(s)$ . We found earlier that

$$I_2(s) = -\frac{4s^2 + s + 1}{2s^3 + 9s^2 + 6s + 3}$$

and following the same procedure we have

$$I_2(s) = \frac{-4s^2 - s - 1}{(s + 3.817) \cdot (s^2 + 0.683s + 0.393)} = \frac{r_1}{(s + 3.817)} + \frac{r_2s + r_3}{(s^2 + 0.683s + 0.393)} \quad (6)$$

Multiplying every term by the denominator and equating numerators we get

$$-4s^2 - s - 1 = r_1(s^2 + 0.683s + 0.393) + (r_2s + r_3)(s + 3.817)$$

Equating  $s^2$ ,  $s$ , and constant terms we get

$$\begin{aligned} r_1 + r_2 &= -4 \\ 0.683r_1 + 3.817r_2 + r_3 &= -1 \\ 0.393r_1 + 3.817r_3 &= -1 \end{aligned}$$

We will use MATLAB to find these residues.

```
A=[1 1 0; 0.683 3.817 1; 0.393 0 3.817]; B=[-4 -1 -1]'; r=A\B; fprintf('\n');...
fprintf('r1 = %5.2f \t',r(1)); fprintf('r2 = %5.2f \t',r(2)); fprintf('r3 = %5.2f',r(3))
```

```
r1 = -4.49    r2 = 0.49    r3 = 0.20
```

By substitution of these values into (6) we get

$$I_1(s) = \frac{r_1}{(s + 3.817)} + \frac{r_2s + r_3}{(s^2 + 0.683s + 0.393)} = \frac{-4.49}{(s + 3.817)} + \frac{0.49s + 0.20}{(s^2 + 0.683s + 0.393)} \quad (7)$$

## Chapter 4 Circuit Analysis with Laplace Transforms

By inspection, the Inverse Laplace of first term on the right side of (7) is

$$\frac{0.48}{(s + 3.82)} \Leftrightarrow -4.47e^{-3.82t} \quad (8)$$

The second term on the right side of (7) requires some manipulation. Therefore, we will use the MATLAB **ilaplace(s)** function to find the Inverse Laplace as shown below.

syms s t

IL=ilaplace((0.49\*s+0.20)/(s^2+0.68\*s+0.39)); pretty(IL)

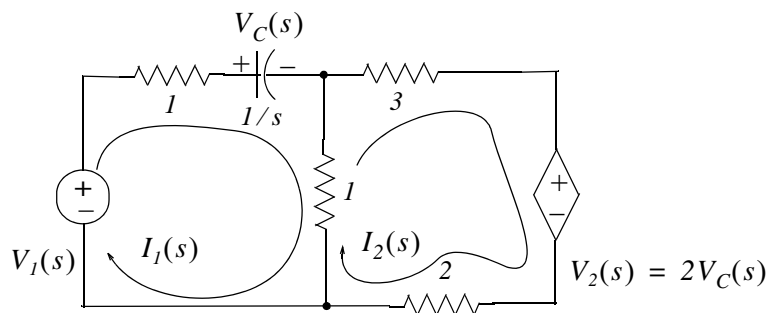
$$\frac{167}{9800} \exp\left(-\frac{17}{50}t\right) \frac{1}{14} \sin\left(\frac{7}{50}t\right) \frac{1}{14} t$$

$$+ \frac{49}{100} \exp\left(-\frac{17}{50}t\right) \cos\left(\frac{7}{50}t\right) \frac{1}{14} t$$

Thus,

$$i_2(t) = -4.47e^{-3.82t} + 0.06e^{-0.34t} \sin 0.53t + 0.49e^{-0.34t} \cos 0.53t$$

4.



a. Mesh 1:

$$(2 + 1/s) \cdot I_1(s) - I_2(s) = V_1(s)$$

or

$$6(2 + 1/s) \cdot I_1(s) - 6I_2(s) = 6V_1(s) \quad (1)$$

Mesh 2:

$$-I_1(s) + 6I_2(s) = -V_2(s) = -(2/s)I_1(s) \quad (2)$$

Addition of (1) and (2) yields

$$(12 + 6/s) \cdot I_1(s) + (2/s - 1) \cdot I_1(s) = 6V_1(s)$$

or



$$(11 + 8/s) \cdot I_1(s) = 6V_1(s)$$

and thus

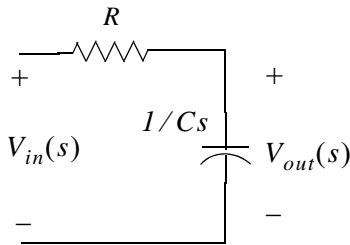
$$Y(s) = \frac{I_1(s)}{V_1(s)} = \frac{6}{11 + 8/s} = \frac{6s}{11s + 8}$$

b. With  $V_1(s) = 1/s$  we get

$$I_1(s) = Y(s) \cdot V_1(s) = \frac{6s}{11s + 8} \cdot \frac{1}{s} = \frac{6}{11s + 8} = \frac{6/11}{s + 8/11} \Leftrightarrow \frac{6}{11} e^{-(8/11)t} = i_1(t)$$

5.

Circuit (a):

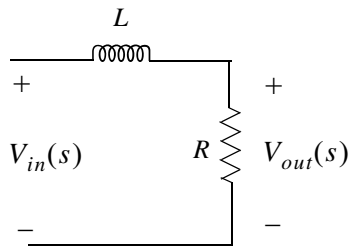


$$V_{out}(s) = \frac{1/Cs}{R + 1/Cs} \cdot V_{in}(s)$$

and

$$G(s) = \frac{V_{out}(s)}{V_{in}(s)} = \frac{1/Cs}{R + 1/Cs} = \frac{1/Cs}{(RCs + 1)/(Cs)} = \frac{1}{RCs + 1} = \frac{1/RC}{s + 1/RC}$$

Circuit (b):



$$V_{out}(s) = \frac{R}{Ls + R} \cdot V_{in}(s)$$

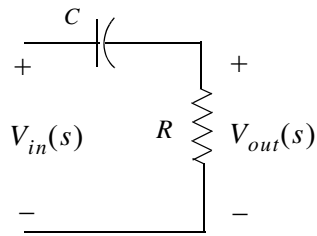
and

$$G(s) = \frac{V_{out}(s)}{V_{in}(s)} = \frac{R}{Ls + R} = \frac{R/L}{s + R/L}$$

Both of these circuits are first-order low-pass filters.

6.

Circuit (a):

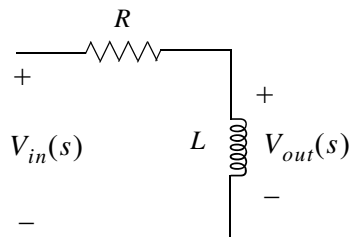


$$V_{out}(s) = \frac{R}{1/Cs + R} \cdot V_{in}(s)$$

and

$$G(s) = \frac{V_{out}(s)}{V_{in}(s)} = \frac{R}{1/Cs + R} = \frac{RCs}{(RCs + 1)} = \frac{s}{s + 1/RC}$$

Circuit (b):



$$V_{out}(s) = \frac{Ls}{R + Ls} \cdot V_{in}(s)$$

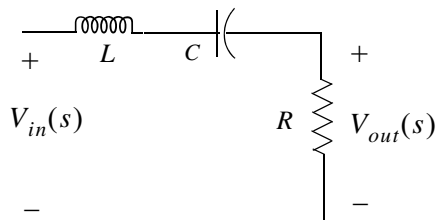
and

$$G(s) = \frac{V_{out}(s)}{V_{in}(s)} = \frac{Ls}{R + Ls} = \frac{s}{s + R/L}$$

Both of these circuits are first-order high-pass filters.

7.

Circuit (a):



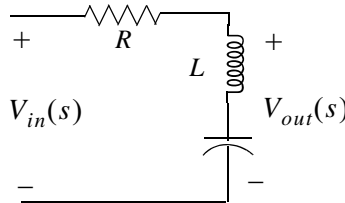
$$V_{out}(s) = \frac{R}{Ls + 1/Cs + R} \cdot V_{in}(s)$$

and

$$G(s) = \frac{V_{out}(s)}{V_{in}(s)} = \frac{R}{Ls + 1/Cs + R} = \frac{RCs}{LCs^2 + 1 + RCs} = \frac{(R/L)s}{s^2 + (R/L)s + 1/LC}$$

This circuit is a second-order band-pass filter.

Circuit (b):



$$V_{out}(s) = \frac{Ls + 1/Cs}{R + Ls + 1/Cs} \cdot V_{in}(s)$$

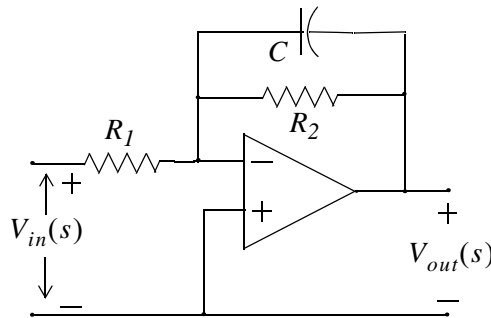
and

$$G(s) = \frac{V_{out}(s)}{V_{in}(s)} = \frac{Ls + 1/Cs}{R + Ls + 1/Cs} = \frac{LCs^2 + 1}{LCs^2 + RCs + 1} = \frac{s^2 + 1/LC}{s^2 + (R/L)s + 1/LC}$$

This circuit is a second-order band-elimination (band-reject) filter.

8.

Circuit (a):



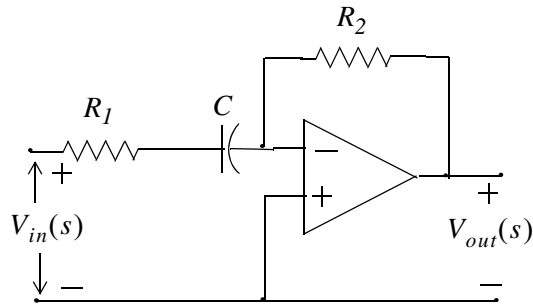
Let  $z_1 = R_1$  and  $z_2 = \frac{R_2 \times 1/Cs}{R_2 + 1/Cs}$  and since for inverting op-amp  $\frac{V_{out}(s)}{V_{in}(s)} = -\frac{z_2}{z_1}$ , for this circuit

$$G(s) = \frac{V_{out}(s)}{V_{in}(s)} = \frac{-[(R_2 \times 1/Cs)/(R_2 + 1/Cs)]}{R_1} = \frac{-(R_2 \times 1/Cs)}{R_1 \cdot (R_2 + 1/Cs)} = \frac{-R_1 C}{s + 1/R_2 C}$$

This circuit is a first-order active low-pass filter.

## Chapter 4 Circuit Analysis with Laplace Transforms

Circuit (b):

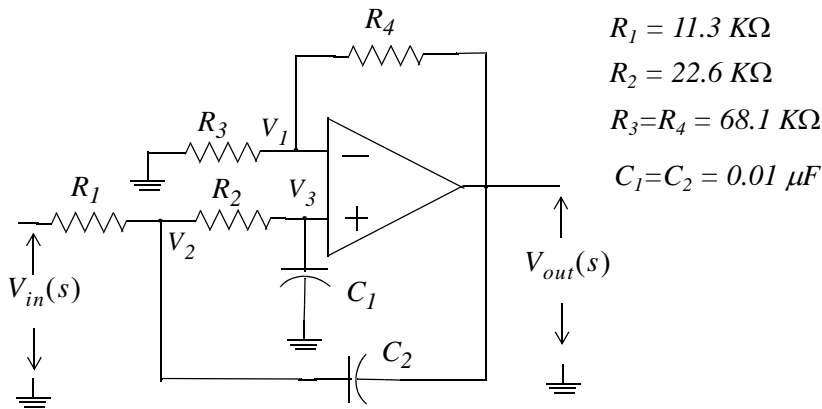


Let  $z_1 = R_1 + 1/Cs$  and  $z_2 = R_2$  and since for inverting op-amp  $\frac{V_{out}(s)}{V_{in}(s)} = -\frac{z_2}{z_1}$ , for this circuit

$$G(s) = \frac{V_{out}(s)}{V_{in}(s)} = \frac{-R_2}{R_1 + 1/Cs} = \frac{-(R_2/R_1)s}{s + 1/R_1C}$$

This circuit is a first-order active high-pass filter.

9.



At Node  $V_1$ :

$$\frac{V_1(s)}{R_3} + \frac{V_1(s) - V_{out}(s)}{R_4} = 0$$

or

$$\left(\frac{1}{R_3} + \frac{1}{R_4}\right)V_1(s) = \frac{1}{R_4}V_{out}(s) \quad (1)$$

At Node  $V_3$ :

$$\frac{V_3(s) - V_2(s)}{R_2} + \frac{V_3(s)}{1/C_1s} = 0$$

and since  $V_3(s) = V_1(s)$  we express the last relation above as

$$\frac{V_1(s) - V_2(s)}{R_2} + C_1 s V_1(s) = 0$$

or

$$\left(\frac{1}{R_2} + C_1 s\right) V_1(s) = \frac{1}{R_2} V_2(s) \quad (2)$$

At Node  $V_2$ :

$$\frac{V_2(s) - V_{in}(s)}{R_1} + \frac{V_2(s) - V_1(s)}{R_2} + \frac{V_2(s) - V_{out}(s)}{1/C_2 s} = 0$$

or

$$\left(\frac{1}{R_1} + \frac{1}{R_2} + C_2 s\right) V_2(s) = \frac{V_{in}(s)}{R_1} + \frac{V_1(s)}{R_2} + C_2 s V_{out}(s) \quad (3)$$

From (1)

$$V_1(s) = \frac{(1/R_4)}{(R_3 + R_4)/R_3 R_4} V_{out}(s) = \frac{R_3}{(R_3 + R_4)} V_{out}(s) \quad (4)$$

From (2)

$$V_2(s) = R_2 \left(\frac{1}{R_2} + C_1 s\right) V_1(s) = (1 + R_2 C_1 s) V_1(s)$$

and with (4)

$$V_2(s) = \frac{R_3(1 + R_2 C_1 s)}{(R_3 + R_4)} V_{out}(s) \quad (5)$$

By substitution of (4) and (5) into (3) we get

$$\left(\frac{1}{R_1} + \frac{1}{R_2} + C_2 s\right) \frac{R_3(1 + R_2 C_1 s)}{(R_3 + R_4)} V_{out}(s) = \frac{V_{in}(s)}{R_1} + \frac{1}{R_2} \frac{R_3}{(R_3 + R_4)} V_{out}(s) + C_2 s V_{out}(s)$$

or

$$\left[ \left(\frac{1}{R_1} + \frac{1}{R_2} + C_2 s\right) \frac{R_3(1 + R_2 C_1 s)}{(R_3 + R_4)} - \frac{1}{R_2} \frac{R_3}{(R_3 + R_4)} - C_2 s \right] V_{out}(s) = \frac{1}{R_1} V_{in}(s)$$

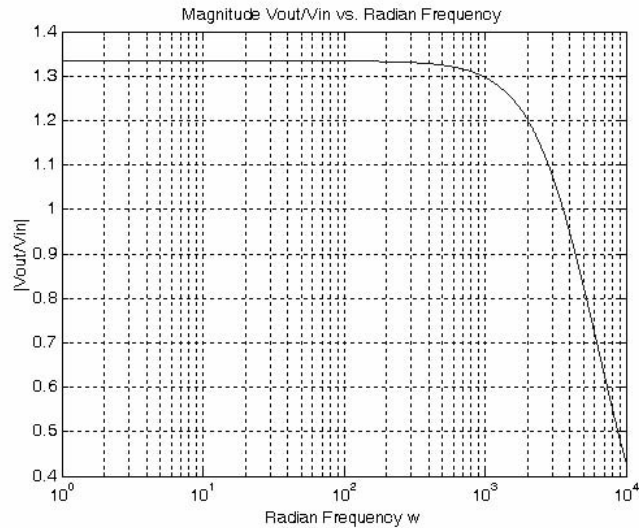
and thus

$$G(s) = \frac{V_{out}(s)}{V_{in}(s)} = \frac{1}{R_1 \left[ \left(\frac{1}{R_1} + \frac{1}{R_2} + C_2 s\right) \frac{R_3(1 + R_2 C_1 s)}{(R_3 + R_4)} - \frac{1}{R_2} \frac{R_3}{(R_3 + R_4)} - C_2 s \right]}$$

By substitution of the given values and after simplification we get

$$G(s) = \frac{7.83 \times 10^7}{s^2 + 1.77 \times 10^4 s + 5.87 \times 10^7}$$

```
w=1:10:10000; s=j.*w; Gs=7.83.*10.^7./(s.^2+1.77.*10.^4.*s+5.87.*10.^7);...  
semilogx(w,abs(Gs)); grid; hold on  
xlabel('Radian Frequency w'); ylabel('|Vout/Vin|');  
title('Magnitude Vout/Vin vs. Radian Frequency')
```



The plot above indicates that this circuit is a second-order low-pass filter.

This chapter is an introduction to state variables and state equations as they apply in circuit analysis. The state transition matrix is defined, and the state space-to-transfer function equivalence is presented. Several examples are given to illustrate their application.

### 5.1 Expressing Differential Equations in State Equation Form

As we know, when we apply KCL or KVL in networks that contain energy-storing devices, we obtain integro-differential equations. Also, when a network contains just one such device (capacitor or inductor), it is said to be a *first order circuit*. If it contains two such devices, it is said to be *second-order circuit*, and so on. Thus, a first order linear, time-invariant circuit can be described by a differential equation of the form

$$a_1 \frac{dy}{dt} + a_0 y(t) = x(t) \quad (5.1)$$

A second order circuit can be described by a second-order differential equation of the same form as (5.1) where the highest order is a second derivative.

An *n*th-order differential equation can be resolved to *n* first-order simultaneous differential equations with a set of auxiliary variables called *state variables*. The resulting first-order differential equations are called *state space equations*, or simply *state equations*. These equations can be obtained either from the *n*th-order differential equation, or directly from the network, provided that the state variables are chosen appropriately. The state variable method offers the advantage that it can also be used with non-linear and time-varying devices. However, our discussion will be limited to linear, time-invariant circuits.

State equations can also be solved with numerical methods such as Taylor series and Runge-Kutta methods, but these will not be discussed in this text\*. The state variable method is best illustrated through several examples presented in this chapter.

#### Example 5.1

A series *RLC* circuit with excitation

$$v_S(t) = e^{j\omega t} \quad (5.2)$$

---

\* These are discussed in “Numerical Analysis using MATLAB and Spreadsheets” ISBN 0-9709511-1-6.

---

## Chapter 5 State Variables and State Equations

---

is described by the integro-differential equation

$$Ri + L\frac{di}{dt} + \frac{1}{C}\int_{-\infty}^t i dt = e^{j\omega t} \quad (5.3)$$

Differentiating both sides and dividing by  $L$  we get

$$\frac{d^2i}{dt^2} + \frac{R}{L}\frac{di}{dt} + \frac{1}{LC}i = \frac{1}{L}j\omega e^{j\omega t} \quad (5.4)$$

or

$$\frac{d^2i}{dt^2} = -\frac{R}{L}\frac{di}{dt} - \frac{1}{LC}i + \frac{1}{L}j\omega e^{j\omega t} \quad (5.5)$$

Next, we define two state variables  $x_1$  and  $x_2$  such that

$$x_1 = i \quad (5.6)$$

and

$$x_2 = \frac{di}{dt} = \frac{dx_1}{dt} = \dot{x}_1 \quad (5.7)$$

Then,

$$\dot{x}_2 = d^2i/dt^2 \quad (5.8)$$

where  $\dot{x}_k$  denotes the derivative of the state variable  $x_k$ .

From (5.5) through (5.8), we obtain the state equations

$$\begin{aligned} \dot{x}_1 &= x_2 \\ \dot{x}_2 &= -\frac{R}{L}x_2 - \frac{1}{LC}x_1 + \frac{1}{L}j\omega e^{j\omega t} \end{aligned} \quad (5.9)$$

It is convenient and customary to express the state equations in matrix\* form. Thus, we write the state equations of (5.9) as

$$\begin{bmatrix} \dot{x}_1 \\ \dot{x}_2 \end{bmatrix} = \begin{bmatrix} 0 & 1 \\ -\frac{1}{LC} & -\frac{R}{L} \end{bmatrix} \begin{bmatrix} x_1 \\ x_2 \end{bmatrix} + \begin{bmatrix} 0 \\ \frac{1}{L}j\omega e^{j\omega t} \end{bmatrix} u \quad (5.10)$$

---

\* For a review of matrix theory, please refer to Appendix C.



We usually write (5.10) in a compact form as

$$\dot{x} = Ax + bu \quad (5.11)$$

where

$$\dot{x} = \begin{bmatrix} \dot{x}_1 \\ \dot{x}_2 \end{bmatrix}, \quad A = \begin{bmatrix} 0 & 1 \\ -\frac{1}{LC} & -\frac{R}{L} \end{bmatrix}, \quad x = \begin{bmatrix} x_1 \\ x_2 \end{bmatrix}, \quad b = \begin{bmatrix} 0 \\ \frac{1}{L} j\omega e^{j\omega t} \end{bmatrix}, \quad \text{and } u = \text{any input} \quad (5.12)$$

The output  $y(t)$  is expressed by the state equation

$$y = Cx + du \quad (5.13)$$

where  $C$  is another matrix, and  $d$  is a column vector. Therefore, the state representation of a network can be described by the pair of the of the state space equations

$$\begin{aligned} \dot{x} &= Ax + bu \\ y &= Cx + du \end{aligned}$$

(5.14)

The state space equations of (5.14) can be realized with the block diagram of Figure 5.1.

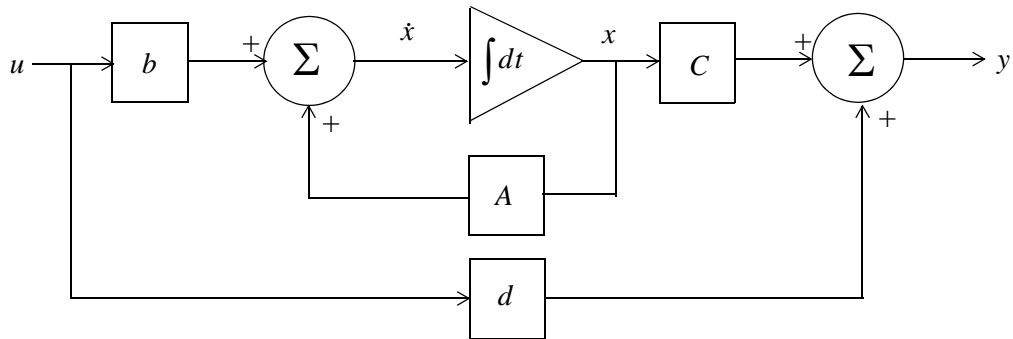


Figure 5.1. Block diagram for the realization of the state equations of (5.14)

We will learn how to solve the matrix equations of (5.14) in the subsequent sections.

### Example 5.2

A fourth-order network is described by the differential equation

$$\frac{d^4 y}{dt^4} + a_3 \frac{d^3 y}{dt^3} + a_2 \frac{d^2 y}{dt^2} + a_1 \frac{dy}{dt} + a_0 y(t) = u(t) \quad (5.15)$$

where  $y(t)$  is the output representing the voltage or current of the network, and  $u(t)$  is any input. Express (5.15) as a set of state equations.

---

## Chapter 5 State Variables and State Equations

---

### Solution:

The differential equation of (5.15) is of fourth-order; therefore, we must define four state variables that will be used with the resulting four first-order state equations.

We denote the state variables as  $x_1, x_2, x_3$ , and  $x_4$ , and we relate them to the terms of the given differential equation as

$$x_1 = y(t) \quad x_2 = \frac{dy}{dt} \quad x_3 = \frac{d^2y}{dt^2} \quad x_4 = \frac{d^3y}{dt^3} \quad (5.16)$$

We observe that

$$\begin{aligned} \dot{x}_1 &= x_2 \\ \dot{x}_2 &= x_3 \\ \dot{x}_3 &= x_4 \end{aligned} \quad (5.17)$$

$$\frac{d^4y}{dt^4} = \dot{x}_4 = -a_0x_1 - a_1x_2 - a_2x_3 - a_3x_4 + u(t)$$

and in matrix form

$$\begin{bmatrix} \dot{x}_1 \\ \dot{x}_2 \\ \dot{x}_3 \\ \dot{x}_4 \end{bmatrix} = \begin{bmatrix} 0 & 1 & 0 & 0 \\ 0 & 0 & 1 & 0 \\ 0 & 0 & 0 & 1 \\ -a_0 & -a_1 & -a_2 & -a_3 \end{bmatrix} \begin{bmatrix} x_1 \\ x_2 \\ x_3 \\ x_4 \end{bmatrix} + \begin{bmatrix} 0 \\ 0 \\ 0 \\ 1 \end{bmatrix} u(t) \quad (5.18)$$

In compact form, (5.18) is written as

$$\dot{x} = Ax + bu \quad (5.19)$$

where

$$\dot{x} = \begin{bmatrix} \dot{x}_1 \\ \dot{x}_2 \\ \dot{x}_3 \\ \dot{x}_4 \end{bmatrix}, \quad A = \begin{bmatrix} 0 & 1 & 0 & 0 \\ 0 & 0 & 1 & 0 \\ 0 & 0 & 0 & 1 \\ -a_0 & -a_1 & -a_2 & -a_3 \end{bmatrix}, \quad x = \begin{bmatrix} x_1 \\ x_2 \\ x_3 \\ x_4 \end{bmatrix}, \quad b = \begin{bmatrix} 0 \\ 0 \\ 0 \\ 1 \end{bmatrix}, \quad \text{and } u = u(t)$$

We can also obtain the state equations directly from given circuits. We choose the state variables to represent inductor currents and capacitor voltages. In other words, we assign state variables to energy storing devices. The examples that follow illustrate the procedure.

## Example 5.3

Write state equation(s) for the circuit of Figure 5.2, given that  $v_C(0^-) = 0$ .

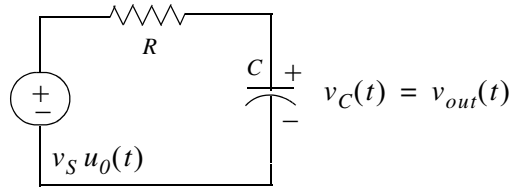


Figure 5.2. Circuit for Example 5.3

### Solution:

This circuit contains only one energy-storing device, the capacitor. Therefore, we need only one state variable. We choose the state variable to denote the voltage across the capacitor as shown in Figure 5.3. The output is defined as the voltage across the capacitor.

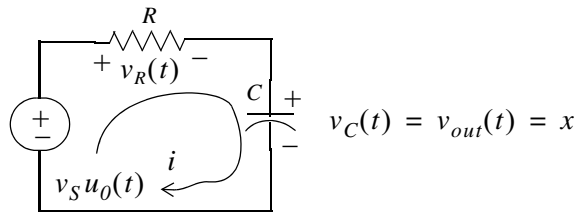


Figure 5.3. Circuit for Example 5.3 with state variable  $x$  assigned to it

For this series circuit,

$$i_R = i = i_C = C \frac{dv_C}{dt} = C\dot{x}$$

and

$$v_R(t) = Ri = RC\dot{x}$$

By KVL,

$$v_R(t) + v_C(t) = v_S u_0(t)$$

or

$$RC\dot{x} + x = v_S u_0(t)$$

Therefore, the state equations are

$$\begin{aligned} \dot{x} &= -\frac{1}{RC}x + v_S u_0(t) \\ y &= x \end{aligned} \tag{5.20}$$

### Example 5.4

Write state equation(s) for the circuit of Figure 5.4 assuming  $i_L(0^-) = 0$ , and the output  $y$  is defined as  $y = i(t)$ .

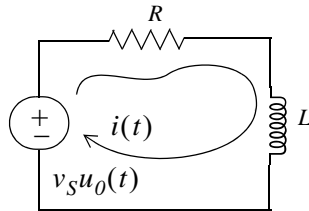


Figure 5.4. Circuit for Example 5.4

### Solution:

This circuit contains only one energy-storing device, the inductor; therefore, we need only one state variable. We choose the state variable to denote the current through the inductor as shown in Figure 5.5.

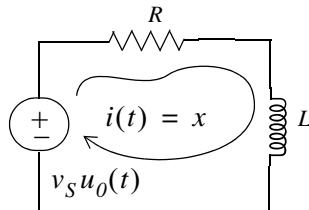


Figure 5.5. Circuit for Example 5.4 with state variable  $x$  assigned to it

By KVL,

$$v_R + v_L = v_S u_0(t)$$

or

$$Ri + L \frac{di}{dt} = v_S u_0(t)$$

or

$$Rx + L\dot{x} = v_S u_0(t)$$

Therefore, the state equations are

$$\begin{aligned} \dot{x} &= -\frac{R}{L}x + \frac{1}{L}v_S u_0(t) \\ y &= x \end{aligned} \tag{5.21}$$

## 5.2 Solution of Single State Equations

If a circuit contains only one energy-storing device, the state equations are written as

$$\begin{aligned}\dot{x} &= \alpha x + \beta u \\ y &= k_1 x + k_2 u\end{aligned}\tag{5.22}$$

where  $\alpha$ ,  $\beta$ ,  $k_1$ , and  $k_2$  are scalar constants, and the initial condition, if non-zero, is denoted as

$$x_0 = x(t_0)\tag{5.23}$$

We will now prove that the solution of the first state equation in (5.22) is

$$x(t) = e^{\alpha(t-t_0)} x_0 + e^{\alpha t} \int_{t_0}^t e^{-\alpha\tau} \beta u(\tau) d\tau\tag{5.24}$$

**Proof:**

First, we must show that (5.24) satisfies the initial condition of (5.23). This is done by substitution of  $t = t_0$  in (5.24). Then,

$$x(t_0) = e^{\alpha(t_0-t_0)} x_0 + e^{\alpha t_0} \int_{t_0}^{t_0} e^{-\alpha\tau} \beta u(\tau) d\tau\tag{5.25}$$

The first term in the right side of (5.25) reduces to  $x_0$  since

$$e^{\alpha(t_0-t_0)} x_0 = e^0 x_0 = x_0\tag{5.26}$$

The second term of (5.25) is zero since the upper and lower limits of integration are the same.

Therefore, (5.25) reduces to  $x(t_0) = x_0$  and thus the initial condition is satisfied.

Next, we must prove that (5.24) satisfies also the first equation in (5.22). To prove this, we differentiate (5.24) with respect to  $t$  and we get

$$\dot{x}(t) = \frac{d}{dt}(e^{\alpha(t-t_0)} x_0) + \frac{d}{dt} \left\{ e^{\alpha t} \int_{t_0}^t e^{-\alpha\tau} \beta u(\tau) d\tau \right\}$$

or

$$\begin{aligned}\dot{x}(t) &= \alpha e^{\alpha(t-t_0)} x_0 + \alpha e^{\alpha t} \int_{t_0}^t e^{-\alpha\tau} \beta u(\tau) d\tau + e^{\alpha t} [e^{-\alpha\tau} \beta u(\tau)] \Big|_{\tau=t} \\ &= \alpha \left[ e^{\alpha(t-t_0)} x_0 + e^{\alpha t} \int_{t_0}^t e^{-\alpha\tau} \beta u(\tau) d\tau \right] + e^{\alpha t} e^{-\alpha t} \beta u(t)\end{aligned}$$

or

$$\dot{x}(t) = \alpha \left[ e^{\alpha(t-t_0)} x_0 + \int_{t_0}^t e^{\alpha(t-\tau)} \beta u(\tau) d\tau \right] + \beta u(t) \quad (5.27)$$

We observe that the bracketed terms of (5.27) are the same as the right side of the assumed solution of (5.24). Therefore,

$$\dot{x} = \alpha x + \beta u$$

and this is the same as the first equation of (5.22).

In summary, if  $\alpha$  and  $\beta$  are scalar constants, the solution of

$$\dot{x} = \alpha x + \beta u \quad (5.28)$$

with initial condition

$$x_0 = x(t_0) \quad (5.29)$$

is obtained from the relation

$$x(t) = e^{\alpha(t-t_0)} x_0 + e^{\alpha t} \int_{t_0}^t e^{-\alpha\tau} \beta u(\tau) d\tau \quad (5.30)$$

### Example 5.5

Use (5.28) through (5.30) to find the capacitor voltage  $v_C(t)$  of the circuit of Figure 5.6 for  $t > 0$ , given that the initial condition is  $v_C(0^-) = 1 \text{ V}$

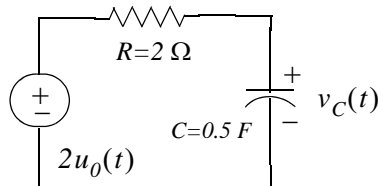


Figure 5.6. Circuit for Example 5.5

#### Solution:

From (5.20) of Example 5.3,

$$\dot{x} = -\frac{1}{RC}x + v_S u_0(t)$$

and by comparison with (5.28),

$$\alpha = -\frac{1}{RC} = \frac{-1}{2 \times 0.5} = -1$$

and

$$\beta = 2$$

Then, from (5.30),

$$\begin{aligned} x(t) &= e^{\alpha(t-t_0)} x_0 + e^{\alpha t} \int_{t_0}^t e^{-\alpha\tau} \beta u(\tau) d\tau = e^{-1(t-0)} I + e^{-t} \int_0^t e^{\tau} 2u(\tau) d\tau \\ &= e^{-t} + 2e^{-t} \int_0^t e^{\tau} d\tau = e^{-t} + 2e^{-t} [e^{\tau}]_0^t = e^{-t} + 2e^{-t}(e^t - 1) \end{aligned}$$

or

$$v_C(t) = x(t) = (2 - e^{-t})u_0(t) \quad (5.31)$$

If we assume that the output  $y$  is the capacitor voltage, the output state equation is

$$y(t) = x(t) = (2 - e^{-t})u_0(t) \quad (5.32)$$

### 5.3 The State Transition Matrix

In Section 5.1 we defined the state equations pair

$$\begin{aligned} \dot{x} &= Ax + bu \\ y &= Cx + du \end{aligned} \quad (5.33)$$

where for two or more simultaneous differential equations,  $A$  and  $C$  are  $2 \times 2$  or higher order matrices, and  $b$  and  $d$  are column vectors with two or more rows. In this section we will introduce the *state transition matrix*  $e^{At}$ , and we will prove that the solution of the matrix differential equation

$$\dot{x} = Ax + bu \quad (5.34)$$

with initial conditions

$$x(t_0) = x_0 \quad (5.35)$$

is obtained from the relation

$$x(t) = e^{A(t-t_0)} x_0 + e^{At} \int_{t_0}^t e^{-A\tau} bu(\tau) d\tau \quad (5.36)$$

#### Proof:

Let  $A$  be any  $n \times n$  matrix whose elements are constants. Then, another  $n \times n$  matrix denoted as  $\varphi(t)$ , is said to be the state transition matrix of (5.34), if it is related to the matrix  $A$  as the matrix power series

$$\varphi(t) \equiv e^{At} = I + At + \frac{1}{2!} A^2 t^2 + \frac{1}{3!} A^3 t^3 + \dots + \frac{1}{n!} A^n t^n \quad (5.37)$$

---

## Chapter 5 State Variables and State Equations

---

where  $I$  is the  $n \times n$  identity matrix.

From (5.37), we find that

$$\varphi(0) = e^{A0} = I + A0 + \dots = I \quad (5.38)$$

Differentiation of (5.37) with respect to  $t$  yields

$$\varphi'(t) = \frac{d}{dt}e^{At} = 0 + A \cdot I + A^2t + \dots = A + A^2t + \dots \quad (5.39)$$

and by comparison with (5.37) we get

$$\frac{d}{dt}e^{At} = Ae^{At} \quad (5.40)$$

To prove that (5.36) is the solution of (5.34), we must prove that it satisfies both the initial condition and the matrix differential equation. The initial condition is satisfied from the relation

$$x(t_0) = e^{A(t_0-t_0)}x_0 + e^{At_0} \int_{t_0}^{t_0} e^{-A\tau} bu(\tau) d\tau = e^{A0}x_0 + 0 = Ix_0 = x_0 \quad (5.41)$$

where we have used (5.38) for the initial condition. The integral is zero since the upper and lower limits of integration are the same.

To prove that (5.34) is also satisfied, we differentiate the assumed solution

$$x(t) = e^{A(t-t_0)}x_0 + e^{At} \int_{t_0}^t e^{-A\tau} bu(\tau) d\tau$$

with respect to  $t$  and we use (5.40), that is,

$$\frac{d}{dt}e^{At} = Ae^{At}$$

Then,

$$\dot{x}(t) = Ae^{A(t-t_0)}x_0 + Ae^{At} \int_{t_0}^t e^{-A\tau} bu(\tau) d\tau + e^{At} e^{-At} bu(t)$$

or

$$\dot{x}(t) = A \left[ e^{A(t-t_0)}x_0 + e^{At} \int_{t_0}^t e^{-A\tau} bu(\tau) d\tau \right] + e^{At} e^{-At} bu(t) \quad (5.42)$$

We recognize the bracketed terms in (5.42) as  $x(t)$ , and the last term as  $bu(t)$ . Thus, the expression (5.42) reduces to

$$\dot{x}(t) = Ax + bu$$



In summary, if  $A$  is an  $n \times n$  matrix whose elements are constants,  $n \geq 2$ , and  $b$  is a column vector with  $n$  elements, the solution of

$$\dot{x}(t) = Ax + bu \quad (5.43)$$

with initial condition

$$x_0 = x(t_0) \quad (5.44)$$

is

$$x(t) = e^{A(t-t_0)}x_0 + e^{At} \int_{t_0}^t e^{-A\tau} bu(\tau) d\tau \quad (5.45)$$

Therefore, the solution of second or higher order circuits using the state variable method, entails the computation of the state transition matrix  $e^{At}$ , and integration of (5.45).

### 5.4 Computation of the State Transition Matrix $e^{At}$

Let  $A$  be an  $n \times n$  matrix, and  $I$  be the  $n \times n$  identity matrix. By definition, the *eigenvalues*  $\lambda_i$ ,  $i = 1, 2, \dots, n$  of  $A$  are the roots of the  $n$ th order polynomial

$$\det[A - \lambda I] = 0 \quad (5.46)$$

We recall that expansion of a determinant produces a polynomial. The roots of the polynomial of (5.46) can be real (unequal or equal), or complex numbers.

Evaluation of the state transition matrix  $e^{At}$  is based on the *Cayley-Hamilton theorem*. This theorem states that a matrix can be expressed as an  $(n - 1)$ th degree polynomial in terms of the matrix  $A$  as

$$e^{At} = a_0 I + a_1 A + a_2 A^2 + \dots + a_{n-1} A^{n-1} \quad (5.47)$$

where the coefficients  $a_i$  are functions of the eigenvalues  $\lambda$ .

We accept (5.47) without proving it. The proof can be found in Linear Algebra and Matrix Theory textbooks.

Since the coefficients  $a_i$  are functions of the eigenvalues  $\lambda$ , we must consider the following cases:

#### Case I: Distinct Eigenvalues (Real or Complex)

If  $\lambda_1 \neq \lambda_2 \neq \lambda_3 \neq \dots \neq \lambda_n$ , that is, if all eigenvalues of a given matrix  $A$  are distinct, the coefficients  $a_i$  are found from the simultaneous solution of the following system of equations:

$$\begin{aligned}
 a_0 + a_1\lambda_1 + a_2\lambda_1^2 + \dots + a_{n-1}\lambda_1^{n-1} &= e^{\lambda_1 t} \\
 a_0 + a_1\lambda_2 + a_2\lambda_2^2 + \dots + a_{n-1}\lambda_2^{n-1} &= e^{\lambda_2 t} \\
 &\dots \\
 a_0 + a_1\lambda_n + a_2\lambda_n^2 + \dots + a_{n-1}\lambda_n^{n-1} &= e^{\lambda_n t}
 \end{aligned}
 \tag{5.48}$$

### Example 5.6

Compute the state transition matrix  $e^{At}$  given that  $A = \begin{bmatrix} -2 & 1 \\ 0 & -1 \end{bmatrix}$

#### Solution:

We must first find the eigenvalues  $\lambda$  of the given matrix  $A$ . These are found from the expansion of

$$\det[A - \lambda I] = 0$$

For this example,

$$\begin{aligned}
 \det[A - \lambda I] &= \det \left\{ \begin{bmatrix} -2 & 1 \\ 0 & -1 \end{bmatrix} - \lambda \begin{bmatrix} 1 & 0 \\ 0 & 1 \end{bmatrix} \right\} = \det \begin{bmatrix} -2-\lambda & 1 \\ 0 & -1-\lambda \end{bmatrix} = 0 \\
 &= (-2-\lambda)(-1-\lambda) = 0
 \end{aligned}$$

or

$$(\lambda + 1)(\lambda + 2) = 0$$

Therefore,

$$\lambda_1 = -1 \text{ and } \lambda_2 = -2 \tag{5.49}$$

Next, we must find the coefficients  $a_i$  of (5.47). Since  $A$  is a  $2 \times 2$  matrix, we only need to consider the first two terms of that relation, that is,

$$e^{At} = a_0 I + a_1 A \tag{5.50}$$

The coefficients  $a_0$  and  $a_1$  are found from (5.48). For this example,

$$\begin{aligned}
 a_0 + a_1\lambda_1 &= e^{\lambda_1 t} \\
 a_0 + a_1\lambda_2 &= e^{\lambda_2 t}
 \end{aligned}$$

or

$$\begin{aligned}
 a_0 + a_1(-1) &= e^{-t} \\
 a_0 + a_1(-2) &= e^{-2t}
 \end{aligned}
 \tag{5.51}$$

Simultaneous solution of (5.51) yields

$$\begin{aligned} a_0 &= 2e^{-t} - e^{-2t} \\ a_1 &= e^{-t} - e^{-2t} \end{aligned} \quad (5.52)$$

and by substitution into (5.50),

$$e^{At} = (2e^{-t} - e^{-2t}) \begin{bmatrix} 1 & 0 \\ 0 & 1 \end{bmatrix} + (e^{-t} - e^{-2t}) \begin{bmatrix} -2 & 1 \\ 0 & -1 \end{bmatrix}$$

or

$$e^{At} = \begin{bmatrix} e^{-2t} & e^{-t} - e^{-2t} \\ 0 & e^{-t} \end{bmatrix} \quad (5.53)$$

In summary, we compute the state transition matrix  $e^{At}$  for a given matrix  $A$  using the following procedure:

1. We find the eigenvalues  $\lambda$  from  $\det[A - \lambda I] = 0$ . We can write  $[A - \lambda I]$  at once by subtracting  $\lambda$  from each of the main diagonal elements of  $A$ . If the dimension of  $A$  is a  $2 \times 2$  matrix, it will yield two eigenvalues; if it is a  $3 \times 3$  matrix, it will yield three eigenvalues, and so on. If the eigenvalues are distinct, we perform steps 2 through 4; otherwise we refer to Case II below.
2. If the dimension of  $A$  is a  $2 \times 2$  matrix, we use only the first 2 terms of the right side of the state transition matrix

$$e^{At} = a_0 I + a_1 A + a_2 A^2 + \dots + a_{n-1} A^{n-1} \quad (5.54)$$

If  $A$  matrix is a  $3 \times 3$  matrix, we use the first 3 terms, and so on.

3. We obtain the  $a_i$  coefficients from

$$\begin{aligned} a_0 + a_1 \lambda_1 + a_2 \lambda_1^2 + \dots + a_{n-1} \lambda_1^{n-1} &= e^{\lambda_1 t} \\ a_0 + a_1 \lambda_2 + a_2 \lambda_2^2 + \dots + a_{n-1} \lambda_2^{n-1} &= e^{\lambda_2 t} \\ &\dots \\ a_0 + a_1 \lambda_n + a_2 \lambda_n^2 + \dots + a_{n-1} \lambda_n^{n-1} &= e^{\lambda_n t} \end{aligned}$$

We use as many equations as the number of the eigenvalues, and we solve for the coefficients  $a_i$ .

4. We substitute the  $a_i$  coefficients into the state transition matrix of (5.54), and we simplify.

### Example 5.7

Compute the state transition matrix  $e^{At}$  given that

$$A = \begin{bmatrix} 5 & 7 & -5 \\ 0 & 4 & -1 \\ 2 & 8 & -3 \end{bmatrix} \quad (5.55)$$

#### Solution:

1. We first compute the eigenvalues from  $\det[A - \lambda I] = 0$ . We obtain  $[A - \lambda I]$  at once, by subtracting  $\lambda$  from each of the main diagonal elements of  $A$ . Then,

$$\det[A - \lambda I] = \det \begin{bmatrix} 5 - \lambda & 7 & -5 \\ 0 & 4 - \lambda & -1 \\ 2 & 8 & -3 - \lambda \end{bmatrix} = 0 \quad (5.56)$$

and expansion of this determinant yields the polynomial

$$\lambda^3 - 6\lambda^2 + 11\lambda - 6 = 0 \quad (5.57)$$

We will use MATLAB **roots(p)** function to obtain the roots of (5.57).

```
p=[1 -6 11 -6]; r=roots(p); fprintf('\n'); fprintf('lambda1 = %5.2f \t', r(1));...  
fprintf('lambda2 = %5.2f \t', r(2)); fprintf('lambda3 = %5.2f', r(3))
```

```
lambda1 = 3.00    lambda2 = 2.00    lambda3 = 1.00
```

and thus the eigenvalues are

$$\lambda_1 = 1 \quad \lambda_2 = 2 \quad \lambda_3 = 3 \quad (5.58)$$

2. Since  $A$  is a  $3 \times 3$  matrix, we need to use the first 3 terms of (5.54), that is,

$$e^{At} = a_0 I + a_1 A + a_2 A^2 \quad (5.59)$$

3. We obtain the coefficients  $a_0$ ,  $a_1$ , and  $a_2$  from

$$a_0 + a_1 \lambda_1 + a_2 \lambda_1^2 = e^{\lambda_1 t}$$

$$a_0 + a_1 \lambda_2 + a_2 \lambda_2^2 = e^{\lambda_2 t}$$

$$a_0 + a_1 \lambda_3 + a_2 \lambda_3^2 = e^{\lambda_3 t}$$

or

$$\begin{aligned} a_0 + a_1 + a_2 &= e^t \\ a_0 + 2a_1 + 4a_2 &= e^{2t} \\ a_0 + 3a_1 + 9a_2 &= e^{3t} \end{aligned} \tag{5.60}$$

We will use the following MATLAB code for the solution of (5.60).

```
B=sym('[1 1 1; 1 2 4; 1 3 9]'); b=sym('[exp(t); exp(2*t); exp(3*t)]'); a=B\b; fprintf(' \n');...
disp('a0 = '); disp(a(1)); disp('a1 = '); disp(a(2)); disp('a2 = '); disp(a(3))
```

```
a0 =
3*exp(t) - 3*exp(2*t) + exp(3*t)
a1 =
-5/2*exp(t) + 4*exp(2*t) - 3/2*exp(3*t)
a2 =
1/2*exp(t) - exp(2*t) + 1/2*exp(3*t)
```

Thus,

$$\begin{aligned} a_0 &= 3e^t - 3e^{2t} + e^{3t} \\ a_1 &= -\frac{5}{2}e^t + 4e^{2t} - \frac{3}{2}e^{3t} \\ a_2 &= \frac{1}{2}e^t - e^{2t} + \frac{1}{2}e^{3t} \end{aligned} \tag{5.61}$$

4. We also use MATLAB to perform the substitution into the state transition matrix, and to perform the matrix multiplications. The code is shown below.

```
syms t; a0 = 3*exp(t)+exp(3*t)-3*exp(2*t); a1 = -5/2*exp(t)-3/2*exp(3*t)+4*exp(2*t);...
a2 = 1/2*exp(t)+1/2*exp(3*t)-exp(2*t);...
A = [5 7 -5; 0 4 -1; 2 8 -3]; eAt=a0*eye(3)+a1*A+a2*A^2
```

```
eAt =
[ -2*exp(t)+2*exp(2*t)+exp(3*t), -6*exp(t)+5*exp(2*t)+exp(3*t), 4*exp(t)-3*exp(2*t)-exp(3*t) ]
[ -exp(t)+2*exp(2*t)-exp(3*t), -3*exp(t)+5*exp(2*t)-exp(3*t), 2*exp(t)-3*exp(2*t)+exp(3*t) ]
[ -3*exp(t)+4*exp(2*t)-exp(3*t), -9*exp(t)+10*exp(2*t)-exp(3*t), 6*exp(t)-6*exp(2*t)+exp(3*t) ]
```

Thus,

$$e^{At} = \begin{bmatrix} -2e^t + 2e^{2t} + e^{3t} & -6e^t + 5e^{2t} + e^{3t} & 4e^t - 3e^{2t} - e^{3t} \\ -e^t + 2e^{2t} - e^{3t} & -3e^t + 5e^{2t} - e^{3t} & 2e^t - 3e^{2t} + e^{3t} \\ -3e^t + 4e^{2t} - e^{3t} & -9e^t + 10e^{2t} - e^{3t} & 6e^t - 6e^{2t} + e^{3t} \end{bmatrix}$$

### Case II: Multiple Eigenvalues

In this case, we will assume that the polynomial of

$$\det[A - \lambda I] = 0 \tag{5.62}$$

## Chapter 5 State Variables and State Equations

has  $n$  roots, and  $m$  of these roots are equal. In other words, the roots are

$$\lambda_1 = \lambda_2 = \lambda_3 \dots = \lambda_m, \lambda_{m+1}, \lambda_n \quad (5.63)$$

The coefficients  $a_i$  of the state transition matrix

$$e^{At} = a_0 I + a_1 A + a_2 A^2 + \dots + a_{n-1} A^{n-1} \quad (5.64)$$

are found from the simultaneous solution of the system of equations of (5.65) below.

$$\begin{aligned} a_0 + a_1 \lambda_1 + a_2 \lambda_1^2 + \dots + a_{n-1} \lambda_1^{n-1} &= e^{\lambda_1 t} \\ \frac{d}{d\lambda_1} (a_0 + a_1 \lambda_1 + a_2 \lambda_1^2 + \dots + a_{n-1} \lambda_1^{n-1}) &= \frac{d}{d\lambda_1} e^{\lambda_1 t} \\ \frac{d^2}{d\lambda_1^2} (a_0 + a_1 \lambda_1 + a_2 \lambda_1^2 + \dots + a_{n-1} \lambda_1^{n-1}) &= \frac{d^2}{d\lambda_1^2} e^{\lambda_1 t} \\ &\dots \\ \frac{d^{m-1}}{d\lambda_1^{m-1}} (a_0 + a_1 \lambda_1 + a_2 \lambda_1^2 + \dots + a_{n-1} \lambda_1^{n-1}) &= \frac{d^{m-1}}{d\lambda_1^{m-1}} e^{\lambda_1 t} \\ a_0 + a_1 \lambda_{m+1} + a_2 \lambda_{m+1}^2 + \dots + a_{n-1} \lambda_{m+1}^{n-1} &= e^{\lambda_{m+1} t} \\ &\dots \\ a_0 + a_1 \lambda_n + a_2 \lambda_n^2 + \dots + a_{n-1} \lambda_n^{n-1} &= e^{\lambda_n t} \end{aligned} \quad (5.65)$$

### Example 5.8

Compute the state transition matrix  $e^{At}$  given that

$$A = \begin{bmatrix} -1 & 0 \\ 2 & -1 \end{bmatrix}$$

**Solution:**

1. We first find the eigenvalues  $\lambda$  of the matrix  $A$  and these are found from the polynomial of  $\det[A - \lambda I] = 0$ . For this example,

$$\begin{aligned} \det[A - \lambda I] &= \det \begin{bmatrix} -1 - \lambda & 0 \\ 2 & -1 - \lambda \end{bmatrix} = 0 \\ &= (-1 - \lambda)(-1 - \lambda) = 0 \\ &= (\lambda + 1)^2 = 0 \end{aligned}$$

and thus,

$$\lambda_1 = \lambda_2 = -1$$

2. Since  $A$  is a  $2 \times 2$  matrix, we only need the first two terms of the state transition matrix, that is,

$$e^{At} = a_0 I + a_1 A \quad (5.66)$$

3. We find  $a_0$  and  $a_1$  from (5.65). For this example,

$$\begin{aligned} a_0 + a_1 \lambda_1 &= e^{\lambda_1 t} \\ \frac{d}{d\lambda_1}(a_0 + a_1 \lambda_1) &= \frac{d}{d\lambda_1} e^{\lambda_1 t} \end{aligned}$$

or

$$\begin{aligned} a_0 + a_1 \lambda_1 &= e^{\lambda_1 t} \\ a_1 &= t e^{\lambda_1 t} \end{aligned}$$

and by substitution with  $\lambda_1 = \lambda_2 = -1$ , we get

$$\begin{aligned} a_0 - a_1 &= e^{-t} \\ a_1 &= t e^{-t} \end{aligned}$$

Simultaneous solution of the last two equations yields

$$\begin{aligned} a_0 &= e^{-t} + t e^{-t} \\ a_1 &= t e^{-t} \end{aligned} \quad (5.67)$$

4. By substitution of (5.67) into (5.66), we get

$$e^{At} = (e^{-t} + t e^{-t}) \begin{bmatrix} 1 & 0 \\ 0 & 1 \end{bmatrix} + t e^{-t} \begin{bmatrix} -1 & 0 \\ 2 & -1 \end{bmatrix}$$

or

$$e^{At} = \begin{bmatrix} e^{-t} & 0 \\ 2t e^{-t} & e^{-t} \end{bmatrix} \quad (5.68)$$

We can use the MATLAB **eig(x)** function to find the eigenvalues of an  $n \times n$  matrix. To find out how it is used, we invoke the **help eig** command.

---

## Chapter 5 State Variables and State Equations

---

We will first use MATLAB to verify the values of the eigenvalues found in Examples 5.6 through 5.8, and we will briefly discuss eigenvectors on the next section.

For Example 5.6

$$A = [-2 \ 1; 0 \ -1]; \text{lambda} = \text{eig}(A)$$

$$\text{lambda} = \\ -2 \\ -1$$

For Example 5.7

$$B = [5 \ 7 \ -5; 0 \ 4 \ -1; 2 \ 8 \ -3]; \text{lambda} = \text{eig}(B)$$

$$\text{lambda} = \\ 1.0000 \\ 3.0000 \\ 2.0000$$

For Example 5.8

$$C = [-1 \ 0; 2 \ -1]; \text{lambda} = \text{eig}(C)$$

$$\text{lambda} = \\ -1 \\ -1$$

### 5.5 Eigenvectors

Consider the relation

$$AX = \lambda X \tag{5.69}$$

where  $A$  is an  $n \times n$  matrix,  $X$  is a column vector, and  $\lambda$  is a scalar number. We can express this relation in matrix form as

$$\begin{bmatrix} a_{11} & a_{12} & \dots & a_{1n} \\ a_{21} & a_{22} & \dots & a_{2n} \\ \dots & \dots & \dots & \dots \\ a_{n1} & a_{n2} & \dots & a_{nn} \end{bmatrix} \begin{bmatrix} x_1 \\ x_2 \\ \dots \\ x_n \end{bmatrix} = \lambda \begin{bmatrix} x_1 \\ x_2 \\ \dots \\ x_n \end{bmatrix} \tag{5.70}$$

We write (5.70) as

$$(A - \lambda I)X = 0 \tag{5.71}$$

Then, (5.71) can be written as



$$\begin{bmatrix} (a_{11}-\lambda)x_1 & a_{12}x_2 & \dots & a_{1n}x_n \\ a_{21}x_1 & (a_{22}-\lambda)x_2 & \dots & a_{2n}x_n \\ \dots & \dots & \dots & \dots \\ a_{n1}x_1 & a_{n2}x_2 & \dots & (a_{nn}-\lambda)x_n \end{bmatrix} = 0 \quad (5.72)$$

The equations of (5.72) will have non-trivial solutions if and only if its determinant is zero<sup>\*</sup>, that is, if

$$\det \begin{bmatrix} (a_{11}-\lambda) & a_{12} & \dots & a_{1n} \\ a_{21} & (a_{22}-\lambda) & \dots & a_{2n} \\ \dots & \dots & \dots & \dots \\ a_{n1} & a_{n2} & \dots & (a_{nn}-\lambda) \end{bmatrix} = 0 \quad (5.73)$$

Expansion of the determinant of (5.73) results in a polynomial equation of degree  $n$  in  $\lambda$ , and it is called the *characteristic equation*.

We can express (5.73) in a compact form as

$$\det(A-\lambda I) = 0 \quad (5.74)$$

As we know, the roots  $\lambda$  of the characteristic equation are the eigenvalues of the matrix  $A$ , and corresponding to each eigenvalue  $\lambda$ , there is a non-trivial solution of the column vector  $X$ , i.e.,  $X \neq 0$ . This vector  $X$  is called *eigenvector*. Obviously, there is a different eigenvector for each eigenvalue. Eigenvectors are generally expressed as *unit eigenvectors*, that is, they are normalized to unit length. This is done by dividing each component of the eigenvector by the square root of the sum of the squares of their components, so that the sum of the squares of their components is equal to unity.

In many engineering applications the unit eigenvectors are chosen such that  $X \cdot X^T = I$  where  $X^T$  is the transpose of the eigenvector  $X$ , and  $I$  is the identity matrix.

Two vectors  $X$  and  $Y$  are said to be *orthogonal* if their inner (dot) product is zero. A set of eigenvectors constitutes an *orthonormal basis* if the set is normalized (expressed as unit eigenvectors) and these vector are mutually orthogonal. An orthonormal basis can be formed with the *Gram-Schmidt Orthogonalization Procedure*; it is beyond the scope of this chapter to discuss this procedure, and therefore it will not be discussed in this text. It can be found in Linear Algebra and Matrix Theory textbooks.

The example which follows, illustrates the relationships between a matrix  $A$ , its eigenvalues, and eigenvectors.

---

\* This is because we want the vector  $X$  in (5.71) to be a non-zero vector and the product  $(A-\lambda I)X$  to be zero.

### Example 5.9

Given the matrix

$$A = \begin{bmatrix} 5 & 7 & -5 \\ 0 & 4 & -1 \\ 2 & 8 & -3 \end{bmatrix}$$

- Find the eigenvalues of  $A$
- Find eigenvectors corresponding to each eigenvalue of  $A$
- Form a set of unit eigenvectors using the eigenvectors of part (b).

#### Solution:

- a. This is the same matrix as in Example 5.7, where we found the eigenvalues to be

$$\lambda_1 = 1 \quad \lambda_2 = 2 \quad \lambda_3 = 3$$

- b. We start with

$$AX = \lambda X$$

and we let

$$X = \begin{bmatrix} x_1 \\ x_2 \\ x_3 \end{bmatrix}$$

Then,

$$\begin{bmatrix} 5 & 7 & -5 \\ 0 & 4 & -1 \\ 2 & 8 & -3 \end{bmatrix} \begin{bmatrix} x_1 \\ x_2 \\ x_3 \end{bmatrix} = \lambda \begin{bmatrix} x_1 \\ x_2 \\ x_3 \end{bmatrix} \quad (5.75)$$

or

$$\begin{bmatrix} 5x_1 & 7x_2 & -5x_3 \\ 0 & 4x_2 & -x_3 \\ 2x_1 & 8x_2 & -3x_3 \end{bmatrix} = \begin{bmatrix} \lambda x_1 \\ \lambda x_2 \\ \lambda x_3 \end{bmatrix} \quad (5.76)$$

Equating corresponding rows and rearranging, we get

$$\begin{bmatrix} (5-\lambda)x_1 & 7x_2 & -5x_3 \\ 0 & (4-\lambda)x_2 & -x_3 \\ 2x_1 & 8x_2 & -(3-\lambda)x_3 \end{bmatrix} = \begin{bmatrix} 0 \\ 0 \\ 0 \end{bmatrix} \quad (5.77)$$

For  $\lambda = 1$ , (5.77) reduces to

$$\begin{aligned} 4x_1 + 7x_2 - 5x_3 &= 0 \\ 3x_2 - x_3 &= 0 \\ 2x_1 + 8x_2 - 4x_3 &= 0 \end{aligned} \quad (5.78)$$

By Cramer's rule, or MATLAB, we get the indeterminate values

$$x_1 = 0/0 \quad x_2 = 0/0 \quad x_3 = 0/0 \quad (5.79)$$

Since the unknowns  $x_1$ ,  $x_2$ , and  $x_3$  are scalars, we can assume that one of these, say  $x_2$ , is known, and solve  $x_1$  and  $x_3$  in terms of  $x_2$ . Then, we get  $x_1 = 2x_2$ , and  $x_3 = 3x_2$ .

Therefore, an eigenvector for  $\lambda = 1$  is

$$X_{\lambda=1} = \begin{bmatrix} x_1 \\ x_2 \\ x_3 \end{bmatrix} = \begin{bmatrix} 2x_2 \\ x_2 \\ 3x_2 \end{bmatrix} = x_2 \begin{bmatrix} 2 \\ 1 \\ 3 \end{bmatrix} = \begin{bmatrix} 2 \\ 1 \\ 3 \end{bmatrix} \quad (5.80)$$

since any eigenvector is a scalar multiple of the last vector in (5.80).

Similarly, for  $\lambda = 2$ , we get  $x_1 = x_2$ , and  $x_3 = 2x_2$ . Then, an eigenvector for  $\lambda = 2$  is

$$X_{\lambda=2} = \begin{bmatrix} x_1 \\ x_2 \\ x_3 \end{bmatrix} = \begin{bmatrix} x_2 \\ x_2 \\ 2x_2 \end{bmatrix} = x_2 \begin{bmatrix} 1 \\ 1 \\ 2 \end{bmatrix} = \begin{bmatrix} 1 \\ 1 \\ 2 \end{bmatrix} \quad (5.81)$$

Finally, for  $\lambda = 3$ , we get  $x_1 = -x_2$ , and  $x_3 = x_2$ . Then, an eigenvector for  $\lambda = 3$  is

$$X_{\lambda=3} = \begin{bmatrix} x_1 \\ x_2 \\ x_3 \end{bmatrix} = \begin{bmatrix} -x_2 \\ x_2 \\ x_2 \end{bmatrix} = x_2 \begin{bmatrix} -1 \\ 1 \\ 1 \end{bmatrix} = \begin{bmatrix} -1 \\ 1 \\ 1 \end{bmatrix} \quad (5.82)$$

- c. We find the unit eigenvectors by dividing the components of each vector by the square root of the sum of the squares of the components. These are:

$$\sqrt{2^2 + 1^2 + 3^2} = \sqrt{14}$$

$$\sqrt{1^2 + 1^2 + 2^2} = \sqrt{6}$$

$$\sqrt{(-1)^2 + 1^2 + 1^2} = \sqrt{3}$$

The unit eigenvectors are

$$\text{Unit } X_{\lambda=1} = \begin{bmatrix} \frac{2}{\sqrt{14}} \\ \frac{1}{\sqrt{14}} \\ \frac{3}{\sqrt{14}} \end{bmatrix} \quad \text{Unit } X_{\lambda=2} = \begin{bmatrix} \frac{1}{\sqrt{6}} \\ \frac{1}{\sqrt{6}} \\ \frac{2}{\sqrt{6}} \end{bmatrix} \quad \text{Unit } X_{\lambda=3} = \begin{bmatrix} \frac{-1}{\sqrt{3}} \\ \frac{1}{\sqrt{3}} \\ \frac{1}{\sqrt{3}} \end{bmatrix} \quad (5.83)$$

We observe that for the first unit eigenvector the sum of the squares is unity, that is,

$$\left(\frac{2}{\sqrt{14}}\right)^2 + \left(\frac{1}{\sqrt{14}}\right)^2 + \left(\frac{3}{\sqrt{14}}\right)^2 = \frac{4}{14} + \frac{1}{14} + \frac{9}{14} = 1 \quad (5.84)$$

and the same is true for the other two unit eigenvectors in (5.83).

### 5.6 Circuit Analysis with State Variables

In this section, we will present two examples to illustrate how the state variable method is used in circuit analysis.

#### Example 5.10

For the circuit of Figure 5.7, the initial conditions are  $i_L(0^-) = 0$ , and  $v_C(0^-) = 0.5$  V. Use the state variable method to compute  $i_L(t)$  and  $v_C(t)$ .

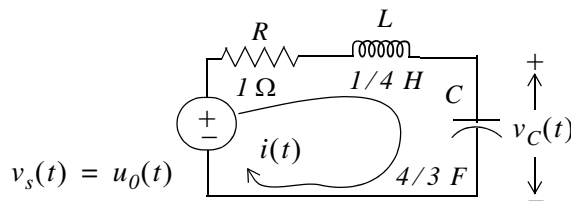


Figure 5.7. Circuit for Example 5.10

**Solution:**

For this example,

$$i = i_L$$

and

$$Ri_L + L\frac{di_L}{dt} + v_C = u_0(t)$$

Substitution of given values and rearranging, yields

$$\frac{1}{4}\frac{di_L}{dt} = (-1)i_L - v_C + 1$$

or

$$\frac{di_L}{dt} = -4i_L - 4v_C + 4 \quad (5.85)$$

Next, we define the state variables  $x_1 = i_L$  and  $x_2 = v_C$ . Then,

$$\dot{x}_1 = \frac{di_L}{dt} \quad (5.86)$$

and

$$\dot{x}_2 = \frac{dv_C}{dt}$$

Also,

$$i_L = C\frac{dv_C}{dt}$$

and thus,

$$x_1 = i_L = C\frac{dv_C}{dt} = C\dot{x}_2 = \frac{4}{3}\dot{x}_2$$

or

$$\dot{x}_2 = \frac{3}{4}x_1 \quad (5.87)$$

Therefore, from (5.85), (5.86), and (5.87), we get the state equations

$$\dot{x}_1 = -4x_1 - 4x_2 + 4$$

$$\dot{x}_2 = \frac{3}{4}x_1$$

and in matrix form,

$$\begin{bmatrix} \dot{x}_1 \\ \dot{x}_2 \end{bmatrix} = \begin{bmatrix} -4 & -4 \\ 3/4 & 0 \end{bmatrix} \begin{bmatrix} x_1 \\ x_2 \end{bmatrix} + \begin{bmatrix} 4 \\ 0 \end{bmatrix} u_0(t) \quad (5.88)$$

We will compute the solution of (5.88) using

---

## Chapter 5 State Variables and State Equations

---

$$x(t) = e^{A(t-t_0)}x_0 + e^{At} \int_{t_0}^t e^{-A\tau} b u(\tau) d\tau \quad (5.89)$$

where

$$A = \begin{bmatrix} -4 & -4 \\ 3/4 & 0 \end{bmatrix} \quad x_0 = \begin{bmatrix} i_L(0) \\ v_C(0) \end{bmatrix} = \begin{bmatrix} 0 \\ 1/2 \end{bmatrix} \quad b = \begin{bmatrix} 4 \\ 0 \end{bmatrix} \quad (5.90)$$

First, we compute the state transition matrix  $e^{At}$ . We find the eigenvalues from

$$\det[A - \lambda I] = 0$$

Then,

$$\begin{aligned} \det[A - \lambda I] &= \det \begin{bmatrix} -4 - \lambda & -4 \\ 3/4 & -\lambda \end{bmatrix} = 0 \\ &= (-\lambda)(-4 - \lambda) + 3 = 0 \\ &= \lambda^2 + 4\lambda + 3 = 0 \end{aligned}$$

Therefore,

$$\lambda_1 = -1 \quad \text{and} \quad \lambda_2 = -3$$

The next step is to find the coefficients  $a_i$ . Since  $A$  is a  $2 \times 2$  matrix, we only need the first two terms of the state transition matrix, that is,

$$e^{At} = a_0 I + a_1 A \quad (5.91)$$

The constants  $a_0$  and  $a_1$  are found from

$$\begin{aligned} a_0 + a_1 \lambda_1 &= e^{\lambda_1 t} \\ a_0 + a_1 \lambda_2 &= e^{\lambda_2 t} \end{aligned}$$

and with  $\lambda_1 = -1$  and  $\lambda_2 = -3$ , we get

$$\begin{aligned} a_0 - a_1 &= e^{-t} \\ a_0 - 3a_1 &= e^{-3t} \end{aligned} \quad (5.92)$$

Simultaneous solution of (5.92) yields

$$\begin{aligned} a_0 &= 1.5e^{-t} - 0.5e^{-3t} \\ a_1 &= 0.5e^{-t} - 0.5e^{-3t} \end{aligned} \quad (5.93)$$

We now substitute these values into (5.91), and we get

$$e^{At} = (1.5e^{-t} - 0.5e^{-3t}) \begin{bmatrix} 1 & 0 \\ 0 & 1 \end{bmatrix} + (0.5e^{-t} - 0.5e^{-2t}) \begin{bmatrix} -4 & -4 \\ 3/4 & 0 \end{bmatrix}$$

$$= \begin{bmatrix} 1.5e^{-t} - 0.5e^{-3t} & 0 \\ 0 & 1.5e^{-t} - 0.5e^{-3t} \end{bmatrix} + \begin{bmatrix} -2e^{-t} + 2e^{-3t} & -2e^{-t} + 2e^{-3t} \\ \frac{3}{8}e^{-t} - \frac{3}{8}e^{-3t} & 0 \end{bmatrix}$$

or

$$e^{At} = \begin{bmatrix} -0.5e^{-t} + 1.5e^{-3t} & -2e^{-t} + 2e^{-3t} \\ \frac{3}{8}e^{-t} - \frac{3}{8}e^{-3t} & 1.5e^{-t} - 0.5e^{-3t} \end{bmatrix}$$

The initial conditions vector is the second vector in (5.90); then, the first term of (5.89) becomes

$$e^{At}x_0 = \begin{bmatrix} -0.5e^{-t} + 1.5e^{-3t} & -2e^{-t} + 2e^{-3t} \\ \frac{3}{8}e^{-t} - \frac{3}{8}e^{-3t} & 1.5e^{-t} - 0.5e^{-3t} \end{bmatrix} \begin{bmatrix} 0 \\ 1/2 \end{bmatrix}$$

or

$$e^{At}x_0 = \begin{bmatrix} -e^{-t} + e^{-3t} \\ 0.75e^{-t} - 0.25e^{-3t} \end{bmatrix} \quad (5.94)$$

We also need to evaluate the integral on the right side of (5.89). From (5.90)

$$b = \begin{bmatrix} 4 \\ 0 \end{bmatrix} = \begin{bmatrix} 1 \\ 0 \end{bmatrix} 4$$

and denoting this integral as *Int*, we have

$$Int = \int_{t_0}^t \begin{bmatrix} -0.5e^{-(t-\tau)} + 1.5e^{-3(t-\tau)} & -2e^{-(t-\tau)} + 2e^{-3(t-\tau)} \\ \frac{3}{8}e^{-(t-\tau)} - \frac{3}{8}e^{-3(t-\tau)} & 1.5e^{-(t-\tau)} - 0.5e^{-3(t-\tau)} \end{bmatrix} \begin{bmatrix} 1 \\ 0 \end{bmatrix} 4d\tau$$

or

$$Int = \int_{t_0}^t \begin{bmatrix} -0.5e^{-(t-\tau)} + 1.5e^{-3(t-\tau)} \\ \frac{3}{8}e^{-(t-\tau)} - \frac{3}{8}e^{-3(t-\tau)} \end{bmatrix} 4d\tau \quad (5.95)$$

## Chapter 5 State Variables and State Equations

The integration in (5.95) is with respect to  $\tau$ ; then, integrating the column vector under the integral, we get

$$Int = 4 \left[ \begin{array}{c} -0.5e^{-(t-\tau)} + 0.5e^{-3(t-\tau)} \\ 0.375e^{-(t-\tau)} - 0.125e^{-3(t-\tau)} \end{array} \right] \Bigg|_{\tau=0}^t$$

or

$$Int = 4 \begin{bmatrix} -0.5 + 0.5 \\ 0.375 - 0.125 \end{bmatrix} - 4 \begin{bmatrix} -0.5e^{-t} + 0.5e^{-3t} \\ 0.375e^{-t} - 0.125e^{-3t} \end{bmatrix} = 4 \begin{bmatrix} 0.5e^{-t} - 0.5e^{-3t} \\ 0.25 - 0.375e^{-t} + 0.125e^{-3t} \end{bmatrix}$$

By substitution of these values, the solution of

$$x(t) = e^{A(t-t_0)} x_0 + e^{At} \int_{t_0}^t e^{-A\tau} bu(\tau) d\tau$$

is

$$\begin{bmatrix} x_1 \\ x_2 \end{bmatrix} = \begin{bmatrix} -e^{-t} + e^{-3t} \\ 0.75e^{-t} - 0.25e^{-3t} \end{bmatrix} + 4 \begin{bmatrix} 0.5e^{-t} - 0.5e^{-3t} \\ 0.25 - 0.375e^{-t} + 0.125e^{-3t} \end{bmatrix} = \begin{bmatrix} e^{-t} - e^{-3t} \\ 1 - 0.75e^{-t} + 0.25e^{-3t} \end{bmatrix}$$

Then,

$$x_1 = i_L = e^{-t} - e^{-3t} \quad (5.96)$$

and

$$x_2 = v_C = 1 - 0.75e^{-t} + 0.25e^{-3t} \quad (5.97)$$

Other variables of the circuit can now be computed from (5.96) and (5.97). For example, the voltage across the inductor is

$$v_L = L \frac{di_L}{dt} = \frac{1}{4} \frac{d}{dt} (e^{-t} - e^{-3t}) = -\frac{1}{4} e^{-t} + \frac{3}{4} e^{-3t}$$

### Example 5.11

A circuit is described by the state equation

$$\dot{x} = Ax + bu \quad (5.98)$$

where

$$A = \begin{bmatrix} 1 & 0 \\ 1 & -1 \end{bmatrix} \quad x_0 = \begin{bmatrix} 1 \\ 0 \end{bmatrix} \quad b = \begin{bmatrix} -1 \\ 1 \end{bmatrix} \quad \text{and} \quad u = \delta(t) \quad (5.99)$$



Compute the state vector

$$x = \begin{bmatrix} x_1 \\ x_2 \end{bmatrix}$$

**Solution:**

We compute the eigenvalues from

$$\det[A - \lambda I] = 0$$

For this example,

$$\begin{aligned} \det[A - \lambda I] &= \det \begin{bmatrix} I - \lambda & 0 \\ I & -I - \lambda \end{bmatrix} = 0 \\ &= (I - \lambda)(-I - \lambda) = 0 \end{aligned}$$

Then,

$$\lambda_1 = 1 \text{ and } \lambda_2 = -1$$

Since  $A$  is a  $2 \times 2$  matrix, we only need the first two terms of the state transition matrix to find the coefficients  $a_i$ , that is,

$$e^{At} = a_0 I + a_1 A \tag{5.100}$$

The constants  $a_0$  and  $a_1$  are found from

$$\begin{aligned} a_0 + a_1 \lambda_1 &= e^{\lambda_1 t} \\ a_0 + a_1 \lambda_2 &= e^{\lambda_2 t} \end{aligned} \tag{5.101}$$

and with  $\lambda_1 = 1$  and  $\lambda_2 = -1$ , we get

$$\begin{aligned} a_0 + a_1 &= e^t \\ a_0 - a_1 &= e^{-t} \end{aligned} \tag{5.102}$$

and simultaneous solution of (5.102) yields

$$\begin{aligned} a_0 &= \frac{e^t + e^{-t}}{2} = \cosh t \\ a_1 &= \frac{e^t - e^{-t}}{2} = \sinh t \end{aligned}$$

By substitution of these values into (5.100), we get

$$e^{At} = \cosh t I + \sinh t A = \cosh t \begin{bmatrix} 1 & 0 \\ 0 & 1 \end{bmatrix} + \sinh t \begin{bmatrix} 1 & 0 \\ 1 & -1 \end{bmatrix} = \begin{bmatrix} \cosh t + \sinh t & 0 \\ \sinh t & \cosh t - \sinh t \end{bmatrix} \quad (5.103)$$

The values of the vector  $\mathbf{x}$  are found from

$$x(t) = e^{A(t-t_0)} x_0 + e^{At} \int_{t_0}^t e^{-A\tau} b u(\tau) d\tau = e^{At} x_0 + e^{At} \int_0^t e^{-A\tau} b \delta(\tau) d\tau \quad (5.104)$$

Using the sifting property of the delta function we find that (5.104) reduces to

$$\begin{aligned} x(t) &= e^{At} x_0 + e^{At} b = e^{At} (x_0 + b) = e^{At} \left\{ \begin{bmatrix} 1 \\ 0 \end{bmatrix} + \begin{bmatrix} -1 \\ 1 \end{bmatrix} \right\} = e^{At} \begin{bmatrix} 0 \\ 1 \end{bmatrix} \\ &= \begin{bmatrix} \cosh t + \sinh t & 0 \\ \sinh t & \cosh t - \sinh t \end{bmatrix} \begin{bmatrix} 0 \\ 1 \end{bmatrix} = \begin{bmatrix} x_1 \\ x_2 \end{bmatrix} \end{aligned}$$

Therefore,

$$x = \begin{bmatrix} x_1 \\ x_2 \end{bmatrix} = \begin{bmatrix} 0 \\ \cosh t - \sinh t \end{bmatrix} = \begin{bmatrix} 0 \\ e^{-t} \end{bmatrix} \quad (5.105)$$

## 5.7 Relationship between State Equations and Laplace Transform

In this section, we will show that the state transition matrix can be computed from the Inverse Laplace transform. We will also show that the transfer function can be found from the coefficient matrices of the state equations.

Consider the state equation

$$\dot{x} = Ax + bu \quad (5.106)$$

Taking the Laplace of both sides of (5.106), we get

$$sX(s) - x(0) = AX(s) + bU(s)$$

or

$$(sI - A)X(s) = x(0) + bU(s) \quad (5.107)$$

Multiplying both sides of (5.107) by  $(sI - A)^{-1}$ , we get

$$X(s) = (sI - A)^{-1} x(0) + (sI - A)^{-1} bU(s) \quad (5.108)$$

Comparing (5.108) with

$$x(t) = e^{At} x_0 + e^{At} \int_0^t e^{-A\tau} b u(\tau) d\tau \quad (5.109)$$

we observe that the right side of (5.108) is the Laplace transform of (5.109). Therefore, we can compute the state transition matrix  $e^{At}$  from the Inverse Laplace of  $(sI - A)^{-1}$ , that is, we can use the relation

$$e^{At} = \mathcal{L}^{-1} \{ (sI - A)^{-1} \} \quad (5.110)$$

Next, we consider the output state equation

$$y = Cx + du \quad (5.111)$$

Taking the Laplace of both sides of (5.111), we get

$$Y(s) = CX(s) + dU(s) \quad (5.112)$$

and using (5.108), we get

$$Y(s) = C(sI - A)^{-1} x(0) + [C(sI - A)^{-1} b + d] U(s) \quad (5.113)$$

If the initial condition  $x(0) = 0$ , (5.113) reduces to

$$Y(s) = [C(sI - A)^{-1} b + d] U(s) \quad (5.114)$$

In (5.114),  $U(s)$  is the Laplace transform of the input  $u(t)$ ; then, division of both sides by  $U(s)$  yields the transfer function

$$G(s) = \frac{Y(s)}{U(s)} = C(sI - A)^{-1} b + d \quad (5.115)$$

### Example 5.12

In the circuit of Figure 5.8, all initial conditions are zero. Compute the state transition matrix  $e^{At}$  using the Inverse Laplace transform method.

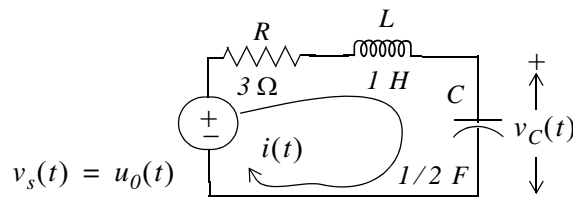


Figure 5.8. Circuit for Example 5.12

---

## Chapter 5 State Variables and State Equations

---

### Solution:

For this circuit,

$$i = i_L$$

and

$$Ri_L + L\frac{di_L}{dt} + v_C = u_0(t)$$

Substitution of given values and rearranging,

$$\frac{di_L}{dt} = -3i_L - v_C + 1 \quad (5.116)$$

Now, we define the state variables

$$x_1 = i_L$$

and

$$x_2 = v_C$$

Then,

$$\dot{x}_1 = \frac{di_L}{dt} = -3i_L - v_C + 1 \quad (5.117)$$

and

$$\dot{x}_2 = \frac{dv_C}{dt}$$

Also,

$$i_L = C\frac{dv_C}{dt} = 0.5\frac{dv_C}{dt} \quad (5.118)$$

and thus,

$$x_1 = i_L = 0.5\frac{dv_C}{dt} = 0.5\dot{x}_2$$

or

$$\dot{x}_2 = 2x_1 \quad (5.119)$$

Therefore, from (5.117) and (5.119) we get the state equations

$$\begin{aligned} \dot{x}_1 &= -3x_1 - x_2 + 1 \\ \dot{x}_2 &= 2x_1 \end{aligned} \quad (5.120)$$

and in matrix form,

$$\begin{bmatrix} \dot{x}_1 \\ \dot{x}_2 \end{bmatrix} = \begin{bmatrix} -3 & -1 \\ 2 & 0 \end{bmatrix} \begin{bmatrix} x_1 \\ x_2 \end{bmatrix} + \begin{bmatrix} 1 \\ 0 \end{bmatrix} 1 \quad (5.121)$$

By inspection,

$$A = \begin{bmatrix} -3 & -1 \\ 2 & 0 \end{bmatrix} \quad (5.122)$$

Now, we will find the state transition matrix from

$$e^{At} = \mathcal{L}^{-1} \{ (sI - A)^{-1} \} \quad (5.123)$$

where

$$(sI - A) = \begin{bmatrix} s & 0 \\ 0 & s \end{bmatrix} - \begin{bmatrix} -3 & -1 \\ 2 & 0 \end{bmatrix} = \begin{bmatrix} s+3 & 1 \\ -2 & s \end{bmatrix}$$

Then,

$$(sI - A)^{-1} = \frac{\text{adj}(sI - A)}{\det(sI - A)} = \frac{1}{s^2 + 3s + 2} \begin{bmatrix} s & -1 \\ 2 & s+3 \end{bmatrix} = \begin{bmatrix} \frac{s}{(s+1)(s+2)} & \frac{-1}{(s+1)(s+2)} \\ \frac{2}{(s+1)(s+2)} & \frac{s+3}{(s+1)(s+2)} \end{bmatrix}$$

We find the Inverse Laplace of each term by partial fraction expansion. Then,

$$e^{At} = \mathcal{L}^{-1} \{ (sI - A)^{-1} \} = \begin{bmatrix} -e^{-t} + 2e^{-2t} & -e^{-t} + e^{-2t} \\ 2e^{-t} - 2e^{-2t} & 2e^{-t} - e^{-2t} \end{bmatrix}$$

Now, we can find the state variables representing the inductor current and the capacitor voltage from

$$x(t) = e^{At} x_0 + e^{At} \int_0^t e^{-A\tau} b u(\tau) d\tau$$

using the procedure of Example 5.11.

MATLAB provides two very useful functions to convert state space (state equations), to transfer function (s-domain), and vice versa. The function **ss2tf** (state space to transfer function) converts the state space equations

$$\begin{aligned} \dot{x} &= Ax + Bu * \\ y &= Cx + Du \end{aligned} \quad (5.124)$$

to the rational transfer function form

$$G(s) = \frac{N(s)}{D(s)} \quad (5.125)$$

---

\* We have used capital letters for vectors  $b$  and  $c$  to be consistent with MATLAB's designations.

---

## Chapter 5 State Variables and State Equations

---

This is used with the statement **[num,den]=ss2tf(A,B,C,D,iu)** where **A, B, C, D** are the matrices of (5.124) and **iu** is *I* if there is only one input. The MATLAB **help** command provides the following information:

**help ss2tf**

SS2TF State-space to transfer function conversion.  
[NUM,DEN] = SS2TF(A,B,C,D,iu) calculates the transfer function:

$$G(s) = \frac{\text{NUM}(s)}{\text{DEN}(s)} = \frac{C(sI-A)^{-1}B + D}{\text{DEN}(s)}$$

of the system:

$$\begin{aligned} \dot{x} &= Ax + Bu \\ y &= Cx + Du \end{aligned}$$

from the *iu*'th input. Vector DEN contains the coefficients of the denominator in descending powers of *s*. The numerator coefficients are returned in matrix NUM with as many rows as there are outputs *y*.

See also TF2SS

The other function, **tf2ss**, converts the transfer function of (5.125) to the state-space equations of (5.124). It is used with the statement **[A,B,C,D]=tf2ss(num,den)** where **A, B, C,** and **D** are the matrices of (5.124), and **num, den** are *N(s)* and *D(s)* of (5.125) respectively. The MATLAB **help** command provides the following information:

**help tf2ss**

TF2SS Transfer function to state-space conversion.  
[A,B,C,D] = TF2SS(NUM,DEN) calculates the state-space representation:

$$\begin{aligned} \dot{x} &= Ax + Bu \\ y &= Cx + Du \end{aligned}$$

of the system:

$$G(s) = \frac{\text{NUM}(s)}{\text{DEN}(s)}$$

from a single input. Vector DEN must contain the coefficients of the denominator in descending powers of *s*. Matrix NUM must con-

tain the numerator coefficients with as many rows as there are outputs  $y$ . The  $A, B, C, D$  matrices are returned in controller canonical form. This calculation also works for discrete systems. To avoid confusion when using this function with discrete systems, always use a numerator polynomial that has been padded with zeros to make it the same length as the denominator. See the User's guide for more details.

See also SS2TF.

### Example 5.13

For the circuit of Figure 5.9,

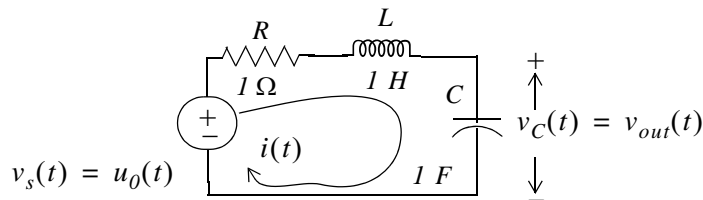


Figure 5.9. Circuit for Example 5.13

a. Derive the state equations and express them in matrix form as

$$\begin{aligned} \dot{x} &= Ax + Bu \\ y &= Cx + Du \end{aligned}$$

b. Derive the transfer function

$$G(s) = \frac{N(s)}{D(s)}$$

c. Verify your answers with MATLAB.

### Solution:

a. The differential equation describing the circuit is

$$Ri + L \frac{di}{dt} + v_C = u_0(t)$$

and with the given values,

$$i + \frac{di}{dt} + v_C = u_0(t)$$

or

$$\frac{di}{dt} = -i - v_C + u_0(t)$$

## Chapter 5 State Variables and State Equations

We let

$$x_1 = i_L = i$$

and

$$x_2 = v_C = v_{out}$$

Then,

$$\dot{x}_1 = \frac{di}{dt}$$

and

$$\dot{x}_2 = \frac{dv_c}{dt} = x_1$$

Thus, the state equations are

$$\dot{x}_1 = -x_1 - x_2 + u_0(t)$$

$$\dot{x}_2 = x_1$$

$$y = x_2$$

and in matrix form,

$$\begin{aligned} \dot{x} = Ax + Bu &\leftrightarrow \begin{bmatrix} \dot{x}_1 \\ \dot{x}_2 \end{bmatrix} = \begin{bmatrix} -1 & -1 \\ 1 & 0 \end{bmatrix} \begin{bmatrix} x_1 \\ x_2 \end{bmatrix} + \begin{bmatrix} 1 \\ 0 \end{bmatrix} u_0(t) \\ y = Cx + Du &\leftrightarrow y = \begin{bmatrix} 0 & 1 \end{bmatrix} \begin{bmatrix} x_1 \\ x_2 \end{bmatrix} + \begin{bmatrix} 0 \end{bmatrix} u_0(t) \end{aligned} \quad (5.126)$$

b. The  $s$ -domain circuit is

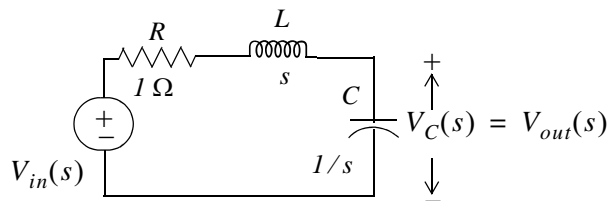


Figure 5.10. Transformed circuit for Example 5.13

By the voltage division expression,

$$V_{out}(s) = \frac{1/s}{1 + s + 1/s} V_{in}(s)$$

or



$$\frac{V_{out}(s)}{V_{in}(s)} = \frac{1}{s^2 + s + 1}$$

Therefore,

$$G(s) = \frac{V_{out}(s)}{V_{in}(s)} = \frac{1}{s^2 + s + 1} \quad (5.127)$$

```
c.
A = [-1 -1; 1 0]; B = [1 0]'; C = [0 1]; D = [0];% The matrices of (5.126)
[num, den] = ss2tf(A, B, C, D, 1)           % Verify coefficients of G(s) in (5.127)

num =
    0    0    1
den =
    1.0000    1.0000    1.0000

num = [0 0 1]; den = [1 1 1];           % The coefficients of G(s) in (5.127)
[A B C D] = tf2ss(num, den)           % Verify the matrices of (5.126)

A =
   -1    -1
    1     0
B =
    1
    0
C =
    0    1
D =
    0
```

### 5.8 Summary

- An  $n$ th-order differential equation can be resolved to  $n$  first-order simultaneous differential equations with a set of auxiliary variables called state variables. The resulting first-order differential equations are called state space equations, or simply state equations.
- The state space equations can be obtained either from the  $n$ th-order differential equation, or directly from the network, provided that the state variables are chosen appropriately.
- When we obtain the state equations directly from given circuits, we choose the state variables to represent inductor currents and capacitor voltages.
- The state variable method offers the advantage that it can also be used with non-linear and time-varying devices.
- If a circuit contains only one energy-storing device, the state equations are written as

$$\begin{aligned}\dot{x} &= \alpha x + \beta u \\ y &= k_1 x + k_2 u\end{aligned}$$

where  $\alpha$ ,  $\beta$ ,  $k_1$ , and  $k_2$  are scalar constants, and the initial condition, if non-zero, is denoted as

$$x_0 = x(t_0) \quad (5.128)$$

- If  $\alpha$  and  $\beta$  are scalar constants, the solution of  $\dot{x} = \alpha x + \beta u$  with initial condition  $x_0 = x(t_0)$  is obtained from the relation

$$x(t) = e^{\alpha(t-t_0)} x_0 + e^{\alpha t} \int_{t_0}^t e^{-\alpha\tau} \beta u(\tau) d\tau$$

- The solution of the state equations pair

$$\begin{aligned}\dot{x} &= Ax + bu \\ y &= Cx + du\end{aligned}$$

where  $A$  and  $C$  are  $2 \times 2$  or higher order matrices, and  $b$  and  $d$  are column vectors with two or more rows, entails the computation of the state transition matrix  $e^{At}$ , and integration of

$$x(t) = e^{A(t-t_0)} x_0 + e^{At} \int_{t_0}^t e^{-A\tau} bu(\tau) d\tau$$

- The eigenvalues  $\lambda_i$ , where  $i = 1, 2, \dots, n$ , of an  $n \times n$  matrix  $A$  are the roots of the  $n$ th order polynomial

$$\det[A - \lambda I] = 0$$

where  $I$  is the  $n \times n$  identity matrix.

- We can use the MATLAB **eig(x)** function to find the eigenvalues of an  $n \times n$  matrix.
- The Cayley-Hamilton theorem states that a matrix can be expressed as an  $(n - 1)$ th degree polynomial in terms of the matrix  $A$  as

$$e^{At} = a_0I + a_1A + a_2A^2 + \dots + a_{n-1}A^{n-1}$$

where the coefficients  $a_i$  are functions of the eigenvalues  $\lambda$ .

- If all eigenvalues of a given matrix  $A$  are distinct, that is, if  $\lambda_1 \neq \lambda_2 \neq \lambda_3 \neq \dots \neq \lambda_n$ , the coefficients  $a_i$  are found from the simultaneous solution of the system of equations

$$\begin{aligned} a_0 + a_1\lambda_1 + a_2\lambda_1^2 + \dots + a_{n-1}\lambda_1^{n-1} &= e^{\lambda_1 t} \\ a_0 + a_1\lambda_2 + a_2\lambda_2^2 + \dots + a_{n-1}\lambda_2^{n-1} &= e^{\lambda_2 t} \\ &\dots \\ a_0 + a_1\lambda_n + a_2\lambda_n^2 + \dots + a_{n-1}\lambda_n^{n-1} &= e^{\lambda_n t} \end{aligned}$$

- If some or all eigenvalues of matrix  $A$  are repeated, that is, if  $\lambda_1 = \lambda_2 = \lambda_3 \dots = \lambda_m, \lambda_{m+1}, \lambda_n$ , the coefficients  $a_i$  of the state transition matrix are found from the simultaneous solution of the system of equations

$$\begin{aligned} a_0 + a_1\lambda_1 + a_2\lambda_1^2 + \dots + a_{n-1}\lambda_1^{n-1} &= e^{\lambda_1 t} \\ \frac{d}{d\lambda_1}(a_0 + a_1\lambda_1 + a_2\lambda_1^2 + \dots + a_{n-1}\lambda_1^{n-1}) &= \frac{d}{d\lambda_1} e^{\lambda_1 t} \\ \frac{d^2}{d\lambda_1^2}(a_0 + a_1\lambda_1 + a_2\lambda_1^2 + \dots + a_{n-1}\lambda_1^{n-1}) &= \frac{d^2}{d\lambda_1^2} e^{\lambda_1 t} \\ &\dots \\ \frac{d^{m-1}}{d\lambda_1^{m-1}}(a_0 + a_1\lambda_1 + a_2\lambda_1^2 + \dots + a_{n-1}\lambda_1^{n-1}) &= \frac{d^{m-1}}{d\lambda_1^{m-1}} e^{\lambda_1 t} \\ a_0 + a_1\lambda_{m+1} + a_2\lambda_{m+1}^2 + \dots + a_{n-1}\lambda_{m+1}^{n-1} &= e^{\lambda_{m+1} t} \\ &\dots \\ a_0 + a_1\lambda_n + a_2\lambda_n^2 + \dots + a_{n-1}\lambda_n^{n-1} &= e^{\lambda_n t} \end{aligned}$$

- A column vector  $X$  that satisfies the relation

$$AX = \lambda X$$

---

## Chapter 5 State Variables and State Equations

---

where  $A$  is an  $n \times n$  matrix and  $\lambda$  is a scalar number is called an eigenvector.

$$\det(A - \lambda I) = 0 \quad (5.129)$$

- There is a different eigenvector for each eigenvalue.
- Eigenvectors are generally expressed as unit eigenvectors, that is, they are normalized to unit length. This is done by dividing each component of the eigenvector by the square root of the sum of the squares of their components, so that the sum of the squares of their components is equal to unity.
- Two vectors  $X$  and  $Y$  are said to be *orthogonal* if their inner (dot) product is zero.
- A set of eigenvectors constitutes an orthonormal basis if the set is normalized (expressed as unit eigenvectors) and these vector are mutually orthogonal.
- The state transition matrix can be computed from the Inverse Laplace transform using the relation

$$e^{At} = \mathcal{L}^{-1}\{(sI - A)^{-1}\}$$

- If  $U(s)$  is the Laplace transform of the input  $u(t)$  and  $Y(s)$  is the Laplace transform of the output  $y(t)$ , the transfer function can be computed using the relation

$$G(s) = \frac{Y(s)}{U(s)} = C(sI - A)^{-1}b + d$$

- MATLAB provides two very useful functions to convert state space (state equations), to transfer function (s-domain), and vice versa. The function **ss2tf** (state space to transfer function) converts the state space equations to the transfer function equivalent, and the function **tf2ss**, converts the transfer function to state-space equations.

### 5.9 Exercises

1. Express the integrodifferential equation below as a matrix of state equations where  $k_1, k_2,$  and  $k_3$  are constants.

$$\frac{dv^2}{dt^2} + k_3 \frac{dv}{dt} + k_2 v + k_1 \int_0^t v dt = \sin 3t + \cos 3t$$

2. Express the matrix of the state equations below as a single differential equation, and let  $x(y) = y(t)$ .

$$\begin{bmatrix} \dot{x}_1 \\ \dot{x}_2 \\ \dot{x}_3 \\ \dot{x}_4 \end{bmatrix} = \begin{bmatrix} 0 & 1 & 0 & 0 \\ 0 & 0 & 1 & 0 \\ 0 & 0 & 0 & 1 \\ -1 & -2 & -3 & -4 \end{bmatrix} \cdot \begin{bmatrix} x_1 \\ x_2 \\ x_3 \\ x_4 \end{bmatrix} + \begin{bmatrix} 0 \\ 0 \\ 0 \\ 1 \end{bmatrix} u(t)$$

3. For the circuit of Figure 5.11, all initial conditions are zero, and  $u(t)$  is any input. Write state equations in matrix form.

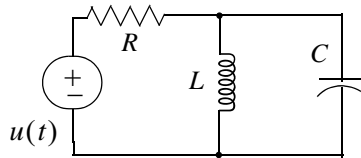


Figure 5.11. Circuit for Exercise 3

4. In the circuit of Figure 5.12, all initial conditions are zero. Write state equations in matrix form.

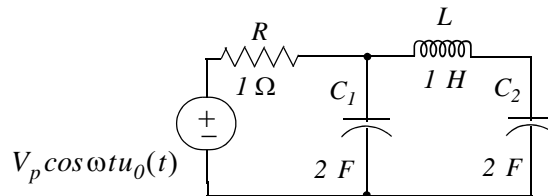


Figure 5.12. Circuit for Exercise 4

5. In the circuit of Figure 5.13,  $i_L(0^-) = 2 \text{ A}$ . Use the state variable method to find  $i_L(t)$  for  $t > 0$ .

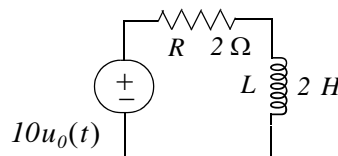


Figure 5.13. Circuit for Exercise 5

---

## Chapter 5 State Variables and State Equations

---

6. Compute the eigenvalues of the matrices  $A$ ,  $B$ , and  $C$  below.

$$A = \begin{bmatrix} 1 & 2 \\ 3 & -1 \end{bmatrix} \quad B = \begin{bmatrix} a & 0 \\ -a & b \end{bmatrix} \quad C = \begin{bmatrix} 0 & 1 & 0 \\ 0 & 0 & 1 \\ -6 & -11 & -6 \end{bmatrix}$$

Hint: One of the eigenvalues of matrix  $C$  is  $-1$ .

7. Compute  $e^{At}$  given that

$$A = \begin{bmatrix} 0 & 1 & 0 \\ 0 & 0 & 1 \\ -6 & -11 & -6 \end{bmatrix}$$

Observe that this is the same matrix as  $C$  of Exercise 6.

8. Find the solution of the matrix state equation  $\dot{x} = Ax + bu$  given that

$$A = \begin{bmatrix} 1 & 0 \\ -2 & 2 \end{bmatrix}, \quad b = \begin{bmatrix} 1 \\ 2 \end{bmatrix}, \quad x_0 = \begin{bmatrix} -1 \\ 0 \end{bmatrix}, \quad u = \delta(t), \quad t_0 = 0$$

9. In the circuit of Figure 5.14,  $i_L(0^-) = 0$ , and  $v_C(0^-) = 1$  V.

- Write state equations in matrix form.
- Compute  $e^{At}$  using the Inverse Laplace transform method.
- Find  $i_L(t)$  and  $v_C(t)$  for  $t > 0$ .

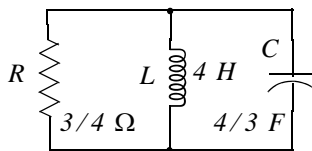


Figure 5.14. Circuit for Exercise 9

## 5.10 Solutions to Exercises

1. Differentiating the given integrodifferential equation with respect to  $t$  we get

$$\frac{dv^3}{dt^3} + k_3 \frac{dv^2}{dt^2} + k_2 \frac{dv}{dt} + k_1 v = 3 \cos 3t - 3 \sin 3t = 3(\cos 3t - \sin 3t)$$

or

$$\frac{dv^3}{dt^3} = -k_3 \frac{dv^2}{dt^2} - k_2 \frac{dv}{dt} - k_1 v + 3(\cos 3t - \sin 3t) \quad (1)$$

We let

$$v = x_1 \quad \frac{dv}{dt} = x_2 = \dot{x}_1 \quad \frac{dv^2}{dt^2} = x_3 = \dot{x}_2$$

Then,

$$\frac{dv^3}{dt^3} = \dot{x}_3$$

and by substitution into (1)

$$\dot{x}_3 = -k_1 x_1 - k_2 x_2 - k_3 x_3 + 3(\cos 3t - \sin 3t)$$

and thus the state equations are

$$\dot{x}_1 = x_2$$

$$\dot{x}_2 = x_3$$

$$\dot{x}_3 = -k_1 x_1 - k_2 x_2 - k_3 x_3 + 3(\cos 3t - \sin 3t)$$

and in matrix form

$$\begin{bmatrix} \dot{x}_1 \\ \dot{x}_2 \\ \dot{x}_3 \end{bmatrix} = \begin{bmatrix} 0 & 1 & 0 \\ 0 & 0 & 1 \\ -k_1 & -k_2 & -k_3 \end{bmatrix} \cdot \begin{bmatrix} x_1 \\ x_2 \\ x_3 \end{bmatrix} + \begin{bmatrix} 0 \\ 0 \\ 1 \end{bmatrix} \cdot 3(\cos 3t - \sin 3t)$$

2.

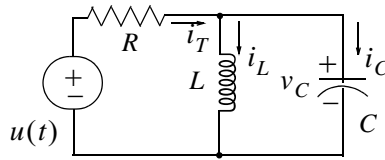
Expansion of the given matrix yields

$$\dot{x}_1 = x_2 \quad \dot{x}_2 = x_3 \quad \dot{x}_3 = x_4 \quad \dot{x}_4 = -x_1 - 2x_2 - 3x_3 - 4x_4 + u(t)$$

Letting  $x = y$  we get

$$\frac{dy^4}{dt^4} + 4 \frac{dy^3}{dt^3} + 3 \frac{dy^2}{dt^2} + 2 \frac{dy}{dt} + y = u(t)$$

3.



We let  $i_L = x_1$  and  $v_C = x_2$ . By KCL,  $i_T = i_L + i_C$  or

$$\frac{u(t) - v_C}{R} = i_L + C \frac{dv_C}{dt}$$

or

$$\frac{u(t) - x_2}{R} = x_1 + C \dot{x}_2$$

Also,

$$x_2 = L \dot{x}_1$$

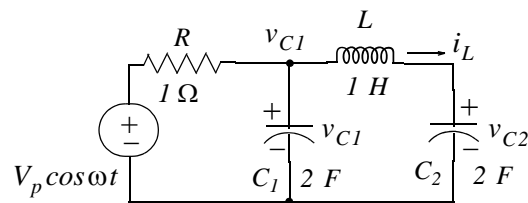
Then,

$$\dot{x}_1 = \frac{1}{L} x_2 \text{ and } \dot{x}_2 = -\frac{1}{C} x_1 - \frac{1}{RC} x_2 + \frac{1}{RC} u(t)$$

and in matrix form

$$\begin{bmatrix} \dot{x}_1 \\ \dot{x}_2 \end{bmatrix} = \begin{bmatrix} 0 & 1/L \\ -1/C & -1/RC \end{bmatrix} \cdot \begin{bmatrix} x_1 \\ x_2 \end{bmatrix} + \begin{bmatrix} 0 \\ 1/RC \end{bmatrix} \cdot u(t)$$

4.



We let  $i_L = x_1$ ,  $v_{C1} = x_2$ , and  $v_{C2} = x_3$ . By KCL

$$\frac{v_{C1} - V_p \cos \omega t}{1} + 2 \frac{dv_{C1}}{dt} + i_L = 0 \text{ or } x_2 - V_p \cos \omega t + 2 \dot{x}_2 + x_1 = 0$$

or

$$\dot{x}_2 = -\frac{1}{2} x_1 - \frac{1}{2} x_2 + \frac{1}{2} V_p \cos \omega t \quad (1)$$

By KVL



$$v_{C1} = L \frac{di_L}{dt} + v_{C2} \text{ or } x_2 = L\dot{x}_1 + x_3 \text{ or } \dot{x}_1 = x_2 - x_3 \quad (2)$$

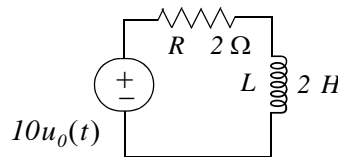
Also,

$$i_L = C \frac{dv_{C2}}{dt} \text{ or } x_1 = 2\dot{x}_3 \text{ or } \dot{x}_3 = \frac{1}{2}x_1 \quad (3)$$

Combining (1), (2), and (3) into matrix form we get

$$\begin{bmatrix} \dot{x}_1 \\ \dot{x}_2 \\ \dot{x}_3 \end{bmatrix} = \begin{bmatrix} 0 & 1 & -1 \\ -1/2 & -1/2 & 0 \\ 1/2 & 0 & 0 \end{bmatrix} \cdot \begin{bmatrix} x_1 \\ x_2 \\ x_3 \end{bmatrix} + \begin{bmatrix} 0 \\ 1/2 \\ 0 \end{bmatrix} \cdot V_p \cos \omega t$$

5.



From (5.21) of Example 5.4

$$\dot{x} = -\frac{R}{L}x + \frac{1}{L}v_S u_0(t)$$

For this exercise  $\alpha = -R/L = -1$  and  $b = 10 \times (1/L) = 5$ . Then,

$$\begin{aligned} x(t) &= e^{\alpha(t-t_0)} x_0 + e^{\alpha t} \int_{t_0}^t e^{-\alpha\tau} \beta u(\tau) d\tau \\ &= e^{-1(t-0)} 2 + e^{-t} \int_0^t e^{\tau} 5 u_0(\tau) d\tau = 2e^{-t} + 5e^{-t} \int_0^t e^{\tau} d\tau \\ &= 2e^{-t} + 5e^{-t}(e^t - 1) = 2e^{-t} + 5 - 5e^{-t} = (5 - 3e^{-t})u_0(t) \end{aligned}$$

and denoting the current  $i_L$  as the output  $y$  we get

$$y(t) = x(t) = (5 - 3e^{-t})u_0(t)$$

6.

a.

$$A = \begin{bmatrix} 1 & 2 \\ 3 & -1 \end{bmatrix} \quad \det(A - \lambda I) = \det\left(\begin{bmatrix} 1 & 2 \\ 3 & -1 \end{bmatrix} - \lambda \begin{bmatrix} 1 & 0 \\ 0 & 1 \end{bmatrix}\right) = \det\begin{bmatrix} 1-\lambda & 2 \\ 3 & -1-\lambda \end{bmatrix} = 0$$

$$(1-\lambda)(-1-\lambda) - 6 = 0$$

$$-1 - \lambda + \lambda + \lambda^2 - 6 = 0$$

$$\lambda^2 = 7$$

and thus

$$\lambda_1 = \sqrt{7} \quad \lambda_2 = -\sqrt{7}$$

b.

$$B = \begin{bmatrix} a & 0 \\ -a & b \end{bmatrix} \quad \det(B - \lambda I) = \det\left(\begin{bmatrix} a & 0 \\ -a & b \end{bmatrix} - \lambda \begin{bmatrix} 1 & 0 \\ 0 & 1 \end{bmatrix}\right) = \det\begin{bmatrix} a - \lambda & 0 \\ -a & b - \lambda \end{bmatrix} = 0$$

$$(a - \lambda)(b - \lambda) = 0$$

and thus

$$\lambda_1 = a \quad \lambda_2 = b$$

c.

$$C = \begin{bmatrix} 0 & 1 & 0 \\ 0 & 0 & 1 \\ -6 & -11 & -6 \end{bmatrix} \quad \det(C - \lambda I) = \det\left(\begin{bmatrix} 0 & 1 & 0 \\ 0 & 0 & 1 \\ -6 & -11 & -6 \end{bmatrix} - \lambda \begin{bmatrix} 1 & 0 & 0 \\ 0 & 1 & 0 \\ 0 & 0 & 1 \end{bmatrix}\right)$$

$$= \det\begin{bmatrix} -\lambda & 1 & 0 \\ 0 & -\lambda & 1 \\ -6 & -11 & -6 - \lambda \end{bmatrix} = 0$$

$$\lambda^2(-6 - \lambda) - 6 - (-11)(-\lambda) = \lambda^3 + 6\lambda^2 + 11\lambda + 6 = 0$$

and it is given that  $\lambda_1 = -1$ . Then,

$$\frac{\lambda^3 + 6\lambda^2 + 11\lambda + 6}{(\lambda + 1)} = \lambda^2 + 5\lambda + 6 \Rightarrow (\lambda + 1)(\lambda + 2)(\lambda + 3) = 0$$

and thus

$$\lambda_1 = -1 \quad \lambda_2 = -2 \quad \lambda_3 = -3$$

7.

a. Matrix  $A$  is the same as Matrix  $C$  in Exercise 6. Then,

$$\lambda_1 = -1 \quad \lambda_2 = -2 \quad \lambda_3 = -3$$

and since  $A$  is a  $3 \times 3$  matrix the state transition matrix is

$$e^{At} = a_0 I + a_1 A + a_2 A^2 \quad (1)$$

Then,

$$a_0 + a_1\lambda_1 + a_2\lambda_1^2 = e^{\lambda_1 t} \Rightarrow a_0 - a_1 + a_2 = e^{-t}$$

$$a_0 + a_1\lambda_2 + a_2\lambda_2^2 = e^{\lambda_2 t} \Rightarrow a_0 - 2a_1 + 4a_2 = e^{-2t}$$

$$a_0 + a_1\lambda_3 + a_2\lambda_3^2 = e^{\lambda_3 t} \Rightarrow a_0 - 3a_1 + 9a_2 = e^{-3t}$$

`syms t; A=[1 -1 1; 1 -2 4; 1 -3 9];...`

`a=sym('[\exp(-t); exp(-2*t); exp(-3*t)]'); x=A\|a; fprintf(' \n');...`

`disp('a0 = '); disp(x(1)); disp('a1 = '); disp(x(2)); disp('a2 = '); disp(x(3))`

`a0 =`

`3*exp(-t) - 3*exp(-2*t) + exp(-3*t)`

`a1 =`

`5/2*exp(-t) - 4*exp(-2*t) + 3/2*exp(-3*t)`

`a2 =`

`1/2*exp(-t) - exp(-2*t) + 1/2*exp(-3*t)`

Thus,

$$a_0 = 3e^{-t} - 3e^{-2t} + 3e^{-3t}$$

$$a_1 = 2.5e^{-t} - 4e^{-2t} + 1.5e^{-3t}$$

$$a_2 = 0.5e^{-t} - e^{-2t} + 0.5e^{-3t}$$

Now, we compute  $e^{At}$  of (1) with the following MATLAB code:

`syms t; a0=3*exp(-t)-3*exp(-2*t)+exp(-3*t); a1=5/2*exp(-t)-4*exp(-2*t)+3/2*exp(-3*t);...`

`a2=1/2*exp(-t)-exp(-2*t)+1/2*exp(-3*t); A=[0 1 0; 0 0 1; -6 -11 -6]; fprintf(' \n');...`

`eAt=a0*eye(3)+a1*A+a2*A^2`

`eAt =`

`[ 3*exp(-t)-3*exp(-2*t)+exp(-3*t), 5/2*exp(-t)-4*exp(-2*t)+3/2*exp(-3*t), 1/2*exp(-t)-exp(-2*t)+1/2*exp(-3*t),`  
`[-3*exp(-t)+6*exp(-2*t)-3*exp(-3*t), -5/2*exp(-t)+8*exp(-2*t)-9/2*exp(-3*t), -1/2*exp(-t)+2*exp(-2*t)-3/2*exp(-3*t)]`  
`[3*exp(-t)-12*exp(-2*t)+9*exp(-3*t), 5/2*exp(-t)-16*exp(-2*t)+27/2*exp(-3*t), 1/2*exp(-t)-4*exp(-2*t)+9/2*exp(-3*t)]`

Then,

$$e^{At} = \begin{bmatrix} 3e^{-t} - 3e^{-2t} + e^{-3t} & 2.5e^{-t} - 4e^{-2t} + 1.5e^{-3t} & 0.5e^{-t} - e^{-2t} + 0.5e^{-3t} \\ -3e^{-t} + 6e^{-2t} - 3e^{-3t} & -2.5e^{-t} + 8e^{-2t} - 4.5e^{-3t} & -0.5e^{-t} + 2e^{-2t} - 1.5e^{-3t} \\ 3e^{-t} - 12e^{-2t} + 9e^{-3t} & 2.5e^{-t} - 16e^{-2t} + 13.5e^{-3t} & 0.5e^{-t} - 4e^{-2t} + 4.5e^{-3t} \end{bmatrix}$$

8.

$$A = \begin{bmatrix} 1 & 0 \\ -2 & 2 \end{bmatrix}, \quad b = \begin{bmatrix} 1 \\ 2 \end{bmatrix}, \quad x_0 = \begin{bmatrix} -1 \\ 0 \end{bmatrix}, \quad u = \delta(t), \quad t_0 = 0$$

## Chapter 5 State Variables and State Equations

$$\begin{aligned}
 x(t) &= e^{A(t-0)}x_0 + e^{At} \int_0^t e^{-A\tau} bu(\tau) d\tau = e^{At}x_0 + e^{At} \int_0^t e^{-A\tau} b\delta(\tau) d\tau \\
 &= e^{At}x_0 + e^{At}b = e^{At}(x_0 + b) = e^{At} \left( \begin{bmatrix} -1 \\ 0 \end{bmatrix} + \begin{bmatrix} 1 \\ 2 \end{bmatrix} \right) = e^{At} \begin{bmatrix} 0 \\ 2 \end{bmatrix}
 \end{aligned} \tag{1}$$

We use the following MATLAB code to find the eigenvalues  $\lambda_1$  and  $\lambda_2$

```
A=[1 0; -2 2]; lambda=eig(A); fprintf('\n');...
fprintf('lambda1 = %4.2f \t',lambda(1)); fprintf('lambda2 = %4.2f \t',lambda(2))
```

```
lambda1 = 2.00 lambda2 = 1.00
```

Next,

$$\begin{aligned}
 a_0 + a_1\lambda_1 &= e^{\lambda_1 t} \Rightarrow a_0 + a_1 = e^t \\
 a_0 + a_1\lambda_2 &= e^{\lambda_2 t} \Rightarrow a_0 + 2a_1 = e^{2t}
 \end{aligned}$$

Then,

$$a_0 = 2e^t - e^{2t} \quad a_1 = e^{2t} - e^t$$

and

$$\begin{aligned}
 e^{At} &= a_0I + a_1A = (2e^t - e^{2t}) \begin{bmatrix} 1 & 0 \\ 0 & 1 \end{bmatrix} + (e^{2t} - e^t) \begin{bmatrix} 1 & 0 \\ -2 & 2 \end{bmatrix} \\
 &= \begin{bmatrix} 2e^t - e^{2t} & 0 \\ 0 & 2e^t - e^{2t} \end{bmatrix} + \begin{bmatrix} e^{2t} - e^t & 0 \\ -2e^{2t} + 2e^t & 2e^{2t} - 2e^t \end{bmatrix} = \begin{bmatrix} e^t & 0 \\ 2e^t - 2e^{2t} & e^{2t} \end{bmatrix}
 \end{aligned}$$

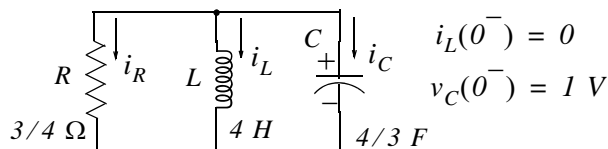
By substitution into (1) we get

$$x(t) = e^{At} \begin{bmatrix} 0 \\ 2 \end{bmatrix} = \begin{bmatrix} e^t & 0 \\ 2e^t - 2e^{2t} & e^{2t} \end{bmatrix} \cdot \begin{bmatrix} 0 \\ 2 \end{bmatrix} = \begin{bmatrix} 0 \\ 2e^{2t} \end{bmatrix}$$

and thus

$$x_1 = 0 \quad x_2 = 2e^{2t}$$

9.



We let  $x_1 = i_L$      $x_2 = v_C$ . Then,

a.

$$i_R + i_L + i_C = 0$$

$$\frac{v_C}{R} + i_L + C \frac{v_C}{dt} = 0$$

$$\frac{x_2}{3/4} + x_1 + \frac{4}{3} \dot{x}_2 = 0$$

or

$$\dot{x}_2 = -\frac{3}{4}x_1 - x_2 \quad (1)$$

Also,

$$v_L = v_C = L \frac{di_L}{dt} = 4\dot{x}_1 = x_2$$

or

$$\dot{x}_1 = \frac{1}{4}x_2 \quad (2)$$

From (1) and (2)

$$\begin{bmatrix} \dot{x}_1 \\ \dot{x}_2 \end{bmatrix} = \begin{bmatrix} 0 & 1/4 \\ -3/4 & -1 \end{bmatrix} \cdot \begin{bmatrix} x_1 \\ x_2 \end{bmatrix}$$

and thus

$$A = \begin{bmatrix} 0 & 1/4 \\ -3/4 & -1 \end{bmatrix}$$

b.

$$e^{At} = \mathcal{L}^{-1} \{ [sI - A]^{-1} \}$$

$$[sI - A] = \begin{bmatrix} s & 0 \\ 0 & s \end{bmatrix} - \begin{bmatrix} 0 & 1/4 \\ -3/4 & -1 \end{bmatrix} = \begin{bmatrix} s & -1/4 \\ 3/4 & s+1 \end{bmatrix}$$

$$\Delta = \det[sI - A] = \det \begin{bmatrix} s & -1/4 \\ 3/4 & s+1 \end{bmatrix} = s^2 + s + 3/16 = (s + 1/4)(s + 3/4)$$

$$\text{adj}[sI - A] = \text{adj} \begin{bmatrix} s & -1/4 \\ 3/4 & s+1 \end{bmatrix} = \begin{bmatrix} s+1 & 1/4 \\ -3/4 & s \end{bmatrix}$$

$$\begin{aligned}
 [sI - A]^{-1} &= \frac{1}{\Delta} \text{adj}[sI - A] = \frac{1}{(s + 1/4)(s + 3/4)} \begin{bmatrix} s + 1 & 1/4 \\ -3/4 & s \end{bmatrix} \\
 &= \begin{bmatrix} \frac{s + 1}{(s + 1/4)(s + 3/4)} & \frac{1/4}{(s + 1/4)(s + 3/4)} \\ \frac{-3/4}{(s + 1/4)(s + 3/4)} & \frac{s}{(s + 1/4)(s + 3/4)} \end{bmatrix}
 \end{aligned}$$

We use MATLAB to find  $e^{At} = \mathcal{L}^{-1}\{[sI - A]^{-1}\}$  with the code below.

```

syms s t
Fs1=(s+1)/(s^2+s+3/16); Fs2=(1/4)/(s^2+s+3/16); Fs3=(-3/4)/(s^2+s+3/16); Fs4=s/(s^2+s+3/16);...
fprintf('\n'); disp('a11 = '); disp(simple(ilaplace(Fs1))); disp('a12 = '); disp(simple(ilaplace(Fs2)));...
disp('a21 = '); disp(simple(ilaplace(Fs3))); disp('a22 = '); disp(simple(ilaplace(Fs4)))

a11 =
-1/2*exp(-3/4*t)+3/2*exp(-1/4*t)

a12 =
1/2*exp(-1/4*t)-1/2*exp(-3/4*t)

a21 =
-3/2*exp(-1/4*t)+3/2*exp(-3/4*t)

a22 =
3/2*exp(-3/4*t)-1/2*exp(-1/4*t)

```

Thus,

$$e^{At} = \begin{bmatrix} 1.5e^{-0.25t} - 0.5e^{-0.75t} & 0.5e^{-0.25t} - 0.5e^{-0.75t} \\ -1.5e^{-0.25t} + 1.5e^{-0.75t} & -0.5e^{-0.25t} + 1.5e^{-0.75t} \end{bmatrix}$$

c.

$$\begin{aligned}
 x(t) &= e^{A(t-0)}x_0 + e^{At} \int_0^t e^{-A\tau} bu(\tau) d\tau = e^{At}x_0 + 0 = e^{At} \left( \begin{bmatrix} 0 \\ 1 \end{bmatrix} + \begin{bmatrix} 0 \\ 0 \end{bmatrix} \right) \\
 &= \begin{bmatrix} 1.5e^{-0.25t} - 0.5e^{-0.75t} & 0.5e^{-0.25t} - 0.5e^{-0.75t} \\ -1.5e^{-0.25t} + 1.5e^{-0.75t} & -0.5e^{-0.25t} + 1.5e^{-0.75t} \end{bmatrix} \begin{bmatrix} 0 \\ 1 \end{bmatrix} = \begin{bmatrix} 0.5e^{-0.25t} - 0.5e^{-0.75t} \\ -0.5e^{-0.25t} + 1.5e^{-0.75t} \end{bmatrix}
 \end{aligned}$$

and thus for  $t > 0$

$$x_1 = i_L = 0.5e^{-0.25t} - 0.5e^{-0.75t} \quad x_2 = v_C = -0.5e^{-0.25t} + 1.5e^{-0.75t}$$

This chapter begins with the definition of the impulse response, that is, the response of a circuit that is subjected to the excitation of the impulse function. Then, it defines convolution and how it is applied to circuit analysis. Evaluation of the convolution integral using graphical methods is also presented and illustrated with several examples.

### 6.1 The Impulse Response in Time Domain

In this section we will discuss the impulse response of a network, that is, the output (voltage or current) of a network when the input is the delta function. Of course, the output can be any voltage or current that we choose as the output. The determination of the impulse response assumes zero initial conditions.

We learned in the previous chapter that the state equation

$$\dot{x} = Ax + bu \quad (6.1)$$

has the solution

$$x(t) = e^{A(t-t_0)} x_0 + e^{At} \int_0^t e^{-A\tau} bu(\tau) d\tau \quad (6.2)$$

Therefore, with initial condition  $x_0 = 0$ , and with the input  $u(t) = \delta(t)$ , the solution of (6.2) reduces to

$$x(t) = e^{At} \int_0^t e^{-A\tau} b\delta(\tau) d\tau \quad (6.3)$$

Using the sifting property of the delta function, i.e.,

$$\int_{-\infty}^{\infty} f(t)\delta(\tau) d\tau = f(0) \quad (6.4)$$

and denoting the impulse response as  $h(t)$ , we get

$$\boxed{h(t) = e^{At} bu_0(t)} \quad (6.5)$$

where  $u_0(t)$  is included to indicate that this relation holds for  $t > 0$ .

---

## Chapter 6 The Impulse Response and Convolution

---

### Example 6.1

Compute the impulse response of the series  $RC$  circuit of Figure 6.1 in terms of the constants  $R$  and  $C$ , where the response is considered to be the voltage across the capacitor, and  $v_C(0^-) = 0$ . Then, compute the current through the capacitor.

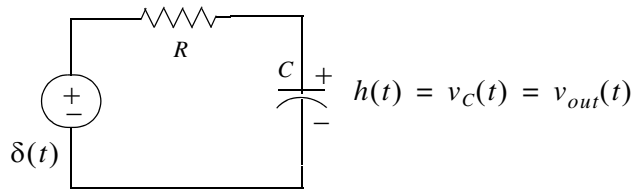


Figure 6.1. Circuit for Example 6.1

### Solution:

We assign currents  $i_C$  and  $i_R$  with the directions shown in Figure 6.2, and we apply KCL.

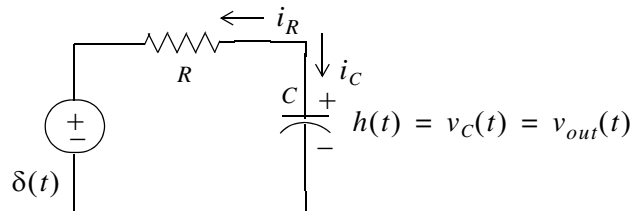


Figure 6.2. Application of KCL for the circuit for Example 6.1

Then,

$$i_R + i_C = 0$$

or

$$C \frac{dv_C}{dt} + \frac{v_C - \delta(t)}{R} = 0 \quad (6.6)$$

We assign the state variable

$$v_C = x$$

Then,

$$\frac{dv_C}{dt} = \dot{x}$$

and (6.6) becomes

$$C\dot{x} + \frac{x}{R} = \frac{\delta(t)}{R}$$

or



$$\dot{x} = -\frac{1}{RC}x + \frac{1}{RC}\delta(t) \quad (6.7)$$

This equation has the form

$$\dot{x} = ax + bu$$

and as we found in (6.5),

$$h(t) = e^{At}bu_0(t)$$

For this example,

$$a = -1/RC$$

and

$$b = 1/RC$$

Therefore,

$$h(t) = v_C(t) = e^{-t/RC} \frac{1}{RC}$$

or

$$h(t) = \frac{1}{RC} e^{-t/RC} u_0(t) \quad (6.8)$$

The current  $i_C$  can now be computed from

$$i_C = C \frac{dv_C}{dt}$$

Thus,

$$\begin{aligned} i_C &= C \frac{d}{dt} h(t) = C \frac{d}{dt} \left( \frac{1}{RC} e^{-t/RC} u_0(t) \right) \\ &= -\frac{1}{R^2 C} e^{-t/RC} + \frac{1}{R} e^{-t/RC} \delta(t) \end{aligned}$$

Using the sampling property of the delta function, we get

$$i_C = \frac{1}{R} \delta(t) - \frac{1}{R^2 C} e^{-t/RC} \quad (6.9)$$

### Example 6.2

For the circuit of Figure 6.3, compute the impulse response  $h(t) = v_C(t)$  given that the initial conditions are zero, that is,  $i_L(0^-) = 0$ , and  $v_C(0^-) = 0$ .

#### Solution:

This is the same circuit as that of Example 5.10 of the previous chapter, where we found that

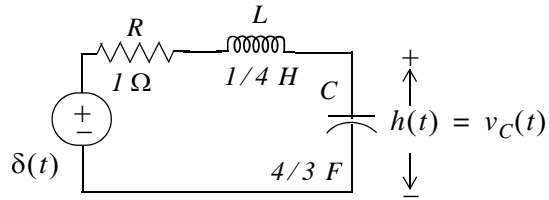


Figure 6.3. Circuit for Example 6.2

$$b = \begin{bmatrix} 4 \\ 0 \end{bmatrix}$$

and

$$e^{At} = \begin{bmatrix} -0.5e^{-t} + 1.5e^{-3t} & -2e^{-t} + 2e^{-3t} \\ \frac{3}{8}e^{-t} - \frac{3}{8}e^{-3t} & 1.5e^{-t} - 0.5e^{-3t} \end{bmatrix}$$

The impulse response is obtained from (6.5), that is,

$$h(t) = x(t) = e^{At} b u_0(t)$$

then,

$$h(t) = x(t) = \begin{bmatrix} x_1 \\ x_2 \end{bmatrix} = \begin{bmatrix} -0.5e^{-t} + 1.5e^{-3t} & -2e^{-t} + 2e^{-3t} \\ \frac{3}{8}e^{-t} - \frac{3}{8}e^{-3t} & 1.5e^{-t} - 0.5e^{-3t} \end{bmatrix} \begin{bmatrix} 4 \\ 0 \end{bmatrix} u_0(t) = \begin{bmatrix} -2e^{-t} + 6e^{-3t} \\ \frac{3}{2}e^{-t} - \frac{3}{2}e^{-3t} \end{bmatrix} u_0(t) \quad (6.10)$$

In Example 5.10, we defined

$$x_1 = i_L$$

and

$$x_2 = v_C$$

Then,

$$h(t) = x_2 = v_C(t) = 1.5e^{-t} - 1.5e^{-3t}$$

or

$$h(t) = v_C(t) = 1.5(e^{-t} - e^{-3t}) \quad (6.11)$$

Of course, this answer is not the same as that of Example 5.10, because the inputs and initial conditions were defined differently.

### 6.2 Even and Odd Functions of Time

A function  $f(t)$  is an *even function* of time if the following relation holds.

$$f(-t) = f(t) \tag{6.12}$$

that is, if in an even function we replace  $t$  with  $-t$ , the function  $f(t)$  does not change. Thus, polynomials with even exponents only, and with or without constants, are even functions. For instance, the cosine function is an even function because it can be written as the power series

$$\cos t = 1 - \frac{t^2}{2!} + \frac{t^4}{4!} - \frac{t^6}{6!} + \dots$$

Other examples of even functions are shown in Figure 6.4.

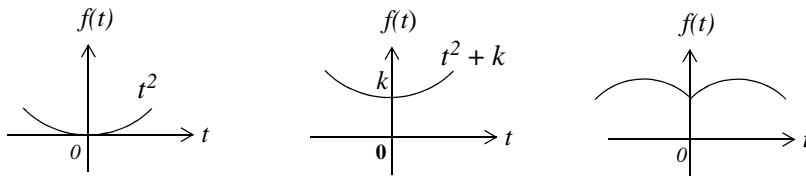


Figure 6.4. Examples of even functions

A function  $f(t)$  is an *odd function* of time if the following relation holds.

$$-f(-t) = f(t) \tag{6.13}$$

that is, if in an odd function we replace  $t$  with  $-t$ , we obtain the negative of the function  $f(t)$ . Thus, polynomials with odd exponents only, and no constants are odd functions. For instance, the sine function is an odd function because it can be written as the power series

$$\sin t = t - \frac{t^3}{3!} + \frac{t^5}{5!} - \frac{t^7}{7!} + \dots$$

Other examples of odd functions are shown in Figure 6.5.

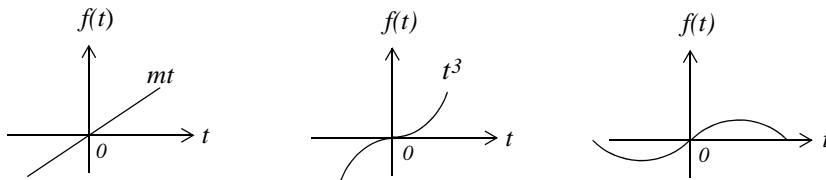


Figure 6.5. Examples of odd functions

---

## Chapter 6 The Impulse Response and Convolution

---

We observe that for odd functions,  $f(0) = 0$ . However, the reverse is not always true; that is, if  $f(0) = 0$ , we should not conclude that  $f(t)$  is an odd function. An example of this is the function  $f(t) = t^2$  in Figure 6.4.

The product of *two even* or *two odd* functions is an even function, and the product of an even function times an odd function, is an odd function.

Henceforth, we will denote an even function with the subscript  $e$ , and an odd function with the subscript  $o$ . Thus,  $f_e(t)$  and  $f_o(t)$  will be used to represent even and odd functions of time respectively.

Also,

$$\int_{-T}^T f_e(t) dt = 2 \int_0^T f_e(t) dt \quad (6.14)$$

and

$$\int_{-T}^T f_o(t) dt = 0 \quad (6.15)$$

A function  $f(t)$  that is neither even nor odd can be expressed as

$$f_e(t) = \frac{1}{2}[f(t) + f(-t)] \quad (6.16)$$

or as

$$f_o(t) = \frac{1}{2}[f(t) - f(-t)] \quad (6.17)$$

By addition of (6.16) with (6.17), we get

$$f(t) = f_e(t) + f_o(t) \quad (6.18)$$

that is, any function of time can be expressed as the sum of an even and an odd function.

### Example 6.3

Determine whether the delta function is an even or an odd function of time.

#### Solution:

Let  $f(t)$  be an arbitrary function of time that is continuous at  $t = t_0$ . Then, by the sifting property of the delta function

$$\int_{-\infty}^{\infty} f(t)\delta(t-t_0)dt = f(t_0)$$

and for  $t_0 = 0$ ,

$$\int_{-\infty}^{\infty} f(t)\delta(t)dt = f(0)$$

Also,

$$\int_{-\infty}^{\infty} f_e(t)\delta(t)dt = f_e(0)$$

and

$$\int_{-\infty}^{\infty} f_o(t)\delta(t)dt = f_o(0)$$

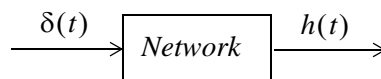
As stated earlier, an odd function  $f_o(t)$  evaluated at  $t = 0$  is zero, that is,  $f_o(0) = 0$ . Therefore, from the last relation above,

$$\int_{-\infty}^{\infty} f_o(t)\delta(t)dt = f_o(0) = 0 \tag{6.19}$$

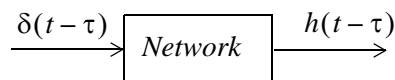
and this indicates that the product  $f_o(t)\delta(t)$  is an odd function of  $t$ . Then, since  $f_o(t)$  is odd, it follows that  $\delta(t)$  must be an even function of  $t$  for (6.19) to hold.

### 6.3 Convolution

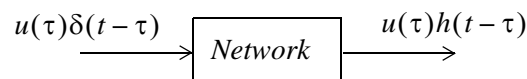
Consider a network whose input is  $\delta(t)$ , and its output is the impulse response  $h(t)$ . We can represent the input-output relationship as the block diagram shown below.



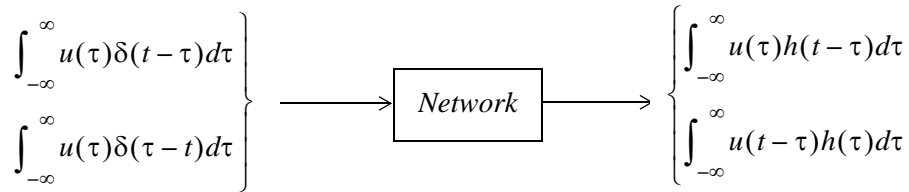
or in general,



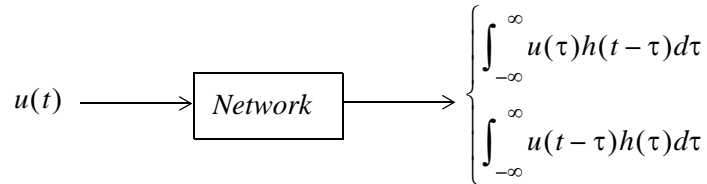
We let  $u(t)$  be any input whose value at  $t = \tau$  is  $u(\tau)$ . Then,



Multiplying both sides by the constant  $d\tau$ , integrating from  $-\infty$  to  $+\infty$ , and making use of the fact that the delta function is even, i.e.,  $\delta(t - \tau) = \delta(\tau - t)$ , we get



Using the sifting property of the delta function, we find that the second integral on the left side reduces to  $u(t)$  and thus



The integral

$$\boxed{\int_{-\infty}^{\infty} u(\tau)h(t-\tau)d\tau} \quad \text{or} \quad \boxed{\int_{-\infty}^{\infty} u(t-\tau)h(\tau)d\tau} \quad (6.20)$$

is known as the *convolution integral*; it states that if we know the impulse response of a network, we can compute the response to any input  $u(t)$  using either of the integrals of (6.20).

The convolution integral is usually denoted as  $u(t)*h(t)$  or  $h(t)*u(t)$ , where the asterisk (\*) denotes convolution.

In Section 6.1, we found that the impulse response for a single input is  $h(t) = e^{At}b$ . Therefore, if we know  $h(t)$ , we can use the convolution integral to compute the response  $y(t)$  of any input  $u(t)$  using the relation

$$y(t) = \int_{-\infty}^{\infty} e^{A(t-\tau)}bu(\tau)d\tau = e^{At}\int_{-\infty}^{\infty} e^{-A\tau}bu(\tau)d\tau \quad (6.21)$$

## 6.4 Graphical Evaluation of the Convolution Integral

The convolution integral is more conveniently evaluated by the graphical evaluation. The procedure is best illustrated with the following examples.

### Example 6.4

The signals  $h(t)$  and  $u(t)$  are as shown in Figure 6.6. Compute  $h(t)*u(t)$  using the graphical evaluation.

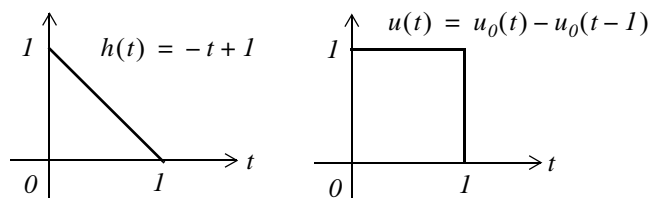


Figure 6.6. Signals for Example 6.4

**Solution:**

The convolution integral states that

$$h(t)*u(t) = \int_{-\infty}^{\infty} u(t-\tau)h(\tau)d\tau \quad (6.22)$$

where  $\tau$  is a dummy variable, that is,  $u(\tau)$  and  $h(\tau)$ , are considered to be the same as  $u(t)$  and  $h(t)$ . We form  $u(t-\tau)$  by first constructing the image of  $u(\tau)$ ; this is shown as  $u(-\tau)$  in Figure 6.7.

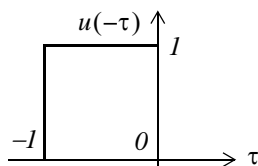


Figure 6.7. Construction of  $u(-\tau)$  for Example 6.4

Next, we form  $u(t-\tau)$  by shifting  $u(-\tau)$  to the right by some value  $t$  as shown in Figure 6.8.

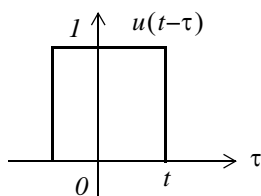


Figure 6.8. Formation of  $u(t-\tau)$  for Example 6.4

Now, evaluation of the convolution integral

$$h(t)*u(t) = \int_{-\infty}^{\infty} u(t-\tau)h(\tau)d\tau$$

entails multiplication of  $u(t-\tau)$  by  $h(\tau)$  for each value of  $t$ , and computation of the area from  $-\infty$  to  $+\infty$ . Figure 6.9 shows the product  $u(t-\tau)h(\tau)$  as point  $A$  moves to the right.

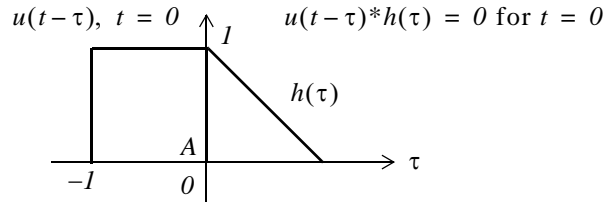


Figure 6.9. Formation of the product  $u(t-\tau)*h(\tau)$  for Example 6.4

We observe that  $u(t-\tau)|_{t=0} = u(-\tau)$

Shifting  $u(t-\tau)$  to the right so that  $t > 0$ , we get the sketch of Figure 6.10 where the integral of the product is denoted by the shaded area, and it increases as point A moves further to the right.

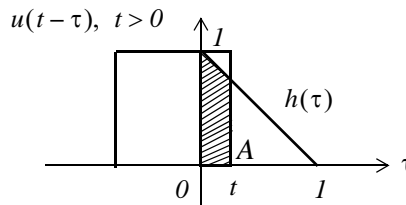


Figure 6.10. Shift of  $u(t-\tau)$  for Example 6.4

The maximum area is obtained when point A reaches  $t = I$  as shown in Figure 6.11.

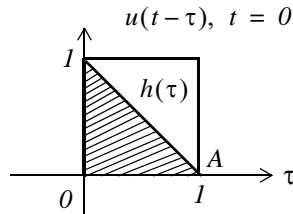


Figure 6.11. Signals for Example 6.4 when  $t = I$

Using the convolution integral, we find the area as a function of time  $t$  is

$$\int_{-\infty}^{\infty} u(t-\tau)h(\tau)d\tau = \int_0^t u(t-\tau)h(\tau)d\tau = \int_0^t (I)(-\tau + I)d\tau = \tau - \frac{\tau^2}{2} \Big|_0^t = t - \frac{t^2}{2} \quad (6.23)$$

Figure 6.12 shows how  $u(\tau)*h(\tau)$  increases during the interval  $0 < t < I$ . This is not an exponential increase; it is the function  $t - t^2/2$  in (6.23), and each point on the curve of Figure 6.12 represents the area under the convolution integral.



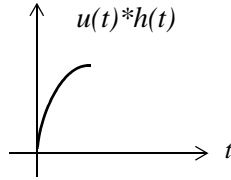


Figure 6.12. Curve for the convolution of  $u(\tau)*h(\tau)$  for  $0 < t < 1$  in Example 6.4

Evaluating (6.23) at  $t = 1$ , we get

$$t - \frac{t^2}{2} \Big|_{t=1} = \frac{1}{2} \tag{6.24}$$

The plot for the interval  $0 \leq t \leq 1$  is shown in Figure 6.13.

As we continue shifting  $u(t - \tau)$  to the right, the area starts decreasing, and it becomes zero at  $t = 2$ , as shown in Figure 6.14.

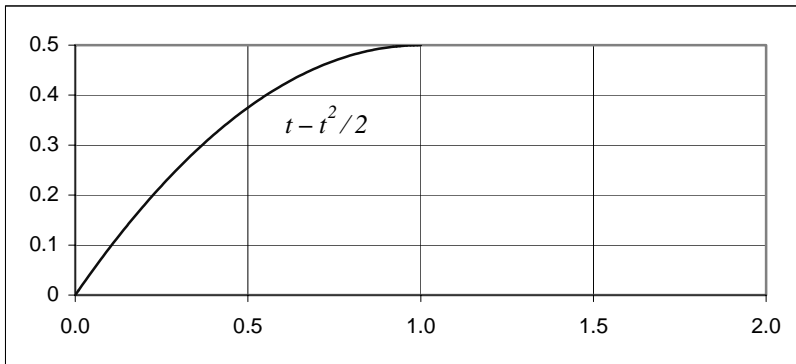


Figure 6.13. Convolution of  $u(\tau)*h(\tau)$  at  $t = 1$  for Example 6.4

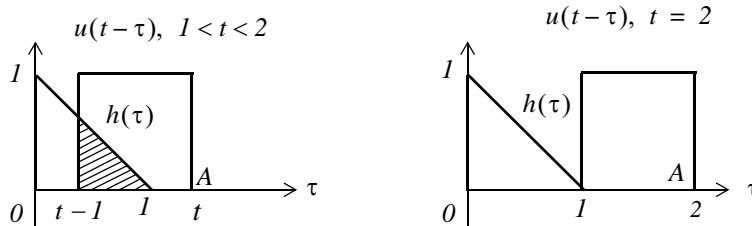


Figure 6.14. Convolution for interval  $1 < t < 2$  of Example 6.4

Using the convolution integral, we find that the area for the interval  $1 < t < 2$  is

$$\int_{-\infty}^{\infty} u(t-\tau)h(\tau)d\tau = \int_{t-1}^1 u(t-\tau)h(\tau)d\tau = \int_{t-1}^1 (1)(-\tau+1)d\tau = \tau - \frac{\tau^2}{2} \Big|_{t-1}^1 \quad (6.25)$$

$$= 1 - \frac{1}{2} - (t-1) + \frac{t^2 - 2t + 1}{2} = \frac{t^2}{2} - 2t + 2$$

Thus, for  $1 < t < 2$ , the area decreases in accordance with  $t^2/2 - 2t + 2$ .

Evaluating (6.25) at  $t = 2$ , we find that  $u(\tau)*h(\tau) = 0$ . For  $t > 2$ , the product  $u(t-\tau)h(\tau)$  is zero since there is no overlap between these two signals. The convolution of these signals for  $0 \leq t \leq 2$ , is shown in Figure 6.15.

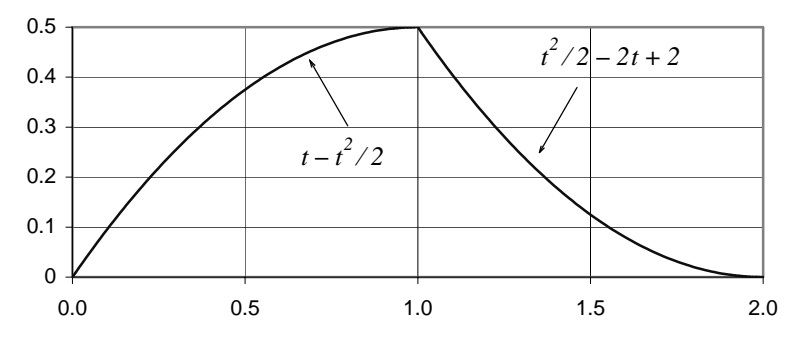


Figure 6.15. Convolution for  $0 \leq \tau \leq 2$  of the signals of Example 6.4

**Example 6.5**

The signals  $h(t)$  and  $u(t)$  are as shown in Figure 6.16. Compute  $h(t)*u(t)$  using the graphical evaluation method.

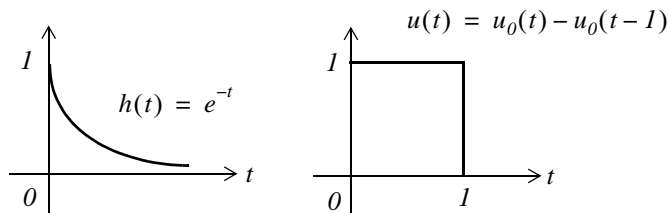


Figure 6.16. Signals for Example 6.5

**Solution:**

Following the same procedure as in the previous example, we form  $u(t-\tau)$  by first constructing the image of  $u(\tau)$ . This is shown as  $u(-\tau)$  in Figure 6.17.

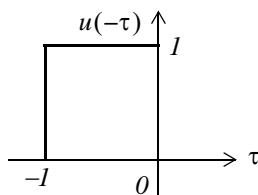


Figure 6.17. Construction of  $u(-\tau)$  for Example 6.5

Next, we form  $u(t - \tau)$  by shifting  $u(-\tau)$  to the right by some value  $t$  as shown in Figure 6.18.

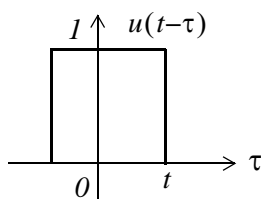


Figure 6.18. Formation of  $u(t - \tau)$  for Example 6.5

As in the previous example, evaluation of the convolution integral

$$h(t) * u(t) = \int_{-\infty}^{\infty} u(t - \tau)h(\tau) d\tau$$

entails multiplication of  $u(t - \tau)$  by  $h(\tau)$  for each value of  $t$ , and computation of the area from  $-\infty$  to  $+\infty$ . Figure 6.19 shows the product  $u(t - \tau)h(\tau)$  as point  $A$  moves to the right.

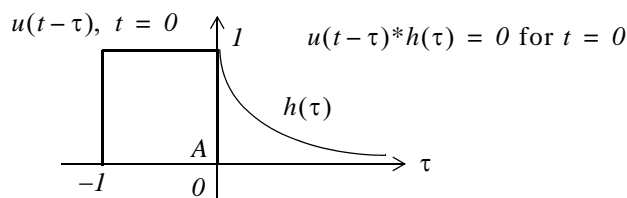


Figure 6.19. Formation of the product  $u(t - \tau) * h(\tau)$  for Example 6.5

We observe that  $u(t - \tau)|_{t=0} = u(-\tau)$

Shifting  $u(t - \tau)$  to the right so that  $t > 0$ , we get the sketch of Figure 6.20 where the integral of the product is denoted by the shaded area, and it increases as point  $A$  moves further to the right.

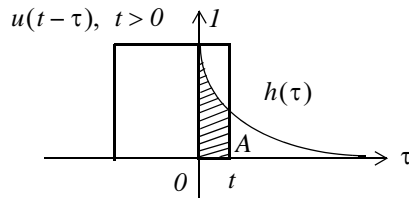


Figure 6.20. Shift of  $u(t - \tau)$  for Example 6.5

The maximum area is obtained when point  $A$  reaches  $t = 1$  as shown in Figure 6.21.

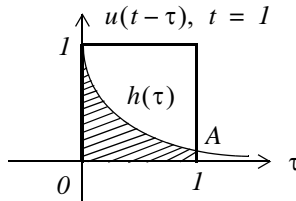


Figure 6.21. Convolution of  $u(\tau) * h(\tau)$  at  $t = 1$  for Example 6.5

Its value for  $0 < t < 1$  is

$$\int_{-\infty}^{\infty} u(t - \tau)h(\tau)d\tau = \int_0^t u(t - \tau)h(\tau)d\tau = \int_0^t (1)(e^{-\tau})d\tau = -e^{-\tau} \Big|_0^t = e^{-\tau} \Big|_t^0 = 1 - e^{-t} \quad (6.26)$$

Evaluating (6.26) at  $t = 1$ , we get

$$1 - e^{-t} \Big|_{t=1} = 1 - e^{-1} = 0.632 \quad (6.27)$$

The plot for the interval  $0 \leq t \leq 1$  is shown in Figure 6.22.

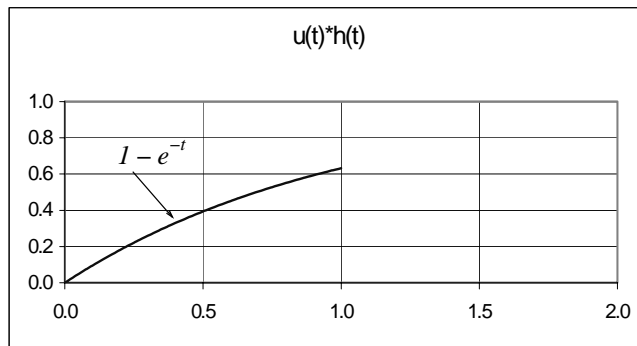


Figure 6.22. Convolution of  $u(\tau) * h(\tau)$  for  $0 \leq t \leq 1$  in Example 6.5

As we continue shifting  $u(t - \tau)$  to the right, the area starts decreasing. As shown in Figure 6.23, it approaches zero as  $t$  becomes large but never reaches the value of zero.

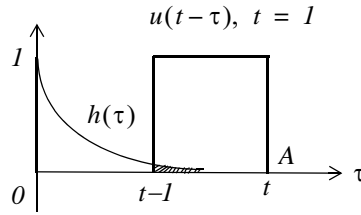


Figure 6.23. Convolution for interval  $1 < t < 2$  of Example 6.5

Therefore, for the time interval  $t > 1$ , we have

$$\int_{t-1}^t u(t-\tau)h(\tau)d\tau = \int_{t-1}^t (1)(e^{-\tau})d\tau = -e^{-\tau}\Big|_{t-1}^t = e^{-\tau}\Big|_t^{t-1} = e^{-(t-1)} - e^{-t} = e^{-t}(e-1) \quad (6.28)$$

Evaluating (6.28) at  $t = 2$ , we find that  $u(\tau)*h(\tau) = 0.233$ .

For  $t > 2$ , the product  $u(t - \tau)h(\tau)$  approaches zero as  $t \rightarrow \infty$ . The convolution of these signals for  $0 \leq t \leq 2$ , is shown in Figure 6.24.

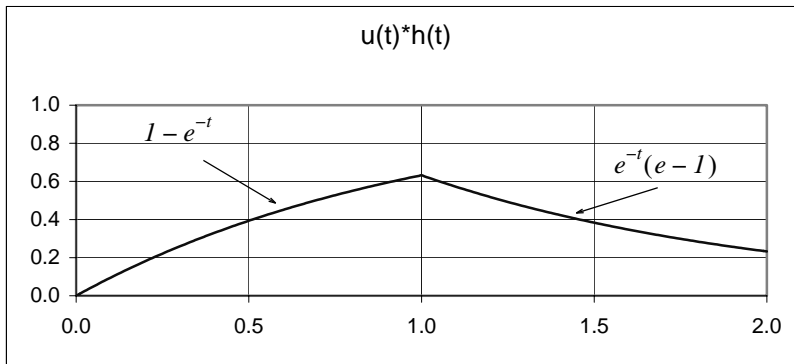


Figure 6.24. Convolution for  $0 \leq t \leq 2$  of the signals of Example 6.5

### Example 6.6

Perform the convolution  $v_1(t)*v_2(t)$  where  $v_1(t)$  and  $v_2(t)$  are as shown in Figure 6.25.

#### Solution:

We will use the convolution integral

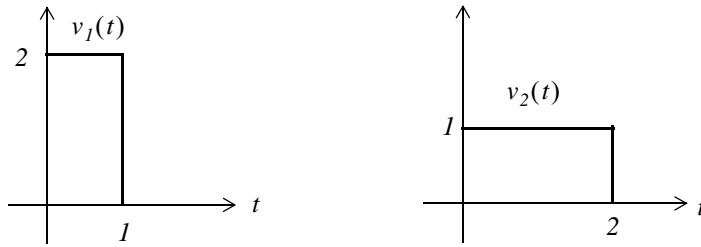


Figure 6.25. Signals for Example 6.6

$$v_1(t) * v_2(t) = \int_{-\infty}^{\infty} v_1(\tau) v_2(t - \tau) d\tau \quad (6.29)$$

The computation steps are as in the two previous examples, and are evident from the sketches of Figures 6.26 through 6.29.

Figure 6.26 shows the formation of  $v_2(-\tau)$ .

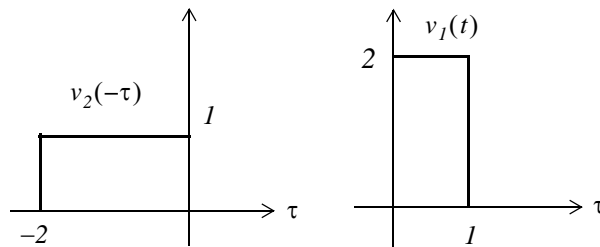


Figure 6.26. Formation of  $v_2(-\tau)$  for Example 6.6

Figure 6.27 shows the formation of  $v_2(t - \tau)$  and convolution with  $v_1(t)$  for  $0 < t < 1$ .

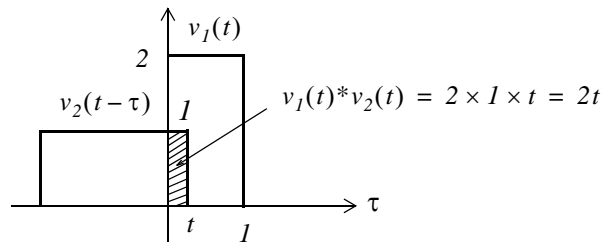


Figure 6.27. Formation of  $v_2(t - \tau)$  and convolution with  $v_1(t)$

For  $0 < t < 1$ ,

$$v_1(t) * v_2(t) = \int_0^t (1)(2) d\tau = 2\tau \Big|_0^t = 2t \quad (6.30)$$

Figure 6.28 shows the convolution of  $v_2(t - \tau)$  with  $v_1(t)$  for  $1 < t < 2$ .

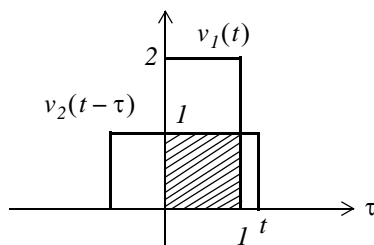


Figure 6.28. Convolution of  $v_2(t - \tau)$  with  $v_1(t)$  for  $1 < t < 2$

For  $1 < t < 2$ ,

$$v_1(t) * v_2(t) = \int_0^1 (1)(2) d\tau = 2\tau \Big|_0^1 = 2 \quad (6.31)$$

Figure 6.29 shows the convolution of  $v_2(t - \tau)$  with  $v_1(t)$  for  $2 < t < 3$ .

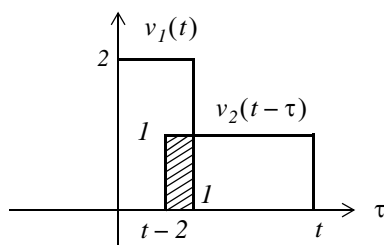


Figure 6.29. Convolution of  $v_2(t - \tau)$  with  $v_1(t)$  for  $2 < t < 3$

For  $2 < t < 3$

$$v_1(t) * v_2(t) = \int_{t-2}^1 (1)(2) d\tau = 2\tau \Big|_{t-2}^1 = -2t + 6 \quad (6.32)$$

From (6.30), (6.31), and (6.32), we obtain the waveform of Figure 6.30 that represents the convolution of the signals  $v_1(t)$  and  $v_2(t - \tau)$ .

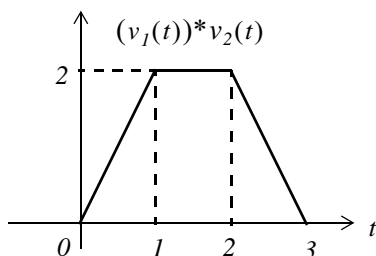


Figure 6.30. Convolution of  $v_1(t)$  with  $v_2(t)$  for  $0 < t < 3$

---

## Chapter 6 The Impulse Response and Convolution

---

In summary, the procedure for the graphical evaluation of the convolution integral, is as follows:

1. We substitute  $u(t)$  and  $h(t)$  with  $u(\tau)$  and  $h(\tau)$  respectively.
2. We fold (form the mirror image of)  $u(\tau)$  or  $h(\tau)$  about the vertical axis to obtain  $u(-\tau)$  or  $h(-\tau)$ .
3. We slide  $u(-\tau)$  or  $h(-\tau)$  to the right a distance  $t$  to obtain  $u(t-\tau)$  or  $h(t-\tau)$ .
4. We multiply the two functions to obtain the product  $u(t-\tau)h(\tau)$ , or  $u(\tau)h(t-\tau)$ .
5. We integrate this product by varying  $t$  from  $-\infty$  to  $+\infty$ .

### 6.5 Circuit Analysis with the Convolution Integral

We can use the convolution integral in circuit analysis as illustrated by the following example.

#### Example 6.7

For the circuit of Figure 6.31, use the convolution integral to find the capacitor voltage when the input is the unit step function  $u_0(t)$ , and  $v_C(0^-) = 0$ .

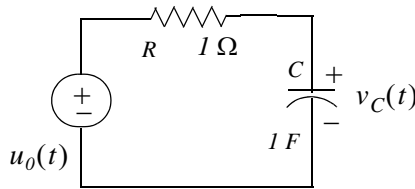


Figure 6.31. Circuit for Example 6.7

#### Solution:

Before we apply the convolution integral, we must know the impulse response  $h(t)$  of this circuit. The circuit of Figure 6.31 was analyzed in Example 6.1 where we found that

$$h(t) = \frac{1}{RC} e^{-t/RC} u_0(t) \quad (6.33)$$

With the given values, (6.33) reduces to

$$h(t) = e^{-t} u_0(t) \quad (6.34)$$

Next, we use the graphical evaluation of the convolution integral as shown in Figures 6.32 through 6.34.

The formation of  $u_0(-\tau)$  is shown in Figure 6.32.



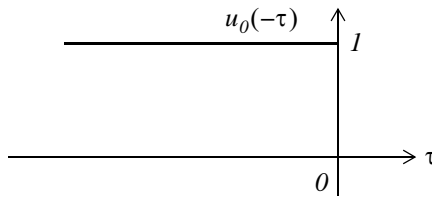


Figure 6.32. Formation of  $u_0(-\tau)$  for Example 6.7

Figure 6.33 shows the formation of  $u_0(t-\tau)$ .

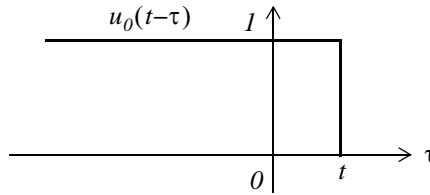


Figure 6.33. Formation of  $u_0(t-\tau)$  for Example 6.7

Figure 6.34 shows the convolution  $(u_0(t))*h(t)$ .

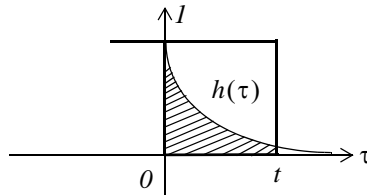


Figure 6.34. Convolution of  $u_0(t)*h(t)$  for Example 6.7

Therefore, for the interval  $0 < t < \infty$ , we get

$$u_0(t)*h(t) = \int_{-\infty}^{\infty} u_0(t-\tau)h(\tau)d\tau = \int_0^t (1)e^{-\tau}d\tau = -e^{-\tau}\Big|_0^t = e^{-\tau}\Big|_t^0 = (1 - e^{-t})u_0(t) \quad (6.35)$$

and the convolution  $u_0(t)*h(t)$  is shown in Figure 6.35.

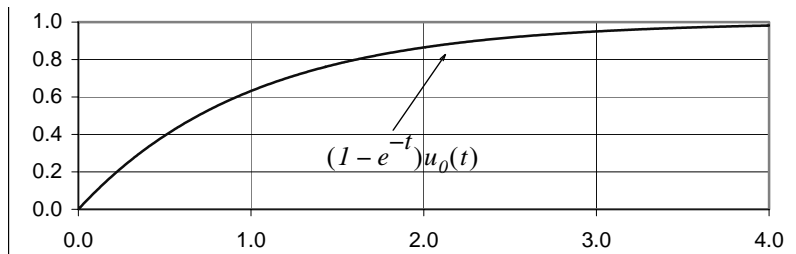


Figure 6.35. Convolution of  $u_0(t)*h(t)$  for Example 6.7

### 6.6 Summary

- The impulse response is the output (voltage or current) of a network when the input is the delta function.
- The determination of the impulse response assumes zero initial conditions.
- A function  $f(t)$  is an even function of time if the following relation holds.

$$f(-t) = f(t)$$

- A function  $f(t)$  is an odd function of time if the following relation holds.

$$-f(-t) = f(t)$$

- The product of two even or two odd functions is an even function, and the product of an even function times an odd function, is an odd function.
- A function  $f(t)$  that is neither even nor odd, can be expressed as

$$f_e(t) = \frac{1}{2}[f(t) + f(-t)]$$

or as

$$f_o(t) = \frac{1}{2}[f(t) - f(-t)]$$

where  $f_e(t)$  denotes an even function and  $f_o(t)$  denotes an odd function.

- Any function of time can be expressed as the sum of an even and an odd function, that is,

$$f(t) = f_e(t) + f_o(t)$$

- The delta function is an even function of time.
- The integral

$$\int_{-\infty}^{\infty} u(\tau)h(t - \tau)d\tau$$

or

$$\int_{-\infty}^{\infty} u(t - \tau)h(\tau)d\tau$$

is known as the convolution integral.

- If we know the impulse response of a network, we can compute the response to any input  $u(t)$  with the use of the convolution integral.

- The convolution integral is usually denoted as  $u(t)*h(t)$  or  $h(t)*u(t)$ , where the asterisk (\*) denotes convolution.
- The convolution integral is more conveniently evaluated by the graphical evaluation method.

## 6.7 Exercises

1. Compute the impulse response  $h(t) = i_L(t)$  in terms of  $R$  and  $L$  for the circuit of Figure 6.36. Then, compute the voltage  $v_L(t)$  across the inductor.

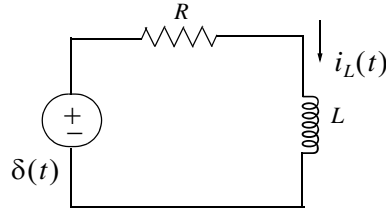


Figure 6.36. Circuit for Exercise 1

2. Repeat Example 6.4 by forming  $h(t - \tau)$  instead of  $u(t - \tau)$ , that is, use the convolution integral

$$\int_{-\infty}^{\infty} u(\tau)h(t - \tau)d\tau$$

3. Repeat Example 6.5 by forming  $h(t - \tau)$  instead of  $u(t - \tau)$ .
4. Compute  $v_1(t)*v_2(t)$  given that

$$v_1(t) = \begin{cases} 4t & t \geq 0 \\ 0 & t < 0 \end{cases} \quad v_2(t) = \begin{cases} e^{-2t} & t \geq 0 \\ 0 & t < 0 \end{cases}$$

5. For the series  $RL$  circuit shown in Figure 6.37, the response is the current  $i_L(t)$ . Use the convolution integral to find the response when the input is the unit step  $u_0(t)$ .

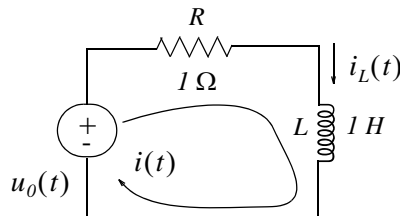


Figure 6.37. Circuit for Exercise 5

6. Compute  $v_{out}(t)$  for the network of Figure 6.38 using the convolution integral, given that  $v_{in}(t) = u_0(t) - u_0(t - 1)$ .

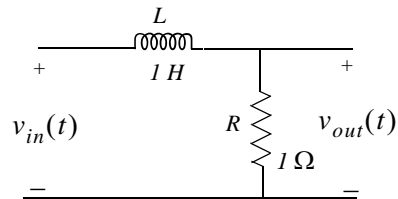


Figure 6.38. Network for Exercise 6

7. Compute  $v_{out}(t)$  for the circuit of Figure 6.39 given that  $v_{in}(t) = u_0(t) - u_0(t - 1)$ .

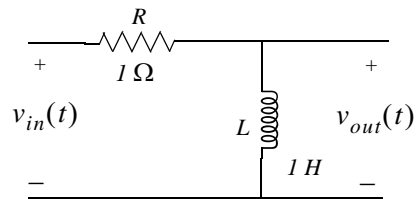
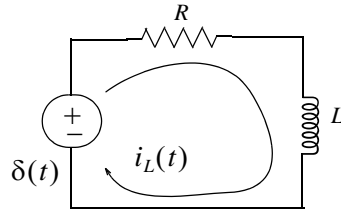


Figure 6.39. Network for Exercise 7

Hint: Use the result of Exercise 6.

6.8 Solutions to Exercises

1.



$$Ri + L \frac{di}{dt} = \delta(t)$$

Letting state variable  $x = i$ , the above relation is written as

$$\dot{x} = (-R/L)x + (1/L)\delta(t)$$

and this has the form  $\dot{x} = Ax + bu$  where  $A = -R/L$ ,  $b = 1/L$ , and  $u = \delta(t)$ . Its solution is

$$x(t) = e^{A(t-t_0)}x_0 + e^{At} \int_0^t e^{-A\tau} bu(\tau) d\tau$$

and from (6.5)

$$h(t) = i(t) = e^{At} bu_0(t) = e^{-(R/L)t} \cdot 1/L \cdot u_0(t) = (1/L)e^{-(R/L)t} u_0(t)$$

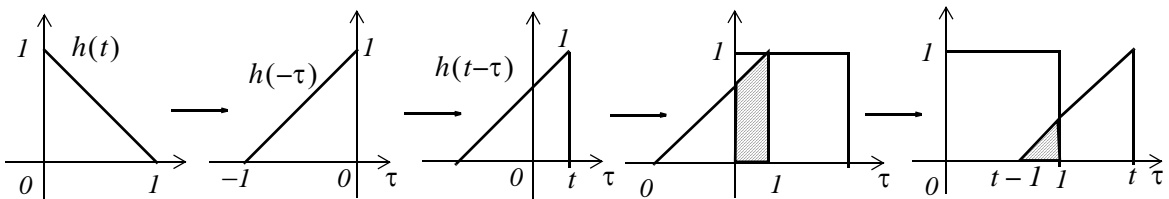
The voltage  $v_L$  across the inductor is found from

$$v_L = L \frac{d}{dt} i(t) = L \frac{d}{dt} h(t) = L \frac{d}{dt} \left( \frac{1}{L} e^{-(R/L)t} u_0(t) \right) = (-R/L) e^{-(R/L)t} u_0(t) + e^{-(R/L)t} \delta(t)$$

and using the sampling property of the delta function the above reduces to

$$v_L = (-R/L) e^{-(R/L)t} u_0(t) + \delta(t)$$

2.



From the plots above we observe that the area reaches the maximum value of  $1/2$  at  $t = 1$ , and then decreases to zero at  $t = 2$ . Alternately, using the convolution integral we get

$$u(t)*h(t) = \int_{-\infty}^{\infty} u(\tau)h(t-\tau)d\tau$$

where  $h(t) = -t + 1$ ,  $h(\tau) = -\tau + 1$ ,  $h(-\tau) = \tau + 1$ , and  $h(t-\tau) = -(t-\tau) + 1 = 1-t+\tau$ . Then, for  $0 < t < 1$

$$Area_1 = \int_0^t [(1-t) + \tau]d\tau = \left. \frac{\tau^2}{2} + (1-t)\tau \right|_0^t = \frac{t^2}{2} + (1-t)t = t - \frac{t^2}{2}$$

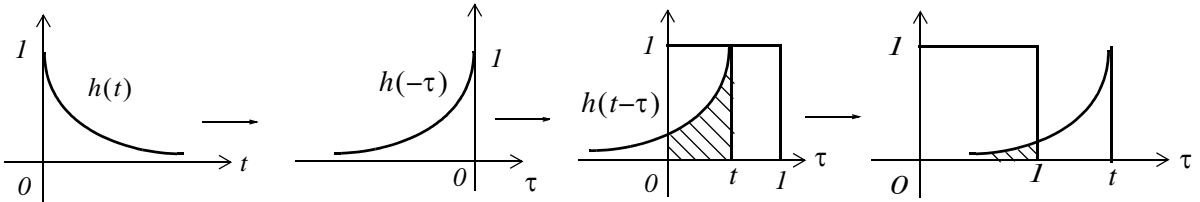
and we observe that at  $t = 1$ ,  $Area_1 = 1/2$  square units

Next, for  $1 < t < 2$

$$\begin{aligned} Area_2 &= \int_{t-1}^1 [(1-t) + \tau]d\tau = \left. \frac{\tau^2}{2} + (1-t)\tau \right|_{t-1}^1 \\ &= \frac{1}{2} + 1-t - \frac{(t-1)^2}{2} - (1-t) \cdot (t-1) = \frac{t^2}{2} - 2t + 2 \end{aligned}$$

and we observe that at  $t = 2$ ,  $Area_2 = 0$

3.



From the plots above we observe that the area reaches its maximum value at  $t = 1$ , and then decreases exponentially to zero as  $t \rightarrow \infty$ . Alternately, using the convolution integral we get

$$u(t)*h(t) = \int_{-\infty}^{\infty} u(\tau)h(t-\tau)d\tau$$

where  $h(t) = e^{-t}$ ,  $h(\tau) = e^{-\tau}$ ,  $h(-\tau) = e^{\tau}$ , and  $h(t-\tau) = e^{-(t-\tau)}$ . Then, for  $0 < t < 1$

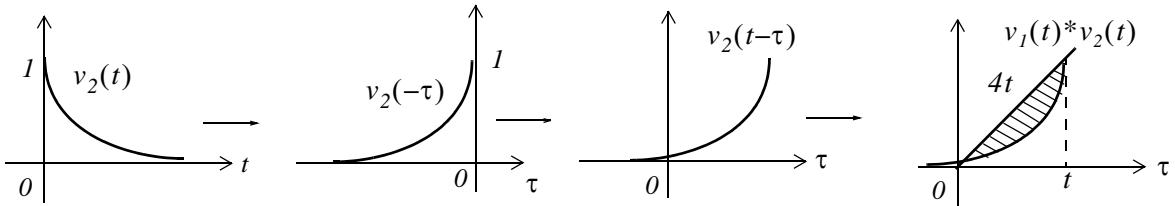
$$Area_1 = \int_0^t (1 \cdot e^{-(t-\tau)})d\tau = e^{-t} \int_0^t e^{\tau} d\tau = e^{-t}(e^t - e^0) = 1 - e^{-t}$$

For  $t > 1$

## Chapter 6 The Impulse Response and Convolution

$$Area_2 = \int_0^1 (I \cdot e^{-(t-\tau)}) d\tau = e^{-t} \int_0^1 e^{\tau} d\tau = e^{-t} e^{\tau} \Big|_0^1 = e^{-t} (e^1 - e^0) = e^{-t} (e - 1)$$

4.



$$v_1(t) * v_2(t) = \int_0^t v_1(\tau) v_2(t-\tau) d\tau = \int_0^t 4\tau e^{-2(t-\tau)} d\tau = 4e^{-2t} \int_0^t \tau e^{2\tau} d\tau$$

From tables of integrals,

$$\int x e^{ax} dx = \frac{e^{ax}}{a^2} (ax - 1)$$

and thus

$$\begin{aligned} v_1(t) * v_2(t) &= (4e^{-2t}) \frac{e^{2\tau} (2\tau - 1)}{4} \Big|_0^t = e^{-2t} [e^{2t} (2t - 1) - e^0 (-1)] \\ &= e^0 (2t - 1 + e^{-2t}) = 2t + e^{-2t} - 1 \end{aligned}$$

Check:

$$v_1(t) * v_2(t) \Leftrightarrow V_1(s) \cdot V_2(s), V_1(s) = 4/s^2, V_2(s) = 1/(s+2)$$

$$V_1(s) \cdot V_2(s) = \frac{4}{s^2(s+2)} = \frac{4}{s^3 + 2s^2}$$

syms s t; ilaplace(4/(s^3+2\*s^2))

ans =  
2\*t-1+exp(-2\*t)

5.

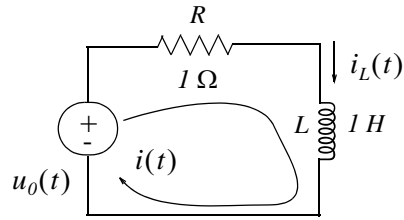
To use the convolution integral we must first find the impulse response. It was found in Exercise 1 as

$$h(t) = i(t) = (1/L) e^{-(R/L)t} u_0(t)$$

and with the given values,

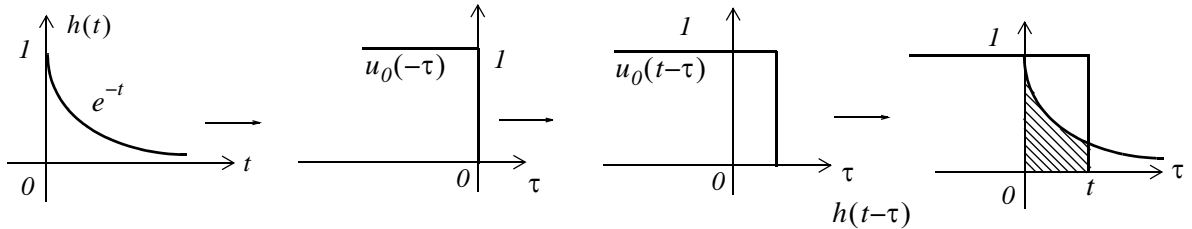
$$h(t) = e^{-t} u_0(t)$$



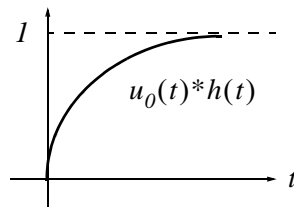


When the input is the unit step  $u_0(t)$ ,

$$i(t)|_{v_{in}=u_0(t)} = \int_{-\infty}^{\infty} u_0(t-\tau)h(\tau)d\tau$$



$$i(t)|_{v_{in}=u_0(t)} = \int_0^t (1) \cdot e^{-\tau} d\tau = -e^{-\tau} \Big|_0^t = e^{-\tau} \Big|_t^0 = (1 - e^{-t})(u_0(t))$$



6. We will first compute the impulse response, that is, the output when the input is the delta function, i.e.,  $v_{in}(t) = \delta(t)$ . Then, by KVL

$$L \frac{di_L}{dt} + Ri_L = \delta(t)$$

and with  $i_L = x$

$$1 \cdot \dot{x} + 1 \cdot x = \delta(t)$$

or

$$\dot{x} = -x + \delta(t)$$

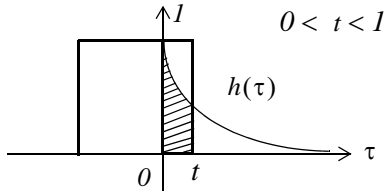
By comparison with  $\dot{x} = Ax + bu$  we see that  $A = -1$  and  $b = 1$ .

## Chapter 6 The Impulse Response and Convolution

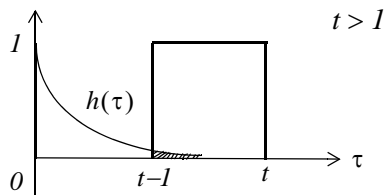
From (6.5)

$$h(t) = e^{At} b u_0(t) = e^{-t} \cdot 1 = e^{-t}$$

Now, we compute  $v_{out}(t)$  when  $v_{in}(t) = u_0(t) - u_0(t - 1)$  by convolving the impulse response  $h(t)$  with this input  $v_{in}(t)$ , that is,  $v_{out}(t) = v_{in}(t) * h(t)$ . The remaining steps are as in Example 6.5 shown below.

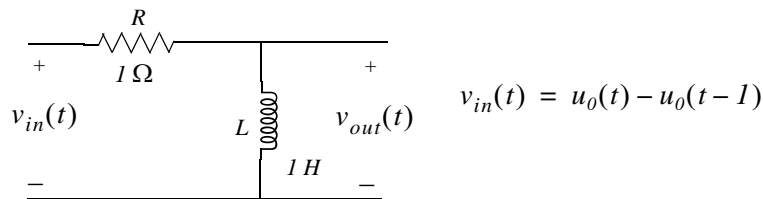


$$\int_0^t (I)(e^{-\tau}) d\tau = -e^{-\tau} \Big|_0^t = e^{-\tau} \Big|_t^0 = 1 - e^{-t}$$



$$\int_{t-1}^t (I)(e^{-\tau}) d\tau = -e^{-\tau} \Big|_{t-1}^t = e^{-\tau} \Big|_t^{t-1} = e^{-t}(e - 1)$$

7.



$$v_{out}(t) = v_L = v_{in} - v_R$$

where from Exercise 6,

$$v_R = \begin{cases} 1 - e^{-t} & 0 < t < 1 \\ e^{-t}(e - 1) & t > 1 \end{cases}$$

Then, for this circuit,

$$v_R = \begin{cases} (1 - (1 - e^{-t})) = e^{-t} & 0 < t < 1 \\ 0 - e^{-t}(e - 1) = (1 - e)e^{-t} & t > 1 \end{cases}$$

This chapter is an introduction to Fourier series. We begin with the definition of sinusoids that are harmonically related and the procedure for determining the coefficients of the trigonometric form of the series. Then, we discuss the different types of symmetry and how they can be used to predict the terms that may be present. Several examples are presented to illustrate the approach. The alternate trigonometric and the exponential forms are also presented.

### 7.1 Wave Analysis

The French mathematician Fourier found that any *periodic* waveform, that is, a waveform that repeats itself after some time, can be expressed as a series of harmonically related sinusoids, i.e., sinusoids whose frequencies are multiples of a *fundamental* frequency (or first harmonic). For example, a series of sinusoids with frequencies  $1\text{ MHz}$ ,  $2\text{ MHz}$ ,  $3\text{ MHz}$ , and so on, contains the fundamental frequency of  $1\text{ MHz}$ , a second harmonic of  $2\text{ MHz}$ , a third harmonic of  $3\text{ MHz}$ , and so on. In general, any periodic waveform  $f(t)$  can be expressed as

$$f(t) = \frac{1}{2}a_0 + a_1\cos\omega t + a_2\cos 2\omega t + a_3\cos 3\omega t + a_4\cos 4\omega t + \dots \quad (7.1)$$
$$+ b_1\sin\omega t + b_2\sin 2\omega t + b_3\sin 3\omega t + b_4\sin 4\omega t + \dots$$

or

$$f(t) = \frac{1}{2}a_0 + \sum_{n=1}^{\infty} (a_n\cos n\omega t + b_n\sin n\omega t) \quad (7.2)$$

where the first term  $a_0/2$  is a constant, and represents the *DC* (average) component of  $f(t)$ . Thus, if  $f(t)$  represents some voltage  $v(t)$ , or current  $i(t)$ , the term  $a_0/2$  is the average value of  $v(t)$  or  $i(t)$ .

The terms with the coefficients  $a_1$  and  $b_1$  together, represent the fundamental frequency component  $\omega^*$ . Likewise, the terms with the coefficients  $a_2$  and  $b_2$  together, represent the second harmonic component  $2\omega$ , and so on.

Since any periodic waveform  $f(t)$  can be expressed as a Fourier series, it follows that the sum of the

---

\* We recall that  $k_1\cos\omega t + k_2\sin\omega t = k\cos(\omega t + \theta)$  where  $\theta$  is a constant.

DC, the fundamental, the second harmonic, and so on, must produce the waveform  $f(t)$ . Generally, the sum of two or more sinusoids of different frequencies produce a waveform that is not a sinusoid as shown in Figure 7.1.

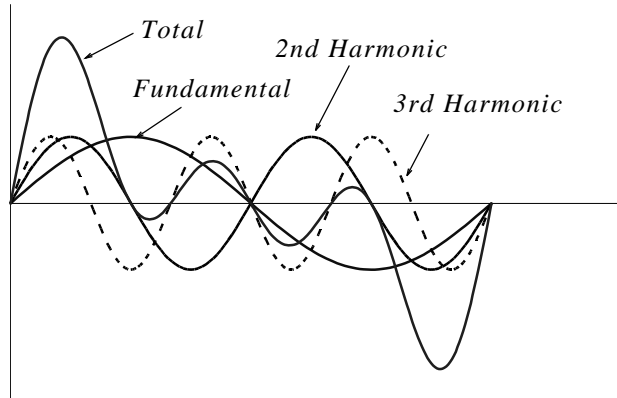


Figure 7.1. Summation of a fundamental, second and third harmonic

### 7.2 Evaluation of the Coefficients

Evaluations of  $a_i$  and  $b_i$  coefficients of (7.1) is not a difficult task because the sine and cosine are *orthogonal functions*, that is, the product of the sine and cosine functions under the integral evaluated from  $0$  to  $2\pi$  is zero. This will be shown shortly.

Let us consider the functions  $\sin mt$  and  $\cos mt$  where  $m$  and  $n$  are any integers, and for convenience, we have assumed that  $\omega = 1$ . Then,

$$\int_0^{2\pi} \sin mt dt = 0 \quad (7.3)$$

$$\int_0^{2\pi} \cos mt dt = 0 \quad (7.4)$$

$$\int_0^{2\pi} (\sin mt)(\cos nt) dt = 0 \quad (7.5)$$

The integrals of (7.3) and (7.4) are zero since the net area over the  $0$  to  $2\pi$  area is zero. The integral of (7.5) is also zero since

$$\sin x \cos y = \frac{1}{2} [\sin(x+y) + \sin(x-y)]$$

This is also obvious from the plot of Figure 7.2, where we observe that the net shaded area above and below the time axis is zero.

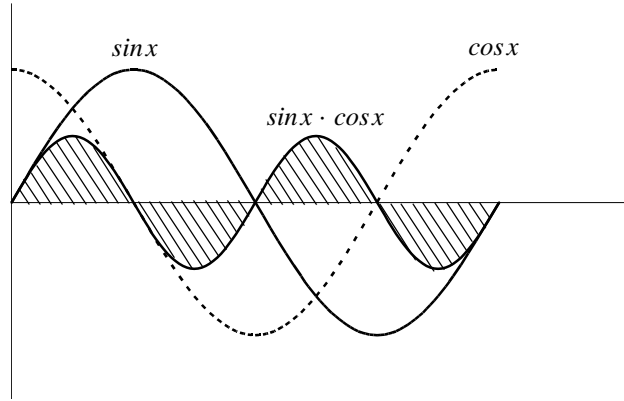


Figure 7.2. Graphical proof of  $\int_0^{2\pi} (\sin mt)(\cos nt)dt = 0$

Moreover, if  $m$  and  $n$  are different integers, then,

$$\int_0^{2\pi} (\sin mt)(\sin nt)dt = 0 \tag{7.6}$$

since

$$(\sin x)(\sin y) = \frac{1}{2}[\cos(x - y) - \cos(x + y)]$$

The integral of (7.6) can also be confirmed graphically as shown in Figure 7.3, where  $m = 2$  and  $n = 3$ . We observe that the net shaded area above and below the time axis is zero.

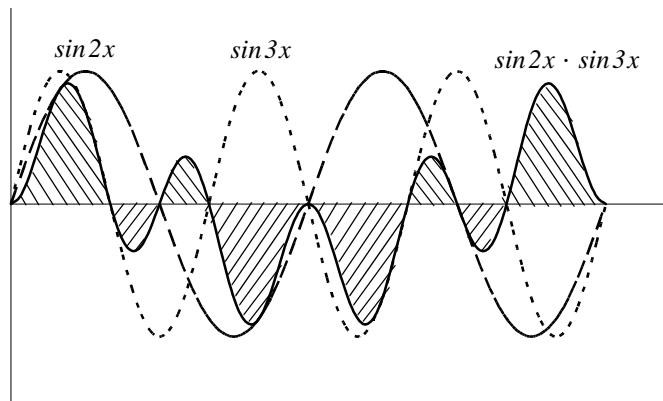


Figure 7.3. Graphical proof of  $\int_0^{2\pi} (\sin mt)(\sin nt)dt = 0$  for  $m = 2$  and  $n = 3$

Also, if  $m$  and  $n$  are different integers, then,

$$\int_0^{2\pi} (\cos mt)(\cos nt)dt = 0 \quad (7.7)$$

since

$$(\cos x)(\cos y) = \frac{1}{2}[\cos(x+y) + \cos(x-y)]$$

The integral of (7.7) can also be confirmed graphically as shown in Figure 7.4, where  $m = 2$  and  $n = 3$ . We observe that the net shaded area above and below the time axis is zero.

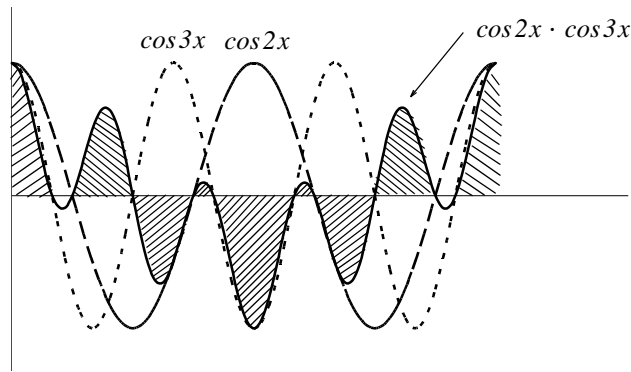


Figure 7.4. Graphical proof of  $\int_0^{2\pi} (\cos mt)(\cos nt)dt = 0$  for  $m = 2$  and  $n = 3$

However, if in (7.6) and (7.7),  $m = n$ , then,

$$\int_0^{2\pi} (\sin mt)^2 dt = \pi \quad (7.8)$$

and

$$\int_0^{2\pi} (\cos mt)^2 dt = \pi \quad (7.9)$$

The integrals of (7.8) and (7.9) can also be seen to be true graphically with the plots of Figures 7.5 and 7.6.

It was stated earlier that the sine and cosine functions are orthogonal to each other. The simplification obtained by application of the orthogonality properties of the sine and cosine functions, becomes apparent in the discussion that follows.

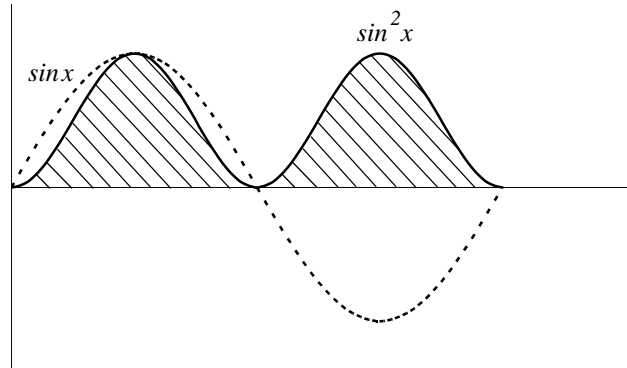


Figure 7.5. Graphical proof of  $\int_0^{2\pi} (\sin mt)^2 dt = \pi$

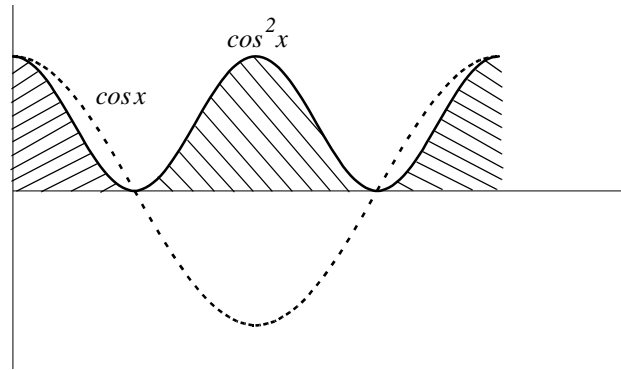


Figure 7.6. Graphical proof of  $\int_0^{2\pi} (\cos mt)^2 dt = \pi$

In (7.1), for simplicity, we let  $\omega = 1$ . Then,

$$f(t) = \frac{1}{2}a_0 + a_1 \cos t + a_2 \cos 2t + a_3 \cos 3t + a_4 \cos 4t + \dots \tag{7.10}$$

$$+ b_1 \sin t + b_2 \sin 2t + b_3 \sin 3t + b_4 \sin 4t + \dots$$

To evaluate any coefficient, say  $b_2$ , we multiply both sides of (7.10) by  $\sin 2t$ . Then,

$$f(t) \sin 2t = \frac{1}{2}a_0 \sin 2t + a_1 \cos t \sin 2t + a_2 \cos 2t \sin 2t + a_3 \cos 3t \sin 2t + a_4 \cos 4t \sin 2t + \dots$$

$$+ b_1 \sin t \sin 2t + b_2 (\sin 2t)^2 + b_3 \sin 3t \sin 2t + b_4 \sin 4t \sin 2t + \dots$$

Next, we multiply both sides of the above expression by  $dt$ , and we integrate over the period  $0$  to  $2\pi$ . Then,

$$\begin{aligned}
 \int_0^{2\pi} f(t) \sin 2t dt &= \frac{1}{2} a_0 \int_0^{2\pi} \sin 2t dt + a_1 \int_0^{2\pi} \cos t \sin 2t dt + a_2 \int_0^{2\pi} \cos 2t \sin 2t dt \\
 &+ a_3 \int_0^{2\pi} \cos 3t \sin 2t dt + a_4 \int_0^{2\pi} \cos 4t \sin 2t dt + \dots \\
 &+ b_1 \int_0^{2\pi} \sin t \sin 2t dt + b_2 \int_0^{2\pi} (\sin 2t)^2 dt + b_3 \int_0^{2\pi} \sin 3t \sin 2t dt \\
 &+ b_4 \int_0^{2\pi} \sin 4t \sin 2t dt + \dots
 \end{aligned} \tag{7.11}$$

We observe that every term on the right side of (7.11) except the term

$$b_2 \int_0^{2\pi} (\sin 2t)^2 dt$$

is zero as we found in (7.6) and (7.7). Therefore, (7.11) reduces to

$$\int_0^{2\pi} f(t) \sin 2t dt = b_2 \int_0^{2\pi} (\sin 2t)^2 dt = b_2 \pi$$

or

$$b_2 = \frac{1}{\pi} \int_0^{2\pi} f(t) \sin 2t dt$$

and thus we can evaluate this integral for any given function  $f(t)$ . The remaining coefficients can be evaluated similarly.

The coefficients  $a_0$ ,  $a_n$ , and  $b_n$  are found from the following relations.

$$\boxed{\frac{1}{2} a_0 = \frac{1}{2\pi} \int_0^{2\pi} f(t) dt} \tag{7.12}$$

$$\boxed{a_n = \frac{1}{\pi} \int_0^{2\pi} f(t) \cos nt dt} \tag{7.13}$$

$$\boxed{b_n = \frac{1}{\pi} \int_0^{2\pi} f(t) \sin nt dt} \tag{7.14}$$

The integral of (7.12) yields the average (*DC*) value of  $f(t)$ .



### 7.3 Symmetry

With a few exceptions such as the waveform of Example 7.6, the most common waveforms that are used in science and engineering, do not have the average, cosine, and sine terms all present. Some waveforms have cosine terms only, while others have sine terms only. Still other waveforms have or have not *DC* components. Fortunately, it is possible to predict which terms will be present in the trigonometric Fourier series, by observing whether or not the given waveform possesses some kind of symmetry.

We will discuss three types of symmetry that can be used to facilitate the computation of the trigonometric Fourier series form. These are:

1. *Odd symmetry* – If a waveform has odd symmetry, that is, if it is an odd function, the series will consist of sine terms only. In other words, if  $f(t)$  is an odd function, all the  $a_i$  coefficients including  $a_0$ , will be zero.
2. *Even symmetry* – If a waveform has even symmetry, that is, if it is an even function, the series will consist of cosine terms only, and  $a_0$  may or may not be zero. In other words, if  $f(t)$  is an even function, all the  $b_i$  coefficients will be zero.
3. *Half-wave symmetry* – If a waveform has half-wave symmetry (to be defined shortly), only odd (odd cosine and odd sine) harmonics will be present. In other words, all even (even cosine and even sine) harmonics will be zero.

We defined odd and even functions in Chapter 6. We recall that odd functions are those for which

$$-f(-t) = f(t) \quad (7.15)$$

and even functions are those for which

$$f(-t) = f(t) \quad (7.16)$$

Examples of odd and even functions were given in Chapter 6. Generally, an odd function has odd powers of the independent variable  $t$ , and an even function has even powers of the independent variable  $t$ . Thus, the product of two odd functions or the product of two even functions will result in an even function, whereas the product of an odd function and an even function will result in an odd function. However, the sum (or difference) of an odd and an even function will yield a function which is neither odd nor even.

To understand half-wave symmetry, we recall that any periodic function with period  $T$ , is expressed as

$$f(t) = f(t + T) \quad (7.17)$$

that is, the function with value  $f(t)$  at any time  $t$ , will have the same value again at a later time  $t + T$ .

A periodic waveform with period  $T$ , has half-wave symmetry if

$$-f(t + T/2) = f(t) \tag{7.18}$$

that is, the shape of the negative half-cycle of the waveform is the same as that of the positive half-cycle, but inverted.

We will test the waveforms of Figures 7.7 through 7.11 for any of the three types of symmetry.

### 1. Square waveform

For the waveform of Figure 7.7, the average value over one period  $T$  is zero, and therefore,  $a_0 = 0$ . It is also an odd function and has half-wave symmetry since  $-f(-t) = f(t)$  and  $-f(t + T/2) = f(t)$ .

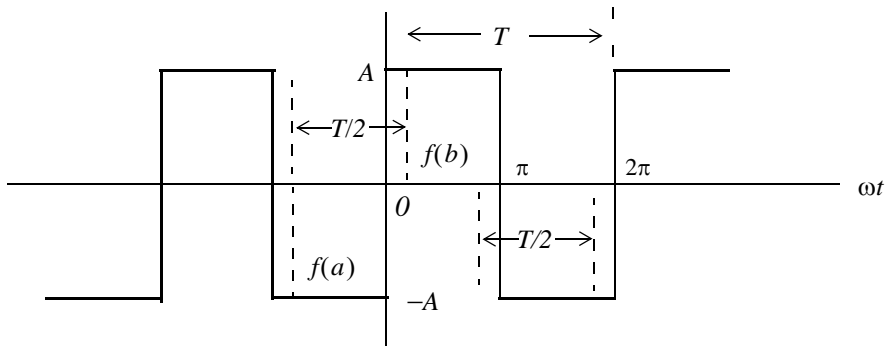


Figure 7.7. Square waveform test for symmetry

#### Note

An easy method to test for half-wave symmetry is to choose any half-period  $T/2$  length on the time axis as shown in Figure 7.7, and observe the values of  $f(t)$  at the left and right points on the time axis, such as  $f(a)$  and  $f(b)$ . If there is half-wave symmetry, these will always be equal but will have opposite signs as we slide the half-period  $T/2$  length to the left or to the right on the time axis at non-zero values of  $f(t)$ .

### 2. Square waveform with ordinate axis shifted

If we shift the ordinate axis  $\pi/2$  radians to the right, as shown in Figure 7.8, we see that the square waveform now becomes an even function and has half-wave symmetry since  $f(-t) = f(t)$  and  $-f(t + T/2) = f(t)$ . Also,  $a_0 = 0$ .

Obviously, if the ordinate axis is shifted by any other value other than an odd multiple of  $\pi/2$ , the waveform will have neither odd nor even symmetry.

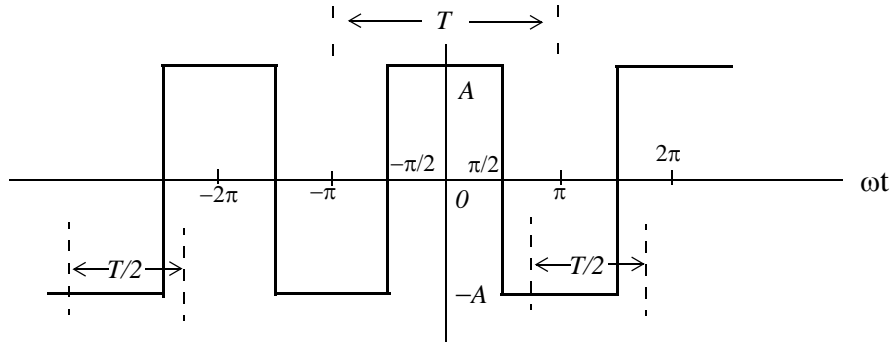


Figure 7.8. Square waveform with ordinate shifted by  $\pi/2$

### 3. Sawtooth waveform

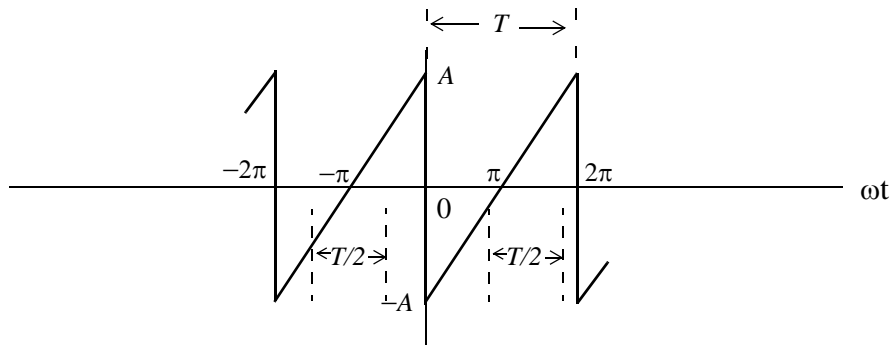


Figure 7.9. Sawtooth waveform test for symmetry

For the sawtooth waveform of Figure 7.9, the average value over one period  $T$  is zero and therefore,  $a_0 = 0$ . It is also an odd function because  $-f(-t) = f(t)$ , but has no half-wave symmetry since  $-f(t + T/2) \neq f(t)$

### 4. Triangular waveform

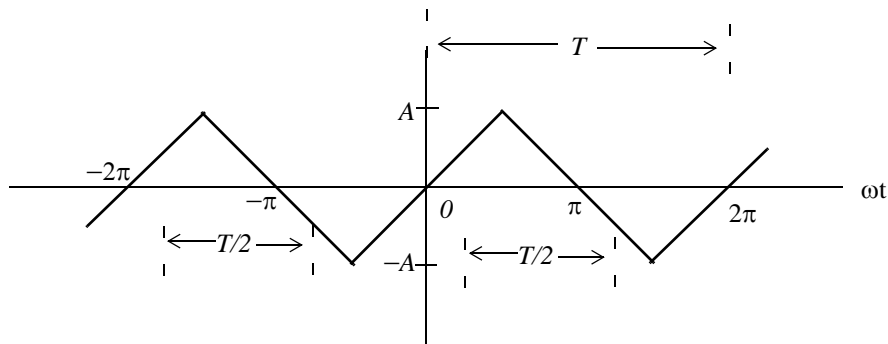


Figure 7.10. Triangular waveform test for symmetry

For this triangular waveform of Figure 7.10, the average value over one period  $T$  is zero and therefore,  $a_0 = 0$ . It is also an odd function since  $-f(-t) = f(t)$ . Moreover, it has half-wave symmetry because  $-f(t + T/2) = f(t)$

### 5. Fundamental, Second and Third Harmonics of a Sinusoid

Figure 7.11 shows a fundamental, second, and third harmonic of a typical sinewave.

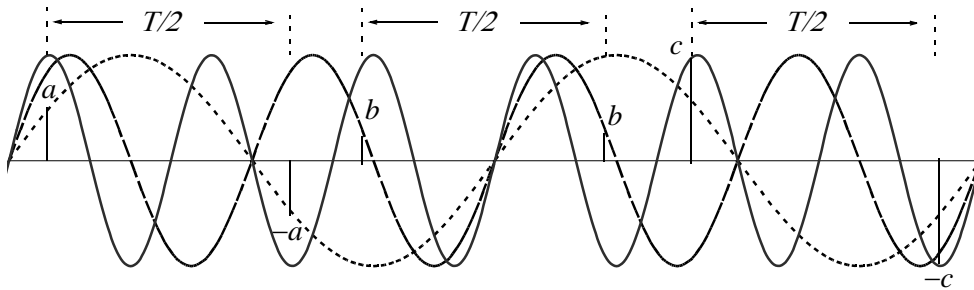


Figure 7.11. Fundamental, second, and third harmonic test for symmetry

In Figure 7.11, the half period  $T/2$ , is chosen as the half period of the period of the fundamental frequency. This is necessary in order to test the fundamental, second, and third harmonics for half-wave symmetry. The fundamental has half-wave symmetry since the  $a$  and  $-a$  values, when separated by  $T/2$ , are equal and opposite. The second harmonic has no half-wave symmetry because the ordinates  $b$  on the left and  $b$  on the right, although are equal, there are not opposite in sign. The third harmonic has half-wave symmetry since the  $c$  and  $-c$  values, when separated by  $T/2$  are equal and opposite. These waveforms can be either odd or even depending on the position of the ordinate. Also, all three waveforms have zero average value unless the abscissa axis is shifted up or down.

In the expressions of the integrals in (7.12) through (7.14), the limits of integration for the coefficients  $a_n$  and  $b_n$  are given as  $0$  to  $2\pi$ , that is, one period  $T$ . Of course, we can choose the limits of integration as  $-\pi$  to  $+\pi$ . Also, if the given waveform is an odd function, or an even function, or has half-wave symmetry, we can compute the non-zero coefficients  $a_n$  and  $b_n$  by integrating from  $0$  to  $\pi$  only, and multiply the integral by  $2$ . Moreover, if the waveform has half-wave symmetry and is also an odd or an even function, we can choose the limits of integration from  $0$  to  $\pi/2$  and multiply the integral by  $4$ . The proof is based on the fact that, the product of two even functions is another even function, and also that the product of two odd functions results also in an even function. However, it is important to remember that when using these shortcuts, we must evaluate the coefficients  $a_n$  and  $b_n$  for the integer values of  $n$  that will result in non-zero coefficients. This point will be illustrated in Example 7.2.

We will now derive the trigonometric Fourier series of the most common periodic waveforms.

## 7.4 Waveforms in Trigonometric Form of Fourier Series

### Example 7.1

Compute the trigonometric Fourier series of the square waveform of Figure 7.12.

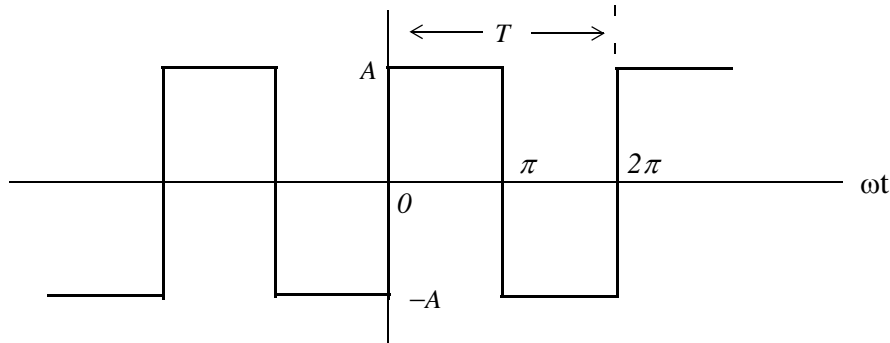


Figure 7.12. Square waveform for Example 7.1

### Solution:

The trigonometric series will consist of sine terms only because, as we already know, this waveform is an odd function. Moreover, only odd harmonics will be present since this waveform has half-wave symmetry. However, we will compute all coefficients to verify this. Also, for brevity, we will assume that  $\omega = 1$ .

The  $a_i$  coefficients are found from

$$\begin{aligned} a_n &= \frac{1}{\pi} \int_0^{2\pi} f(t) \cos nt dt = \frac{1}{\pi} \left[ \int_0^{\pi} A \cos nt dt + \int_{\pi}^{2\pi} (-A) \cos nt dt \right] = \frac{A}{n\pi} (\sin nt \Big|_0^{\pi} - \sin nt \Big|_{\pi}^{2\pi}) \\ &= \frac{A}{n\pi} (\sin n\pi - 0 - \sin n2\pi + \sin n\pi) = \frac{A}{n\pi} (2 \sin n\pi - \sin n2\pi) \end{aligned} \quad (7.19)$$

and since  $n$  is an integer (positive or negative) or zero, the terms inside the parentheses on the second line of (7.19) are zero and therefore, all  $a_i$  coefficients are zero, as expected since the square waveform has odd symmetry. Also, by inspection, the average (*DC*) value is zero, but if we attempt to verify this using (7.19), we will get the indeterminate form  $0/0$ . To work around this problem, we will evaluate  $a_0$  directly from (7.12). Then,

$$a_0 = \frac{1}{\pi} \left[ \int_0^{\pi} A dt + \int_{\pi}^{2\pi} (-A) dt \right] = \frac{A}{\pi} (\pi - 0 - 2\pi + \pi) = 0 \quad (7.20)$$

---

## Chapter 7 Fourier Series

---

The  $b_i$  coefficients are found from (7.14), that is,

$$\begin{aligned} b_n &= \frac{1}{\pi} \int_0^{2\pi} f(t) \sin n t dt = \frac{1}{\pi} \left[ \int_0^{\pi} A \sin n t dt + \int_{\pi}^{2\pi} (-A) \sin n t dt \right] = \frac{A}{n\pi} (-\cos n t \Big|_0^{\pi} + \cos n t \Big|_{\pi}^{2\pi}) \\ &= \frac{A}{n\pi} (-\cos n\pi + 1 + \cos 2n\pi - \cos n\pi) = \frac{A}{n\pi} (1 - 2\cos n\pi + \cos 2n\pi) \end{aligned} \quad (7.21)$$

For  $n = \text{even}$ , (7.21) yields

$$b_n = \frac{A}{n\pi} (1 - 2 + 1) = 0$$

as expected, since the square waveform has half-wave symmetry.

For  $n = \text{odd}$ , (7.21) reduces to

$$b_n = \frac{A}{n\pi} (1 + 2 + 1) = \frac{4A}{n\pi}$$

and thus

$$b_1 = \frac{4A}{\pi}$$

$$b_3 = \frac{4A}{3\pi}$$

$$b_5 = \frac{4A}{5\pi}$$

and so on.

Therefore, the trigonometric Fourier series for the *square waveform with odd symmetry* is

$$f(t) = \frac{4A}{\pi} \left( \sin \omega t + \frac{1}{3} \sin 3\omega t + \frac{1}{5} \sin 5\omega t + \dots \right) = \frac{4A}{\pi} \sum_{n=\text{odd}} \frac{1}{n} \sin n\omega t \quad (7.22)$$

It was stated above that, if the given waveform has half-wave symmetry, and it is also an odd or an even function, we can integrate from  $0$  to  $\pi/2$ , and multiply the integral by  $4$ . We will apply this property to the following example.

### Example 7.2

Compute the trigonometric Fourier series of the square waveform of Example 1 by integrating from  $0$  to  $\pi/2$ , and multiplying the result by  $4$ .

#### Solution:

Since the waveform is an odd function and has half-wave symmetry, we are only concerned with the odd  $b_n$  coefficients. Then,

$$b_n = 4 \frac{1}{\pi} \int_0^{\pi/2} f(t) \sin n t dt = \frac{4A}{n\pi} (-\cos n t \Big|_0^{\pi/2}) = \frac{4A}{n\pi} (-\cos n \frac{\pi}{2} + 1) \quad (7.23)$$

For  $n = \text{odd}$ , (7.23) becomes

$$b_n = \frac{4A}{n\pi} (-0 + 1) = \frac{4A}{n\pi} \quad (7.24)$$

as before, and thus the series is the same as in Example 1.

**Example 7.3**

Compute the trigonometric Fourier series of the square waveform of Figure 7.13.

**Solution:**

This is the same waveform as in Example 7.1, except that the ordinate has been shifted to the right by  $\pi/2$  radians, and has become an even function. However, it still has half-wave symmetry. Therefore, the trigonometric Fourier series will consist of odd cosine terms only.

Since the waveform has half-wave symmetry and is an even function, it will suffice to integrate from  $0$  to  $\pi/2$ , and multiply the integral by  $4$ . The  $a_n$  coefficients are found from

$$a_n = 4 \frac{1}{\pi} \int_0^{\pi/2} f(t) \cos n t dt = \frac{4}{\pi} \left[ \int_0^{\pi/2} A \cos n t dt \right] = \frac{4A}{n\pi} (\sin n t \Big|_0^{\pi/2}) = \frac{4A}{n\pi} \left( \sin n \frac{\pi}{2} \right) \quad (7.25)$$

We observe that for  $n = \text{even}$ , all  $a_n$  coefficients are zero, and thus all even harmonics are zero as expected. Also, by inspection, the average ( $DC$ ) value is zero.

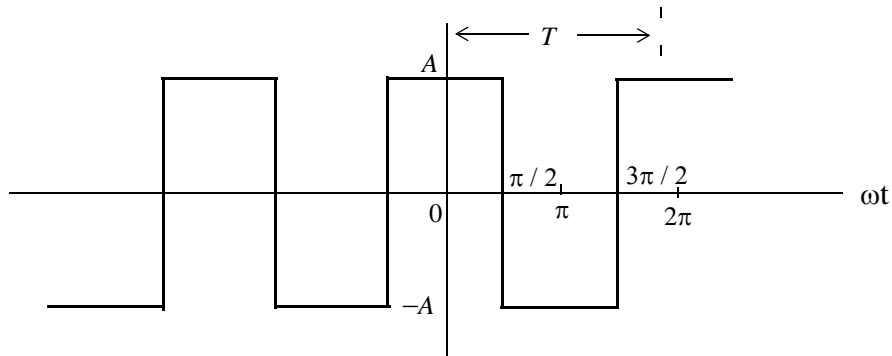


Figure 7.13. Waveform for Example 7.3

For  $n = \text{odd}$ , we observe from (7.25) that  $\sin n \frac{\pi}{2}$ , will alternate between  $+1$  and  $-1$  depending on the odd integer assigned to  $n$ . Thus,

$$a_n = \pm \frac{4A}{n\pi} \quad (7.26)$$

For  $n = 1, 5, 9, 13$ , and so on, (7.26) becomes

$$a_n = \frac{4A}{n\pi}$$

and for  $n = 3, 7, 11, 15$ , and so on, it becomes

$$a_n = \frac{-4A}{n\pi}$$

Then, the trigonometric Fourier series for the *square waveform with even symmetry* is

$$f(t) = \frac{4A}{\pi} \left( \cos \omega t - \frac{1}{3} \cos 3\omega t + \frac{1}{5} \cos 5\omega t - \dots \right) = \frac{4A}{\pi} \sum_{n=\text{odd}} (-1)^{\frac{(n-1)}{2}} \frac{1}{n} \cos n\omega t \quad (7.27)$$

### Alternate Solution:

Since the waveform of Example 7.3 is the same as of Example 7.1, but shifted to the right by  $\pi/2$  radians, we can use the result of Example 7.11, i.e.,

$$f(t) = \frac{4A}{\pi} \left( \sin \omega t + \frac{1}{3} \sin 3\omega t + \frac{1}{5} \sin 5\omega t + \dots \right) \quad (7.28)$$

and substitute  $\omega t$  with  $\omega t + \pi/2$ , that is, we let  $\omega t = \omega \tau + \pi/2$ . With this substitution, relation (7.28) becomes

$$\begin{aligned} f(\tau) &= \frac{4A}{\pi} \left[ \sin \left( \omega \tau + \frac{\pi}{2} \right) + \frac{1}{3} \sin 3 \left( \omega \tau + \frac{\pi}{2} \right) + \frac{1}{5} \sin 5 \left( \omega \tau + \frac{\pi}{2} \right) + \dots \right] \\ &= \frac{4A}{\pi} \left[ \sin \left( \omega \tau + \frac{\pi}{2} \right) + \frac{1}{3} \sin \left( 3\omega \tau + \frac{3\pi}{2} \right) + \frac{1}{5} \sin \left( 5\omega \tau + \frac{5\pi}{2} \right) + \dots \right] \end{aligned} \quad (7.29)$$

and using the identities  $\sin(x + \pi/2) = \cos x$ ,  $\sin(x + 3\pi/2) = -\cos x$ , and so on, we rewrite (7.29) as

$$f(\tau) = \frac{4A}{\pi} \left[ \cos \omega \tau - \frac{1}{3} \cos 3\omega \tau + \frac{1}{5} \cos 5\omega \tau - \dots \right] \quad (7.30)$$

and this is the same as (7.22).

Therefore, if we compute the trigonometric Fourier series with reference to one ordinate, and afterwards we want to recompute the series with reference to a different ordinate, we can use the above procedure to save time.



**Example 7.4**

Compute the trigonometric Fourier series of the sawtooth waveform of Figure 7.14.

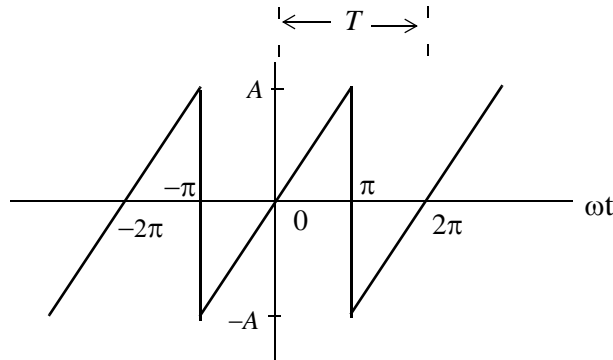


Figure 7.14. Sawtooth waveform

**Solution:**

This waveform is an odd function but has no half-wave symmetry; therefore, it contains sine terms only with both odd and even harmonics. Accordingly, we only need to evaluate the  $b_n$  coefficients.

By inspection, the *DC* component is zero. As before, we will assume that  $\omega = 1$ .

If we choose the limits of integration from  $0$  to  $2\pi$ , we will need to perform two integrations since

$$f(t) = \begin{cases} \frac{A}{\pi}t & 0 < t < \pi \\ \frac{A}{\pi}t - 2A & \pi < t < 2\pi \end{cases}$$

However, we can choose the limits from  $-\pi$  to  $+\pi$ , and thus we will only need one integration since

$$f(t) = \frac{A}{\pi}t \quad -\pi < t < \pi$$

Better yet, since the waveform is an odd function, we can integrate from  $0$  to  $\pi$ , and multiply the integral by 2; this is what we will do.

From tables of integrals,

$$\int x \sin ax dx = \frac{1}{a^2} \sin ax - \frac{x}{a} \cos ax \tag{7.31}$$

Then,

$$\begin{aligned}
 b_n &= \frac{2}{\pi} \int_0^{\pi} \frac{A}{\pi} t \sin nt dt = \frac{2A}{\pi^2} \int_0^{\pi} t \sin nt dt = \frac{2A}{\pi^2} \left( \frac{1}{n^2} \sin nt - \frac{t}{n} \cos nt \right) \Big|_0^{\pi} \\
 &= \frac{2A}{n^2 \pi^2} (\sin n\pi - n\pi \cos n\pi) \Big|_0^{\pi} = \frac{2A}{n^2 \pi^2} (\sin n\pi - n\pi \cos n\pi)
 \end{aligned} \tag{7.32}$$

We observe that:

1. If  $n = \text{even}$ ,  $\sin n\pi = 0$  and  $\cos n\pi = 1$ . Then, (7.32) reduces to

$$b_n = \frac{2A}{n^2 \pi^2} (-n\pi) = -\frac{2A}{n\pi}$$

that is, the even harmonics have negative coefficients.

2. If  $n = \text{odd}$ ,  $\sin n\pi = 0$ ,  $\cos n\pi = -1$ . Then,

$$b_n = \frac{2A}{n^2 \pi^2} (n\pi) = \frac{2A}{n\pi}$$

that is, the odd harmonics have positive coefficients.

Thus, the trigonometric Fourier series for the *sawtooth waveform with odd symmetry* is

$$f(t) = \frac{2A}{\pi} \left( \sin \omega t - \frac{1}{2} \sin 2\omega t + \frac{1}{3} \sin 3\omega t - \frac{1}{4} \sin 4\omega t + \dots \right) = \frac{2A}{\pi} \sum (-1)^{n-1} \frac{1}{n} \sin n\omega t \tag{7.33}$$

### Example 7.5

Find the trigonometric Fourier series of the triangular waveform of Figure 7.15. Assume  $\omega = 1$ .

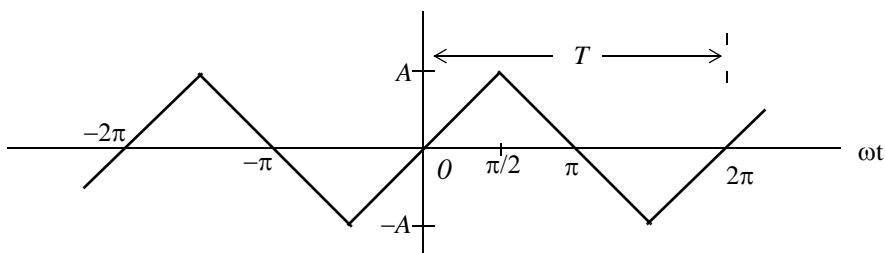


Figure 7.15. Triangular waveform for Example 7.5

### Solution:

This waveform is an odd function and has half-wave symmetry; then, the trigonometric Fourier series will contain sine terms only with odd harmonics. Accordingly, we only need to evaluate the  $b_n$  coefficients. We will choose the limits of integration from  $0$  to  $\pi/2$ , and will multiply the integral by  $4$ .

By inspection, the *DC* component is zero. From tables of integrals,

$$\int x \sin ax dx = \frac{1}{a^2} \sin ax - \frac{x}{a} \cos ax \quad (7.34)$$

Then,

$$\begin{aligned} b_n &= \frac{4}{\pi} \int_0^{\pi/2} \frac{2A}{\pi} t \sin nt dt = \frac{8A}{\pi^2} \int_0^{\pi/2} t \sin nt dt = \frac{8A}{\pi^2} \left( \frac{1}{n^2} \sin nt - \frac{t}{n} \cos nt \right) \Big|_0^{\pi/2} \\ &= \frac{8A}{n^2 \pi^2} (\sin nt - nt \cos nt) \Big|_0^{\pi/2} = \frac{8A}{n^2 \pi^2} \left( \sin n \frac{\pi}{2} - n \frac{\pi}{2} \cos n \frac{\pi}{2} \right) \end{aligned} \quad (7.35)$$

We are only interested in the odd integers of  $n$ , and we observe that:

$$\cos n \frac{\pi}{2} = 0$$

For odd integers of  $n$ , the sine term yields

$$\sin n \frac{\pi}{2} = \begin{cases} 1 & \text{for } n = 1, 5, 9, \dots \text{ then, } b_n = \frac{8A}{n^2 \pi^2} \\ -1 & \text{for } n = 3, 7, 11, \dots \text{ then, } b_n = -\frac{8A}{n^2 \pi^2} \end{cases}$$

Thus, the trigonometric Fourier series for the *triangular waveform* with odd symmetry is

$$f(t) = \frac{8A}{\pi^2} \left( \sin \omega t - \frac{1}{9} \sin 3\omega t + \frac{1}{25} \sin 5\omega t - \frac{1}{49} \sin 7\omega t + \dots \right) = \frac{8A}{\pi^2} \sum_{n=odd} (-1)^{\frac{(n-1)}{2}} \frac{1}{n^2} \sin n\omega t \quad (7.36)$$

### Example 7.6

The circuit of Figure 7.16 is a *half-wave rectifier* whose input is the sinusoid  $v_{in}(t) = \sin \omega t$ , and its output  $v_{out}(t)$  is defined as

$$v_{out}(t) = \begin{cases} \sin \omega t & 0 < \omega t < \pi \\ 0 & \pi < \omega t < 2\pi \end{cases} \quad (7.37)$$

Express  $v_{out}(t)$  as a trigonometric Fourier series. Assume  $\omega = 1$ .

#### Solution:

The input and output waveforms for this example are shown in Figures 7.17 and 7.18.

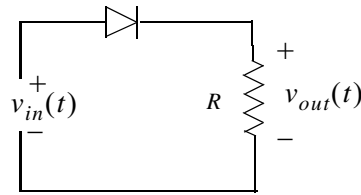


Figure 7.16. Circuit for half-wave rectifier

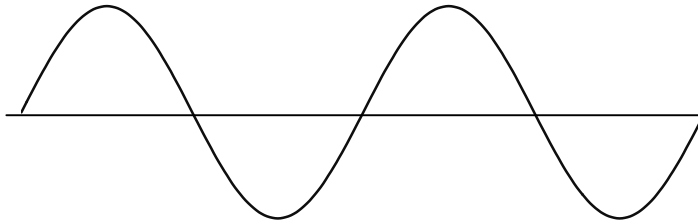


Figure 7.17. Input  $v_{in}(t)$  for the circuit of Figure 7.16



Figure 7.18. Output  $v_{out}(t)$  for the circuit of Figure 7.16

We choose the ordinate as shown in Figure 7.19.

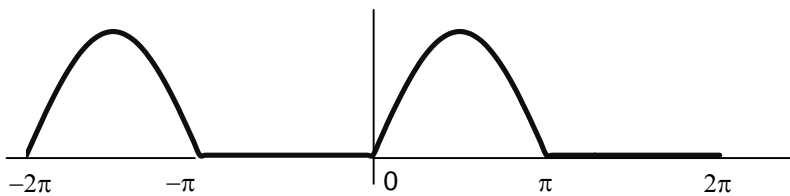


Figure 7.19. Half-wave rectifier waveform for the circuit of Figure 7.16

By inspection, the average is a non-zero value, and the waveform has neither odd nor even symmetry. Therefore, we expect all terms to be present.

The  $a_n$  coefficients are found from

$$a_n = \frac{1}{\pi} \int_0^{2\pi} f(t) \cos nt dt$$

For this example,

$$a_n = \frac{A}{\pi} \int_0^{\pi} \sin t \cos nt dt + \frac{A}{\pi} \int_{\pi}^{2\pi} 0 \cos nt dt$$

and from tables of integrals

$$\int (\sin mx)(\cos nx) dx = -\frac{\cos(m-n)x}{2(m-n)} - \frac{\cos(m+n)x}{2(m+n)} \quad (m^2 \neq n^2)$$

Then,

$$\begin{aligned} a_n &= \frac{A}{\pi} \left\{ -\frac{1}{2} \left[ \frac{\cos(1-n)t}{1-n} + \frac{\cos(1+n)t}{1+n} \right] \Bigg|_0^{\pi} \right\} \\ &= -\frac{A}{2\pi} \left\{ \left[ \frac{\cos(\pi-n\pi)}{1-n} + \frac{\cos(\pi+n\pi)}{1+n} \right] - \left[ \frac{1}{1-n} + \frac{1}{1+n} \right] \right\} \end{aligned} \tag{7.38}$$

Using the trigonometric identities

$$\cos(x-y) = \cos x \cos y + \sin x \sin y$$

and

$$\cos(x+y) = \cos x \cos y - \sin x \sin y$$

we get

$$\cos(\pi-n\pi) = \cos \pi \cos n\pi + \sin \pi \sin n\pi = -\cos n\pi$$

and

$$\cos(\pi+n\pi) = \cos \pi \cos n\pi - \sin \pi \sin n\pi = -\cos n\pi$$

Then, by substitution into (7.38),

$$\begin{aligned} a_n &= -\frac{A}{2\pi} \left\{ \left[ \frac{-\cos n\pi}{1-n} + \frac{-\cos n\pi}{1+n} \right] - \frac{2}{1-n^2} \right\} = \frac{A}{2\pi} \left\{ \left[ \frac{\cos n\pi}{1-n} + \frac{\cos n\pi}{1+n} \right] + \frac{2}{1-n^2} \right\} \\ &= \frac{A}{2\pi} \left( \frac{\cos n\pi + n \cos n\pi + \cos n\pi - n \cos n\pi}{1-n^2} + \frac{2}{1-n^2} \right) = \frac{A}{\pi} \left( \frac{\cos n\pi + 1}{1-n^2} \right) \quad n \neq 1 \end{aligned} \tag{7.39}$$

Next, we can evaluate all the  $a_n$  coefficients, except  $a_1$ , from (7.39).

First, we will evaluate  $a_0$  to obtain the DC value. By substitution of  $n = 0$ , we get

---

## Chapter 7 Fourier Series

---

$$a_0 = 2A/\pi$$

Therefore, the *DC* value is

$$\frac{1}{2}a_0 = \frac{A}{\pi} \quad (7.40)$$

We cannot use (7.39) to obtain the value of  $a_1$ ; therefore, we will evaluate the integral

$$a_1 = \frac{A}{\pi} \int_0^{\pi} \sin t \cos t dt$$

From tables of integrals,

$$\int (\sin ax)(\cos ax) dx = \frac{1}{2a}(\sin ax)^2$$

and thus,

$$a_1 = \frac{A}{2\pi}(\sin t)^2 \Big|_0^{\pi} = 0 \quad (7.41)$$

From (7.39) with  $n = 2, 3, 4, 5, \dots$ , we get

$$a_2 = \frac{A}{\pi} \left( \frac{\cos 2\pi + 1}{1 - 2^2} \right) = -\frac{2A}{3\pi} \quad (7.42)$$

$$a_3 = \frac{A(\cos 3\pi + 1)}{\pi(1 - 3^2)} = 0 \quad (7.43)$$

We see that for odd integers of  $n$ ,  $a_n = 0$ . However, for  $n = \text{even}$ , we get

$$a_4 = \frac{A(\cos 4\pi + 1)}{\pi(1 - 4^2)} = -\frac{2A}{15\pi} \quad (7.44)$$

$$a_6 = \frac{A(\cos 6\pi + 1)}{\pi(1 - 6^2)} = -\frac{2A}{35\pi} \quad (7.45)$$

$$a_8 = \frac{A(\cos 8\pi + 1)}{\pi(1 - 8^2)} = -\frac{2A}{63\pi} \quad (7.46)$$

and so on.

Now, we need to evaluate the  $b_n$  coefficients. For this example,

$$b_n = A \frac{1}{\pi} \int_0^{2\pi} f(t) \sin n t dt = \frac{A}{\pi} \int_0^{\pi} \sin t \sin n t dt + \frac{A}{\pi} \int_{\pi}^{2\pi} 0 \sin n t dt$$

and from tables of integrals,

$$\int (\sin mx)(\sin nx)dx = \frac{\sin(m-n)x}{2(m-n)} - \frac{\sin(m+n)x}{2(m+n)} \quad (m^2 \neq n^2)$$

Therefore,

$$\begin{aligned} b_n &= \frac{A}{\pi} \cdot \frac{1}{2} \left\{ \left[ \frac{\sin(1-n)t}{1-n} - \frac{\sin(1+n)t}{1+n} \right] \Big|_0^\pi \right\} \\ &= \frac{A}{2\pi} \left[ \frac{\sin(1-n)\pi}{1-n} - \frac{\sin(1+n)\pi}{1+n} - 0 + 0 \right] = 0 \quad (n \neq 1) \end{aligned}$$

that is, all the  $b_n$  coefficients, except  $b_1$ , are zero.

We will find  $b_1$  by direct substitution into (7.14) for  $n = 1$ . Thus,

$$b_1 = \frac{A}{\pi} \int_0^\pi (\sin t)^2 dt = \frac{A}{\pi} \left[ \frac{t}{2} - \frac{\sin 2t}{4} \right] \Big|_0^\pi = \frac{A}{\pi} \left[ \frac{\pi}{2} - \frac{\sin 2\pi}{4} \right] = \frac{A}{2} \quad (7.47)$$

Combining (7.40), and (7.42) through (7.47), we find that the trigonometric Fourier series for the *half-wave rectifier with no symmetry* is

$$f(t) = \frac{A}{\pi} + \frac{A}{2} \sin t - \frac{A}{\pi} \left[ \frac{\cos 2t}{3} + \frac{\cos 4t}{15} + \frac{\cos 6t}{35} + \frac{\cos 8t}{63} + \dots \right] \quad (7.48)$$

**Example 7.7**

Figure 7.20 shows a *full-wave rectifier* circuit with input the sinusoid  $v_{in}(t) = A \sin \omega t$ . The output of that circuit is  $v_{out}(t) = |A \sin \omega t|$ . Express  $v_{out}(t)$  as a trigonometric Fourier series. Assume  $\omega = 1$ .

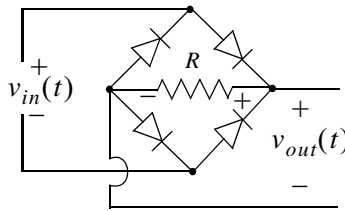


Figure 7.20. Full-wave rectifier circuit

**Solution:**

The input and output waveforms are shown in Figures 7.21 and 7.22. We choose the ordinate as shown in Figure 7.23. By inspection, the average is a non-zero value. We choose the period of the input sinusoid so that the output will be expressed in terms of the fundamental frequency. We also choose the limits of integration as  $-\pi$  and  $+\pi$ , we observe that the waveform has even symmetry.

---

## Chapter 7 Fourier Series

---

Therefore, we expect only cosine terms to be present. The  $a_n$  coefficients are found from

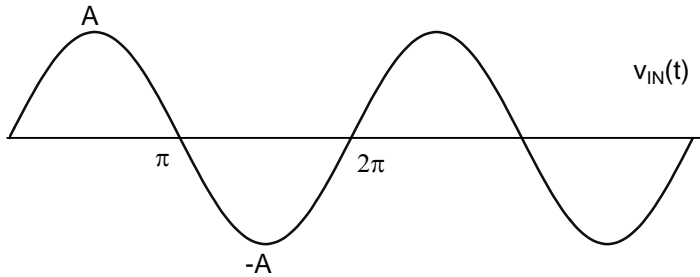


Figure 7.21. Input sinusoid for the circuit of Example 7.7

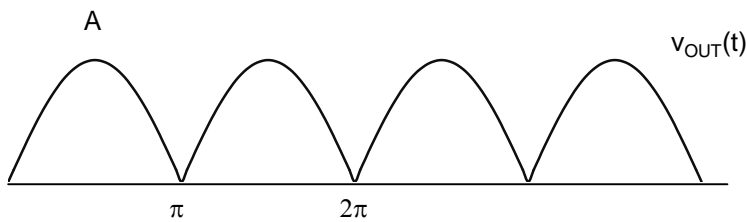


Figure 7.22. Output waveform for the circuit of Example 7.7

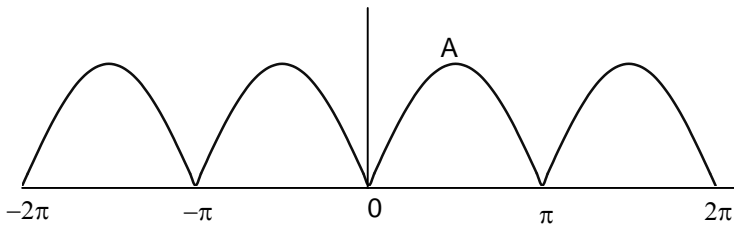


Figure 7.23. Full-wave rectified waveform with even symmetry

$$a_n = \frac{1}{\pi} \int_0^{2\pi} f(t) \cos ntdt$$

where for this example,

$$a_n = \frac{1}{\pi} \int_{-\pi}^{\pi} A \sin t \cos ntdt = \frac{2A}{\pi} \int_0^{\pi} \sin t \cos ntdt \quad (7.49)$$

and from tables of integrals,



$$\int (\sin mx)(\cos nx)dx = \frac{\cos(m-n)x}{2(n-m)} - \frac{\cos(m+n)x}{2(m+n)} \quad (m^2 \neq n^2)$$

Since

$$\cos(x-y) = \cos(y-x) = \cos x \cos y + \sin x \sin y$$

we express (7.49) as

$$\begin{aligned} a_n &= \frac{2A}{\pi} \cdot \frac{1}{2} \left\{ \left[ \frac{\cos(n-1)t}{n-1} - \frac{\cos(n+1)t}{n+1} \right] \Big|_0^\pi \right\} \\ &= \frac{A}{\pi} \left\{ \left[ \frac{\cos(n-1)\pi}{n-1} - \frac{\cos(n+1)\pi}{n+1} \right] - \left[ \frac{1}{n-1} - \frac{1}{n+1} \right] \right\} \\ &= \frac{A}{\pi} \left[ \frac{1 - \cos(n\pi + \pi)}{n+1} + \frac{\cos(n\pi - \pi) - 1}{n-1} \right] \end{aligned} \quad (7.50)$$

To simplify the last expression in (7.50), we make use of the trigonometric identities

$$\cos(n\pi + \pi) = \cos n\pi \cos \pi - \sin n\pi \sin \pi = -\cos n\pi$$

and

$$\cos(n\pi - \pi) = \cos n\pi \cos \pi + \sin n\pi \sin \pi = -\cos n\pi$$

Then, (7.50) simplifies to

$$\begin{aligned} a_n &= \frac{A}{\pi} \left[ \frac{1 + \cos n\pi}{n+1} - \frac{1 + \cos n\pi}{n-1} \right] = \frac{A}{\pi} \left[ \frac{-2 + (n-1)\cos n\pi - (n+1)\cos n\pi}{n^2 - 1} \right] \\ &= \frac{-2A(\cos n\pi + 1)}{\pi(n^2 - 1)} \quad n \neq 1 \end{aligned} \quad (7.51)$$

Now, we can evaluate all the  $a_n$  coefficients, except  $a_1$ , from (7.51). First, we will evaluate  $a_0$  to obtain the *DC* value. By substitution of  $n = 0$ , we get

$$a_0 = \frac{4A}{\pi}$$

Therefore, the *DC* value is

$$\frac{1}{2}a_0 = \frac{2A}{\pi} \quad (7.52)$$

From (7.51) we observe that for all  $n = \text{odd}$ , other than  $n = 1$ ,  $a_n = 0$ .

To obtain the value of  $a_1$ , we must evaluate the integral

$$a_1 = \frac{1}{\pi} \int_0^{\pi} \sin t \cos t dt$$

From tables of integrals,

$$\int (\sin ax)(\cos ax) dx = \frac{1}{2a} (\sin ax)^2$$

and thus,

$$a_1 = \frac{1}{2\pi} (\sin t)^2 \Big|_0^{\pi} = 0 \quad (7.53)$$

For  $n = \text{even}$ , from (7.51) we get

$$a_2 = \frac{-2A(\cos 2\pi + 1)}{\pi(2^2 - 1)} = -\frac{4A}{3\pi} \quad (7.54)$$

$$a_4 = \frac{-2A(\cos 4\pi + 1)}{\pi(4^2 - 1)} = -\frac{4A}{15\pi} \quad (7.55)$$

$$a_6 = \frac{-2A(\cos 6\pi + 1)}{\pi(6^2 - 1)} = -\frac{4A}{35\pi} \quad (7.56)$$

$$a_8 = \frac{-2A(\cos 8\pi + 1)}{\pi(8^2 - 1)} = -\frac{4A}{63\pi} \quad (7.57)$$

and so on. Then, combining the terms of (7.52) and (7.54) through (7.57) we get

$$f(t) = \frac{2A}{\pi} - \frac{4A}{\pi} \left\{ \frac{\cos 2\omega t}{3} + \frac{\cos 4\omega t}{15} + \frac{\cos 6\omega t}{35} + \frac{\cos 8\omega t}{63} + \dots \right\} \quad (7.58)$$

Therefore, the trigonometric form of the Fourier series for the *full-wave rectifier with even symmetry* is

$$f(t) = \frac{2A}{\pi} - \frac{4A}{\pi} \sum_{n=2,4,6,\dots}^{\infty} \frac{1}{(n^2 - 1)} \cos n\omega t \quad (7.59)$$

This series of (7.59) shows that there is no component of the input (fundamental) frequency. This is because we chose the period to be from  $-\pi$  and  $+\pi$ . Generally, the period is defined as the shortest period of repetition. In any waveform where the period is chosen appropriately, it is very unlikely that a Fourier series will consist of even harmonic terms only.

### 7.5 Gibbs Phenomenon

In Example 7.1, we found that the trigonometric form of the Fourier series of the square waveform

is

$$f(t) = \frac{4A}{\pi} \left( \sin \omega t + \frac{1}{3} \sin 3\omega t + \frac{1}{5} \sin 5\omega t + \dots \right) = \frac{4A}{\pi} \sum_{n = \text{odd}} \frac{1}{n} \sin n\omega t$$

Figure 7.24 shows the first 11 harmonics and their sum. We observe that as we add more and more harmonics, the sum looks more and more like the square waveform. However, the crests do not get flattened; this is known as *Gibbs phenomenon* and it occurs because of the discontinuity of the perfect square waveform as it changes from  $+A$  to  $-A$ .

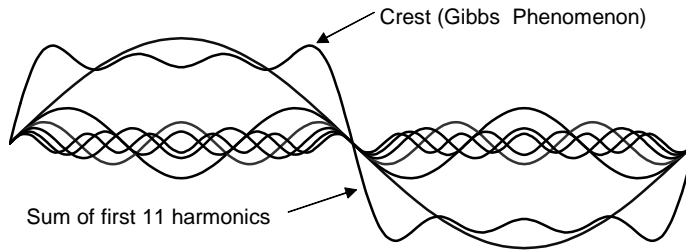


Figure 7.24. *Gibbs phenomenon*

## 7.6 Alternate Forms of the Trigonometric Fourier Series

We recall that the trigonometric Fourier series is expressed as

$$f(t) = \frac{1}{2}a_0 + a_1 \cos \omega t + a_2 \cos 2\omega t + a_3 \cos 3\omega t + a_4 \cos 4\omega t + \dots \tag{7.60}$$

$$+ b_1 \sin \omega t + b_2 \sin 2\omega t + b_3 \sin 3\omega t + b_4 \sin 4\omega t + \dots$$

If a given waveform does not have any kind of symmetry, it may be advantageous of using the *alternate form of the trigonometric Fourier series* where the cosine and sine terms of the same frequency are grouped together, and the sum is combined to a single term, either cosine or sine. However, we still need to compute the  $a_n$  and  $b_n$  coefficients separately.

We use the triangle shown in Figure 7.25 for the derivation of the alternate forms.

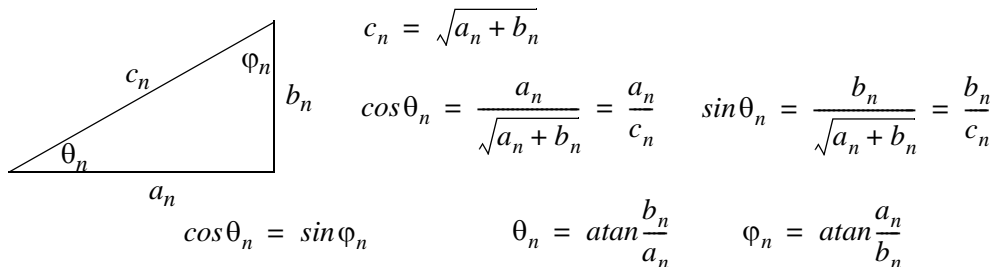


Figure 7.25. *Derivation of the alternate form of the trigonometric Fourier series*

## Chapter 7 Fourier Series

We assume  $\omega = 1$ , and for  $n = 1, 2, 3, \dots$ , we rewrite (7.60) as

$$\begin{aligned}
 f(t) &= \frac{1}{2}a_0 + c_1 \left( \frac{a_1}{c_1} \cos t + \frac{b_1}{c_1} \sin t \right) + c_2 \left( \frac{a_2}{c_2} \cos 2t + \frac{b_2}{c_2} \sin 2t \right) + \dots \\
 &\quad + c_n \left( \frac{a_n}{c_n} \cos nt + \frac{b_n}{c_n} \sin nt \right) \\
 &= \frac{1}{2}a_0 + c_1 \left( \frac{\cos \theta_1 \cos t + \sin \theta_1 \sin t}{\cos(t - \theta_1)} \right) + c_2 \left( \frac{\cos \theta_2 \cos 2t + \sin \theta_2 \sin 2t}{\cos(2t - \theta_2)} \right) + \dots \\
 &\quad + c_n \left( \frac{\cos \theta_n \cos nt + \sin \theta_n \sin nt}{\cos(nt - \theta_n)} \right)
 \end{aligned}$$

and, in general, for  $\omega \neq 1$ , we get

$$\boxed{f(t) = \frac{1}{2}a_0 + \sum_{n=1}^{\infty} c_n \cos(n\omega t - \theta_n) = \frac{1}{2}a_0 + \sum_{n=1}^{\infty} c_n \cos\left(n\omega t - \operatorname{atan} \frac{b_n}{a_n}\right)} \quad (7.61)$$

Similarly,

$$\begin{aligned}
 f(t) &= \frac{1}{2}a_0 + c_1 \left( \frac{\sin \phi_1 \cos t + \cos \phi_1 \sin t}{\sin(t + \phi_1)} \right) \\
 &\quad + c_2 \left( \frac{\sin \phi_2 \cos 2t + \cos \phi_2 \sin 2t}{\sin(2t + \phi_2)} \right) + \dots + c_n \left( \frac{\sin \phi_n \cos nt + \cos \phi_n \sin nt}{\sin(nt + \phi_n)} \right)
 \end{aligned}$$

and, in general, where  $\omega \neq 1$ , we get

$$\boxed{f(t) = \frac{1}{2}a_0 + \sum_{n=1}^{\infty} c_n \sin(n\omega t + \phi_n) = \frac{1}{2}a_0 + \sum_{n=1}^{\infty} c_n \sin\left(n\omega t + \operatorname{atan} \frac{a_n}{b_n}\right)} \quad (7.62)$$

When used in circuit analysis, (7.61) and (7.62) can be expressed as phasors. Since it is customary to use the cosine function in the time domain to phasor transformation, we choose to use the transformation of (7.63) below.

$$\boxed{\frac{1}{2}a_0 + \sum_{n=1}^{\infty} c_n \cos\left(n\omega t - \operatorname{atan} \frac{b_n}{a_n}\right) \Leftrightarrow \frac{1}{2}a_0 + \sum_{n=1}^{\infty} c_n \angle -\operatorname{atan} \frac{b_n}{a_n}} \quad (7.63)$$

### Example 7.8

Find the first 5 terms of the alternate form of the trigonometric Fourier series for the waveform of Figure 7.26.

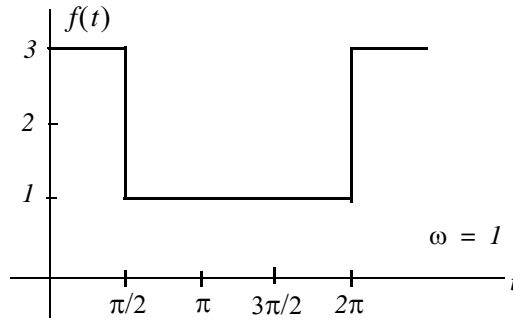


Figure 7.26. Waveform for Example 7.8

**Solution:**

The given waveform has no symmetry; thus, we expect both cosine and sine functions with odd and even terms present. Also, by inspection the *DC* value is not zero.

We will compute the  $a_n$  and  $b_n$  coefficients, the *DC* value, and we will combine them to get an expression in the form of (7.63). Then,

$$\begin{aligned}
 a_n &= \frac{1}{\pi} \int_0^{\pi/2} (3) \cos ntdt + \frac{1}{\pi} \int_{\pi/2}^{2\pi} (1) \cos ntdt = \frac{3}{n\pi} \sin nt \Big|_0^{\pi/2} + \frac{1}{n\pi} \sin nt \Big|_{\pi/2}^{2\pi} \\
 &= \frac{3}{n\pi} \sin n\frac{\pi}{2} + \frac{1}{n\pi} \sin n2\pi - \frac{1}{n\pi} \sin n\frac{\pi}{2} = \frac{2}{n\pi} \sin n\frac{\pi}{2}
 \end{aligned} \tag{7.64}$$

We observe that for  $n = \text{even}$ ,  $a_n = 0$ .

For  $n = \text{odd}$ ,

$$a_1 = \frac{2}{\pi} \tag{7.65}$$

and

$$a_3 = -\frac{2}{3\pi} \tag{7.66}$$

The *DC* value is

$$\begin{aligned}
 \frac{1}{2}a_0 &= \frac{1}{2\pi} \int_0^{\pi/2} (3)dt + \frac{1}{2\pi} \int_{\pi/2}^{2\pi} (1)dt = \frac{1}{2\pi} (3t \Big|_0^{\pi/2} + t \Big|_{\pi/2}^{2\pi}) \\
 &= \frac{1}{2\pi} \left( \frac{3\pi}{2} + 2\pi - \frac{\pi}{2} \right) = \frac{1}{2\pi} (\pi + 2\pi) = \frac{3}{2}
 \end{aligned} \tag{7.67}$$

The  $b_n$  coefficients are

$$\begin{aligned}
 b_n &= \frac{1}{\pi} \int_0^{\pi/2} (3) \sin n t dt + \frac{1}{\pi} \int_{\pi/2}^{2\pi} (1) \sin n t dt = \frac{-3}{n\pi} \cos n t \Big|_0^{\pi/2} + \frac{-1}{n\pi} \cos n t \Big|_{\pi/2}^{2\pi} \\
 &= \frac{-3}{n\pi} \cos n \frac{\pi}{2} + \frac{3}{n\pi} + \frac{-1}{n\pi} \cos n 2\pi + \frac{1}{n\pi} \cos n \frac{\pi}{2} = \frac{1}{n\pi} (3 - \cos n 2\pi) = \frac{2}{n\pi}
 \end{aligned} \tag{7.68}$$

Then,

$$b_1 = 2/\pi \tag{7.69}$$

$$b_2 = 1/\pi \tag{7.70}$$

$$b_3 = 2/3\pi \tag{7.71}$$

$$b_4 = 1/2\pi \tag{7.72}$$

From (7.63),

$$\frac{1}{2}a_0 + \sum_{n=1}^{\infty} c_n \cos\left(n\omega t - \text{atan} \frac{b_n}{a_n}\right) \Leftrightarrow \frac{1}{2}a_0 + \sum_{n=1}^{\infty} c_n \angle -\text{atan} \frac{b_n}{a_n}$$

where

$$c_n \angle -\text{atan} \frac{b_n}{a_n} = \sqrt{a_n^2 + b_n^2} \angle -\text{atan} \frac{b_n}{a_n} = \sqrt{a_n^2 + b_n^2} \angle -\theta_n = a_n - jb_n \tag{7.73}$$

Thus, for  $n = 1, 2, 3,$  and  $4$ , we get:

$$\begin{aligned}
 a_1 - jb_1 &= \frac{2}{\pi} - j\frac{2}{\pi} = \sqrt{\left(\frac{2}{\pi}\right)^2 + \left(\frac{2}{\pi}\right)^2} \angle -45^\circ \\
 &= \sqrt{\frac{8}{\pi^2}} \angle -45^\circ = \frac{2\sqrt{2}}{\pi} \angle -45^\circ \Leftrightarrow \frac{2\sqrt{2}}{\pi} \cos(\omega t - 45^\circ)
 \end{aligned} \tag{7.74}$$

Similarly,

$$a_2 - jb_2 = 0 - j\frac{1}{\pi} = \frac{1}{\pi} \angle -90^\circ \Leftrightarrow \frac{1}{\pi} \cos(2\omega t - 90^\circ) \tag{7.75}$$

$$a_3 - jb_3 = -\frac{2}{3\pi} - j\frac{2}{3\pi} = \frac{2\sqrt{2}}{3\pi} \angle -135^\circ \Leftrightarrow \frac{2\sqrt{2}}{3\pi} \cos(3\omega t - 135^\circ) \tag{7.76}$$

and

$$a_4 - jb_4 = 0 - j\frac{1}{2\pi} = \frac{1}{2\pi} \angle -90^\circ \Leftrightarrow \frac{1}{2\pi} \cos(4\omega t - 90^\circ) \tag{7.77}$$

Combining the terms of (7.67) and (7.74) through (7.77), we find that the alternate form of the trigonometric Fourier series representing the waveform of this example is

$$f(t) = \frac{3}{2} + \frac{1}{\pi} \left[ 2\sqrt{2} \cos(\omega t - 45^\circ) + \cos(2\omega t - 90^\circ) + \frac{2\sqrt{2}}{3} \cos(3\omega t - 135^\circ) + \frac{1}{2} \cos(4\omega t - 90^\circ) + \dots \right] \quad (7.78)$$

### 7.7 Circuit Analysis with Trigonometric Fourier Series

When the excitation of an electric circuit is a non-sinusoidal waveform such as those we discussed thus far, we can use Fourier series to determine the response of a circuit. The procedure is illustrated with the examples that follow.

#### Example 7.9

The input to the series RC circuit of Figure 7.27, is the square waveform of Figure 7.28. Compute the voltage  $v_c(t)$  across the capacitor. Consider only the first three terms of the series, and assume  $\omega = 1$ .

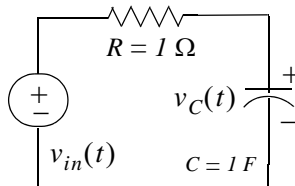


Figure 7.27. Circuit for Example 7.9

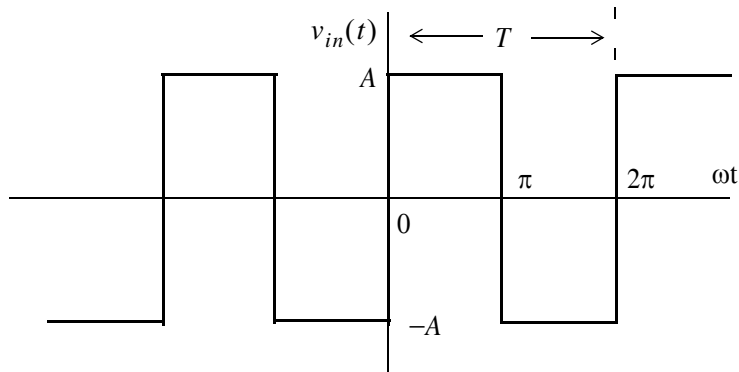


Figure 7.28. Input waveform for the circuit of Figure 7.27

**Solution:**

In Example 7.1, we found that the above square waveform can be represented by the trigonometric Fourier series as

$$f(t) = \frac{4A}{\pi} \left( \sin \omega t + \frac{1}{3} \sin 3\omega t + \frac{1}{5} \sin 5\omega t + \dots \right) \quad (7.79)$$

## Chapter 7 Fourier Series

Since this series is the sum of sinusoids, we will use phasor analysis to obtain the solution.

The equivalent phasor circuit is shown in Figure 7.29.

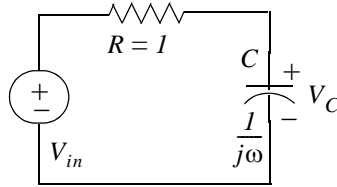


Figure 7.29. Phasor circuit for Example 7.9

We let  $n$  represent the number of terms in the Fourier series. For this example, we are only interested in the first three terms, and thus  $n = 1, 2,$  and  $3$

By the voltage division expression,

$$V_{Cn} = \frac{1/(jn\omega)}{1 + 1/(jn\omega)} V_{in n} = \frac{1}{1 + jn} V_{in n} \quad (7.80)$$

With reference to (7.79) the phasors of the first 3 terms of (7.80) are

$$\frac{4A}{\pi} \sin t = \frac{4A}{\pi} \cos(t - 90^\circ) \Leftrightarrow V_{in1} = \frac{4A}{\pi} \angle -90^\circ \quad (7.81)$$

$$\frac{4A}{\pi} \cdot \frac{1}{3} \sin 2t = \frac{4A}{\pi} \cdot \frac{1}{3} \cos(2t - 90^\circ) \Leftrightarrow V_{in2} = \frac{4A}{\pi} \cdot \frac{1}{3} \angle -90^\circ \quad (7.82)$$

$$\frac{4A}{\pi} \cdot \frac{1}{5} \sin 3t = \frac{4A}{\pi} \cdot \frac{1}{5} \cos(3t - 90^\circ) \Leftrightarrow V_{in3} = \frac{4A}{\pi} \cdot \frac{1}{5} \angle -90^\circ \quad (7.83)$$

By substitution of (7.81) through (7.83) into (7.80), we obtain the phasor and time domain voltages indicated in (7.84) through (7.86) below.

$$\begin{aligned} V_{C1} &= \frac{1}{1+j} \cdot \frac{4A}{\pi} \angle -90^\circ = \frac{1}{\sqrt{2} \angle 45^\circ} \cdot \frac{4A}{\pi} \angle -90^\circ \\ &= \frac{4A}{\pi} \cdot \frac{\sqrt{2}}{2} \angle -135^\circ \Leftrightarrow \frac{4A}{\pi} \cdot \frac{\sqrt{2}}{2} \cos(t - 135^\circ) \end{aligned} \quad (7.84)$$

$$\begin{aligned} V_{C2} &= \frac{1}{1+j2} \cdot \frac{4A}{\pi} \cdot \frac{1}{3} \angle -90^\circ = \frac{1}{\sqrt{5} \angle 63.4^\circ} \frac{4A}{\pi} \cdot \frac{1}{3} \angle -90^\circ \\ &= \frac{4A}{\pi} \cdot \frac{\sqrt{5}}{15} \angle -153.4^\circ \Leftrightarrow \frac{4A}{\pi} \cdot \frac{\sqrt{5}}{15} \cos(2t - 153.4^\circ) \end{aligned} \quad (7.85)$$



$$\begin{aligned}
 V_{C3} &= \frac{1}{1+j3} \cdot \frac{4A}{\pi} \cdot \frac{1}{5} \angle -90^\circ = \frac{1}{\sqrt{10} \angle 71.6^\circ} \frac{4A}{\pi} \cdot \frac{1}{5} \angle -90^\circ \\
 &= \frac{4A}{\pi} \cdot \frac{\sqrt{10}}{50} \angle -161.6^\circ \Leftrightarrow \frac{4A}{\pi} \cdot \frac{\sqrt{10}}{50} \cos(3t - 161.6^\circ)
 \end{aligned} \tag{7.86}$$

Thus, the capacitor voltage in the time domain is

$$v_C(t) = \frac{4A}{\pi} \left[ \frac{\sqrt{2}}{2} \cos(t - 135^\circ) + \frac{\sqrt{5}}{15} \cos(2t - 153.4^\circ) + \frac{\sqrt{10}}{50} \cos(3t - 161.6^\circ) + \dots \right] \tag{7.87}$$

## 7.8 The Exponential Form of the Fourier Series

The Fourier series are often expressed in exponential form. The advantage of the exponential form is that we only need to perform one integration rather than two, one for the  $a_n$ , and another for the  $b_n$  coefficients in the trigonometric form of the series. Moreover, in most cases the integration is simpler.

The exponential form is derived from the trigonometric form by substitution of

$$\cos \omega t = \frac{e^{j\omega t} + e^{-j\omega t}}{2} \tag{7.88}$$

$$\sin \omega t = \frac{e^{j\omega t} - e^{-j\omega t}}{j2} \tag{7.89}$$

into  $f(t)$ . Thus,

$$\begin{aligned}
 f(t) &= \frac{1}{2}a_0 + a_1 \left( \frac{e^{j\omega t} + e^{-j\omega t}}{2} \right) + a_2 \left( \frac{e^{j2\omega t} + e^{-j2\omega t}}{2} \right) + \\
 &\quad \dots + b_1 \left( \frac{e^{j\omega t} - e^{-j\omega t}}{j2} \right) + b_2 \left( \frac{e^{j2\omega t} - e^{-j2\omega t}}{j2} \right) + \dots
 \end{aligned} \tag{7.90}$$

and grouping terms with same exponents, we get

$$f(t) = \dots + \left( \frac{a_2}{2} - \frac{b_2}{j2} \right) e^{-j2\omega t} + \left( \frac{a_1}{2} - \frac{b_1}{j2} \right) e^{-j\omega t} + \frac{1}{2}a_0 + \left( \frac{a_1}{2} + \frac{b_1}{j2} \right) e^{j\omega t} + \left( \frac{a_2}{2} + \frac{b_2}{j2} \right) e^{j2\omega t} \tag{7.91}$$

The terms of (7.91) in parentheses are usually denoted as

$$C_{-n} = \frac{1}{2} \left( a_n - \frac{b_n}{j} \right) = \frac{1}{2} (a_n + j b_n) \tag{7.92}$$

$$C_n = \frac{1}{2} \left( a_n + \frac{b_n}{j} \right) = \frac{1}{2} (a_n - j b_n) \tag{7.93}$$

## Chapter 7 Fourier Series

$$C_0 = \frac{1}{2}a_0 \quad (7.94)$$

Then, (7.91) is written as

$$f(t) = \dots + C_{-2}e^{-j2\omega t} + C_{-1}e^{-j\omega t} + C_0 + C_1e^{j\omega t} + C_2e^{j2\omega t} + \dots \quad (7.95)$$

We must remember that the  $C_i$  coefficients, except  $C_0$ , are complex and occur in complex conjugate pairs, that is,

$$C_{-n} = C_n^* \quad (7.96)$$

We can derive a general expression for the complex coefficients  $C_n$ , by multiplying both sides of (7.95) by  $e^{-jn\omega t}$  and integrating over one period, as we did in the derivation of the  $a_n$  and  $b_n$  coefficients of the trigonometric form. Then, with  $\omega = 1$ ,

$$\begin{aligned} \int_0^{2\pi} f(t)e^{-jnt} dt &= \dots + \int_0^{2\pi} C_{-2}e^{-j2t}e^{-jnt} dt + \int_0^{2\pi} C_{-1}e^{-jt}e^{-jnt} dt \\ &+ \int_0^{2\pi} C_0e^{-jnt} dt + \int_0^{2\pi} C_1e^{jt}e^{-jnt} dt \\ &+ \int_0^{2\pi} C_2e^{j2t}e^{-jnt} dt + \dots + \int_0^{2\pi} C_n e^{jnt}e^{-jnt} dt \end{aligned} \quad (7.97)$$

We observe that all the integrals on the right side of (7.97) are zero except the last one. Therefore,

$$\int_0^{2\pi} f(t)e^{-jnt} dt = \int_0^{2\pi} C_n e^{jnt}e^{-jnt} dt = \int_0^{2\pi} C_n dt = 2\pi C_n$$

or

$$C_n = \frac{1}{2\pi} \int_0^{2\pi} f(t)e^{-jnt} dt$$

and, in general, for  $\omega \neq 1$ ,

$$C_n = \frac{1}{2\pi} \int_0^{2\pi} f(t)e^{-jn\omega t} d(\omega t) \quad (7.98)$$

or

$$C_n = \frac{1}{T} \int_0^T f(t)e^{-jn\omega t} d(\omega t) \quad (7.99)$$

We can derive the trigonometric Fourier series from the exponential series by addition and subtrac-

tion of the exponential form coefficients  $C_n$  and  $C_{-n}$ . Thus, from (7.92) and (7.93),

$$C_n + C_{-n} = \frac{1}{2}(a_n - jb_n + a_n + jb_n)$$

or

$$\boxed{a_n = C_n + C_{-n}} \quad (7.100)$$

Similarly,

$$C_n - C_{-n} = \frac{1}{2}(a_n - jb_n - a_n - jb_n) \quad (7.101)$$

or

$$\boxed{b_n = j(C_n - C_{-n})} \quad (7.102)$$

### Symmetry in Exponential Series

1. *For even functions, all coefficients  $C_i$  are real*

We recall from (7.92) and (7.93) that

$$C_{-n} = \frac{1}{2}\left(a_n - \frac{b_n}{j}\right) = \frac{1}{2}(a_n + jb_n) \quad (7.103)$$

and

$$C_n = \frac{1}{2}\left(a_n + \frac{b_n}{j}\right) = \frac{1}{2}(a_n - jb_n) \quad (7.104)$$

Since even functions have no sine terms, the  $b_n$  coefficients in (7.103) and (7.104) are zero. Therefore, both  $C_{-n}$  and  $C_n$  are real.

2. *For odd functions, all coefficients  $C_i$  are imaginary*

Since odd functions have no cosine terms, the  $a_n$  coefficients in (7.103) and (7.104) are zero. Therefore, both  $C_{-n}$  and  $C_n$  are imaginary.

3. *If there is half-wave symmetry,  $C_n = 0$  for  $n = \text{even}$*

We recall from the trigonometric Fourier series that if there is half-wave symmetry, all even harmonics are zero. Therefore, in (7.103) and (7.104) the coefficients  $a_n$  and  $b_n$  are both zero for  $n = \text{even}$ , and thus, both  $C_{-n}$  and  $C_n$  are also zero for  $n = \text{even}$ .

4. If there is no symmetry,  $f(t)$  is complex.

## Chapter 7 Fourier Series

5.  $C_{-n} = C_n^*$  always

This can be seen in (7.103) and (7.104)

### Example 7.10

Compute the exponential Fourier series for the square waveform of Figure 7.30 below. Assume that  $\omega = 1$ .

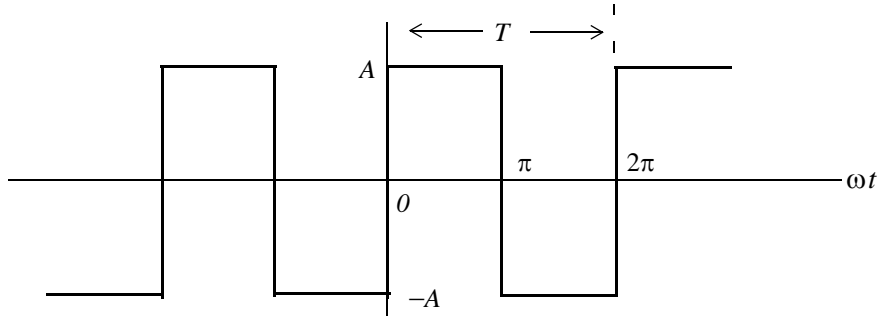


Figure 7.30. Waveform for Example 7.10

### Solution:

This is the same waveform as in Example 7.1, and as we know, it is an odd function, has half-wave symmetry, and its *DC* component is zero. Therefore, the  $C_n$  coefficients will be imaginary,  $C_n = 0$  for  $n = \text{even}$ , and  $C_0 = 0$ . Using (7.98) with  $\omega = 1$ , we get

$$C_n = \frac{1}{2\pi} \int_0^{2\pi} f(t)e^{-jnt} dt = \frac{1}{2\pi} \int_0^{\pi} Ae^{-jnt} dt + \frac{1}{2\pi} \int_{\pi}^{2\pi} -Ae^{-jnt} dt$$

and for  $n = 0$ ,

$$C_0 = \frac{1}{2\pi} \left[ \int_0^{\pi} Ae^{-0} dt + \int_{\pi}^{2\pi} (-A)e^{-0} dt \right] = \frac{A}{2\pi} (\pi - 2\pi + \pi) = 0$$

as expected.

For  $n \neq 0$ ,

$$\begin{aligned} C_n &= \frac{1}{2\pi} \left[ \int_0^{\pi} Ae^{-jnt} dt + \int_{\pi}^{2\pi} -Ae^{-jnt} dt \right] = \frac{1}{2\pi} \left[ \frac{A}{-jn} e^{-jnt} \Big|_0^{\pi} + \frac{-A}{-jn} e^{-jnt} \Big|_{\pi}^{2\pi} \right] \\ &= \frac{1}{2\pi} \left[ \frac{A}{-jn} (e^{-jn\pi} - 1) + \frac{A}{jn} (e^{-jn2\pi} - e^{-jn\pi}) \right] = \frac{A}{2j\pi n} (1 - e^{-jn\pi} + e^{-jn2\pi} - e^{-jn\pi}) \\ &= \frac{A}{2j\pi n} (1 + e^{-jn2\pi} - 2e^{-jn\pi}) = \frac{A}{2j\pi n} (e^{-jn\pi} - 1)^2 \end{aligned} \quad (7.105)$$

For  $n = \text{even}$ ,  $e^{-jn\pi} = 1$ ; then,

$$C_{n = \text{even}} = \frac{A}{2j\pi n}(e^{-jn\pi} - 1)^2 = \frac{A}{2j\pi n}(1 - 1)^2 = 0 \quad (7.106)$$

as expected.

For  $n = \text{odd}$ ,  $e^{-jn\pi} = -1$ . Therefore,

$$C_{n = \text{odd}} = \frac{A}{2j\pi n}(e^{-jn\pi} - 1)^2 = \frac{A}{2j\pi n}(-1 - 1)^2 = \frac{A}{2j\pi n}(-2)^2 = \frac{2A}{j\pi n} \quad (7.107)$$

Using (7.95), that is,

$$f(t) = \dots + C_{-2}e^{-j2\omega t} + C_{-1}e^{-j\omega t} + C_0 + C_1e^{j\omega t} + C_2e^{j2\omega t} + \dots$$

we obtain the exponential Fourier series for the *square waveform with odd symmetry* as

$$f(t) = \frac{2A}{j\pi} \left( \dots - \frac{1}{3}e^{-j3\omega t} - e^{-j\omega t} + e^{j\omega t} + \frac{1}{3}e^{j3\omega t} \right) = \frac{2A}{j\pi} \sum_{n = \text{odd}} \frac{1}{n} e^{jn\omega t} \quad (7.108)$$

The minus (-) sign of the first two terms within the parentheses results from the fact that  $C_{-n} = C_n^*$ . For instance, since  $C_3 = 2A/j3\pi$ , it follows that  $C_{-3} = C_3^* = -2A/j3\pi$ . We observe that  $f(t)$  is purely imaginary, as expected, since the waveform is an odd function.

To prove that (7.108) and (7.22) are the same, we group the two terms inside the parentheses of (7.108) for which  $n = 1$ ; this will produce the fundamental frequency  $\sin\omega t$ . Then, we group the two terms for which  $n = 3$ , and this will produce the third harmonic  $\sin 3\omega t$ , and so on.

## 7.9 Line Spectra

When the Fourier series are known, it is useful to plot the amplitudes of the harmonics on a frequency scale that shows the first (fundamental frequency) harmonic, and the higher harmonics times the amplitude of the fundamental. Such a plot is known as *line spectrum* and shows the spectral lines that would be displayed by a *spectrum analyzer*\*.

Figure 7.31 shows the line spectrum of the square waveform of Example 7.1.

Figure 7.32 shows the line spectrum for the half-wave rectifier of Example 7.6.

The line spectra of other waveforms can be easily constructed from the Fourier series.

\* An instrument that displays the spectral lines of a waveform.

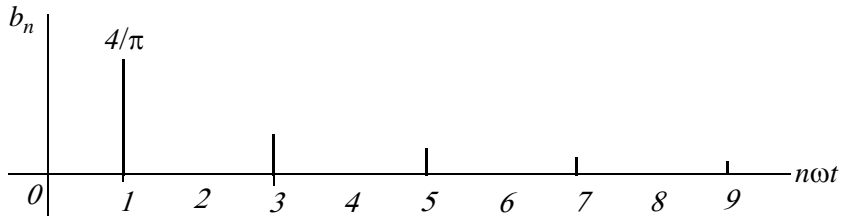


Figure 7.31. Line spectrum for square waveform of Example 7.1

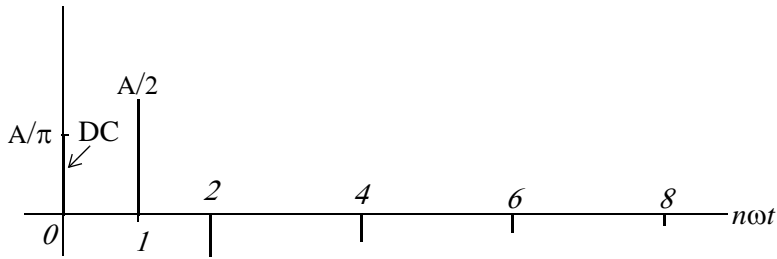


Figure 7.32. Line spectrum for half-wave rectifier of Example 7.6

**Example 7.11**

Compute the exponential Fourier series for the waveform of Figure 7.33, and plot its line spectra. Assume  $\omega = 1$ .

**Solution:**

This recurrent rectangular pulse is used extensively in digital communications systems. To determine how faithfully such pulses will be transmitted, it is necessary to know the frequency components.

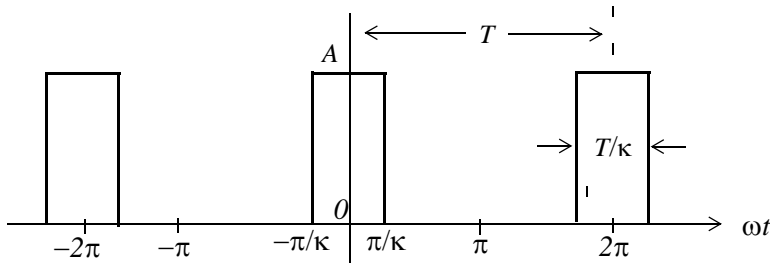


Figure 7.33. Waveform for Example 7.11

As shown in Figure 7.33, the pulse duration is  $T/k$ . Thus, the recurrence interval (period)  $T$ , is  $k$  times the pulse duration. In other words,  $k$  is the ratio of the pulse repetition time to the duration of each pulse.

For this example, the components of the exponential Fourier series are found from

$$C_n = \frac{1}{2\pi} \int_{-\pi}^{\pi} A e^{-jnt} dt = \frac{A}{2\pi} \int_{-\pi/k}^{\pi/k} e^{-jnt} dt \quad (7.109)$$

The value of the average (*DC* component) is found by letting  $n = 0$ . Then, from (7.109) we get

$$C_0 = \frac{A}{2\pi} t \Big|_{-\pi/k}^{\pi/k} = \frac{A}{2\pi} \left( \frac{\pi}{k} + \frac{\pi}{k} \right)$$

or

$$C_0 = \frac{A}{k} \quad (7.110)$$

For the values for  $n \neq 0$ , integration of (7.109) yields

$$C_n = \frac{A}{-jn2\pi} e^{-jnt} \Big|_{-\pi/k}^{\pi/k} = \frac{A}{n\pi} \cdot \frac{e^{jn\pi/k} - e^{-jn\pi/k}}{j2} = \frac{A}{n\pi} \cdot \sin\left(\frac{n\pi}{k}\right) = A \frac{\sin\left(\frac{n\pi}{k}\right)}{n\pi}$$

or

$$C_n = \frac{A}{k} \cdot \frac{\sin(n\pi/k)}{n\pi/k} \quad (7.111)$$

and thus,

$$f(t) = \sum_{n=-\infty}^{\infty} \frac{A}{k} \cdot \frac{\sin(n\pi/k)}{n\pi/k} \quad (7.112)$$

The relation of (7.112) has the  $\sin x/x$  form, and the line spectrum is shown in Figures 7.34 through 7.36, for  $k = 2$ ,  $k = 5$  and  $k = 10$ .

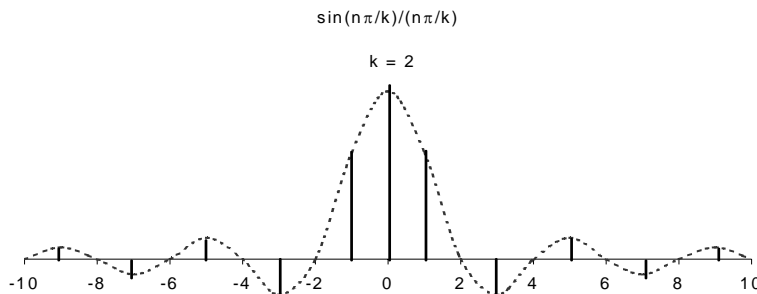


Figure 7.34. Line spectrum of (7.112) for  $k = 2$

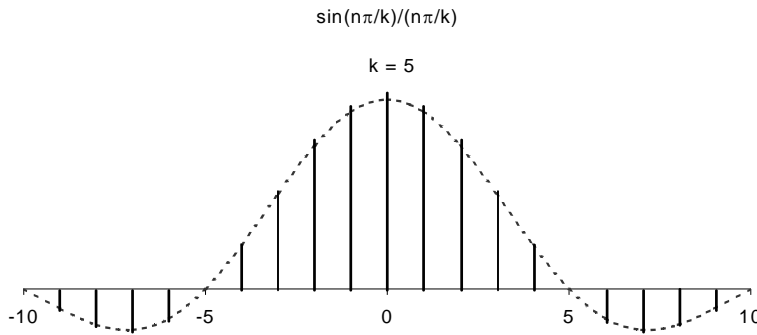


Figure 7.35. Line spectrum of (7.112) for  $k = 5$

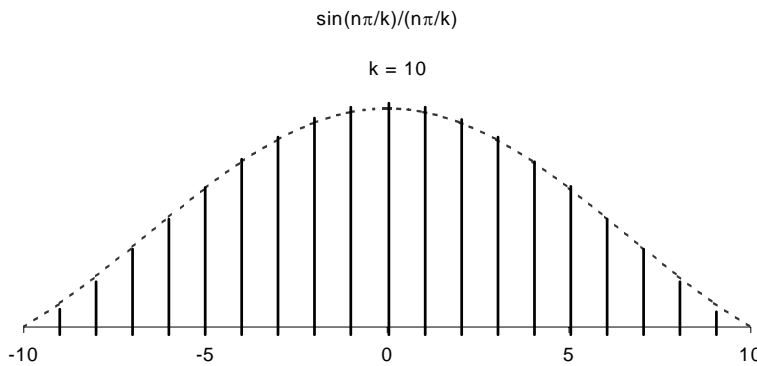


Figure 7.36. Line spectrum of (7.112) for  $k = 10$

The spectral lines are separated by the distance  $1/k$  and thus, as  $k$  gets larger, the lines get closer together while the lines are further apart as  $k$  gets smaller. Although the space between lines seems to be the same in each case, we should observe that the number of lines between line crossings, are different.

### Example 7.12

Use the result of Example 7.11 to compute the exponential Fourier series of the unit impulse train  $A\delta(t \pm 2\pi n)$  shown in Figure 7.37.

### Solution:

From Example 7.11,

$$C_n = \frac{A}{k} \cdot \frac{\sin(n\pi/k)}{n\pi/k} \tag{7.113}$$



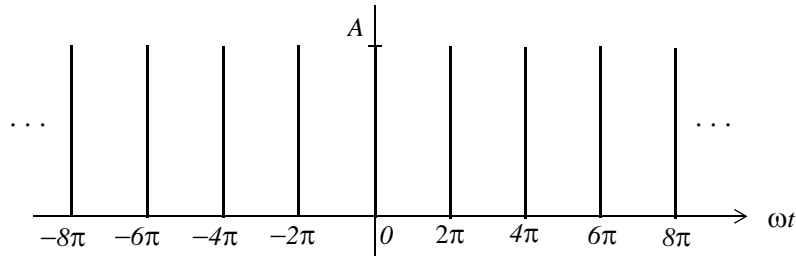


Figure 7.37. Impulse train for Example 7.12

and the pulse width was defined as  $T/k$ , that is,

$$\frac{T}{k} = \frac{2\pi}{k} \tag{7.114}$$

Next, let us represent the impulse train of Figure 7.37, as a recurrent pulse with amplitude

$$A = \frac{I}{T/k} = \frac{I}{2\pi/k} = \frac{k}{2\pi} \tag{7.115}$$

as shown in Figure 7.38.

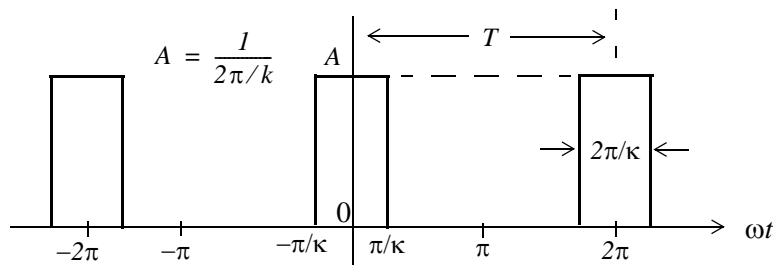


Figure 7.38. Recurrent pulse with amplitude  $A = \frac{I}{2\pi/k}$

By substitution of (7.115) into (7.113), we get

$$C_n = \frac{k/2\pi}{k} \cdot \frac{\sin(n\pi/k)}{n\pi/k} = \frac{1}{2\pi} \frac{\sin(n\pi/k)}{n\pi/k} \tag{7.116}$$

and as  $\pi/k \rightarrow 0$ , we observe from Figure 7.38, that each recurrent pulse becomes a unit impulse, and the total number of the pulses reduce to a unit impulse train. Moreover, recalling that

$\lim_{x \rightarrow 0} \frac{\sin x}{x} = 1$ , we see that (7.116) reduces to  $C_n = \frac{1}{2\pi}$ , that is, all coefficients of the exponential Fourier series have the same amplitude and thus,

$$f(t) = \frac{1}{2\pi} \sum_{n=-\infty}^{\infty} e^{jn\omega t} \tag{7.117}$$

## Chapter 7 Fourier Series

The series of (7.117) reveals that the line spectrum of the impulse train of Figure 7.38, consists of a train of equal amplitude, and are equally spaced harmonics as shown in Figure 7.39.

Since these spectral lines extend from  $-\infty$  to  $+\infty$ , the bandwidth approaches infinity.

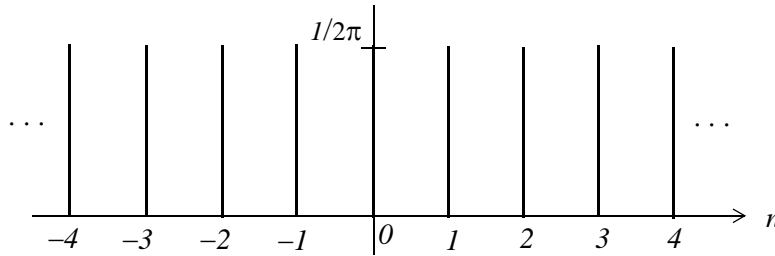


Figure 7.39. Line spectrum for Example 7.12

Let us reconsider the train of recurrent pulses shown in Figure 7.40.

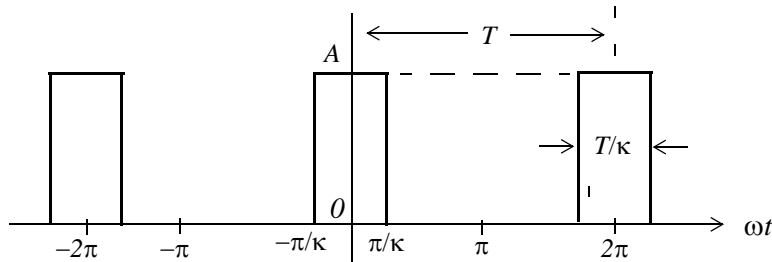


Figure 7.40. Recurrent pulse with  $T \rightarrow \infty$

Now, let us suppose that the pulses to the left and right of the pulse centered around zero, become less and less frequent; or in other words, the period  $T$  approaches infinity. In this case, there is only one pulse left (the one centered around zero). As  $T \rightarrow \infty$ , the fundamental frequency approaches zero, that is,  $\omega \rightarrow 0$  as  $T$  approaches infinity. Accordingly, the frequency difference between consecutive harmonics becomes smaller. In this case, the lines in the line spectrum come closer together, and the line spectrum becomes a continuous spectrum. This forms the basis of the Fourier transform that we will study in the next chapter.

### 7.10 Computation of RMS Values from Fourier Series

The *RMS* value of a waveform consisting of sinusoids of different frequencies, is equal to the square root of the sum of the squares of the *RMS* values of each sinusoid. Thus, if

$$i = I_0 + I_1 \cos(\omega_1 t \pm \theta_1) + I_2 \cos(\omega_2 t \pm \theta_2) + \dots + I_N \cos(\omega_N t \pm \theta_N) \quad (7.118)$$

where  $I_0$  represents a constant current, and  $I_1, I_2, \dots, I_N$  represent the amplitudes of the sinusoids, the *RMS* value of  $i$  is found from

$$I_{RMS} = \sqrt{I_0^2 + I_{1\ RMS}^2 + I_{2\ RMS}^2 + \dots + I_{N\ RMS}^2} \quad (7.119)$$

or

$$I_{RMS} = \sqrt{I_0^2 + \frac{1}{2}I_{1\ m}^2 + \frac{1}{2}I_{2\ m}^2 + \dots + \frac{1}{2}I_{N\ m}^2} \quad (7.120)$$

The proof of (7.119) is based on Parseval's theorem; we will discuss this theorem on the next chapter. A brief description of the proof follows.

We recall that the *RMS* (effective) value of a function, such as current  $i(t)$ , is defined as

$$I_{RMS} = \sqrt{\frac{1}{T} \int_0^T i^2 dt} \quad (7.121)$$

Substitution of (7.118) into (7.121), will produce the terms  $I_0^2$ ,  $I_{1m}^2 [\cos(\omega_1 t - \theta_1)]^2$ , and other similar terms representing higher order harmonics. The result will also contain products of cosine functions multiplied by a constant, or other cosine terms of different harmonic frequencies. But as we know, from the orthogonality principle, the integration of (7.121), will produce all zero terms except the cosine squared terms which, for each harmonic, will be

$$\frac{I_m^2 T}{2} = \frac{1}{2} I_m^2 T \quad (7.122)$$

as in (7.120).

**Example 7.13**

Find the  $I_{RMS}$  value of the square waveform shown in Figure 7.41 by application of

- a. relation (7.121)
- b. relation (7.120)

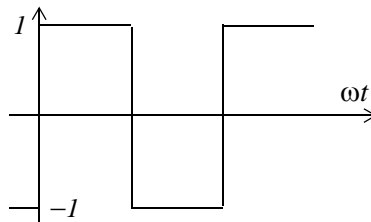


Figure 7.41. Waveform for Example 7.13

**Solution:**

a. By inspection, the period is  $T = 2\pi$  as shown in Figure 7.42.

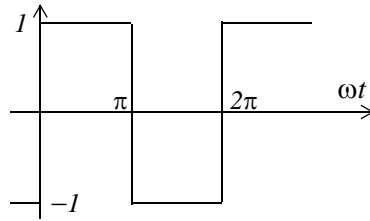


Figure 7.42. Waveform of Example 7.13 showing period  $T = 2\pi$

Then,

$$\begin{aligned}
 I_{RMS}^2 &= \frac{1}{T} \int_0^T i^2 dt = \frac{1}{2\pi} \int_0^{2\pi} i^2 d(\omega t) = \frac{1}{2\pi} \left[ \int_0^\pi I^2 d(\omega t) + \int_\pi^{2\pi} (-I)^2 d(\omega t) \right] \\
 &= \frac{1}{2\pi} [\omega t|_0^\pi + \omega t|_\pi^{2\pi}] = \frac{1}{2\pi} [2\pi] = I
 \end{aligned}$$

or

$$I_{RMS} = I$$

b. In Example 7.1, we found that the given waveform may be written as

$$i(t) = \frac{4}{\pi} \left( \sin \omega t + \frac{1}{3} \sin 3\omega t + \frac{1}{5} \sin 5\omega t + \dots \right) \tag{7.123}$$

and as we know, the *RMS* value of a sinusoid is a real number independent of the frequency and the phase angle, and it is equal to 0.707 times its maximum value, that is,  $I_{RMS} = 0.707I_{max}$ . Then, from (7.120) and (7.123),

$$I_{RMS} = \frac{4}{\pi} \sqrt{0 + \frac{1}{2}(I)^2 + \frac{1}{2}\left(\frac{I}{3}\right)^2 + \frac{1}{2}\left(\frac{I}{5}\right)^2 + \dots} = 0.97 \tag{7.124}$$

This is a good approximation to unity, considering that higher harmonics have been neglected.

## 7.11 Computation of Average Power from Fourier Series

We can compute the average power of a Fourier series from the relation

$$\begin{aligned}
 P_{ave} &= P_{dc} + P_{1ave} + P_{2ave} + \dots \\
 &= V_{dc}I_{dc} + V_{1RMS}I_{1RMS} \cos \theta_1 + V_{2RMS}I_{2RMS} \cos \theta_2 + \dots
 \end{aligned} \tag{7.125}$$

The proof is obtained from the definition of average power, i.e.,

$$P_{ave} = \frac{1}{T} \int_0^T p dt = \frac{1}{T} \int_0^T v i dt \quad (7.126)$$

and the expression for the alternate trigonometric Fourier series, that is,

$$f(t) = \frac{1}{2}a_0 + \sum_{n=1}^{\infty} c_n \cos(n\omega t - \theta_n) \quad (7.127)$$

where  $f(t)$  can represent voltages and currents. Then, by substitution of these series for  $v$  and  $i$  into (7.126), we will find that the products of  $v$  and  $i$  that have different frequencies, will be zero, and only the products of the same frequency terms will have non-zero values. The non-zero values will represent the average power for each harmonic in (7.125).

**Example 7.14**

For the circuit of Figure 7.43, compute:

- a. The current  $i_c(t)$  given that  $v_{in}(t) = 6 \left( \cos \omega t - \frac{1}{3} \cos 3\omega t \right) V$  where  $\omega = 1000 \text{ r/s}$ .
- b. The average power  $P_{ave}$  delivered by the voltage source.

**Solution:**

- a. We will use the subscripts  $1$  and  $3$  to represent the quantities due to the fundamental and third harmonic frequencies respectively. Since the excitation consists of two sinusoids of different frequencies, we can use phasor quantities, and we will denote them with capital letters.

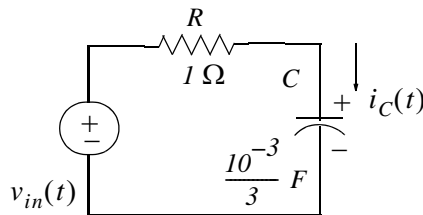


Figure 7.43. Circuit for Example 7.14

Then,

$$v_{in1}(t) = 6 \cos \omega t \Leftrightarrow V_{in1} = 6 \angle 0^\circ \text{ V}$$

$$\frac{-j}{\omega_1 C} = \frac{-j}{10^3 \times 10^{-3} / 3} = -j3$$

$$Z_1 = 1 - j3 = \sqrt{10} \angle -71.6^\circ$$

$$I_{C1} = \frac{V_{in1}}{Z_1} = \frac{6\angle 0^\circ}{\sqrt{10}\angle -71.6^\circ} = 1.90\angle 71.6^\circ \Leftrightarrow i_{C1}(t) = 1.90\cos(\omega t + 71.6^\circ) \text{ A} \quad (7.128)$$

Next,

$$v_{in3}(t) = -2\cos 3\omega t = 2\cos(3\omega t + 180^\circ) \Leftrightarrow V_{in3} = 2\angle 180^\circ \text{ V}$$

$$\frac{-j}{\omega_3 C} = \frac{-j}{3 \times 10^3 \times 10^{-3}/3} = -j1$$

$$Z_3 = 1 - j1 = \sqrt{2}\angle -45^\circ$$

$$I_{C3} = \frac{V_{in3}}{Z_3} = \frac{2\angle 180^\circ}{\sqrt{2}\angle -45^\circ} = 1.41\angle 225^\circ = 1.41\angle (225 - 135)^\circ \quad (7.129)$$

$$\Leftrightarrow i_{C3}(t) = 1.41\cos(3\omega t - 135^\circ) \text{ A}$$

From (7.128) and (7.129),

$$i_c(t) = i_{C1}(t) + i_{C3}(t) = 1.90\cos(\omega t + 71.6^\circ) + 1.41\cos(3\omega t - 135^\circ) \quad (7.130)$$

b. The average power delivered by the voltage source is

$$\begin{aligned} P_{ave} &= V_{IRMS}I_{IRMS}\cos\theta_1 + V_{3RMS}I_{3RMS}\cos\theta_3 \\ &= \frac{6}{\sqrt{2}} \cdot \frac{1.90}{\sqrt{2}}\cos(71.6^\circ) + \frac{2}{\sqrt{2}} \cdot \frac{1.41}{\sqrt{2}}\cos(-135^\circ) \end{aligned} \quad (7.131)$$

or

$$P_{ave} = 0.8 \text{ w} \quad (7.132)$$

**Check:**

The average power absorbed by the capacitor is zero, and therefore, the average power absorbed by the resistor, must be equal to the average power delivered by the source. The average power absorbed by the resistor is

$$P_{ave} = \frac{1}{2}I_{max}^2R = \frac{1}{2}(I_{1max}^2 - I_{3max}^2) = \frac{1}{2}(1.90^2 - 1.41^2) = 0.8 \text{ w}$$

### 7.12 Numerical Evaluation of Fourier Coefficients

The use of Fourier series is not restricted to electric circuit analysis. It is also applied in the analysis of the behavior of physical systems subjected to periodic disturbances. Examples include cable stress analysis in suspension bridges, and mechanical vibrations.

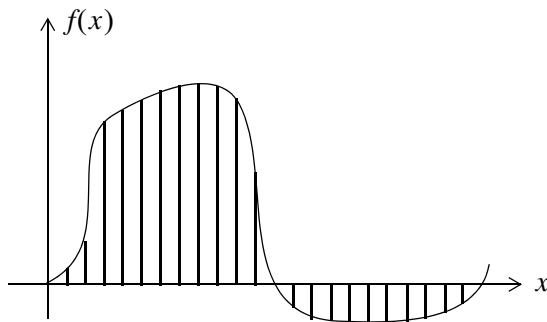
Quite often, it is necessary to construct the Fourier expansion of a function based on observed values instead of an analytic expression. Examples are meteorological or economic quantities whose

period may be a day, a week, a month or even a year. In these situations, we need to evaluate the integral(s) using numerical integration.

The procedure presented here, will work for both the waveforms that have an analytical solution and those that do not. Even though we may already know the Fourier series from analytical methods, we can use this procedure to check our results.

Consider the waveform of  $f(x)$  shown in Figure 7.44, where we have divided it into small pulses of width  $\Delta x$ . Obviously, the more pulses we use, the better the approximation.

If the time axis is in degrees, we can choose  $\Delta x$  to be  $2.5^\circ$  and it is convenient to start at the zero point of the waveform. Then, using a spreadsheet, such as Microsoft Excel, we can divide the period  $0^\circ$  to  $360^\circ$  in  $2.5^\circ$  intervals, and enter these values in Column A of the spreadsheet.



*Figure 7.44. Waveform whose analytical expression is unknown*

Since the arguments of the sine and the cosine are in radians, we multiply degrees by  $\pi$  (3.1459...) and divide by  $180$  to perform the conversion. We enter these in Column B and we denote them as  $x$ . In Column C we enter the corresponding values of  $y = f(x)$  as measured from the waveform. In Columns D and E we enter the values of  $\cos x$  and the product  $y \cos x$  respectively. Similarly, we enter the values of  $\sin x$  and  $y \sin x$  in Columns F and G respectively.

Next, we form the sums of  $y \cos x$  and  $y \sin x$ , we multiply these by  $\Delta x$ , and we divide by  $\pi$  to obtain the coefficients  $a_1$  and  $b_1$ . To compute the coefficients of the higher order harmonics, we form the products  $y \cos 2x$ ,  $y \sin 2x$ ,  $y \cos 3x$ ,  $y \sin 3x$ , and so on, and we enter these in subsequent columns of the spreadsheet.

Figure 7.45 is a partial table showing the computation of the coefficients of the square waveform, and Figure 7.46 is a partial table showing the computation of the coefficients of a clipped sine waveform. The complete tables extend to the seventh harmonic to the right and to  $360^\circ$  down.







### 7.13 Summary

- Any periodic waveform  $f(t)$  can be expressed as

$$f(t) = \frac{1}{2}a_0 + \sum_{n=1}^{\infty} (a_n \cos n\omega t + b_n \sin n\omega t)$$

where the first term  $a_0/2$  is a constant, and represents the *DC* (average) component of  $f(t)$ . The terms with the coefficients  $a_1$  and  $b_1$  together, represent the fundamental frequency component  $\omega$ . Likewise, the terms with the coefficients  $a_2$  and  $b_2$  together, represent the second harmonic component  $2\omega$ , and so on. The coefficients  $a_0$ ,  $a_n$ , and  $b_n$  are found from the following relations:

$$\frac{1}{2}a_0 = \frac{1}{2\pi} \int_0^{2\pi} f(t) dt$$

$$a_n = \frac{1}{\pi} \int_0^{2\pi} f(t) \cos nt dt$$

$$b_n = \frac{1}{\pi} \int_0^{2\pi} f(t) \sin nt dt$$

- If a waveform has odd symmetry, that is, if it is an odd function, the series will consist of sine terms only. We recall that odd functions are those for which  $-f(-t) = f(t)$ .
- If a waveform has even symmetry, that is, if it is an even function, the series will consist of cosine terms only, and  $a_0$  may or may not be zero. We recall that even functions are those for which  $f(-t) = f(t)$ .
- A periodic waveform with period  $T$ , has half-wave symmetry if

$$-f(t + T/2) = f(t)$$

that is, the shape of the negative half-cycle of the waveform is the same as that of the positive half-cycle, but inverted. If a waveform has half-wave symmetry only odd (odd cosine and odd sine) harmonics will be present. In other words, all even (even cosine and even sine) harmonics will be zero.

- The trigonometric Fourier series for the square waveform with odd symmetry is

$$f(t) = \frac{4A}{\pi} \left( \sin \omega t + \frac{1}{3} \sin 3\omega t + \frac{1}{5} \sin 5\omega t + \dots \right) = \frac{4A}{\pi} \sum_{n=odd} \frac{1}{n} \sin n\omega t$$

- The trigonometric Fourier series for the square waveform with even symmetry is

$$f(t) = \frac{4A}{\pi} \left( \cos \omega t - \frac{1}{3} \cos 3\omega t + \frac{1}{5} \cos 5\omega t - \dots \right) = \frac{4A}{\pi} \sum_{n=odd} (-1)^{\frac{(n-1)}{2}} \frac{1}{n} \cos n\omega t$$

- The trigonometric Fourier series for the sawtooth waveform with odd symmetry is

$$f(t) = \frac{2A}{\pi} \left( \sin \omega t - \frac{1}{2} \sin 2\omega t + \frac{1}{3} \sin 3\omega t - \frac{1}{4} \sin 4\omega t + \dots \right) = \frac{2A}{\pi} \sum (-1)^{n-1} \frac{1}{n} \sin n\omega t$$

- The trigonometric Fourier series for the triangular waveform with odd symmetry is

$$f(t) = \frac{8A}{\pi^2} \left( \sin \omega t - \frac{1}{9} \sin 3\omega t + \frac{1}{25} \sin 5\omega t - \frac{1}{49} \sin 7\omega t + \dots \right) = \frac{8A}{\pi^2} \sum_{n=odd} (-1)^{\frac{(n-1)}{2}} \frac{1}{n^2} \sin n\omega t$$

- The trigonometric Fourier series for the half-wave rectifier with no symmetry is

$$f(t) = \frac{A}{\pi} + \frac{A}{2} \sin t - \frac{A}{\pi} \left[ \frac{\cos 2t}{3} + \frac{\cos 4t}{15} + \frac{\cos 6t}{35} + \frac{\cos 8t}{63} + \dots \right]$$

- The trigonometric form of the Fourier series for the full-wave rectifier with even symmetry is

$$f(t) = \frac{2A}{\pi} - \frac{4A}{\pi} \sum_{n=2,4,6,\dots}^{\infty} \frac{1}{(n^2-1)} \cos n\omega t$$

- The Fourier series are often expressed in exponential form as

$$f(t) = \dots + C_{-2} e^{-j2\omega t} + C_{-1} e^{-j\omega t} + C_0 + C_1 e^{j\omega t} + C_2 e^{j2\omega t} + \dots$$

where the  $C_i$  coefficients are related to the trigonometric form coefficients as

$$C_{-n} = \frac{1}{2} \left( a_n - \frac{b_n}{j} \right) = \frac{1}{2} (a_n + j b_n)$$

$$C_n = \frac{1}{2} \left( a_n + \frac{b_n}{j} \right) = \frac{1}{2} (a_n - j b_n)$$

$$C_0 = \frac{1}{2} a_0$$

- The  $C_i$  coefficients, except  $C_0$ , are complex, and appear as complex conjugate pairs, that is,

$$C_{-n} = C_n^*$$

---

## Chapter 7 Fourier Series

---

- In general, for  $\omega \neq 1$ ,

$$C_n = \frac{1}{T} \int_0^T f(t) e^{-jn\omega t} d(\omega t) = \frac{1}{2\pi} \int_0^{2\pi} f(t) e^{-jn\omega t} d(\omega t)$$

- We can derive the trigonometric Fourier series from the exponential series from the relations

$$a_n = C_n + C_{-n}$$

and

$$b_n = j(C_n - C_{-n})$$

- For even functions, all coefficients  $C_i$  are real
- For odd functions, all coefficients  $C_i$  are imaginary
- If there is half-wave symmetry,  $C_n = 0$  for  $n = \text{even}$
- $C_{-n} = C_n^*$  always
- A line spectrum is a plot that shows the amplitudes of the harmonics on a frequency scale.
- The frequency components of a recurrent rectangular pulse follow a  $\sin x/x$  form.
- The line spectrum of an impulse train consists of a train of equal amplitude, and are equally spaced harmonics.
- The *RMS* value of a waveform consisting of sinusoids of different frequencies, is equal to the square root of the sum of the squares of the *RMS* values of each sinusoid. Thus,

$$I_{RMS} = \sqrt{I_0^2 + I_{1RMS}^2 + I_{2RMS}^2 + \dots + I_{NRMS}^2}$$

or

$$I_{RMS} = \sqrt{I_0^2 + \frac{1}{2}I_{1m}^2 + \frac{1}{2}I_{2m}^2 + \dots + \frac{1}{2}I_{Nm}^2}$$

- We can compute the average power of a Fourier series from the relation

$$\begin{aligned} P_{ave} &= P_{dc} + P_{1ave} + P_{2ave} + \dots \\ &= V_{dc}I_{dc} + V_{1RMS}I_{1RMS}\cos\theta_1 + V_{2RMS}I_{2RMS}\cos\theta_2 + \dots \end{aligned}$$

- We can evaluate the Fourier coefficients of a function based on observed values instead of an analytic expression using numerical evaluations with the aid of a spreadsheet.

## 7.14 Exercises

1. Compute the first 5 components of the trigonometric Fourier series for the waveform of Figure 7.47. Assume  $\omega = 1$ .

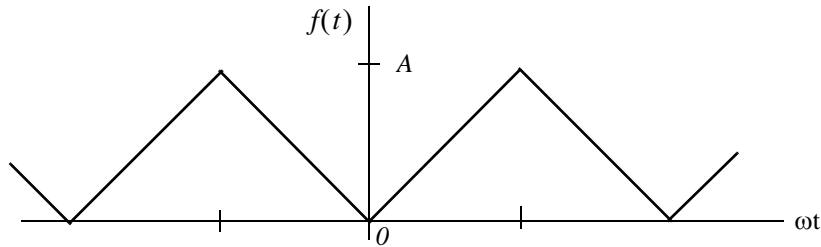


Figure 7.47. Waveform for Exercise 1

2. Compute the first 5 components of the trigonometric Fourier series for the waveform of Figure 7.48. Assume  $\omega = 1$ .

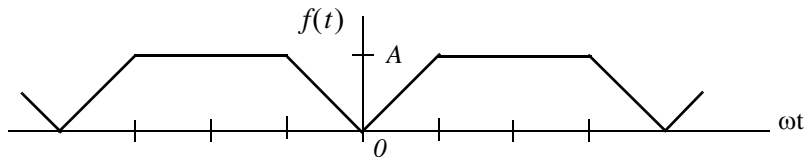


Figure 7.48. Waveform for Exercise 2

3. Compute the first 5 components of the exponential Fourier series for the waveform of Figure 7.49. Assume  $\omega = 1$ .

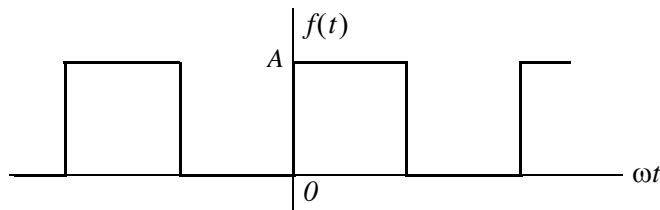


Figure 7.49. Waveform for Exercise 3

4. Compute the first 5 components of the exponential Fourier series for the waveform of Figure 7.50. Assume  $\omega = 1$ .

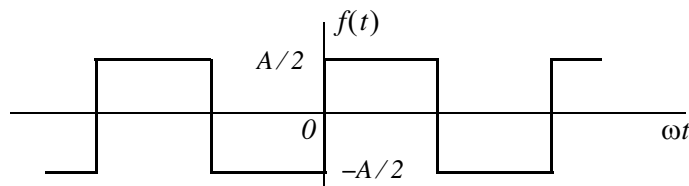


Figure 7.50. Waveform for Exercise 4

---

## Chapter 7 Fourier Series

---

5. Compute the first 5 components of the exponential Fourier series for the waveform of Figure 7.51. Assume  $\omega = 1$ .

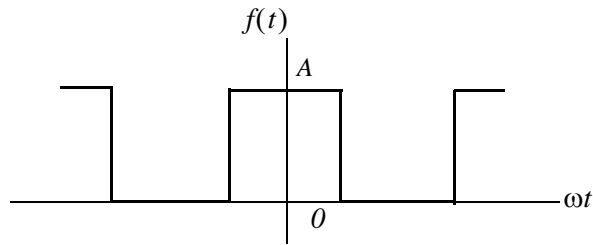


Figure 7.51. Waveform for Exercise 5

6. Compute the first 5 components of the exponential Fourier series for the waveform of Figure 7.52. Assume  $\omega = 1$ .

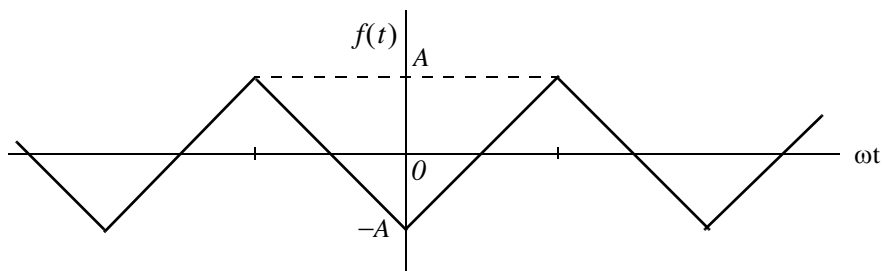
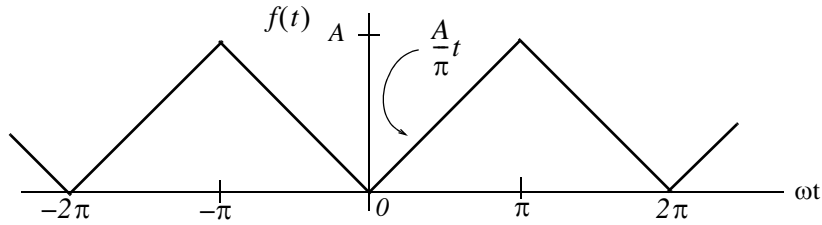


Figure 7.52. Waveform for Exercise 6

## 7.15 Solutions to Exercises

1.



This is an even function; therefore, the series consists of cosine terms only. There is no half-wave symmetry and the average (*DC* component) is not zero. We will integrate from 0 to  $\pi$  and multiply by 2. Then,

$$a_n = \frac{2}{\pi} \int_0^{\pi} \frac{A}{\pi} t \cos nt dt = \frac{2A}{\pi^2} \int_0^{\pi} t \cos nt dt \quad (1)$$

From tables of integrals,

$$\int x \cos ax dx = \frac{1}{a^2} \cos ax + \frac{x}{a} \sin ax$$

and thus (1) becomes

$$a_n = \frac{2A}{\pi^2} \left( \frac{1}{n^2} \cos nt + \frac{t}{n} \sin nt \right) \Big|_0^{\pi} = \frac{2A}{\pi^2} \left( \frac{1}{n^2} \cos n\pi + \frac{t}{n} \sin n\pi - \frac{1}{n^2} - 0 \right)$$

and since  $\sin n\pi = 0$  for all integer  $n$ ,

$$a_n = \frac{2A}{\pi^2} \left( \frac{1}{n^2} \cos n\pi - \frac{1}{n^2} \right) = \frac{2A}{n^2 \pi} (\cos n\pi - 1) \quad (2)$$

We cannot evaluate the average  $(1/2)/a_0$  from (2); we must use (1). Then, for  $n = 0$ ,

$$\frac{1}{2} a_0 = \frac{2A}{2\pi^2} \int_0^{\pi} t dt = \frac{A}{\pi^2} \cdot \frac{t^2}{2} \Big|_0^{\pi} = \frac{A}{\pi^2} \cdot \frac{\pi^2}{2}$$

or

$$(1/2)/a_0 = A/2$$

We observe from (2) that for  $n = \text{even}$ ,  $a_{n = \text{even}} = 0$ . Then,

$$\text{for } n = 1, a_1 = -\frac{4A}{\pi^2}, \text{ for } n = 3, a_3 = -\frac{4A}{3^2 \pi^2}, \text{ for } n = 5, a_5 = -\frac{4A}{5^2 \pi^2}, \text{ for } n = 7, a_7 = -\frac{4A}{7^2 \pi^2}$$

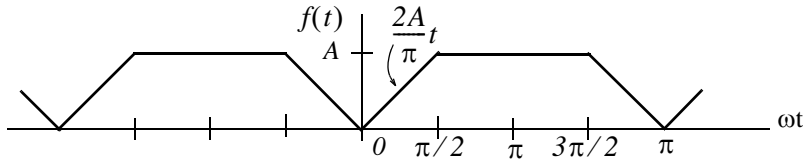
## Chapter 7 Fourier Series

and so on.

Therefore,

$$f(t) = \frac{1}{2}a_0 - \frac{4A}{\pi^2} \left( \cos t + \frac{1}{9} \cos 3t + \frac{1}{25} \cos 5t + \frac{1}{49} \cos 7t + \dots \right) = \frac{A}{2} - \frac{4A}{\pi} \sum_{n=odd}^{\infty} \frac{1}{n^2} \cos nt$$

2.



This is an even function; therefore, the series consists of cosine terms only. There is no half-wave symmetry and the average (DC component) is not zero.

$$\text{Average} = \frac{1}{2}a_0 = \frac{\text{Area}}{\text{Period}} = \frac{2 \times [(A/2) \cdot (\pi/2)] + A\pi}{2\pi} = \frac{3A \cdot (\pi/2)}{2\pi} = \frac{3A}{4}$$

$$a_n = \frac{2}{\pi} \int_0^{\pi/2} \frac{2A}{\pi} t \cos nt dt + \frac{2}{\pi} \int_{\pi/2}^{\pi} A \cos nt dt \quad (1)$$

and with

$$\int x \cos ax dx = \frac{1}{a^2} \cos ax + \frac{x}{a} \sin ax = \frac{1}{a^2} (\cos ax + ax \sin ax)$$

(1) simplifies to

$$\begin{aligned} a_n &= \frac{4A}{\pi^2} \left[ \frac{1}{n^2} (\cos nt + nt \sin nt) \right] \Big|_0^{\pi/2} + \frac{2A}{n\pi} \sin nt \Big|_{\pi/2}^{\pi} \\ &= \frac{4A}{n^2 \pi^2} \left( \cos \frac{n\pi}{2} + \frac{n\pi}{2} \sin \frac{n\pi}{2} - 1 - 0 \right) + \frac{2A}{n\pi} (\sin n\pi - \sin \frac{n\pi}{2}) \end{aligned}$$

and since  $\sin n\pi = 0$  for all integer  $n$ ,

$$a_n = \frac{4A}{n^2 \pi^2} \cos \frac{n\pi}{2} + \frac{2A}{n\pi} \sin \frac{n\pi}{2} - \frac{4A}{n^2 \pi^2} - \frac{2A}{n\pi} \sin \frac{n\pi}{2} = \frac{4A}{n^2 \pi^2} (\cos \frac{n\pi}{2} - 1)$$

$$\text{for } n = 1, a_1 = \frac{4A}{\pi^2} (0 - 1) = -\frac{4A}{\pi^2}, \text{ for } n = 2, a_2 = \frac{4A}{4\pi^2} (-1 - 1) = -\frac{2A}{\pi^2}$$

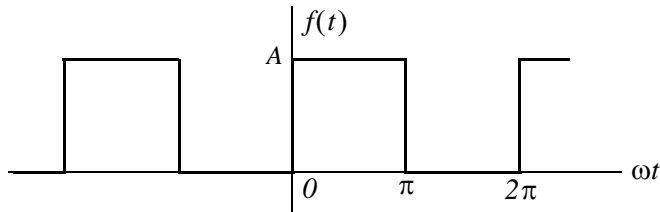
$$\text{for } n = 3, a_3 = \frac{4A}{9\pi^2} (0 - 1) = -\frac{4A}{9\pi^2}, \text{ for } n = 4, a_4 = \frac{-4A}{7^2 \pi^2} (1 - 1) = 0$$



We observe that the fourth harmonic and all its multiples are zero. Therefore,

$$f(t) = \frac{3A}{4} - \frac{4A}{\pi^2} \left( \cos t + \frac{1}{2} \cos 2t + \frac{1}{9} \cos 3t + \dots \right)$$

3.



This is neither an even nor an odd function and has no half-wave symmetry; therefore, the series consists of both cosine and sine terms. The average (*DC* component) is not zero. Then,

$$C_n = \frac{1}{2\pi} \int_0^{2\pi} f(t) e^{-jn\omega t} d(\omega t)$$

and with  $\omega = 1$

$$C_n = \frac{1}{2\pi} \int_0^{2\pi} f(t) e^{-jnt} dt = \frac{1}{2\pi} \left[ \int_0^{\pi} A e^{-jnt} dt + \int_{\pi}^{2\pi} 0 e^{-jnt} dt \right] = \frac{A}{2\pi} \int_0^{\pi} e^{-jnt} dt$$

The *DC* value is

$$C_0 = \frac{A}{2\pi} \int_0^{\pi} e^0 dt = \frac{A}{2\pi} t \Big|_0^{\pi} = \frac{A}{2}$$

For  $n \neq 0$

$$C_n = \frac{A}{2\pi} \int_0^{\pi} e^{-jnt} dt = \frac{A}{-j2n\pi} e^{-jnt} \Big|_0^{\pi} = \frac{A}{j2n\pi} (1 - e^{-jn\pi})$$

Recalling that

$$e^{-jn\pi} = \cos n\pi - j \sin n\pi$$

for  $n = \text{even}$ ,  $e^{-jn\pi} = 1$  and for  $n = \text{odd}$ ,  $e^{-jn\pi} = -1$ . Then,

$$C_{n=\text{even}} = \frac{A}{j2n\pi} (1 - 1) = 0$$

and

$$C_{n=\text{odd}} = \frac{A}{j2n\pi} [1 - (-1)] = \frac{A}{jn\pi}$$

By substitution into

## Chapter 7 Fourier Series

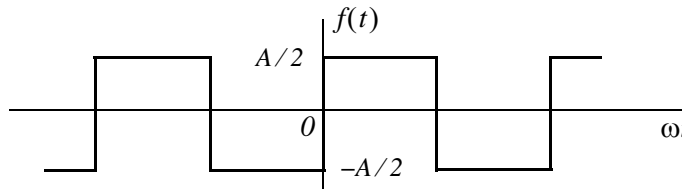
$$f(t) = \dots + C_{-2}e^{-j2\omega t} + C_{-1}e^{-j\omega t} + C_0 + C_1e^{j\omega t} + C_2e^{j2\omega t} + \dots$$

we find that

$$f(t) = \frac{A}{2} + \frac{A}{j\pi} \left( \dots - \frac{1}{3}e^{-j3\omega t} - e^{-j\omega t} + e^{j\omega t} + \frac{1}{3}e^{j3\omega t} + \dots \right)$$

The minus (-) sign of the first two terms within the parentheses results from the fact that  $C_{-n} = C_n^*$ . For instance, since  $C_1 = 2A/j\pi$ , it follows that  $C_{-1} = C_1^* = -2A/j\pi$ . We observe that  $f(t)$  is complex, as expected, since there is no symmetry.

4.

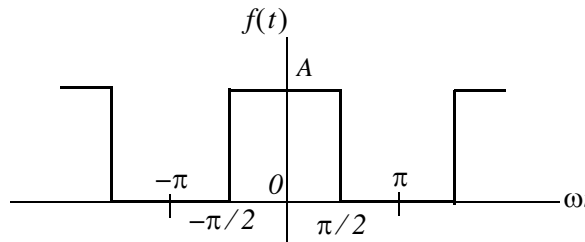


This is the same waveform as in Exercise 3 where the *DC* component has been removed. Then,

$$f(t) = \frac{A}{j\pi} \left( \dots - \frac{1}{3}e^{-j3\omega t} - e^{-j\omega t} + e^{j\omega t} + \frac{1}{3}e^{j3\omega t} + \dots \right)$$

It is also the same waveform as in Example 7.10 except that the amplitude is halved. This waveform is an odd function and thus the expression for  $f(t)$  is imaginary.

5.



This is the same waveform as in Exercise 3 where the vertical axis has been shifted to make the waveform an even function. Therefore, for this waveform  $C_n$  is real. Then,

$$C_n = \frac{1}{2\pi} \int_{-\pi}^{\pi} f(t)e^{-jnt} dt = \frac{A}{2\pi} \int_{-\pi/2}^{\pi/2} e^{-jnt} dt$$

The *DC* value is

$$C_0 = \frac{A}{2\pi} t \Big|_{-\pi/2}^{\pi/2} = \frac{A}{2\pi} \left( \frac{\pi}{2} + \frac{\pi}{2} \right) = \frac{A}{2}$$

For  $n \neq 0$

$$\begin{aligned} C_n &= \frac{A}{2\pi} \int_{-\pi/2}^{\pi/2} e^{-jnt} dt = \frac{A}{-j2n\pi} e^{-jnt} \Big|_{-\pi/2}^{\pi/2} = \frac{A}{-j2n\pi} (e^{-jn\pi/2} - e^{jn\pi/2}) \\ &= \frac{A}{j2n\pi} (e^{jn\pi/2} - e^{-jn\pi/2}) = \frac{A}{n\pi} \left( \frac{e^{jn\pi/2} - e^{-jn\pi/2}}{j2} \right) = \frac{A}{n\pi} \sin \frac{n\pi}{2} \end{aligned}$$

and we observe that for  $n = \text{even}$ ,  $C_n = 0$

For  $n = \text{odd}$ ,  $C_n$  alternates in plus (+) and minus (-) signs, that is,

$$C_n = \frac{A}{n\pi} \text{ if } n = 1, 5, 9, \dots$$

$$C_n = -\frac{A}{n\pi} \text{ if } n = 3, 7, 11, \dots$$

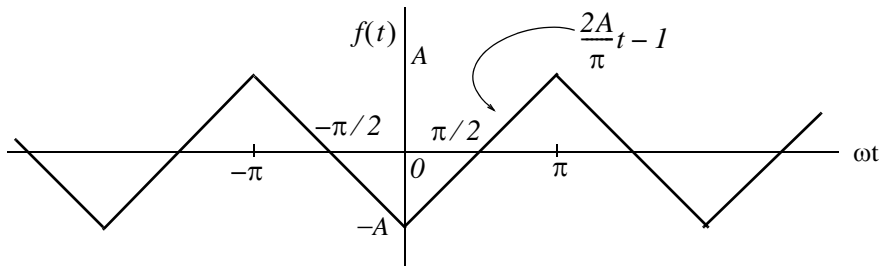
Thus,

$$f(t) = \frac{A}{2} + \sum_{n=\text{odd}} \left( \pm \frac{A}{n\pi} e^{jn\omega t} \right)$$

where the plus (+) sign is used with  $n = 1, 5, 9, \dots$  and the minus (-) sign is used with  $n = 3, 7, 11, \dots$ . We can express  $f(t)$  in a more compact form as

$$f(t) = \frac{A}{2} + \sum_{n=\text{odd}} (-1)^{(n-1)/2} \frac{A}{n\pi} e^{jn\omega t}$$

6.



We will find the exponential form coefficients  $C_n$  from

$$C_n = \frac{1}{2\pi} \int_{-\pi}^{\pi} f(t) e^{-jnt} dt$$

From tables of integrals

$$\int x e^{ax} dx = \frac{e^{ax}}{a^2} (ax - 1)$$

Then,

$$C_n = \frac{1}{2\pi} \left[ \int_{-\pi}^0 \left( -\frac{2A}{\pi} t - 1 \right) e^{-jnt} dt + \int_0^{\pi} \left( \frac{2A}{\pi} t - 1 \right) e^{-jnt} dt \right]$$

Integrating and rearranging terms we get

$$\begin{aligned} C_n &= \frac{1}{2\pi} \left[ -\frac{4A}{n^2 \pi} + \frac{4A}{n^2 \pi} \left( n\pi \cdot \frac{e^{jn\pi} - e^{-jn\pi}}{j2} + \frac{e^{jn\pi} + e^{-jn\pi}}{2} \right) - \frac{2A}{n} \cdot \frac{e^{jn\pi} - e^{-jn\pi}}{j2} \right] \\ &= \frac{4A}{2n^2 \pi^2} \left( -1 + n\pi \sin n\pi + \cos n\pi - \frac{n\pi}{2} \sin n\pi \right) \end{aligned}$$

and since  $\sin n\pi = 0$  for all integer  $n$ ,

$$C_n = \frac{2A}{n^2 \pi^2} (\cos n\pi - 1)$$

For  $n = \text{even}$ ,  $C_n = 0$  and for  $n = \text{odd}$ ,  $\cos n\pi = -1$ , and  $C_n = \frac{-4A}{n^2 \pi^2}$

Also, by inspection, the *DC* component  $C_0 = 0$ . Then,

$$f(t) = -\frac{4A}{\pi^2} \left( \dots + \frac{1}{9} e^{-j3\omega t} + e^{-j\omega t} + e^{j\omega t} + \frac{1}{9} e^{j3\omega t} + \dots \right)$$

The coefficients of the terms  $e^{-j3\omega t}$  and  $e^{-j\omega t}$  are positive because all coefficients of  $C_n$  are real. This is to be expected since  $f(t)$  is an even function. It also has half-wave symmetry and thus  $C_n = 0$  for  $n = \text{even}$  as we've found.

This chapter introduces the Fourier Transform, also known as the Fourier Integral. The definition, theorems, and properties are presented and proved. The Fourier transforms of the most common functions are derived, the system function is defined, and several examples are given to illustrate its application in circuit analysis.

### 8.1 Definition and Special Forms

We recall that the Fourier series for periodic functions of time, such as those we discussed on the previous chapter, produce discrete line spectra with non-zero values only at specific frequencies referred to as harmonics. However, other functions of interest such as the unit step, the unit impulse, the unit ramp, and a single rectangular pulse are not periodic functions. The frequency spectra for these functions are continuous as we will see later in this chapter.

We may think of a non-periodic signal as one arising from a periodic signal in which the period extends from  $-\infty$  to  $+\infty$ . Then, for a signal that is a function of time with period from  $-\infty$  to  $+\infty$ , we form the integral

$$F(\omega) = \int_{-\infty}^{\infty} f(t)e^{-j\omega t} dt \quad (8.1)$$

and assuming that it exists for every value of the radian frequency  $\omega$ , we call the function  $F(\omega)$  the *Fourier transform* or the *Fourier integral*.

The Fourier transform is, in general, a complex function. We can express it as the sum of its real and imaginary components, or in exponential form, that is, as

$$F(\omega) = \text{Re}\{F(\omega)\} + j\text{Im}\{F(\omega)\} = |F(\omega)|e^{j\phi(\omega)} \quad (8.2)$$

The *Inverse Fourier transform* is defined as

$$f(t) = \frac{1}{2\pi} \int_{-\infty}^{\infty} F(\omega)e^{j\omega t} d\omega \quad (8.3)$$

We will often use the following notation to express the Fourier transform and its inverse.

$$\mathcal{F}\{f(t)\} = F(\omega) \quad (8.4)$$

and

$$\mathcal{F}^{-1}\{F(\omega)\} = f(t) \quad (8.5)$$

**8.2 Special Forms of the Fourier Transform**

The time function  $f(t)$  is, in general, complex, and thus we can express it as the sum of its real and imaginary parts, that is, as

$$f(t) = f_{Re}(t) + jf_{Im}(t) \quad (8.6)$$

The subscripts  $Re$  and  $Im$  will be used often to denote the real and imaginary parts respectively. These notations have the same meaning as  $Re\{f(t)\}$  and  $Im\{f(t)\}$ .

By substitution of (8.6) into the Fourier integral of (8.1), we get

$$F(\omega) = \int_{-\infty}^{\infty} f_{Re}(t)e^{-j\omega t} dt + j \int_{-\infty}^{\infty} f_{Im}(t)e^{-j\omega t} dt \quad (8.7)$$

and by Euler's identity

$$F(\omega) = \int_{-\infty}^{\infty} [f_{Re}(t)\cos\omega t + f_{Im}(t)\sin\omega t] dt - j \int_{-\infty}^{\infty} [f_{Re}(t)\sin\omega t - f_{Im}(t)\cos\omega t] dt \quad (8.8)$$

From (8.2), we see that the real and imaginary parts of  $F(\omega)$  are

$$F_{Re}(\omega) = \int_{-\infty}^{\infty} [f_{Re}(t)\cos\omega t + f_{Im}(t)\sin\omega t] dt \quad (8.9)$$

and

$$F_{Im}(\omega) = - \int_{-\infty}^{\infty} [f_{Re}(t)\sin\omega t - f_{Im}(t)\cos\omega t] dt \quad (8.10)$$

We can derive similar forms for the Inverse Fourier transform as follows:

Substitution of (8.2) into (8.3) yields

$$f(t) = \frac{1}{2\pi} \int_{-\infty}^{\infty} [F_{Re}(\omega) + jF_{Im}(\omega)] e^{j\omega t} d\omega \quad (8.11)$$

and by Euler's identity,

$$\begin{aligned} f(t) &= \frac{1}{2\pi} \int_{-\infty}^{\infty} [F_{Re}(\omega)\cos\omega t - F_{Im}(\omega)\sin\omega t] d\omega \\ &\quad + j \frac{1}{2\pi} \int_{-\infty}^{\infty} [F_{Re}(\omega)\sin\omega t + F_{Im}(\omega)\cos\omega t] d\omega \end{aligned} \quad (8.12)$$

Therefore, the real and imaginary parts of  $f(t)$  are

$$\boxed{f_{Re}(t) = \frac{1}{2\pi} \int_{-\infty}^{\infty} [F_{Re}(\omega)\cos\omega t - F_{Im}(\omega)\sin\omega t] d\omega} \quad (8.13)$$

and

$$f_{Im}(t) = \frac{1}{2\pi} \int_{-\infty}^{\infty} [F_{Re}(\omega) \sin \omega t + F_{Im}(\omega) \cos \omega t] d\omega \quad (8.14)$$

Now, we will use the above relations to determine the time to frequency domain correspondence for real, imaginary, even, and odd functions in both the time and the frequency domains. We will show these in tabular form, as indicated in Table 8.1.

*TABLE 8.1 Time Domain and Frequency Domain Correspondence (Refer to Tables 8.2 - 8.7)*

<i>f(t)</i>	<i>F(ω)</i>				
	<i>Real</i>	<i>Imaginary</i>	<i>Complex</i>	<i>Even</i>	<i>Odd</i>
<i>Real</i>					
<i>Real and Even</i>					
<i>Real and Odd</i>					
<i>Imaginary</i>					
<i>Imaginary and Even</i>					
<i>Imaginary and Odd</i>					

### 1. Real Time Functions

If  $f(t)$  is real, (8.9) and (8.10) reduce to

$$F_{Re}(\omega) = \int_{-\infty}^{\infty} f_{Re}(t) \cos \omega t dt \quad (8.15)$$

and

$$F_{Im}(\omega) = -\int_{-\infty}^{\infty} f_{Re}(t) \sin \omega t dt \quad (8.16)$$

**Conclusion:** If  $f(t)$  is real,  $F(\omega)$  is, in general, complex. We indicate this result with a check mark in Table 8.2.

We know that any function  $f(t)$ , can be expressed as the sum of an even and an odd function. Therefore, we will also consider the cases when  $f(t)$  is real and even, and when  $f(t)$  is real and odd\*.

\* In our subsequent discussion, we will make use of the fact that the cosine is an even function, while the sine is an odd function. Also, the product of two odd functions or the product of two even functions will result in an even function, whereas the product of an odd function and an even function will result in an odd function.

TABLE 8.2 Time Domain and Frequency Domain Correspondence (Refer also to Tables 8.3 - 8.7)

$f(t)$	$F(\omega)$				
	<i>Real</i>	<i>Imaginary</i>	<i>Complex</i>	<i>Even</i>	<i>Odd</i>
<i>Real</i>			✓		
<i>Real and Even</i>					
<i>Real and Odd</i>					
<i>Imaginary</i>					
<i>Imaginary and Even</i>					
<i>Imaginary and Odd</i>					

a.  $f_{Re}(t)$  is even

If  $f_{Re}(-t) = f_{Re}(t)$ , the product  $f_{Re}(t)\cos\omega t$ , with respect to  $t$ , is even, while the product  $f_{Re}(t)\sin\omega t$  is odd. In this case, (8.15) and (8.16) reduce to:

$$F_{Re}(\omega) = 2 \int_0^{\infty} f_{Re}(t) \cos\omega t dt \quad f_{Re}(t) = \text{even} \quad (8.17)$$

and

$$F_{Im}(\omega) = - \int_{-\infty}^{\infty} f_{Re}(t) \sin\omega t dt = 0 \quad f_{Re}(t) = \text{even} \quad (8.18)$$

Therefore, if  $f_{Re}(t) = \text{even}$ ,  $F(\omega)$  is real as seen in (8.17).

To determine whether  $F(\omega)$  is even or odd when  $f_{Re}(t) = \text{even}$ , we must perform a test for evenness or oddness with respect to  $\omega$ . Thus, substitution of  $-\omega$  for  $\omega$  in (8.17), yields

$$F_{Re}(-\omega) = 2 \int_0^{\infty} f_{Re}(t) \cos(-\omega)t dt = 2 \int_0^{\infty} f_{Re}(t) \cos\omega t dt = F_{Re}(\omega) \quad (8.19)$$

**Conclusion:** If  $f(t)$  is real and even,  $F(\omega)$  is also real and even. We indicate this result in Table 8.3.

b.  $f_{Re}(t)$  is odd

If  $-f_{Re}(-t) = f_{Re}(t)$ , the product  $f_{Re}(t)\cos\omega t$ , with respect to  $t$ , is odd, while the product  $f_{Re}(t)(\sin\omega t)$  is even. In this case, (8.15) and (8.16) reduce to:



TABLE 8.3 Time Domain and Frequency Domain Correspondence (Refer also to Tables 8.4 - 8.7)

$f(t)$	$F(\omega)$				
	<i>Real</i>	<i>Imaginary</i>	<i>Complex</i>	<i>Even</i>	<i>Odd</i>
<i>Real</i>			✓		
<i>Real and Even</i>	✓			✓	
<i>Real and Odd</i>					
<i>Imaginary</i>					
<i>Imaginary and Even</i>					
<i>Imaginary and Odd</i>					

$$F_{Re}(\omega) = \int_{-\infty}^{\infty} f_{Re}(t) \cos \omega t dt = 0 \quad f_{Re}(t) = \text{odd} \quad (8.20)$$

and

$$F_{Im}(\omega) = -2 \int_0^{\infty} f_{Re}(t) \sin \omega t dt \quad f_{Re}(t) = \text{odd} \quad (8.21)$$

Therefore, if  $f_{Re}(t) = \text{odd}$ ,  $F(\omega)$  is imaginary.

To determine whether  $F(\omega)$  is even or odd when  $f_{Re}(t) = \text{odd}$ , we perform a test for evenness or oddness with respect to  $\omega$ . Thus, substitution of  $-\omega$  for  $\omega$  in (8.21), yields

$$F_{Im}(-\omega) = -2 \int_0^{\infty} f_{Re}(t) \sin(-\omega)t dt = 2 \int_0^{\infty} f_{Re}(t) \sin \omega t dt = -F_{Im}(\omega) \quad (8.22)$$

**Conclusion:** If  $f(t)$  is real and odd,  $F(\omega)$  is imaginary and odd. We indicate this result in Table 8.4.

## 2. Imaginary Time Functions

If  $f(t)$  is imaginary, (8.9) and (8.10) reduce to

$$F_{Re}(\omega) = \int_{-\infty}^{\infty} f_{Im}(t) \sin \omega t dt \quad (8.23)$$

and

$$F_{Im}(\omega) = \int_{-\infty}^{\infty} f_{Im}(t) \cos \omega t dt \quad (8.24)$$

TABLE 8.4 Time Domain and Frequency Domain Correspondence (Refer also to Tables 8.5 - 8.7)

$f(t)$	$F(\omega)$				
	<i>Real</i>	<i>Imaginary</i>	<i>Complex</i>	<i>Even</i>	<i>Odd</i>
<i>Real</i>			✓		
<i>Real and Even</i>	✓			✓	
<i>Real and Odd</i>		✓			✓
<i>Imaginary</i>					
<i>Imaginary and Even</i>					
<i>Imaginary and Odd</i>					

**Conclusion:** If  $f(t)$  is imaginary,  $F(\omega)$  is, in general, complex. We indicate this result in Table 8.5.

TABLE 8.5 Time Domain and Frequency Domain Correspondence (Refer also to Tables 8.6 - 8.7)

$f(t)$	$F(\omega)$				
	<i>Real</i>	<i>Imaginary</i>	<i>Complex</i>	<i>Even</i>	<i>Odd</i>
<i>Real</i>			✓		
<i>Real and Even</i>	✓			✓	
<i>Real and Odd</i>		✓			✓
<i>Imaginary</i>			✓		
<i>Imaginary and Even</i>					
<i>Imaginary and Odd</i>					

Next, we will consider the cases where  $f(t)$  is imaginary and even, and  $f(t)$  is imaginary and odd.

a.  $f_{Im}(t)$  is even

If  $f_{Im}(-t) = f_{Im}(t)$ , the product  $f_{Im}(t)\cos\omega t$ , with respect to  $t$ , is even while the product  $f_{Im}(t)\sin\omega t$  is odd. In this case, (8.23) and (8.24) reduce to:

$$F_{Re}(\omega) = \int_{-\infty}^{\infty} f_{Im}(t)\sin\omega t dt = 0 \quad f_{Im}(t) = \text{even} \quad (8.25)$$

and

$$F_{Im}(\omega) = 2\int_0^{\infty} f_{Im}(t)\cos\omega t dt \quad f_{Im}(t) = \text{even} \quad (8.26)$$

Therefore, if  $f_{Im}(t) = \text{even}$ ,  $F(\omega)$  is imaginary.

To determine whether  $F(\omega)$  is even or odd when  $f_{Im}(t) = \text{even}$ , we perform a test for evenness or oddness with respect to  $\omega$ . Thus, substitution of  $-\omega$  for  $\omega$  in (8.26) yields

$$\begin{aligned} F_{Im}(-\omega) &= 2 \int_0^{\infty} f_{Im}(t) \cos(-\omega)t dt \\ &= 2 \int_0^{\infty} f_{Im}(t) \cos \omega t dt = F_{Im}(\omega) \end{aligned} \tag{8.27}$$

**Conclusion:** If  $f(t)$  is imaginary and even,  $F(\omega)$  is also imaginary and even. We indicate this result in Table 8.6.

TABLE 8.6 Time Domain and Frequency Domain Correspondence (Refer also to Table 8.7)

$f(t)$	$F(\omega)$				
	<i>Real</i>	<i>Imaginary</i>	<i>Complex</i>	<i>Even</i>	<i>Odd</i>
<i>Real</i>			✓		
<i>Real and Even</i>	✓			✓	
<i>Real and Odd</i>		✓			✓
<i>Imaginary</i>			✓		
<i>Imaginary and Even</i>		✓		✓	
<i>Imaginary and Odd</i>					

b.  $f_{Im}(t)$  is odd

If  $-f_{Im}(-t) = f_{Im}(t)$ , the product  $f_{Im}(t) \cos \omega t$ , with respect to  $t$ , is odd, while the product  $f_{Im}(t) \sin \omega t$  is even. In this case, (8.23) and (8.24) reduce to

$$F_{Re}(\omega) = \int_{-\infty}^{\infty} f_{Im}(t) \sin \omega t dt = 2 \int_0^{\infty} f_{Im}(t) \sin \omega t dt \quad f_{Im}(t) = \text{odd} \tag{8.28}$$

and

$$F_{Im}(\omega) = \int_{-\infty}^{\infty} f_{Im}(t) \cos \omega t dt = 0 \quad f_{Im}(t) = \text{odd} \tag{8.29}$$

Therefore, if  $f_{Im}(t) = \text{odd}$ ,  $F(\omega)$  is real.

## Chapter 8 The Fourier Transform

To determine whether  $F(\omega)$  is even or odd when  $f_{Im}(t) = \text{odd}$ , we perform a test for evenness or oddness with respect to  $\omega$ . Thus, substitution of  $-\omega$  for  $\omega$  in (8.28) yields

$$F_{Re}(-\omega) = 2 \int_0^{\infty} f_{Im}(t) \sin(-\omega)t dt = -2 \int_0^{\infty} f_{Im}(t) \sin \omega t dt = -F_{Re}(\omega) \quad (8.30)$$

**Conclusion:** If  $f(t)$  is imaginary and odd,  $F(\omega)$  is real and odd. We indicate this result in Table 8.7.

TABLE 8.7 Time Domain and Frequency Domain Correspondence (Completed Table)

$f(t)$	$F(\omega)$				
	<i>Real</i>	<i>Imaginary</i>	<i>Complex</i>	<i>Even</i>	<i>Odd</i>
<i>Real</i>			✓		
<i>Real and Even</i>	✓			✓	
<i>Real and Odd</i>		✓			✓
<i>Imaginary</i>			✓		
<i>Imaginary and Even</i>		✓		✓	
<i>Imaginary and Odd</i>	✓				✓

Table 8.7 is now complete and shows that if  $f(t)$  is real (even or odd), the real part of  $F(\omega)$  is even, and the imaginary part is odd. Then,

$$F_{Re}(-\omega) = F_{Re}(\omega) \quad f(t) = \text{Real} \quad (8.31)$$

and

$$F_{Im}(-\omega) = -F_{Im}(\omega) \quad f(t) = \text{Real} \quad (8.32)$$

Since,

$$F(\omega) = F_{Re}(\omega) + jF_{Im}(\omega) \quad (8.33)$$

it follows that

$$F(-\omega) = F_{Re}(-\omega) + jF_{Im}(-\omega) = F_{Re}(\omega) - jF_{Im}(\omega)$$

or

$$F(-\omega) = F^*(\omega) \quad f(t) = \text{Real} \quad (8.34)$$

Now, if  $F(\omega)$  of some function of time  $f(t)$  is known, and  $F(\omega)$  is such that  $F(-\omega) = F^*(\omega)$ , can we conclude that  $f(t)$  is real? The answer is yes; we can verify this with (8.14) which is repeated below for convenience.

$$f_{Im}(t) = \frac{1}{2\pi} \int_{-\infty}^{\infty} [F_{Re}(\omega) \sin \omega t + F_{Im}(\omega) \cos \omega t] d\omega \quad (8.35)$$

We observe that the integrand of (8.35) is zero since it is an odd function with respect to  $\omega$  because both products inside the brackets are odd functions\*.

Therefore,  $f_{Im}(t) = 0$ , that is,  $f(t)$  is real.

We can state then, that *a necessary and sufficient condition for  $f(t)$  to be real, is that  $F(-\omega) = F^*(\omega)$ .*

Also, if it is known that  $f(t)$  is real, the Inverse Fourier transform of (8.3) can be simplified as follows:

From (8.13),

$$f_{Re}(t) = \frac{1}{2\pi} \int_{-\infty}^{\infty} [F_{Re}(\omega) \cos \omega t - F_{Im}(\omega) \sin \omega t] d\omega \quad (8.36)$$

and since the integrand is an even function with respect to  $\omega$ , we rewrite (8.36) as

$$\begin{aligned} f_{Re}(t) &= 2 \frac{1}{2\pi} \int_0^{\infty} [F_{Re}(\omega) \cos \omega t - F_{Im}(\omega) \sin \omega t] d\omega \\ &= \frac{1}{\pi} \int_0^{\infty} A(\omega) \cos[\omega t + \varphi(\omega)] d\omega = \frac{1}{\pi} \text{Re} \int_0^{\infty} F(\omega) e^{j[\omega t + \varphi(\omega)]} d\omega \end{aligned} \quad (8.37)$$

### 8.3 Properties and Theorems of the Fourier Transform

#### 1. Linearity

If  $F_1(\omega)$  is the Fourier transform of  $f_1(t)$ ,  $F_2(\omega)$  is the transform of  $f_2(t)$ , and so on, the *linearity property of the Fourier transform* states that

$$\boxed{a_1 f_1(t) + a_2 f_2(t) + \dots + a_n f_n(t) \Leftrightarrow a_1 F_1(\omega) + a_2 F_2(\omega) + \dots + a_n F_n(\omega)} \quad (8.38)$$

where  $a_i$  is some arbitrary real constant.

**Proof:**

The proof is easily obtained from (8.1), that is, the definition of the Fourier transform. The procedure is the same as for the linearity property of the Laplace transform in Chapter 2.

---

\* In (8.31) and (8.32), we determined that  $F_{Re}(\omega)$  is even and  $F_{Im}(\omega)$  is odd.

### 2. Symmetry

If  $F(\omega)$  is the Fourier transform of  $f(t)$ , the *symmetry property of the Fourier transform* states that

$$\boxed{F(t) \Leftrightarrow 2\pi f(-\omega)} \quad (8.39)$$

that is, if in  $F(\omega)$ , we replace  $\omega$  with  $t$ , we get the Fourier transform pair of (8.39).

#### Proof:

Since

$$f(t) = \frac{1}{2\pi} \int_{-\infty}^{\infty} F(\omega) e^{j\omega t} d\omega$$

then,

$$2\pi f(-t) = \int_{-\infty}^{\infty} F(\omega) e^{-j\omega t} d\omega$$

Interchanging  $t$  and  $\omega$ , we get

$$2\pi f(-\omega) = \int_{-\infty}^{\infty} F(t) e^{-j\omega t} dt$$

and (8.39) follows.

### 3. Time Scaling

If  $a$  is a real constant, and  $F(\omega)$  is the Fourier transform of  $f(t)$ , then,

$$\boxed{f(at) \Leftrightarrow \frac{1}{|a|} F\left(\frac{\omega}{a}\right)} \quad (8.40)$$

that is, the *time scaling property of the Fourier transform* states that if we replace the variable  $t$  in the time domain by  $at$ , we must replace the variable  $\omega$  in the frequency domain by  $\omega/a$ , and divide  $F(\omega/a)$  by the absolute value of  $a$ .

#### Proof:

We must consider both cases  $a > 0$  and  $a < 0$ .

For  $a > 0$ ,

$$\mathcal{F}\{f(at)\} = \int_{-\infty}^{\infty} f(at) e^{-j\omega t} dt \quad (8.41)$$

We let  $at = \tau$ ; then,  $t = \tau/a$ , and (8.41) becomes

$$\mathcal{F}\{f(\tau)\} = \int_{-\infty}^{\infty} f(\tau) e^{-j\omega\left(\frac{\tau}{a}\right)} d\left(\frac{\tau}{a}\right) = \frac{1}{a} \int_{-\infty}^{\infty} f(\tau) e^{-j\left(\frac{\omega}{a}\right)\tau} d\tau = \frac{1}{a} F\left(\frac{\omega}{a}\right)$$

For  $a < 0$ ,

$$\mathcal{F}\{f(-at)\} = \int_{-\infty}^{\infty} f(-at) e^{-j\omega t} dt$$

and making the above substitutions, we find that the multiplying factor is  $-1/a$ . Therefore, for  $1/|a|$  we obtain (8.40).

#### 4. Time Shifting

If  $F(\omega)$  is the Fourier transform of  $f(t)$ , then,

$$\boxed{f(t - t_0) \Leftrightarrow F(\omega) e^{-j\omega t_0}} \quad (8.42)$$

that is, the *time shifting property of the Fourier transform* states that if we shift the time function  $f(t)$  by a constant  $t_0$ , the Fourier transform magnitude does not change, but the term  $\omega t_0$  is added to its phase angle.

**Proof:**

$$\mathcal{F}\{f(t - t_0)\} = \int_{-\infty}^{\infty} f(t - t_0) e^{-j\omega t} dt$$

We let  $t - t_0 = \tau$ ; then,  $t = \tau + t_0$ ,  $dt = d\tau$ , and thus

$$\mathcal{F}\{f(t - t_0)\} = \int_{-\infty}^{\infty} f(\tau) e^{-j\omega(\tau + t_0)} d\tau = e^{-j\omega t_0} \int_{-\infty}^{\infty} f(\tau) e^{-j\omega\tau} d\tau$$

or

$$\mathcal{F}\{f(t - t_0)\} = e^{-j\omega t_0} F(\omega)$$

#### 5. Frequency Shifting

If  $F(\omega)$  is the Fourier transform of  $f(t)$ , then,

$$\boxed{e^{j\omega_0 t} f(t) \Leftrightarrow F(\omega - \omega_0)} \quad (8.43)$$

that is, *multiplication of the time function  $f(t)$  by  $e^{j\omega_0 t}$* , where  $\omega_0$  is a constant, results in shifting the Fourier transform by  $\omega_0$ .

**Proof:**

$$\mathcal{F} \{e^{j\omega_0 t} f(t)\} = \int_{-\infty}^{\infty} e^{j\omega_0 t} f(t) e^{-j\omega t} dt$$

or

$$\mathcal{F} \{e^{j\omega_0 t} f(t)\} = \int_{-\infty}^{\infty} f(t) e^{-j(\omega - \omega_0) t} dt = F(\omega - \omega_0)$$

Also, from (8.40) and (8.43)

$$e^{j\omega_0 t} f(at) \Leftrightarrow \frac{1}{|a|} F\left(\frac{\omega - \omega_0}{a}\right) \quad (8.44)$$

Property 5, that is, (8.43) is also used to derive the Fourier transform of the *modulated signals*  $f(t)\cos\omega_0 t$  and  $f(t)\sin\omega_0 t$ . Thus, from

$$e^{j\omega_0 t} f(t) \Leftrightarrow F(\omega - \omega_0)$$

and

$$\cos\omega_0 t = \frac{e^{j\omega_0 t} + e^{-j\omega_0 t}}{2}$$

we get

$$f(t)\cos\omega_0 t \Leftrightarrow \frac{F(\omega - \omega_0) + F(\omega + \omega_0)}{2} \quad (8.45)$$

Similarly,

$$f(t)\sin\omega_0 t \Leftrightarrow \frac{F(\omega - \omega_0) - F(\omega + \omega_0)}{j2} \quad (8.46)$$

### 6. Time Differentiation

If  $F(\omega)$  is the Fourier transform of  $f(t)$ , then,

$$\frac{d^n}{dt^n} f(t) \Leftrightarrow (j\omega)^n F(\omega) \quad (8.47)$$

that is, the Fourier transform of  $\frac{d^n}{dt^n} f(t)$ , if it exists, is  $(j\omega)^n F(\omega)$ .

**Proof:**

Differentiating the Inverse Fourier transform, we get



$$\begin{aligned} \frac{d^n}{dt^n} f(t) &= \frac{d^n}{dt^n} \left( \frac{1}{2\pi} \int_{-\infty}^{\infty} F(\omega) e^{j\omega t} d\omega \right) = \frac{1}{2\pi} \int_{-\infty}^{\infty} F(\omega) \frac{d^n}{dt^n} e^{j\omega t} d\omega \\ &= \frac{1}{2\pi} \int_{-\infty}^{\infty} F(\omega) (j\omega)^n e^{j\omega t} d\omega = (j\omega)^n \left( \frac{1}{2\pi} \int_{-\infty}^{\infty} F(\omega) e^{j\omega t} d\omega \right) \end{aligned}$$

and (8.47) follows.

### 7. Frequency Differentiation

If  $F(\omega)$  is the Fourier transform of  $f(t)$ , then,

$$\boxed{(-jt)^n f(t) \Leftrightarrow \frac{d^n}{d\omega^n} F(\omega)} \quad (8.48)$$

**Proof:**

Using the Fourier transform definition, we get

$$\begin{aligned} \frac{d^n}{d\omega^n} F(\omega) &= \frac{d^n}{d\omega^n} \left( \int_{-\infty}^{\infty} f(t) e^{-j\omega t} dt \right) = \int_{-\infty}^{\infty} f(t) \frac{d^n}{d\omega^n} e^{-j\omega t} dt \\ &= \int_{-\infty}^{\infty} f(t) (-jt)^n e^{-j\omega t} dt = (-jt)^n \int_{-\infty}^{\infty} f(t) e^{-j\omega t} dt \end{aligned}$$

and (8.48) follows.

### 8. Time Integration

If  $F(\omega)$  is the Fourier transform of  $f(t)$ , then,

$$\boxed{\int_{-\infty}^t f(\tau) d\tau \Leftrightarrow \frac{F(\omega)}{j\omega} + \pi F(0) \delta(\omega)} \quad (8.49)$$

**Proof:**

We postpone the proof of this property until we derive the Fourier transform of the unit step function  $u_0(t)$  on the next section. In the special case where in (8.49),  $F(0) = 0$ , then,

$$\int_{-\infty}^t f(\tau) d\tau \Leftrightarrow \frac{F(\omega)}{j\omega} \quad (8.50)$$

and this is easily proved by integrating both sides of the Inverse Fourier transform.

### 9. Conjugate Time and Frequency Functions

If  $F(\omega)$  is the Fourier transform of the complex function  $f(t)$ , then,

$$\boxed{f^*(t) \Leftrightarrow F^*(-\omega)} \quad (8.51)$$

that is, if the Fourier transform of  $f(t) = f_{Re}(t) + jf_{Im}(t)$  is  $F(\omega)$ , then, the Fourier transform of  $f^*(t) = f_{Re}(t) - jf_{Im}(t)$  is  $F^*(-\omega)$ .

**Proof:**

$$\begin{aligned} F(\omega) &= \int_{-\infty}^{\infty} f(t)e^{-j\omega t} dt = \int_{-\infty}^{\infty} [f_{Re}(t) + jf_{Im}(t)]e^{-j\omega t} dt \\ &= \int_{-\infty}^{\infty} f_{Re}(t)e^{-j\omega t} dt + j \int_{-\infty}^{\infty} f_{Im}(t)e^{-j\omega t} dt \end{aligned}$$

Then,

$$F^*(\omega) = \int_{-\infty}^{\infty} f_{Re}(t)e^{j\omega t} dt - j \int_{-\infty}^{\infty} f_{Im}(t)e^{j\omega t} dt$$

Replacing  $\omega$  with  $-\omega$ , we get

$$F^*(-\omega) = \int_{-\infty}^{\infty} [f_{Re}(t) - jf_{Im}(t)]e^{-j\omega t} dt$$

and (8.51) follows.

### 10. Time Convolution

If  $F_1(\omega)$  is the Fourier transform of  $f_1(t)$ , and  $F_2(\omega)$  is the Fourier transform of  $f_2(t)$ , then,

$$\boxed{f_1(t)*f_2(t) \Leftrightarrow F_1(\omega)F_2(\omega)} \quad (8.52)$$

that is, convolution in the time domain, corresponds to multiplication in the frequency domain.

**Proof:**

$$\begin{aligned} \mathcal{F} \{f_1(t)*f_2(t)\} &= \int_{-\infty}^{\infty} \left[ \int_{-\infty}^{\infty} f_1(\tau)f_2(t-\tau)d\tau \right] e^{-j\omega t} dt \\ &= \int_{-\infty}^{\infty} f_1(\tau) \left[ \int_{-\infty}^{\infty} f_2(t-\tau)e^{-j\omega t} dt \right] d\tau \end{aligned} \quad (8.53)$$

and letting  $t - \tau = \sigma$ , then,  $dt = d\sigma$ , and by substitution into (8.53),

$$\mathcal{F} \{f_1(t)*f_2(t)\} = \int_{-\infty}^{\infty} f_1(\tau) \left[ \int_{-\infty}^{\infty} f_2(\sigma)e^{-j\omega\tau} e^{-j\omega\sigma} d\sigma \right] d\tau = \int_{-\infty}^{\infty} f_1(\tau)e^{-j\omega\tau} d\tau \int_{-\infty}^{\infty} f_2(\sigma)e^{-j\omega\sigma} d\sigma$$

The first integral above is  $F_1(\omega)$  while the second is  $F_2(\omega)$ , and thus (8.52) follows.

**Alternate Proof:**

We can apply the time shifting property  $f(t - t_0) \Leftrightarrow F(\omega)e^{-j\omega t_0}$  into the bracketed integral of (8.53); then, replacing it with  $F_2(\omega)e^{-j\omega t_0}$ , we get

$$\begin{aligned} \mathcal{F}\{f_1(t)*f_2(t)\} &= \int_{-\infty}^{\infty} f_1(\tau) \left[ \int_{-\infty}^{\infty} f_2(t - \tau) e^{-j\omega t} dt \right] d\tau = \int_{-\infty}^{\infty} f_1(\tau) d\tau F_2(\omega) e^{-j\omega t_0} \\ &= \int_{-\infty}^{\infty} f_1(\tau) e^{-j\omega t} d\tau F_2(\omega) = F_1(\omega) F_2(\omega) \end{aligned}$$

**11. Frequency Convolution**

If  $F_1(\omega)$  is the Fourier transform of  $f_1(t)$ , and  $F_2(\omega)$  is the Fourier transform of  $f_2(t)$ , then,

$$\boxed{f_1(t)f_2(t) \Leftrightarrow \frac{1}{2\pi} F_1(\omega) * F_2(\omega)} \tag{8.54}$$

that is, multiplication in the time domain, corresponds to convolution in the frequency domain divided by the constant  $1/2\pi$ .

**Proof:**

$$\begin{aligned} \mathcal{F}\{f_1(t)f_2(t)\} &= \int_{-\infty}^{\infty} [f_1(t)f_2(t)] e^{-j\omega t} dt = \int_{-\infty}^{\infty} \frac{1}{2\pi} \left[ \int_{-\infty}^{\infty} F_1(\chi) e^{j\chi t} d\chi \right] f_2(t) e^{-j\omega t} dt \\ &= \frac{1}{2\pi} \int_{-\infty}^{\infty} F_1(\chi) \left[ \int_{-\infty}^{\infty} f_2(t) e^{-j(\omega - \chi)t} dt \right] d\chi = \frac{1}{2\pi} \int_{-\infty}^{\infty} F_1(\chi) F_2(\omega - \chi) d\chi \end{aligned}$$

and (8.54) follows.

**12. Area under  $f(t)$**

If  $F(\omega)$  is the Fourier transform of  $f(t)$ , then,

$$\boxed{F(0) = \int_{-\infty}^{\infty} f(t) dt} \tag{8.55}$$

that is, the area under a time function  $f(t)$  is equal to the value of its Fourier transform evaluated at  $\omega = 0$ .

**Proof:**

Using the definition of  $F(\omega)$  and that  $e^{-j\omega t} \Big|_{\omega=0} = 1$ , we see that (8.55) follows.

### 13. Area under $F(\omega)$

If  $F(\omega)$  is the Fourier transform of  $f(t)$ , then,

$$f(0) = \frac{1}{2\pi} \int_{-\infty}^{\infty} F(\omega) d\omega \quad (8.56)$$

that is, the value of the time function  $f(t)$ , evaluated at  $t = 0$ , is equal to the area under its Fourier transform  $F(\omega)$  times  $1/2\pi$ .

**Proof:**

In the Inverse Fourier transform of (8.3), we let  $e^{j\omega t} \Big|_{t=0} = 1$ , and (8.56) follows.

### 14. Parseval's Theorem

If  $F(\omega)$  is the Fourier transform of  $f(t)$ , *Parseval's theorem* states that

$$\int_{-\infty}^{\infty} |f(t)|^2 dt = \frac{1}{2\pi} \int_{-\infty}^{\infty} |F(\omega)|^2 d\omega \quad (8.57)$$

that is, if the time function  $f(t)$  represents the voltage across, or the current through an  $1 \Omega$  resistor, the instantaneous power absorbed by this resistor is either  $v^2/R$ ,  $v^2/I$ ,  $v^2$ , or  $i^2R$ ,  $i^2$ . Then, the integral of the magnitude squared, represents the energy (in watt-seconds or joules) dissipated by the resistor. For this reason, the integral is called *the energy of the signal*. Relation (8.57) then, states that if we do not know the energy of a time function  $f(t)$ , but we know the Fourier transform of this function, we can compute the energy without the need to evaluate the Inverse Fourier transform.

**Proof:**

From the frequency convolution property,

$$f_1(t)f_2(t) \Leftrightarrow \frac{1}{2\pi} F_1(\omega) * F_2(\omega)$$

or

$$\mathcal{F} \{f_1(t)f_2(t)\} = \int_{-\infty}^{\infty} [f_1(t)f_2(t)] e^{-j\omega t} dt = \frac{1}{2\pi} \int_{-\infty}^{\infty} F_1(\chi) F_2(\omega - \chi) d\chi \quad (8.58)$$

Since (8.58) must hold for all values of  $\omega$ , it must also be true for  $\omega = 0$ , and under this condition, it reduces to

$$\int_{-\infty}^{\infty} [f_1(t)f_2(t)] dt = \frac{1}{2\pi} \int_{-\infty}^{\infty} F_1(\chi) F_2(-\chi) d\chi \quad (8.59)$$

For the special case where  $f_2(t) = f_1^*(t)$ , and the conjugate functions property  $f^*(t) \leftrightarrow F^*(-\omega)$ , by substitution into (8.59), we get:

$$\int_{-\infty}^{\infty} [f(t)f^*(t)]dt = \frac{1}{2\pi} \int_{-\infty}^{\infty} F(\omega)F^*[-(-\omega)]d\omega = \frac{1}{2\pi} \int_{-\infty}^{\infty} F(\omega)F^*(\omega)d\omega$$

Since  $f(t)f^*(t) = |f(t)|^2$  and  $F(\omega)F^*(\omega) = |F(\omega)|^2$ , Parseval's theorem is proved.

The Fourier transform properties and theorems are summarized in Table 8.8.

### 8.4 Fourier Transform Pairs of Common Functions

In this section, we will derive the Fourier transforms of common time functions.

1.

$$\boxed{\delta(t) \leftrightarrow 1} \tag{8.60}$$

**Proof:**

The sifting theorem of the delta function states that

$$\int_{-\infty}^{\infty} f(t)\delta(t - t_0)dt = f(t_0)$$

and if  $f(t)$  is defined at  $t = 0$ , then,

$$\int_{-\infty}^{\infty} f(t)\delta(t)dt = f(0)$$

By the definition of the Fourier transform

$$F(\omega) = \int_{-\infty}^{\infty} \delta(t)e^{-j\omega t} dt = e^{-j\omega t} \Big|_{t=0} = 1$$

and (8.60) follows.

We will use the notation  $f(t) \leftrightarrow F(\omega)$  to show the time domain to frequency domain correspondence. Thus, (8.60) may also be denoted as in Figure 8.1.

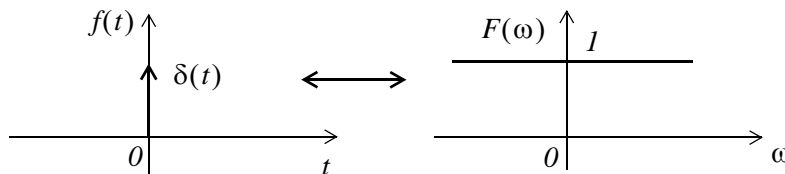


Figure 8.1. The Fourier transform of the delta function

TABLE 8.8 Fourier Transform Properties and Theorems

Property	$f(t)$	$F(\omega)$
Linearity	$a_1 f_1(t) + a_2 f_2(t) + \dots$	$a_1 F_1(\omega) + a_2 F_2(\omega) + \dots$
Symmetry	$F(t)$	$2\pi f(-\omega)$
Time Scaling	$f(at)$	$\frac{1}{ a } F\left(\frac{\omega}{a}\right)$
Time Shifting	$f(t - t_0)$	$F(\omega)e^{-j\omega t_0}$
Frequency Shifting	$e^{j\omega_0 t} f(t)$	$F(\omega - \omega_0)$
Time Differentiation	$\frac{d^n}{dt^n} f(t)$	$(j\omega)^n F(\omega)$
Frequency Differentiation	$(-jt)^n f(t)$	$\frac{d^n}{d\omega^n} F(\omega)$
Time Integration	$\int_{-\infty}^t f(\tau) d\tau$	$\frac{F(\omega)}{j\omega} + \pi F(0)\delta(\omega)$
Conjugate Functions	$f^*(t)$	$F^*(-\omega)$
Time Convolution	$f_1(t) * f_2(t)$	$F_1(\omega) \cdot F_2(\omega)$
Frequency Convolution	$f_1(t) \cdot f_2(t)$	$\frac{1}{2\pi} F_1(\omega) * F_2(\omega)$
Area under $f(t)$	$F(0) = \int_{-\infty}^{\infty} f(t) dt$	
Area under $F(\omega)$	$f(0) = \frac{1}{2\pi} \int_{-\infty}^{\infty} F(\omega) d\omega$	
Parseval's Theorem	$\int_{-\infty}^{\infty}  f(t) ^2 dt = \frac{1}{2\pi} \int_{-\infty}^{\infty}  F(\omega) ^2 d\omega$	

Likewise, the Fourier transform for the shifted delta function  $\delta(t - t_0)$  is

$$\delta(t - t_0) \Leftrightarrow e^{-j\omega t_0} \tag{8.61}$$

2.

$$\boxed{1 \Leftrightarrow 2\pi\delta(\omega)} \tag{8.62}$$

**Proof:**

$$\mathcal{F}^{-1}\{2\pi\delta(\omega)\} = \frac{1}{2\pi} \int_{-\infty}^{\infty} 2\pi\delta(\omega)e^{j\omega t} d\omega = \int_{-\infty}^{\infty} \delta(\omega)e^{j\omega t} d\omega = e^{j\omega t} \Big|_{\omega=0} = 1$$

and (8.62) follows.

The  $f(t) \leftrightarrow F(\omega)$  correspondence is also shown in Figure 8.2.

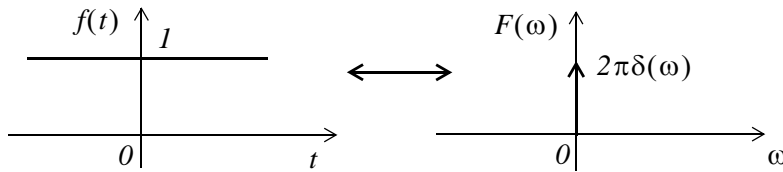


Figure 8.2. The Fourier transform of unity

Also, by direct application of the Inverse Fourier transform, or the frequency shifting property and (8.62), we derive the transform

$$\boxed{e^{j\omega_0 t} \Leftrightarrow 2\pi\delta(\omega - \omega_0)} \tag{8.63}$$

The transform pairs of (8.62) and (8.63) can also be derived from (8.60) and (8.61) by using the symmetry property  $F(t) \Leftrightarrow 2\pi f(-\omega)$

3.

$$\boxed{\cos \omega_0 t = \frac{1}{2}(e^{j\omega_0 t} + e^{-j\omega_0 t}) \Leftrightarrow \pi\delta(\omega - \omega_0) + \pi\delta(\omega + \omega_0)} \tag{8.64}$$

**Proof:**

This transform pair follows directly from (8.63). The  $f(t) \leftrightarrow F(\omega)$  correspondence is also shown in Figure 8.3.

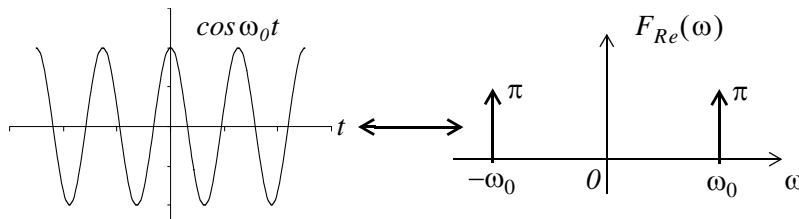


Figure 8.3. The Fourier transform of  $f(t) = \cos \omega_0 t$

## Chapter 8 The Fourier Transform

We know that  $\cos \omega_0 t$  is real and even function of time, and we found out that its Fourier transform is a real and even function of frequency. This is consistent with the result in Table 8.7.

4.

$$\boxed{\sin \omega_0 t = \frac{1}{j2}(e^{j\omega_0 t} - e^{-j\omega_0 t}) \Leftrightarrow j\pi\delta(\omega - \omega_0) - j\pi\delta(\omega + \omega_0)} \quad (8.65)$$

**Proof:**

This transform pair also follows directly from (8.63). The  $f(t) \leftrightarrow F(\omega)$  correspondence is also shown in Figure 8.4.

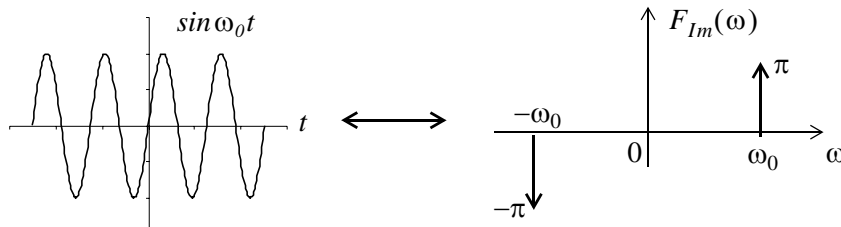


Figure 8.4. The Fourier transform of  $f(t) = \sin \omega_0 t$

We know that  $\sin \omega_0 t$  is real and odd function of time, and we found out that its Fourier transform is an imaginary and odd function of frequency. This is consistent with the result in Table 8.7.

5.

$$\boxed{\text{sgn}(t) = u_0(t) - u_0(-t) \Leftrightarrow \frac{2}{j\omega}} \quad (8.66)$$

where  $\text{sgn}(t)$  denotes the *signum function* shown in Figure 8.5.

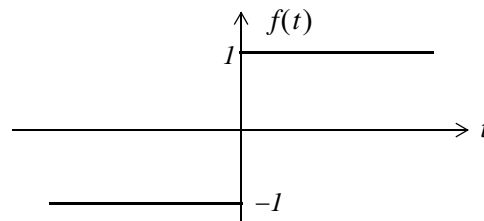


Figure 8.5. The signum function

**Proof:**

To derive the Fourier transform of the  $\text{sgn}(t)$  function, it is convenient to express it as an exponential that approaches a limit as shown in Figure 8.6.



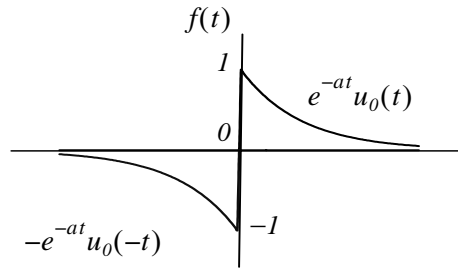


Figure 8.6. The signum function as an exponential approaching a limit

Then,

$$\text{sgn}(t) = \lim_{a \rightarrow 0} [e^{-at} u_0(t) - e^{at} u_0(-t)] \quad (8.67)$$

and

$$\begin{aligned} \mathcal{F}\{\text{sgn}(t)\} &= \lim_{a \rightarrow 0} \left[ \int_{-\infty}^0 -e^{at} e^{-j\omega t} dt + \int_0^{\infty} e^{-at} e^{-j\omega t} dt \right] \\ &= \lim_{a \rightarrow 0} \left[ \int_{-\infty}^0 -e^{(a-j\omega)t} dt + \int_0^{\infty} e^{-(a+j\omega)t} dt \right] \\ &= \lim_{a \rightarrow 0} \left[ \frac{1}{a-j\omega} + \frac{1}{a+j\omega} \right] = \frac{-1}{-j\omega} + \frac{1}{j\omega} = \frac{2}{j\omega} \end{aligned} \quad (8.68)$$

The  $f(t) \leftrightarrow F(\omega)$  correspondence is also shown in Figure 8.7.

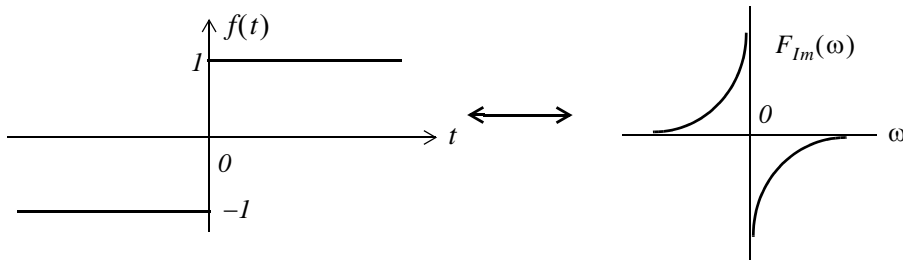


Figure 8.7. The Fourier transform of  $\text{sgn}(t)$

We now know that  $\text{sgn}(t)$  is real and odd function of time, and we found out that its Fourier transform is an imaginary and odd function of frequency. This is consistent with the result in Table 8.7.

6.

$$\boxed{u_0(t) \Leftrightarrow \pi\delta(\omega) + \frac{1}{j\omega}} \quad (8.69)$$

### Proof:

If we attempt to verify the transform pair of (8.69) by direct application of the Fourier transform definition, we will find that

$$F(\omega) = \int_{-\infty}^{\infty} f(t)e^{-j\omega t} dt = F(\omega) = \int_0^{\infty} e^{-j\omega t} dt = \left. \frac{e^{-j\omega t}}{-j\omega} \right|_0^{\infty} \quad (8.70)$$

but we cannot say that  $e^{-j\omega t}$  approaches 0 as  $t \rightarrow \infty$ , because  $e^{-j\omega t} = 1 \angle -\omega t$ , that is, the magnitude of  $e^{-j\omega t}$  is always unity, and its angle changes continuously as  $t$  assumes greater and greater values. Since the upper limit cannot be evaluated, the integral of (8.70) does not converge.

To work around this problem, we will make use of the  $sgn(t)$  function which we express as

$$\boxed{sgn(t) = 2u_0(t) - 1} \quad (8.71)$$

This expression is derived from the waveform of Figure 8.8 below.

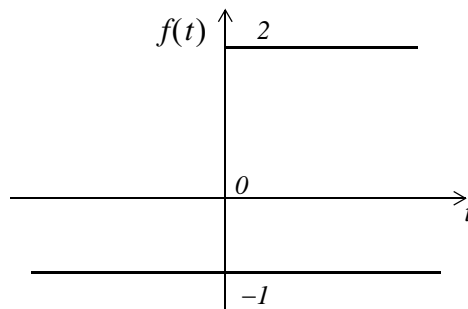


Figure 8.8. Alternate expression for the signum function

We rewrite (8.71) as

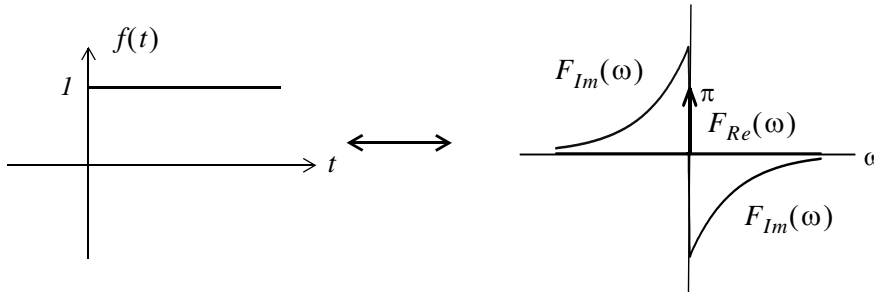
$$u_0(t) = \frac{1}{2}(1 + sgn(t)) = \frac{1}{2} + \frac{1}{2}sgn(t) \quad (8.72)$$

and since we know that  $1 \Leftrightarrow 2\pi\delta(\omega)$  and  $sgn(t) \Leftrightarrow 2/(j\omega)$ , by substitution of these into (8.72) we get

$$u_0(t) \Leftrightarrow \pi\delta(\omega) + \frac{1}{j\omega}$$

and this is the same as (8.69). This is a complex function in the frequency domain whose real part is  $\pi\delta(\omega)$  and imaginary part  $-1/\omega$ .

The  $f(t) \leftrightarrow F(\omega)$  correspondence is also shown in Figure 8.9.



*Figure 8.9. The Fourier transform of the unit step function*

Since  $u_0(t)$  is real but neither even nor odd function of time, its Fourier transform is a complex function of frequency as shown in (8.69). This is consistent with the result in Table 8.7.

Now, we will prove the time integration property of (8.49), that is,

$$\int_{-\infty}^t f(\tau) d\tau \Leftrightarrow \frac{F(\omega)}{j\omega} + \pi F(0)\delta(\omega)$$

as follows:

By the convolution integral,

$$u_0(t)*f(t) = \int_{-\infty}^t f(\tau)u_0(t-\tau)d\tau$$

and since  $u_0(t-\tau) = 1$  for  $t > \tau$ , and it is zero otherwise, the above integral reduces to

$$u_0(t)*f(t) = \int_{-\infty}^t f(\tau)d\tau$$

Next, by the time convolution property,

$$u_0(t)*f(t) \Leftrightarrow U_0(\omega) \cdot F(\omega)$$

and since

$$U_0(\omega) = \pi\delta(\omega) + \frac{1}{j\omega}$$

using these results and the sampling property of the delta function, we get

$$U_0(\omega) \cdot F(\omega) = \left(\pi\delta(\omega) + \frac{1}{j\omega}\right)F(\omega) = \pi\delta(\omega)F(\omega) + \frac{F(\omega)}{j\omega} = \pi F(0)\delta(\omega) + \frac{F(\omega)}{j\omega}$$

Thus, the time integration property is proved.

7.

$$e^{-j\omega_0 t} u_0(t) \Leftrightarrow \pi\delta(\omega - \omega_0) + \frac{1}{j(\omega - \omega_0)} \quad (8.73)$$

**Proof:**

From the Fourier transform of the unit step function,

$$u_0(t) \Leftrightarrow \pi\delta(\omega) + \frac{1}{j\omega}$$

and the frequency shifting property,

$$e^{j\omega_0 t} f(t) \Leftrightarrow F(\omega - \omega_0)$$

we obtain (8.73).

8.

$$\begin{aligned} u_0(t) \cos \omega_0 t &\Leftrightarrow \frac{\pi}{2} [\delta(\omega - \omega_0) + \delta(\omega + \omega_0)] + \frac{1}{2j(\omega - \omega_0)} + \frac{1}{2j(\omega + \omega_0)} \\ &\Leftrightarrow \frac{\pi}{2} [\delta(\omega - \omega_0) + \delta(\omega + \omega_0)] + \frac{j\omega}{\omega_0^2 - \omega^2} \end{aligned} \quad (8.74)$$

**Proof:**

We first express the cosine function as

$$\cos \omega_0 t = \frac{1}{2}(e^{j\omega_0 t} + e^{-j\omega_0 t})$$

From (8.73),

$$e^{-j\omega_0 t} u_0(t) \Leftrightarrow \pi\delta(\omega - \omega_0) + \frac{1}{j(\omega - \omega_0)}$$

and

$$e^{j\omega_0 t} u_0(t) \Leftrightarrow \pi\delta(\omega + \omega_0) + \frac{1}{j(\omega + \omega_0)}$$

Now, using

$$u_0(t) \Leftrightarrow \pi\delta(\omega) + \frac{1}{j\omega}$$

we get (8.74).

9.

$$u_0(t) \sin \omega_0 t \Leftrightarrow \frac{\pi}{j2} [\delta(\omega - \omega_0) + \delta(\omega + \omega_0)] + \frac{\omega^2}{\omega_0^2 - \omega^2} \quad (8.75)$$

**Proof:**

We first express the sine function as

$$\sin \omega_0 t = \frac{1}{j2}(e^{j\omega_0 t} - e^{-j\omega_0 t})$$

From (8.73),

$$e^{-j\omega_0 t} u_0(t) \Leftrightarrow \pi \delta(\omega - \omega_0) + \frac{1}{j(\omega - \omega_0)}$$

and

$$e^{j\omega_0 t} u_0(t) \Leftrightarrow \pi \delta(\omega + \omega_0) + \frac{1}{j(\omega + \omega_0)}$$

Using

$$u_0(t) \Leftrightarrow \pi \delta(\omega) + \frac{1}{j\omega}$$

we obtain (8.75).

### 8.5 Finding the Fourier Transform from Laplace Transform

If a time function  $f(t)$  is zero for  $t \leq 0$ , we can obtain the Fourier transform of  $f(t)$  from the one-sided Laplace transform of  $f(t)$  by substitution of  $s$  with  $j\omega$ .

**Example 8.1**

It is known that  $\mathcal{L} [e^{-\alpha t} u_0(t)] = \frac{1}{s + \alpha}$ . Compute  $\mathcal{F} \{e^{-\alpha t} u_0(t)\}$ .

**Solution:**

$$\mathcal{F} \{e^{-\alpha t} u_0(t)\} = \mathcal{L} [e^{-\alpha t} u_0(t)] \Big|_{s=j\omega} = \frac{1}{s + \alpha} \Big|_{s=j\omega} = \frac{1}{j\omega + \alpha}$$

Thus, we have obtained the following Fourier transform pair.

$$\boxed{e^{-\alpha t} u_0(t) \Leftrightarrow \frac{1}{j\omega + \alpha}} \tag{8.76}$$

**Example 8.2**

It is known that

$$\mathcal{L} [(e^{-\alpha t} \cos \omega_0 t) u_0(t)] = \frac{s + \alpha}{(s + \alpha)^2 + \omega_0^2}$$

---

## Chapter 8 The Fourier Transform

---

Compute  $\mathcal{F}\{(e^{-\alpha t} \cos \omega_0 t)u_0(t)\}$

**Solution:**

$$\begin{aligned}\mathcal{F}\{(e^{-\alpha t} \cos \omega_0 t)u_0(t)\} &= \mathcal{L}\{(e^{-\alpha t} \cos \omega_0 t)u_0(t)\}\Big|_{s=j\omega} \\ &= \frac{s + \alpha}{(s + \alpha)^2 + \omega_0^2}\Big|_{s=j\omega} = \frac{j\omega + \alpha}{(j\omega + \alpha)^2 + \omega_0^2}\end{aligned}$$

Thus, we have obtained the following Fourier transform pair.

$$\boxed{(e^{-\alpha t} \cos \omega_0 t)u_0(t) \Leftrightarrow \frac{j\omega + \alpha}{(j\omega + \alpha)^2 + \omega_0^2}} \quad (8.77)$$

We can also find the Fourier transform of a time function  $f(t)$  that has non-zero values for  $t < 0$ , and it is zero for all  $t > 0$ . But because the one-sided Laplace transform does not exist for  $t < 0$ , we must first express the negative time function in the  $t > 0$  domain, and compute the one-sided Laplace transform. Then, the Fourier transform of  $f(t)$  can be found by substituting  $s$  with  $-j\omega$ . In other words, when  $f(t) = 0$  for  $t \geq 0$ , and  $f(t) \neq 0$  for  $t < 0$ , we use the substitution

$$\boxed{\mathcal{F}\{f(t)\} = \mathcal{L}\{f(-t)\}\Big|_{s=-j\omega}} \quad (8.78)$$

### Example 8.3

Compute the Fourier transform of  $f(t) = e^{-a|t|}$

- using the Fourier transform definition
- by substitution into the Laplace transform equivalent

**Solution:**

- Using the Fourier transform definition, we get

$$\begin{aligned}\mathcal{F}\{e^{-a|t|}\} &= \int_{-\infty}^0 e^{at} e^{-j\omega t} dt + \int_0^{\infty} e^{-at} e^{-j\omega t} dt = \int_{-\infty}^0 e^{(a-j\omega)t} dt + \int_0^{\infty} e^{-(a+j\omega)t} dt \\ &= \frac{1}{a-j\omega} + \frac{1}{a+j\omega} = \frac{2}{\omega^2 + a^2}\end{aligned}$$

and thus we have the transform pair

$$\boxed{e^{-a|t|} \Leftrightarrow \frac{2}{\omega^2 + a^2}} \quad (8.79)$$

b. By substitution into the Laplace transform equivalent, we get

$$\begin{aligned} \mathcal{F}\{e^{-a|t|}\} &= \mathcal{L}[e^{-at}]|_{s=j\omega} + \mathcal{L}[e^{at}]|_{s=-j\omega} = \frac{1}{s+a}|_{s=j\omega} + \frac{1}{s+a}|_{s=-j\omega} \\ &= \frac{1}{j\omega+a} + \frac{1}{-j\omega+a} = \frac{2}{\omega^2+a^2} \end{aligned}$$

and this result is the same as (8.79).

We observe that since  $f(t)$  is real and even,  $F(\omega)$  is also real and even.

## 8.6 Fourier Transforms of Common Waveforms

In this section, we will derive the Fourier transform of some common time domain waveforms.

### Example 8.4

Derive the Fourier transform of the pulse

$$f(t) = A[u_0(t+T) - u_0(t-T)] \quad (8.80)$$

#### Solution:

The pulse of (8.80) is shown in Figure 8.10.

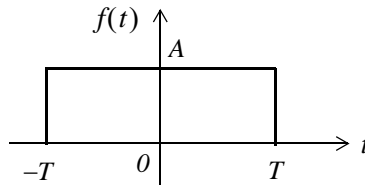


Figure 8.10. Pulse for Example 8.4

Using the definition of the Fourier transform, we get

$$\begin{aligned} F(\omega) &= \int_{-\infty}^{\infty} f(t)e^{-j\omega t} dt = \int_{-T}^T Ae^{-j\omega t} dt = \frac{Ae^{-j\omega t}}{-j\omega} \Big|_{-T}^T \\ &= \frac{Ae^{-j\omega t}}{j\omega} \Big|_T^{-T} = \frac{A(e^{j\omega T} - e^{-j\omega T})}{j\omega} = 2A \frac{\sin \omega T}{\omega} = 2AT \frac{\sin \omega T}{\omega T} \end{aligned}$$

## Chapter 8 The Fourier Transform

We observe that the transform of this pulse has the  $(\sin x)/x$  form, and has its maximum value  $2AT$  at  $\omega T = 0^*$ .

Thus, we have the waveform pair

$$A[u_0(t+T) - u_0(t-T)] \Leftrightarrow 2AT \frac{\sin \omega T}{\omega T} \quad (8.81)$$

The  $f(t) \leftrightarrow F(\omega)$  correspondence is also shown in Figure 8.11, where we observe that the  $\omega$  axis crossings occur at values of  $\omega T = \pm n\pi$  where  $n$  is an integer.

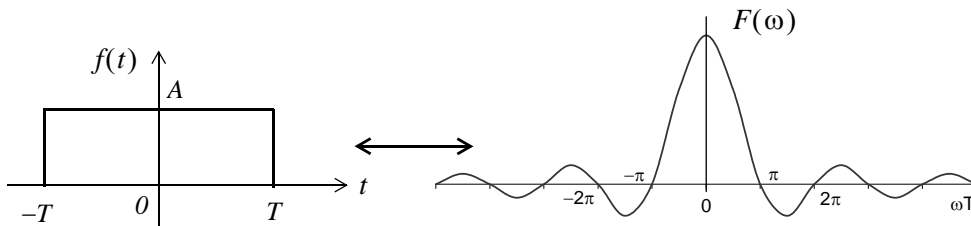


Figure 8.11. Fourier transform of  $f(t) = A[u_0(t+T) - u_0(t-T)]$

We also observe that since  $f(t)$  is real and even,  $F(\omega)$  is also real and even.

### Example 8.5

Derive the Fourier transform of the pulse of Figure 8.12.



Figure 8.12. Pulse for Example 8.5

### Solution:

The expression for the given pulse is

$$f(t) = A[u_0(t) - u_0(t-2T)] \quad (8.82)$$

---

\* We recall that  $\lim_{x \rightarrow 0} \frac{\sin x}{x} = 1$



Using the definition of the Fourier transform, we get

$$F(\omega) = \int_{-\infty}^{\infty} f(t)e^{-j\omega t} dt = \int_0^{2T} Ae^{-j\omega t} dt = \left. \frac{Ae^{-j\omega t}}{-j\omega} \right|_0^{2T} = \left. \frac{Ae^{-j\omega t}}{j\omega} \right|_{2T}^0 = \frac{A(1 - e^{-j\omega 2T})}{j\omega}$$

and making the substitutions

$$\begin{aligned} 1 &= e^{j\omega T} \cdot e^{-j\omega T} \\ e^{-j\omega 2T} &= e^{-j\omega T} \cdot e^{-j\omega T} \end{aligned} \tag{8.83}$$

we get

$$F(\omega) = \frac{Ae^{-j\omega T}}{\omega} \left( \frac{e^{j\omega T} - e^{-j\omega T}}{j} \right) = 2Ae^{-j\omega T} \left( \frac{\sin \omega T}{\omega} \right) = 2ATe^{-j\omega T} \left( \frac{\sin \omega T}{\omega T} \right) \tag{8.84}$$

### Alternate Solution:

We can obtain the Fourier transform of (8.82) using the time shifting property, i.e.,

$$f(t - t_0) \Leftrightarrow F(\omega)e^{-j\omega t_0}$$

and the result of Example 8.4. Thus, multiplying  $2AT \frac{\sin \omega T}{\omega T}$  by  $e^{-j\omega T}$ , we obtain (8.84).

We observe that  $F(\omega)$  is complex\* since  $f(t)$  is neither an even nor an odd function.

### Example 8.6

Derive the Fourier transform of the waveform of Figure 8.13.

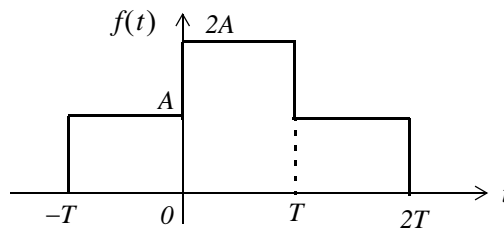


Figure 8.13. Waveform for Example 8.6

### Solution:

The given waveform can be expressed as

$$f(t) = A[u_0(t + T) + u_0(t) - u_0(t - T) - u_0(t - 2T)] \tag{8.85}$$

\* We recall that  $e^{-j\omega T}$  consists of a real and an imaginary part.

## Chapter 8 The Fourier Transform

and this is precisely the sum of the waveforms of Examples 8.4 and 8.5. We also observe that this waveform is obtained by the graphical addition of the waveforms of Figures 8.10 and 8.12. Therefore, we will apply the linearity property to obtain the Fourier transform of this waveform.

We denote the transforms of Examples 8.4 and 8.5 as  $F_1(\omega)$  and  $F_2(\omega)$  respectively, and we get

$$\begin{aligned}
 F(\omega) &= F_1(\omega) + F_2(\omega) = 2AT \frac{\sin \omega T}{\omega T} + 2AT e^{-j\omega T} \left( \frac{\sin \omega T}{\omega T} \right) \\
 &= 2AT(1 + e^{-j\omega T}) \frac{\sin \omega T}{\omega T} = 2AT e^{-j\frac{\omega T}{2}} \left( e^{j\frac{\omega T}{2}} + e^{-j\frac{\omega T}{2}} \right) \frac{\sin \omega T}{\omega T} \\
 &= 4AT e^{-j\frac{\omega T}{2}} \cos \left( \frac{\omega T}{2} \right) \frac{\sin \omega T}{\omega T}
 \end{aligned} \tag{8.86}$$

We observe that  $F(\omega)$  is complex since  $f(t)$  of (8.85) is neither an even nor an odd function.

### Example 8.7

Derive the Fourier transform of

$$f(t) = A \cos \omega_0 t [u_0(t+T) - u_0(t-T)] \tag{8.87}$$

#### Solution:

From (8.45),

$$f(t) \cos \omega_0 t \Leftrightarrow \frac{F(\omega - \omega_0) + F(\omega + \omega_0)}{2}$$

and from (8.81),

$$A[u_0(t+T) - u_0(t-T)] \Leftrightarrow 2AT \frac{\sin \omega T}{\omega T}$$

Then,

$$A \cos \omega_0 t [u_0(t+T) - u_0(t-T)] \Leftrightarrow AT \left[ \frac{\sin [(\omega - \omega_0)T]}{(\omega - \omega_0)T} + \frac{\sin [(\omega + \omega_0)T]}{(\omega + \omega_0)T} \right] \tag{8.88}$$

We also observe that since  $f(t)$  is real and even,  $F(\omega)$  is also real and even\*.

### Example 8.8

Derive the Fourier transform of a periodic time function with period  $T$ .

\* The  $\sin x/x$  is an even function.

**Solution:**

From the definition of the exponential Fourier series,

$$f(t) = \sum_{n=-\infty}^{\infty} C_n e^{jn\omega_0 t} \quad (8.89)$$

where  $\omega_0 = 2\pi/T$ , and recalling that

$$e^{j\omega_0 t} \Leftrightarrow 2\pi\delta(\omega - \omega_0)$$

we get

$$\begin{aligned} C_n e^{jn\omega_0 t} &\Leftrightarrow 2\pi C_n \delta(\omega - n\omega_0) \\ C_n e^{j2\omega_0 t} &\Leftrightarrow 2\pi C_2 \delta(\omega - 2\omega_0) \\ &\dots \\ C_n e^{jn\omega_0 t} &\Leftrightarrow 2\pi C_n \delta(\omega - n\omega_0) \end{aligned} \quad (8.90)$$

Taking the Fourier transform of (8.89), and applying the linearity property for the transforms of (8.90), we get

$$\mathcal{F}\{f(t)\} = \mathcal{F}\left\{\sum_{n=-\infty}^{\infty} C_n e^{jn\omega_0 t}\right\} = \sum_{n=-\infty}^{\infty} C_n \mathcal{F}\{e^{jn\omega_0 t}\} = 2\pi \sum_{n=-\infty}^{\infty} C_n \delta(\omega - n\omega_0) \quad (8.91)$$

The line spectrum of the Fourier transform of (8.91) is shown in Figure 8.14.

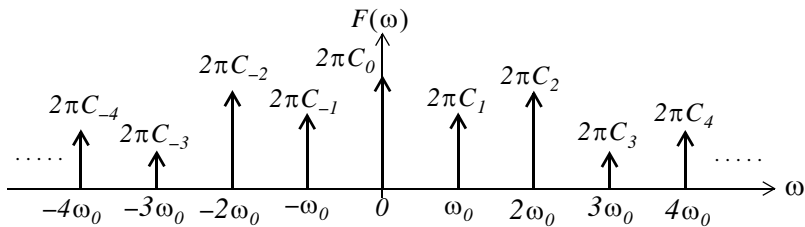


Figure 8.14. Line spectrum for relation (8.91)

The line spectrum of Figure 8.14 reveals that the Fourier transform of a periodic time function, consists of a train of equally spaced delta functions. The strength of each  $\delta(\omega - n\omega_0)$  is equal to  $2\pi$  times the coefficient  $C_n$ .

**Example 8.9**

Derive the Fourier transform of the periodic time function

$$f(t) = A \sum_{n=-\infty}^{\infty} \delta(t-nT) \quad (8.92)$$

**Solution:**

This function consists of a train of equally spaced delta functions in the time domain, and each has the same strength  $A$ , as shown in Figure 8.15.

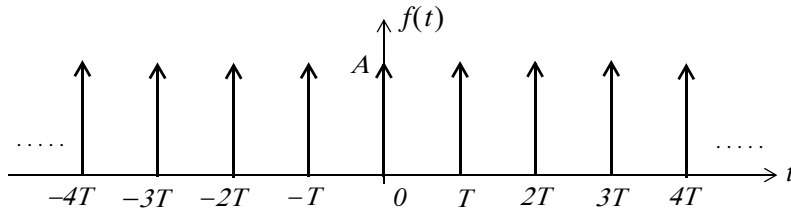


Figure 8.15. Waveform for Example 8.9

Since this is a periodic function of time, its Fourier transform is as derived in the previous example, that is, expression (8.91). Then,

$$F(\omega) = 2\pi \sum_{n=-\infty}^{\infty} C_n \delta(\omega - n\omega_0) \quad (8.93)$$

where  $\omega_0 = 2\pi/T$ , and  $C_n$  is found from the exponential Fourier series

$$C_n = \frac{1}{T} \int_{-T/2}^{T/2} f(t) e^{-jn\omega_0 t} dt \quad (8.94)$$

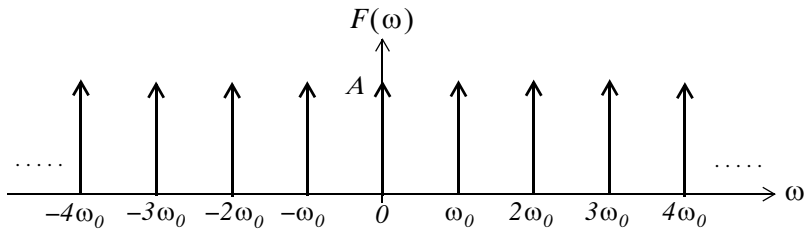
From the waveform of Figure 8.15, we observe that, within the limits of integration from  $-T/2$  to  $+T/2$ , there is only the impulse  $\delta(t)$  at the origin. Therefore, replacing  $f(t)$  with  $\delta(t)$  and using the sifting property of the delta function, we get

$$C_n = \frac{1}{T} \int_{-T/2}^{T/2} \delta(t) e^{-jn\omega_0 t} dt = \frac{1}{T} \quad (8.95)$$

Thus, we see that all  $C_n$  coefficients are equal to  $1/T$ , and (8.93) with  $\omega_0 = 2\pi/T$  reduces to

$$F(\omega) = \frac{2\pi}{T} \sum_{n=-\infty}^{\infty} \delta(\omega - n\omega_0) \quad (8.96)$$

The Fourier transform of the waveform of Figure 8.15 is shown in Figure 8.16.



*Figure 8.16. The Fourier transform of a train of equally spaced delta functions*

Figure 8.16 shows that the Fourier transform of a periodic train of equidistant delta functions in the time domain, is a periodic train of equally spaced delta functions in the frequency domain. This result is the basis for the proof of the *sampling theorem* which states that a time function  $f(t)$  can be uniquely determined from its values at a sequence of equidistant points in time.

## 8.7 Using MATLAB to Compute the Fourier Transform

MATLAB has the built-in **fourier** and **ifourier** functions to compute the Fourier transform and its inverse. Their descriptions and examples, can be displayed with the **help fourier** and **help ifourier** commands. In examples 8.10 through 8.13 we present some Fourier transform pairs, and how they are verified with MATLAB.

### Example 8.10

$$e^{-\frac{1}{2}t^2} \Leftrightarrow \sqrt{2\pi} e^{-\frac{1}{2}\omega^2} \quad (8.97)$$

This time function, like the time function of Example 8.9, is its own Fourier transform multiplied by the constant  $\sqrt{2\pi}$ .

```
syms t v w x; ft=exp(-t^2/2); Fw=fourier(ft)
Fw =
2^(1/2)*pi^(1/2)*exp(-1/2*w^2)
pretty(Fw)
      1/2    1/2                2
      2     pi    exp(- 1/2 w )
% Check answer by computing the Inverse using "ifourier"
ft=ifourier(Fw)
ft =
exp(-1/2*x^2)
```

---

## Chapter 8 The Fourier Transform

---

### Example 8.11

$$te^{-t^2} \Leftrightarrow \frac{1}{2}j\sqrt{\pi}\omega e^{-\frac{1}{4}\omega^2} \quad (8.98)$$

```
syms t v w x; ft=t*exp(-t^2); Fw=fourier(ft)
```

```
Fw =  
-1/2*i*pi^(1/2)*w*exp(-1/4*w^2)
```

```
pretty(Fw)
```

$$-\frac{1}{2}i\pi^{1/2}w\exp\left(-\frac{1}{4}w^2\right)$$

### Example 8.12

$$-e^{-t}u_0(t) + 3\delta(t) \Leftrightarrow -\frac{1}{j\omega + 1} + 3 \quad (8.99)$$

```
syms t v w x; fourier(sym('-exp(-t)*Heaviside(t)+3*Dirac(t)'))
```

```
ans =  
-1/(1+i*w)+3
```

### Example 8.13

$$u_0(t) \Leftrightarrow \pi\delta(\omega) + \frac{1}{j\omega} \quad (8.100)$$

```
syms t v w x; u0=sym('Heaviside(t)'); Fw=fourier(u0)
```

```
Fw =  
pi*Dirac(w) - i/w
```

We summarize the most common Fourier transform pairs in Table 8.9.

## 8.8 The System Function and Applications to Circuit Analysis

We recall from Chapter 6 that, by definition, the convolution integral is

$$h(t)*u(t) = \int_{-\infty}^{\infty} u(t-\tau)h(\tau)d\tau \quad (8.101)$$

We let

$$g(t) = f(t)*h(t) \quad (8.102)$$

and recalling that convolution in the time domain corresponds to multiplication in the frequency domain, we get

TABLE 8.9 Common Fourier transform pairs

$f(t)$	$F(\omega)$
$\delta(t)$	$1$
$\delta(t - t_0)$	$e^{-j\omega t_0}$
$1$	$2\pi\delta(\omega)$
$e^{-j\omega t_0}$	$2\pi\delta(\omega - \omega_0)$
$\text{sgn}(t)$	$2/(j\omega)$
$u_0(t)$	$\frac{1}{j\omega} + \pi\delta(\omega)$
$\cos\omega_0 t$	$\pi[\delta(\omega - \omega_0) + \delta(\omega + \omega_0)]$
$\sin\omega_0 t$	$j\pi[\delta(\omega - \omega_0) - \delta(\omega + \omega_0)]$
$e^{-at}u_0(t)$ $a > 0$	$\frac{1}{j\omega + a}$ $a > 0$
$te^{-at}u_0(t)$ $a > 0$	$\frac{1}{(j\omega + a)^2}$ $a > 0$
$e^{-at}\cos\omega_0 t u_0(t)$ $a > 0$	$\frac{j\omega + a}{(j\omega + a)^2 + \omega^2}$ $a > 0$
$e^{-at}\sin\omega_0 t u_0(t)$ $a > 0$	$\frac{\omega}{(j\omega + a)^2 + \omega^2}$ $a > 0$
$A[u_0(t + T) - u_0(t - T)]$	$2AT \frac{\sin\omega T}{\omega T}$

$$f(t)*h(t) = g(t) \Leftrightarrow G(\omega) = F(\omega) \cdot H(\omega) \tag{8.103}$$

We call  $H(\omega)$  the *system function*. From (8.103), we see that the system function  $H(\omega)$  and the impulse response  $h(t)$  form the Fourier transform pair

$$\boxed{h(t) \Leftrightarrow H(\omega)} \quad (8.104)$$

Therefore, if we know the impulse response  $h(t)$ , we can compute the response  $g(t)$  of any input  $f(t)$ , by multiplication of the Fourier transforms  $H(\omega)$  and  $F(\omega)$  to obtain  $G(\omega)$ . Then, we take the Inverse Fourier transform of  $G(\omega)$  to obtain the response  $g(t)$ .

**Example 8.14**

For the linear circuit of Figure 8.17 (a) below, it is known that the impulse response is as shown in (b). Use the Fourier transform method to compute the response  $g(t)$  when the input  $f(t)$  is as shown in (c).

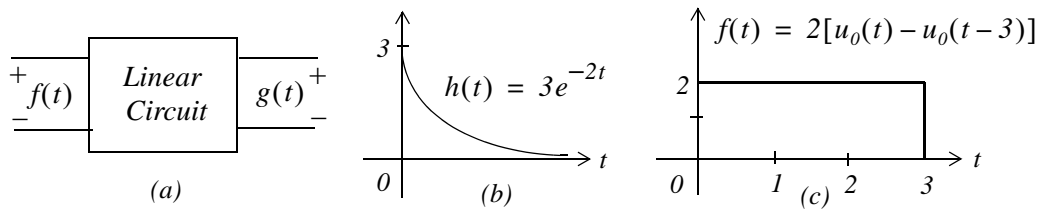


Figure 8.17. Figure for Example 8.14.

**Solution:**

To facilitate the computations, we denote the input as  $f(t) = f_1(t) + f_2(t)$  where

$$f_1(t) = 2u_0(t)$$

and

$$f_2(t) = -2u_0(t-3)$$

The system function  $H(\omega)$  is the Fourier transform of the impulse response  $h(t)$ . Thus,

$$\mathcal{F}\{h(t)\} = H(\omega) = \frac{3}{j\omega + 2}$$

Let  $F_1(\omega)$  be the Fourier transform of  $f_1(t)$ , that is,

$$\mathcal{F}\{f_1(t)\} = F_1(\omega) = 2\left(\pi\delta(\omega) + \frac{1}{j\omega}\right)$$

Then,

$$G_1(\omega) = H(\omega) \cdot F_1(\omega) = \frac{3}{j\omega + 2} \cdot 2\left(\pi\delta(\omega) + \frac{1}{j\omega}\right)$$

or



$$G_I(\omega) = \frac{6\pi}{j\omega + 2}\delta(\omega) + \frac{3}{j\omega(j\omega + 2)} \quad (8.105)$$

To evaluate the first term of (8.105), we apply the sampling property of the delta function, i.e.,

$$X(\omega) \cdot \delta(\omega) = X(0) \cdot \delta(\omega)$$

and this term reduces to  $3\pi\delta(\omega)$  or  $1.5[2\pi\delta(\omega)]$ . Since  $1 \Leftrightarrow 2\pi\delta(\omega)$ , the Inverse Fourier transform of this term is

$$\mathcal{F}^{-1}\{1.5[2\pi\delta(\omega)]\} = 1.5 \quad (8.106)$$

To find the Inverse Fourier transform of the second term in (8.105), we use partial fraction expansion. Thus,

$$\frac{3}{j\omega(j\omega + 2)} = \frac{1.5}{j\omega} - \frac{1.5}{(j\omega + 2)}$$

and therefore,

$$g_I(t) = 1.5 + \mathcal{F}^{-1}\left\{\frac{1.5}{j\omega} - \frac{1.5}{(j\omega + 2)}\right\} = 1.5 + \mathcal{F}^{-1}\left\{0.75\frac{2}{j\omega} - \frac{1.5}{(j\omega + 2)}\right\}$$

or

$$\begin{aligned} g_I(t) &= 1.5 + 0.75 \operatorname{sgn}(t) - 1.5e^{-2t}u_0(t) \\ &= 1.5 + 0.75[2u_0(t) - 1] - 1.5e^{-2t}u_0(t) = 0.75 + 1.5(1 - e^{-2t})u_0(t) \end{aligned} \quad (8.107)$$

Next, we denote the response due to the second term of the input as  $g_2(t)$ , and replacing  $u_0(t)$  in (8.107) with  $u_0(t - 3)$ , we get

$$g_2(t) = 0.75 + 1.5(1 - e^{-2(t-3)})u_0(t-3) \quad (8.108)$$

Now, we combine (8.107) with (8.108), and we get

$$g(t) = g_I(t) - g_2(t)$$

or

$$g(t) = 1.5\{(1 - e^{-2t})u_0(t) - (1 - e^{-2(t-3)})u_0(t-3)\}$$

### Example 8.15

For the circuit of Figure 8.18, use the Fourier transform method, and the system function  $H(\omega)$  to compute  $v_L(t)$ . Assume  $i_L(0^-)$ .

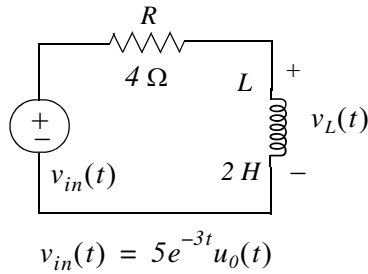


Figure 8.18. Circuit for Example 8.15

**Solution:**

We will find the system function  $H(\omega)$  from the phasor equivalent circuit shown in Figure 8.19.

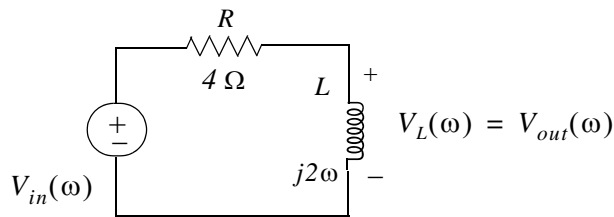


Figure 8.19. Phasor circuit for Example 8.15

From the phasor circuit of Figure 8.19,

$$V_{out}(\omega) = \frac{j2\omega}{4 + j2\omega} V_{in}(\omega) = \frac{j\omega}{j\omega + 2} V_{in}(\omega)$$

and the system function is

$$H(\omega) = \frac{V_{out}(\omega)}{V_{in}(\omega)} = \frac{j\omega}{j\omega + 2}$$

Also,

$$v_{in}(t) = 5e^{-3t}u_0(t) \Leftrightarrow V_{in}(\omega) = \frac{5}{j\omega + 3}$$

Then,

$$V_{out}(\omega) = H(\omega)V_{in}(\omega) = \frac{j\omega}{j\omega + 2} \cdot \frac{5}{j\omega + 3} = \frac{r_1}{j\omega + 2} + \frac{r_2}{j\omega + 3}$$

and by partial fraction expansion, we find that  $r_1 = -10$  and  $r_2 = 15$ . Thus,

$$V_{out}(\omega) = \frac{15}{j\omega + 3} - \frac{10}{j\omega + 2}$$

and

$$v_L(t) = v_{out}(t) = \mathcal{F}^{-1} \left\{ \frac{15}{j\omega + 3} - \frac{-10}{j\omega + 2} \right\} = 15e^{-3t} - 10e^{-2t}$$

or

$$v_L(t) = 5(3e^{-3t} - 2e^{-2t})u_0(t) \tag{8.109}$$

**Example 8.16**

For the linear circuit of Figure 8.20, the input-output relationship is

$$\frac{d}{dt}v_{out}(t) + 4v_{out}(t) = 10v_{in}(t) \tag{8.110}$$

where  $v_{in}(t)$  is as shown in Figure 8.20. Use the Fourier transform method, and the system function  $H(\omega)$  to compute the output  $v_{out}(t)$ .

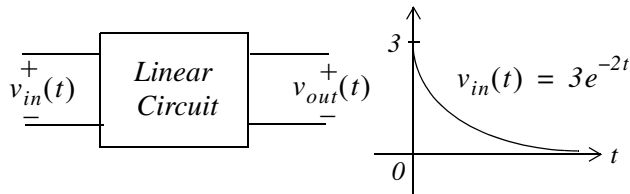


Figure 8.20. Network for Example 8.16

**Solution:**

Taking the Fourier transform of both sides of (8.110), and recalling that

$$\frac{d^n}{dt^n} f(t) \Leftrightarrow (j\omega)^n F(\omega)$$

we get,

$$j\omega V_{out}(\omega) + 4V_{out}(\omega) = 10V_{in}(\omega)$$

or

$$(j\omega + 4)V_{out}(\omega) = 10V_{in}(\omega)$$

and thus,

$$H(\omega) = \frac{V_{out}(\omega)}{V_{in}(\omega)} = \frac{10}{j\omega + 4} \tag{8.111}$$

Also,

$$V_{in}(\omega) = \mathcal{F} \{v_{in}(t)\} = \mathcal{F} (3e^{-2t}u_0(t)) = \frac{3}{j\omega + 2} \tag{8.112}$$

and

$$V_{out}(\omega) = H(\omega) \cdot V_{in}(\omega) = \frac{10}{j\omega + 4} \cdot \frac{3}{j\omega + 2} = \frac{r_1}{j\omega + 4} + \frac{r_2}{j\omega + 2}$$

By partial fraction expansion, we find that  $r_1 = -15$  and  $r_2 = 15$ . Then,

$$V_{out}(\omega) = \frac{15}{j\omega + 2} + \frac{-15}{j\omega + 4} \quad (8.113)$$

Therefore,

$$v_{out}(t) = \mathcal{F}^{-1} \left\{ \frac{15}{j\omega + 2} + \frac{-15}{j\omega + 4} \right\} = 15(e^{-2t} - e^{-4t})u_0(t) \quad (8.114)$$

### Example 8.17

The voltage across an  $1 \Omega$  resistor is known to be  $v_R(t) = 3e^{-2t}u_0(t)$ . Compute the energy dissipated in this resistor for  $0 < t < \infty$ , and verify the result by application of Parseval's theorem.

#### Solution:

The instantaneous power absorbed by the resistor is

$$p_R = v_R^2 / 1 = v_R^2 = 9e^{-4t}u_0(t) \quad (8.115)$$

and thus, the energy is

$$W_R = \int_0^\infty v_R^2 dt = \int_0^\infty 9e^{-4t} dt = 9 \frac{e^{-4t}}{-4} \Big|_0^\infty = \frac{9}{4} e^{-4t} \Big|_0^\infty = 2.25 \text{ joules} \quad (8.116)$$

Parseval's theorem states that

$$\int_{-\infty}^\infty |f(t)|^2 dt = \frac{1}{2\pi} \int_{-\infty}^\infty |F(\omega)|^2 d\omega \quad (8.117)$$

Since

$$F(\omega) = \mathcal{F} \{ 3e^{-2t}u_0(t) \} = \frac{3}{j\omega + 2} \quad (8.118)$$

and

$$|F(\omega)|^2 = F(\omega) \cdot F^*(\omega) = \frac{9}{\omega^2 + 2^2} \quad (8.119)$$

by substitution into the right integral of (8.117) we get

$$W_R = \frac{I}{2\pi} \int_{-\infty}^{\infty} \frac{9}{\omega^2 + 2^2} d\omega \quad (8.120)$$

We observe that the integrand of (8.120) is an even function of  $\omega$ ; therefore, we can multiply the integral by 2, and integrate from 0 to  $\infty$ . Then,

$$W_R = \frac{2}{2\pi} \int_0^{\infty} \frac{9}{\omega^2 + 2^2} d\omega = \frac{9}{\pi} \int_0^{\infty} \frac{1}{\omega^2 + 2^2} d\omega \quad (8.121)$$

From tables of integrals,

$$\int \frac{1}{a^2 + x^2} dx = \frac{1}{a} \operatorname{atan} \frac{x}{a} + C$$

Thus,

$$W_R = \frac{9}{\pi} \left( \frac{1}{2} \operatorname{atan} \frac{\omega}{2} \right) \Bigg|_0^{\infty} = \frac{9}{2\pi} \cdot \frac{\pi}{2} = 2.25 \text{ joules} \quad (8.122)$$

We observe that (8.122) is in agreement with (8.116).

### 8.9 Summary

- The Fourier transform is defined as

$$F(\omega) = \int_{-\infty}^{\infty} f(t)e^{-j\omega t} dt$$

- The Inverse Fourier transform is defined as

$$f(t) = \frac{1}{2\pi} \int_{-\infty}^{\infty} F(\omega)e^{j\omega t} d\omega$$

- The Fourier transform is, in general, a complex function. We can express it as the sum of its real and imaginary components, or in exponential form as

$$F(\omega) = \text{Re}\{F(\omega)\} + j\text{Im}\{F(\omega)\} = |F(\omega)|e^{j\varphi(\omega)}$$

- We often use the following notations to express the Fourier transform and its inverse.

$$\mathcal{F}\{f(t)\} = F(\omega)$$

$$\mathcal{F}^{-1}\{F(\omega)\} = f(t)$$

- If  $f(t)$  is real,  $F(\omega)$  is, in general, complex.
- If  $f(t)$  is real and even,  $F(\omega)$  is also real and even.
- If  $f(t)$  is real and odd,  $F(\omega)$  is imaginary and odd.
- If  $f(t)$  is imaginary,  $F(\omega)$  is, in general, complex.
- If  $f(t)$  is imaginary and even,  $F(\omega)$  is also imaginary and even.
- If  $f(t)$  is imaginary and odd,  $F(\omega)$  is real and odd.
- If  $F(-\omega) = F^*(\omega)$ ,  $f(t)$  is real.
- The linearity property states that

$$a_1f_1(t) + a_2f_2(t) + \dots + a_nf_n(t) \Leftrightarrow a_1F_1(\omega) + a_2F_2(\omega) + \dots + a_nF_n(\omega)$$

- The symmetry property states that

$$F(t) \Leftrightarrow 2\pi f(-\omega)$$

- The scaling property states that

$$f(at) \Leftrightarrow \frac{1}{|a|}F\left(\frac{\omega}{a}\right)$$

- The time shifting property states that

$$f(t - t_0) \Leftrightarrow F(\omega)e^{-j\omega t_0}$$

- The frequency shifting property states that

$$e^{j\omega_0 t} f(t) \Leftrightarrow F(\omega - \omega_0)$$

- The Fourier transforms of the modulated signals  $f(t)\cos\omega_0 t$  and  $f(t)\sin\omega_0 t$  are

$$f(t)\cos\omega_0 t \Leftrightarrow \frac{F(\omega - \omega_0) + F(\omega + \omega_0)}{2}$$

$$f(t)\sin\omega_0 t \Leftrightarrow \frac{F(\omega - \omega_0) - F(\omega + \omega_0)}{j2}$$

- The time differentiation property states that

$$\frac{d^n}{dt^n} f(t) \Leftrightarrow (j\omega)^n F(\omega)$$

- The frequency differentiation property states that

$$(-jt)^n f(t) \Leftrightarrow \frac{d^n}{d\omega^n} F(\omega)$$

- The time integration property states that

$$\int_{-\infty}^t f(\tau) d\tau \Leftrightarrow \frac{F(\omega)}{j\omega} + \pi F(0)\delta(\omega)$$

- If  $F(\omega)$  is the Fourier transform of the complex function  $f(t)$ , then,

$$f^*(t) \Leftrightarrow F^*(-\omega)$$

- The time convolution property states that

$$f_1(t)*f_2(t) \Leftrightarrow F_1(\omega)F_2(\omega)$$

- The frequency convolution property states that

$$f_1(t)f_2(t) \Leftrightarrow \frac{1}{2\pi} F_1(\omega)*F_2(\omega)$$

- The area under a time function  $f(t)$  is equal to the value of its Fourier transform evaluated at  $\omega = 0$ . In other words,

## Chapter 8 The Fourier Transform

$$F(0) = \int_{-\infty}^{\infty} f(t) dt$$

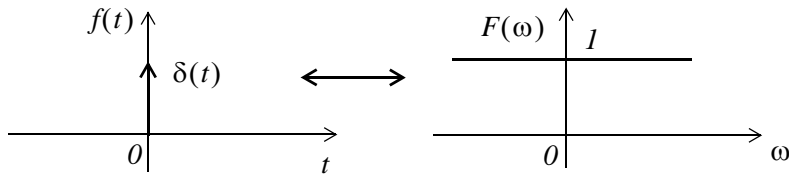
- The value of a time function  $f(t)$ , evaluated at  $t = 0$ , is equal to the area under its Fourier transform  $F(\omega)$  times  $1/2\pi$ . In other words,

$$f(0) = \frac{1}{2\pi} \int_{-\infty}^{\infty} F(\omega) d\omega$$

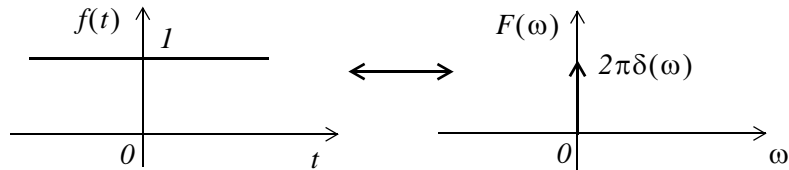
- Parseval's theorem states that

$$\int_{-\infty}^{\infty} |f(t)|^2 dt = \frac{1}{2\pi} \int_{-\infty}^{\infty} |F(\omega)|^2 d\omega$$

- The delta function and its Fourier transform are as shown below.



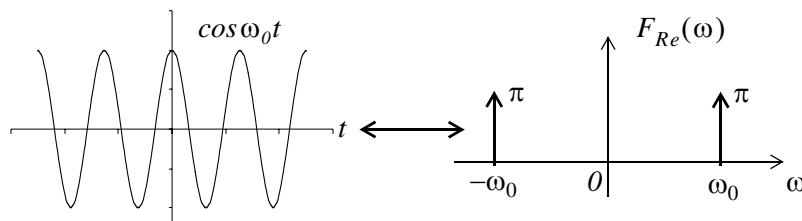
- The unity time function and its Fourier transform are as shown below.



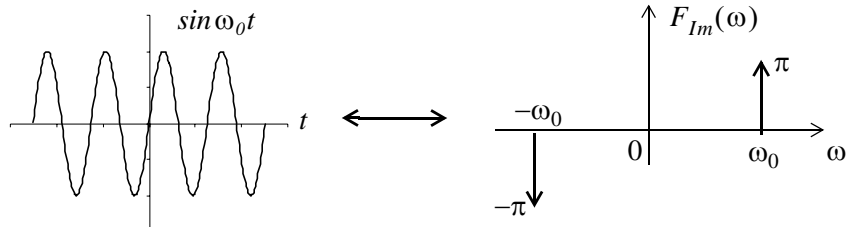
- The Fourier transform of the complex time function  $e^{j\omega_0 t}$  is as indicated below.

$$e^{j\omega_0 t} \Leftrightarrow 2\pi\delta(\omega - \omega_0)$$

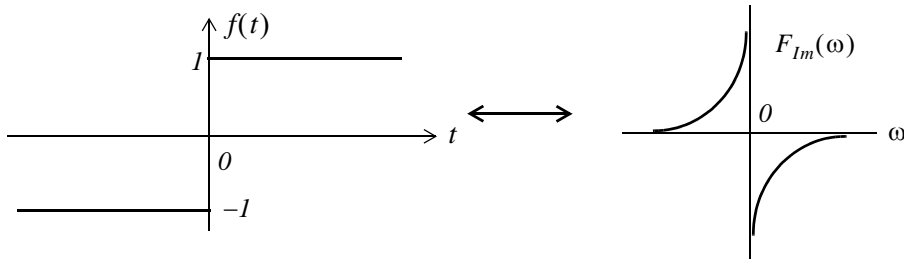
- The Fourier transforms of the time functions  $\cos\omega_0 t$ , and  $\sin\omega_0 t$  are as shown below.



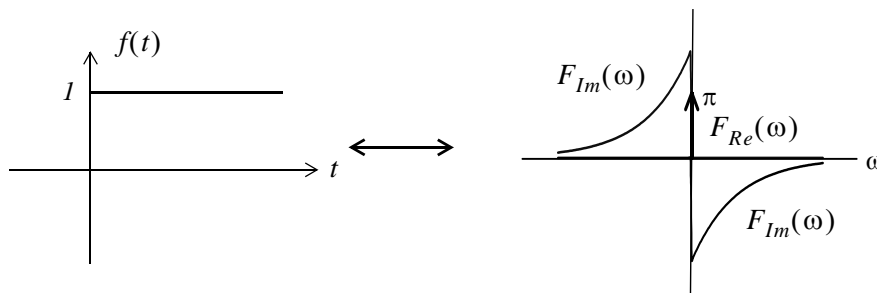




- The signum function and its Fourier transform are as shown below.



- The unit step function and its Fourier transform are as shown below.



- The Fourier transforms of  $e^{-j\omega_0 t} u_0(t)$ ,  $u_0(t) \cos \omega_0 t$ , and  $u_0(t) \sin \omega_0 t$  are as shown below.

$$e^{-j\omega_0 t} u_0(t) \Leftrightarrow \pi \delta(\omega - \omega_0) + \frac{1}{j(\omega - \omega_0)}$$

$$u_0(t) \cos \omega_0 t \Leftrightarrow \frac{\pi}{2} [\delta(\omega - \omega_0) + \delta(\omega + \omega_0)] + \frac{j\omega}{\omega_0^2 - \omega^2}$$

$$u_0(t) \sin \omega_0 t \Leftrightarrow \frac{\pi}{j2} [\delta(\omega - \omega_0) + \delta(\omega + \omega_0)] + \frac{\omega^2}{\omega_0^2 - \omega^2}$$

- If a time function  $f(t)$  is zero for  $t \leq 0$ , we can obtain the Fourier transform of  $f(t)$  from the one-sided Laplace transform of  $f(t)$  by substitution of  $s$  with  $j\omega$ .

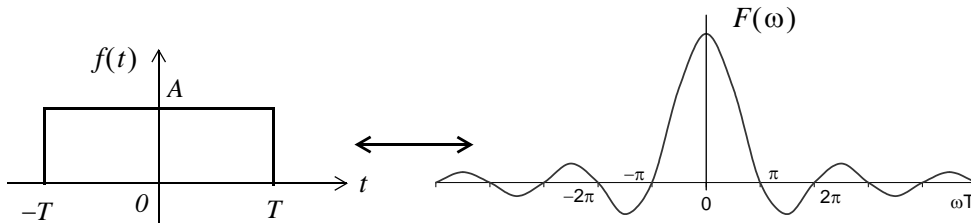
## Chapter 8 The Fourier Transform

- If a time function  $f(t) = 0$  for  $t \geq 0$ , and  $f(t) \neq 0$  for  $t < 0$ , we use the substitution

$$\mathcal{F}\{f(t)\} = \mathcal{L}[f(-t)]|_{s=-j\omega}$$

to obtain the Fourier transform of  $f(t)$  from the one-sided Laplace transform of  $f(t)$ .

- The pulse function  $f(t) = A[u_0(t+T) - u_0(t-T)]$  and its Fourier transform are as shown below.



- The Fourier transform of a periodic time function with period  $T$  is as shown below.

$$\mathcal{F}\{f(t)\} = \mathcal{F}\left\{\sum_{n=-\infty}^{\infty} C_n e^{jn\omega_0 t}\right\} = \sum_{n=-\infty}^{\infty} C_n \mathcal{F}\{e^{jn\omega_0 t}\} = 2\pi \sum_{n=-\infty}^{\infty} C_n \delta(\omega - n\omega_0)$$

- The Fourier transform of a periodic train of equidistant delta functions in the time domain, is a periodic train of equally spaced delta functions in the frequency domain.
- The system function  $H(\omega)$  and the impulse response  $h(t)$  form the Fourier transform pair

$$h(t) \Leftrightarrow H(\omega)$$

and

$$f(t)*h(t) = g(t) \Leftrightarrow G(\omega) = F(\omega) \cdot H(\omega)$$

## 8.10 Exercises

1. Show that

$$\int_{-\infty}^{\infty} u_0(t)\delta(t)dt = 1/2$$

2. Compute

$$\mathcal{F} \{te^{-at}u_0(t)\} \quad a > 0$$

3. Sketch the time and frequency waveforms of

$$f(t) = \cos\omega_0 t[u_0(t+T) - u_0(t-T)]$$

4. Derive the Fourier transform of

$$f(t) = A[u_0(t+3T) - u_0(t+T) + u_0(t-T) - u_0(t-3T)]$$

5. Derive the Fourier transform of

$$f(t) = \frac{A}{T}t[u_0(t+T) - u_0(t-T)]$$

6. Derive the Fourier transform of

$$f(t) = \left(\frac{A}{T}t + A\right)[u_0(t+T) - u_0(t)] + \left(-\frac{A}{T}t + A\right)\left[u_0(t) - u_0\left(t - \frac{T}{2}\right)\right]$$

7. For the circuit of Figure 8.21, use the Fourier transform method to compute  $v_C(t)$ .

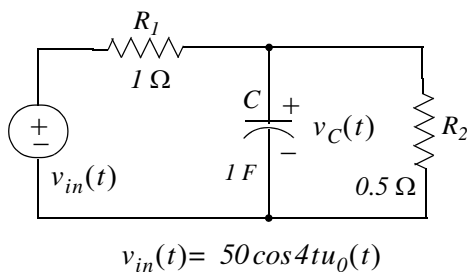


Figure 8.21. Circuit for Exercise 7

8. The input-output relationship in a certain network is

$$\frac{d^2}{dt^2}v_{out}(t) + 5\frac{d}{dt}v_{out}(t) + 6v_{out}(t) = 10v_{in}(t)$$

Use the Fourier transform method to compute  $v_{out}(t)$  given that  $v_{in}(t) = 2e^{-t}u_0(t)$ .

---

## Chapter 8 The Fourier Transform

---

9. In a bandpass filter, the lower and upper cutoff frequencies are  $f_1 = 2 \text{ Hz}$ , and  $f_2 = 6 \text{ Hz}$  respectively. Compute the  $I \Omega$  energy of the input, and the percentage that appears at the output, if the input signal is  $v_{in}(t) = 3e^{-2t}u_0(t)$  volts.
10. In Example 8.4, we derived the Fourier transform pair

$$A[u_0(t+T) - u_0(t-T)] \Leftrightarrow 2AT \frac{\sin \omega T}{\omega T}$$

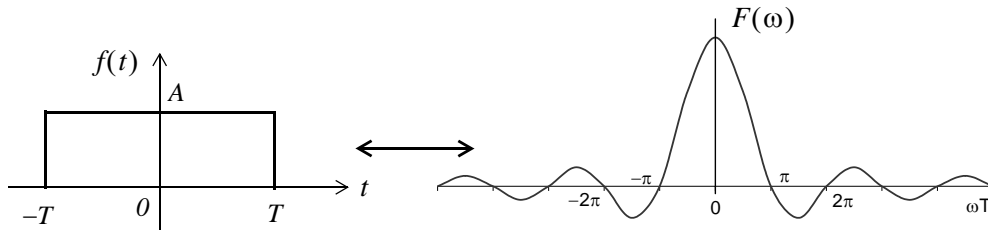


Figure 8.22. Figure for Exercise 10

Compute the percentage of the  $I \Omega$  energy of  $f(t)$  contained in the interval  $-\pi/T \leq \omega \leq \pi/T$  of  $F(\omega)$ .

## 8.11 Solutions to Exercises

1.

$$\int_{-\infty}^{\infty} u_0(t)\delta(t)dt = \int_{-\infty}^{\infty} u_0(t)\frac{d}{dt}u_0(t)dt = \int_{-\infty}^{\infty} u_0(t)d(u_0(t))$$

and since at  $t = +\infty$ ,  $u_0(t) = 1$  whereas at  $t = -\infty$ ,  $u_0(t) = 0$ , we replace the limits of integration with 1 and 0. Then,

$$\int_0^1 u_0(t)d(u_0(t)) = \frac{u_0^2(t)}{2}\Big|_0^1 = 1/2$$

2.

$$F(\omega) = \int_{-\infty}^{\infty} f(t)e^{-j\omega t}dt = \int_0^{\infty} te^{-at}e^{-j\omega t}dt = \int_0^{\infty} te^{-(j\omega+a)t}dt$$

From tables of integrals

$$\int xe^{ax}dx = \frac{e^{ax}}{a^2}(ax-1)$$

Then,

$$F(\omega) = \frac{e^{-(j\omega+a)t} \cdot [-(j\omega+a)t-1]}{(j\omega+a)^2}\Big|_0^{\infty} = \frac{[(j\omega+a)t+1]}{e^{(j\omega+a)t} \cdot (j\omega+a)^2}\Big|_{\infty}^0$$

With the upper limit of integration we get

$$F(\omega)\Big|_{t=0} = \frac{1}{(j\omega+a)^2}$$

To evaluate the lower limit of integration, we apply L'Hôpital's rule, i.e.,

$$\frac{[(j\omega+a)t+1]}{e^{(j\omega+a)t} \cdot (j\omega+a)^2}\Big|_{\infty} = \lim_{t \rightarrow \infty} \frac{\frac{d}{dt}[(j\omega+a)t+1]}{\frac{d}{dt}[e^{(j\omega+a)t} \cdot (j\omega+a)^2]} = \lim_{t \rightarrow \infty} \frac{(j\omega+a)}{(j\omega+a)e^{(j\omega+a)t} \cdot (j\omega+a)^2} = 0$$

and thus

$$F(\omega) = \frac{1}{(j\omega+a)^2}$$

Check:

$$F(\omega) = F(s)\Big|_{s=j\omega}$$

and since

$$te^{-at}u_0(t) \Leftrightarrow \frac{1}{(s+a)^2}$$

it follows that

$$F(\omega) = \frac{1}{(s+a)^2} \Big|_{s=j\omega} = \frac{1}{(j\omega+a)^2}$$

3.

From Example 8.7,

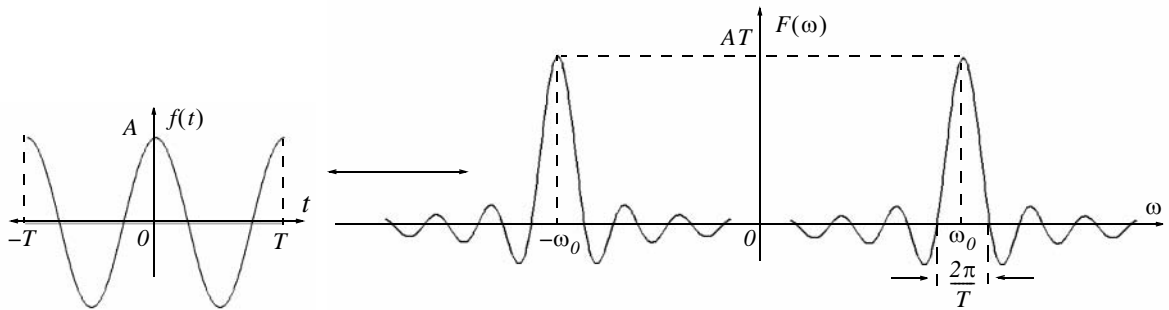
$$A \cos \omega_0 t [u_0(t+T) - u_0(t-T)] \Leftrightarrow AT \left[ \frac{\sin[(\omega - \omega_0)T]}{(\omega - \omega_0)T} + \frac{\sin[(\omega + \omega_0)T]}{(\omega + \omega_0)T} \right]$$

and using the MATLAB statements

```
fplot('cos(x)',[-2*pi 2*pi -1.2 1.2])
```

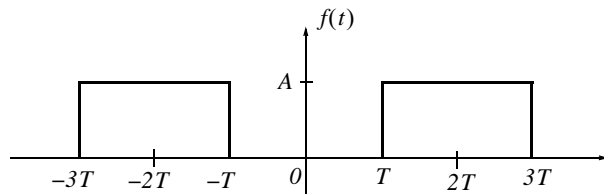
```
fplot('sin(x)./x',[-20 20 -0.4 1.2])
```

we obtain the plots below.



4.

$$f(t) = A[u_0(t+3T) - u_0(t+T) + u_0(t-T) - u_0(t-3T)]$$



From Example 8.4.

$$A[u_0(t+T) - u_0(t-T)] \Leftrightarrow 2AT \frac{\sin \omega T}{\omega T}$$

and from the time shifting property

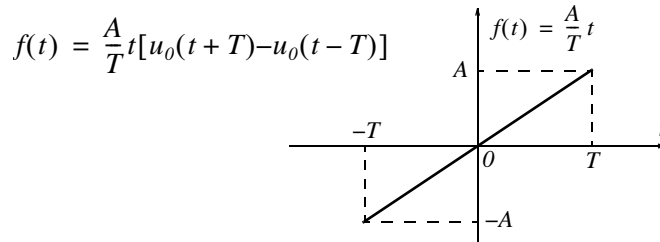
$$f(t - t_0) \Leftrightarrow F(\omega)e^{-j\omega t_0}$$

$$f(t) = A[u_0(t + 3T) - u_0(t + T) + u_0(t - T) - u_0(t - 3T)] \Leftrightarrow F(\omega) = 2AT \frac{\sin \omega T}{\omega T} \cdot (e^{j2\omega T} + e^{-j2\omega T})$$

or

$$F(\omega) = 4AT \frac{\sin \omega T}{\omega T} \cdot \left( \frac{e^{j2\omega T} + e^{-j2\omega T}}{2} \right) = 4AT \cos 2\omega T \frac{\sin \omega T}{\omega T}$$

5.



$$F(\omega) = \int_{-\infty}^{\infty} f(t)e^{-j\omega t} dt = \int_{-T}^T \frac{A}{T} t e^{-j\omega t} dt = \frac{A}{T} \int_{-T}^T t e^{-j\omega t} dt$$

From tables of integrals

$$\int x e^{ax} dx = \frac{e^{ax}}{a^2} (ax - 1)$$

Then,

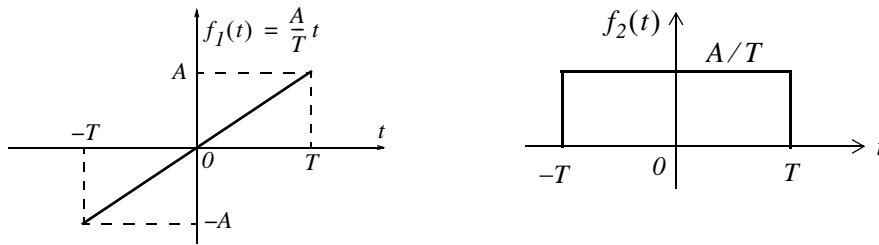
$$\begin{aligned} F(\omega) &= \frac{A}{T} \cdot \frac{e^{-j\omega t}}{(j\omega)^2} \cdot (-j\omega t - 1) \Bigg|_{-T}^T = \frac{A}{T} \cdot \frac{e^{-j\omega t}}{-\omega^2} \cdot (-j\omega t - 1) \Bigg|_{-T}^T = \frac{A}{T} \cdot \frac{e^{-j\omega t}}{-\omega^2} \cdot [-(j\omega t + 1)] \Bigg|_{-T}^T \\ &= \frac{A}{\omega^2 T} [e^{-j\omega T} \cdot (j\omega T + 1) - e^{j\omega T} \cdot (-j\omega T + 1)] \\ &= \frac{A}{\omega^2 T} (j\omega T \cdot e^{-j\omega T} + e^{-j\omega T} + j\omega T \cdot e^{j\omega T} - e^{j\omega T}) \\ &= \frac{A}{\omega^2 T} [j\omega T \cdot (e^{j\omega T} + e^{-j\omega T}) - (e^{j\omega T} - e^{-j\omega T})] \end{aligned}$$

and multiplying both the numerator and denominator by  $j2$  we get

$$F(\omega) = \frac{j2A}{\omega^2 T} \left[ \frac{j\omega T (e^{j\omega T} + e^{-j\omega T})}{j2} - \frac{(e^{j\omega T} - e^{-j\omega T})}{j2} \right] = \frac{j2A}{\omega^2 T} (\omega T \cos \omega T - \sin \omega T)$$

We observe that since  $f(t)$  is real and odd,  $F(\omega)$  is imaginary and odd.

## Alternate Solution:



The waveform of  $f_2(t)$  is the derivative of the waveform of  $f_1(t)$  and thus  $f_1(t) = \int f_2(t) dt$ . From Example 8.4,

$$f_2(t) \Leftrightarrow 2 \frac{A}{T} T \frac{\sin \omega T}{\omega T} = 2A \frac{\sin \omega T}{\omega T}$$

From the frequency differentiation property

$$(-jt)^n f(t) \Leftrightarrow \frac{d^n}{d\omega^n} F(\omega)$$

or

$$t^n f(t) \Leftrightarrow j^n \frac{d^n}{d\omega^n} F(\omega)$$

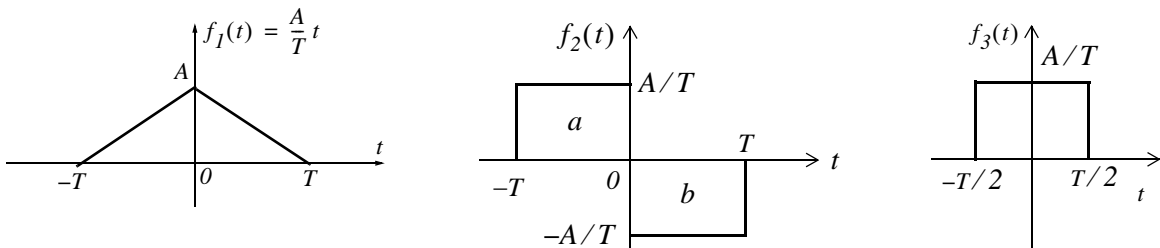
Then,

$$\begin{aligned} \mathcal{F}\{f_1(t) = \int f_2(t) dt\} &= \left( j \frac{d}{d\omega} \left( 2A \frac{\sin \omega T}{\omega T} \right) = j2A \frac{d}{d\omega} \left( \frac{\sin \omega T}{\omega T} \right) \right) \\ &= j2A \left[ \frac{(\omega T) T \cos \omega T - T(\sin \omega T)}{(\omega T)^2} \right] = \frac{j2A}{\omega^2 T} (\omega T \cos \omega T - \sin \omega T) \end{aligned}$$

6.

We denote the given waveform as  $f_1(t)$ , that is,

$$f_1(t) = \left( \frac{A}{T} t + A \right) [u_0(t+T) - u_0(t)] + \left( -\frac{A}{T} t + A \right) [u_0(t) - u_0\left(t - \frac{T}{2}\right)]$$





We observe that  $f_1(t)$  is the integral of  $f_2(t)$ . Therefore, we will find  $F_2(\omega)$  and by integration we will find  $F_1(\omega)$ .

We begin by finding the Fourier Transform of the pulse denoted as  $f_3(t)$ , and using  $F_3(\omega)$  and the time shifting and linearity properties, we will find  $F_2(\omega)$ .

$$\begin{aligned} F_3(\omega) &= \int_{-T/2}^{T/2} \frac{A}{T} e^{-j\omega t} dt = \frac{A}{T} \left( \frac{e^{-j\omega t}}{-j\omega} \right) \Big|_{-T/2}^{T/2} = \frac{A}{T} \left( \frac{e^{-j\omega T/2}}{-j\omega} - \frac{e^{j\omega T/2}}{-j\omega} \right) \\ &= \frac{A}{T} \left( \frac{e^{j\omega(T/2)} - e^{-j\omega(T/2)}}{j\omega} \right) = \frac{2A}{\omega T} \sin \frac{\omega T}{2} = A \frac{\sin(\omega T/2)}{\omega T/2} \end{aligned}$$

Using the time shifting property

$$f(t - t_0) \Leftrightarrow F(\omega) e^{-j\omega t_0}$$

the Fourier transform of the left pulse  $a$  of  $f_2(t)$  is

$$F_{2a}(\omega) = A \frac{\sin(\omega T/2)}{\omega T/2} \cdot e^{j\omega(T/2)}$$

Likewise, the Fourier transform of the right pulse  $b$  of  $f_2(t)$  is


$$F_{2b}(\omega) = -A \frac{\sin(\omega T/2)}{\omega T/2} \cdot e^{-j\omega(T/2)}$$

and using the linearity property we get

$$\begin{aligned} F_2(\omega) &= F_{2a}(\omega) + F_{2b}(\omega) = A \frac{\sin(\omega T/2)}{\omega T/2} \cdot (e^{j\omega(T/2)} - e^{-j\omega(T/2)}) \\ &= j2A \frac{\sin(\omega T/2)}{\omega T/2} \cdot \left( \frac{e^{j\omega(T/2)} - e^{-j\omega(T/2)}}{j2} \right) = j2A \frac{\sin^2(\omega T/2)}{\omega T/2} \end{aligned}$$

This  $\sin^2(x)/x$  curve is shown below and it was created with the following MATLAB code.

`fplot('sin(x./2).^2./x',[0 16*pi 0 0.5])`



## Chapter 8 The Fourier Transform

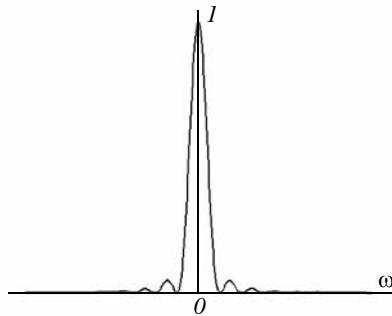
Now, we find  $F_1(\omega)$  of the triangular waveform of  $f_1(t)$  with the use of the integration property by multiplying  $F_2(\omega)$  by  $1/j\omega$ . Thus,

$$F_1(\omega) = (1/j\omega) \cdot F_2(\omega) = \frac{1}{j\omega} \cdot j2A \frac{\sin^2(\omega T/2)}{\omega T/2} = \frac{2A}{\omega} \cdot \frac{\sin^2(\omega T/2)}{\omega T/2} = \frac{2A}{\omega^2 T/2} \cdot \sin^2(\omega T/2)$$

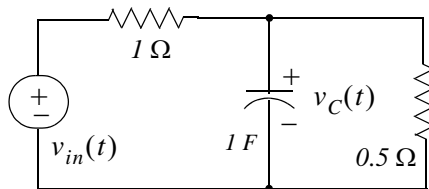
We can plot  $F_1(\omega)$  by letting  $T/2 = 1$ . Then,  $F_1(\omega)$  simplifies to the form  $K[(\sin x)/x]^2$

This curve is shown below and it was created with the following MATLAB code.

```
fplot('(sin(x)./x).^2',[-8*pi 8*pi 0 1])
```



7.



By KCL

$$\frac{v_C(t) - v_{in}(t)}{1} + 1 \cdot \frac{dv_C}{dt} + \frac{v_C(t)}{0.5} = 0$$

$$\frac{dv_C}{dt} + 3v_C = v_{in}$$

Taking the Fourier transform of both sides we get

$$j\omega V_C(\omega) + 3V_C(\omega) = V_{in}(\omega)$$

$$(j\omega + 3)V_C(\omega) = V_{in}(\omega)$$

and since  $V_{out}(\omega) = V_C(\omega)$

$$(j\omega + 3)V_{out}(\omega) = V_{in}(\omega)$$

and

$$H(\omega) = \frac{V_{out}(\omega)}{V_{in}(\omega)} = \frac{1}{j\omega + 3}$$

where

$$v_{in}(t) = 50 \cos 4t u_0(t) \Leftrightarrow V_{in}(\omega) = 50\pi[\delta(\omega - 4) + \delta(\omega + 4)]$$

Then,

$$V_{out}(\omega) = V_C(\omega) = H(\omega) \cdot V_{in}(\omega) = \frac{1}{j\omega + 3} \cdot 50\pi[\delta(\omega - 4) + \delta(\omega + 4)]$$

and

$$\begin{aligned} v_C(t) &= \mathcal{F}^{-1}\{V_C(\omega)\} = \frac{1}{2\pi} \int_{-\infty}^{\infty} \frac{50\pi[\delta(\omega - 4) + \delta(\omega + 4)]}{j\omega + 3} \cdot e^{j\omega t} d\omega \\ &= 25 \int_{-\infty}^{\infty} \frac{\delta(\omega - 4)}{j\omega + 3} \cdot e^{j\omega t} d\omega + 25 \int_{-\infty}^{\infty} \frac{\delta(\omega + 4)}{j\omega + 3} \cdot e^{j\omega t} d\omega \end{aligned}$$

Next, using the sifting property of  $\delta(\omega)$  we simplify the above to

$$\begin{aligned} v_C(t) &= 25 \left( \frac{e^{j4t}}{j4 + 3} + \frac{e^{-j4t}}{j4 + 3} \right) = 25 \left( \frac{e^{j4t}}{5e^{j53.1^\circ}} + \frac{e^{-j4t}}{5e^{-j53.1^\circ}} \right) = 5(e^{j4t} \cdot e^{-j53.1^\circ} + e^{-j4t} \cdot e^{j53.1^\circ}) \\ &= 10 \frac{e^{j(4t - 53.1^\circ)} + e^{-j(4t - 53.1^\circ)}}{2} = 10 \cos(4t - 53.1^\circ) \end{aligned}$$

8.

$$\frac{d^2}{dt^2} v_{out}(t) + 5 \frac{d}{dt} v_{out}(t) + 6 v_{out}(t) = 10 v_{in}(t) = 2e^{-t} u_0(t)$$

Taking the Fourier transform of both sides we get

$$[(j\omega)^2 + 5j\omega + 6]V_{out}(\omega) = 10V_{in}(\omega) = 10 \cdot \frac{2}{j\omega + 1}$$

$$[(j\omega + 2) \cdot (j\omega + 3)]V_{out}(\omega) = 10V_{in}(\omega) = \frac{20}{j\omega + 1}$$

$$V_{out}(\omega) = \frac{20}{(j\omega + 1) \cdot (j\omega + 2) \cdot (j\omega + 3)}$$

We use the following MATLAB code for partial fraction expansion where we let  $j\omega = s$ .

```
syms s; collect((s+1)*(s+2)*(s+3))
```

---

## Chapter 8 The Fourier Transform

---

```
ans =  
s^3+6*s^2+11*s+6  
  
num=[0 0 0 20]; den=[1 6 11 6]; [num,den]=residue(num,den); fprintf(' \n');...  
fprintf('r1 = %4.2f \t', num(1)); fprintf('p1 = %4.2f', den(1)); fprintf(' \n');...  
fprintf('r2 = %4.2f \t', num(2)); fprintf('p2 = %4.2f', den(2)); fprintf(' \n');...  
fprintf('r3 = %4.2f \t', num(3)); fprintf('p3 = %4.2f', den(3))  
  
r1 = 10.00 p1 = -3.00  
r2 = -20.00 p2 = -2.00  
r3 = 10.00 p3 = -1.00
```

Then,

$$V_{out}(\omega) = \frac{20}{(j\omega + 1) \cdot (j\omega + 2) \cdot (j\omega + 3)} + \frac{10}{(j\omega + 1)} + \frac{-20}{(j\omega + 2)} + \frac{10}{(j\omega + 3)}$$

and thus

$$\begin{aligned}v_{out}(t) &= \mathcal{F}^{-1}\{V_{out}(\omega)\} = 10e^{-t} - 20e^{-2t} + 10e^{-3t} \\ &= 10(e^{-t} - 2e^{-2t} + e^{-3t})u_0(t)\end{aligned}$$

9.

The input energy in joules is

$$\begin{aligned}W_{in} &= \int_{-\infty}^{\infty} |v_{in}(t)|^2 dt = \int_0^{\infty} |3e^{-2t}|^2 dt = \int_0^{\infty} |3e^{-2t}|^2 dt = \int_0^{\infty} 9e^{-4t} dt \\ &= \left. \frac{9e^{-4t}}{-4} \right|_0^{\infty} = \left. \frac{9e^{-4t}}{4} \right|_{\infty}^0 = \frac{9}{4} = 2.25 J\end{aligned}$$

and the Fourier transform  $F_{in}(\omega)$  of the input  $v_{in}(t)$  is

$$\mathcal{F}\{v_{in}(t)\} = \mathcal{F}\{3e^{-2t}u_0(t)\} = \frac{3}{j\omega + 2}$$

The energy at the output for the frequency interval  $2 \text{ Hz} \leq f \leq 6 \text{ Hz}$  or  $4\pi \text{ rad} \leq \omega \leq 12\pi \text{ rad}$  is

$$W_{out} = \frac{1}{2\pi} \int_{-\infty}^{\infty} |F(\omega)|^2 d\omega = \frac{1}{2\pi} \int_{-\infty}^{\infty} \left| \frac{3}{j\omega + 2} \right|^2 d\omega = \frac{1}{2\pi} \int_{4\pi}^{12\pi} \frac{9}{\omega^2 + 2^2} d\omega$$

and from tables of integrals

$$\int \frac{1}{x^2 + a^2} dx = \frac{1}{a} \operatorname{atan} \frac{x}{a}$$

Then,

$$W_{out} = \frac{9}{2\pi} \cdot \frac{1}{2} \operatorname{atan} \frac{\omega}{2} \Big|_{4\pi}^{12\pi} = \frac{9}{4\pi} \left( \operatorname{atan} \frac{12\pi}{2} - \operatorname{atan} \frac{4\pi}{2} \right) = \frac{9}{4\pi} (\operatorname{atan} 6\pi - \operatorname{atan} 2\pi)$$

`fprintf(' \n'); fprintf('atan(6*pi) = %4.2f \t', atan(6*pi)); fprintf('atan(2*pi) = %4.2f', atan(2*pi))`

`atan(6*pi) = 1.52     atan(2*pi) = 1.41`

and thus

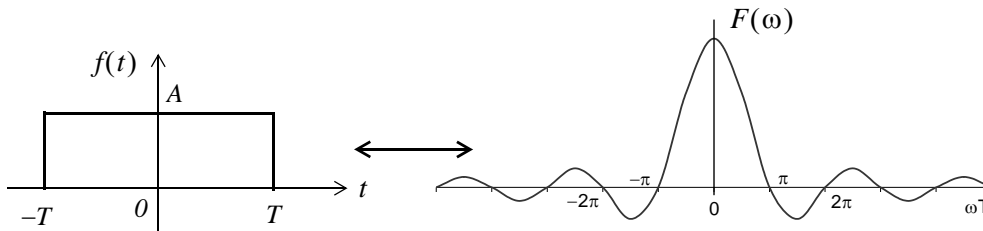
$$W_{out} = \frac{9}{4\pi} (1.52 - 1.41) = 0.08 \text{ J}$$

Therefore, the percentage of the input appearing at the output is

$$\frac{W_{out}}{W_{in}} \times 100 = \frac{0.08}{2.25} = 3.56\%$$

10.

$$A[u_0(t+T) - u_0(t-T)] \Leftrightarrow 2AT \frac{\sin \omega T}{\omega T}$$



First, we compute the total energy of the pulse in terms of  $f(t)$ .

$$W_{total} = \int_{-\infty}^{\infty} |f(t)|^2 dt = \int_{-T}^T A^2 dt$$

and since  $f(t)$  is an even function

$$W_{total} = 2 \int_0^T A^2 dt = 2A^2 t \Big|_0^T = 2A^2 T$$

Next, we denote the energy in the frequency interval  $-\pi/T \text{ rad} \leq \omega \leq \pi/T \text{ rad}$  as  $W_{out}$  in the frequency domain we get

$$W_{out} = \frac{1}{2\pi} \int_{-\infty}^{\infty} |F(\omega)|^2 d\omega = \frac{1}{2\pi} \int_{-\pi/T}^{\pi/T} \left| 2AT \frac{\sin \omega T}{\omega T} \right|^2 d\omega$$

---

## Chapter 8 The Fourier Transform

---

and since  $F(\omega)$  is an even function

$$W_{out} = 2 \frac{1}{2\pi} \int_0^{\pi/T} 4A^2 T^2 \frac{\sin^2 \omega T}{(\omega T)^2} d\omega = \frac{4A^2 T^2}{\pi} \int_0^{\pi/T} \frac{\sin^2 \omega T}{(\omega T)^2} d\omega \quad (1)$$

For simplicity, we let  $\omega T = y$ . Then,  $\omega = y/T$  and  $d\omega = (1/T)dy$ . Also, when  $\omega = 0$ ,  $y = 0$ , and when  $\omega = \pi/T$  or  $\omega T = \pi$ ,  $y = \pi$ . With these substitutions we express (1) as

$$W_{out} = \frac{4A^2 T^2}{\pi} \int_0^{\pi} \frac{\sin^2 y}{((y/T)T)^2} dy = \frac{4A^2 T^2}{\pi T} \int_0^{\pi} \frac{\sin^2 y}{y^2} dy = \frac{4A^2 T}{\pi} \int_0^{\pi} \frac{\sin^2 y}{y^2} dy \quad (2)$$

But the last integral in (2) is an improper integral and does not appear in tables of integrals\*.

We will attempt to simplify (2) using integration by parts. We start with the familiar

$$d(uv) = u dv + v du$$

from which

$$\int d(uv) = \int u dv + \int v du$$

or

$$\int u dv = uv - \int v du$$

Letting  $u = \sin^2 y$  and  $dv = 1/y^2$  it follows that  $du = 2 \cos y \sin y = \sin 2y$  and  $v = -1/y$ . With these substitutions (2) is written as

$$\begin{aligned} W_{out} &= \frac{4A^2 T}{\pi} \left[ \frac{\sin^2 y}{-y} \Big|_0^{\pi} - \int_0^{\pi} \frac{-1}{y} \sin 2y dy \right] = \frac{4A^2 T}{\pi} \left[ 0 + \int_0^{\pi} \frac{\sin 2y}{y} dy \right] \\ &= 2 \cdot \frac{4A^2 T}{\pi} \int_0^{\pi} \frac{\sin 2y}{2y} dy = \frac{8A^2 T}{\pi} \int_0^{\pi} \frac{\sin 2y}{2y} dy \end{aligned} \quad (3)$$

The last integral in (3) is also an improper integral. Fortunately, some handbooks of mathematical tables include numerical values of the integral

$$\int_0^{\pi} \frac{\sin x}{x} dx$$

---

\* It is shown in Advanced Calculus textbooks that if the upper limit is  $\infty$ , then

$$\int_0^{\infty} \frac{\sin x}{x} dx = \int_0^{\infty} \frac{\sin^2 x}{x^2} dx = \frac{\pi}{2}$$

but for other finite limits are not equal.

for arguments of  $\pi x$  in the interval  $0 \leq x \leq 10$ . Then, replacing  $2y$  with  $w$  we get  $w = 2y$ ,  $y = w/2$ ,  $dy = (1/2)/dw$ , and for  $y = 0$ ,  $w = 0$  whereas for  $y = \pi$ ,  $w = 2\pi$ . Then, by substitution into (3) we get

$$W_{out} = \frac{8A^2T}{\pi} \int_0^{2\pi} \frac{\sin w}{w} \left(\frac{1}{2}dw\right) = \frac{4A^2T}{\pi} \int_0^{2\pi} \frac{\sin w}{w} dw \quad (4)$$

From Table 5.3 of Handbook of Mathematical Functions, 1972 Edition, Dover Publications, with  $\pi x = 2\pi$  or  $x = 2$  we get

$$\int_0^{2\pi} \frac{\sin w}{w} dw \Big|_{x=2} = 1.418$$

and thus (4) reduces to

$$W_{out} = \frac{4A^2T}{\pi} 1.418$$

Therefore, the percentage of the output for the frequency interval  $-\pi/T \text{ rad} \leq \omega \leq \pi/T \text{ rad}$  is

$$\frac{W_{out}}{W_{total}} \times 100\% = \frac{(4A^2T/\pi) \cdot 1.418}{2A^2T} \times 100\% = \frac{2 \times 1.418}{\pi} \times 100\% = 90.3\%$$

Since this computation involves numerical integration, we can obtain the same result much faster and easier with MATLAB as follows:

First, we define the function `fourierxfm1` and we save it as an `.m` file as shown below. This file must be created with MATLAB's editor (or any other editor) and saved as an `.m` file in a drive that has been added to MATLAB's path.

```
function y1=fourierxfm1(x)
x=x+(x==0)*eps;% This statement avoids the sin(0)/0 value.
                % It says that if x=0, then (x==0) = 1
                % but if x is not zero, then (x==0) = 0
                % and eps is approximately equal to 2.2e-16
                % It is used to avoid division by zero.
y1=sin(x)./x;
```

Then, using MATLAB's command window, we write and execute the program below.

```
% The quad function below performs numerical integration from 0 to 2*pi
% using a form of Simpson's rule of numerical integration.
value1=quad('fourierxfm1',0,2*pi)

value1 =
    1.4182
```

We could also have used numerical integration with the integral

$$\int_0^{\pi} \frac{\sin^2 x}{x^2} dx$$

thereby avoiding the integration by parts procedure. Shown below are the function `fourierxfm2` which is saved as an `.m` file and the program execution using this function.

```
function y2=fourierxfm2(x)
x=x+(x==0)*eps;
y2=(sin(x)./x).^2;
```

and after this file is saved, we execute the statement below observing that the limits of integration are from  $0$  to  $\pi$ .

```
value2=quad('fourierxfm2',0,pi)
value2 =
    1.4182
```



This chapter is devoted to discrete time systems, and introduces the one-sided  $\mathcal{Z}$  Transform. The definition, theorems, and properties are discussed, and the  $\mathcal{Z}$  transforms of the most common discrete time functions are derived. The discrete transfer function is also defined, and several examples are given to illustrate its application. The Inverse  $\mathcal{Z}$  transform, and the methods available for finding it, are also discussed.

### 9.1 Definition and Special Forms

The  $\mathcal{Z}$  transform performs the transformation from the domain of discrete time signals, to another domain which we call  $z$ -domain. It is used with discrete time signals, the same way the Laplace and Fourier transforms are used with continuous time signals. The  $\mathcal{Z}$  transform yields a frequency domain description for discrete time signals, and forms the basis for the design of digital systems, such as digital filters. Like the Laplace transform, there is the one-sided, and the two-sided  $\mathcal{Z}$  transform. We will restrict our discussion to the one-sided  $\mathcal{Z}$  transform  $F(z)$  of a discrete time function  $f[n]$  defined as

$$F(z) = \sum_{n=0}^{\infty} f[n]z^{-n} \quad (9.1)$$

and the Inverse  $\mathcal{Z}$  transform is defined as

$$f[n] = \frac{1}{j2\pi} \oint F(z)z^{k-1} dz \quad (9.2)$$

We can obtain a discrete time waveform from an analog (continuous or with a finite number of discontinuities) signal, by multiplying it by a train of impulses. We denote the continuous signal as  $f(t)$ , and the impulses as

$$\delta[n] = \sum_{n=0}^{\infty} \delta[t-nT] \quad (9.3)$$

Multiplication of  $f(t)$  by  $\delta[n]$  produces the signal  $g(t)$  defined as

$$g(t) = f(t) \cdot \delta[n] = f(t) \sum_{n=0}^{\infty} \delta[t-nT] \quad (9.4)$$

These signals are shown in Figure 9.1.

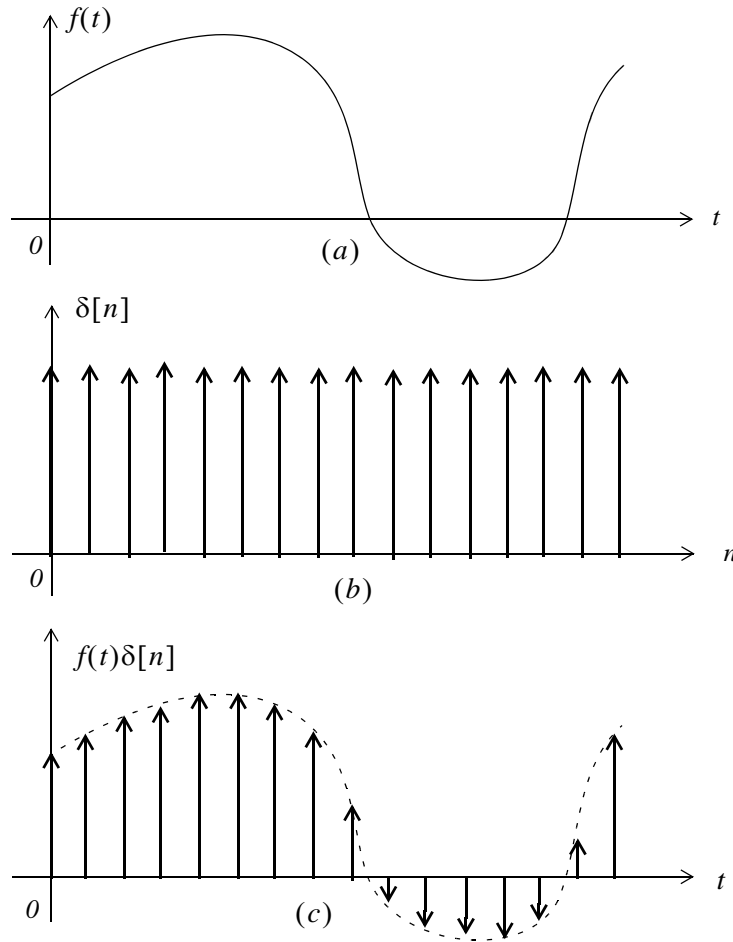


Figure 9.1. Formation of discrete time signals

Of course, after multiplication by  $\delta[n]$ , the only values of  $f(t)$  which are not zero, are those for which  $t = nT$ , and thus we can express (9.4) as

$$g(t) = f[nT] \sum_{n=0}^{\infty} \delta[t - nT] = \sum_{n=0}^{\infty} f[nT] \delta[t - nT] \quad (9.5)$$

Next, we recall from Chapter 2, that the  $t$ -domain to  $s$ -domain transform pairs for the delta function are  $\delta(t) \Leftrightarrow 1$  and  $\delta(t - T) \Leftrightarrow e^{-sT}$ . Therefore, taking the Laplace transform of both sides of (9.5), and, for simplicity, letting  $f[nT] = f[n]$ , we get

$$G(s) = \mathcal{L} \left\{ f[n] \sum_{n=0}^{\infty} \delta[t - nT] \right\} = f[n] \sum_{n=0}^{\infty} e^{-nsT} = \sum_{n=0}^{\infty} f[n] e^{-nsT} \quad (9.6)$$

Relation (9.6), with the substitution  $z = e^{sT}$ , becomes the same as (9.1), and like  $s$ ,  $z$  is also a complex variable.

The  $\mathcal{Z}$  and Inverse  $\mathcal{Z}$  transforms are denoted as

$$\boxed{F(z) = \mathcal{Z} \{f[n]\}} \quad (9.7)$$

and

$$\boxed{f[n] = \mathcal{Z}^{-1} \{F(z)\}} \quad (9.8)$$

The function  $F(z)$ , as defined in (9.1), is a series of complex numbers and converges outside the circle of radius  $R$ , that is, it converges (approaches a limit) when  $|z| > R$ . In complex variables theory, the radius  $R$  is known as the *radius of absolute convergence*.

In the complex  $z$ -plane the *region of convergence* is the set of  $z$  for which the magnitude of  $F(z)$  is finite, and the *region of divergence* is the set of  $z$  for which the magnitude of  $F(z)$  is infinite.

## 9.2 Properties and Theorems of the $\mathcal{Z}$ Transform

The properties and theorems of the  $\mathcal{Z}$  transform are similar to those of the Laplace transform. In this section, we will state and prove the most common  $\mathcal{Z}$  transforms.

### 1. Linearity

$$\boxed{af_1[n] + bf_2[n] + cf_3[n] + \dots \Leftrightarrow aF_1(z) + bF_2(z) + cF_3(z) + \dots} \quad (9.9)$$

where  $a, b, c, \dots$  are arbitrary real or complex constants.

#### **Proof:**

The proof is easily obtained by application of the definition of the  $\mathcal{Z}$  transform to each term on the left side.

In our subsequent discussion, we will denote the *discrete unit step function* as  $u_0[n]$ .

### 2. Shift of $f[n]u_0[n]$ in the Discrete Time Domain

$$\boxed{f[n-m]u_0[n-m] \Leftrightarrow z^{-m}F(z)} \quad (9.10)$$

**Proof:**

Applying the definition of the  $\mathcal{Z}$  transform, we get

$$\mathcal{Z} \{f[n-m]u_0[n-m]\} = \sum_{n=0}^{\infty} f[n-m]u_0[n-m]z^{-n}$$

and since  $u_0[n-m] = 0$  for  $n < m$  and  $u_0[n-m] = 1$  for  $n > m$ , the above expression reduces to

$$\mathcal{Z} \{f[n-m]\} = \sum_{n=0}^{\infty} f[n-m]z^{-n}$$

Now, we let  $n-m = k$ ; then,  $n = k+m$ , and when  $n-m = 0$  or  $n = m$ ,  $k = 0$ . Therefore,

$$\mathcal{Z} \{f[n-m]\} = \sum_{k=0}^{\infty} f[k]z^{-(k+m)} = \sum_{k=0}^{\infty} f[k]z^{-k}z^{-m} = z^{-m} \sum_{k=0}^{\infty} f[k]z^{-k} = z^{-m}F(z)$$

### 3. Right Shift in the Discrete Time Domain

This property is a generalization of the previous property, and allows use of non-zero values for  $n < 0$ . The transform pair is

$$f[n-m] \Leftrightarrow z^{-m}F(z) + \sum_{n=0}^{m-1} f[n-m]z^{-n}$$

(9.11)

**Proof:**

By application of the definition of the  $\mathcal{Z}$  transform, we get

$$\mathcal{Z} \{f[n-m]\} = \sum_{n=0}^{\infty} f[n-m]z^{-n}$$

We let  $n-m = k$ ; then,  $n = k+m$ , and when  $n = 0$ ,  $k = -m$ . Therefore,

$$\begin{aligned} \mathcal{Z} \{f[n-m]\} &= \sum_{k=-m}^{\infty} f[k]z^{-(k+m)} = \sum_{k=-m}^{\infty} f[k]z^{-k}z^{-m} = z^{-m} \sum_{k=-m}^{\infty} f[k]z^{-k} \\ &= z^{-m} \left[ \sum_{k=-m}^{-1} f[k]z^{-k} + \sum_{k=0}^{\infty} f[k]z^{-k} \right] = z^{-m} \left[ F(z) + \sum_{k=-m}^{-1} f[k]z^{-k} \right] \end{aligned}$$

When  $k = -m$ ,  $n = 0$ , and when  $k = -1$ ,  $n = m-1$ . Then, by substitution into the last summation term above, we get

$$\mathcal{Z} \{ f[n-m] \} = z^{-m} \left[ F(z) + \sum_{n=0}^{m-1} f[n-m] z^{m-n} \right] = z^{-m} F(z) + \sum_{n=0}^{m-1} f[n-m] z^{-n}$$

and this is the same as (9.11).

For  $m = 1$ , (9.11) reduces to

$$\boxed{f[n-1] \Leftrightarrow z^{-1} F(z) + f[-1]} \quad (9.12)$$

and for  $m = 2$ , reduces to

$$\boxed{f[n-2] \Leftrightarrow z^{-2} F(z) + f[-2] + z^{-1} f[-1]} \quad (9.13)$$

#### 4. Left Shift in the Discrete Time Domain

$$\boxed{f[n+m] \Leftrightarrow z^m F(z) + \sum_{n=-m}^{-1} f[n+m] z^{-n}} \quad (9.14)$$

that is, if  $f[n]$  is a discrete time signal, and  $m$  is a positive integer, the  $m$ th left shift of  $f[n]$  is  $f[n+m]$ .

**Proof:**

$$\mathcal{Z} \{ f[n+m] \} = \sum_{n=0}^{\infty} f[n+m] z^{-n}$$

We let  $n+m = k$ ; then,  $n = k-m$ , and when  $n = 0$ ,  $k = m$ . Then,

$$\begin{aligned} \mathcal{Z} \{ f[n+m] \} &= \sum_{k=m}^{\infty} f[k] z^{-(k-m)} = \sum_{k=m}^{\infty} f[k] z^{-k} z^m \\ &= z^m \left[ \sum_{k=0}^{\infty} f[k] z^{-k} - \sum_{k=0}^{m-1} f[k] z^{-k} \right] = z^m \left[ F(z) - \sum_{k=0}^{m-1} f[k] z^{-k} \right] \end{aligned}$$

When  $k = 0$ ,  $n = -m$ , and when  $k = m-1$ ,  $n = -1$ . Then, by substitution into the last summation term of the above expression, we get

$$\mathcal{Z} \{ f[n+m] \} = z^m \left[ F(z) + \sum_{n=-m}^{-1} f[n+m] z^{-(n+m)} \right] = z^m F(z) + \sum_{n=-m}^{-1} f[n+m] z^{-n}$$

and this is the same as (9.14).

---

## Chapter 9 Discrete Time Systems and the Z Transform

---

For  $m = 1$ , the above expression reduces to

$$\mathcal{Z} \{f[n+1]\} = zF(z) - f[0]z \quad (9.15)$$

and for  $m = 2$ , reduces to

$$\mathcal{Z} \{f[n+2]\} = z^2F(z) - f[0]z^2 - f[1]z \quad (9.16)$$

### 5. Multiplication by $a^n$ in the Discrete Time Domain

$$a^n f[n] \Leftrightarrow F\left(\frac{z}{a}\right) \quad (9.17)$$

**Proof:**

$$\mathcal{Z} \{a^n f[n]\} = \sum_{k=0}^{\infty} a^n f[n] z^{-n} = \sum_{k=0}^{\infty} \frac{1}{a^{-n}} f[n] z^{-n} = \sum_{k=0}^{\infty} f[n] \left(\frac{z}{a}\right)^{-n} = F\left(\frac{z}{a}\right)$$

### 6. Multiplication by $e^{-naT}$ in the Discrete Time Domain

$$e^{-naT} f[n] \Leftrightarrow F(e^{aT} z) \quad (9.18)$$

**Proof:**

$$\mathcal{Z} \{e^{-naT} f[n]\} = \sum_{k=0}^{\infty} e^{-naT} f[n] z^{-n} = \sum_{k=0}^{\infty} f[n] (e^{aT} z)^{-n} = F(e^{aT} z)$$

### 7. Multiplication by $n$ and $n^2$ in the Discrete Time Domain

$$\begin{aligned} nf[n] &\Leftrightarrow -z \frac{d}{dz} F(z) \\ n^2 f[n] &\Leftrightarrow z \frac{d}{dz} F(z) + z^2 \frac{d^2}{dz^2} F(z) \end{aligned} \quad (9.19)$$

**Proof:**

By definition,

$$F(z) = \sum_{n=0}^{\infty} f[n] z^{-n}$$

and taking the first derivative of both sides with respect to  $z$  we get

$$\frac{d}{dz}F(z) = \sum_{n=0}^{\infty} (-n)f[n]z^{-n-1} = -z^{-1} \sum_{n=0}^{\infty} nf[n]z^{-n}$$

Multiplication of both sides by  $-z$  yields

$$\sum_{n=0}^{\infty} nf[n]z^{-n} = -z \frac{d}{dz}F(z)$$

Differentiating one more time, we get the second pair in (9.19).

### 8. Summation in the Discrete Time Domain

$$\boxed{\sum_{m=0}^n f[m] \Leftrightarrow \left(\frac{z}{z-1}\right)F(z)} \tag{9.20}$$

that is, the  $\mathcal{Z}$  transform of the sum of the values of a signal, is equal to  $z/(z-1)$  times the  $\mathcal{Z}$  transform of the signal. This property is equivalent to time integration in the continuous time domain since integration in the discrete time domain is summation. We will see on the next section that the term  $z/(z-1)$  is the  $\mathcal{Z}$  transform of the discrete unit step function  $u_0[n]$ , and recalling that in the  $s$ -domain

$$u_0(t) \Leftrightarrow \frac{1}{s}$$

and

$$\int_0^t f(\tau)d\tau \Leftrightarrow \frac{F(s)}{s}$$

then, the similarity of the Laplace and  $\mathcal{Z}$  transforms becomes apparent.

**Proof:**

Let

$$y[n] = \sum_{m=0}^n x[m] \tag{9.21}$$

and let us express (9.21) as

$$y[n] = \sum_{m=0}^{n-1} x[m] + x[n] \tag{9.22}$$

Since the summation symbol in (9.21) is  $y[n]$ , then the summation symbol in (9.22) is  $y[n-1]$ , and thus we can write (9.22) as

$$y[n] = y[n-1] + x[n] \quad (9.23)$$

Next, we take the  $\mathcal{Z}$  transform of both sides of (9.23), and using the property

$$x[n-m]u_0[n-m] \Leftrightarrow z^{-m}X(z)$$

we get

$$Y(z) = z^{-1}Y(z) + X(z)$$

or

$$Y(z) = \frac{1}{1-z^{-1}} X(z) = \frac{z}{z-1} X(z)$$

and this relation is the same as (9.20).

### 9. Convolution in the Discrete Time Domain

Let the impulse response of a discrete time system be denoted as  $h[n]$ , that is, an impulse  $\delta[n]$ , produces a response  $h[n]$ . Likewise, a delayed impulse  $\delta[n-m]$  produces a delayed response  $h[n-m]$ , and so on. Therefore, any discrete time input signal can be considered as an impulse train, in which each impulse has a weight equal to its corresponding sampled value. Then, for any other input  $x[0], x[1], x[2], \dots, x[m]$ , we get

$$\begin{aligned} x[0]\delta[0] &\rightarrow x[0]h[n] \\ x[1]\delta[n-1] &\rightarrow x[1]h[n-1] \\ x[2]\delta[n-2] &\rightarrow x[2]h[n-2] \\ &\dots \\ x[m]\delta[n-m] &\rightarrow x[m]h[n-m] \end{aligned}$$

and the response at any arbitrary value  $m$ , is obtained by summing all the components that have occurred up to that point, that is, if  $y[n]$  is the output due to the input  $x[m]$  convolved with  $h[n]$ , then,

$$y[n] = \sum_{m=0}^n x[m]h[n-m] \quad (9.24)$$

or

$$y[n] = \sum_{m=0}^n h[n-m]x[m] \quad (9.25)$$

We will now prove that convolution in the discrete time domain corresponds to multiplication in the  $\mathcal{Z}$  domain, that is,

$f_1[n]*f_2[n] \Leftrightarrow F_1(z) \cdot F_2(z)$

(9.26)



**Proof:**

Taking the  $\mathcal{Z}$  transform of both sides of (9.24), we get

$$Y(z) = \mathcal{Z} \left\{ \sum_{m=0}^{\infty} x[m]h[n-m] \right\} = \sum_{n=0}^{\infty} \left[ \sum_{m=0}^{\infty} x[m]h[n-m] \right] z^{-n}$$

and interchanging the order of the summation, we get

$$Y(z) = \sum_{m=0}^{\infty} \left[ \sum_{n=0}^{\infty} x[m]h[n-m]z^{-n} \right] = \sum_{m=0}^{\infty} x[m] \sum_{n=0}^{\infty} h[n-m]z^{-n}$$

Next, we let  $k = n - m$ , then,  $n = k + m$ , and thus,

$$Y(z) = \sum_{m=0}^{\infty} x[m] \sum_{n=0}^{\infty} h[k]z^{-(k+m)} = \sum_{m=0}^{\infty} x[m]z^{-m} \sum_{n=0}^{\infty} h[k]z^{-k}$$

or

$$Y(z) = X(z) \cdot H(z) \tag{9.27}$$

### 10. Convolution in the Discrete Frequency Domain

If  $f_1[n]$  and  $f_2[n]$  are two sequences with  $\mathcal{Z}$  transforms  $F_1(z)$  and  $F_2(z)$  respectively, then,

$$f_1[n] \cdot f_2[n] \Leftrightarrow \frac{1}{j2\pi} \oint xF_1(v)F_2\left(\frac{z}{v}\right)v^{-1}dv \tag{9.28}$$

where  $v$  is a dummy variable, and  $\oint$  is a closed contour inside the overlap convergence regions for  $X_1(v)$  and  $X_2(z/v)$ . The proof requires contour integration; it will not be provided here.

### 11. Initial Value Theorem

$$\boxed{f[0] = \lim_{z \rightarrow \infty} X(z)} \tag{9.29}$$

**Proof:**

For all  $n \geq 1$ , as  $z \rightarrow \infty$

$$z^{-n} = \frac{1}{z^n} \rightarrow 0$$

and under these conditions  $f[n]z^{-n} \rightarrow 0$  also. Taking the limit as  $z \rightarrow \infty$  in the expression

$$F(z) = \sum_{n=0}^{\infty} f[n]z^{-n}$$

we observe that the only non-zero value in the summation is that of  $n = 0$ . Then,

$$\sum_{n=0}^{\infty} f[n]z^{-n} = f[0]z^{-0} = f[0]$$

Therefore,

$$\lim_{z \rightarrow \infty} F(z) = f[0]$$

### 12. Final Value Theorem

This theorem states that if  $f[n]$  approaches a limit as  $n \rightarrow \infty$ , we can find that limit, if it exists, by multiplying the  $\mathcal{Z}$  transform of  $f[n]$  by  $(z-1)$ , and taking the limit of the product as  $z \rightarrow 1$ . That is,

$$\boxed{\lim_{n \rightarrow \infty} f[n] = \lim_{z \rightarrow 1} (z-1)F(z)} \quad (9.30)$$

**Proof:**

Let us consider the  $\mathcal{Z}$  transform of the sequence  $f[n+1] - f[n]$ , i.e.,

$$\mathcal{Z} \{f[n+1] - f[n]\} = \sum_{n=0}^{\infty} (f[n+1] - f[n])z^{-n}$$

We replace the upper limit of the summation with  $k$ , and we let  $k \rightarrow \infty$ . Then,

$$\mathcal{Z} \{f[n+1] - f[n]\} = \lim_{k \rightarrow \infty} \left[ \sum_{n=0}^k (f[n+1] - f[n])z^{-n} \right] \quad (9.31)$$

From (9.15),

$$\mathcal{Z} \{f[n+1]\} = zF(z) - f[0]z \quad (9.32)$$

and by substitution of (9.32) into (9.31), we get

$$zF(z) - f[0]z - F(z) = \lim_{k \rightarrow \infty} \left[ \sum_{n=0}^k (f[n+1] - f[n])z^{-n} \right]$$

Taking the limit as  $z \rightarrow 1$  on both sides, we get

$$\lim_{z \rightarrow 1} \{(z-1)F(z) - f[0]z\} = \lim_{z \rightarrow 1} \left\{ \lim_{k \rightarrow \infty} \left[ \sum_{n=0}^k (f[n+1] - f[n])z^{-n} \right] \right\}$$

$$= \lim_{k \rightarrow \infty} \left[ \sum_{n=0}^k \lim_{z \rightarrow 1} (f[n+1] - f[n])z^{-n} \right]$$

$$\lim_{z \rightarrow 1} (z-1)F(z) - \lim_{z \rightarrow 1} f[0]z = \lim_{k \rightarrow \infty} \left[ \sum_{n=0}^k \lim_{z \rightarrow 1} \{f[n+1] - f[n]\} z^{-n} \right]$$

$$\lim_{z \rightarrow 1} (z-1)F(z) - f[0] = \lim_{k \rightarrow \infty} \left[ \sum_{n=0}^k \{f[n+1]\} - f[n] \right]$$

$$= \lim_{k \rightarrow \infty} \{f[k] - f[0]\} = \lim_{k \rightarrow \infty} f[k] - f[0]$$

$$\lim_{k \rightarrow \infty} f[k] = \lim_{z \rightarrow 1} (z-1)F(z)$$

We must remember, however, that if the sequence  $f[n]$  does not approach a limit, the final value theorem is invalid. The right side of (9.30) may exist even though  $f[n]$  does not approach a limit. In instances where we cannot determine whether  $f[n]$  exists or not, we can be certain that it exists, if  $X(z)$  can be expressed in a proper rational form as

$$X(z) = \frac{A(z)}{B(z)}$$

where  $A(z)$  and  $B(z)$  are polynomials with real coefficients.

We summarize the properties and theorems of the  $\mathcal{Z}$  transform in Table 9.1.

### 9.3 The $\mathcal{Z}$ Transform of Common Discrete Time Functions

In this section we will provide several examples to find the  $\mathcal{Z}$  transform of some discrete time functions.

#### Example 9.1

Find the  $\mathcal{Z}$  transform of the *geometric sequence* defined as

$$f[n] = \begin{cases} 0 & n = -1, -2, -3, \dots \\ a^n & n = 0, 1, 2, 3, \dots \end{cases} \quad (9.33)$$

TABLE 9.1 Properties and Theorems of the Z transform

Property / Theorem	Time Domain	Z transform
Linearity	$af_1[n] + bf_2[n] + \dots$	$aF_1(z) + bF_2(z) + \dots$
Shift of $x[n]u_0[n]$	$f[n-m]u_0[n-m]$	$z^{-m}F(z)$
Right Shift	$f[n-m]$	$z^{-m}F(z) + \sum_{n=0}^{m-1} f[n-m]z^{-n}$
Left Shift	$f[n+m]$	$z^mF(z) + \sum_{n=-m}^{-1} f[n+m]z^{-n}$
Multiplication by $a^n$	$a^n f[n]$	$F\left(\frac{z}{a}\right)$
Multiplication by $e^{-naT}$	$e^{-naT} f[n]$	$F(e^{aT}z)$
Multiplication by $n$	$nf[n]$	$-z \frac{d}{dz} F(z)$
Multiplication by $n^2$	$n^2 f[n]$	$z \frac{d}{dz} F(z) + z^2 \frac{d^2}{dz^2} F(z)$
Summation in Time	$\sum_{m=0}^n f[m]$	$\left(\frac{z}{z-1}\right)F(z)$
Time Convolution	$f_1[n]*f_2[n]$	$F_1(z) \cdot F_2(z)$
Frequency Convolution	$f_1[n] \cdot f_2[n]$	$\frac{1}{j2\pi} \oint x F_1(v) F_2\left(\frac{z}{v}\right) v^{-1} dv$
Initial Value Theorem	$f[0] = \lim_{z \rightarrow \infty} F(z)$	
Final Value Theorem	$\lim_{n \rightarrow \infty} f[n] = \lim_{z \rightarrow 1} (z-1)F(z)$	

**Solution:**

From the definition of the Z transform,

$$F(z) = \sum_{n=0}^{\infty} f[n]z^{-n} = \sum_{n=0}^{\infty} a^n z^{-n} = \sum_{n=0}^{\infty} (az^{-1})^n \tag{9.34}$$

---

## The Z Transform of Common Discrete Time Functions

---

To evaluate this infinite summation, we form a truncated version of  $F(z)$  which contains the first  $k$  terms of the series. We denote this truncated version as  $F_k(z)$ . Then,

$$F_k(z) = \sum_{n=0}^{k-1} a^n z^{-n} = 1 + az^{-1} + a^2 z^{-2} + \dots + a^{k-1} z^{-(k-1)} \quad (9.35)$$

and we observe that as  $k \rightarrow \infty$ , (9.35) becomes the same as (9.34).

To express (9.35) in a closed form, we multiply both sides by  $az^{-1}$ . Then,

$$az^{-1}F_k(z) = az^{-1} + a^2 z^{-2} + a^3 z^{-3} + \dots + a^k z^{-k} \quad (9.36)$$

Subtracting (9.36) from (9.35), we get

$$F_k(z) - az^{-1}F_k(z) = 1 - a^k z^{-k}$$

or

$$F_k(z) = \frac{1 - a^k z^{-k}}{1 - az^{-1}} = \frac{1 - (az^{-1})^k}{1 - az^{-1}} \quad (9.37)$$

for  $az^{-1} \neq 1$

To determine  $F(z)$  from  $F_k(z)$ , we examine the behavior of the term  $(az^{-1})^k$  in the numerator of (9.37). We write the terms  $az^{-1}$  and  $(az^{-1})^k$  in polar form, that is,  $az^{-1} = |az^{-1}|e^{j\theta}$  and

$$(az^{-1})^k = |az^{-1}|^k e^{jk\theta} \quad (9.38)$$

From (9.38) we observe that, for the values of  $z$  for which  $|az^{-1}| < 1$ , the magnitude of the complex number  $(az^{-1})^k \rightarrow 0$  as  $k \rightarrow \infty$  and therefore,

$$F(z) = \lim_{k \rightarrow \infty} F_k(z) = \frac{1}{1 - az^{-1}} = \frac{z}{z - a} \quad (9.39)$$

for  $|az^{-1}| < 1$

For the values of  $z$  for which  $|az^{-1}| > 1$ , the magnitude of the complex number  $(az^{-1})^k$  becomes unbounded as  $k \rightarrow \infty$ , and therefore,  $F(z) = \lim_{k \rightarrow \infty} F_k(z)$  is unbounded for  $|az^{-1}| > 1$ .

In summary,

$$F(z) = \sum_{n=0}^{\infty} (az^{-1})^n$$

## Chapter 9 Discrete Time Systems and the Z Transform

converges to the complex number  $z/(z-a)$  for  $|az^{-1}| < 1$ , and diverges for  $|az^{-1}| > 1$ . Also, since

$$|az^{-1}| = \left| \frac{a}{z} \right| = \frac{|a|}{|z|}$$

then,  $|az^{-1}| < 1$  implies that  $|z| > |a|$ , while  $|az^{-1}| > 1$  implies  $|z| < |a|$  and thus,

$$\mathcal{Z}\{a^n u_0[n]\} = \sum_{n=0}^{\infty} a^n z^{-n} = \begin{cases} \frac{z}{z-a} & \text{for } |z| > |a| \\ \text{unbounded} & \text{for } |z| < |a| \end{cases} \quad (9.40)$$

The regions of convergence and divergence for the sequence of (9.40) are shown in Figure 9.2.

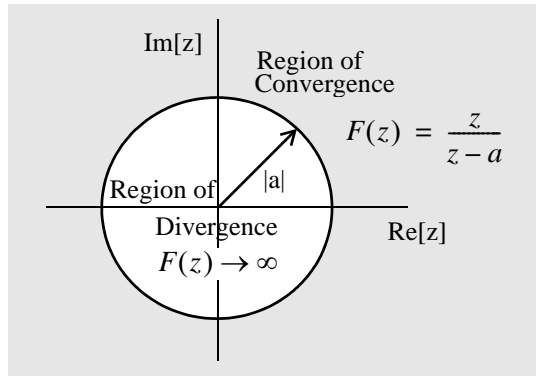


Figure 9.2. Regions of convergence and divergence for the geometric sequence  $a^n$

To determine whether the circumference of the circle, where  $|z| = |a|$ , lies in the region of convergence or divergence, we evaluate the sequence  $F_k(z)$  at  $z = a$ . Then,

$$\begin{aligned} F_k(z) &= \sum_{n=0}^{k-1} a^n z^{-n} = 1 + az^{-1} + a^2 z^{-2} + \dots + a^{k-1} z^{-(k-1)} \Big|_{z=a} \\ &= 1 + 1 + 1 + \dots + 1 = k \end{aligned} \quad (9.41)$$

We see that this sequence becomes unbounded as  $k \rightarrow \infty$ , and therefore, the circumference of the circle lies in the region of divergence.

### Example 9.2

Find the  $\mathcal{Z}$  transform of the discrete unit step function  $u_0[n]$  shown in Figure 9.3.

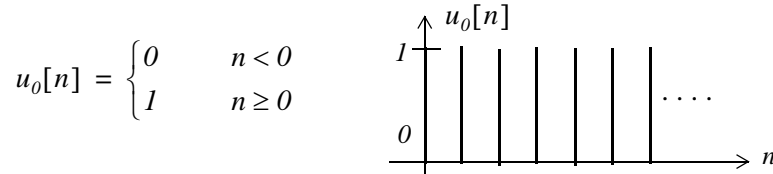


Figure 9.3. The discrete unit step function  $u_0[n]$

**Solution:**

From the definition of the  $\mathcal{Z}$  transform,

$$F(z) = \sum_{n=0}^{\infty} f[n]z^{-n} = \sum_{n=0}^{\infty} [1]z^{-n} \quad (9.42)$$

As in the previous example, to evaluate this infinite summation, we form a truncated version of  $F(z)$  which contains the first  $k$  terms of the series, and we denote this truncated version as  $F_k(z)$ . Then,

$$F_k(z) = \sum_{n=0}^{k-1} z^{-n} = 1 + z^{-1} + z^{-2} + \dots + z^{-(k-1)} \quad (9.43)$$

and we observe that as  $k \rightarrow \infty$ , (9.43) becomes the same as (9.42). To express (9.43) in a closed form, we multiply both sides by  $z^{-1}$  and we get

$$z^{-1}F_k(z) = z^{-1} + z^{-2} + z^{-3} + \dots + z^{-k} \quad (9.44)$$

Subtracting (9.44) from (9.43), we get

$$F_k(z) - z^{-1}F_k(z) = 1 - z^{-k}$$

or

$$F_k(z) = \frac{1 - z^{-k}}{1 - z^{-1}} = \frac{1 - (z^{-1})^k}{1 - z^{-1}} \quad (9.45)$$

for  $z^{-1} \neq 1$

Since  $(z^{-1})^k = |z^{-1}|^k e^{jk\theta}$ , as  $k \rightarrow \infty$ ,  $(z^{-1})^k \rightarrow 0$ . Therefore,

$$F(z) = \lim_{k \rightarrow \infty} F_k(z) = \frac{1}{1 - z^{-1}} = \frac{z}{z - 1} \quad (9.46)$$

for  $|z| > 1$ , and the region of convergence lies outside the unit circle.

## Chapter 9 Discrete Time Systems and the Z Transform

### Alternate Solution:

The discrete unit step  $u_0[n]$  is a special case of the sequence  $a^n$  with  $a = 1$ , and since  $1^n = 1$ , by substitution into (9.40) we get

$$\mathcal{Z}\{u_0[n]\} = \sum_{n=0}^{\infty} [1]z^{-n} = \begin{cases} \frac{z}{z-1} & \text{for } |z| > |1| \\ \text{unbounded} & \text{for } |z| < |1| \end{cases} \quad (9.47)$$

### Example 9.3

Find the  $\mathcal{Z}$  transform of the *discrete exponential sequence*  $f[n] = e^{-naT}$

#### Solution:

$$F(z) = \sum_{n=0}^{\infty} e^{-naT} z^{-n} = 1 + e^{-aT} z^{-1} + e^{-2aT} z^{-2} + e^{-3aT} z^{-3} + \dots$$

and this is a geometric sequence which can be expressed in closed form as

$$\mathcal{Z}[e^{-naT}] = \frac{1}{1 - e^{-aT} z^{-1}} = \frac{z}{z - e^{-aT}} \quad (9.48)$$

for  $|e^{-aT} z^{-1}| < 1$

### Example 9.4

Find the  $\mathcal{Z}$  transform of the discrete time functions  $f_1[n] = \cos naT$  and  $f_2[n] = \sin naT$

#### Solution:

From (9.48) of Example 9.3,

$$e^{-naT} \leftrightarrow \frac{z}{z - e^{-aT}}$$

and replacing  $-naT$  with  $jnaT$  we get

$$\begin{aligned} \mathcal{Z}[e^{jnaT}] &= \mathcal{Z}[\cos naT + j \sin naT] = \frac{z}{z - e^{jaT}} \\ &= \mathcal{Z}[\cos naT] + j \mathcal{Z}[\sin naT] = \frac{z}{z - e^{jaT}} \cdot \frac{z - e^{-jaT}}{z - e^{-jaT}} \\ &= \mathcal{Z}[\cos naT] + j \mathcal{Z}[\sin naT] = \frac{z^2 - z \cos aT + jz \sin aT}{z^2 - 2z \cos aT + 1} \end{aligned}$$



Equating real and imaginary parts, we get the transform pairs

$$\cos naT \Leftrightarrow \frac{z^2 - z \cos aT}{z^2 - 2z \cos aT + 1} \quad (9.49)$$

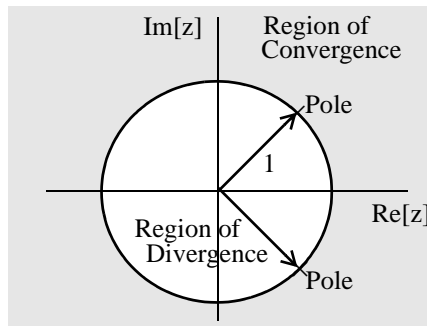
and

$$\sin naT \Leftrightarrow \frac{z \sin aT}{z^2 - 2z \cos aT + 1} \quad (9.50)$$

To define the regions of convergence and divergence, we express the denominator of (9.49) or (9.50) as

$$(z - e^{jaT}) \cdot (z - e^{-jaT}) \quad (9.51)$$

We see that both pairs of (9.49) and (9.50) have two poles, one at  $z = e^{jaT}$  and the other at  $z = e^{-jaT}$ , that is, the poles lie on the unity circle as shown in Figure 9.4.



*Figure 9.4. Regions of convergence and divergence for  $\cos naT$  and  $\sin naT$*

From Figure 9.4, we see that the poles separate the regions of convergence and divergence. Also, since the circumference of the circle lies on the region of divergence, as we have seen before, the poles lie on the region of divergence. Therefore, for the discrete time cosine and sine functions we have the pairs

$$\cos naT \Leftrightarrow \frac{z^2 - z \cos aT}{z^2 - 2z \cos aT + 1} \quad \text{for } |z| > 1 \quad (9.52)$$

and

$$\sin naT \Leftrightarrow \frac{z \sin aT}{z^2 - 2z \cos aT + 1} \quad \text{for } |z| > 1 \quad (9.53)$$

---

## Chapter 9 Discrete Time Systems and the Z Transform

---

It is shown in complex variables theory that if  $F(z)$  is a proper rational function\*, all poles lie outside the region of convergence, but the zeros can lie anywhere on the  $z$ -plane.

### Example 9.5

Find the  $\mathcal{Z}$  transform of *discrete unit ramp*  $f[n] = nu_0[n]$  .

**Solution:**

$$\mathcal{Z} \{nu_0[n]\} = \sum_{n=0}^{\infty} nz^{-n} = 0 + z^{-1} + 2z^{-2} + 3z^{-3} + \dots \quad (9.54)$$

We can express (9.54) in closed form using the discrete unit step function transform pair

$$\mathcal{Z} \{u_0[n]\} = \sum_{n=0}^{\infty} (1)z^{-n} = \frac{z}{z-1} \quad \text{for } |z| > |1| \quad (9.55)$$

Differentiating both sides of (9.55) with respect to  $z$ , we get

$$\frac{d}{dz} \left( \sum_{n=0}^{\infty} (1)z^{-n} \right) = \frac{d}{dz} \left( \frac{z}{z-1} \right)$$

or

$$\sum_{n=0}^{\infty} -nz^{-n-1} = \frac{-1}{(z-1)^2}$$

Multiplication by  $-z$  yields

$$\sum_{n=0}^{\infty} nz^{-n} = n \sum_{n=0}^{\infty} (1) z^{-n} = \frac{z}{(z-1)^2}$$

and thus we have the transform pair

$$\boxed{nu_0[n] \leftrightarrow \frac{z}{(z-1)^2}} \quad (9.56)$$

We summarize the transform pairs we have derived, and others, given as exercises at the end of this chapter, in Table 9.2.

---

\* This was defined in Chapter 3, page 3-1.

*TABLE 9.2 The Z Transform of Common Discrete Time Functions*

$f[n]$	$F(z)$
$\delta[n]$	$1$
$\delta[n - m]$	$z^{-m}$
$a^n u_0[n]$	$\frac{z}{z - a} \quad  z  > a$
$u_0[n]$	$\frac{z}{z - 1} \quad  z  > 1$
$(e^{-naT})u_0[n]$	$\frac{z}{z - e^{-aT}} \quad  e^{-aT} z^{-1}  < 1$
$(\cos naT)u_0[n]$	$\frac{z^2 - z \cos aT}{z^2 - 2z \cos aT + 1} \quad  z  > 1$
$(\sin naT)u_0[n]$	$\frac{z \sin aT}{z^2 - 2z \cos aT + 1} \quad  z  > 1$
$(a^n \cos naT)u_0[n]$	$\frac{z^2 - az \cos aT}{z^2 - 2az \cos aT + a^2} \quad  z  > a$
$(a^n \sin naT)u_0[n]$	$\frac{az \sin aT}{z^2 - 2az \cos aT + a^2} \quad  z  > a$
$u_0[n] - u_0[n - m]$	$\frac{z^m - 1}{z^{m-1}(z - 1)}$
$nu_0[n]$	$z/(z - 1)^2$
$n^2 u_0[n]$	$z(z + 1)/(z - 1)^3$
$[n + 1]u_0[n]$	$z^2/(z - 1)^2$
$a^n nu_0[n]$	$(az)/(z - a)^2$
$a^n n^2 u_0[n]$	$az(z + a)/(z - a)^3$
$a^n n[n + 1]u_0[n]$	$2az^2/(z - a)^3$

### 9.4 Computation of the $\mathcal{Z}$ Transform with Contour Integration\*

Let  $F(s)$  be the Laplace transform of a continuous time function  $f(t)$  and  $F^*(s)$  the transform of the sampled time function  $f(t)$  which we denote as  $f^*(t)$ . It is shown in complex variables theory that  $F^*(s)$  can be derived from  $F(s)$  by the use of the *contour integral*

$$F^*(s) = \frac{1}{j2\pi} \oint_C \frac{F(v)}{1 - e^{-sT} e^{vT}} dv \quad (9.57)$$

where  $C$  is a contour enclosing all singularities (poles) of  $F(s)$ , and  $v$  is a dummy variable for  $s$ . We can compute the  $\mathcal{Z}$  transform of a discrete time function  $f[n]$  using the transformation

$$F(z) = F^*(s) \Big|_{z=e^{sT}} \quad (9.58)$$

By substitution of (9.58) into (9.57), and replacing  $v$  with  $s$ , we get

$$F(z) = \frac{1}{j2\pi} \oint_C \frac{F(s)}{1 - z^{-1} e^{sT}} ds \quad (9.59)$$

Next, we use *Cauchy's Residue Theorem* to express (9.59) as

$$F(z) = \sum_k \operatorname{Res} \frac{F(s)}{1 - z^{-1} e^{sT}} \Big|_{s=p_k} = \lim_{s \rightarrow p_k} (s - p_k) \frac{F(s)}{1 - z^{-1} e^{sT}} \quad (9.60)$$

#### Example 9.6

Derive the  $\mathcal{Z}$  transform of the discrete unit step function  $u_0[n]$  using the residue theorem.

#### Solution:

We learned in Chapter 2, that

$$\mathcal{L} [u_0(t)] = 1/s$$

Then, by residue theorem of (9.60),

$$\begin{aligned} F(z) &= \lim_{s \rightarrow p_k} (s - p_k) \frac{F(s)}{1 - z^{-1} e^{sT}} = \lim_{s \rightarrow 0} (s - 0) \frac{1/s}{1 - z^{-1} e^{sT}} \\ &= \lim_{s \rightarrow 0} s \frac{1/s}{1 - z^{-1} e^{sT}} = \lim_{s \rightarrow 0} \frac{1}{1 - z^{-1} e^{sT}} = \frac{1}{1 - z^{-1}} = \frac{z}{z - 1} \end{aligned}$$

---

\* This section may be skipped without loss of continuity. It is intended for readers who have prior knowledge of complex variables theory. However, the following examples will show that this procedure is not difficult.

for  $|z| > 1$ , and this is the same as (9.47).

### Example 9.7

Derive the  $\mathcal{Z}$  transform of the discrete exponential function  $e^{-naT}u_0[n]$  using the residue theorem.

**Solution:**

From Chapter 2,

$$\mathcal{L} [e^{-at}u_0(t)] = \frac{1}{s+a}$$

Then, by residue theorem of (9.60),

$$\begin{aligned} F(z) &= \lim_{s \rightarrow p_k} (s-p_k) \frac{F(s)}{1-z^{-1}e^{sT}} = \lim_{s \rightarrow -a} (s+a) \frac{1/(s+a)}{1-z^{-1}e^{sT}} \\ &= \lim_{s \rightarrow -a} \frac{1}{1-z^{-1}e^{sT}} = \frac{1}{1-z^{-1}e^{-aT}} = \frac{z}{z-e^{-aT}} \end{aligned}$$

for  $|z| > 1$  and this is the same as (9.48).

### Example 9.8

Derive the  $\mathcal{Z}$  transform of the discrete unit ramp function  $nu_0[n]$  using the residue theorem.

**Solution:**

From Chapter 2,

$$\mathcal{L} [tu_0(t)] = 1/s^2$$

Since  $F(s)$  has a second order pole at  $s = 0$ , we need to apply the residue *theorem applicable to a pole of order n*. This theorem states that

$$\boxed{F(z) = \lim_{s \rightarrow p_k} \left( \frac{1}{(n-1)!} \right) (s-p_k) \frac{d^{n-1}}{ds^{n-1}} \left[ \frac{F(s)}{1-z^{-1}e^{sT}} \right]} \quad (9.61)$$

Thus, for this example,

$$F(z) = \lim_{s \rightarrow 0} \frac{d}{ds} \left[ s^2 \frac{1/s^2}{1-z^{-1}e^{sT}} \right] = \lim_{s \rightarrow 0} \frac{d}{ds} \left[ \frac{1}{1-z^{-1}e^{sT}} \right] = \frac{z}{(z-1)^2}$$

for  $|z| > 1$ , and this is the same as (9.56).

**9.5 Transformation Between s and z Domains**

It is shown in complex variables textbooks that every function of a complex variable maps (transforms) a plane  $xy$  to another plane  $uv$ . In this section, we will investigate the mapping of the plane of the complex variable  $s$ , into the plane of the complex variable  $z$ .

Let us reconsider expressions (9.6) and (9.1) which are repeated here for convenience.

$$G(s) = \sum_{n=0}^{\infty} f[n]e^{-nsT} \quad (9.62)$$

and

$$F(z) = \sum_{n=0}^{\infty} f[n]z^{-n} \quad (9.63)$$

By comparison of (9.62) with (9.63),

$$G(s) = F(z) \Big|_{z=e^{sT}} \quad (9.64)$$

Thus, the variables  $s$  and  $z$  are related as

$$\boxed{z = e^{sT}} \quad (9.65)$$

and

$$\boxed{s = \frac{1}{T} \ln z} \quad (9.66)$$

Therefore,

$$\boxed{F(z) = G(s) \Big|_{s = \frac{1}{T} \ln z}} \quad (9.67)$$

Since  $s$ , and  $z$  are both complex variables, relation (9.67) allows the mapping (transformation) of regions of the  $s$ -plane into the  $z$ -plane. We find this transformation by recalling that  $s = \sigma + j\omega$  and therefore, expressing  $z$  in magnitude-phase form and using (9.65), we get

$$z = |z|\angle\theta = |z|e^{j\theta} = e^{\sigma T}e^{j\omega T} \quad (9.68)$$

where,

$$|z| = e^{\sigma T} \quad (9.69)$$

and

$$\theta = \omega T \tag{9.70}$$

Since

$$T = 1/f_s$$

the period  $T$  defines the sampling frequency  $f_s$ . Then,  $\omega_s = 2\pi f_s$  or  $f_s = \omega_s/2\pi$ , and

$$T = (2\pi)/\omega_s$$

Therefore, we express (9.70) as

$$\theta = \omega \frac{2\pi}{\omega_s} = 2\pi \frac{\omega}{\omega_s} \tag{9.71}$$

and by substitution of (9.69) and (9.71) into (9.68), we get

$$z = e^{\sigma T} e^{j2\pi(\omega/\omega_s)} \tag{9.72}$$

The quantity  $e^{j2\pi(\omega/\omega_s)}$  in (9.72), defines the unity circle; therefore, let us examine the behavior of  $z$  when  $\sigma$  is negative, zero, or positive.

**Case I  $\sigma < 0$ :** When  $\sigma$  is negative, from (9.69), we see that  $|z| < 1$ , and thus the left half of the  $s$ -plane maps inside the unit circle of the  $z$ -plane, and for different negative values of  $\sigma$ , we get concentric circles with radius less than unity.

**Case II  $\sigma > 0$ :** When  $\sigma$  is positive, from (9.69), we see that  $|z| > 1$ , and thus the right half of the  $s$ -plane maps outside the unit circle of the  $z$ -plane, and for different positive values of  $\sigma$  we get concentric circles with radius greater than unity.

**Case III  $\sigma = 0$ :** When  $\sigma$  is zero, from (9.72), we see that  $z = e^{j2\pi(\omega/\omega_s)}$  and all values of  $\omega$  lie on the circumference of the unit circle. For illustration purposes, we have mapped several fractional values of the sampling radian frequency  $\omega_s$ , and these are shown in Table 9.3.

From Table 9.3, we see that the portion of the  $j\omega$  axis for the interval  $0 \leq \omega \leq \omega_s$  in the  $s$ -plane, maps on the circumference of the unit circle in the  $z$ -plane as shown in Figure 9.5.

The mapping from the  $z$ -plane to the  $s$ -plane is a multi-valued transformation since, as we have seen,  $s = \frac{1}{T} \ln z$  and it is shown in complex variables textbooks that

$$\ln z = \ln z + j2n\pi \tag{9.73}$$

TABLE 9.3 Mapping of multiples of sampling frequency

$\omega$	$ z $	$\theta$
0	1	0
$\omega_s/8$	1	$\pi/4$
$\omega_s/4$	1	$\pi/2$
$3\omega_s/8$	1	$3\pi/4$
$\omega_s/2$	1	$\pi$
$5\omega_s/8$	1	$5\pi/4$
$3\omega_s/4$	1	$3\pi/2$
$7\omega_s/8$	1	$7\pi/4$
$\omega_s$	1	$2\pi$

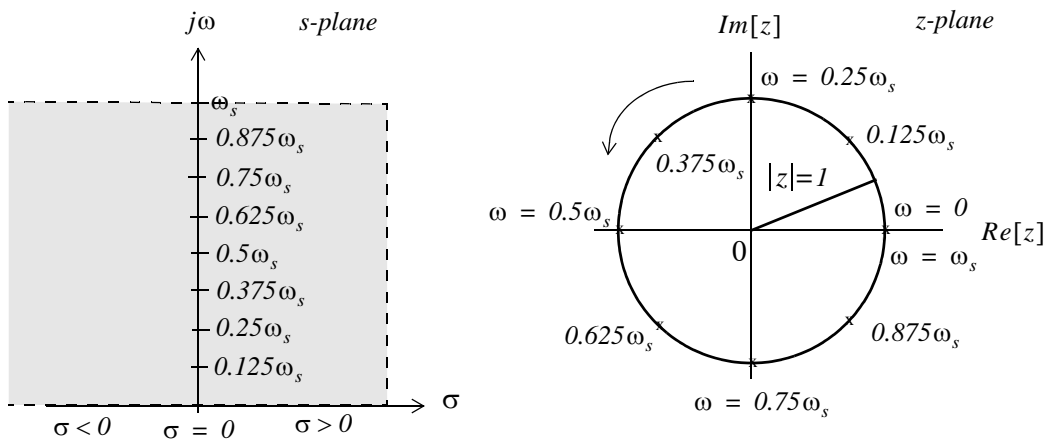


Figure 9.5. Mapping of the s-plane to z-plane

## 9.6 The Inverse $\mathcal{Z}$ Transform

The Inverse  $\mathcal{Z}$  transform enables us to extract  $f[n]$  from  $F(z)$ . It can be found by any of the following three methods:

- Partial Fraction Expansion
- The Inversion Integral
- Long Division of polynomials



We will discuss these methods, and we will illustrate with examples.

**a. Partial Fraction Expansion**

This method is very similar to the partial fraction expansion method that we used in finding the Inverse Laplace transform, that is, we expand  $F(z)$  into a summation of terms whose inverse is known. These terms have the form

$$k, \frac{r_1 z}{z - p_1}, \frac{r_2 z}{(z - p_1)^2}, \frac{r_3 z}{z - p_2}, \dots \quad (9.74)$$

where  $k$  is a constant, and  $r_i$  and  $p_i$  represent the residues and poles respectively; these can be real or complex.

Before we expand  $F(z)$  into partial fractions, we must express it as a proper rational function. This is done by expanding  $F(z)/z$  instead of  $F(z)$ , that is, we expand it as

$$\frac{F(z)}{z} = \frac{k}{z} + \frac{r_1}{z - p_1} + \frac{r_2}{z - p_2} + \dots \quad (9.75)$$

and after the residues are found from

$$r_k = \lim_{z \rightarrow p_k} (z - p_k) \frac{F(z)}{z} = (z - p_k) \frac{F(z)}{z} \Big|_{z = p_k} \quad (9.76)$$

we rewrite (9.75) as

$$F(z) = k + \frac{r_1 z}{z - p_1} + \frac{r_2 z}{z - p_2} + \dots \quad (9.77)$$

**Example 9.9**

Use the partial fraction expansion method to compute the Inverse  $\mathcal{Z}$  transform of

$$F(z) = \frac{1}{(1 - 0.5z^{-1})(1 - 0.75z^{-1})(1 - z^{-1})} \quad (9.78)$$

**Solution:**

We multiply both numerator and denominator by  $z^3$  to eliminate the negative powers of  $z$ . Then,

$$F(z) = \frac{z^3}{(z - 0.5)(z - 0.75)(z - 1)}$$

Next, we form  $F(z)/z$ , and we expand in partial fractions as

$$\frac{F(z)}{z} = \frac{z^2}{(z-0.5)(z-0.75)(z-1)} = \frac{r_1}{(z-0.5)} + \frac{r_2}{(z-0.75)} + \frac{r_3}{(z-1)}$$

The residues are

$$r_1 = \left. \frac{z^2}{(z-0.75)(z-1)} \right|_{z=0.5} = \frac{(0.5)^2}{(0.5-0.75)(0.5-1)} = 2$$

$$r_2 = \left. \frac{z^2}{(z-0.5)(z-1)} \right|_{z=0.75} = \frac{(0.75)^2}{(0.75-0.5)(0.75-1)} = -9$$

$$r_3 = \left. \frac{z^2}{(z-0.5)(z-0.75)} \right|_{z=1} = \frac{1^2}{(1-0.5)(1-0.75)} = 8$$

Then,

$$\frac{F(z)}{z} = \frac{z^2}{(z-0.5)(z-0.75)(z-1)} = \frac{2}{(z-0.5)} + \frac{-9}{(z-0.75)} + \frac{8}{(z-1)}$$

and multiplication of both sides by  $z$  yields

$$F(z) = \frac{z^3}{(z-0.5)(z-0.75)(z-1)} = \frac{2z}{(z-0.5)} + \frac{-9z}{(z-0.75)} + \frac{8z}{(z-1)} \quad (9.79)$$

To find the Inverse  $\mathcal{Z}$  transform of (9.79), we recall that

$$a^n \Leftrightarrow \frac{z}{z-a}$$

for  $|z| > a$ . Therefore, the discrete time sequence is

$$f[n] = 2(0.5)^n - 9(0.75)^n + 8 \quad (9.80)$$

Check with MATLAB:

```
Dz=(z-0.5)*(z-0.75)*(z-1)    % The denominator of F(z)
collect(Dz);                  % Multiply the three factors of F(z) to get a polynomial

ans =
z^3-9/4*z^2+13/8*z-3/8

num=[0 1 0 0];                % The coefficients of the numerator
den=[1 -9/4 13/8 -3/8];       % The coefficients of the denominator
fprintf('\n');
[num,den]=residue(num,den);    % Verify the residues in (9.79)
fprintf('r1 = %4.2f \t', num(1)); fprintf('p1 = %4.2f \t', den(1));...
fprintf('r2 = %4.2f \t', num(2)); fprintf('p2 = %4.2f \t', den(2));...
fprintf('r3 = %4.2f \t', num(3)); fprintf('p3 = %4.2f \t', den(3))
```

r1 = 8.00 p1 = 1.00 r2 = -9.00 p2 = 0.75 r3 = 2.00 p3 = 0.50

```
syms n z
fn=2*(0.5)^n-9*(0.75)^n+8; % This is the answer in (9.80)
Fz=ztrans(fn,n,z); simple(Fz) % Verify answer by first taking Z transform of f[n]

ans =
8*z^3 / (2*z-1) / (4*z-3) / (z-1)

iztrans(Fz) % Now, verify that Inverse of F(z) gives back f[n]

ans =
2*(1/2)^n-9*(3/4)^n+8
```

We can use Microsoft Excel to obtain and plot the values of  $f[n]$ . The spreadsheet of Figure 9.6 shows the first 25 values of  $n$  but only part of the spreadsheet is shown.

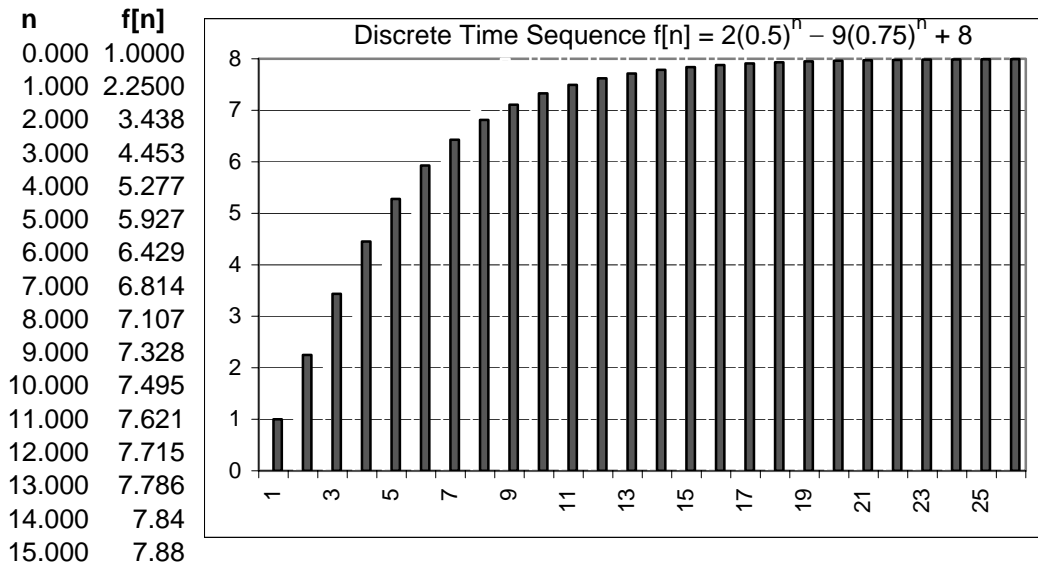


Figure 9.6. The discrete time sequence  $f[n] = 2(0.5)^n - 9(0.75)^n + 8$

**Example 9.10**

Use the partial fraction expansion method to compute the Inverse  $\mathcal{Z}$  transform of

$$F(z) = \frac{12z}{(z+1)(z-1)^2} \tag{9.81}$$

**Solution:**

Division of both sides by  $z$  and partial expansion yields

$$\frac{F(z)}{z} = \frac{12}{(z+1)(z-1)^2} = \frac{r_1}{z+1} + \frac{r_2}{(z-1)^2} + \frac{r_3}{z-1}$$

The residues are

$$r_1 = \left. \frac{12}{(z-1)^2} \right|_{z=-1} = \frac{12}{(-1-1)^2} = 3$$

$$r_2 = \left. \frac{12}{z+1} \right|_{z=1} = \frac{12}{1+1} = 6$$

$$r_3 = \left. \frac{d}{dz} \left( \frac{12}{z+1} \right) \right|_{z=1} = \frac{-12}{(z+1)^2} = -3$$

Then,

$$\frac{F(z)}{z} = \frac{12}{(z+1)(z-1)^2} = \frac{3}{z+1} + \frac{6}{(z-1)^2} + \frac{-3}{z-1}$$

or

$$F(z) = \frac{12z}{(z+1)(z-1)^2} = \frac{3z}{z-(-1)} + \frac{6z}{(z-1)^2} + \frac{-3z}{z-1}$$

Now, we recall that

$$u_0[n] \Leftrightarrow \frac{z}{z-1}$$

and

$$nu_0[n] \Leftrightarrow \frac{z}{(z-1)^2}$$

for  $|z| > 1$ .

Therefore, the discrete time sequence is

$$f[n] = 3(-1)^n + 6n - 3 \quad (9.82)$$

Check with MATLAB:

```
syms n z; fn=3*(-1)^n+6*n-3; Fz=ztrans(fn); simple(Fz)
```

```
ans =
```

```
12*z/(z+1)/(z-1)^2
```

We can also use the MATLAB **dimpulse** function to compute and display  $f[n]$  for any range of values of  $n$ . The following code will display the first 20 values of  $f[n]$  in (9.82).

```
% First, we must express the denominator of F(z) as a polynomial
```

```
denpol=collect((z+1)*((z-1)^2))
```

```

denpol =
z^3-z^2-z+1

num=[12 0];           % The coefficients of the numerator of F(z) in (9.81)
den=[1 -1 -1 1];     % The coefficients of the denominator in polynomial form
fn=dimpulse(num,den,20) % Compute the first 20 values of f[n]

fn =
    0
    0
   12
   12
   24
   24
   36
   36
   48
   48
   60
   60
   72
   72
   84
   84
   96
   96
  108
  108

```

The MATLAB function **dimpulse(num,den)** plots the impulse response of the polynomial transfer function  $G(z) = num(z)/den(z)$  where  $num(z)$  and  $den(z)$  contain the polynomial coefficients in descending powers of  $z$ . Thus, the MATLAB code

```
num=[0 0 12 0]; den=[1 -1 -1 1]; dimpulse(num,den)
```

displays the plot of Figure 9.7.

### Example 9.11

Use the partial fraction expansion method to compute the Inverse  $\mathcal{Z}$  transform of

$$F(z) = \frac{z+1}{(z-1)(z^2+2z+2)} \quad (9.83)$$

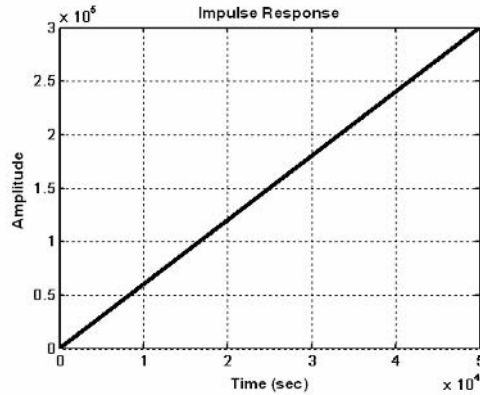


Figure 9.7. The impulse response for Example 9.10

**Solution:**

Dividing both sides by  $z$  and performing partial fraction expansion, we get

$$\frac{F(z)}{z} = \frac{z+1}{z(z-1)(z^2+2z+2)} = \frac{r_1}{z} + \frac{r_2}{z-1} + \frac{r_3}{(z+1-j)} + \frac{r_4}{(z+1+j)} \quad (9.84)$$

The residues are

$$r_1 = \left. \frac{z+1}{(z-1)(z^2+2z+2)} \right|_{z=0} = \frac{1}{-2} = -0.5$$

$$r_2 = \left. \frac{z+1}{(z)(z^2+2z+2)} \right|_{z=1} = \frac{2}{5} = 0.4$$

$$r_3 = \left. \frac{z+1}{(z)(z-1)(z+1+j)} \right|_{z=-1+j} = \frac{j}{(-1+j)(-2+j)(j2)} = 0.05 + j0.15$$

$$r_4 = r_3^* = 0.05 - j0.15$$

Then,

$$\frac{F(z)}{z} = \frac{z+1}{z(z-1)(z^2+2z+2)} = \frac{-0.5}{z} + \frac{0.4}{z-1} + \frac{0.05+j0.15}{(z+1-j)} + \frac{0.05-j0.15}{(z+1+j)}$$

or

$$\begin{aligned} F(z) &= -0.5 + \frac{0.4z}{z-1} + \frac{(0.05+j0.15)z}{(z+1-j)} + \frac{(0.05-j0.15)z}{(z+1+j)} \\ &= -0.5 + \frac{0.4z}{z-1} + \frac{(0.05+j0.15)z}{z-(-1+j)} + \frac{(0.05-j0.15)z}{z-(-1-j)} \\ &= -0.5 + \frac{0.4z}{z-1} + \frac{(0.05+j0.15)z}{z-\sqrt{2}e^{j135^\circ}} + \frac{(0.05-j0.15)z}{z-\sqrt{2}e^{-j135^\circ}} \end{aligned}$$

Recalling that

$$\delta[n] \Leftrightarrow 1$$

and

$$a^n u_0[n] \Leftrightarrow \frac{z}{z-a}$$

for  $|z| > a$ , we find that the discrete time sequence is

$$\begin{aligned} f[n] &= -0.5\delta[n] + 0.4(1)^n + (0.05 + j0.15)(\sqrt{2}e^{j135^\circ})^n \\ &\quad + (0.05 - j0.15)(\sqrt{2}e^{-j135^\circ})^n \\ &= -0.5\delta[n] + 0.4 + 0.05(\sqrt{2}^n e^{jn135^\circ}) + 0.05(\sqrt{2}^n e^{-jn135^\circ}) \\ &\quad + j0.15(\sqrt{2}^n e^{jn135^\circ}) - j0.15(\sqrt{2}^n e^{-jn135^\circ}) \end{aligned}$$

or

$$f[n] = -0.5\delta[n] + 0.4 + \frac{\sqrt{2}^n}{10} \cos n135^\circ - \frac{3\sqrt{2}^n}{10} \sin n135^\circ \quad (9.85)$$

We will use the MATLAB **dimpulse** function to display the first 8 values of  $f[n]$  in (9.85). We recall that this function requires that  $F(z)$  is expressed as a ratio of polynomials in descending order.

`syms n z`

`collect((z-1)*(z^2+2*z+2)) % First, expand denominator of given F(z)`

`ans =`

`z^3+z^2-2`

The following code displays the first 10 values of  $f[n]$  and plots the impulse response shown in Figure 9.8.

`num=[0 0 1 1]; den=[1 1 0 -2]; fn=dimpulse(num,den,11), dimpulse(num,den,16)`

`fn =`

0  
0  
1  
0  
0  
2  
-2  
2  
-6  
10

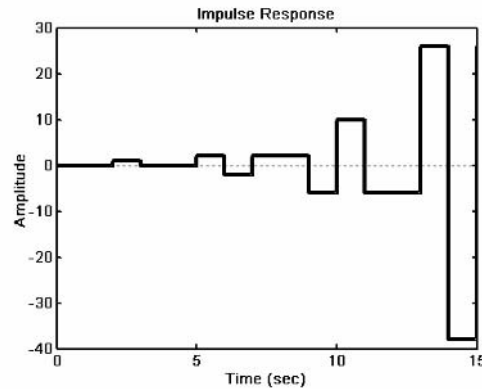


Figure 9.8. The impulse response for Example 9.11

### b. The Inversion Integral\*

The *inversion integral* states that

$$f[n] = \frac{1}{j2\pi} \oint_C F(z)z^{n-1} dz \quad (9.86)$$

where  $C$  is a closed curve that encloses all poles of the integrand, and by Cauchy's residue theorem, this integral can be expressed as

$$f[n] = \sum_k \text{Res}[F(z)z^{n-1}] \Big|_{z=p_k} \quad (9.87)$$

where  $p_k$  represents a pole of  $[F(z)z^{n-1}]$  and  $\text{Res}[F(z)z^{n-1}]$  represents a residue at  $z = p_k$ .

### Example 9.12

Use the inversion integral method to find the Inverse  $\mathcal{Z}$  transform of

$$F(z) = \frac{1 + 2z^{-1} + z^{-3}}{(1 - z^{-1})(1 - 0.75z^{-1})} \quad (9.88)$$

**Solution:**

Multiplication of the numerator and denominator by  $z^3$  yields

---

\* This section may be skipped without loss of continuity. It is intended for readers who have prior knowledge of complex variables theory.



$$\frac{z^3 + 2z^2 + 1}{z(z-1)(z-0.75)} \quad (9.89)$$

and by application of (9.87),

$$f[n] = \sum_k \text{Res} \left[ \frac{(z^3 + 2z^2 + 1)z^{n-1}}{z(z-1)(z-0.75)} \right] \Bigg|_{z=p_k} = \sum_k \text{Res} \left[ \frac{(z^3 + 2z^2 + 1)z^{n-2}}{(z-1)(z-0.75)} \right] \Bigg|_{z=p_k} \quad (9.90)$$

We are interested in the values  $f[0], f[1], f[2], \dots$ , that is, values of  $n = 0, 1, 2, \dots$ .

For  $n = 0$ , (9.90) becomes

$$\begin{aligned} f[0] &= \sum_k \text{Res} \left[ \frac{(z^3 + 2z^2 + 1)}{z^2(z-1)(z-0.75)} \right] \Bigg|_{z=p_k} \\ &= \text{Res} \left[ \frac{(z^3 + 2z^2 + 1)}{z^2(z-1)(z-0.75)} \right] \Bigg|_{z=0} + \text{Res} \left[ \frac{(z^3 + 2z^2 + 1)}{z^2(z-1)(z-0.75)} \right] \Bigg|_{z=1} \\ &\quad + \text{Res} \left[ \frac{(z^3 + 2z^2 + 1)}{z^2(z-1)(z-0.75)} \right] \Bigg|_{z=0.75} \end{aligned} \quad (9.91)$$

The first term on the right side of (9.91) has a pole of order 2 at  $z = 0$ ; therefore, we must evaluate the first derivative of

$$\frac{(z^3 + 2z^2 + 1)}{(z-1)(z-0.75)}$$

at  $z = 0$ . Thus, for  $n = 0$ , (9.91) reduces to

$$\begin{aligned} f[0] &= \frac{d}{dz} \left[ \frac{(z^3 + 2z^2 + 1)}{(z-1)(z-0.75)} \right] \Bigg|_{z=0} + \left[ \frac{(z^3 + 2z^2 + 1)}{z^2(z-0.75)} \right] \Bigg|_{z=1} + \left[ \frac{(z^3 + 2z^2 + 1)}{z^2(z-1)} \right] \Bigg|_{z=0.75} \\ &= \frac{28}{9} + 16 - \frac{163}{9} = 1 \end{aligned} \quad (9.92)$$

For  $n = 1$ , (9.90) becomes

$$\begin{aligned}
 f[1] &= \sum_k \text{Res} \left[ \frac{(z^3 + 2z^2 + 1)}{z(z-1)(z-0.75)} \right] \Bigg|_{z=p_k} \\
 &= \text{Res} \left[ \frac{(z^3 + 2z^2 + 1)}{z(z-1)(z-0.75)} \right] \Bigg|_{z=0} + \text{Res} \left[ \frac{(z^3 + 2z^2 + 1)}{z(z-1)(z-0.75)} \right] \Bigg|_{z=1} \\
 &\quad + \text{Res} \left[ \frac{(z^3 + 2z^2 + 1)}{z(z-1)(z-0.75)} \right] \Bigg|_{z=0.75} \tag{9.93} \\
 &= \left[ \frac{(z^3 + 2z^2 + 1)}{(z-1)(z-0.75)} \right] \Bigg|_{z=0} + \left[ \frac{(z^3 + 2z^2 + 1)}{z(z-0.75)} \right] \Bigg|_{z=1} + \left[ \frac{(z^3 + 2z^2 + 1)}{z(z-1)} \right] \Bigg|_{z=0.75} \\
 &= \frac{4}{3} + 16 - \frac{163}{12} = \frac{15}{4}
 \end{aligned}$$

For  $n \geq 2$  there are no poles at  $z = 0$ , that is, the only poles are at  $z = 1$  and  $z = 0.75$ . Therefore,

$$\begin{aligned}
 f[n] &= \sum_k \text{Res} \left[ \frac{(z^3 + 2z^2 + 1)z^{n-2}}{(z-1)(z-0.75)} \right] \Bigg|_{z=p_k} \\
 &= \text{Res} \left[ \frac{(z^3 + 2z^2 + 1)z^{n-2}}{(z-1)(z-0.75)} \right] \Bigg|_{z=1} + \text{Res} \left[ \frac{(z^3 + 2z^2 + 1)z^{n-2}}{(z-1)(z-0.75)} \right] \Bigg|_{z=0.75} \tag{9.94} \\
 &= \left[ \frac{(z^3 + 2z^2 + 1)z^{n-2}}{(z-0.75)} \right] \Bigg|_{z=1} + \left[ \frac{(z^3 + 2z^2 + 1)z^{n-2}}{(z-1)} \right] \Bigg|_{z=0.75}
 \end{aligned}$$

for  $n \geq 2$ .

From (9.94), we observe that for all values of  $n \geq 2$ , the exponential factor  $z^{n-2}$  is always unity for  $z = 1$ , but varies for values  $z \neq 1$ . Then,

$$\begin{aligned}
 f[n] &= \left[ \frac{(z^3 + 2z^2 + 1)}{(z-0.75)} \right] \Bigg|_{z=1} + \left[ \frac{(z^3 + 2z^2 + 1)z^{n-2}}{(z-1)} \right] \Bigg|_{z=0.75} \\
 &= \frac{4}{0.25} + \frac{[0.75^3 + 2(0.75)^2 + 1](0.75)^{n-2}}{-0.25} \tag{9.95} \\
 &= 16 + \frac{(163/64)(0.75)^n}{(-0.25)(0.75)^2} = 16 - \frac{163}{9}(0.75)^n
 \end{aligned}$$

for  $n \geq 2$ .

We can express  $f[n]$  for all  $n \geq 0$  as

$$f[n] = \frac{28}{9}\delta[n] + \frac{4}{3}\delta[n-1] + 16 - \frac{163}{9}(0.75)^n \tag{9.96}$$

where the coefficients of  $\delta[n]$  and  $\delta[n-1]$  are the residues that were found in (9.92) and (9.93) for  $n = 0$  and  $n = 1$  respectively at  $z = 0$ . The coefficient  $28/9$  is multiplied by  $\delta[n]$  to emphasize that this value exists only for  $n = 0$  and coefficient  $4/3$  is multiplied by  $\delta[n-1]$  to emphasize that this value exists only for  $n = 1$ .

Check with MATLAB:

```
syms z n; Fz=(z^3+2*z^2+1)/(z*(z-1)*(z-0.75)); iztrans(Fz)
```

```
ans =
4/3*charfcn[1](n)+28/9*charfcn[0](n)+16-163/9*(3/4)^n
```

We evaluate and plot  $f[n]$  for the first 20 values. This is shown on the spreadsheet of Figure 9.9.

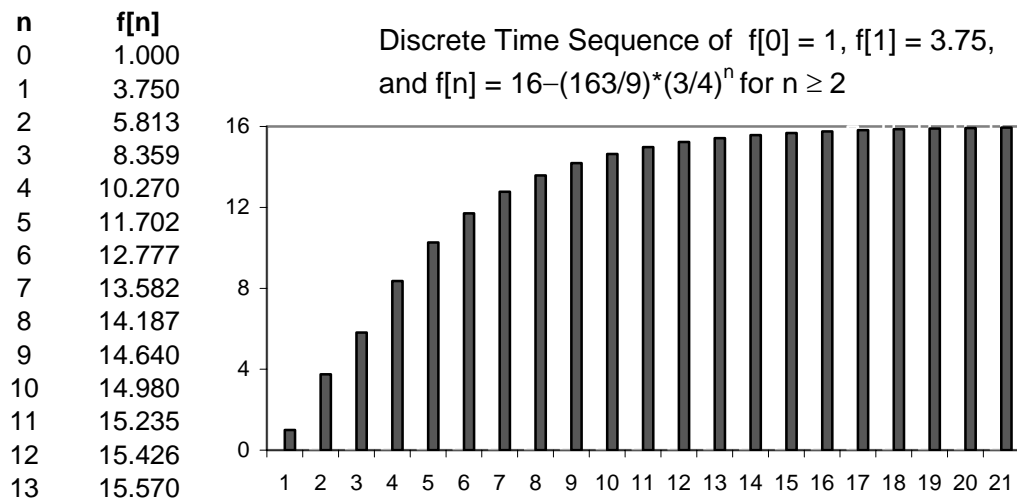


Figure 9.9. The discrete time sequence for Example 9.12

**Example 9.13**

Use the inversion integral method to find the Inverse  $\mathcal{Z}$  transform of

$$F(z) = \frac{1}{(1-z^{-1})(1-0.75z^{-1})} \tag{9.97}$$

**Solution:**

Multiplication of the numerator and denominator by  $z^2$  yields

$$\frac{z^2}{(z-1)(z-0.75)} \quad (9.98)$$

This function has no poles at  $z = 0$ . The poles are at  $z = 1$  and  $z = 0.75$ . Then by (9.87),

$$\begin{aligned} f[n] &= \sum_k \text{Res} \left[ \frac{z^2 z^{n-1}}{(z-1)(z-0.75)} \right] \Bigg|_{z=p_k} = \sum_k \text{Res} \left[ \frac{z^{n+1}}{(z-1)(z-0.75)} \right] \Bigg|_{z=p_k} \\ &= \text{Res} \left[ \frac{z^{n+1}}{(z-1)(z-0.75)} \right] \Bigg|_{z=1} + \text{Res} \left[ \frac{z^{n+1}}{(z-1)(z-0.75)} \right] \Bigg|_{z=0.75} \\ &= \left[ \frac{z^{n+1}}{(z-0.75)} \right] \Bigg|_{z=1} + \left[ \frac{z^{n+1}}{(z-1)} \right] \Bigg|_{z=0.75} = \frac{1^{n+1}}{0.25} + \frac{(0.75)^{n+1}}{(-0.25)} \\ &= 4 - \frac{(0.75)^n}{(0.25)(0.75)} = 4 - \frac{16}{3}(0.75)^n \end{aligned} \quad (9.99)$$

### c. Long Division of Polynomials

To apply this method,  $F(z)$  must be a rational function, and the numerator and denominator must be polynomials arranged in descending powers of  $z$ .

#### Example 9.14

Use the long division method to determine  $f[n]$  for  $n = 0, 1$ , and  $2$ , given that

$$F(z) = \frac{1 + z^{-1} + 2z^{-2} + 3z^{-3}}{(1 - 0.25z^{-1})(1 - 0.5z^{-1})(1 - 0.75z^{-1})} \quad (9.100)$$

#### Solution:

First, we multiply numerator and denominator by  $z^3$ , expand the denominator to a polynomial, and arrange the numerator and denominator polynomials in descending powers of  $z$ . Then,

$$F(z) = \frac{z^3 + z^2 + 2z + 3}{(z - 0.25)(z - 0.5)(z - 0.75)}$$

Next, we use the MATLAB **collect** function to expand the denominator to a polynomial.

```
syms z; den=collect((z-0.25)*(z-0.5)*(z-0.75))
```

```
den =  
z^3 - 3/2 * z^2 + 11/16 * z - 3/32
```

Thus,

$$F(z) = \frac{z^3 + z^2 + 2z + 3}{z^3 - \frac{3}{2}z^2 + \frac{11}{16}z - \frac{3}{32}} \quad (9.101)$$

Now we perform long division as shown in Figure 9.10.

<i>Divisor</i>	$1 + \frac{5}{2}z^{-1} + \frac{81}{16}z^{-2} + \dots$	<i>Quotient</i>
$z^3 - \frac{3}{2}z^2 + \frac{11}{16}z - \frac{3}{32}$	$z^3 + z^2 + 2z + 3$	<i>Dividend</i>
	$z^3 - \frac{3}{2}z^2 + \frac{11}{16}z - \frac{3}{32}$	
	$\frac{5}{2}z^2 + \frac{21}{16}z + \frac{35}{32}$	<i>1st Remainder</i>
	$\frac{5}{2}z^2 - \frac{15}{4}z + \frac{55}{32} - \frac{15}{64}z^{-1}$	
	$\frac{81}{16}z - \dots + \dots$	<i>2nd Remainder</i>

Figure 9.10. Long division for the polynomials of Example 9.14

We find that the quotient  $Q(z)$  is

$$Q(z) = 1 + \frac{5}{2}z^{-1} + \frac{81}{16}z^{-2} + \dots \quad (9.102)$$

By definition of the  $\mathcal{Z}$  transform,

$$F(z) = \sum_{n=0}^{\infty} f[n]z^{-n} = f[0] + f[1]z^{-1} + f[2]z^{-2} + \dots \quad (9.103)$$

Equating like terms in (9.102) and (9.103), we get

$$f[0] = 1, \quad f[1] = 5/2 \quad \text{and} \quad f[2] = 81/16 \quad (9.104)$$

We will use the MATLAB **dimpulse** function to verify the answers, and to obtain the sequence of the first 15 values of  $f[n]$ .

```
num=[1 1 2 3]; den=[1 -3/2 11/16 -3/32]; fn=dimpulse(num,den,15),...
dimpulse(num,den,16)
fn =
    1.0000
    2.5000
    5.0625
```

8.9688  
 10.2070  
 9.6191  
 8.2522  
 6.7220  
 5.3115  
 4.1195  
 3.1577  
 2.4024  
 1.8189  
 1.3727  
 1.0338

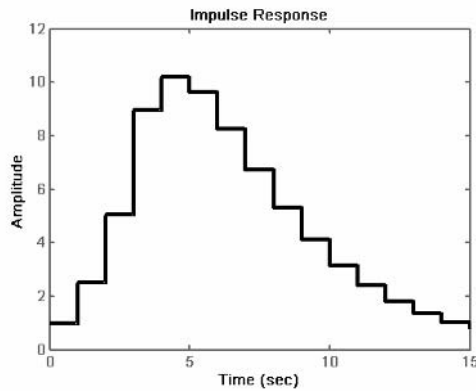


Figure 9.11. Impulse response for Example 9.14

Table 9.4 lists the advantages and disadvantages of the three methods of evaluating the Inverse  $\mathcal{Z}$  transform.

### 9.7 The Transfer Function of Discrete Time Systems

The discrete time system of Figure 9.12, can be described by the *linear difference equation*




Figure 9.12. Block diagram for discrete time system

$$\begin{aligned}
 & y[n] + b_1y[n-1] + b_2y[n-2] + \dots + b_ky[n-k] \\
 & = a_0x[n] + a_1x[n-1] + a_2x[n-2] + \dots + a_kx[n-k]
 \end{aligned}
 \tag{9.105}$$

TABLE 9.4 Methods of Evaluation of the Inverse  $\mathcal{Z}$  transform

<i>Method</i>	<i>Advantages</i>	<i>Disadvantages</i>
Partial Fraction Expansion	<ul style="list-style-type: none"> <li>• Most familiar</li> <li>• Can use the MATLAB <b>residue</b> function</li> </ul>	<ul style="list-style-type: none"> <li>• Requires that <math>F(z)</math> is a proper rational function</li> </ul>
Inversion Integral	<ul style="list-style-type: none"> <li>• Can be used whether <math>F(z)</math> is a rational function or not</li> </ul>	<ul style="list-style-type: none"> <li>• Requires familiarity with the Residues theorem</li> </ul>
Long Division	<ul style="list-style-type: none"> <li>• Practical when only a small sequence of numbers is desired.</li> <li>• Useful when Inverse <math>\mathcal{Z}</math> has no closed form solution</li> <li>• Can use the MATLAB <b>dimpulse</b> function for large sequence of numbers</li> </ul>	<ul style="list-style-type: none"> <li>• Requires that <math>F(z)</math> is a proper rational function</li> <li>• Division may be endless</li> </ul>

where  $a_i$  and  $b_i$  are constant coefficients. In a compact form,

$$y[n] = \sum_{i=0}^k a_i x[n-i] - \sum_{i=0}^k b_i y[n-i] \quad (9.106)$$

Assuming that all initial conditions are zero, taking the  $\mathcal{Z}$  transform of both sides of (9.106), and using the  $\mathcal{Z}$  transform pair

$$[f[n-m]] \Leftrightarrow z^{-m}F(z)$$

we get

$$\begin{aligned} Y(z) + b_1 z^{-1} Y(z) + b_2 z^{-2} Y(z) + \dots + b_k z^{-k} Y(z) \\ = a_0 X(z) + a_1 z^{-1} X(z) + a_2 z^{-2} X(z) + \dots + a_k z^{-k} X(z) \end{aligned} \quad (9.107)$$

$$\begin{aligned} (1 + b_1 z^{-1} + b_2 z^{-2} + \dots + b_k z^{-k}) Y(z) \\ = (a_0 + a_1 z^{-1} + a_2 z^{-2} + \dots + a_k z^{-k}) X(z) \end{aligned} \quad (9.108)$$

$$Y(z) = \frac{a_0 + a_1 z^{-1} + a_2 z^{-2} + \dots + a_k z^{-k}}{1 + b_1 z^{-1} + b_2 z^{-2} + \dots + b_k z^{-k}} X(z) \quad (9.109)$$

---

## Chapter 9 Discrete Time Systems and the Z Transform

---

We define the *discrete time system transfer function*  $H(z)$  as

$$H(z) = \frac{N(z)}{D(z)} = \frac{a_0 + a_1z^{-1} + a_2z^{-2} + \dots + a_kz^{-k}}{1 + b_1z^{-1} + b_2z^{-2} + \dots + b_kz^{-k}} \quad (9.110)$$

and by substitution of (9.110) into (9.109), we get

$$\boxed{Y(z) = H(z)X(z)} \quad (9.111)$$

The *discrete impulse response*  $h[n]$  is the response to the input  $x[n] = \delta[n]$ , and since

$$\mathcal{Z} \{ \delta[n] \} = \sum_{n=0}^{\infty} \delta[n]z^{-n} = 1$$

we can find the discrete time impulse response  $h[n]$  by taking the Inverse  $\mathcal{Z}$  transform of the discrete transfer function  $H(z)$ , that is,

$$\boxed{h[n] = \mathcal{Z}^{-1} \{ H(z) \}} \quad (9.112)$$

### Example 9.15

The difference equation describing the input-output relationship of a discrete time system with zero initial conditions, is

$$y[n] - 0.5y[n-1] + 0.125y[n-2] = x[n] + x[n-1] \quad (9.113)$$

Compute:

- The transfer function  $H(z)$
- The discrete time impulse response  $h[n]$
- The response when the input is the discrete unit step  $u_0[n]$

**Solution:**

- Taking the  $\mathcal{Z}$  transform of both sides of (9.113), we get

$$Y(z) - 0.5z^{-1}Y(z) + 0.125z^{-2}Y(z) = X(z) + z^{-1}X(z)$$

and thus

$$H(z) = \frac{Y(z)}{X(z)} = \frac{1 + z^{-1}}{1 - 0.5z^{-1} + 0.125z^{-2}} = \frac{z^2 + z}{z^2 - 0.5z + 0.125} \quad (9.114)$$



- b. To obtain the discrete time impulse response  $h[n]$ , we need to compute the Inverse  $\mathcal{Z}$  transform of (9.114). We first divide both sides by  $z$  and we get:

$$\frac{H(z)}{z} = \frac{z+1}{z^2 - 0.5z + 0.125} \quad (9.115)$$

Using the MATLAB **residue** function, we obtain the residues and the poles of (9.115) as follows:

```
num=[0 1 1]; den=[1 -0.5 0.125]; [num,den]=residue(num,den);fprintf(' \n');...
disp('r1 = '); disp(num(1)); disp('p1 = '); disp(den(1));...
disp('r2 = '); disp(num(2)); disp('p2 = '); disp(den(2))
```

```
r1 =
    0.5000 - 2.5000i
```

```
p1 =
    0.2500 + 0.2500i
```

```
r2 =
    0.5000 + 2.5000i
```

```
p2 =
    0.2500 - 0.2500i
```

and thus,

$$\frac{H(z)}{z} = \frac{0.5 - j2.5}{z - 0.25 - j0.25} + \frac{0.5 + j2.5}{z - 0.25 + j0.25}$$

or

$$H(z) = \frac{(0.5 - j2.5)z}{z - (0.25 + j0.25)} + \frac{(0.5 + j2.5)z}{z - (0.25 - j0.25)} = \frac{(0.5 - j2.5)z}{z - 0.25\sqrt{2}e^{j45^\circ}} + \frac{(0.5 + j2.5)z}{z - 0.25\sqrt{2}e^{-j45^\circ}} \quad (9.116)$$

Recalling that

$$a^n u_0[n] \Leftrightarrow \frac{z}{z-a}$$

for  $|z| > a$ , the discrete impulse response sequence  $h[n]$  is

$$\begin{aligned} h[n] &= (0.5 - j2.5)(0.25\sqrt{2}e^{j45^\circ})^n + (0.5 + j2.5)(0.25\sqrt{2}e^{-j45^\circ})^n \\ &= 0.5[(0.25\sqrt{2})^n e^{jn45^\circ}] + 0.5[(0.25\sqrt{2})^n e^{-jn45^\circ}] \\ &\quad - j2.5[(0.25\sqrt{2})^n e^{jn45^\circ}] + j2.5[(0.25\sqrt{2})^n e^{-jn45^\circ}] \\ &= 0.5[(0.25\sqrt{2})^n (e^{jn45^\circ} + e^{-jn45^\circ})] - j2.5(0.25\sqrt{2})^n (e^{jn45^\circ} - e^{-jn45^\circ}) \end{aligned}$$

or

---

## Chapter 9 Discrete Time Systems and the Z Transform

---

$$h[n] = \left(\frac{\sqrt{2}}{4}\right)^n (\cos n45^\circ + 5 \sin n45^\circ) \quad (9.117)$$

c. From  $Y(z) = H(z)X(z)$ , the transform  $u_0[n] \Leftrightarrow \frac{z}{z-1}$ , and using the result of part (a) we get:

$$Y(z) = \frac{z^2 + z}{z^2 - 0.5z + 0.125} \cdot \frac{z}{z-1} = \frac{z(z^2 + z)}{(z^2 - 0.5z + 0.125)(z-1)}$$

or

$$\frac{Y(z)}{z} = \frac{(z^2 + z)}{(z^2 - 0.5z + 0.125)(z-1)} \quad (9.118)$$

We will use the MATLAB **residue** function to compute the residues and poles of expression (9.117). First, we must express the denominator as a polynomial.

```
syms z; denom=(z^2-0.5*z+0.125)*(z-1); collect(denom)
```

```
ans =  
z^3-3/2*z^2+5/8*z-1/8
```

Then,

$$\frac{Y(z)}{z} = \frac{z^2 + z}{z^3 - (3/2)z^2 + (5/8)z - 1/8} \quad (9.119)$$

Now, we compute the residues and poles.

```
num=[0 1 1 0]; den=[1 -3/2 5/8 -1/8]; [num,den]=residue(num,den); fprintf('\n');...  
disp('r1 = '); disp(num(1)); disp('p1 = '); disp(den(1));...  
disp('r2 = '); disp(num(2)); disp('p2 = '); disp(den(2));...  
disp('r3 = '); disp(num(3)); disp('p3 = '); disp(den(3))  
  
r1 =  
3.2000  
  
p1 =  
1.0000  
  
r2 =  
-1.1000 + 0.3000i  
  
p2 =  
0.2500 + 0.2500i  
  
r3 =  
-1.1000 - 0.3000i
```

$$p_3 = 0.2500 - 0.2500i$$

With these values, we express (9.119) as

$$\frac{Y(z)}{z} = \frac{z^2 + z}{z^3 - (3/2)z^2 + (5/8)z - 1/8} = \frac{3.2}{z-1} + \frac{-1.1 + j0.3}{z-0.25-j0.25} + \frac{-1.1-j0.3}{z-0.25+j0.25} \quad (9.120)$$

or

$$\begin{aligned} Y(z) &= \frac{3.2z}{z-1} + \frac{(-1.1 + j0.3)z}{z-0.25-j0.25} + \frac{(-1.1-j0.3)z}{z-0.25+j0.25} \\ &= \frac{3.2z}{z-1} + \frac{(-1.1 + j0.3)z}{z-0.25\sqrt{2}e^{j45^\circ}} + \frac{(-1.1-j0.3)z}{z-0.25\sqrt{2}e^{-j45^\circ}} \end{aligned} \quad (9.121)$$

Recalling that

$$a^n u_0[n] \Leftrightarrow \frac{z}{z-a}$$

for  $|z| > a$ , we find that the discrete output response sequence is

$$\begin{aligned} y[n] &= 3.2 + (-1.1 + j0.3)(0.25\sqrt{2}e^{j45^\circ})^n - (1.1 + j0.3)(0.25\sqrt{2}e^{-j45^\circ})^n \\ &= 3.2 - 1.1[(0.25\sqrt{2})^n (e^{jn45^\circ} + e^{-jn45^\circ})] + j0.3[(0.25\sqrt{2})^n (e^{jn45^\circ} - e^{-jn45^\circ})] \end{aligned}$$

or

$$\begin{aligned} y[n] &= 3.2 - 2.2 \left(\frac{\sqrt{2}}{4}\right)^n \cos n45^\circ - 0.6 \left(\frac{\sqrt{2}}{4}\right)^n \sin n45^\circ \\ &= 3.2 - \left(\frac{\sqrt{2}}{4}\right)^n (2.2 \cos n45^\circ + 0.6 \sin n45^\circ) \end{aligned} \quad (9.122)$$

The plots for the discrete time sequences  $h[n]$  and  $y[n]$  are shown in Figure 9.13.

## 9.8 State Equations for Discrete Time Systems

As with continuous time systems, we select *state variables for discrete time systems*, either from block diagrams that relate the input-output information, or directly from a difference equation.

Consider the block diagram of Figure 9.14. We learned in Chapter 5 that the state equations representing this continuous time system are

$$\begin{aligned} \dot{x} &= Ax + bu \\ y &= Cx + du \end{aligned} \quad (9.123)$$

## Chapter 9 Discrete Time Systems and the Z Transform

In a discrete time block diagram, the integrator is replaced by a delay device. The analogy between an integrator and a unit delay device is shown in Figure 9.15.

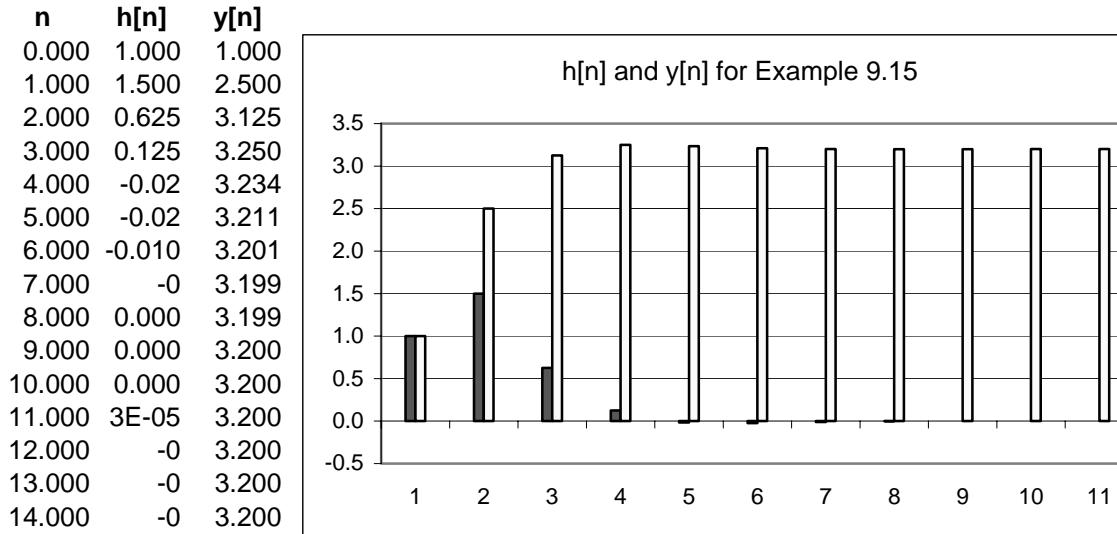


Figure 9.13. Plots of  $h[n]$  and  $y[n]$  for Example 9.15

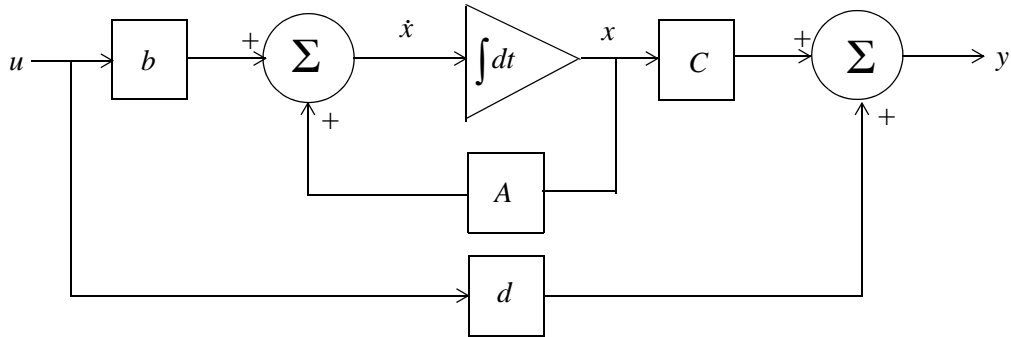


Figure 9.14. Block diagram for a continuous time system

### Example 9.16

The input-output relation for a discrete time system is

$$y[n + 3] + 2y[n + 2] + 5y[n + 1] + y[n] = u[n] \quad (9.124)$$

where  $u[n]$  is any input, and  $y[n]$  is the output. Write the discrete time state equations for this system.

#### Solution:

We choose our state variables as the output and the output advanced by one and by two time steps. Thus, we choose the discrete state variables as

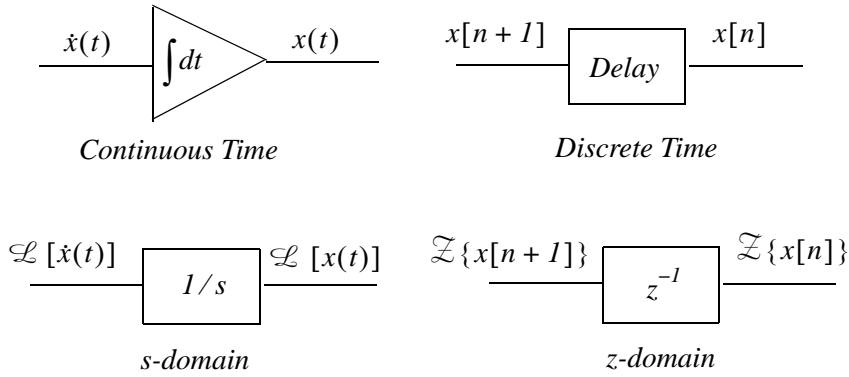


Figure 9.15. Analogy between integration and delay devices

$$x_1[n] = y[n] \quad x_2[n] = y[n + 1] \quad x_3[n] = y[n + 2] \quad (9.125)$$

Then,

$$\begin{aligned} x_3[n + 1] &= y[n + 3] \\ x_2[n + 1] &= y[n + 2] = x_3[n] \\ x_1[n + 1] &= y[n + 1] = x_2[n] \end{aligned}$$

Thus, the state equations are

$$\begin{aligned} x_1[n + 1] &= x_2[n] \\ x_2[n + 1] &= x_3[n] \\ x_3[n + 1] &= -2x_3[n] - 5x_2[n] - x_1[n] = u[n] \end{aligned}$$

and in matrix form,

$$\begin{bmatrix} x_1[n + 1] \\ x_2[n + 1] \\ x_3[n + 1] \end{bmatrix} = \begin{bmatrix} 0 & 1 & 0 \\ 0 & 0 & 1 \\ -1 & -5 & -2 \end{bmatrix} \cdot \begin{bmatrix} x_1[n] \\ x_2[n] \\ x_3[n] \end{bmatrix} + \begin{bmatrix} 0 \\ 0 \\ 1 \end{bmatrix} u[n] \quad (9.126)$$

The general form of the solution is

$$x[n] = A^n x[0] + \sum_{i=0}^{n-1} A^{n-1-i} b[i] u[i] \quad (9.127)$$

The discrete time state equations are written in a more compact form as

$$\begin{aligned} x[n + 1] &= Ax[n] + bu[n] \\ y[n] &= Cx[n] + du[n] \end{aligned} \quad (9.128)$$

---

## Chapter 9 Discrete Time Systems and the Z Transform

---

We can use the MATLAB **c2d** function to convert the continuous time state space equation

$$\dot{x}(t) = Ax(t) + bu(t) \quad (9.129)$$

to the discrete time state space equation

$$x[n+1] = A_{disc}x[n] + b_{disc}u[n] \quad (9.130)$$

where the subscript *disc* stands for discrete,  $n$  indicates the present sample, and  $n+1$  the next.

### Example 9.17

Use the MATLAB **c2d** function to convert the continuous time state space equation

$$\dot{x}(t) = Ax(t) + bu(t)$$

where

$$A = \begin{bmatrix} 0 & 1 \\ -3 & -4 \end{bmatrix} \text{ and } b = \begin{bmatrix} 0 \\ 1 \end{bmatrix} \quad (9.131)$$

to discrete time state space equation with sampling period  $T_s = 0.1$  s.

**Solution:**

```
Adisc=[0 1; -3 -4]; bdisc=[0 1]'; [Adisc,bdisc]=c2d(Adisc,bdisc,0.1)
```

```
Adisc =
```

```
    0.9868    0.0820  
   -0.2460    0.6588
```

```
bdisc =
```

```
    0.0044  
    0.0820
```

and therefore, the equivalent discrete time state space equation is

$$\begin{bmatrix} x_1[n+1] \\ x_2[n+1] \end{bmatrix} = \begin{bmatrix} 0.9868 & 0.0820 \\ -0.2460 & 0.6588 \end{bmatrix} \cdot \begin{bmatrix} x_1[n] \\ x_2[n] \end{bmatrix} + \begin{bmatrix} 0.0044 \\ 0.0820 \end{bmatrix} u[n] \quad (9.132)$$

The MATLAB **d2c** function converts the discrete-time state equation

$$x[n+1] = A_{disc}x[n] + b_{disc}u[n]$$

to the continuous time state equation

$$\dot{x}(t) = Ax(t) + bu(t)$$

We can invoke the MATLAB command **help d2c** to obtain a detailed description of this function.

## 9.9 Summary

- The  $\mathcal{Z}$  transform performs the transformation from the domain of discrete time signals, to another domain which we call  $z$ -domain. It is used with discrete time signals, the same way the Laplace and Fourier transforms are used with continuous time signals.
- The one-sided  $\mathcal{Z}$  transform  $F(z)$  of a discrete time function  $f[n]$  defined as

$$F(z) = \sum_{n=0}^{\infty} f[n]z^{-n}$$

and it is denoted as

$$F(z) = \mathcal{Z} \{f[n]\}$$

- The Inverse  $\mathcal{Z}$  transform is defined as

$$f[n] = \frac{1}{j2\pi} \oint F(z)z^{k-1} dz$$

and it is denoted as

$$f[n] = \mathcal{Z}^{-1} \{F(z)\}$$

- The linearity property of the  $\mathcal{Z}$  transform states that

$$af_1[n] + bf_2[n] + cf_3[n] + \dots \Leftrightarrow aF_1(z) + bF_2(z) + cF_3(z) + \dots$$

- The shifting of  $f[n]u_0[n]$  where  $u_0[n]$  is the discrete unit step function, produces the  $\mathcal{Z}$  transform pair

$$f[n-m]u_0[n-m] \Leftrightarrow z^{-m}F(z)$$

- The right shifting of  $f[n]$  allows use of non-zero values for  $n < 0$  and produces the  $\mathcal{Z}$  transform pair

$$f[n-m] \Leftrightarrow z^{-m}F(z) + \sum_{n=0}^{m-1} f[n-m]z^{-n}$$

For  $m = 1$ , this transform pair reduces to

$$f[n-1] \Leftrightarrow z^{-1}F(z) + f[-1]$$

and for  $m = 2$ , reduces to

$$f[n-2] \Leftrightarrow z^{-2}F(z) + f[-2] + z^{-1}f[-1]$$

---

## Chapter 9 Discrete Time Systems and the Z Transform

---

- The  $m$ th left shifting of  $f[n]$  where  $m$  is a positive integer, produces the  $\mathcal{Z}$  transform pair

$$f[n+m] \Leftrightarrow z^m F(z) + \sum_{n=-m}^{-1} f[n+m]z^{-n}$$

For  $m = 1$ , the above expression reduces to

$$\mathcal{Z}\{f[n+1]\} = zF(z) - f[0]z$$

and for  $m = 2$ , reduces to

$$\mathcal{Z}\{f[n+2]\} = z^2 F(z) - f[0]z^2 - f[1]z$$

- Multiplication by  $a^n$  produces the  $\mathcal{Z}$  transform pair

$$a^n f[n] \Leftrightarrow F\left(\frac{z}{a}\right)$$

- Multiplication by  $e^{-naT}$  produces the  $\mathcal{Z}$  transform pair

$$e^{-naT} f[n] \Leftrightarrow F(e^{aT} z)$$

- Multiplications by  $n$  and  $n^2$  produce the  $\mathcal{Z}$  transform pairs respectively

$$nf[n] \Leftrightarrow -z \frac{d}{dz} F(z)$$

$$n^2 f[n] \Leftrightarrow z \frac{d}{dz} F(z) + z^2 \frac{d^2}{dz^2} F(z)$$

- The summation property of the  $\mathcal{Z}$  transform states that

$$\sum_{m=0}^n f[m] \Leftrightarrow \left(\frac{z}{z-1}\right) F(z)$$

- Convolution in the discrete time domain corresponds to multiplication in the  $z$ -domain, that is,

$$f_1[n] * f_2[n] \Leftrightarrow F_1(z) \cdot F_2(z)$$

- Multiplication in the discrete time domain corresponds to convolution in the  $z$ -domain, that is,

$$f_1[n] \cdot f_2[n] \Leftrightarrow \frac{1}{j2\pi} \oint x F_1(v) F_2\left(\frac{z}{v}\right) v^{-1} dv$$

- The initial value theorem of the  $\mathcal{Z}$  transform states that

$$f[0] = \lim_{z \rightarrow \infty} X(z)$$



- The final value theorem of the  $\mathcal{Z}$  transform states that

$$\lim_{n \rightarrow \infty} f[n] = \lim_{z \rightarrow 1} (z-1)F(z)$$

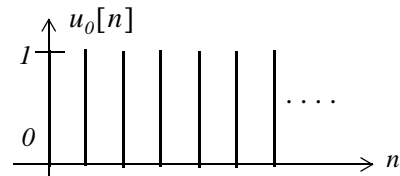
- The  $\mathcal{Z}$  transform of the geometric sequence

$$f[n] = \begin{cases} 0 & n = -1, -2, -3, \dots \\ a^n & n = 0, 1, 2, 3, \dots \end{cases}$$

is

$$\mathcal{Z}[a^n] = \sum_{n=0}^{\infty} a^n z^{-n} = \begin{cases} \frac{z}{z-a} & \text{for } |z| > |a| \\ \text{unbounded} & \text{for } |z| < |a| \end{cases}$$

- The  $\mathcal{Z}$  transform of the discrete unit step function  $u_0[n]$  shown below

$$u_0[n] = \begin{cases} 0 & n < 0 \\ 1 & n \geq 0 \end{cases}$$


is

$$\mathcal{Z}[u_0[n]] = \sum_{n=0}^{\infty} [1]z^{-n} = \begin{cases} \frac{z}{z-1} & \text{for } |z| > |1| \\ \text{unbounded} & \text{for } |z| < |1| \end{cases}$$

- The  $\mathcal{Z}$  transform of the discrete exponential sequence

$$f[n] = e^{-naT}$$

is

$$\mathcal{Z}[e^{-naT}] = \frac{1}{1 - e^{-aT} z^{-1}} = \frac{z}{z - e^{-aT}}$$

for  $|e^{-aT} z^{-1}| < 1$

- The  $\mathcal{Z}$  transforms of the discrete time functions  $f_1[n] = \cos naT$  and  $f_2[n] = \sin naT$  are respectively

$$\cos naT \Leftrightarrow \frac{z^2 - z \cos aT}{z^2 - 2z \cos aT + 1} \quad \text{for } |z| > 1$$

$$\sin naT \Leftrightarrow \frac{z \sin aT}{z^2 - 2z \cos aT + 1} \quad \text{for } |z| > 1$$

---

## Chapter 9 Discrete Time Systems and the Z Transform

---

- The  $\mathcal{Z}$  transform of the discrete unit ramp  $f[n] = nu_0[n]$  is

$$nu_0[n] \Leftrightarrow \frac{z}{(z-1)^2}$$

- The  $\mathcal{Z}$  transform can also be found by means of the contour integral

$$F^*(s) = \frac{1}{j2\pi} \oint_C \frac{F(v)}{1 - e^{-sT} e^{vT}} dv$$

and the residue theorem.

- The variables  $s$  and  $z$  are related as

$$z = e^{sT}$$

and

$$s = \frac{1}{T} \ln z$$

- The relation

$$F(z) = G(s) \Big|_{s = \frac{1}{T} \ln z}$$

allows the mapping (transformation) of regions of  $s$ -plane to  $z$ -plane.

- The Inverse  $\mathcal{Z}$  transform can be found by partial fraction expansion, the inversion integral, and long division of polynomials.
- The discrete time system transfer function  $H(z)$  is defined as

$$H(z) = \frac{N(z)}{D(z)} = \frac{a_0 + a_1 z^{-1} + a_2 z^{-2} + \dots + a_k z^{-k}}{1 + b_1 z^{-1} + b_2 z^{-2} + \dots + b_k z^{-k}}$$

- The input  $X(z)$  and output  $Y(z)$  are related by the system transfer function  $H(z)$  as

$$Y(z) = H(z)X(z)$$

- The discrete time impulse response  $h[n]$  and the discrete transfer function  $H(z)$  are related as

$$h[n] = \mathcal{Z}^{-1} \{H(z)\}$$

- The discrete time state equations are

$$x[n+1] = Ax[n] + bu[n]$$

$$y[n] = Cx[n] + du[n]$$

and the general form of the solution is

$$x[n] = A^n x[0] + \sum_{i=0}^{n-1} A^{n-1-i} b[i] u[i]$$

- The MATLAB **c2d** function converts the continuous time state space equation

$$\dot{x}(t) = Ax(t) + bu(t)$$

to the discrete time state space equation

$$x[n+1] = A_{disc}x[n] + b_{disc}u[n]$$

- The MATLAB **d2c** function converts the discrete-time state equation

$$x[n+1] = A_{disc}x[n] + b_{disc}u[n]$$

to the continuous time state equation

$$\dot{x}(t) = Ax(t) + bu(t)$$

**9.10 Exercises**

1. Find the  $\mathcal{Z}$  transform of the discrete time pulse  $p[n]$  defined as

$$p[n] = \begin{cases} 1 & n = 0, 1, 2, \dots, m-1 \\ 0 & \text{otherwise} \end{cases}$$

2. Find the  $\mathcal{Z}$  transform of  $a^n p[n]$  where  $p[n]$  is defined as in Exercise 1.

3. Prove the following  $\mathcal{Z}$  transform pairs:

a.  $\delta[n] \Leftrightarrow 1$

b.  $\delta[n-1] \Leftrightarrow z^{-1}$

c.  $na^n u_0[n] \Leftrightarrow \frac{az}{(z-a)^2}$

d.  $n^2 a^n u_0[n] \Leftrightarrow \frac{az(z+a)}{(z-a)^3}$

e.  $[n+1]u_0[n] \Leftrightarrow \frac{z^2}{(z-1)^2}$

4. Use the partial fraction expansion to find  $f[n] = \mathcal{Z}^{-1}[F(z)]$  given that

$$F(z) = \frac{A}{(1-z^{-1})(1-0.5z^{-1})}$$

5. Use the partial fraction expansion method to compute the Inverse  $\mathcal{Z}$  transform of

$$F(z) = \frac{z^2}{(z+1)(z-0.75)^2}$$

6. Use the Inversion Integral to compute the Inverse  $\mathcal{Z}$  transform of

$$F(z) = \frac{1 + 2z^{-1} + z^{-3}}{(1-z^{-1})(1-0.5z^{-1})}$$

7. Use the long division method to compute the first 5 terms of the discrete time sequence whose  $\mathcal{Z}$  transform is

$$F(z) = \frac{z^{-1} + z^{-2} - z^{-3}}{1 + z^{-1} + z^{-2} + 4z^{-3}}$$

8. a. Compute the transfer function of the difference equation

$$y[n] - y[n-1] = Tx[n-1]$$

b. Compute the response  $y[n]$  when the input is  $x[n] = e^{-naT}$

9. Given the difference equation

$$y[n] - y[n-1] = \frac{T}{2}\{x[n] + x[n-1]\}$$

a. Compute the discrete transfer function  $H(z)$

b. Compute the response to the input  $x[n] = e^{-naT}$

10. A discrete time system is described by the difference equation

$$y[n] + y[n-1] = x[n]$$

where

$$y[n] = 0 \text{ for } n < 0$$

a. Compute the transfer function  $H(z)$

b. Compute the impulse response  $h[n]$

c. Compute the response when the input is  $x[n] = 10$  for  $n \geq 0$

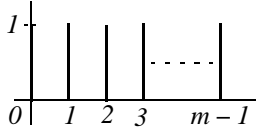
11. Given the discrete transfer function

$$H(z) = \frac{z+2}{8z^2 - 2z - 3}$$

write the difference equation that relates the output  $y[n]$  to the input  $x[n]$ .

### 9.11 Solutions to Exercises

1.

$$p[n] = \begin{cases} 1 & n = 0, 1, 2, \dots, m-1 \\ 0 & \text{otherwise} \end{cases}$$


$$p[n] = u_0[n] - u_0[n-m]$$

$$u_0[n] \Leftrightarrow \frac{z}{z-1}$$

$$u_0[n-m] \Leftrightarrow z^{-m} \frac{z}{z-1}$$

By the linearity property

$$\mathcal{Z}\{p[n]\} = \frac{z}{z-1} - z^{-m} \frac{z}{z-1} = \frac{z(1-z^{-m})}{z-1} = \frac{1-z^{-m}}{1-z^{-1}}$$

2.

$$a^n f[n] \Leftrightarrow F\left(\frac{z}{a}\right)$$

and from Exercise 1,

$$p[n] \Leftrightarrow \frac{1-z^{-m}}{1-z^{-1}}$$

Then,

$$a^n p[n] \Leftrightarrow \frac{1-(z/a)^{-m}}{1-(z/a)^{-1}} = \frac{(a^{-m}-z^{-m})/a^{-m}}{(a^{-1}-z^{-1})/a^{-1}} = \frac{a^{-1}(a^{-m}-z^{-m})}{a^{-m}(a^{-1}-z^{-1})} = \frac{a^m(a^{-m}-z^{-m})}{a(a^{-1}-z^{-1})} = \frac{1-a^m z^{-m}}{1-a z^{-1}}$$

or

$$a^n p[n] \Leftrightarrow \frac{z(1-a^m z^{-m})}{z-a}$$

3.

a.

$$\mathcal{Z}\{\delta[n]\} = \sum_{n=0}^{\infty} \delta[n] z^{-n} = \delta[0] z^{-0} = 1$$

b.

$$\mathcal{Z}\{\delta[n-m]\} = \sum_{n=0}^{\infty} \delta[n-m] z^{-n}$$

and since  $\delta[n-m]$  is zero for all  $n$  except  $n = m$ , it follows that

$$\mathcal{Z}\{\delta[n-m]\} = \sum_{n=0}^{\infty} \delta[n]z^{-m} = z^{-m}$$

c.

From Example 9.1,

$$f[n] = a^n u_0[n] \Leftrightarrow F(z) = \frac{z}{z-a} \quad (1)$$

Differentiating (1) with respect to  $z$  and multiplying by  $-z$  we get

$$-z \frac{d}{dz} F(z) = -z \frac{z-a-z}{(z-a)^2} = \frac{az}{(z-a)^2} \quad (2)$$

Also, from the multiplication by  $n$  property

$$nf[n] = n(a^n u_0[n]) \Leftrightarrow -z \frac{d}{dz} F(z) \quad (3)$$

and from (2) and (3)

$$n(a^n u_0[n]) \Leftrightarrow \frac{az}{(z-a)^2} \quad (4)$$

we observe that for  $a = 1$  (4) above reduces to

$$nu_0[n] \Leftrightarrow \frac{z}{(z-1)^2}$$

d.

From Example 9.1,

$$f[n] = a^n u_0[n] \Leftrightarrow F(z) = \frac{z}{z-a} \quad (1)$$

and taking the second derivative of (1) with respect to  $z$  we get

$$\frac{d^2}{dz^2} F(z) = \frac{d^2}{dz^2} \left( \frac{z}{z-a} \right) = \frac{d}{dz} \left[ \frac{d}{dz} \left( \frac{z}{z-a} \right) \right] = \frac{d}{dz} \left[ \frac{-a}{(z-a)^2} \right] = \frac{2a(z-a)}{(z-a)^4} = \frac{2a}{(z-a)^3} \quad (2)$$

Also, from the multiplication by  $n^2$  property

$$n^2 f[n] = n^2 (a^n u_0[n]) \Leftrightarrow z \frac{d}{dz} F(z) + z^2 \frac{d^2}{dz^2} F(z) \quad (3)$$

From Exercise 9.3(c), relation (2)

$$z \frac{d}{dz} F(z) = \frac{-az}{(z-a)^2} \quad (4)$$

and by substitution of (2) and (4) into (3) we get

$$n^2 (a^n u_0[n]) \Leftrightarrow \frac{-az}{(z-a)^2} + z^2 \frac{2a}{(z-a)^3} = \frac{2az^2 - az(z-a)}{(z-a)^3} = \frac{2az^2 - az^2 + a^2z}{(z-a)^3} = \frac{az(z+a)}{(z-a)^3}$$

We observe that for  $a = 1$  the above reduces to

$$n^2 u_0[n] \Leftrightarrow \frac{z(z+1)}{(z-1)^3}$$

e.

Let  $f[n] = u_0[n]$  and we know that

$$u_0[n] \Leftrightarrow \frac{z}{z-1} \quad (1)$$

The term  $(n+1)u_0[n]$  represents the sum of the first  $n$  values, including  $n = 0$ , of  $u_0[n]$  and thus it can be written as the summation

$$g[n] = (n+1)u_0[n] = \sum_{k=0}^n u_0[k]$$

Since summation in the discrete time domain corresponds to integration in the continuous time domain, it follows that

$$u_1[n] = (n+1)u_0[n]$$

where  $u_1[n]$  represents the discrete unit ramp. Now, from the summation in time property,

$$\sum_{k=0}^n f[k] \Leftrightarrow \left( \frac{z}{z-1} \right) F(z)$$

and with (1) above

$$G(z) = \left( \frac{z}{z-1} \right) F(z) = \frac{z}{z-1} \cdot \frac{z}{z-1} = \frac{z^2}{(z-1)^2}$$

and thus

$$[n+1]u_0[n] \Leftrightarrow \frac{z^2}{(z-1)^2}$$



4.

We first multiply the numerator and denominator by  $z^2$  to eliminate the negative exponents of  $z$ .

$$F(z) = \frac{A}{(1-z^{-1})(1-0.5z^{-1})} = \frac{Az^2}{(z-1)(z-0.5)}$$

or

$$\frac{F(z)}{z} = \frac{Az}{(z-1)(z-0.5)} = \frac{r_1}{z-1} + \frac{r_2}{z-0.5}$$

$$r_1 = \left. \frac{Az}{z-0.5} \right|_{z=1} = 2A \quad r_2 = \left. \frac{Az}{z-1} \right|_{z=0.5} = -A$$

$$\frac{F(z)}{z} = \frac{2A}{z-1} - \frac{A}{z-0.5}$$

or

$$F(z) = \frac{2Az}{z-1} - \frac{Az}{z-0.5}$$

Since

$$\frac{z}{z-1} \Leftrightarrow 1 \quad \frac{z}{z-a} \Leftrightarrow a^n$$

it follows that

$$\mathcal{Z}^{-1}[F(z)] = f[n] = 2A - A\left(\frac{1}{2}\right)^n = A\left[2 - \left(\frac{1}{2}\right)^n\right]$$

5.

$$\frac{F(z)}{z} = \frac{r_1}{z+1} + \frac{r_2}{z-0.75} + \frac{r_3}{(z-0.75)^2} = \frac{z}{(z+1)(z-0.75)^2} \quad (1)$$

and clearing of fractions yields

$$r_1(z-0.75)^2 + r_2(z+1)(z-0.75) + r_3(z+1) = z \quad (2)$$

With  $z = 0.75$  (2) reduces to  $1.75r_3 = 0.75$  from which  $r_3 = 3/7$

With  $z = -1$  (2) reduces to  $(-1.75)^2 r_1 = -1$  from which  $r_1 = -16/49$

With  $z = 0$  (2) reduces to  $(-0.75)^2 r_1 - 0.75r_2 + r_3 = 0$

or  $(3/4)^2 \times (-16/49) - (3/4)r_2 + 3/7 = 0$  from which  $r_2 = 16/49$

By substitution into (1) and multiplication by  $z$  we get

## Chapter 9 Discrete Time Systems and the Z Transform

$$F(z) = \frac{(-16/49)z}{z - (-1)} + \frac{(16/49)z}{z - 0.75} + \frac{(4/7) \cdot (0.75z)}{(z - 0.75)^2}$$

Using the transforms  $u_0[n] \Leftrightarrow \frac{z}{z-1}$ ,  $a^n u_0[n] = \frac{z}{z-a}$ , and  $na^n u_0[n] = \frac{az}{(z-a)^2}$  we get

$$f[n] = \left(-\frac{16}{49}\right)(-1)^n + \left(\frac{16}{49}\right)(0.75)^n + \frac{4}{7}n(0.75)^n$$

Check with MATLAB:

```
syms z n; Fz=z^2/((z+1)*(z-0.75)^2); iztrans(Fz)
```

```
ans =
```

$$-16/49 * (-1)^{n+1} + 16/49 * (3/4)^n + 4/7 * (3/4)^n * n$$

6.

Multiplication by  $z^3$  yields

$$F(z) = \frac{z^3 + 2z^2 + 1}{z(z-1)(z-0.5)}$$

By (9.86)

$$f[n] = \sum_k \operatorname{Res}[F(z)z^{n-1}] \Big|_{z=p_k}$$

and for this exercise

$$f[n] = \sum_k \operatorname{Res}\left[\frac{(z^3 + 2z^2 + 1)z^{n-2}}{(z-1)(z-0.5)}\right] \Big|_{z=p_k}$$

Next, we examine  $z^{n-2}$  to find out if there are any values of  $n$  for which there is a pole at the origin. We observe that for  $n = 0$  there is a second order pole at  $z = 0$  because

$$z^{n-2} \Big|_{n=0} = z^{-2} = \frac{1}{z^2}$$

Also, for  $n = 1$  there is a simple pole at  $z = 0$ . But for  $n \geq 2$  the only poles are  $z = 1$  and  $z = 0.5$ . Then, following the same procedure as in Example 9.12 we get:

For  $n = 0$

$$\begin{aligned}
 f[0] &= \sum_k \operatorname{Res} \left[ \frac{(z^3 + 2z^2 + 1)}{z^2(z-1)(z-0.5)} \right] \Bigg|_{z=p_k} \\
 &= \operatorname{Res} \left[ \frac{(z^3 + 2z^2 + 1)}{z^2(z-1)(z-0.5)} \right] \Bigg|_{z=0} + \operatorname{Res} \left[ \frac{(z^3 + 2z^2 + 1)}{z^2(z-1)(z-0.5)} \right] \Bigg|_{z=1} \\
 &\quad + \operatorname{Res} \left[ \frac{(z^3 + 2z^2 + 1)}{z^2(z-1)(z-0.5)} \right] \Bigg|_{z=0.5}
 \end{aligned}$$

The first term on the right side of the above expression has a pole of order 2 at  $z = 0$ ; therefore, we must evaluate the first derivative of

$$\frac{(z^3 + 2z^2 + 1)}{(z-1)(z-0.5)}$$

at  $z = 0$ . Thus, for  $n = 0$ , it reduces to

$$\begin{aligned}
 f[0] &= \frac{d}{dz} \left[ \frac{(z^3 + 2z^2 + 1)}{(z-1)(z-0.5)} \right] \Bigg|_{z=0} + \left[ \frac{(z^3 + 2z^2 + 1)}{z^2(z-0.5)} \right] \Bigg|_{z=1} + \left[ \frac{(z^3 + 2z^2 + 1)}{z^2(z-1)} \right] \Bigg|_{z=0.5} \\
 &= 6 + 8 - 13 = 1
 \end{aligned}$$

For  $n = 1$ , it reduces to

$$\begin{aligned}
 f[1] &= \sum_k \operatorname{Res} \left[ \frac{(z^3 + 2z^2 + 1)}{z(z-1)(z-0.5)} \right] \Bigg|_{z=p_k} \\
 &= \operatorname{Res} \left[ \frac{(z^3 + 2z^2 + 1)}{z(z-1)(z-0.5)} \right] \Bigg|_{z=0} + \operatorname{Res} \left[ \frac{(z^3 + 2z^2 + 1)}{z(z-1)(z-0.5)} \right] \Bigg|_{z=1} + \operatorname{Res} \left[ \frac{(z^3 + 2z^2 + 1)}{z(z-1)(z-0.75)} \right] \Bigg|_{z=0.5}
 \end{aligned}$$

or

$$\begin{aligned}
 f[1] &= \left[ \frac{(z^3 + 2z^2 + 1)}{(z-1)(z-0.75)} \right] \Bigg|_{z=0} + \left[ \frac{(z^3 + 2z^2 + 1)}{z(z-0.75)} \right] \Bigg|_{z=1} + \left[ \frac{(z^3 + 2z^2 + 1)}{z(z-1)} \right] \Bigg|_{z=0.5} \\
 &= 2 + 8 - 13 \cdot (0.5) = 3.5
 \end{aligned}$$

For  $n \geq 2$  there are no poles at  $z = 0$ , that is, the only poles are at  $z = 1$  and  $z = 0.5$ . Therefore,

$$\begin{aligned}
 f[n] &= \sum_k \text{Res} \left[ \frac{(z^3 + 2z^2 + 1)z^{n-2}}{(z-1)(z-0.5)} \right] \Bigg|_{z=p_k} \\
 &= \text{Res} \left[ \frac{(z^3 + 2z^2 + 1)z^{n-2}}{(z-1)(z-0.5)} \right] \Bigg|_{z=1} + \text{Res} \left[ \frac{(z^3 + 2z^2 + 1)z^{n-2}}{(z-1)(z-0.5)} \right] \Bigg|_{z=0.5} \\
 &= \left[ \frac{(z^3 + 2z^2 + 1)z^{n-2}}{(z-0.5)} \right] \Bigg|_{z=1} + \left[ \frac{(z^3 + 2z^2 + 1)z^{n-2}}{(z-1)} \right] \Bigg|_{z=0.5}
 \end{aligned}$$

for  $n \geq 2$ .

We can express  $f[n]$  for all  $n \geq 0$  as

$$f[n] = 6\delta[n] + 2\delta[n-1] + 8 - 13(0.5)^n$$

where the coefficients of  $\delta[n]$  and  $\delta[n-1]$  are the residues that were found for  $n = 0$  and  $n = 1$  at  $z = 0$ . The coefficient 6 is multiplied by  $\delta[n]$  to emphasize that this value exists only for  $n = 0$  and coefficient 2 is multiplied by  $\delta[n]$  to emphasize that this value exists only for  $n = 1$ .

Check with MATLAB:

```

syms z n; Fz=(z^3+2*z^2+1)/(z*(z-1)*(z-0.5)); iztrans(Fz)
ans =
2*charfcn[1](n)+6*charfcn[0](n)+8-13*(1/2)^n

```

7.

Multiplication of each term by  $z^3$  yields

$$F(z) = \frac{z^{-1} + z^{-2} - z^{-3}}{1 + z^{-1} + z^{-2} + 4z^{-3}} = \frac{z^2 + z - 1}{z^3 + z^2 + z + 1}$$

The long division of the numerator by the denominator is shown below.

<i>Divisor</i>	$z^{-1} - 2z^{-3} + z^{-4} + \dots$	<i>Quotient</i>
$z^3 + z^2 + z + 1$	$z^2 + z - 1$	<i>Dividend</i>
	$z^2 + z + 1 + z^{-1}$	
	$-2 - z^{-1}$	<i>1st Remainder</i>
	$-2 - 2z^{-1} - 2z^{-2} - 2z^{-3}$	
	$z^{-1} + 2z^{-2} + 2z^{-3}$	<i>2nd Remainder</i>
	$z^{-1} + \dots$	
	$\dots \dots \dots$	

Therefore,

$$F(z) = z^{-1} - 2z^{-3} + z^{-4} + \dots \quad (1)$$

Also,

$$F(z) = \sum_0^{\infty} f[n]z^{-n} = f[0] + f[1]z^{-1} + f[2]z^{-2} + f[3]z^{-3} + f[4]z^{-4} + \dots \quad (2)$$

Equating like terms on the right sides of (1) and (2) we get

$$f[0] = 0 \quad f[1] = 1 \quad f[2] = 0 \quad f[3] = -2 \quad f[4] = 1$$

8.

a.

$$y[n] - y[n-1] = Tx[n-1]$$

Taking the  $\mathcal{Z}$  transform of both sides we get

$$Y(z) - z^{-1}Y(z) = Tz^{-1}X(z)$$

and thus

$$H(z) = \frac{Y(z)}{X(z)} = \frac{Tz^{-1}}{1 - z^{-1}} = \frac{T}{z - 1}$$

b.

$$x[n] = e^{-naT} \Leftrightarrow X(z) = \frac{z}{z - e^{-aT}}$$

Then,

$$Y(z) = H(z)X(z) = \frac{T}{z - 1} \cdot \frac{z}{z - e^{-aT}} = \frac{Tz}{(z - 1) \cdot (z - e^{-aT})}$$

or

$$\frac{Y(z)}{z} = \frac{T}{(z-1) \cdot (z-e^{-aT})} = \frac{r_1}{z-1} + \frac{r_2}{z-e^{-aT}} \quad (1)$$

$$r_1 = \left. \frac{T}{z-e^{-aT}} \right|_{z=1} = \frac{T}{1-e^{-aT}} \quad r_2 = \left. \frac{T}{z-1} \right|_{z=e^{-aT}} = \frac{-T}{1-e^{-aT}}$$

By substitution into (1) and multiplication by  $z$  we get

$$Y(z) = \frac{Tz/(1-e^{-aT})}{(z-1)} - \frac{Tz/(1-e^{-aT})}{(z-e^{-aT})}$$

Recalling that  $\frac{z}{z-1} \Leftrightarrow u_0[n]$  and  $\frac{z}{z-a} \Leftrightarrow a^n u_0[n]$  we get

$$y[n] = \frac{T}{1-e^{-aT}} - \frac{T e^{-naT}}{1-e^{-aT}} = \frac{T}{1-e^{-aT}} (1-e^{-naT}) u_0[n]$$

9.

a.

$$y[n] - y[n-1] = \frac{T}{2} \{x[n] + x[n-1]\}$$

Taking the  $\mathcal{Z}$  transform of both sides we get

$$Y(z) - z^{-1}Y(z) = \frac{T}{2} [X(z) + z^{-1}X(z)]$$

or

$$(1-z^{-1})Y(z) = \frac{T}{2} (1+z^{-1})X(z)$$

and thus

$$H(z) = \frac{Y(z)}{X(z)} = \frac{T}{2} \cdot \frac{1+z^{-1}}{1-z^{-1}} = \frac{T}{2} \cdot \frac{z+1}{z-1}$$

b.

$$x[n] = e^{-naT} \Leftrightarrow X(z) = \frac{z}{z-e^{-aT}}$$

Then,

$$Y(z) = H(z)X(z) = \frac{T}{2} \cdot \frac{z+1}{z-1} \cdot \frac{z}{z-e^{-aT}} = \frac{Tz(z+1)}{2(z-1) \cdot (z-e^{-aT})}$$

or

$$\frac{Y(z)}{z} = \frac{T(z+1)}{2(z-1) \cdot (z-e^{-aT})} = \frac{r_1}{z-1} + \frac{r_2}{z-e^{-aT}} \quad (1)$$

$$r_1 = \frac{T}{2} \cdot \frac{z+1}{z-e^{-aT}} \Big|_{z=1} = \frac{T}{2} \cdot \frac{2}{1-e^{-aT}} = \frac{T}{1-e^{-aT}}$$

$$r_2 = \frac{T}{2} \cdot \frac{z+1}{z-1} \Big|_{z=e^{-aT}} = \frac{T}{2} \cdot \frac{e^{-aT}+1}{e^{-aT}-1} = \frac{T}{1-e^{-aT}}$$

By substitution into (1) and multiplication by  $z$  we get

$$Y(z) = \frac{Tz/(1-e^{-aT})}{(z-1)} + \frac{[(Tz/2) \cdot (e^{-aT}+1)]/(1-e^{-aT})}{(z-e^{-aT})}$$

Recalling that  $\frac{z}{z-1} \Leftrightarrow u_0[n]$  and  $\frac{z}{z-a} \Leftrightarrow a^n u_0[n]$  we get

$$y[n] = \frac{T}{1-e^{-aT}} + \frac{T}{2} \cdot \frac{e^{-aT}+1}{e^{-aT}-1} e^{-naT} = \frac{T}{1-e^{-aT}} - \frac{T}{2} \coth\left(\frac{aT}{2}\right) e^{-naT}$$

10.

a.

$$y[n] + y[n-1] = x[n]$$

$$y[n] = 0 \text{ for } n < 0$$

Taking the  $\mathcal{Z}$  transform of both sides we get

$$(1+z^{-1})Y(z) = X(z)$$

and thus

$$H(z) = \frac{Y(z)}{X(z)} = \frac{1}{1+z^{-1}} = \frac{z}{z+1} = \frac{z}{z-(-1)}$$

b.

$$h[n] = \mathcal{Z}^{-1}\{H(z)\} = \mathcal{Z}^{-1}\left\{\frac{z}{z-(-1)}\right\} = (-1)^n$$

c.

$$x[n] = 10 \text{ for } n \geq 0$$

$$X(z) = 10 \cdot \frac{z}{z-1}$$

$$Y(z) = H(z)X(z) = \frac{z}{z+1} \cdot \frac{10z}{z-1} = \frac{10z^2}{(z+1)(z-1)}$$

$$\frac{Y(z)}{z} = \frac{10z}{(z+1)(z-1)} = \frac{r_1}{z+1} + \frac{r_2}{z-1} = \frac{5}{z+1} + \frac{5}{z-1}$$

$$Y(z) = \frac{5z}{z-(-1)} + \frac{5z}{z-1} \Leftrightarrow f[n] = 5(-1)^n + 5$$

11.

$$H(z) = \frac{z+2}{8z^2-2z-3}$$

Multiplication of each term by  $1/8z^2$  yields

$$H(z) = \frac{Y(z)}{X(z)} = \frac{1/8 \cdot (z^{-1} + 2z^{-2})}{1 - (1/4)z^{-1} - (3/8)z^{-2}}$$

$$\left[1 - \frac{1}{4}z^{-1} - \frac{3}{8}z^{-2}\right] \cdot Y(z) = \frac{1}{8} \cdot (z^{-1} + 2z^{-2}) \cdot X(z)$$

and taking the Inverse  $\mathcal{Z}$  transform, we get

$$y[n] - \frac{1}{4}y[n-1] - \frac{3}{8}y[n-2] = \frac{1}{8}x[n-1] + \frac{1}{4}x[n-2]$$



This chapter begins with the actual computation of frequency spectra for discrete time systems. For brevity, we will use the acronyms *DFT* for the Discrete Fourier Transform and *FFT* for Fast Fourier Transform algorithm respectively. The definition, theorems, and properties are also discussed, and several examples are given to illustrate their uses.

### 10.1 The Discrete Fourier Transform (DFT)

In the Fourier series topic, Chapter 7, we learned that a periodic and continuous time function, results in a non periodic and discrete frequency function. Next, in the Fourier transform topic, Chapter 8, we saw that a non-periodic and continuous time function, produces a non-periodic and continuous frequency function. In Chapter 9 we learned that the  $\mathcal{Z}$  and Inverse  $\mathcal{Z}$  transforms produce a periodic and continuous frequency function, since these transforms are evaluated on the unit circle. This is because the frequency spectrum of a discrete time sequence  $f[n]$  is obtained from its  $\mathcal{Z}$  transform by the substitution of  $z = e^{sT} = e^{j\omega T}$  as we saw from the mapping of the  $s$ -plane to the  $z$ -plane in Chapter 9. It is continuous because there is an infinite number of points in the interval  $0$  to  $2\pi$ , although, in practice, we compute only a finite number of equally spaced points.

In this chapter we will see that a periodic and discrete time function results in a periodic and discrete frequency function. For convenience, we summarize these facts in Table 10.1.

TABLE 10.1 Characteristics of Fourier and  $\mathcal{Z}$  transforms

<i>Topic</i>	<i>Time Function</i>	<i>Frequency Function</i>
Fourier Series	Continuous-Periodic	Discrete-Non-periodic
Fourier Transform	Continuous-Non-Periodic	Continuous-Non-Periodic
$\mathcal{Z}$ transform	Discrete-Non-Periodic	Continuous-Periodic
Discrete Fourier Transform	Discrete-Periodic	Discrete-Periodic

In our subsequent discussion we will denote a discrete time signal as  $x[n]$ , and its discrete frequency transform as  $X[m]$ .

Let us consider again the definition of the  $\mathcal{Z}$  transform, that is,

$$F(z) = \sum_{n=0}^{\infty} f[n]z^{-n} \quad (10.1)$$

## Chapter 10 The DFT and the FFT Algorithm

Its value on the unit circle of the  $z$ -plane, is

$$F(e^{j\omega T}) = \sum_{n=0}^{\infty} f[n]e^{-nj\omega T} \quad (10.2)$$

This represents an infinite summation; it must be truncated before it can be computed. Let this truncated version be represented by

$$X[m] = \sum_{n=0}^{N-1} x[n]e^{-j2\pi\frac{mn}{N}} \quad (10.3)$$

where  $N$  represents the number of points that are equally spaced in the interval  $0$  to  $2\pi$  on the unit circle of the  $z$ -plane, and

$$\omega = \left(\frac{2\pi}{NT}\right)m$$

for  $m = 0, 1, 2, \dots, N-1$ . We refer to (10.3) as the  $N$ -point DFT of  $X[m]$ .

The Inverse DFT is defined as

$$x[n] = \frac{1}{N} \sum_{m=0}^{N-1} X[m]e^{j2\pi\frac{mn}{N}} \quad (10.4)$$

for  $n = 0, 1, 2, \dots, N-1$ .

In general, the discrete frequency transform  $X[m]$  is complex, and thus we can express it as

$$X[m] = \text{Re}\{X[m]\} + j\text{Im}\{X[m]\} \quad (10.5)$$

for  $m = 0, 1, 2, \dots, N-1$

Since

$$e^{-j2\pi\frac{mn}{N}} = \cos\frac{2\pi mn}{N} - j\sin\frac{2\pi mn}{N} \quad (10.6)$$

we can write (10.3) as

$$X[m] = \sum_{n=0}^{N-1} x[n]e^{-j2\pi\frac{mn}{N}} = \sum_{n=0}^{N-1} x[n]\cos\frac{2\pi mn}{N} - j\sum_{n=0}^{N-1} x[n]\sin\frac{2\pi mn}{N} \quad (10.7)$$

For  $n = 0$ , (10.7) reduces to  $X[m] = x[0]$ . Then, the real part  $\text{Re}\{X[m]\}$  can be computed from

$$\boxed{\text{Re}\{X[m]\} = x[0] + \sum_{n=1}^{N-1} x[n] \cos \frac{2\pi mn}{N} \quad \text{for } m = 0, 1, 2, \dots, N-1} \quad (10.8)$$

and the imaginary part  $\text{Im}\{X[m]\}$  from

$$\boxed{\text{Im}\{X[m]\} = -\sum_{n=1}^{N-1} x[n] \sin \frac{2\pi mn}{N} \quad \text{for } m = 0, 1, 2, \dots, N-1} \quad (10.9)$$

We observe that the summation in (10.8) and (10.9) is from  $n = 1$  to  $n = N-1$  since  $x[0]$  appears in (10.8).

**Example 10.1**

A discrete time signal is defined by the sequence

$$x[0] = 1, \quad x[1] = 2, \quad x[2] = 2, \quad \text{and } x[3] = 1$$

and  $x[n] = 0$  for all other  $n$ . Compute the frequency components  $X[m]$ .

**Solution:**

Since we are given four discrete values of  $x[n]$ , we will use a 4-point DFT, that is, for this example,  $N = 4$ . Using (10.8) with  $n = 0, 1, 2$ , and  $3$  we get

$$\begin{aligned} \text{Re}\{X[m]\} &= x[0] + \sum_{n=1}^3 x[n] \cos \frac{2\pi mn}{N} \\ &= 1 + 2 \cos \frac{2\pi m(1)}{4} + 2 \cos \frac{2\pi m(2)}{4} + \cos \frac{2\pi m(3)}{4} \\ &= 1 + 2 \cos \frac{m\pi}{2} + 2 \cos m\pi + \cos \frac{3m\pi}{2} \end{aligned} \quad (10.10)$$

Next, for  $m = 0, 1, 2$ , and  $3$  we get:

$$\begin{aligned} m = 0 & \quad \text{Re}\{X[0]\} = 1 + 2 \cdot (1) + 2 \cdot (1) + 1 \cdot (1) = 6 \\ m = 1 & \quad \text{Re}\{X[1]\} = 1 + 2 \cdot (0) + 2 \cdot (-1) + 1 \cdot (0) = -1 \\ m = 2 & \quad \text{Re}\{X[2]\} = 1 + 2 \cdot (-1) + 2 \cdot (1) + 1 \cdot (-1) = 0 \\ m = 3 & \quad \text{Re}\{X[3]\} = 1 + 2 \cdot (0) + 2 \cdot (-1) + 1 \cdot (0) = -1 \end{aligned} \quad (10.11)$$

Now, we compute the imaginary components using (10.9). For this example,

$$\text{Im}\{X[m]\} = -\sum_{n=1}^3 x[n] \sin \frac{2\pi mn}{N} = -2 \sin \frac{m\pi}{2} - 2 \sin m\pi - \sin \frac{3m\pi}{2}$$

and for  $m = 0, 1, 2, 3$ , we get:

$$\begin{aligned}
 m = 0 & \quad \text{Im}\{X[0]\} = -2 \cdot (0) - 2 \cdot (0) - 1 \cdot (0) = 0 \\
 m = 1 & \quad \text{Im}\{X[1]\} = -2 \cdot (1) - 2 \cdot (0) - 1 \cdot (-1) = -1 \\
 m = 2 & \quad \text{Im}\{X[2]\} = -2 \cdot (0) - 2 \cdot (0) - 1 \cdot (0) = 0 \\
 m = 3 & \quad \text{Im}\{X[3]\} = -2 \cdot (-1) - 2 \cdot (0) - 1 \cdot (1) = 1
 \end{aligned} \tag{10.12}$$

The discrete frequency components  $X[m]$  for  $m = 0, 1, 2$ , and  $3$  are found by addition of the real and imaginary components  $X_{re}[i]$  of (10.11) and  $X_{im}[i]$  of (10.12). Thus,

$$\begin{aligned}
 X[0] &= 6 + j0 = 6 \\
 X[1] &= -1 - j \\
 X[2] &= 0 + j0 = 0 \\
 X[3] &= -1 + j
 \end{aligned} \tag{10.13}$$

### Example 10.2

Use the Inverse DFT, i.e., relation (10.4), and the results of Example 10.1, to compute the values of the discrete time sequence  $x[n]$ .

#### Solution:

Since we are given four discrete values of  $x[n]$ , we will use a 4-point DFT, that is, for this example,  $N = 4$ . Then, (10.4) for  $m = 0, 1, 2$ , and  $3$  reduces to

$$\begin{aligned}
 x[n] &= \frac{1}{4} \sum_{m=0}^3 X[m] e^{j2\pi \frac{mn}{4}} = \frac{1}{4} \sum_{m=0}^3 X[m] e^{j\pi \frac{mn}{2}} \\
 &= \frac{1}{4} \left[ X[0] + X[1] e^{j\pi \frac{n}{2}} + X[2] e^{j\pi n} + X[3] e^{j\pi \frac{3n}{2}} \right]
 \end{aligned} \tag{10.14}$$

The discrete frequency components  $x[n]$  for  $n = 0, 1, 2$ , and  $3$  are:

$$\begin{aligned}
 x[0] &= \frac{1}{4} \{X[0] + X[1] + X[2] + X[3]\} \\
 &= \frac{1}{4} \{6 + (-1 - j) + 0 + (-1 + j)\} = 1 \\
 x[1] &= \frac{1}{4} \{X[0] + X[1] \cdot j + X[2] \cdot (-1) + X[3] \cdot (-j)\} \\
 &= \frac{1}{4} \{6 + (-1 - j) \cdot j + 0 \cdot (-1) + (-1 + j) \cdot (-j)\} = 2
 \end{aligned}$$

$$\begin{aligned}
 x[2] &= \frac{1}{4} \{ X[0] + X[1] \cdot (-1) + X[2] \cdot 1 + X[3] \cdot (-1) \} \\
 &= \frac{1}{4} \{ 6 + (-1-j) \cdot (-1) + 0 \cdot 1 + (-1+j) \cdot (-1) \} = 2
 \end{aligned}$$

$$\begin{aligned}
 x[3] &= \frac{1}{4} \{ X[0] + X[1] \cdot (-j) + X[2] \cdot (-1) + X[3] \cdot j \} \\
 &= \frac{1}{4} \{ 6 + (-1-j) \cdot (-j) + 0 \cdot (-1) + (-1+j) \cdot j \} = 1
 \end{aligned}$$

We observe that these are the same values as in Example 10.1. We will check the answers of Examples 10.1 and 10.2 with MATLAB and Excel.

With MATLAB, we use the **fft(x)** function to compute the DFT, and the **ifft(x)** function to compute the Inverse DFT.

```
xn=[1 2 2 1];           % The discrete time sequence of Example 10.1
Xm=fft(xn)             % Compute the FFT of this discrete time sequence
```

```
Xm =
 6.0000   -1.0000 -1.0000i    0   -1.0000+1.0000i
```

```
Xm = [6 -1-j 0 -1+j];   % The discrete frequency components of Example 10.2
xn=ifft(Xm)            % Compute the Inverse FFT
```

```
xn =
 1.0000   2.0000+0.0000i   2.0000   1.0000-0.0000i
```

To use Excel for the computation of the DFT, the *Analysis ToolPak* must have been installed. If not, we can install it by clicking *Add-Ins* on the *Tools* menu, and follow the instructions on the screen.

With Excel's Fourier Analysis tool, we get the spreadsheet shown in Figure 10.1. The instructions on how to use it, are given on the spreadsheet.

The term  $e^{-j2\pi/N}$  is a rotating vector, where the range  $0 \leq \theta \leq 2\pi$  is divided into  $360/N$  equal segments. Therefore, it is convenient to represent it as  $W_N$ , that is, we let

$$W_N = e^{-\frac{j2\pi}{N}} \quad (10.15)$$

and consequently

$$W_N^{-1} = e^{\frac{j2\pi}{N}} \quad (10.16)$$

	A	B	C	D	E
1	Input data $x(n)$ are same as in Example 10.1				
2	and are entered in cells A11 through A14				
3					
4	From the Tools drop down menu, we select				
5	Data Analysis and from it, Fourier Analysis				
6					
7	The Input Range is A11 through A14 (A11:A14)				
8	and the Output Range is B11 through B14 (B11:B14)				
9					
10	<b>x(n)</b>	<b>X(m)</b>			
11	1	6			
12	2	-1-j			
13	2	0			
14	1	-1+j			
15					
16	To obtain the discrete time sequence, we select				
17	Inverse from the Fourier Analysis menu				
18					
19	Input data are the same as in Example 10.2				
20					
21	The Input Range is A25 through A28 (A25:A28)				
22	and the Output Range is B25 through B28 (B25:B28)				
23					
24	<b>X(m)</b>	<b>x(n)</b>			
25	6	1			
26	-1-j	2			
27	0	2			
28	-1+j	1			

Figure 10.1. Using Excel to find the DFT and Inverse DFT

Henceforth, the DFT pair will be denoted as

$$X[m] = \sum_{n=0}^{N-1} x(n)W_N^{mn} \quad (10.17)$$

and

$$x[n] = \frac{1}{N} \sum_{m=0}^{N-1} X(m)W_N^{-mn} \quad (10.18)$$

Also, the correspondence between  $x[n]$  and  $X[m]$  will be denoted as

$$x[n] \leftrightarrow X[m] \tag{10.19}$$

In Example 10.1, we found that, although the discrete time sequence  $x[n]$  is real, the discrete frequency sequence  $X[m]$  is complex. However, in most applications we are interested in  $|X[m]|$ , that is, the magnitude of  $X[m]$ .

**Example 10.3**

Use MATLAB to compute the *magnitude* of the frequency components of the following discrete time function. Then, use Excel to display the time and frequency values.

x[0]	x[1]	x[2]	x[3]	x[4]	x[5]	x[6]	x[7]	x[8]	x[9]	x[10]	x[11]	x[12]	x[13]	x[14]	x[15]
1.0	1.5	2.0	2.3	2.7	3.0	3.4	4.1	4.7	4.2	3.8	3.6	3.2	2.9	2.5	1.8

**Solution:**

We compute the magnitude of the frequency spectrum with the MATLAB code below.

```

xn=[1 1.5 2 2.3 2.7 3 3.4 4.1 4.7 4.2 3.8 3.6 3.2 2.9 2.5 1.8]; magXm=abs(fft(xn));...
fprintf(' \n'); fprintf('magXm1 = %4.2f \t', magXm(1)); fprintf('magXm2 = %4.2f \t', magXm(2));...
fprintf('magXm3 = %4.2f \t', magXm(3)); fprintf(' \n'); fprintf('magXm4 = %4.2f \t', magXm(4));...
fprintf('magXm5 = %4.2f \t', magXm(5)); fprintf('magXm6 = %4.2f \t', magXm(6)); fprintf(' \n');...
fprintf('magXm7 = %4.2f \t', magXm(7)); fprintf('magXm8 = %4.2f \t', magXm(8));...
fprintf('magXm9 = %4.2f \t', magXm(9)); fprintf(' \n');...
fprintf('magXm10 = %4.2f \t', magXm(10)); fprintf('magXm11 = %4.2f \t', magXm(11)); ...
fprintf('magXm12 = %4.2f \t', magXm(12)); fprintf(' \n');...
fprintf('magXm13 = %4.2f \t', magXm(13)); fprintf('magXm14 = %4.2f \t', magXm(14));...
fprintf('magXm15 = %4.2f \t', magXm(15))

```

```

magXm1 = 46.70   magXm2 = 11.03   magXm3 = 0.42
magXm4 = 2.41   magXm5 = 0.22   magXm6 = 1.19
magXm7 = 0.07   magXm8 = 0.47   magXm9 = 0.10
magXm10 = 0.47  magXm11 = 0.07   magXm12 = 1.19
magXm13 = 0.22  magXm14 = 2.41   magXm15 = 0.42

```

Now, we use Excel to plot the  $x[n]$  and  $|X[m]|$  values. These are shown in Figure 10.2.

On the plot of  $|X[m]|$  in Figure 10.2, the first value  $X[0] = 46.70$  represents the DC component. We observe that after the  $X[8] = 0.10$  value, the magnitude of the frequency components for the range  $9 \leq m \leq 15$ , are the mirror image of the components in the range  $1 \leq m \leq 7$ . This is not a coincidence; it is a fact that *if  $x[n]$  is an  $N$ -point real discrete time function, only  $N/2$  of the frequency components of  $|X[m]|$  are unique.*

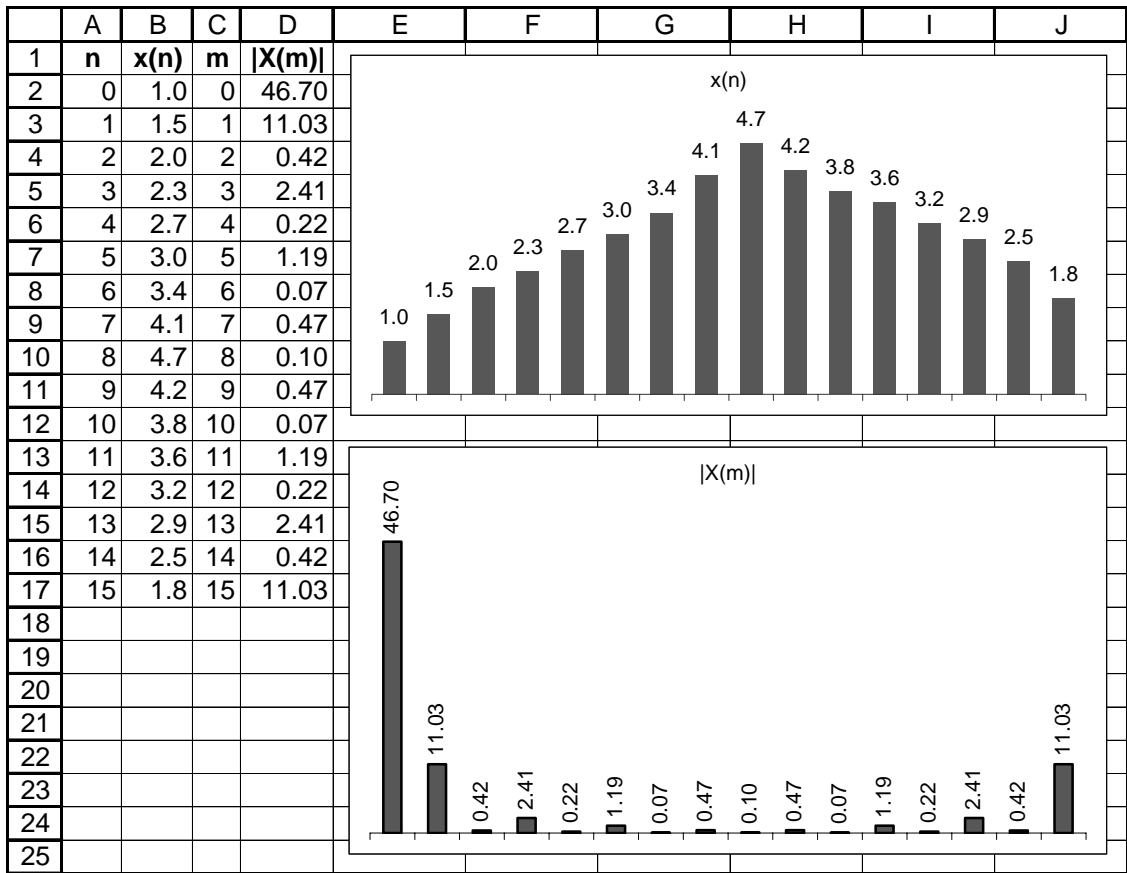


Figure 10.2. Plots of  $x[n]$  and  $|X[m]|$  values for Example 10.3

Figure 10.3 shows typical discrete time and frequency magnitude waveforms, for a  $N = 16$  point DFT.

Next, we will examine the even and odd properties of the DFT.

### 10.2 Even and Odd Properties of the DFT

The discrete time and frequency functions are defined as *even* or *odd*, in accordance with the following relations:

$$\text{Even Time Function} \quad f[N-n] = f[n] \tag{10.20}$$

$$\text{Odd Time Function} \quad f[N-n] = -f[n] \tag{10.21}$$

$$\text{Even Frequency Function} \quad F[N-m] = F[m] \tag{10.22}$$

$$\text{Odd Frequency Function} \quad F[N-m] = -F[m] \tag{10.23}$$



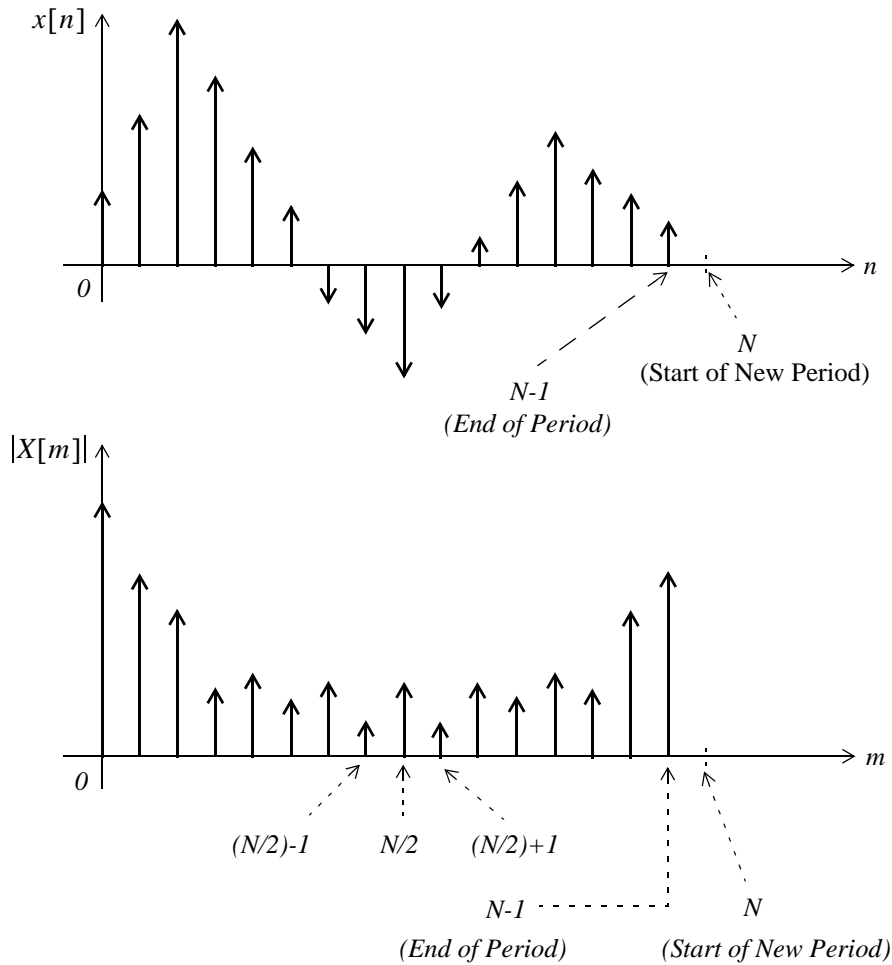


Figure 10.3.  $x[n]$  and  $|X[m]|$  for a  $N = 16$  point DFT.

In Chapter 8, we developed Table 8-7 showing the even and odd properties of the Fourier transform. Table 10.2 shows the even and odd properties of the DFT.

These can be proved by methods similar to those that we have used for the continuous Fourier transform. To prove the first entry, for example, we expand

$$X[m] = \sum_{n=0}^{N-1} x[n] W_N^{mn}$$

into its real and imaginary parts using Euler's identity, and we equate these with the real and imaginary parts of  $X[m] = X_{re}[m] + jX_{im}[m]$ . Now, since the real part contains the cosine, and the imaginary contains the sine function, and  $\cos(-m) = \cos m$  while  $\sin(-m) = -\sin m$ , this entry is proved.

TABLE 10.2 Even and Odd Properties of the DFT

Discrete Time Sequence $f[n]$	Discrete Frequency Sequence $F[m]$
Real	Complex Real part is Even Imaginary Part is Odd
Real and Even	Real and Even
Real and Odd	Imaginary and Odd
Imaginary	Complex Real part is Odd Imaginary Part is Even
Imaginary and Even	Imaginary and Even
Imaginary and Odd	Real and Odd

### 10.3 Properties and Theorems of the DFT

For the proofs of the following properties and theorems of the DFT, we will denote the DFT and Inverse DFT as follows:

$$X[m] = D\{x[n]\} \quad (10.24)$$

and

$$x[n] = D^{-1}\{X[m]\} \quad (10.25)$$

#### 1. Linearity

$$ax_1[n] + bx_2[n] + \dots \Leftrightarrow aX_1[m] + bX_2[m] + \dots \quad (10.26)$$

where  $x_1[n] \Leftrightarrow X_1[m]$ ,  $x_2[n] \Leftrightarrow X_2[m]$ , and  $a$  and  $b$  are arbitrary constants.

**Proof:**

The proof is readily obtained by using the definition of the DFT.

#### 2. Time Shift

$$x[n-k] \Leftrightarrow W_N^{km} X[m] \quad (10.27)$$

**Proof:**

By definition,

$$D\{x[n]\} = \sum_{n=0}^{N-1} x[n]W_N^{mn}$$

and if  $x[n]$  is shifted to the right by  $k$  sampled points for  $k > 0$ , we must change the lower and upper limits of the summation from  $0$  to  $k$ , and from  $N-1$  to  $N+k-1$  respectively. Then, replacing  $x[n]$  with  $x[n-k]$  in the definition above, we get

$$D\{x[n-k]\} = \sum_{n=k}^{N+k-1} x[n-k]W_N^{mn} \quad (10.28)$$

Now, we let  $n-k = \mu$ ; then  $n = k + \mu$ , and when  $n = k$ ,  $\mu = 0$ . Therefore, the above relation becomes

$$D\{x[\mu]\} = \sum_{\mu=0}^{N-1} x[\mu]W_N^{m(k+\mu)} = W_N^{km} \sum_{\mu=0}^{N-1} x[\mu]W_N^{\mu m} = W_N^{km} X[\mu] = W_N^{km} X[m] \quad (10.29)$$

We must remember, however, that although the magnitudes of the frequency components are not affected by the shift, a phase shift of  $2\pi km/N$  radians is introduced as a result of the time shift. To prove this, let us consider the relation  $y[n] = x[n-k]$ . Taking the DFT of both sides of this relation, we get

$$Y[m] = W_N^{km} X[m] = X[m]e^{-j\frac{2\pi km}{N}} = X[m] \angle \frac{-2\pi km}{N} \quad (10.30)$$

Since both  $X[m]$  and  $Y[m]$  are complex quantities, they can be expressed in magnitude and phase angle form as

$$X[m] = |X[m]| \angle \theta$$

and

$$Y[m] = |Y[m]| \angle \varphi$$

By substitution of these into (10.30), we get

$$|Y[m]| \angle \varphi = |X[m]| \angle \theta \angle \frac{-2\pi km}{N} \quad (10.31)$$

and since  $|Y[m]| = |X[m]|$ , it follows that

$$\varphi = \theta - \frac{2\pi km}{N} \quad (10.32)$$

**3. Frequency Shift**

$$\boxed{W_N^{-km} x[n] \Leftrightarrow X[m-k]} \quad (10.33)$$

**Proof:**

$$D\{W_N^{-kn} x[n]\} = \sum_{n=0}^{N-1} W_N^{-kn} x[n] W_N^{mn} = \sum_{n=0}^{N-1} x[n] W_N^{(m-k)n} \quad (10.34)$$

and we observe that the last term on the right side of (10.34) is the same as  $D\{x[n]\}$  except that  $m$  is replaced with  $m - k$ . Therefore,

$$D\{W_N^{-km} x[n]\} = X[m-k] \quad (10.35)$$

**4. Time Convolution**

$$\boxed{x[n]*h[n] \Leftrightarrow X[m] \cdot H[m]} \quad (10.36)$$

**Proof:**

Since

$$x[n]*h[n] = \sum_{k=0}^{N-1} x[n]h[n-k]$$

then,

$$D\{x[n]*h[n]\} = \sum_{n=0}^{N-1} \left[ \sum_{k=0}^{N-1} x[k]h[n-k] \right] W_N^{mn} \quad (10.37)$$

Next, interchanging the order of the indices  $n$  and  $k$  in the lower limit of the summation, and also changing the range of summation from  $N-1$  to  $N+k-1$  for the bracketed term on the right side of (10.37), we get

$$D\{x[n]*h[n]\} = \sum_{k=0}^{N-1} x[k] \left[ \sum_{n=k}^{N+k-1} h[n-k] \right] W_N^{kn} \quad (10.38)$$

Now, from the time shifting theorem,

$$\left[ \sum_{n=k}^{N+k-1} h[n-k] \right] W_N^{kn} = W_N^{kn} H[m] \quad (10.39)$$

and by substitution into (10.38),

$$D\{x[n]*h[n]\} = \left[ \sum_{k=0}^{N-1} x[k][W_N^{kn}] \right] H[m] = X[k] \cdot H[m] = X[m] \cdot H[m] \quad (10.40)$$

### 5. Frequency Convolution

$$x[n] \cdot y[n] \Leftrightarrow \frac{1}{N} \sum_{k=0}^{N-1} X[k]Y[m-k] = \frac{1}{N} X[m]*Y[m] \quad (10.41)$$

**Proof:**

The proof is obtained by taking the Inverse DFT, changing the order of the summation, and letting  $m - k = \mu$ .

## 10.4 The Sampling Theorem

The *sampling theorem*, also known as *Shannon's Sampling Theorem*, states that *if a continuous time function  $f(t)$  is band-limited with its highest frequency component less than  $W$ , then  $f(t)$  can be completely recovered from its sampled values, if the sampling frequency is equal to or greater than  $2W$ .*

For example, if we assume that the highest frequency component in a signal is  $18 \text{ KHz}$ , this signal must be sampled at  $2 \times 18 \text{ KHz} = 36 \text{ KHz}$  or higher so that it can be completely specified by its sampled values. If the sampled frequency remains the same, i.e.,  $36 \text{ KHz}$ , and the highest frequency of this signal is increased to, say  $25 \text{ KHz}$ , this signal cannot be recovered by any digital-to-analog converter.

A typical digital signal processing system contains a low-pass analog filter, often called *pre-sampling filter*, to ensure that the highest frequency allowed into the system, will be equal or less the sampling rate so that the signal can be recovered. The highest frequency allowed by the pre-sampling filter is referred to as the *Nyquist frequency*, and it is denoted as  $f_n$ .

If a signal is not band-limited, or if the sampling rate is too low, the spectral components of the signal will overlap each other and this condition is called *aliasing*. To avoid aliasing, we must increase the sampling rate.

A discrete time signal may have an infinite length; in this case, it must be limited to a finite interval before it is sampled. We can terminate the signal at the desired finite number of terms, by multiplying it by a *window function*. There are several window functions such as the *rectangular*, *triangular*, *Hamming*, *Hanning*, *Kaiser*, etc. To obtain a truncated sequence, we multiply an infinite sequence by one of these window functions. However, we must choose a suitable window function; otherwise, the sequence will be terminated abruptly producing the effect of *leakage*.

---

## Chapter 10 The DFT and the FFT Algorithm

---

As an example of how leakage can occur, let us review Example 8.7, and Exercise 8.3, where the infinite sequence  $\cos\omega_0 t$ , or  $\cos n\omega_0 T$  is multiplied by the window function  $A[u_0(t+T) - u_0(t-T)]$  or  $A[u_0(n+m) - u_0(n-m)]$ . We can see that the spectrum spreads or *leaks* over the neighborhood of  $\pm\omega_0$ . Selection of an appropriate window function to avoid leakage is beyond the scope of this book, and will not be discussed here.

A third problem that may arise in using the DFT, results from the fact the spectrum of the DFT is not continuous; it is a discrete function where the spectrum consists of integer multiples of the fundamental frequency. It is possible, however, that some significant frequency component lies between two spectral lines and goes undetected. This is called *picket-fence effect* since we can only see discrete values of the spectrum. This problem can be alleviated by adding zeros at the end of the discrete signal, thereby changing the period, which in turn changes the location of the spectral lines. We should remember that the sampling theorem states that the original time sequence can be completely recovered if the sampling frequency is adequate, but does not guarantee that all frequency components will be detected.

To get a better understanding of the sampling frequency  $f_s$ , Nyquist frequency  $f_n$ , number of samples  $N$ , and the periods in the time and frequency domains, we will adopt the following notations:

$$\begin{aligned} N &= \text{number of samples in time or frequency period} \\ f_s &= \text{sampling frequency} = \text{samples per second} \\ T_t &= \text{period of a periodic discrete time function} \\ t_t &= \text{interval between the } N \text{ samples in time period } T_t \\ T_f &= \text{period of a periodic discrete frequency function} \\ t_f &= \text{interval between the } N \text{ samples in frequency period } T_f \end{aligned}$$

These notations are shown in Figure 10.4. Thus, we have the relations

$$t_t = \frac{T_t}{N} \quad f_s = \frac{1}{t_t} \quad t_f = \frac{T_f}{N} \quad t_t = \frac{1}{f_s} \quad t_f = \frac{1}{T_f} \quad (10.42)$$

### Example 10.4

The period of a periodic discrete time function is  $0.125$  millisecond, and it is sampled at  $1024$  equally spaced points. It is assumed that with this number of samples, the sampling theorem is satisfied and thus there will be no aliasing.

- Compute the period of the frequency spectrum in  $KHz$ .
- Compute the interval between frequency components in  $KHz$ .
- Compute the sampling frequency  $f_s$ .

d. Compute the Nyquist frequency  $f_n$

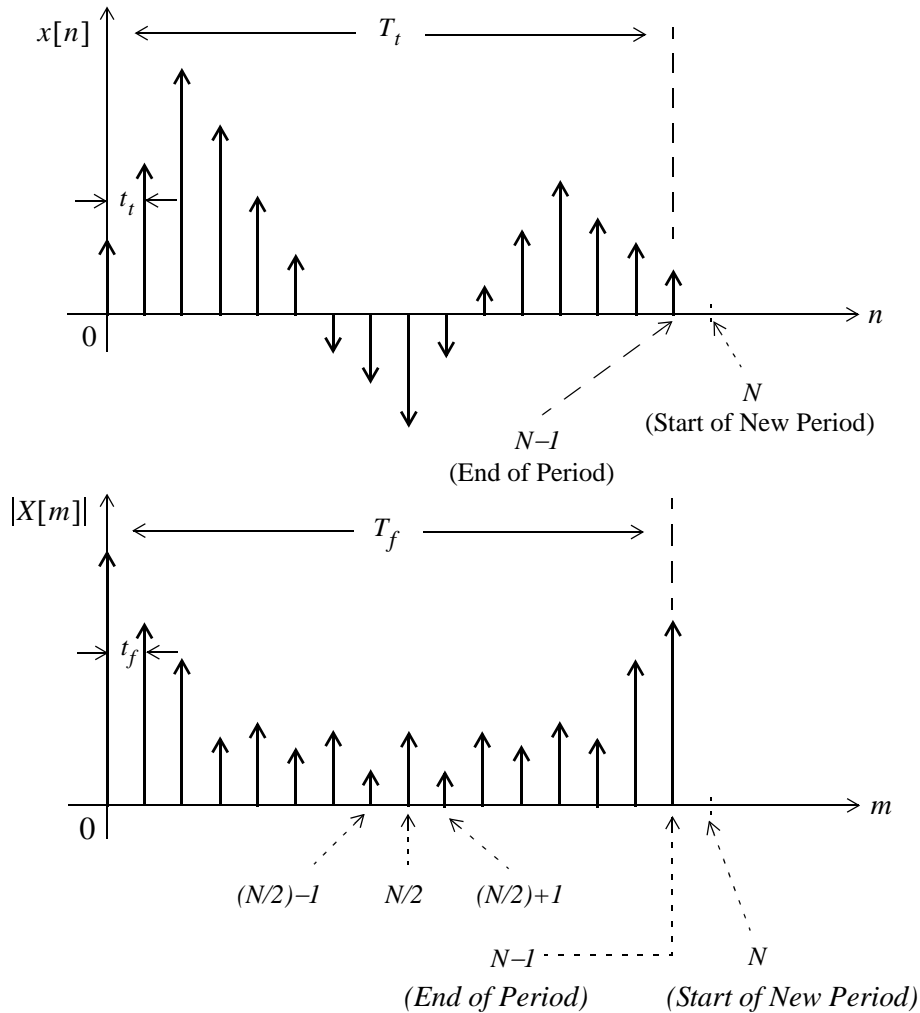


Figure 10.4. Intervals between samples and periods in discrete time and frequency domains

**Solution:**

For this example,  $T_t = 0.125 \text{ ms}$  and  $N = 1024 \text{ points}$ . Therefore, the time between successive time components is

$$t_t = \frac{T_t}{N} = \frac{0.125 \times 10^{-3}}{1024} = 0.122 \mu\text{s}$$

Then,

a. the period  $T_f$  of the frequency spectrum is

$$T_f = \frac{1}{t_t} = \frac{1}{0.122 \times 10^{-6}} = 8192 \text{ kHz} \approx 8.2 \text{ MHz}$$

b. the interval  $t_f$  between frequency components is

$$t_f = \frac{T_f}{N} = \frac{8192 \text{ kHz}}{1024} = 8 \text{ kHz}$$

c. the sampling frequency  $f_s$  is

$$f_s = \frac{1}{t_t} = \frac{1}{0.122 \times 10^{-6}} = 8.2 \text{ MHz}$$

d. the Nyquist frequency must be equal or less than half the sampling frequency, that is,

$$f_n \leq \frac{1}{2}f_s \leq \frac{1}{2} \times 8.2 \text{ MHz} \leq 4.1 \text{ MHz}$$

### 10.5 Number of Operations Required to Compute the DFT

Let us consider a signal whose highest (Nyquist) frequency is  $18 \text{ KHz}$ , the sampling frequency is  $50 \text{ KHz}$ , and 1024 samples are taken, i.e.,  $N = 1024$ . The time required to compute the entire DFT would be

$$t = \frac{1024 \text{ samples}}{50 \times 10^3 \text{ samples per second}} = 20.48 \text{ ms} \quad (10.43)$$

To compute the number of operations required to complete this task, let us expand the  $N$ -point DFT defined as

$$X[m] = \sum_{n=0}^{N-1} x[n]W_N^{mn} \quad (10.44)$$

Then,

$$\begin{aligned} X[0] &= x[0]W_N^0 + x[1]W_N^0 + x[2]W_N^0 + \dots + x[N-1]W_N^0 \\ X[1] &= x[0]W_N^0 + x[1]W_N^1 + x[2]W_N^2 + \dots + x[N-1]W_N^{N-1} \\ X[2] &= x[0]W_N^0 + x[1]W_N^2 + x[2]W_N^4 + \dots + x[N-1]W_N^{2(N-1)} \\ &\dots \\ X[N-1] &= x[0]W_N^0 + x[1]W_N^{N-1} + x[2]W_N^{2(N-1)} + \dots + x[N-1]W_N^{(N-1)^2} \end{aligned} \quad (10.45)$$

and it is worth remembering that

$$W_N^0 = e^{(-j\frac{2\pi}{N})(0)} = 1 \quad (10.46)$$



Since  $W_N^i$  is a complex number, the computation of any frequency component  $X[k]$ , requires  $N$  complex multiplications and  $N$  complex additions, that is,  $2N$  complex arithmetic operations are required to compute any frequency component of  $X[k]$ . If we assume that  $x[n]$  is real, then only  $N/2$  of the  $|X[m]|$  components are unique. Therefore, we would require  $2N \times N/2 = N^2$  complex operations to compute the entire frequency spectrum. Thus, for an  $N = 1024$  point DFT, such as the one with  $18 \text{ KHz}$  signal, we would require  $N^2 = 1024^2 = 1048576$  complex operations, and these would have to be completed within  $20.48 \text{ ms}$  as we found in (10.43). Although the means of doing this task may be possible with today's technology, it seems impractical.

Fortunately, many of the  $W_N$  terms in (10.45) are unity. Moreover, because of some symmetry properties, the number of complex operations can be reduced considerably. This is possible with the algorithm known as FFT (Fast Fourier Transform) that was developed by Cooley and Tukey, and it is very well documented. This algorithm is the subject of the next section.

## 10.6 The Fast Fourier Transform (FFT)

In this section, we will be making extensive use of the complex rotating vector

$$W_N = e^{-\frac{j2\pi}{N}} \tag{10.47}$$

Some additional properties of  $W_N$  are given in (10.48) below.

$$\begin{aligned} W_N^N &= e^{-\left(\frac{j2\pi}{N}\right)N} = e^{-j2\pi} = 1 \\ W_N^{N/2} &= e^{-\left(\frac{j2\pi}{N}\right)\frac{N}{2}} = e^{-j\pi} = -1 \\ W_N^{N/4} &= e^{-\left(\frac{j2\pi}{N}\right)\frac{N}{4}} = e^{-j\pi/2} = -j \\ W_N^{3N/4} &= e^{-\left(\frac{j2\pi}{N}\right)\frac{3N}{4}} = e^{-j3\pi/2} = j \\ W_N^{kN} &= e^{-\left(\frac{j2\pi}{N}\right)kN} = e^{-j2k\pi} = 1 \quad k = 0, 1, 2, \dots \\ W_N^{kN+r} &= e^{-\left(\frac{j2\pi}{N}\right)(kN+r)} = e^{-\left(\frac{j2\pi}{N}\right)kN} e^{-\left(\frac{j2\pi}{N}\right)r} = 1 \cdot W_N^r = W_N^r \\ W_{2N}^k &= e^{-\left(\frac{j2\pi}{2N}\right)k} = e^{-\left(\frac{j2\pi}{N}\right)\frac{k}{2}} = W_N^{k/2} \end{aligned} \tag{10.48}$$

We rewrite the array of (10.45) in matrix form as shown in (10.49) below.

$$\begin{bmatrix} X[0] \\ X[1] \\ X[2] \\ \dots \\ X[N-1] \end{bmatrix} = \begin{bmatrix} W_N^0 & W_N^0 & W_N^0 & \dots & W_N^0 \\ W_N^0 & W_N^1 & W_N^2 & \dots & W_N^{N-1} \\ W_N^0 & W_N^2 & W_N^4 & \dots & W_N^{2(N-1)} \\ \dots & \dots & \dots & \dots & \dots \\ W_N^0 & W_N^{N-1} & W_N^{2(N-1)} & \dots & W_N^{(N-1)^2} \end{bmatrix} \cdot \begin{bmatrix} x[0] \\ x[1] \\ x[2] \\ \dots \\ x[N-1] \end{bmatrix} \quad (10.49)$$

This is a complex Vandermonde matrix and it is expressed in a more compact form as

$$X[m] = [W_N] \cdot x[n] \quad (10.50)$$

The algorithm that was developed by *Cooley* and *Tukey*, is based on matrix decomposition methods, where the matrix  $W$  in (10.50) is factored into  $L$  smaller matrices, that is,

$$[W_N] = [W_1] \cdot [W_2] \cdot \dots \cdot [W_L] \quad (10.51)$$

where  $L$  is chosen as  $L = \log_2 N$  or  $N = 2^L$

Each row of the matrices on the right side of (10.51) contains only two non-zero terms, unity and  $W_N^k$ . Then, the vector  $X[m]$ , is obtained from

$$X[m] = [W_1] \cdot [W_2] \cdot \dots \cdot [W_L] \cdot x[n] \quad (10.52)$$

The FFT computation begins with matrix  $[W_L]$  in (10.52). This matrix operates on vector  $x[n]$  producing a new vector, and each component of this new vector, is obtained by one multiplication and one addition. This is because there are only two non-zero elements on a given row, and one of these elements is unity. Since there are  $N$  components on  $x[n]$ , there will be  $N$  complex additions and  $N$  complex multiplications. This new vector is then operated on by the  $[W_{L-1}]$  matrix, then on  $[W_{L-2}]$ , and so on, until the entire computation is completed. It appears that the entire computation would require  $NL = N \log_2 N$  complex multiplications, and also  $N \log_2 N$  additions for a total of  $2N \log_2 N$  arithmetic operations. However, since  $W_N^0 = 1$ ,  $W_N^{N/2} = -1$ , and other reductions, it is estimated that only about half of these, that is,  $N \log_2 N$  total arithmetic operations are required by the FFT versus the  $N^2$  computations required by the DFT.

Under those assumptions, we construct Table 10.3 to compare the percentage of computations achieved by the use of FFT versus the DFT.

*TABLE 10.3 DFT and FFT Computations*

	DFT	FFT	FFT/DFT
$N$	$N^2$	$N \log_2 N$	%
8	64	24	37.5
16	256	64	25
32	1024	160	15.6
64	4096	384	9.4
128	16384	896	5.5
256	65536	2048	3.1
512	262144	4608	1.8
1024	1048576	10240	1
2048	4194304	22528	0.5

A plethora of FFT algorithms has been developed and published. They are divided into two main categories:

**Category I**

- a. *Decimation in Time*
- b. *Decimation in Frequency*

**Category II**

- a. *In-Place*
- b. *Natural Input-Output (Double-Memory Technique)*

To define Category I, we need to refer to the DFT and Inverse DFT definitions. They are repeated below for convenience.

$$X[m] = \sum_{n=0}^{N-1} x[n] W_N^{mn} \tag{10.53}$$

and

$$x[n] = \frac{1}{N} \sum_{m=0}^{N-1} X[m] W_N^{-mn} \tag{10.54}$$

## Chapter 10 The DFT and the FFT Algorithm

We observe that (10.53) and (10.54) differ only by the factor  $1/N$ , and the replacement of  $W_N$  with  $W_N^{-1}$ . If the DFT algorithm is developed in terms of the direct DFT of (10.53), it is referred to as *decimation in time*, and if it is developed in terms of the Inverse DFT of (10.54), it is referred to as *decimation in frequency*. In the latter case, the vector

$$W_N = e^{-j\frac{2\pi}{N}}$$

is replaced by its complex conjugate

$$W_N^{-1} = e^{j\frac{2\pi}{N}}$$

that is, the sine terms are reversed in sign, and the multiplication by the factor  $1/N$  can be done either at the input or output.

The Category II algorithm schemes are described in the Table 10.4 along with their advantages and disadvantages.

TABLE 10.4 In-Place and Natural Input-Output algorithms

Category II algorithm	Description	Advantages	Disadvantages
In-Place	The process where the result of a computation of a new vector is stored in the same memory location as the result of the previous computation	Eliminates the need for intermediate storage and memory requirements	The output appears in an unnatural order and must be re-ordered.
Natural Input-Output (Double Memory)	The process where the output appears in same (natural) order as the input	No reordering is required	Requires more internal memory to preserve the natural order

Now, we will explain how the unnatural order occurs and how it can be re-ordered.

Consider the discrete time sequence  $f[n]$ ; its DFT is found from

$$F[m] = \sum_{n=0}^{N-1} f[n]W_N^{mn} \quad (10.55)$$

We assume that  $N$  is a power of 2 and thus, it is divisible by 2. Then, we can decompose the sequence  $f[n]$  into two subsequences,  $f_{even}[n]$  which contains the even components, and  $f_{odd}[n]$  which contains the odd components. In other words, we choose these as

$$f_{even}[n] = f[2n]$$

and

$$f_{odd}[n] = f[2n + 1]$$

for  $n = 0, 1, 2, \dots, N/2 - 1$

Each of these subsequences has a length of  $N/2$  and thus, their DFTs are, respectively,

$$F_{even}[m] = \sum_{n=0}^{N/2-1} f_{even}[n] W_{N/2}^{mn} = \sum_{n=0}^{N/2-1} f[2n] W_{N/2}^{mn} \quad (10.56)$$

and

$$F_{odd}[m] = \sum_{n=0}^{N/2-1} f_{odd}[n] W_{N/2}^{mn} = \sum_{n=0}^{N/2-1} f[2n + 1] W_{N/2}^{mn} \quad (10.57)$$

where

$$W_{N/2} = e^{-j\frac{2\pi}{N/2}} = e^{\left(-j\frac{2\pi}{N}\right)2} = W_N^2 \quad (10.58)$$

For an 8-point DFT,  $N = 8$ . Expanding (10.55) for  $n = 1, 2, 3, \dots, 7$  we get

$$\begin{aligned} F[m] &= \sum_{n=0}^7 f[n] W_N^{mn} \\ &= f[0] + f[1] W_N^m + f[2] W_N^{2m} + f[3] W_N^{3m} \\ &\quad + f[4] W_N^{4m} + f[5] W_N^{5m} + f[6] W_N^{6m} + f[7] W_N^{7m} \end{aligned} \quad (10.59)$$

Expanding (10.56) for  $n = 0, 1, 2,$  and  $3$  and recalling that  $W_N^0 = 1$ , we get

$$\begin{aligned} F_{even}[m] &= \sum_{n=0}^3 f[2n] W_N^{2mn} \\ &= f[0] W_N^0 + f[2] W_N^{2m} + f[4] W_N^{4m} + f[6] W_N^{6m} \\ &= f[0] + f[2] W_N^{2m} + f[4] W_N^{4m} + f[6] W_N^{6m} \end{aligned} \quad (10.60)$$

Expanding also (10.57) for  $n = 0, 1, 2,$  and  $3$  and using  $W_N^0 = 1$ , we get

$$\begin{aligned} F_{odd}[m] &= \sum_{n=0}^3 f[2n + 1] W_N^{2mn} = f[1] W_N^0 + f[3] W_N^{2m} + f[5] W_N^{4m} + f[7] W_N^{6m} \\ &= f[1] + f[3] W_N^{2m} + f[5] W_N^{4m} + f[7] W_N^{6m} \end{aligned} \quad (10.61)$$

---

## Chapter 10 The DFT and the FFT Algorithm

---

The vector  $W_N$  is the same in (10.59), (10.60) and (10.61), and  $N = 8$ . Then,

$$W_N = W_8 = e^{-j\frac{2\pi}{N}} = e^{-j\frac{2\pi}{8}}$$

Multiplying both sides of (10.61) by  $W_N^m$ , we get

$$W_N^m F_{odd}[m] = f[1]W_N^m + f[3]W_N^{3m} + f[5]W_N^{5m} + f[7]W_N^{7m} \quad (10.62)$$

and from (10.59), (10.60) and (10.62), we observe that

$$F[m] = F_{even}[m] + W_N^m F_{odd}[m] \quad (10.63)$$

for  $n = 1, 2, 3, \dots, 7$ .

Continuing the process, we decompose  $\{f[0], f[2], f[4], \text{ and } f[6]\}$  into  $\{f[0], f[4]\}$  and  $\{f[2], f[6]\}$ . These are sequences of length  $N/4 = 2$ .

Denoting their DFTs as  $F_{even1}[m]$  and  $F_{even2}[m]$ , and using the relation

$$W_{N/4} = e^{-j\frac{2\pi}{N/4}} = e^{-j\frac{2\pi}{N} \cdot 4} = W_N^4 \quad (10.64)$$

for  $n = 0, 1$ , we get

$$F_{even1}[m] = f[0] + f[4]W_N^{4m} \quad (10.65)$$

and

$$F_{even2}[m] = f[2] + f[6]W_N^{4m} \quad (10.66)$$

The sequences of (10.65) and (10.66) cannot be decomposed further. They justify the statement made earlier, that each computation produces a vector where each component of this vector, for  $n = 1, 2, 3, \dots, 7$  is obtained by one multiplication and one addition. This is often referred to as a *butterfly operation*.

Substitution of (10.65) and (10.66) into (10.60), yields

$$F_{even}[m] = F_{even1}[m] + W_N^{2m} F_{even2}[m] \quad (10.67)$$

Likewise,  $F_{odd}[m]$  can be decomposed into DFTs of length 2; then,  $F[m]$  can be computed from

$$F(m) = F_{even}(m) + W_N^m F_{odd}(m) \quad m = 0, 1, 2, \dots, 7 \quad (10.68)$$

for  $N = 8$ . Of course, this procedure can be extended for any  $N$  that is divisible by 2.

Figure 10.5 shows the *signal flow graph* of a decimation in time, in-place FFT algorithm for  $N = 8$ , where the input is shuffled in accordance with the above procedure. The subscript  $N$  in  $W$  has been omitted for clarity.

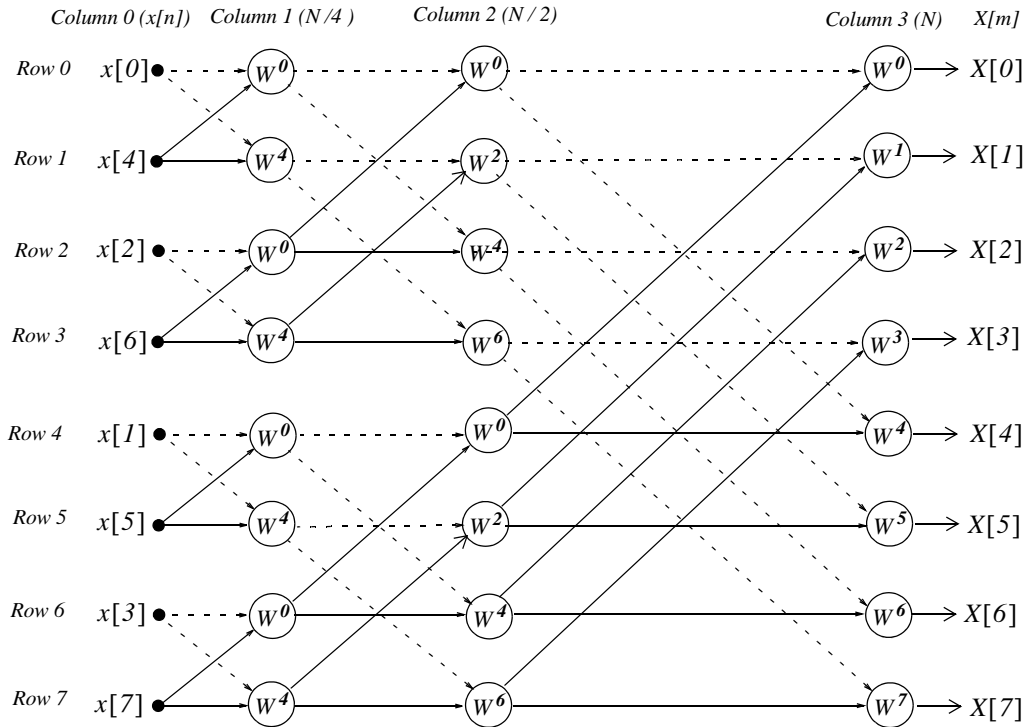


Figure 10.5. Signal flow graph of a decimation in time, in-place FFT algorithm, for  $N = 8$

In the signal flow graph of Figure 10.5, the input  $x[n]$  appears in Column 0. The  $N/4$ ,  $N/2$ , and  $N$ -point FFTs are in Columns 1, 2, and 3 respectively.

In simplified form, the output of the node associated with row  $R$  and column  $C$ , indicated as  $Y(R, C)$ , is found from

$$Y[R, C] = \underbrace{Y[R_i, C-1]}_{\text{Dash line}} + \underbrace{W^m Y[R_j, C-1]}_{\text{Solid line}} \quad (10.69)$$

where  $0 \leq R \leq 7$ ,  $0 \leq C \leq 3$ , and the exponent  $m$  in  $W^m$  is indicated on the signal flow graph.

## Chapter 10 The DFT and the FFT Algorithm

The binary input words and the bit-reversed words applicable to the this signal flow graph, are shown in Table 10.5.

TABLE 10.5 Binary words for the signal flow graph of Figure 10.5

n	Binary Word	Reversed-Bit Word	Input Order
0	000	000	$x[0]$
1	001	100	$x[4]$
2	010	010	$x[2]$
3	011	110	$x[6]$
4	100	001	$x[1]$
5	101	101	$x[5]$
6	110	011	$x[3]$
7	111	111	$x[7]$

We will illustrate the use of (10.69) with the following example.

### Example 10.5

Using (10.69) with the signal flow graph of Figure 10.5, compute the spectral component  $X[3]$  in terms of the inputs  $x[i]$  and vectors  $W^j$ . Then, verify that the result is the same as that obtained by direct application of the DFT.

#### Solution:

The  $N/4$  point FFT appears in Column 1. Using (10.69) we get:

$$\begin{aligned}
 Y[0, 1] &= x[0] + W^0 x[4] = Y[0, 0] + W^0 Y[1, 0] \\
 Y[1, 1] &= x[0] + W^4 x[4] = Y[0, 0] + W^4 Y[1, 0] \\
 Y[2, 1] &= x[2] + W^0 x[6] = Y[2, 0] + W^0 Y[3, 0] \\
 Y[3, 1] &= x[2] + W^4 x[6] = Y[2, 0] + W^4 Y[3, 0] \\
 Y[4, 1] &= x[1] + W^0 x[5] = Y[4, 0] + W^0 Y[5, 0] \\
 Y[5, 1] &= x[1] + W^4 x[5] = Y[4, 0] + W^4 Y[5, 0] \\
 Y[6, 1] &= x[3] + W^0 x[7] = Y[6, 0] + W^0 Y[7, 0] \\
 Y[7, 1] &= x[3] + W^0 x[7] = Y[6, 0] + W^4 Y[7, 0]
 \end{aligned} \tag{10.70}$$

The  $N/2$  point FFT appears in Column 2. Using (10.69) we get:



$$\begin{aligned}
 Y[0, 2] &= Y[0, 1] + W^0 Y[2, 1] \\
 Y[1, 2] &= Y[1, 1] + W^2 Y[3, 1] \\
 Y[2, 2] &= Y[0, 1] + W^4 Y[2, 1] \\
 Y[3, 2] &= Y[1, 1] + W^6 Y[3, 1] \\
 Y[4, 2] &= Y[4, 1] + W^0 Y[6, 1] \\
 Y[5, 2] &= Y[5, 1] + W^2 Y[7, 1] \\
 Y[6, 2] &= Y[4, 1] + W^4 Y[6, 1] \\
 Y[7, 2] &= Y[5, 1] + W^6 Y[7, 1]
 \end{aligned}
 \tag{10.71}$$

The  $N$  point FFT appears at the outputs of Column 3, where

$$\begin{aligned}
 Y[0, 3] &= Y[0, 2] + W^0 Y[4, 2] \\
 Y[1, 3] &= Y[1, 2] + W^1 Y[5, 2] \\
 Y[2, 3] &= Y[2, 2] + W^2 Y[6, 2] \\
 Y[3, 3] &= Y[3, 2] + W^3 Y[7, 2] \\
 Y[4, 3] &= Y[0, 2] + W^4 Y[4, 2] \\
 Y[5, 3] &= Y[1, 2] + W^5 Y[5, 2] \\
 Y[6, 3] &= Y[2, 2] + W^6 Y[6, 2] \\
 Y[7, 3] &= Y[3, 2] + W^7 Y[7, 2]
 \end{aligned}
 \tag{10.72}$$

With the equations of (10.70), (10.71), and (10.72), we can determine any of the 8 spectral components. Our example calls for  $X[3]$ ; then, with reference to the signal flow chart of Figure 10.5 and the fourth of the equations in (10.72),

$$X[3] = Y[3, 3] = Y[3, 2] + W^3 Y[7, 2] \tag{10.73}$$

Also, from (10.71)

$$Y[3, 2] = Y[1, 1] + W^6 Y[3, 1] \tag{10.74}$$

and

$$Y[7, 2] = Y[5, 1] + W^6 Y[7, 1] \tag{10.75}$$

Finally, from (10.70)

$$\begin{aligned} Y[1, 1] &= Y[0, 0] + W^4 Y[1, 0] \\ Y[3, 1] &= Y[2, 0] + W^4 Y[3, 0] \\ Y[5, 1] &= Y[4, 0] + W^4 Y[5, 0] \\ Y[7, 1] &= Y[6, 0] + W^4 Y[7, 0] \end{aligned} \tag{10.76}$$

and making these substitutions into (10.73), we get

$$\begin{aligned} Y[3, 3] &= Y[3, 2] + W^3 Y[7, 2] \\ &= Y[1, 1] + W^6 Y[3, 1] + W^3 \{ Y[5, 1] + W^6 Y[7, 1] \} \\ &= Y[0, 0] + W^4 Y[1, 0] + W^6 \{ Y[2, 0] + W^4 Y[3, 0] \} \\ &\quad + W^3 \{ (Y[4, 0] + W^4 Y[5, 0]) + W^6 (Y[6, 0] + W^4 Y[7, 0]) \} \\ &= Y[0, 0] + W^4 Y[1, 0] + W^6 Y[2, 0] + W^{10} Y[3, 0] \\ &\quad + W^3 Y[4, 0] + W^7 Y[5, 0] + W^9 Y[6, 0] + W^{13} Y[7, 0] \end{aligned}$$

Rearranging in ascending powers of  $W$ , we get

$$\begin{aligned} Y[3, 3] &= Y[0, 0] + W^3 Y[4, 0] + W^4 Y[1, 0] + W^6 Y[2, 0] \\ &\quad + W^7 Y[5, 0] + W^9 Y[6, 0] + W^{10} Y[3, 0] + W^{13} Y[7, 0] \end{aligned} \tag{10.77}$$

From the signal flow graph of Figure 10.5, we observe that

$$\begin{aligned} Y[0, 0] &= x[0] \\ Y[4, 0] &= x[1] \\ Y[1, 0] &= x[4] \\ Y[2, 0] &= x[2] \\ Y[5, 0] &= x[5] \\ Y[6, 0] &= x[3] \\ Y[3, 0] &= x[6] \\ Y[7, 0] &= x[7] \end{aligned}$$

and

$$Y[3, 3] = X[3]$$

Therefore, we express (10.77) as

$$\begin{aligned}
 X[3] &= x[0] + x[1]W^3 + x[4]W^4 + x[2]W^6 \\
 &\quad + x[5]W^7 + x[3]W^9 + x[6]W^{10} + x[7]W^{13} \\
 &= x[0] + x[1]W^3 + x[2]W^6 + x[3]W^9 \\
 &\quad + x[4]W^4 + x[5]W^7 + x[6]W^{10} + x[7]W^{13}
 \end{aligned} \tag{10.78}$$

We will verify that this expression is correct by the use of the direct DFT of (10.17), that is,

$$X[m] = \sum_{n=0}^{N-1} x(n)W_N^{mn}$$

For  $m = 3$  and  $n = 0, 1, 2, \dots, 7$ , we get

$$\begin{aligned}
 X[3] &= x[0] + x[1]W^3 + x[2]W^6 + x[3]W^9 \\
 &\quad + x[4]W^{12} + x[5]W^{15} + x[6]W^{18} + x[7]W^{21}
 \end{aligned} \tag{10.79}$$

and from (10.48),

$$W^{kN+r} = W^r$$

Now, with  $N = 8$ , and  $k = 1$ , we get  $kN = 8$ . Then,

$$W^{12} = W^4, \quad W^{15} = W^7, \quad W^{18} = W^{10} \quad \text{and} \quad W^{21} = W^{13}$$

and by substitution into (10.79),

$$\begin{aligned}
 X[3] &= x[0] + x[1]W^3 + x[2]W^6 + x[3]W^9 \\
 &\quad + x[4]W^4 + x[5]W^7 + x[6]W^{10} + x[7]W^{13}
 \end{aligned} \tag{10.80}$$

We observe that (10.80) is the same as (10.78).

The signal flow graph of Figure 10.5, represents a shuffled input, natural output algorithm. Others are natural input, natural output, or natural input, shuffled output. These combinations occur in both decimation in time, and decimation in frequency algorithms.

## 10.7 Summary

- The  $N$ -point DFT is defined as

$$X[m] = \sum_{n=0}^{N-1} x[n]e^{-j2\pi\frac{mn}{N}}$$

where  $N$  represents the number of points that are equally spaced in the interval  $0$  to  $2\pi$  on the unit circle of the  $z$ -plane, and  $m = 0, 1, 2, \dots, N-1$ .

---

## Chapter 10 The DFT and the FFT Algorithm

---

- The  $N$ -point Inverse DFT is defined as

$$x[n] = \frac{1}{N} \sum_{m=0}^{N-1} X[m] e^{j2\pi \frac{mn}{N}}$$

for  $n = 0, 1, 2, \dots, N-1$ .

- In general, the discrete frequency transform  $X[m]$  is complex, and it is expressed as

$$X[m] = \text{Re}\{X[m]\} + \text{Im}\{X[m]\}$$

The real part  $\text{Re}\{X[m]\}$  can be computed from

$$\text{Re}\{X[m]\} = x[0] + \sum_{n=1}^{N-1} x[n] \cos \frac{2\pi mn}{N} \quad \text{for } m = 0, 1, 2, \dots, N-1$$

and the imaginary part from

$$\text{Im}\{X[m]\} = - \sum_{n=1}^{N-1} x[n] \sin \frac{2\pi mn}{N} \quad \text{for } m = 0, 1, 2, \dots, N-1$$

- We can use the **fft(x)** function to compute the DFT, and the **ifft(x)** function to compute the Inverse DFT.
- The term  $e^{-j2\pi/N}$  is a rotating vector, where the range  $0 \leq \theta \leq 2\pi$  is divided into  $360/N$  equal segments and it is denoted as represent it as  $W_N$ , that is,

$$W_N = e^{-\frac{j2\pi}{N}}$$

and consequently

$$W_N^{-1} = e^{\frac{j2\pi}{N}}$$

Accordingly, the DFT pair is normally denoted as

$$X[m] = \sum_{n=0}^{N-1} x(n) W_N^{mn}$$

and

$$x[n] = \frac{1}{N} \sum_{m=0}^{N-1} X(m) W_N^{-mn}$$

- The correspondence between  $x[n]$  and  $X[m]$  is denoted as

$$x[n] \Leftrightarrow X[m]$$

- If  $x[n]$  is an  $N$ -point real discrete time function, only  $N/2$  of the frequency components of  $|X[m]|$  are unique.
- The discrete time and frequency functions are defined as even or odd, in accordance with the relations

$$\text{Even Time Function} \quad f[N-n] = f[n]$$

$$\text{Odd Time Function} \quad f[N-n] = -f[n]$$

$$\text{Even Frequency Function} \quad F[N-m] = F[m]$$

$$\text{Odd Frequency Function} \quad F[N-m] = -F[m]$$

- The even and odd properties of the DFT are similar to those of the continuous Fourier transform and are listed in Table 10.2.
- The linearity property of the DFT states that

$$ax_1[n] + bx_2[n] + \dots \Leftrightarrow aX_1[m] + bX_2[m] + \dots$$

- The time shift property of the DFT states that

$$x[n-k] \Leftrightarrow W_N^{km} X[m]$$

- The frequency shift property of the DFT states that

$$W_N^{-km} x[n] \Leftrightarrow X[m-k]$$

- The time convolution property of the DFT states that

$$x[n]*h[n] \Leftrightarrow X[m] \cdot H[m]$$

- The frequency convolution property of the DFT states that

$$x[n] \cdot y[n] \Leftrightarrow \frac{1}{N} \sum_{k=0}^{N-1} X[k]Y[m-k] = \frac{1}{N} X[m]*Y[m]$$

- The sampling theorem, also known as Shannon's Sampling Theorem, states that if a continuous time function  $f(t)$  is band-limited with its highest frequency component less than  $W$ , then  $f(t)$  can be completely recovered from its sampled values, if the sampling frequency is equal to or greater than  $2W$ .
- A typical digital signal processing system contains a low-pass analog filter, often called pre-sampling filter, to ensure that the highest frequency allowed into the system, will be equal or less the sampling rate so that the signal can be recovered. The highest frequency allowed by the pre-sampling filter is referred to as the Nyquist frequency, and it is denoted as  $f_n$ .

---

## Chapter 10 The DFT and the FFT Algorithm

---

- If a signal is not band-limited, or if the sampling rate is too low, the spectral components of the signal will overlap each other and this condition is called aliasing.
- If a discrete time signal has an infinite length, we can terminate the signal at a desired finite number of terms, by multiplying it by a window function. However, we must choose a suitable window function; otherwise, the sequence will be terminated abruptly producing the effect of leakage
- If in a discrete time signal some significant frequency component that lies between two spectral lines and goes undetected, the picket-fence effect is produced. This effect can be alleviated by adding zeros at the end of the discrete signal, thereby changing the period, which in turn changes the location of the spectral lines.
- The number of operations required to compute the DFT can be significantly reduced by the FFT algorithm.
- The Category I FFT algorithms are classified either as decimation in time or decimation in frequency. Decimation in time implies that DFT algorithm is developed in terms of the direct DFT, whereas decimation in frequency implies that the DFT is developed in terms of the Inverse DFT.
- The Category II FFT algorithms are classified either as in-place or natural input–output. In-place refers to the process where the result of a computation of a new vector is stored in the same memory location as the result of the previous computation. Natural input–output refers to the process where the output appears in same (natural) order as the input.
- The FFT algorithms are usually shown in a signal flow graph. In some signal flow graphs the input is shuffled and the output is natural, and in others the input is natural and the output is shuffled. These combinations occur in both decimation in time, and decimation in frequency algorithms.

### 10.8 Exercises

1. Compute the DFT of the sequence  $x[0] = x[1] = 1, x[2] = x[3] = -1$
2. A square waveform is represented by the discrete time sequence

$$x[0] = x[1] = x[2] = x[3] = 1 \text{ and } x[4] = x[5] = x[6] = x[7] = -1$$

Use MATLAB to compute and plot the magnitude  $|X[m]|$  of this sequence.

3. Prove that

a.  $x[n] \cos \frac{2\pi kn}{N} \Leftrightarrow \frac{1}{2} \{X[m-k] + X[m+k]\}$

b.  $x[n] \sin \frac{2\pi kn}{N} \Leftrightarrow \frac{1}{j2} \{X[m-k] - X[m+k]\}$

4. The signal flow graph of Figure 10.6 is a decimation in time, natural-input, shuffled-output type FFT algorithm. Using this graph and relation (10.69), compute the frequency component  $X[3]$ . Verify that this is the same as that found in Example 10.5.

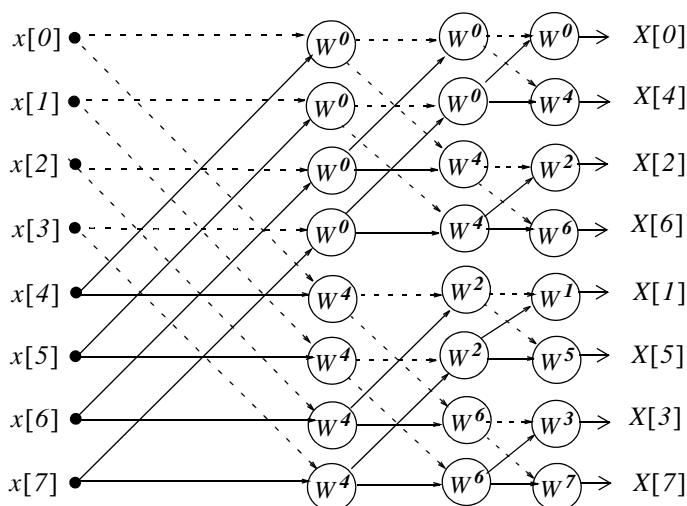


Figure 10.6. Signal flow graph for Exercise 4

5. The signal flow graph of Figure 10.7 is a decimation in frequency, natural input, shuffled output type FFT algorithm. There are two equations that relate successive columns. The first is

$$Y_{dash}(R, C) = Y_{dash}(R_i, C - 1) + Y_{dash}(R_j, C - 1)$$

and it is used with the nodes where two dashed lines terminate on them.

The second equation is

$$Y_{sol}(R, C) = W^m [Y_{sol}(R_i, C-1) - Y_{sol}(R_j, C-1)]$$

and it is used with the nodes where two solid lines terminate on them. The number inside the circles denote the power of  $W_N$ , and the minus (-) sign below serves as a reminder that the bracketed term of the second equation involves a subtraction. Using this graph and the above equations, compute the frequency component  $X[3]$ . Verify that this is the same as in Example 10.5.

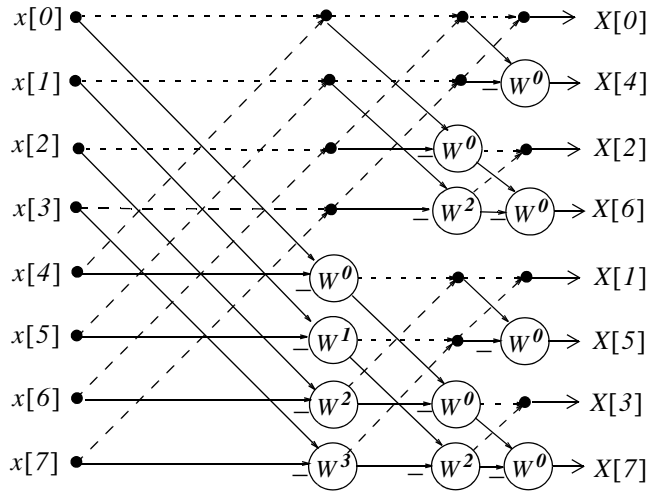


Figure 10.7. Signal flow graph for Exercise 5



## 10.9 Solutions to Exercises

1.

$$F[m] = \sum_{n=0}^{N-1} f(n)W_N^{mn}$$

where  $N = 4$  and  $f[0] = f[1] = 1$ ,  $f[2] = f[3] = -1$ . Then,

$$F[m] = \sum_{n=0}^3 f(n)W_4^{mn} = f[0]W_4^{m[0]} + f[1]W_4^{m[1]} + f[2]W_4^{m[2]} + f[3]W_4^{m[3]}$$

for  $m = 0, 1, 2$ , and  $3$

$m = 0$ :

$$\begin{aligned} F(0) &= (1) \cdot (e^0) + (1) \cdot (e^0) + (-1) \cdot (e^0) + (-1) \cdot (e^0) \\ &= (1) \cdot (1) + (1) \cdot (1) + (-1) \cdot (1) + (-1) \cdot (1) = 0 \end{aligned}$$

$m = 1$ :

$$\begin{aligned} F(1) &= (1) \cdot (e^0) + (1) \cdot (e^{(-j2\pi/4) \times 1}) + (-1) \cdot (e^{(-j2\pi/4) \times 2}) + (-1) \cdot (e^{(-j2\pi/4) \times 3}) \\ &= 1 + \cos \frac{\pi}{2} - j \sin \frac{\pi}{2} - \cos \pi + j \sin \pi - \cos \frac{3\pi}{2} + j \sin \frac{3\pi}{2} \\ &= 1 + 0 - j + 1 + 0 - 0 - j = 2 - j2 \end{aligned}$$

$m = 2$ :

$$\begin{aligned} F(2) &= (1) \cdot (e^0) + (1) \cdot (e^{(-j2\pi/4) \times 2}) + (-1) \cdot (e^{(-j2\pi/4) \times 4}) + (-1) \cdot (e^{(-j2\pi/4) \times 6}) \\ &= 1 + \cos \pi - j \sin \pi - \cos 2\pi + j \sin 2\pi - \cos 3\pi + j \sin 3\pi \\ &= 1 - 1 - 0 - 1 + 0 + 1 + 0 = 0 \end{aligned}$$

$m = 3$ :

$$\begin{aligned} F(3) &= (1) \cdot (e^0) + (1) \cdot (e^{(-j2\pi/4) \times 3}) + (-1) \cdot (e^{(-j2\pi/4) \times 6}) + (-1) \cdot (e^{(-j2\pi/4) \times 9}) \\ &= 1 + \cos \frac{3\pi}{2} - j \sin \frac{3\pi}{2} - \cos 3\pi + j \sin 3\pi - \cos \frac{3\pi}{2} + j \sin \frac{3\pi}{2} \\ &= 1 + 0 + j + 1 + 0 - 0 + j = 2 + j2 \end{aligned}$$

Check with MATLAB:

```
fn=[1 1 -1 -1]; Fm=fft(fn)
```

```
Fm =
```

```
0 2.0000 - 2.0000i 0 2.0000 + 2.0000i
```

2.

$$x[0] = x[1] = x[2] = x[3] = 1 \text{ and } x[4] = x[5] = x[6] = x[7] = -1$$

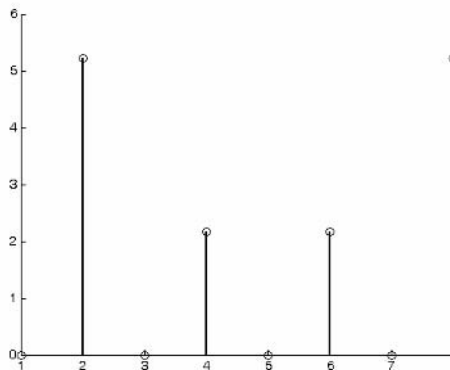
```
fn=[1 1 1 1 -1 -1 -1 -1]; magXm=abs(fft(fn)); fprintf(' \n');...
fprintf('magXm0 = %4.2f \t', magXm(1)); fprintf('magXm1 = %4.2f \t', magXm(2));...
fprintf('magXm2 = %4.2f \t', magXm(3)); fprintf('magXm3 = %4.2f \t', magXm(4));...
fprintf(' \n');...
fprintf('magXm4 = %4.2f \t', magXm(5)); fprintf('magXm5 = %4.2f \t', magXm(6));...
fprintf('magXm6 = %4.2f \t', magXm(7)); fprintf('magXm7 = %4.2f \t', magXm(8))
```

```
magXm0 = 0.00 magXm1 = 5.23 magXm2 = 0.00 magXm3 = 2.16
magXm4 = 0.00 magXm5 = 2.16 magXm6 = 0.00 magXm7 = 5.23
```

The MATLAB **stem** command can be used to plot discrete sequence data. For this exercise we use the code

```
fn=[1 1 1 1 -1 -1 -1 -1]; stem(abs(fft(fn)))
```

and we obtain the plot below.



3.

$$x[n] \cos \frac{2\pi kn}{N} \Leftrightarrow \frac{1}{2} \{X[m-k] + X[m+k]\} \quad x[n] \sin \frac{2\pi kn}{N} \Leftrightarrow \frac{1}{j2} \{X[m-k] - X[m+k]\}$$

From the frequency shift property of the DFT

$$W_N^{-km} x[n] \Leftrightarrow X[m-k] \quad (1)$$

Then,

$$W_N^{km} x[n] \Leftrightarrow X[m+k] \quad (2)$$

Adding (1) and (2) and multiplying the sum by  $1/2$  we get

$$\frac{(W_N^{-km} + W_N^{km})(x[n])}{2} = \frac{(e^{j2\pi kn/N} + e^{-j2\pi kn/N})}{2} x[n] = x[n] \cos \frac{2\pi kn}{N}$$

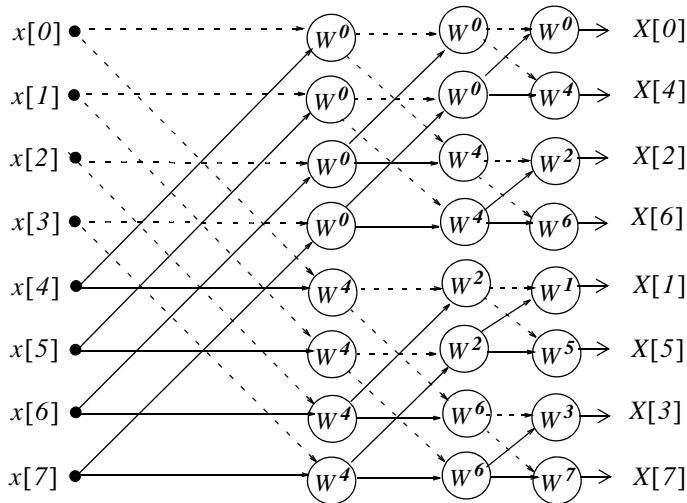
and thus

$$x[n] \cos \frac{2\pi kn}{N} \Leftrightarrow \frac{1}{2} [X[m-k] + X[m+k]]$$

Likewise, subtracting (2) from (1) and multiplying the difference by  $1/j2$  we get

$$\frac{(W_N^{-km} - W_N^{km})(x[n])}{j2} = \frac{(e^{j2\pi kn/N} - e^{-j2\pi kn/N})}{j2} x[n] = x[n] \sin \frac{2\pi kn}{N}$$

4.



$$F(3) = X(3) = Y(6, 3) = Y(6, 2) + W_N^3 Y(7, 2) \quad (1)$$

where

$$Y(6, 2) = Y(4, 1) + W_N^6 Y(6, 1)$$

and

$$Y(7, 2) = Y(5, 1) + W_N^6 Y(7, 1)$$

Going backwards (to the left) we find that

$$Y(4, 1) = Y(0, 0) + W_N^4 Y(4, 0)$$

$$Y(6, 1) = Y(2, 0) + W_N^4 Y(6, 0)$$

$$Y(5, 1) = Y(1, 0) + W_N^4 Y(5, 0)$$

$$Y(7, 1) = Y(3, 0) + W_N^4 Y(7, 0)$$

and by substitution into (1)

$$\begin{aligned}
 F(3) &= X(3) = Y(6, 3) = Y(4, 1) + W_N^6 Y(6, 1) + W_N^3 [Y(5, 1) + W_N^6 Y(7, 1)] \\
 &= Y(0, 0) + W_N^4 Y(4, 0) + W_N^6 [Y(2, 0) + W_N^4 Y(6, 0)] \\
 &\quad + W_N^3 \{ Y(1, 0) + W_N^4 Y(5, 0) + W_N^6 [Y(3, 0) + W_N^4 Y(7, 0)] \} \\
 &= Y(0, 0) + W_N^3 Y(1, 0) + W_N^4 Y(4, 0) + W_N^6 Y(2, 0) \\
 &\quad + W_N^7 Y(5, 0) + W_N^9 Y(3, 0) + W_N^{10} Y(6, 0) + W_N^{13} Y(7, 0)
 \end{aligned} \tag{2}$$

From the DFT definition

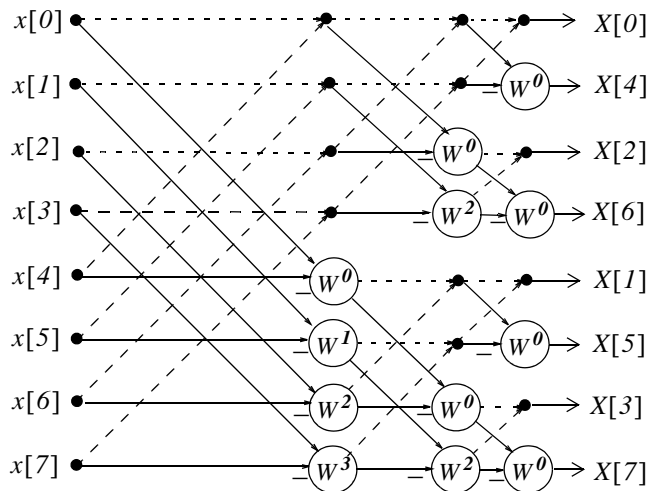
$$\begin{aligned}
 F(3) &= X(3) = x(0) + W_N^3 x(1) + W_N^6 x(2) + W_N^9 x(3) \\
 &\quad + W_N^{12} x(4) + W_N^{15} x(5) + W_N^{18} x(6) + W_N^{21} x(7)
 \end{aligned} \tag{3}$$

By comparison, we see that the first 4 terms of (3) are the same the first, second, fourth, and sixth terms of (2) since  $Y(k, 0) = x(k)$ , that is,  $Y(0, 0) = x(0)$ ,  $Y(1, 0) = x(1)$ , and so on. The remaining terms in (2) and (3) are also the same since  $W_8^{kN+r} = W_8^r$  and thus  $W_8^{12} = W_8^4$ ,  $W_8^{15} = W_8^7$ ,  $W_8^{18} = W_8^{10}$ , and  $W_8^{21} = W_8^{13}$ .

5.

$$Y_{dash}(R, C) = Y_{dash}(R_i, C - 1) + Y_{dash}(R_j, C - 1)$$

$$Y_{sol}(R, C) = W^m [Y_{sol}(R_i, C - 1) - Y_{sol}(R_j, C - 1)]$$



We are asked to compute  $F(3)$  only. However, we will derive all equations as we did in Example 10.5.

Column 1 (C=1):

$$\begin{aligned}
 Y(0, 1) &= Y(0, 0) + Y(4, 0) \\
 Y(1, 1) &= Y(1, 0) + Y(5, 0) \\
 Y(2, 1) &= Y(2, 0) + Y(6, 0) \\
 Y(3, 1) &= Y(3, 0) + Y(7, 0) \\
 Y[4, 1] &= W_N^0[Y(0, 0) - Y(4, 0)] \quad (1) \\
 Y[5, 1] &= W_N^1[Y(1, 0) - Y(5, 0)] \\
 Y[6, 1] &= W_N^2[Y(2, 0) - Y(6, 0)] \\
 Y[7, 1] &= W_N^3[Y(3, 0) - Y(7, 0)]
 \end{aligned}$$

Column 2 (C=2):

$$\begin{aligned}
 Y(0, 2) &= Y(0, 1) + Y(2, 1) \\
 Y(1, 2) &= Y(1, 1) + Y(3, 1) \\
 Y(2, 2) &= W_N^0[Y(0, 1) - Y(2, 1)] \\
 Y(3, 2) &= W_N^2[Y(1, 1) - Y(3, 1)] \quad (2) \\
 Y[4, 2] &= Y(4, 1) + Y(6, 1) \\
 Y[5, 2] &= Y(5, 1) + Y(7, 1) \\
 Y[6, 2] &= W_N^0[Y(4, 1) - Y(6, 1)] \\
 Y[7, 2] &= W_N^2[Y(5, 1) - Y(7, 1)]
 \end{aligned}$$

Column 3 (C=3):

$$\begin{aligned}
 Y(0, 3) &= Y(0, 2) + Y(1, 2) \\
 Y(1, 3) &= W_N^0[Y(0, 2) - Y(1, 2)] \\
 Y(2, 3) &= Y(2, 2) + Y(3, 2) \\
 Y(3, 3) &= W_N^0[Y(2, 2) - Y(3, 2)] \quad (3) \\
 Y[4, 3] &= Y(4, 2) + Y(5, 2) \\
 Y[5, 3] &= W_N^0[Y(4, 2) - Y(5, 2)] \\
 Y[6, 3] &= Y(6, 2) + Y(7, 2) \\
 Y[7, 3] &= W_N^0[Y(6, 2) - Y(7, 2)]
 \end{aligned}$$

$$F(3) = X(3) = Y(6, 3) = Y(6, 2) + Y(7, 2) \quad (4)$$

where

$$Y(6, 2) = W_N^0[Y(4, 1) - Y(6, 1)]$$

and

$$Y(7, 2) = W_N^2[Y(5, 1) - Y(7, 1)]$$

From (1)

$$Y[4, 1] = W_N^0[Y(0, 0) - Y(4, 0)]$$

$$Y[5, 1] = W_N^1[Y(1, 0) - Y(5, 0)]$$

$$Y[6, 1] = W_N^2[Y(2, 0) - Y(6, 0)]$$

$$Y[7, 1] = W_N^3[Y(3, 0) - Y(7, 0)]$$

and by substitution into (4)

$$F(3) = X(3) = W_N^0 Y(0, 0) + W_N^3 Y(1, 0) - W_N^2 Y(2, 0) - W_N^5 Y(3, 0) - W_N^0 Y(4, 0) - W_N^3 Y(5, 0) + W_N^2 Y(6, 0) + W_N^5 Y(7, 0) \quad (5)$$

From Exercise 4,

$$F(3) = X(3) = x(0) + W_N^3 x(1) + W_N^6 x(2) + W_N^9 x(3) + W_N^{12} x(4) + W_N^{15} x(5) + W_N^{18} x(6) + W_N^{21} x(7) \quad (6)$$

Since  $Y(k, 0) = x(k)$ ,  $W_8^{8i+n} = W_8^n$  and  $W_8^{n\pm 4} = -W_8^n$  (see proof below), we see that  $W_8^6 = -W_8^2$ ,  $W_8^9 = -W_8^5$ ,  $W_8^{12} = -W_8^0$ ,  $W_8^{15} = -W_8^3$ ,  $W_8^{18} = W_8^2$ , and  $W_8^{21} = W_8^5$ . Therefore, (5) and (6) are the same.

Proof that  $W_8^{n\pm 4} = -W_8^n$ :

$$W_8^{n\pm 4} = W_8^n \cdot W_8^{\pm 4} = W_8^n \cdot e^{-j2\pi/8 \cdot (\pm 4)} = W_8^n \cdot (\cos \pi \mp j \sin \pi) = -W_8^n$$

This chapter is an introduction to analog and digital filters. It begins with the basic analog filters, transfer functions, and frequency response. The amplitude characteristics of Butterworth and Chebychev filters and conversion of analog to equivalent digital filters using the bilinear transformation is presented. It concludes with design examples using MATLAB.

### 11.1 Filter Types and Classifications

Analog filters are defined over a continuous range of frequencies. They are classified as *low-pass*, *high-pass*, *band-pass* and *band-elimination (stop-band)*. The ideal amplitude characteristics of each are shown in Figure 11.1. The ideal characteristics are not physically realizable; we will see that practical filters can be designed to approximate these characteristics.

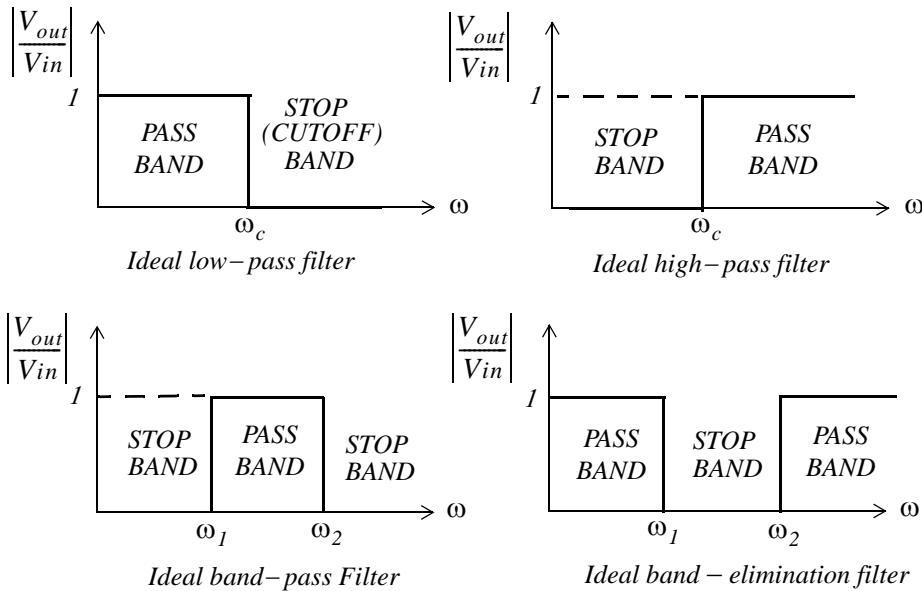


Figure 11.1. Amplitude characteristics of the types of filters

Another, less frequently mentioned filter, is the *all-pass* or *phase shift* filter. It has a constant amplitude response but its phase varies with frequency. Please refer to Exercise 4.

A *digital filter*, in general, is a computational process, or algorithm that converts one sequence of numbers representing the input signal into another sequence representing the output signal. Accord-

---

## Chapter 11 Analog and Digital Filters

---

ingly, a digital filter can perform functions as differentiation, integration, estimation, and, of course, like an analog filter, it can filter out unwanted bands of frequency.

Analog filter functions have been used extensively as prototype models for designing digital filters and, therefore, we will present them first.

### 11.2 Basic Analog Filters

An analog filter can also be classified as *passive* or *active*. Passive filters consist of passive devices such as resistors, capacitors and inductors. Active filters are, generally, operational amplifiers with resistors and capacitors connected to them externally. We can find out whether a filter, passive or active, is a low-pass, high-pass, etc., from its the frequency response that can be obtained from its transfer function. The procedure is illustrated with the examples that follow.

#### Example 11.1

Derive expressions for the magnitude and phase responses of the series RC network of Figure 11.2, and sketch their characteristics.

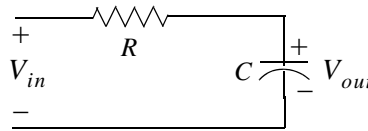


Figure 11.2. Series RC network for Example 11.1

**Solution:**

$$V_{out} = \frac{1/j\omega C}{R + 1/j\omega C} V_{in}$$

or

$$\begin{aligned} G(j\omega) &= \frac{V_{out}}{V_{in}} = \frac{1}{1 + j\omega RC} = \frac{1}{(\sqrt{1 + \omega^2 R^2 C^2}) \angle \text{atan}(\omega RC)} \\ &= \frac{1}{\sqrt{1 + \omega^2 R^2 C^2}} \angle -\text{atan}(\omega RC) \end{aligned} \quad (11.1)$$

The magnitude of (11.1) is

$$\boxed{|G(j\omega)| = \left| \frac{V_{out}}{V_{in}} \right| = \frac{1}{\sqrt{1 + \omega^2 R^2 C^2}}} \quad (11.2)$$

and the phase angle, also known as the *argument*, is



$$\theta = \arg \{G(j\omega)\} = \arg \left( \frac{V_{out}}{V_{in}} \right) = -\text{atan}(\omega RC) \quad (11.3)$$

We can obtain a quick sketch for the magnitude  $|G(j\omega)|$  versus  $\omega$  by evaluating (11.2) at  $\omega = 0$ ,  $\omega = 1/RC$ , and  $\omega \rightarrow \infty$ . Thus,

as  $\omega \rightarrow 0$ ,

$$|G(j\omega)| \cong 1$$

for  $\omega = 1/RC$ ,

$$|G(j\omega)| = 1/\sqrt{2} = 0.707$$

and as  $\omega \rightarrow \infty$ ,

$$|G(j\omega)| \cong 0$$

We will use the MATLAB code below to plot  $|G(j\omega)|$  versus radian frequency  $\omega$ . This is shown in Figure 11.3 where, for convenience, we let  $RC = 1$ .

```
w=0:0.02:10; RC=1; magGs=1./sqrt(1+w.*RC); semilogx(w,magGs); grid
```

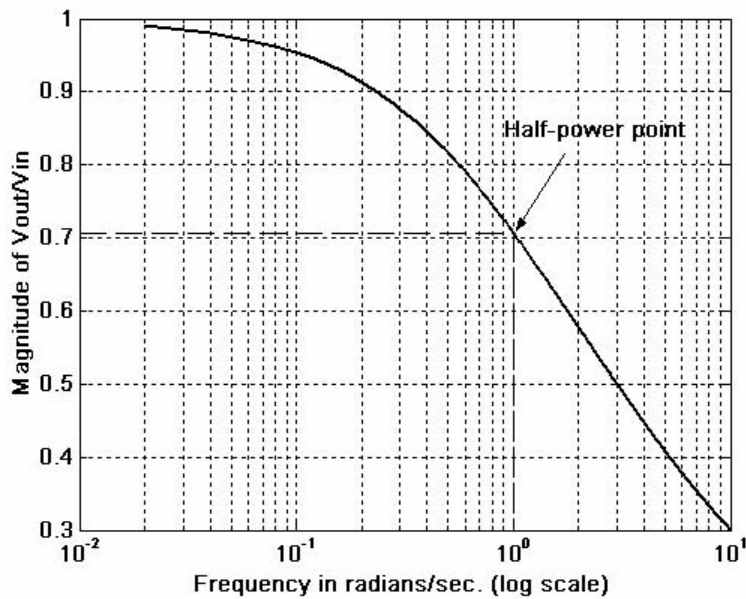


Figure 11.3. Amplitude characteristics of a series RC low-pass filter with  $RC = 1$

We can also obtain a quick sketch for the phase angle, i.e.,  $\theta = \arg \{G(j\omega)\}$  versus  $\omega$  by evaluating of (11.3) at  $\omega = 0$ ,  $\omega = 1/RC$ ,  $\omega = -1/RC$ ,  $\omega \rightarrow -\infty$  and  $\omega \rightarrow \infty$ . Thus,

As  $\omega \rightarrow 0$ ,

$$\theta \cong -\text{atan}0 \cong 0^\circ$$

---

## Chapter 11 Analog and Digital Filters

---

For  $\omega = 1/RC$ ,

$$\theta = -\text{atan}1 = -45^\circ$$

For  $\omega = -1/RC$ ,

$$\theta = -\text{atan}(-1) = 45^\circ$$

As  $\omega \rightarrow -\infty$ ,

$$\theta = -\text{atan}(-\infty) = 90^\circ$$

and as  $\omega \rightarrow \infty$ ,

$$\theta = -\text{atan}(\infty) = -90^\circ$$

We will use the MATLAB code below to plot the phase angle  $\theta$  versus radian frequency  $\omega$ . This is shown in Figure 11.3 where, for convenience, we let  $RC = 1$ .

```
w=-8:0.02:8; RC=1; argGs=-atan(w.*RC).*180./pi; plot(w,argGs); grid
```

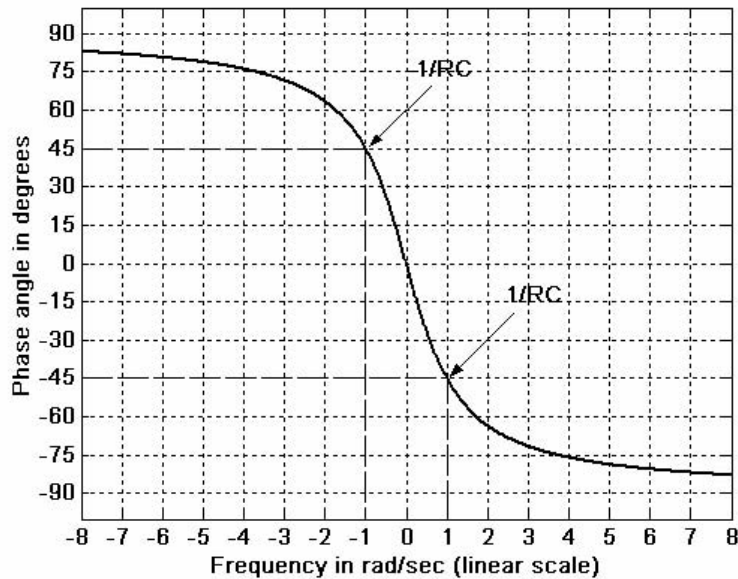


Figure 11.4. Phase characteristics of a series RC low-pass filter with  $RC = 1$

### Example 11.2

The network of Figure 11.5 is also a series RC circuit, where the positions of the resistor and capacitor have been interchanged. Derive expressions for the magnitude and phase responses, and sketch their characteristics.

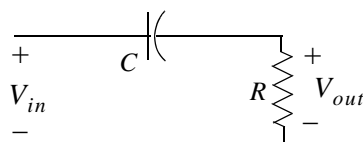


Figure 11.5. RC network for Example 11.2

**Solution:**

$$V_{out} = \frac{R}{R + 1/j\omega C} V_{in}$$

or

$$\begin{aligned} G(j\omega) &= \frac{V_{out}}{V_{in}} = \frac{j\omega RC}{1 + j\omega RC} = \frac{j\omega RC + \omega^2 R^2 C^2}{1 + \omega^2 R^2 C^2} = \frac{\omega RC(j + \omega RC)}{1 + \omega^2 R^2 C^2} \\ &= \frac{\omega RC \sqrt{1 + \omega^2 R^2 C^2} \angle \text{atan}(1/(\omega RC))}{1 + \omega^2 R^2 C^2} = \frac{1}{\sqrt{1 + 1/(\omega^2 R^2 C^2)}} \angle \text{atan}(1/(\omega RC)) \end{aligned} \quad (11.4)$$

The magnitude of (11.4) is

$$\boxed{|G(j\omega)| = \frac{1}{\sqrt{1 + 1/(\omega^2 R^2 C^2)}}} \quad (11.5)$$

and the phase angle or argument, is

$$\boxed{\theta = \arg \{G(j\omega)\} = \text{atan}(1/\omega RC)} \quad (11.6)$$

We can obtain a quick sketch for the magnitude  $|G(j\omega)|$  versus  $\omega$  by evaluating (11.5) at  $\omega = 0$ ,  $\omega = 1/RC$ , and  $\omega \rightarrow \infty$ . Thus,

As  $\omega \rightarrow 0$ ,

$$|G(j\omega)| \cong 0$$

For  $\omega = 1/RC$ ,

$$|G(j\omega)| = 1/\sqrt{2} = 0.707$$

and as  $\omega \rightarrow \infty$ ,

$$|G(j\omega)| \cong 1$$

We will use the MATLAB code below to plot  $|G(j\omega)|$  versus radian frequency  $\omega$ . This is shown in Figure 11.5 where, for convenience, we let  $RC = 1$ .

```
w=0:0.02:100; RC=1; magGs=1./sqrt(1+1./(w.*RC).^2); semilogx(w,magGs); grid
```

We can also obtain a quick sketch for the phase angle, i.e.,  $\theta = \arg \{G(j\omega)\}$  versus  $\omega$ , by evaluating (11.6) at  $\omega = 0$ ,  $\omega = 1/RC$ ,  $\omega = -1/RC$ ,  $\omega \rightarrow -\infty$ , and  $\omega \rightarrow \infty$ . Thus,

As  $\omega \rightarrow 0$ ,

$$\theta \cong -\text{atan}0 \cong 0^\circ$$

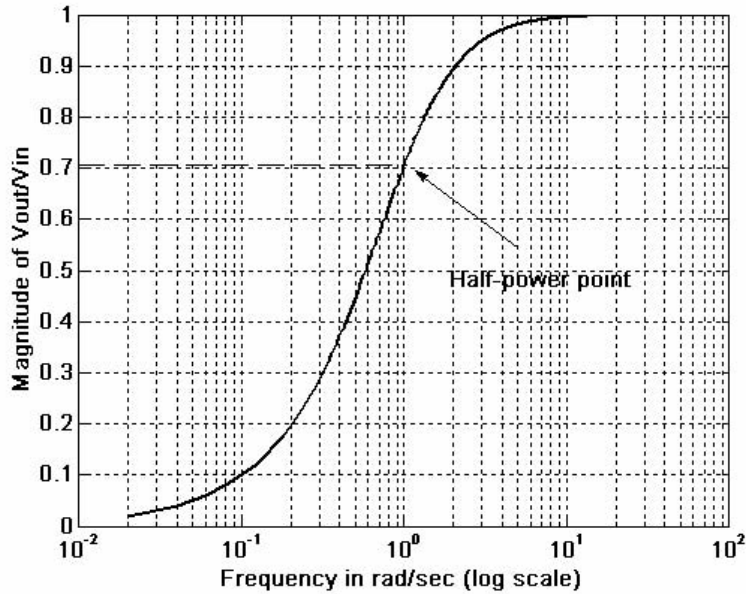


Figure 11.6. Amplitude characteristics of a series RC high-pass filter with  $RC = 1$

For  $\omega = 1/RC$ ,

$$\theta = -\text{atan}1 = -45^\circ$$

For  $\omega = -1/RC$ ,

$$\theta = -\text{atan}(-1) = 45^\circ$$

As  $\omega \rightarrow -\infty$ ,

$$\theta = -\text{atan}(-\infty) = 90^\circ$$

and as  $\omega \rightarrow \infty$ ,

$$\theta = -\text{atan}(\infty) = -90^\circ$$

We will use the MATLAB code below to plot the phase angle  $\theta$  versus radian frequency  $\omega$ . This is shown in Figure 11.7 where, for convenience, we let  $RC = 1$ .

```
w=-8:0.02:8; RC=1; argGs=atan(1./(w.*RC)).*180./pi; plot(w,argGs); grid
```

Other low-pass, high-pass, band-pass, and band-elimination passive filters consist of combinations of resistors, inductors, and capacitors. They are given as exercises in Chapter 4.

### Example 11.3

The circuit of Figure 11.8 is an active low-pass filter and its magnitude  $|G(j\omega)|$  versus  $\omega$  was derived and plotted in Example 4.7 of Chapter 4.

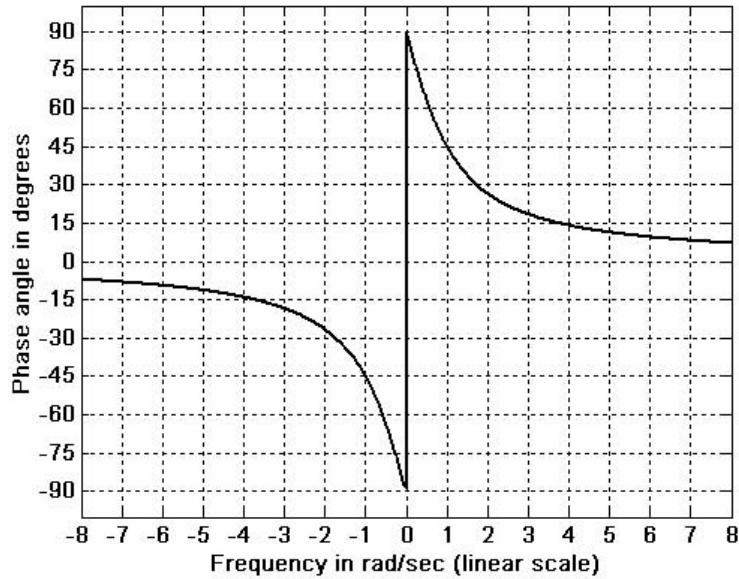


Figure 11.7. Phase characteristics of an RC high-pass filter with  $RC = 1$

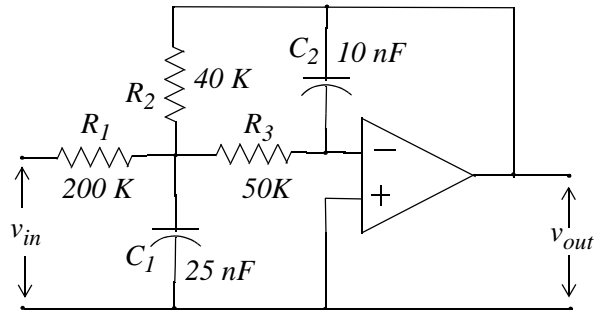


Figure 11.8. Low-pass filter for Example 11.3

Using the derivation procedures of the examples we discussed thus far, we can analyze any circuit to determine its behavior. However, as we found out in Example 4.7, the derivations are tedious. Fortunately, several books containing filters and their characteristics, have been published. We will discuss these later.

In our subsequent discussion we will be concerned with filter design.

### 11.3 Low-Pass Analog Filters

In this section, we will use the analog low-pass filter as a basis. We will see later that, using transformations, we can derive high-pass and the other types of filters from a basic low-pass filter. We will discuss the *Butterworth*, *Chebyshev* and *Cauer (elliptic)* filters.

---

## Chapter 11 Analog and Digital Filters

---

The first step in the design of an analog low-pass filter is to find a suitable *amplitude-squared function*  $A^2(\omega)$ , and from it derive a  $G(s)$  function such that

$$A^2(\omega) = G(s) \cdot G(-s)|_{s=j\omega} \quad (11.7)$$

Since  $(j\omega)^* = (-j\omega)$ , the square of the magnitude of a complex number can be expressed as that number and its complex conjugate. Thus, if the magnitude is  $A$ , then

$$A^2(\omega) = |G(j\omega)|^2 = G(j\omega)G^*(j\omega) = G(j\omega) \cdot G(-j\omega) \quad (11.8)$$

Now,  $G(j\omega)$  can be considered as  $G(s)$  evaluated at  $s = j\omega$ , and thus (11.7) is justified. Also, since  $A$  is understood to represent the magnitude, it needs not be enclosed in vertical lines.

Not all amplitude-squared functions can be decomposed to  $G(s)$  and  $G(-s)$  rational functions; only even functions of  $\omega$ , positive for all  $\omega$ , and *proper rational functions*\* can satisfy (11.7).

### Example 11.4

It is given that

$$G(s) = \frac{3s^2 + 5s + 7}{s^2 + 4s + 6}$$

Compute  $A^2(\omega)$ .

#### Solution:

Since

$$G(s) = \frac{3s^2 + 5s + 7}{s^2 + 4s + 6}$$

it follows that

$$G(-s) = \frac{3s^2 - 5s + 7}{s^2 - 4s + 6}$$

and

$$G(s) \cdot G(-s) = \frac{3s^2 + 5s + 7}{s^2 + 4s + 6} \cdot \frac{3s^2 - 5s + 7}{s^2 - 4s + 6} = \frac{9s^4 + 17s^2 + 49}{s^4 - 4s^2 + 36}$$

Therefore,

---

\* It was stated earlier, that a rational function is said to be proper if the largest power in the denominator is equal to or larger than that of the numerator.

$$A^2(\omega) = G(s) \cdot G(-s) \Big|_{s=j\omega} = \frac{9s^4 + 17s^2 + 49}{s^4 - 4s^2 + 36} \Big|_{s=j\omega} = \frac{9\omega^4 - 17\omega^2 + 49}{\omega^4 + 4\omega^2 + 36}$$

The general form of the amplitude square function  $A^2(\omega)$  is

$$A^2(\omega) = \frac{C(b_k \omega^{2k} + b_{k-1} \omega^{2k-2} + \dots + b_0)}{a_k \omega^{2k} + a_{k-1} \omega^{2k-2} + \dots + a_0} \quad (11.9)$$

where  $C$  is the DC gain,  $a$  and  $b$  are constant coefficients, and  $k$  is a positive integer denoting the order of the filter. Once the amplitude square function  $A^2(\omega)$  is known, we can find  $G(s)$  from (11.9) with the substitution  $(j\omega)^2 = -\omega^2 = s^2$  or  $\omega^2 = -s^2$ , that is,

$$G(s) \cdot G(-s) = A^2(\omega) \Big|_{\omega^2 = -s^2} \quad (11.10)$$

In the simplest low-pass filter, the DC gain of the amplitude square function is unity. In this case (11.9) reduces to

$$A^2(\omega) = \frac{b_0}{a_k \omega^{2k} + a_{k-1} \omega^{2k-2} + \dots + a_0} \quad (11.11)$$

and at high frequencies reduces to

$$A^2(\omega) \approx \frac{b_0/a_k}{\omega^{2k}} \quad (11.12)$$

The *attenuation rate* of this approximation is  $6k \text{ dB/octave}$  or  $20k \text{ dB/decade}$ . To understand this, let us review the definitions of *octave* and *decade*.

Consider two frequencies  $u_1$  and  $u_2$ . Let

$$u_2 - u_1 = \log_{10} \omega_2 - \log_{10} \omega_1 = \log_{10} \frac{\omega_2}{\omega_1} \quad (11.13)$$

If these frequencies are such that  $\omega_2 = 2\omega_1$ , we say that these frequencies are separated by one octave, and if  $\omega_2 = 10\omega_1$ , they are separated by one decade.

To compute the attenuation rate of (11.12), we take the square root of both sides. Then,

$$A(\omega) = \frac{\sqrt{b_0/a_k}}{\omega^k} = \frac{\text{Constant}}{\omega^k} = \frac{B}{\omega^k} \quad (11.14)$$

Taking the common log of both sides of (11.14) and multiplying by 20, we get

$$20\log_{10}A(\omega) = 20\log_{10}B - 20\log_{10}\omega^k = -20k\log_{10}\omega + 20\log_{10}B \quad (11.15)$$

or

$$A(\omega)_{dB} = -20k\log_{10}\omega + 20\log_{10}B \quad (11.16)$$

This is an equation of a straight line with *slope* =  $-20k$  dB/decade, and *intercept* =  $B$  as shown in Figure 11.9.

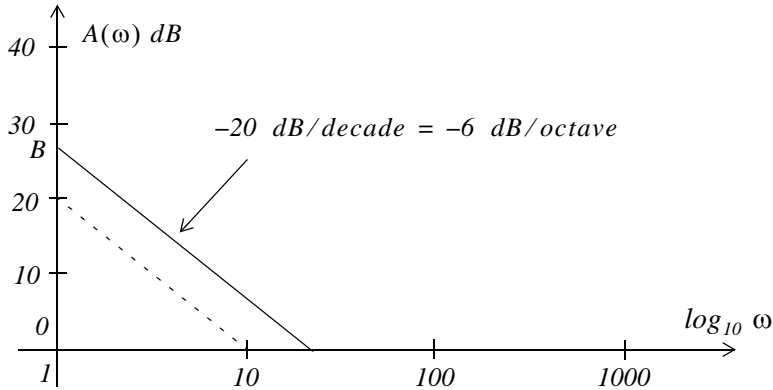


Figure 11.9. The  $-20$  dB/decade =  $-6$  dB/octave line

The procedure of finding the transfer function  $G(s)$  from the amplitude square function  $A^2(\omega)$ , is best illustrated with the following example.

### Example 11.5

Given the amplitude square function

$$A^2(\omega) = \frac{16(-\omega^2 + 1)}{(\omega^2 + 4)(\omega^2 + 9)} \quad (11.17)$$

find a suitable transfer function  $G(s)$

#### Solution:

From (11.10),

$$G(s)G(-s) = A^2(\omega)\Big|_{\omega^2 = -s^2} = \frac{16(s^2 + 1)}{(-s^2 + 4)(-s^2 + 9)} \quad (11.18)$$

This function has zeros at  $s = \pm j1$ , and poles at  $s = \pm 2$  and  $s = \pm 3$ .



There is no restriction on the zeros but, for stability<sup>\*</sup>, we select the left-half  $s$ -plane poles.

We must also select the gain constant such that  $G(0) = A(0)$ .

Let

$$G(s) = \frac{K(s^2 + 1)}{(s + 2)(s + 3)} \quad (11.19)$$

We must find  $K$  such that  $G(0) = A(0)$ . From (11.17),

$$A^2(0) = 16/36 = 4/9$$

or

$$A(0) = 2/3$$

From (11.19),

$$G(0) = K/6$$

and for  $G(0) = A(0)$  we must have,

$$K/6 = 2/3$$

or

$$K = 12/3 = 4$$

By substitution into (11.19),

$$G(s) = 4 \frac{(s^2 + 1)}{(s + 2)(s + 3)}$$

## 11.4 Design of Butterworth Analog Low-Pass Filters

We will consider the *Butterworth low-pass filter* whose amplitude-squared function is

$$A^2(\omega) = \frac{1}{(\omega/\omega_c)^{2k} + 1} \quad (11.20)$$

where  $k$  is a positive integer, and  $\omega_c$  is the cutoff ( $3 \text{ dB}$ ) frequency. Figure 11.10 shows relation (11.20) for  $k = 1, 2, 4$ , and  $8$ . The plot was created with the following MATLAB code.

```
w_w0=0:0.02:3; Aw2k1=sqrt(1./(w_w0.^2+1)); Aw2k2=sqrt(1./(w_w0.^4+1));...  
Aw2k4=sqrt(1./(w_w0.^8+1)); Aw2k8=sqrt(1./(w_w0.^16+1));...  
plot(w_w0,Aw2k1,w_w0,Aw2k2,w_w0,Aw2k4,w_w0,Aw2k8); grid
```

---

<sup>\*</sup> Generally, a system is said to be stable if a finite input produces a finite output. Alternately, a system is stable if the impulse response  $h(t)$  vanishes after a sufficiently long time. Stability is discussed in *Feedback and Control Systems* textbooks.

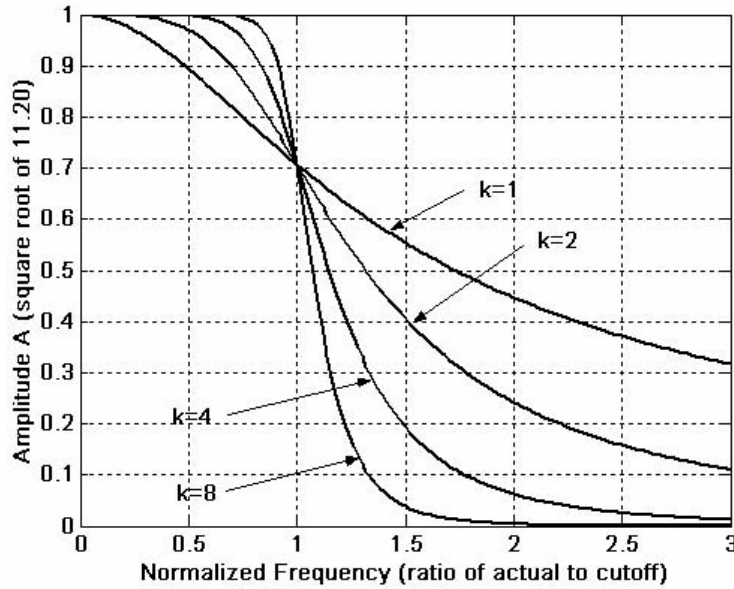


Figure 11.10. Butterworth low-pass filter amplitude characteristics

All Butterworth filters have the property that all poles of the transfer functions that describes them, lie on a circumference of a circle of radius  $\omega_c$ , and they are  $2\pi/2k$  radians apart. Thus, if  $k = \text{odd}$ , the poles start at zero radians, and if  $k = \text{even}$ , they start at  $2\pi/2k$ . But regardless whether  $k$  is odd or even, the poles are distributed in symmetry with respect to the  $j\omega$  axis. For stability, we choose the left half-plane poles to form  $G(s)$ .

We can find the  $n$ th roots of a the complex number  $s$  by *DeMoivre's theorem*. It states that

$$\boxed{\sqrt[n]{re^{j\theta}} = \sqrt[n]{r}e^{j\left(\frac{\theta + 2k\pi}{n}\right)} \quad k = 0, \pm 1, \pm 2, \dots} \quad (11.21)$$

**Example 11.6**

Derive the transfer function  $G(s)$  for the third order ( $k = 3$ ) Butterworth low-pass filter with *normalized cutoff frequency*  $\omega_c = 1 \text{ rad/s}$ .

**Solution:**

With  $k = 3$  and  $\omega_c = 1 \text{ rad/s}$ , (11.20) reduces to

$$A^2(\omega) = \frac{1}{\omega^6 + 1} \quad (11.22)$$

With the substitution  $\omega^2 = -s^2$ , (11.22) becomes

$$G(s) \cdot G(-s) = \frac{1}{-s^6 + 1} \quad (11.23)$$

Then,  $s = \sqrt[6]{1} \angle 0^\circ$  and by DeMoivre's theorem, with  $n = 6$ ,

$$\sqrt[6]{1} e^{j0} = \sqrt[6]{1} e^{j \left( \frac{0+2k\pi}{6} \right)} \quad k = 0, 1, 2, 3, 4, 5$$

Thus,

$$s_1 = 1 \angle 0^\circ = 1$$

$$s_2 = 1 \angle 60^\circ = \frac{1}{2} + j \frac{\sqrt{3}}{2}$$

$$s_3 = 1 \angle 120^\circ = -\frac{1}{2} + j \frac{\sqrt{3}}{2}$$

$$s_4 = 1 \angle 180^\circ = -1$$

$$s_5 = 1 \angle 240^\circ = -\frac{1}{2} - j \frac{\sqrt{3}}{2}$$

$$s_6 = 1 \angle 300^\circ = \frac{1}{2} - j \frac{\sqrt{3}}{2}$$

As expected, these six poles lie on the circumference of the circle with radius  $\omega_c = 1$  as shown in Figure 11.11.

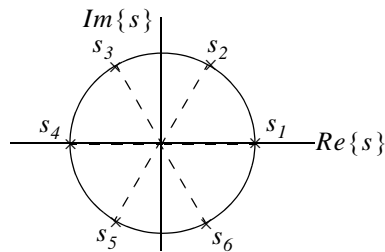


Figure 11.11. Location of the poles for the transfer function of Example 11.6

The transfer function  $G(s)$  is formed with the left half-plane poles  $s_3$ ,  $s_4$ , and  $s_5$ . Then,

$$G(s) = \frac{K}{\left(s + \frac{1}{2} - j \frac{\sqrt{3}}{2}\right)(s + 1)\left(s + \frac{1}{2} + j \frac{\sqrt{3}}{2}\right)} \quad (11.24)$$

## Chapter 11 Analog and Digital Filters

We use MATLAB to express the denominator as a polynomial.

```
syms s; den=(s+1/2-sqrt(3)*j/2)*(s+1)*(s+1/2+sqrt(3)*j/2)
```

```
den =
```

```
(s+1/2-1/2*i*3^(1/2))*(s+1)*(s+1/2+1/2*i*3^(1/2))
```

```
expand(den)
```

```
ans =
```

```
s^3+2*s^2+2*s+1
```

Therefore, (11.24) simplifies to

$$G(s) = \frac{K}{s^3 + 2s^2 + 2s + 1} \quad (11.25)$$

The gain  $K$  is found from  $A^2(0) = 1$  or  $A(0) = 1$  and  $G(0) = K$ . Thus,  $K = 1$  and

$$G(s) = \frac{1}{s^3 + 2s^2 + 2s + 1} \quad (11.26)$$

and this is the transfer function  $G(s)$  for the third order ( $k = 3$ ) Butterworth low-pass filter with normalized cutoff frequency  $\omega_c = 1 \text{ rad/s}$ .

The general form of any analog low-pass (Butterworth, Chebyshev, Elliptic, etc.) filter is

$$G(s)|_{lp} = \frac{b_0}{a_k s^k + \dots + a_2 s^2 + a_1 s + a_0} \quad (11.27)$$

The pole locations and the coefficients of the corresponding denominator polynomials, have been derived and tabulated by Weinberg in *Network Analysis and Synthesis*, McGraw-Hill.

Table 11.1 shows the first through the fifth order coefficients for Butterworth analog low-pass filter denominator polynomials with normalized frequency  $\omega_c = 1 \text{ rad/s}$ .

TABLE 11.1 Values for the coefficients  $a_i$  in (11.27)

Coefficients of Denominator Polynomial for Butterworth Low-Pass Filters						
Order	$a_5$	$a_4$	$a_3$	$a_2$	$a_1$	$a_0$
1						1
2				1	1.4142136	1
3			1	2	2	1
4		2.6131259	3.1442136	2.6131259	1	1
5	1	3.2360680	5.2360680	5.2360680	3.2360680	1

We can also use the MATLAB **buttap** and **zp2tf** functions. The first returns the zeros, poles, and gain for an  $N$ -th order normalized prototype Butterworth analog low-pass filter. The resulting filter has  $N$  poles around the unit circle in the left half plane, and no zeros. The second performs the zero-pole to transfer function conversion.

### Example 11.7

Use MATLAB to find the numerator  $b$  and denominator  $a$  coefficients for the third-order Butterworth low-pass filter prototype with normalized cutoff frequency\*.

**Solution:**

```
[z,p,k]=buttap(3); [b,a]=zp2tf(z,p,k)
```

b =

```
0      0      0      1
```

a =

```
1.0000    2.0000    2.0000    1.0000
```

We observe that the denominator coefficients are the same as in Table 11.1.

Table 11.2 shows factored forms of the denominator polynomials in terms of linear and quadratic factors with normalized frequency  $\omega_C = 1 \text{ rad/s}$ .

*TABLE 11.2 Factored forms for Butterworth low-pass filters*

<i>Denominator in Factored form for Butterworth Low-Pass Filters with <math>\omega_C = 1 \text{ rad/s}</math></i>	
<i>k</i>	<i>Denominator of Equation (11.27)</i>
1	$s + 1$
2	$s^2 + 1.4142s + 1$
3	$(s + 1)(s^2 + s + 1)$
4	$(s^2 + 0.7654s + 1)(s^2 + 1.8478s + 1)$
5	$(s + 1)(s^2 + 0.6180s + 1)(s^2 + 1.6180s + 1)$
6	$(s^2 + 0.5176s + 1)(s^2 + 1.4142s + 1)(s^2 + 1.9318s + 1)$
7	$(s + 1)(s^2 + 0.4449s + 1)(s^2 + 1.2465s + 1)(s^2 + 1.8022s + 1)$
8	$(s^2 + 0.3896s + 1)(s^2 + 1.1110s + 1)(s^2 + 1.6630s + 1)(s^2 + 1.9622s + 1)$

\* Henceforth, normalized cutoff frequency will be understood to be  $\omega_C = 1 \text{ rad/s}$

---

## Chapter 11 Analog and Digital Filters

---

The equations shown in Table 11.2 can be derived from

$$G(s) = \frac{1}{(-1)^n \prod_{i=0}^{n-1} \left( \frac{s}{s_i} - 1 \right)} \quad (11.28)$$

where the factor  $(-1)^n$  is to ensure that  $G(0) = 1$ , and  $s_i$  denotes the poles on the left half of the  $s$ -plane. They can be found from

$$s_i = \omega_c \left( -\sin \frac{(2i+1)\pi}{2k} + j \cos \frac{(2i+1)\pi}{2k} \right) \quad (11.29)$$

We must remember that the factors in Table 11.2 apply only when the cutoff frequency is normalized to  $\omega_c = 1 \text{ rad/s}$ . If  $\omega_c \neq 1$ , we must scale the transfer function appropriately.

We can convert to the actual transfer function using the relation

$$G(s)_{actual} = G \left( \frac{\omega_{norm} \times s}{\omega_{actual}} \right)$$

and since, usually  $\omega_{norm} = 1 \text{ rad/s}$ ,

$$G(s)_{actual} = G \left( \frac{s}{\omega_{actual}} \right) \quad (11.30)$$

that is, we replace  $s$  with  $s/\omega_{actual}$

Quite often, we require that  $\omega \geq \omega_c$ , that is, in the stop band of the low-pass filter, the attenuation to be larger than  $-20 \text{ dB/decade}$ , i.e., we require a sharper cutoff. As we have seen from the plots of Figure 11.10, the Butterworth low-pass filter cutoff becomes sharper for larger values of  $k$ . Accordingly, we generate the plot for different values of  $k$  shown in Figure 11.12 using the following MATLAB code.

```
w_w0=1:0.02:10; dBk1=20.*log10(sqrt(1./(w_w0.^2+1)));...
dBk2=20.*log10(sqrt(1./(w_w0.^4+1))); dBk3=20.*log10(sqrt(1./(w_w0.^6+1)));...
dBk4=20.*log10(sqrt(1./(w_w0.^8+1))); dBk5=20.*log10(sqrt(1./(w_w0.^10+1)));...
dBk6=20.*log10(sqrt(1./(w_w0.^12+1))); dBk7=20.*log10(sqrt(1./(w_w0.^14+1)));...
dBk8=20.*log10(sqrt(1./(w_w0.^16+1))); semilogx(w_w0,dBk1,w_w0,dBk2,w_w0,dBk3,...
w_w0,dBk4,w_w0,dBk5,w_w0,dBk6,w_w0,dBk7,w_w0,dBk8); grid
```

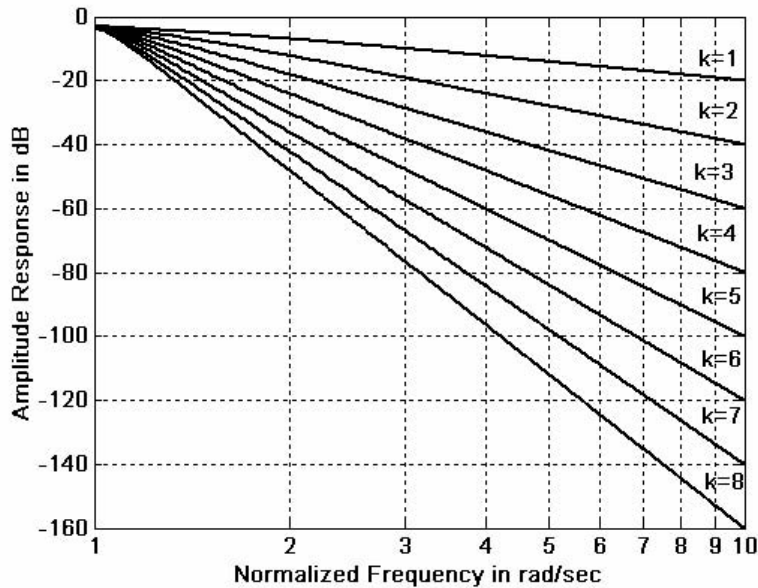


Figure 11.12. Attenuation for different values of  $k$

**Example 11.8**

Using the attenuation curves of Figure 11.12, derive the transfer function of a Butterworth low-pass analog filter with pass band bandwidth of  $5 \text{ rad/s}$ , and attenuation in the stop band at least  $30 \text{ dB/decade}$  for frequencies larger than  $15 \text{ rad/s}$ .

**Solution:**

We refer to Figure 11.12 and at  $\omega/\omega_c = 15/5 = 3$ , we see that the vertical line at this value crosses the  $k = 3$  curve at approximately  $-28 \text{ dB}$ , and the  $k = 4$  curve at approximately  $-37 \text{ dB}$ . Since we require that the attenuation be at least  $-30 \text{ dB}$ , we use the attenuation corresponding to the  $k = 4$  curve. Accordingly, we choose a fourth order Butterworth low-pass filter whose normalized transfer function, from Table 11.2, is

$$G(s)_{norm} = \frac{1}{(s^2 + 0.7654s + 1)(s^2 + 1.8478s + 1)} \tag{11.31}$$

and since  $\omega_c = 5 \text{ rad/s}$ , we replace  $s$  with  $s/5$ . Then,

$$G(s)_{actual} = \frac{1}{\left(\frac{s^2}{25} + \frac{0.7654s}{5} + 1\right)\left(\frac{s^2}{25} + \frac{1.8478s}{5} + 1\right)}$$

or

$$G(s)_{actual} = \frac{625}{(s^2 + 3.8270s + 25)(s^2 + 9.2390s + 25)} \quad (11.32)$$

$$= \frac{625}{s^4 + 13.066s^3 + 85.358s^2 + 326.650s + 625}$$

As a last step, we wish to know how to design a circuit (passive or active), that will satisfy a transfer function such as the one above. Fortunately, the work for us has been done by others who have developed analog filter prototypes, both passive and active.

Some good references are:

*Electronic Filter Design Handbook*, Williams and Taylor, McGraw-Hill

*Electronic Engineers' Handbook*, Fink and Christiansen, McGraw-Hill

*Reference Data for Engineers Handbook*, Van Valkenburgh, Howard Sams

As an example, the *Reference Data for Engineers Handbook* provides the circuit of Figure 11.13 that is known as *Second Order Voltage Controlled Voltage Source (VCVS) low-pass filter*.

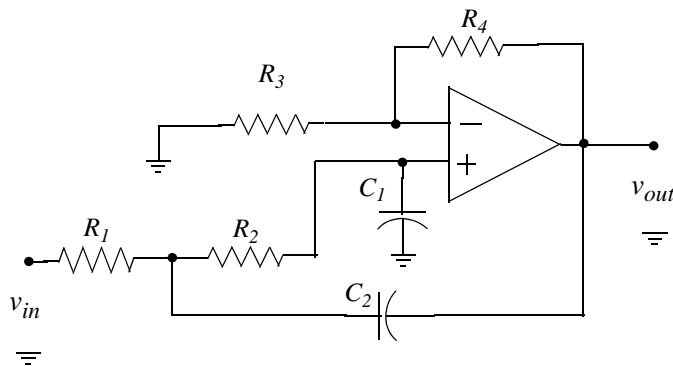


Figure 11.13. VCVS low-pass filter

The transfer function of the second order VCVS low-pass filter of Figure 11.13 is given as

$$G(s) = \frac{Kb\omega_c^2}{s^2 + a\omega_c s + b\omega_c^2} \quad (11.33)$$

This is referred to as a second order *all-pole*\* approximation to the ideal low-pass filter with cutoff frequency  $\omega_c$ , where  $K$  is the gain, and the coefficients  $a$  and  $b$  are provided by tables.

For a non-inverting positive gain  $K$ , the circuit of Figure 11.13 satisfies the transfer function of (11.33) with the conditions that

\* The terminology “all-pole” stems from the fact that the  $s$ -plane contains poles only and the zeros are at  $\pm\infty$ , that is, the  $s$ -plane is all poles and no zeros.



$$R_1 = \frac{2}{\left\{ aC_2 + (\sqrt{[a^2 + 4b(K-1)]C_2^2 - 4bC_1C_2}) \right\} \omega_c} \quad (11.34)$$

$$R_2 = \frac{1}{bC_1C_2R_1\omega_c^2} \quad (11.35)$$

$$R_3 = \frac{K(R_1 + R_2)}{(K-1)} \quad K \neq 1 \quad (11.36)$$

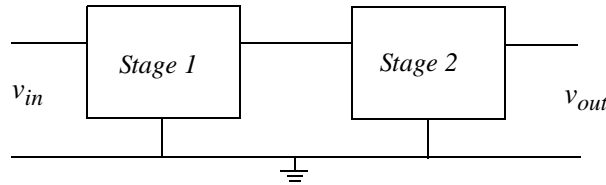
$$R_4 = K(R_1 + R_2) \quad (11.37)$$

From (11.36) and (11.37), we observe that  $K = 1 + R_4/R_3$  .

A fourth-order all-pole low-pass filter transfer function is a ratio of a constant to a fourth degree polynomial. A practical method of obtaining a fourth order transfer function, is to factor it into two second-order transfer functions of the form of (11.33), i.e.,

$$G(s) = \frac{K_1 b_1 \omega_c^2}{s^2 + a_1 \omega_c s + b_1 \omega_c^2} \cdot \frac{K_2 b_2 \omega_c^2}{s^2 + a_2 \omega_c s + b_2 \omega_c^2} \quad (11.38)$$

Each factor in (11.38) can be realized by a stage (circuit). Then, the two stages can be cascaded as shown in Figure 11.14.



*Figure 11.14. Cascaded stages*

Table 11.3 lists the Butterworth low-pass coefficients for second and fourth-order designs, where  $a$  and  $b$  apply to the transfer functions of (11.33) and (11.38).

For a practical design of a second-order VCVS circuit, we select standard values for capacitors  $C_1$  and  $C_2$  of the circuit of Figure 11.13, we substitute the appropriate values for the coefficients  $a$  and  $b$  from Table 11.3, we choose desired values for the gain  $K$  and cutoff frequency  $\omega_c$ , and we substitute these in (11.34) through (11.37) to find the values of the resistors  $R_1$  through  $R_4$  .

TABLE 11.3 Coefficients for Butterworth low-pass filter designs

Coefficients for Second and Fourth Order Butterworth Low-Pass Filter Designs		
Order		
2	a	1.41421
	b	1.0000
4	a <sub>1</sub>	0.76537
	b <sub>1</sub>	1.0000
	a <sub>2</sub>	1.84776
	b <sub>2</sub>	1.0000

### Example 11.9

Design a second-order VCVS Butterworth low-pass filter with gain  $K = 2$  and cutoff frequency  $f_C = 1 \text{ kHz}$ .

#### Solution:

We will use the second order VCVS prototype op amp circuit of Figure 11.13, with capacitance values  $C_1 = C_2 = 0.01 \mu\text{F} = 10^{-8} \text{ F}$ . From Table 11.3,  $a = 1.41421 = \sqrt{2}$  and  $b = 1$ .

We substitute these values into (11.34) through (11.37), to find the values of the resistors.

We use MATLAB to do the calculations as follows:

```
C1=10^(-8); C2=C1; a=sqrt(2); b=1; K=2; wc=2*pi*10^3;
% and from (11.34) through (11.37)
R1=2/((a*C2+sqrt((a^2+4*b*(K-1))*C2^2-4*b*C1*C2))*wc);
R2=1/(b*C1*C2*R1*wc^2); R3=K*(R1+R2)/(K-1); R4=K*(R1+R2); fprintf('\n');...
fprintf('R1 = %6.0f \t',R1); fprintf('R2 = %6.0f \t',R2);...
fprintf('R3 = %6.0f \t',R3); fprintf('R4 = %6.0f \t',R4)
```

```
R1 = 11254   R2 = 22508   R3 = 67524   R4 = 67524
```

These are the calculated values but they are not standard resistor values; we must select standard resistor values as close as possible to the calculated values.

It will be interesting to find out what the frequency response of this filter looks like, with capacitors  $C_1 = C_2 = 0.01 \mu\text{F}$  and standard 1% tolerance resistors with values  $R_1 = 11.3 \text{ K}\Omega$ ,  $R_2 = 2 \times R_1 = 22.6 \text{ K}\Omega$ , and  $R_3 = R_4 = 68.1 \text{ K}\Omega$ .

We now substitute these values into the equations of (11.34) through (11.37), and we solve the first

equation of this set for the cutoff frequency  $\omega_c$ . Then, we use  $\omega_c$  with the transfer function of (11.33). We do this with the following MATLAB code which produces the plot of Figure 11.15.

```
f=1:10:5000; R1=11300; R2=22600; R3=68100; R4=R3; C1=10^(-8); C2=C1;
a=sqrt(2); b=1; w=2*pi*f; fc=sqrt(1/(b*R1*R2*C1*C2))/(2*pi); wc=2*pi*fc;
K=1+R3/R4; s=w*j; Gw=(K.*b.*wc.^2)./(s.^2+a.*wc.*s+b.*wc.^2); magGw=abs(Gw);
semilogx(f,magGw); grid; hold on; xlabel('Frequency Hz'); ylabel('|Vout/Vin|');
title('2nd Order Butterworth Low-Pass Filter Response')
```

The frequency response of this low-pass filter is shown in Figure 11.15.

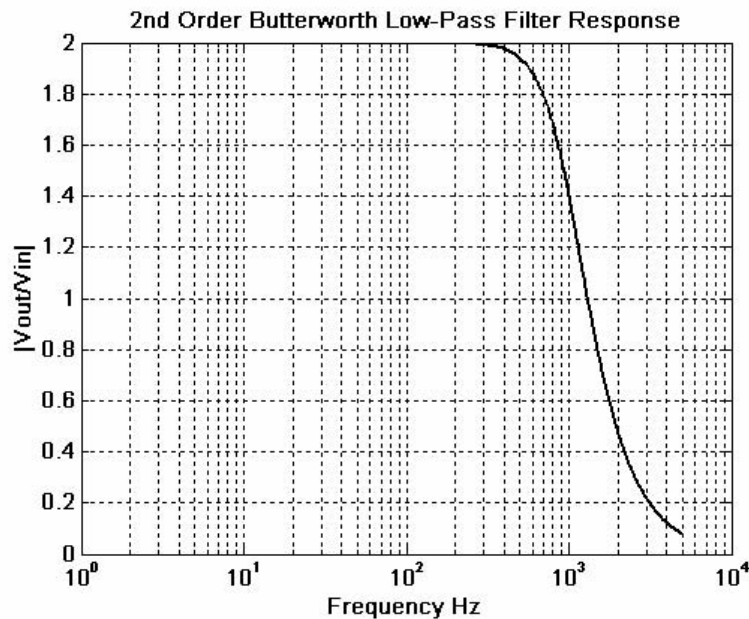


Figure 11.15. Plot for the VCVS low-pass filter of Example 11.9

We see that the cutoff frequency occurs at about 1 KHz.

We have used the MATLAB **buttap** function earlier to aid us in the design of Butterworth filters with the cutoff frequency normalized to 1 rad/s. We can also use the **bode** function to display both the (asymptotic) magnitude and phase plots. The following code will produce the Bode magnitude and phase plots for a two-pole Butterworth low-pass filter.

```
[z,p,k]= buttap(2); % Specify a two-pole filter
[b,a]=zp2tf(z,p,k); % Display in polynomial rational form
w=0:0.01:4; [mag,phase]=bode(b,a,w);
b % Display b coefficients
b =
    0    0    1
```

```
a                                % Display a coefficients
a =
    1.0000    1.4142    1.0000
num=[0 0 1]; den=[1 sqrt(2) 1];
bode(num,den); title('Butterworth 2nd Order Low-Pass Filter')
```

The Bode plots are shown in Figure 11.16.

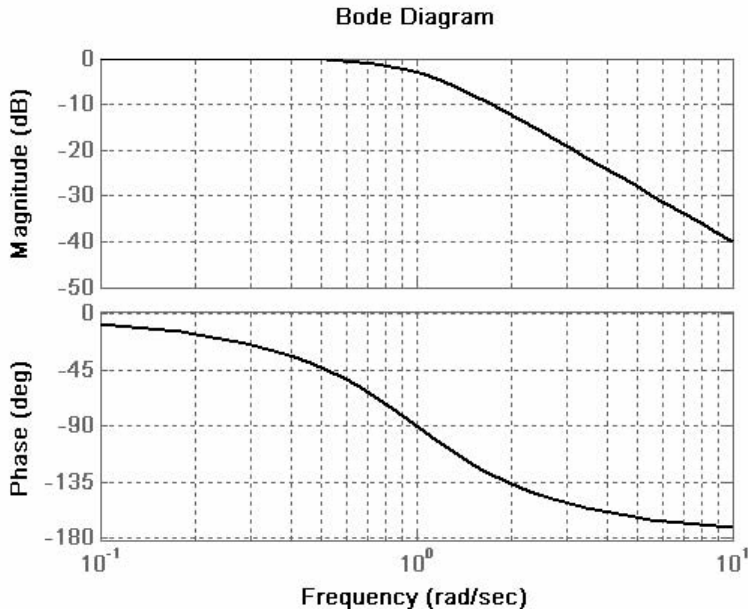


Figure 11.16. Bode plots for example 11.9

### 11.5 Design of Type I Chebyshev Analog Low-Pass Filters

The Type I Chebyshev filters are based on approximations derived from the Chebyshev polynomials  $C_k(x)$  which constitute a set of orthogonal functions. The coefficients of these polynomials are tabulated in math tables. See, for example, the *Handbook of Mathematical Functions*, Dover Publications. These polynomials are derived from the equations

$$C_k(x) = \cos(k \cos^{-1} x) \quad (|x| \leq 1) \quad (11.39)$$

and

$$C_k(x) = \cosh(k \cosh^{-1} x) \quad |x| > 1 \quad (11.40)$$

From (11.39) with  $k = 0$ , we get

$$C_0(x) = \cos(0 \cos^{-1} x) = 1 \quad (11.41)$$

With  $k = 1$ ,

$$C_1(x) = \cos(\cos^{-1}x) = x^* \quad (11.42)$$

With  $k = 2$

$$C_2(x) = \cos(2\cos^{-1}x) = 2x^2 - 1 \quad (11.43)$$

and this is shown by letting  $\cos^{-1}x = \alpha$ . Then,

$$\begin{aligned} C_2(x) &= \cos(2\alpha) = 2\cos^2\alpha - 1 = 2\cos^2(\cos^{-1}x) - 1 \\ &= 2 \left[ \underbrace{\cos(\cos^{-1}x)}_x \underbrace{\cos(\cos^{-1}x)}_x - 1 \right] = 2x^2 - 1 \end{aligned}$$

We can also use MATLAB to convert these trigonometric functions to algebraic polynomials. For example,

```
syms x; expand(cos(2*acos(x)))
```

```
ans =  
2*x^2-1
```

Using this iterated procedure we can show that with  $k = 3, 4$ , and  $5$ , we get

$$\begin{aligned} C_3(x) &= 4x^3 - 3x \\ C_4(x) &= 8x^4 - 8x^2 + 1 \\ C_5(x) &= 16x^5 - 20x^3 + 5x \end{aligned} \quad (11.44)$$

and so on.

We observe that for  $k = \text{even}$ ,  $C_k(x) = \text{even}$ , and for  $k = \text{odd}$ ,  $C_k(x) = \text{odd}$ .

The curves representing these polynomials are shown in Figure 11.17.

The Type I Chebyshev low-pass filter amplitude-square function is defined as

$$A^2(\omega) = \frac{\alpha}{1 + \varepsilon^2 C_k^2(\omega/\omega_C)} \quad (11.45)$$

The quantity  $\varepsilon^2$  is a parameter chosen to provide the desired passband ripple and  $\alpha$  is a constant chosen to determine the desired DC gain.

---

\* We recall that if  $x = \cos y$ , then  $y = \cos^{-1}x$ , and  $\cos y = x$ .

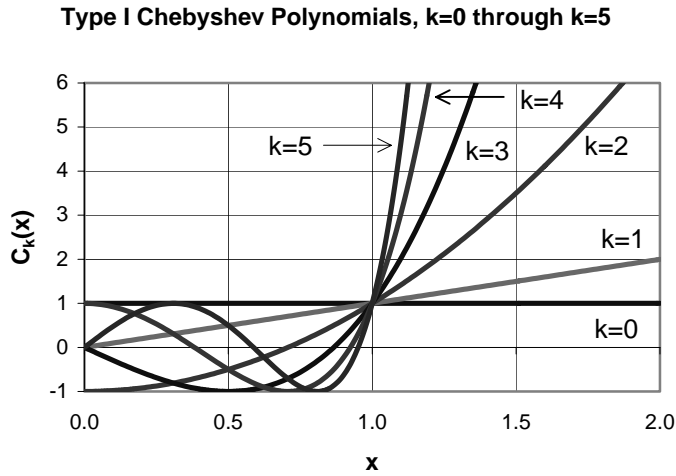


Figure 11.17. Type I Chebyshev polynomials

The parameter  $\alpha$  in (11.45) is a constant representing the *DC* gain,  $\epsilon$  is a parameter used in determining the ripple in the pass-band, the subscript  $k$  denotes both the degree of the Type I Chebyshev polynomial and the order of the transfer function, and  $\omega_c$  is the cutoff frequency. This filter produces a sharp cutoff rate in the transition band.

Figure 11.18 shows Type I Chebyshev amplitude frequency responses for  $k = 3$  and  $k = 4$ .

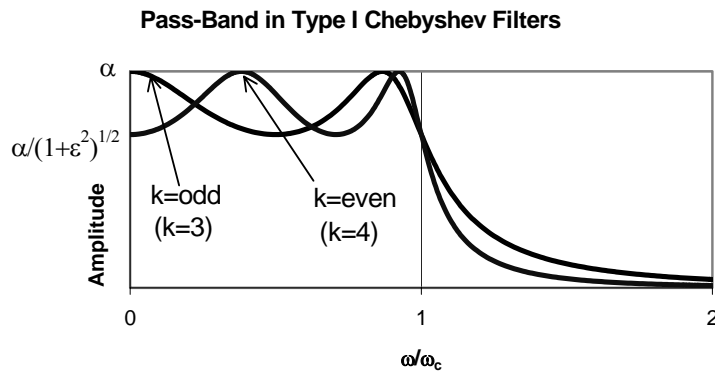


Figure 11.18. Chebyshev Type I Chebyshev low-pass filter for even and odd values of  $k$ .

The magnitude at  $\omega = 0$  is  $\alpha$  when  $k = \text{odd}$  and  $\alpha/\sqrt{1 + \epsilon^2}$  when  $k = \text{even}$ . This is shown in Figure 11.18. The cutoff frequency is the largest value of  $\omega_c$  for which

$$A(\omega_C) = \frac{1}{\sqrt{1 + \varepsilon^2}} \quad (11.46)$$

Stated in other words, the pass-band is the range over which the ripple oscillates with constant bounds; this is the range from  $DC$  to  $\omega_C$ . From (11.46), we observe that only when  $\varepsilon = 1$  the magnitude at the cutoff frequency is  $0.707$  i.e., the same as in other types of filters. But when  $0 < \varepsilon < 1$ , the cutoff frequency is greater than the conventional  $3\text{ dB}$  cutoff frequency  $\omega_C$ .

Table 11.4 gives the ratio of the conventional cutoff frequency  $f_{3\text{ dB}}$  to the ripple width frequency  $f_C$  of a Type I Chebyshev low-pass filter.

*TABLE 11.4 Ratio of conventional cutoff frequency to ripple width frequency*

Ratio of Conventional $f_{3\text{ dB}}$ Cutoff Frequency to Ripple Width for Low-Pass Chebyshev Filters		
Ripple Width	$f_{3\text{ dB}}/f_c$	
dB	k=2	k=4
0.1	1.943	1.213
0.5	1.390	1.093
1.0	1.218	1.053

The pass-band ripple  $r$  in  $dB$ , is defined as

$$r_{dB} = 10 \log_{10} \frac{A_{max}^2}{A_{min}^2} = 20 \log_{10} \frac{A_{max}}{A_{min}} \quad (11.47)$$

where  $A_{max}$  and  $A_{min}$  are the maximum and minimum values respectively of the amplitude  $A$  in the pass-band interval. From (11.45),

$$A^2(\omega) = \frac{\alpha}{1 + \varepsilon^2 C_k^2(\omega/\omega_C)} \quad (11.48)$$

and  $A_{max}^2$  occurs when  $\varepsilon^2 C_k^2(\omega/\omega_C) = 0$ . Then,

$$A_{max}^2 = \alpha \quad (11.49)$$

To find  $A_{min}^2$ , we must first confirm that

$$C_k^2(\omega/\omega_C) \leq 1$$

---

## Chapter 11 Analog and Digital Filters

---

This can be shown to be true by (11.39), that is,

$$C_k(x) = \cos(k \cos^{-1} x) \quad |x| \leq 1$$

or

$$|C_k(x)| \leq 1 \quad \text{for } -1 \leq x \leq 1$$

Therefore,

$$C_k^2(\omega/\omega_C)_{\max} = 1$$

and

$$A_{\min}^2 = \frac{\alpha}{1 + \varepsilon^2} \quad (11.50)$$

Substitution of (11.49) and (11.50) into (11.47) yields

$$r_{dB} = 10 \log_{10} \frac{A_{\max}^2}{A_{\min}^2} = 10 \log_{10} \left[ \frac{\alpha}{\alpha/(1 + \varepsilon^2)} \right] = 10 \log_{10} (1 + \varepsilon^2) \quad (11.51)$$

or

$$\log_{10}(1 + \varepsilon^2) = \frac{r_{dB}}{10}$$

or

$$1 + \varepsilon^2 = 10^{r_{dB}/10}$$

or

$$\boxed{\varepsilon^2 = 10^{r_{dB}/10} - 1} \quad (11.52)$$

We have seen that when  $k = \text{odd}$ , there is a maximum at  $\omega = 0$ . At this frequency, (11.45) reduces to

$$A^2(0) = \alpha \quad (11.53)$$

and for a unity gain,  $\alpha = 1$  when  $k = \text{odd}$ .

However, for unity gain when  $k = \text{even}$ , we must have  $\alpha = 1 + \varepsilon^2$ . This is because at  $\omega = 0$ , we must have  $C_k(0) = 1$  in accordance with (11.41). Then, the relation

$$A^2(\omega) = \frac{\alpha}{1 + \varepsilon^2 C_k^2(\omega/\omega_C)}$$

reduces to

$$A^2(0) = \frac{\alpha}{1 + \varepsilon^2 C_k^2(0)} = \frac{\alpha}{1 + \varepsilon^2} = 1$$



or

$$\alpha = 1 + \varepsilon^2$$

For this choice of  $\alpha$ , the amplitude response at maxima, corresponds to

$$A^2(\omega_{max}) = \frac{1 + \varepsilon^2}{1 + \varepsilon^2 C_k^2(\omega_{max}/\omega_C)}$$

and this will be maximum when

$$C_k^2(\omega_{max}/\omega_C) = 0$$

resulting in

$$A^2(\omega_{max}) = \frac{1 + \varepsilon^2}{1} = 1 + \varepsilon^2$$

or

$$A(\omega_{max}) = \sqrt{1 + \varepsilon^2}$$

### Example 11.10

Derive the transfer function  $G(s)$  for the  $k = 2$ , Type I Chebyshev function that has pass-band ripple  $r_{dB} = 1$  dB, unity DC gain, and normalized cutoff frequency at  $\omega_C = 1$  rad/s.

#### Solution:

From (11.45),

$$A^2(\omega) = \frac{\alpha}{1 + \varepsilon^2 C_k^2(\omega/\omega_C)} \quad (11.54)$$

and since  $k = \text{even}$ , for unity DC gain, we must have  $\alpha = 1 + \varepsilon^2$ . Then, (11.54) becomes

$$A^2(\omega) = \frac{1 + \varepsilon^2}{1 + \varepsilon^2 C_k^2(\omega/\omega_C)}$$

For  $k = 2$

$$C_2(x) = 2x^2 - 1$$

and

$$C_k^2(\omega/\omega_C) = C_k^2(\omega) = (2\omega^2 - 1)^2 = 4\omega^4 - 4\omega + 1$$

Also, from (11.52),

$$\varepsilon^2 = 10^{r_{dB}/10} - 1 = 10^{1/10} - 1 = 1.259 - 1 = 0.259$$

Then,

---

## Chapter 11 Analog and Digital Filters

---

$$A^2(\omega) = \frac{1 + 0.259}{1 + 0.259(4\omega^4 - 4\omega + 1)} = \frac{1.259}{1.036\omega^4 - 1.036\omega^2 + 1.259}$$

and with  $\omega^2 = -s^2$ ,

$$G(s)G(-s) = \frac{1.259}{1.036s^4 + 1.036s^2 + 1.259}$$

We find the poles from the roots of the denominator using MATLAB.

```
d=[1.036 0 1.036 0 1.259]; p=roots(d); fprintf(' \n'); disp('p1 = '); disp(p(1));...  
disp('p2 = '); disp(p(2)); disp('p3 = '); disp(p(3)); disp('p4 = '); disp(p(4))
```

```
p1 =
```

```
-0.5488 + 0.8951i
```

```
p2 =
```

```
-0.5488 - 0.8951i
```

```
p3 =
```

```
0.5488 + 0.8951i
```

```
p4 =
```

```
0.5488 - 0.8951i
```

We now form the transfer function from the left half-plane poles  $p_1 = -0.5488 + j0.8951$  and  $p_2 = -0.5488 - j0.8951$ . Then,

$$G(s) = \frac{K}{(s - p_1)(s - p_2)} = \frac{K}{(s + 0.5488 - j0.8951)(s + 0.5488 + j0.8951)}$$

We will use MATLAB to multiply the factors of the denominator.

```
syms s; den=(s+0.5488-0.8951*j)*(s+0.5488+0.8951*j); simple(expand(den))
```

```
ans =
```

```
s^2+686/625*s+22047709/20000000
```

```
686/625
```

```
ans =
```

```
1.0976
```

```
22047709/20000000
```

```
ans =
```

```
1.1024
```

Thus,

$$G(s) = \frac{K}{s^2 + 1.0976s + 1.1024}$$

and at  $s = 0$ ,

$$G(0) = \frac{K}{1.1024}$$

Also,  $A^2(0) = 1$ ,  $A(0) = 1$

Then,

$$G(0) = A(0) = \frac{K}{1.1024} = 1$$

or

$$K = 1.1024$$

Therefore, the transfer function for Example 11.10 is

$$G(s) = \frac{1.1024}{s^2 + 1.0976s + 1.1024}$$

We can plot the attenuation band for Type I Chebyshev filters, as we did with the Butterworth filters in Figure 11.12, but we need to construct one for each value of  $dB$  in the ripple region. Instead, we will develop the following procedure.

We begin with the Chebyshev approximation

$$A^2(\omega) = \frac{\alpha}{1 + \varepsilon^2 C_k^2(\omega/\omega_C)} \quad (11.55)$$

and, for convenience, we let  $\alpha = 1$ . If we want the magnitude of this to be less than some value  $\beta$  for  $\omega \geq \omega_C$ , we should choose the value of  $k$  in  $C_k^2(\omega/\omega_C)$  so that

$$\frac{1}{1 + \varepsilon^2 C_k^2(\omega/\omega_C)} \leq \beta^2 \quad (11.56)$$

that is, we need to find a suitable value of the integer  $k$  so that (11.56) will be satisfied. As we have already seen from (11.52), the value of  $\varepsilon$  can be determined from

$$\varepsilon^2 = 10^{r_{dB}/10} - 1$$

once the band-pass ripple has been specified.

Next, we need to find  $G(s)$  from

$$A^2(\omega) = G(s)G(-s)|_{s=j\omega}$$

---

## Chapter 11 Analog and Digital Filters

---

and if we replace  $\omega$  by  $s/j$  in (11.55) where  $\alpha = 1$ , we get

$$|G(s)|^2 = \frac{1}{1 + \varepsilon^2 C_k^2(s/j\omega_c)} \quad (11.57)$$

It can be shown that the poles of the left half of the  $s$ -plane are given by

$$s_i = \omega_c \left[ -b \sin \frac{(2i+1)\pi}{2k} + jc \cos \frac{(2i+1)\pi}{2k} \right] \quad (11.58)$$

for  $i = 0, 1, 2, \dots, 2k-1$

The constants  $b$  and  $c$  in (11.58) can be evaluated from

$$b = \frac{m - m^{-1}}{2} \quad (11.59)$$

and

$$c = \frac{m + m^{-1}}{2} \quad (11.60)$$

where

$$m = (\sqrt{1 + \varepsilon^{-2}} + \varepsilon^{-1})^{1/k} \quad (11.61)$$

The transfer function is then computed from

$$G(s) = \frac{(-1)^k}{\prod_{i=0}^{k-1} \left( \frac{s}{s_i} - 1 \right)} \quad (11.62)$$

### Example 11.11

Design a Type I Chebyshev analog low-pass filter with 3 dB band-pass ripple and  $\omega_c = 5$  rad/s. The attenuation for  $\omega \geq 15$  rad/s must be at least 30 dB/decade.

#### Solution:

From (11.52),

$$\varepsilon^2 = 10^{r_{dB}/10} - 1 = 10^{3/10} - 1 = 1.9953 - 1 \approx 1$$

and the integer  $k$  must be chosen such that

$$10 \log_{10} \frac{1}{1 + C_k^2(15/5)} \leq -30$$

or

$$-10 \log_{10}(1 + C_k^2(3)) \leq -30$$

$$-\log_{10}(1 + C_k^2(3)) \leq -3$$

$$1 + C_k^2(3) \geq 10^3$$

To find the minimum value of  $k$  which satisfies this inequality, we compute the Chebyshev polynomials for  $k = 0, 1, 2, 3, \dots$ . From (11.41) through (11.44), we get

$$C_0^2(3) = 1$$

$$C_1^2(3) = 3^2 = 9$$

$$C_2^2(3) = (2 \cdot 3^2 - 1)^2 = 17^2 = 289$$

$$C_3^2(3) = (4 \cdot 3^3 - 3 \cdot 3)^2 = 99^2 = 9801$$

and since  $C_k^2(3)$  must be such that  $1 + C_k^2(3) \geq 10^3$ , we choose  $k = 3$ . Next, to find the poles of left half of the  $s$ -plane we first need to compute  $m$ ,  $b$ , and  $c$ . From (11.61),

$$m = (\sqrt{1 + \varepsilon^{-2}} + \varepsilon^{-1})^{1/k} = \left( \sqrt{1 + \frac{1}{\varepsilon^2}} + \frac{1}{\sqrt{\varepsilon^2}} \right)^{1/3} = (\sqrt{2} + 1)^{1/3}$$

or

$$m = 1.3415$$

and

$$m^{-1} = 0.7454$$

Then, from (11.59) and (11.60),

$$b = \frac{1.3415 - 0.7454}{2} = 0.298$$

$$c = \frac{1.3415 + 0.7454}{2} = 1.043$$

and the poles for  $i = 0, 1$ , and  $2$  are found from (11.58), that is

$$s_i = \omega_c \left[ -b \sin \frac{(2i+1)\pi}{2k} + jc \cos \frac{(2i+1)\pi}{2k} \right]$$

Thus, the poles for this example are

$$s_0 = 5 \left( -0.298 \sin \frac{\pi}{6} + j1.043 \cos \frac{\pi}{6} \right) = -0.745 + j4.516$$

$$s_1 = 5 \left( -0.298 \sin \frac{\pi}{2} + j1.043 \cos \frac{\pi}{2} \right) = -1.49$$

$$s_2 = 5 \left( -0.298 \sin \frac{5\pi}{6} + j1.043 \cos \frac{5\pi}{6} \right) = -0.745 - j4.516$$

Therefore, by substitution into (11.62) we get

$$G(s) = \frac{(-1)^3}{(s/s_0 - 1)(s/s_1 - 1)(s/s_2 - 1)} = \frac{-(-1.49)(-0.745 + j4.516)(-0.745 - j4.516)}{(s + 1.49)(s + 0.745 - j4.516)(s + 0.745 + j4.516)}$$

We will use MATLAB to do these computations.

```
-(1.49)*(-0.745+j*4.516)*(-0.745-j*4.516)
```

```
ans =
```

```
31.2144
```

```
syms s; den=(s+1.49)*(s+0.745-j*4.516)*(s+0.745+j*4.516); simple(expand(den))
```

```
ans =
```

```
s^3+149/50*s^2+23169381/1000000*s+3121442869/100000000
```

Then,

$$G(s) = \frac{31.214}{s^3 + 2.980s^2 + 23.169s + 31.214} \quad (11.63)$$

To verify that the derived transfer function  $G(s)$  of (11.63) satisfies the filter specifications, we use the MATLAB code below to plot  $|G(j\omega)|$ .

```
w=0:0.01:100; s=j*w; Gs=31.214./(s.^3+2.98.*s.^2+23.169.*s+31.214);...
magGs=abs(Gs); dB=20.*log10(magGs); semilogx(w,dB); grid; hold on;
plot(w,magGs); grid; hold on; xlabel('Radian Frequency w rad/s');
ylabel('|G(w)| in dB'); title('Magnitude of G(w) versus Radian Frequency')
```

The plot is shown in Figure 11.19.

We can use the MATLAB **cheb1ap** function to design a Type I Chebyshev analog low-pass filter. Thus, the **[z,p,k] = cheb1ap(N,Rp)** statement where **N** denotes the order of the filter, returns the zeros, poles, and gain of an  $N$ -th order normalized prototype Type I Chebyshev analog lowpass filter with ripple **Rp** decibels in the pass band.

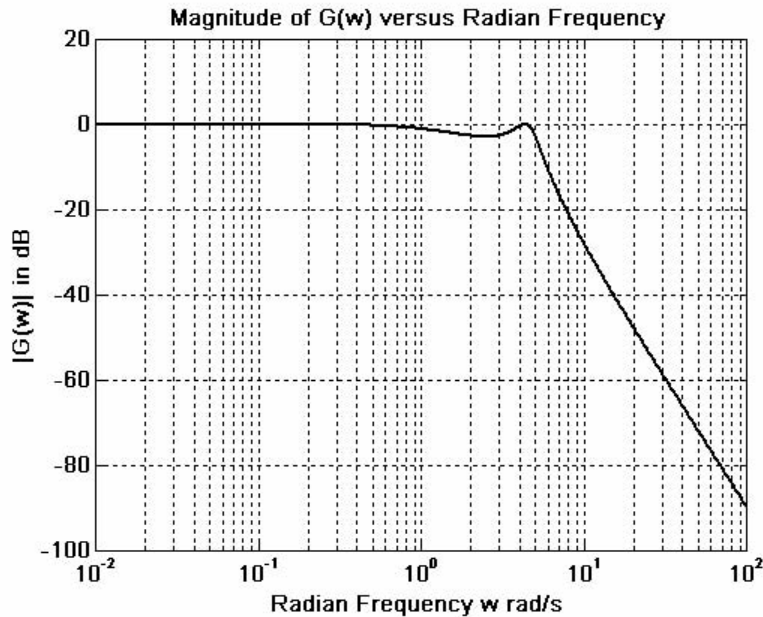


Figure 11.19. Plot for Example 11.11

**Example 11.12**

Use the MATLAB **cheb1ap** function to design a second order Type I Chebyshev low-pass filter with 3 dB ripple in the pass band.

**Solution:**

We use the code

```
w=0:0.05:400; % Define range to plot
[z,p,k]=cheb1ap(2,3);
[b,a]=zp2tf(z,p,k); % Convert zeros and poles of G(s) to polynomial form
[mag,phase]=bode(b,a,w); hold on
b % Display the b coefficients
b =
    0    0    0.5012
a % Display the a coefficients
a =
    1.0000    0.6449    0.7079
```

Now, with the known values of *a* and *b* we use the **bode** function to produce the Bode plots as follows.

bode(b,a), title('Bode Plot for Type 1 Chebyshev Low-Pass Filter')

This is shown in Figure 11.20.

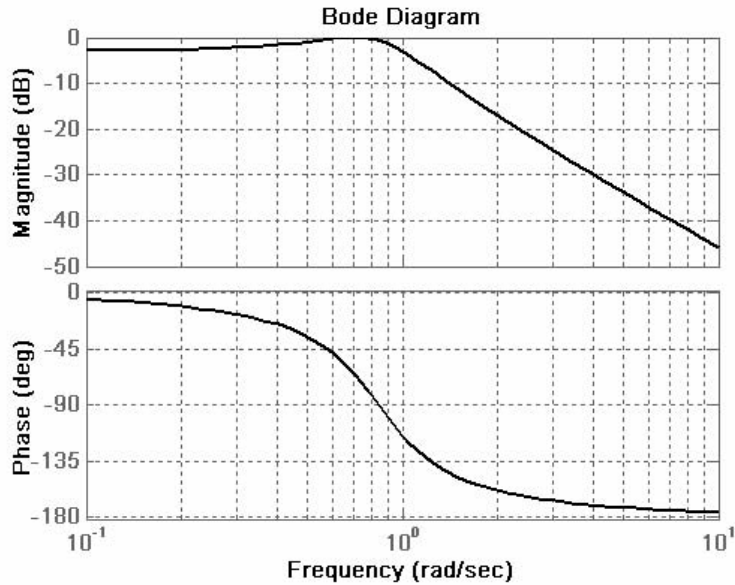


Figure 11.20. Bode plots for the filter of Example 11.12

On the Bode plots shown in Figure 11.20, the ripple is not so obvious. The reason is that this is a Bode plot with straight line approximations. To see the ripple, we use the following code:

```
w=0:0.01:10; [z,p,k]=cheb1ap(2,3); [b,a]=zp2tf(z,p,k); Gs=freqs(b,a,w);...  
xlabel('Frequency in rad/s'), ylabel('Magnitude of G(s)'),...  
semilogx(w,abs(Gs)); title('Type 1 Chebyshev Low-Pass Filter'), grid
```

The generated plot is shown in Figure 11.21.

### 11.6 Other Low-Pass Filter Approximations

We will briefly discuss two other filter types, the *Inverted Chebyshev*, and the *Cauer* or *Elliptic*.

The Inverted Chebyshev, also known as *Type II Chebyshev*, is characterized by the following amplitude-square approximation.

$$A^2(\omega) = \frac{\varepsilon^2 C_k^2(\omega_C/\omega)}{1 + \varepsilon^2 C_k^2(\omega_C/\omega)} \quad (11.64)$$

and has the ripple in the stop-band as opposed to Type I which has the ripple in the pass-band. In (11.64), the frequency  $\omega_C$  defines the beginning of the stop band.



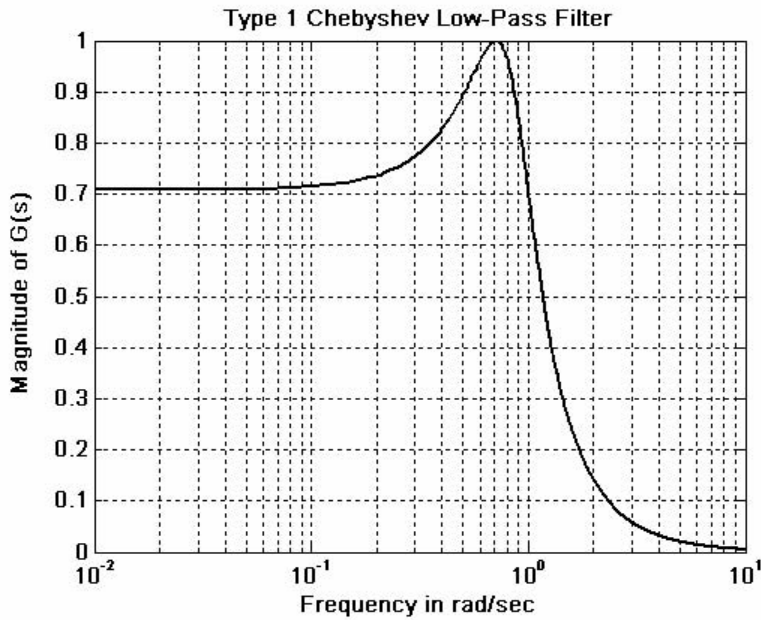


Figure 11.21. Amplitude characteristics for the filter of Example 11.12

The characteristics of a typical Type II Chebyshev low-pass filter are shown in Figure 11.22.

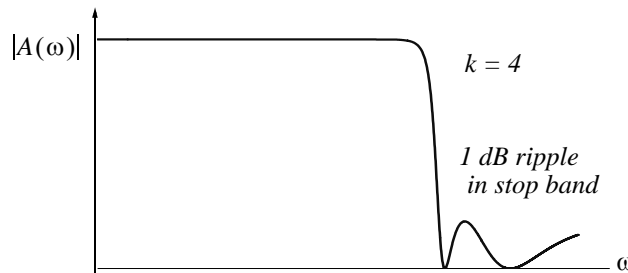


Figure 11.22. Type II Chebyshev low-pass filter

We can design Type II Chebyshev low-pass filters with the MATLAB **cheb2ap** function. Thus, the statement **[z,p,k] = cheb2ap(N,Rs)** where **N** denotes the order of the filter, returns the zeros, poles, and gain of an  $N$ -th order normalized prototype Type II Chebyshev analog lowpass filter with ripple **Rs** decibels in the stop band.

### Example 11.13

Using the MATLAB **cheb2ap** function, design a third order Type II Chebyshev analog filter with 3 dB ripple in the stop band.

## Chapter 11 Analog and Digital Filters

### Solution:

We use the code

```
w=0:0.01:1000; [z,p,k]=cheb2ap(3,3); [b,a]=zp2tf(z,p,k); Gs=freqs(b,a,w);...  
semilogx(w,abs(Gs)); xlabel('Frequency in rad/sec'); ylabel('Magnitude of G(s)');  
title('Type 2 Chebyshev Low-Pass Filter, k=3, 3 dB ripple in stop band'); grid
```

The plot for this filter is shown in Figure 11.23.

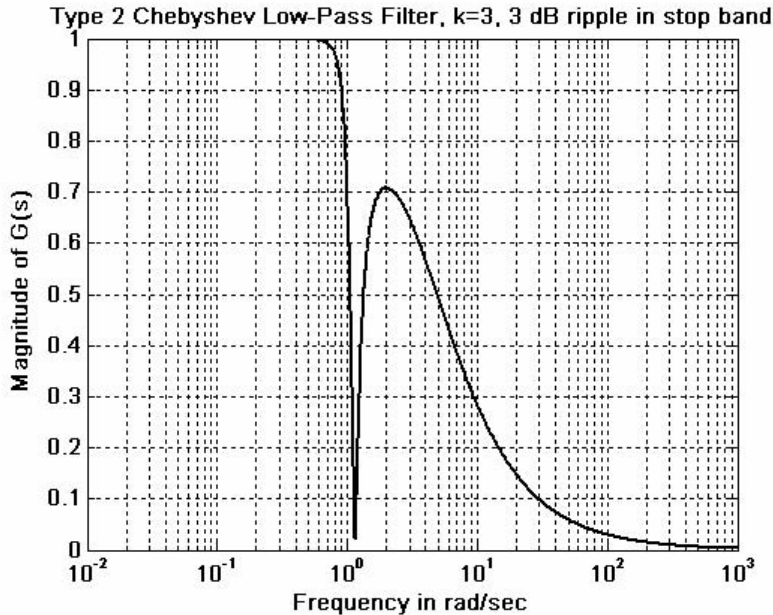


Figure 11.23. Plot for the filter of Example 11.13

The elliptic (Cauer) filters are characterized by the low-pass amplitude-squared function

$$A^2(\omega) = \frac{1}{1 + R_k^2(\omega/\omega_c)} \quad (11.65)$$

where  $R_k(x)$  represents a rational elliptic function used with elliptic integrals. Elliptic filters have ripple in both the pass-band and the stop-band as shown in Figure 11.24.

We can design elliptic low-pass filters with the MATLAB **ellip** function. The statement **[b,a] = ellip(N,Rp,Rs,Wn,'s')** where **N** is the order of the filter, designs an  $N$ -th order low-pass filter with ripple **Rp** decibels in the pass band, ripple **Rs** decibels in the stop band, **Wn** is the cutoff frequency, and **'s'** is used to specify analog elliptic filters. If **'s'** is not included in the above statement, MATLAB designs a digital filter. The plot of Figure 11.24 was obtained with the following MATLAB code:

```
w=0:0.05:500; [z,p,k]=ellip(5,0.6,20,200,'s'); [b,a]=zp2tf(z,p,k);...  
Gs=freqs(b,a,w); plot(w,abs(Gs)), title('5-pole Elliptic Low Pass Filter'); grid
```

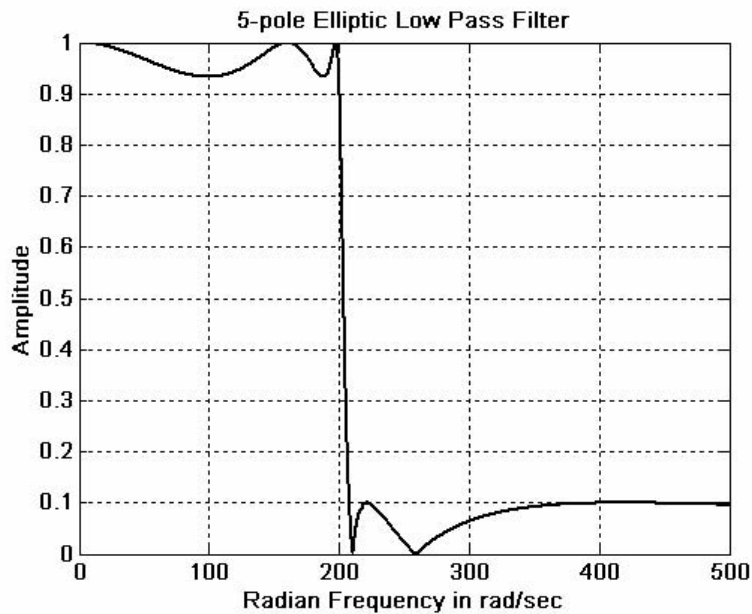


Figure 11.24. Characteristics of an elliptic low-pass filter

**Example 11.14**

Use MATLAB to design a four-pole elliptic analog low-pass filter with  $0.5 \text{ dB}$  maximum ripple in the pass-band and  $20 \text{ dB}$  minimum attenuation in the stop-band with cutoff frequency at  $200 \text{ rad/s}$ .

**Solution:**

The solution is obtained with the following MATLAB code.

```
w=0: 0.05: 500; [z,p,k]=ellip(4, 0.5, 20, 200, 's'); [b,a]=zp2tf(z,p,k);...
Gs=freqs(b,a,w); plot(w,abs(Gs)), title('4-pole Elliptic Low Pass Filter'); grid
```

The plot for this example is shown in Figure 11.25.

To form the transfer function  $G(s)$ , we need to know the coefficients  $a_i$  and  $b_i$  of the denominator and numerator respectively, of  $G(s)$  in descending order. Because these are large numbers, we use the **format long** MATLAB command, and we get

```
format long
a
```

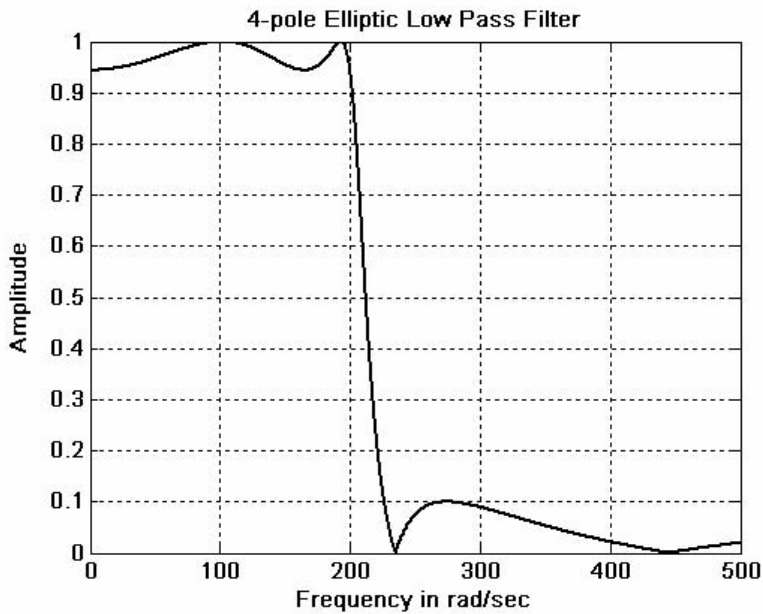


Figure 11.25. Plot for filter of Example 11.14

```
a =
1.0e+009 *
Columns 1 through 4
0.00000000100000    0.00000033979343    0.00010586590805
0.01618902078998
Column 5
2.07245309396647
```

```
b
b =
1.0e+009 *
Columns 1 through 4
0.00000000010003    0    0.00003630258930    0
Column 5
2.04872991957189
```

Thus, the transfer function for this filter is

$$G(s) = \frac{2.0487 \times 10^9}{s^4 + 339.793s^3 + 105866s^2 + 16.189 \times 10^6 + 2.072 \times 10^9} \quad (11.66)$$

### 11.7 High-Pass, Band-Pass, and Band-Elimination Filters

Transformation methods have been developed where a low-pass filter can be converted to another type of filter simply by transforming the complex variable  $s$ . These transformations are listed in Table 11.5 where  $\omega_c$  is the cutoff frequency of a low-pass filter. The procedure is best illustrated with the following examples.

*TABLE 11.5 Filter transformations*

Analog Filter Frequency Transformations	
Filter Type, Frequency	Replace $s$ in $G(s)$ with
Low-Pass Filter, 3 dB pass-band, Normalized Frequency $\omega_c$	No Change
Low-Pass Filter, 3 dB pass-band, Non-Normalized Frequency $\omega_{LP}$	$\frac{s\omega_c}{\omega_{LP}}$
High-Pass Filter, 3 dB pass-band from $\omega = \omega_2$ to $\omega = \infty$	$\frac{\omega_{LP} \cdot \omega_2}{s}$
Band-Pass Filter, 3 dB pass-band from $\omega = \omega_{LP}$ to $\omega = \omega_2$	$\omega_c \cdot \frac{s^2 + \omega_{LP} \cdot \omega_2}{s(\omega_2 - \omega_{LP})}$
Band-Elimination Filter, 3 dB pass-band from $\omega = 0$ to $\omega = \omega_{LP}$ , and from $\omega = \omega_2$ to $\omega = \infty$	$\omega_c \cdot \frac{s(\omega_2 - \omega_{LP})}{s^2 + \omega_{LP} \cdot \omega_2}$

**Example 11.15**

Compute the transfer function for a third-order band-pass Butterworth filter with 3 dB pass-band from 3 KHz to 5 KHz, from a third-order low-pass Butterworth filter with cutoff frequency  $f_c = 1$  KHz.

**Solution:**

We first find the transfer function for a third-order Butterworth low-pass filter with normalized frequency  $\omega_c = 1$  rad/s. Using the MATLAB function **buttap** we write and execute the following code:

```
[z, p, k]=buttap(3); [b,a]=zp2tf(z,p,k)
b =
    0    0    0    1
a =
    1.0000    2.0000    2.0000    1.0000
```

---

## Chapter 11 Analog and Digital Filters

---

Thus, the transfer function for the third-order Butterworth low-pass filter with normalized cutoff frequency  $\omega_c = 1 \text{ rad/s}$  is

$$G(s) = \frac{1}{s^3 + 2s^2 + 2s + 1} \quad (11.67)$$

Next, the actual cutoff frequency is given as  $f_C = 1 \text{ KHz}$  or  $\omega_C = 2\pi \times 10^3 \text{ rad/s}$ . Accordingly, in accordance with Table 11.5, we replace  $s$  with

$$\frac{s\omega_C}{\omega_{LP}} = \frac{s}{2\pi \times 10^3}$$

and we get

$$\begin{aligned} G\left(\frac{s}{2\pi \times 10^3}\right) &= G'(s) = \frac{1}{(s/(2\pi \times 10^3))^3 + 2(s/(2\pi \times 10^3))^2 + 2(s/(2\pi \times 10^3)) + 1} \\ &= \frac{2.48 \times 10^{11}}{s^3 + 1.26 \times 10^4 s^2 + 7.89 \times 10^7 s + 2.48 \times 10^{11}} \end{aligned} \quad (11.68)$$

Now, we replace  $s$  in the last expression of (11.68) with

$$\omega_C \cdot \frac{s^2 + \omega_{LP} \cdot \omega_2}{s(\omega_2 - \omega_{LP})} \quad (11.69)$$

or

$$1 \cdot \frac{s^2 + 2\pi \times 10^3 \times 3 \times 2\pi \times 10^3}{s(3 \times 2\pi \times 10^3 - 2\pi \times 10^3)} = \frac{s^2 + 12 \times \pi^2 \times 10^6}{s(4\pi \times 10^3)} = \frac{s^2 + 1.844 \times 10^8}{1.257 \times 10^4 s}$$

Then,

$$G''(s) = \frac{2.48 \times 10^{11}}{\left(\frac{s^2 + 1.844 \times 10^8}{1.257 \times 10^4 s}\right)^3 + \left(\frac{s^2 + 1.844 \times 10^8}{1.257 \times 10^4 s}\right)^2 + \frac{s^2 + 1.844 \times 10^8}{1.257 \times 10^4 s} + 2.48 \times 10^{11}}$$

We see that the computations, using the transformations of Table 11.5 become quite tedious. Fortunately, we can use the MATLAB **lp2lp**, **lp2hp**, **lp2bp**, and **lp2bs** functions to transform a low pass filter with normalized cutoff frequency, to another low-pass filter with any other specified frequency, or to a high-pass filter, or to a band-pass filter, or to a band elimination filter respectively.

### Example 11.16

Use the MATLAB **buttap** and **lp2lp** functions to find the transfer function of a third-order Butterworth low-pass filter with cutoff frequency  $f_C = 2 \text{ KHz}$ .

### Solution:

We will use the **buttap** command to find the transfer function  $G(s)$  of the filter with normalized cutoff frequency at  $\omega_C = 1 \text{ rad/s}$ . Then, we will use the command **lp2lp** to transform  $G(s)$  to  $G'(s)$  with cutoff frequency at  $f_C = 2 \text{ KHz}$ , or  $\omega_C = 2\pi \times 2 \times 10^3 \text{ rad/s}$ .

format short e

```
% Design 3 pole Butterworth low-pass filter (wcn=1 rad/s)
[z,p,k]=buttap(3);
[b,a]=zp2tf(z,p,k);           % Compute num, den coefficients of this filter (wcn=1rad/s)
f=1000:1500/50:10000;        % Define frequency range to plot
w=2*pi*f;                    % Convert to rads/sec
fc=2000;                      % Define actual cutoff frequency at 2 KHz
wc=2*pi*fc;                  % Convert desired cutoff frequency to rads/sec
[bn,an]=lp2lp(b,a,wc);       % Compute num, den of filter with fc = 2 KHz
Gsn=freqs(bn,an,w);          % Compute transfer function of filter with fc = 2 kHz
semilogx(w,abs(Gsn)); grid; hold on; xlabel('Radian Frequency w (rad/sec)'),...
ylabel('Magnitude of Transfer Function'),...
title('3-pole Butterworth low-pass filter with fc=2 kHz or wc = 12.57 kr/s')
```

The plot for the magnitude of this transfer function is shown in Figure 11.26.

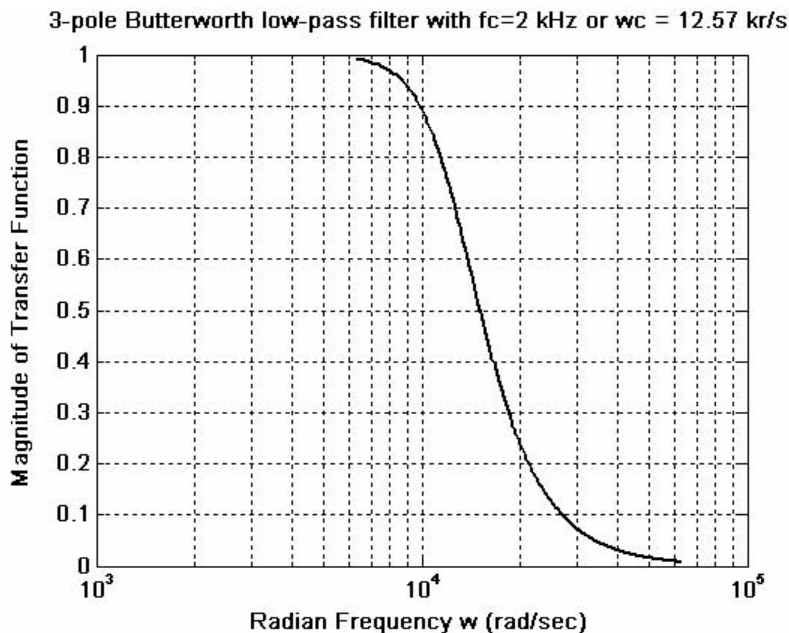


Figure 11.26. Magnitude for the transfer function of (11.71)

The coefficients of the numerator and denominator of the transfer function are as follows:

b

---

## Chapter 11 Analog and Digital Filters

---

b =

0 0 0 1

a

a =

1.0000e+000 2.0000e+000 2.0000e+000 1.0000e+000

bn

bn =

1.9844e+012

an

an =

1.0000e+000 2.5133e+004 3.1583e+008 1.9844e+012

Thus, the transfer function with normalized cutoff frequency  $\omega_{C_n} = 1 \text{ rad/s}$  is

$$G(s) = \frac{1}{s^3 + 2s^2 + 2s + 1} \quad (11.70)$$

and with actual cutoff frequency  $\omega_{C_n} = 2\pi \times 2000 \text{ rad/s} = 1.2566 \times 10^4$  is

$$G'(s) = \frac{1.9844 \times 10^{12}}{s^3 + 2.5133 \times 10^4 s^2 + 3.1583 \times 10^8 s + 1.9844 \times 10^{12}} \quad (11.71)$$

### Example 11.17

Use the MATLAB commands **cheb1ap** and **lp2hp** to find the transfer function of a 3-pole Type I Chebyshev high-pass analog filter with cutoff frequency  $f_C = 5 \text{ KHz}$ .

#### Solution:

We will use the **cheb1ap** command to find the transfer function  $G(s)$  of the low-pass filter with normalized cutoff frequency at  $\omega_C = 1 \text{ rad/s}$ . Then, we will use the command **lp2hp** to transform

$G(s)$  to another  $G'(s)$  with cutoff frequency at  $f_C = 5 \text{ KHz}$  or  $\omega_C = 2\pi \times 5 \times 10^3 \text{ rad/s}$

% Design 3 pole Type 1 Chebyshev low-pass filter, wcn=1 rad/s

```
[z,p,k]=cheb1ap(3,3);
```

```
[b,a]=zp2tf(z,p,k); % Compute num, den coef. with wcn=1 rad/s
```

```
f=1000:100:100000; % Define frequency range to plot
```

```
fc=5000; % Define actual cutoff frequency at 5 KHz
```

```
wc=2*pi*fc; % Convert desired cutoff frequency to rads/sec
```

```
[bn,an]=lp2hp(b,a,wc); % Compute num, den of high-pass filter with fc = 5 KHz
```

```
Gsn=freqs(bn,an,2*pi*f); % Compute and plot transfer function of filter with fc = 5 KHz
```

```
semilogx(f,abs(Gsn)); grid; hold on
```



```
xlabel('Frequency (Hz)'); ylabel('Magnitude of Transfer Function')
title('3-pole Type 1 Chebyshev high-pass filter with fc=5 KHz')
```

The magnitude of this transfer function is plotted as shown in Figure 11.27.

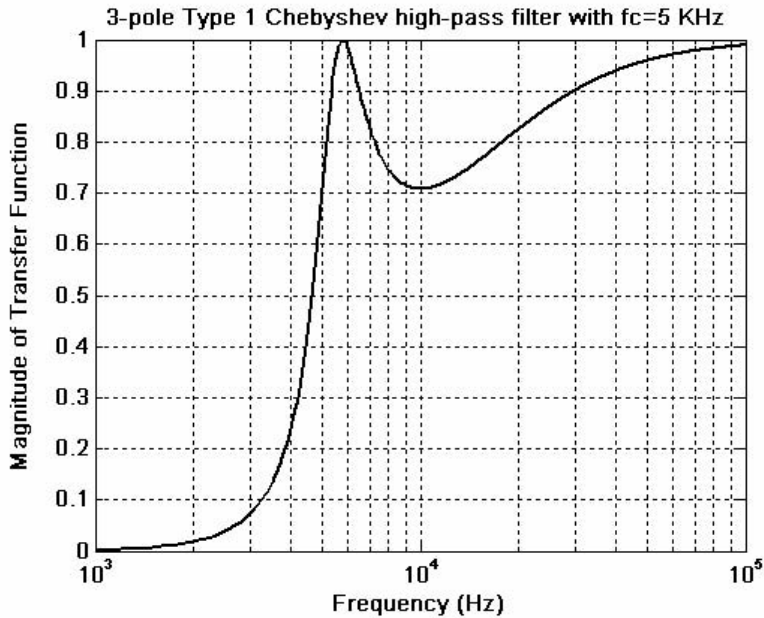


Figure 11.27. Magnitude of the transfer function of (11.73) for Example 11.17

The coefficients of the numerator and denominator of the transfer function are as follows:

b

```
b =
    0          0          0  2.5059e-001
```

a

```
a =
  1.0000e+000  5.9724e-001  9.2835e-001  2.5059e-001
```

bn

```
bn =
  1.0000e+000  2.2496e-011 -1.4346e-002 -6.8973e-003
```

an

```
an =
  1.0000e+000  1.1638e+005  2.3522e+009  1.2373e+014
```

Therefore, the transfer function with normalized cutoff frequency  $\omega_{Cn} = 1 \text{ rad/s}$  is

$$G(s) = \frac{0.2506}{s^3 + 0.5972s^2 + 0.9284s + 0.2506} \quad (11.72)$$

and with actual cutoff frequency  $\omega_{C_n} = 2\pi \times 5000 \text{ rad/s} = 3.1416 \times 10^4$ , is

$$G'(s) = \frac{s^3}{s^3 + 1.1638 \times 10^5 s^2 + 2.3522 \times 10^9 s + 1.2373 \times 10^{14}} \quad (11.73)$$

### Example 11.18

Use the MATLAB functions **buttap** and **lp2bp** to find the transfer function of a 3-pole Butterworth analog band-pass filter with the pass band frequency centered at  $f_0 = 4 \text{ KHz}$ , and bandwidth  $BW = 2 \text{ KHz}$ .

#### Solution:

We will use the **buttap** function to find the transfer function  $G(s)$  of the low-pass filter with normalized cutoff frequency at  $\omega_c = 1 \text{ rad/s}$ . We found this transfer function in Example 11.15 as given by (11.67). However, to maintain a similar MATLAB code as in the previous examples, we will include it in the code that follows. Then, we will use the command **lp2bp** to transform  $G(s)$  to another  $G'(s)$  with centered frequency at  $f_0 = 4 \text{ KHz}$  or  $\omega_0 = 2\pi \times 4 \times 10^3 \text{ rad/s}$ , and bandwidth  $BW = 2 \text{ KHz}$  or  $BW = 2\pi \times 2 \times 10^3 \text{ rad/s}$

```
format short e
[z,p,k]=buttap(3);           % Design 3 pole Butterworth low-pass filter with wcn=1 rad/s
[b,a]=zp2tf(z,p,k);         % Compute numerator and denominator coefficients for wcn=1
rad/s
f=100:100:100000;          % Define frequency range to plot
f0=4000;                    % Define centered frequency at 4 KHz
W0=2*pi*f0;                 % Convert desired centered frequency to rads/sec
fbw=2000;                   % Define bandwidth
Bw=2*pi*fbw;                % Convert desired bandwidth to rads/sec
[bn,an]=lp2bp(b,a,W0,Bw);  % Compute num, den of band-pass filter
% Compute and plot the magnitude of the transfer function of the band-pass filter
Gsn=freqs(bn,an,2*pi*f);    semilogx(f,abs(Gsn)); grid; hold on
xlabel('Frequency f (Hz)'); ylabel('Magnitude of Transfer Function');
title('3-pole Butterworth band-pass filter with f0 = 4 KHz, BW = 2KHz')
```

The plot for this band-pass filter is shown in Figure 11.28.

The coefficients  $b_n$  and  $a_n$  are as follows:

**bn**

**bn =**

1.9844e+012    -4.6156e+001    -1.6501e+005    -2.5456e+009

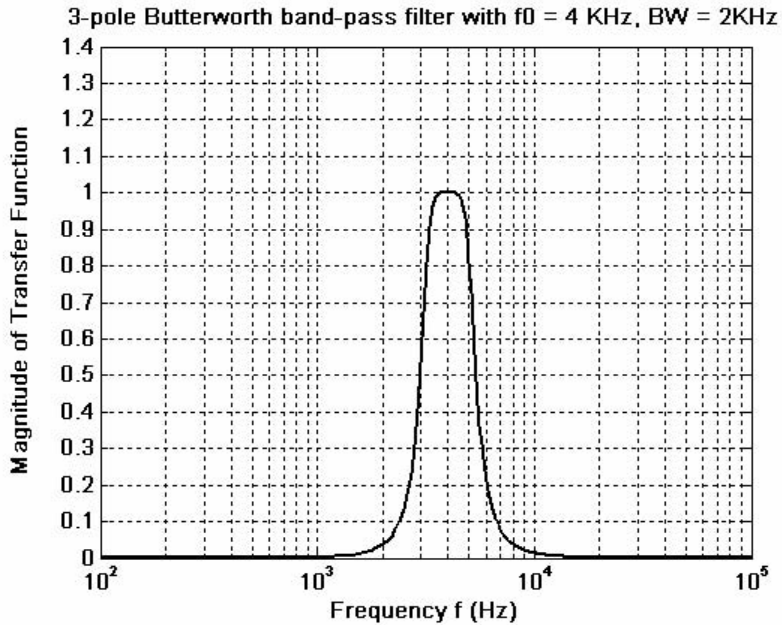


Figure 11.28. Plot for the band-pass filter of Example 11.18

an

an =

1.0000e+000    2.5133e+004    2.2108e+009    3.3735e+013    1.3965e+018  
 1.0028e+022    2.5202e+026

Since the numerator  $b_n$  and denominator  $a_n$  coefficients are too large to be written in a one line equation, we have listed them in tabular form as shown below.

Power of $s$	Numerator $b_n$	Denominator $a_n$
$s^6$	$0$	$1$
$s^5$	$0$	$2.5133 \times 10^4$
$s^4$	$0$	$2.2108 \times 10^9$
$s^3$	$1.9844 \times 10^{12}$	$3.3735 \times 10^{13}$
$s^2$	$-4.6156 \times 10^1$	$1.3965 \times 10^{18}$
$s$	$-1.6501 \times 10^5$	$1.0028 \times 10^{22}$
Constant	$-2.5456 \times 10^9$	$2.5202 \times 10^{26}$

### Example 11.19

Use the MATLAB functions **buttap** and **lp2bs** to find the transfer function of a 3-pole Butterworth band-elimination (band-stop) filter with the stop band frequency centered at  $f_0 = 5 \text{ KHz}$ , and bandwidth  $BW = 2 \text{ KHz}$ .

#### Solution:

We will use the **buttap** function to find the transfer function  $G(s)$  of the low-pass filter with normalized cutoff frequency at  $\omega_c = 1 \text{ rad/s}$ . We found this transfer function as (11.67) in Example 11.15. However, to maintain a similar MATLAB code as in the previous examples, we will include it in the code which follows. Accordingly, we will use the **lp2bs** function to transform  $G(s)$  to another transfer function  $G'(s)$  with centered frequency at  $f_0 = 5 \text{ KHz}$ , or  $\omega_0 = 2\pi \times 5 \times 10^3 \text{ rad/s}$ , and bandwidth  $BW = 2 \text{ KHz}$  or  $BW = 2\pi \times 2 \times 10^3 \text{ rad/s}$ .

```
[z,p,k]=buttap(3);           % Design 3-pole Butterworth low-pass filter, wcn = 1 r/s
[b,a]=zp2tf(z,p,k);        % Compute num, den coefficients of this filter, wcn=1 r/s
f=100:100:100000;         % Define frequency range to plot
f0=5000;                  % Define centered frequency at 5 kHz
W0=2*pi*f0;              % Convert centered frequency to r/s
fbw=2000;                % Define bandwidth
Bw=2*pi*fbw;             % Convert bandwidth to r/s
% Compute numerator and denominator coefficients of desired band stop filter
[bn,an]=lp2bs(b,a,W0,Bw);
% Compute and plot magnitude of the transfer function of the band stop filter
Gsn=freqs(bn,an,2*pi*f); semilogx(f,abs(Gsn)); grid; hold on
xlabel('Frequency in Hz'); ylabel('Magnitude of Transfer Function');
title('3-pole Butterworth band-elimination filter with f0=5 KHz, BW = 2 KHz')
```

The amplitude response of this band elimination filter is shown in Figure 11.29.

The coefficients  $b_n$  and  $a_n$  are as follows:

**bn**

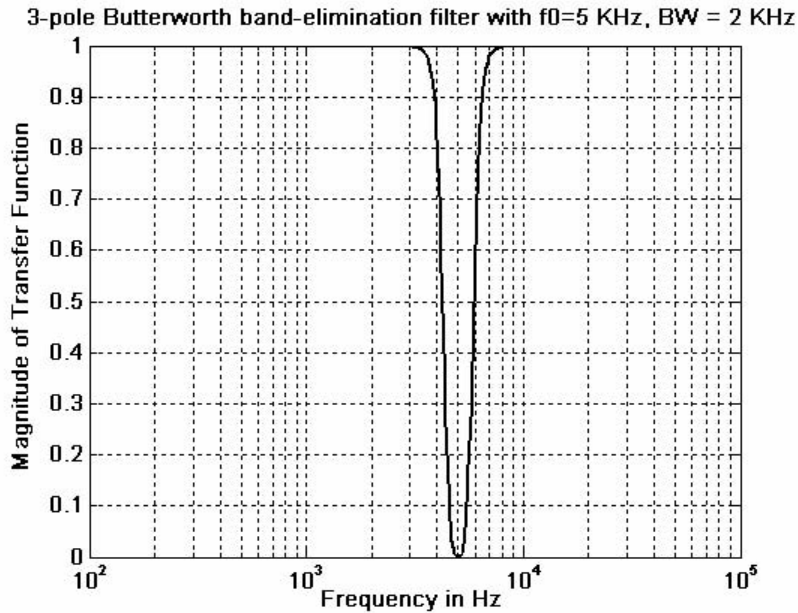
**bn =**

1.0000e+000	-7.6352e-012	2.9609e+009	-1.5071e-002
2.9223e+018	-7.4374e+006	9.6139e+026	

**an**

**an =**

1.0000e+000	2.5133e+004	3.2767e+009	5.1594e+013
3.2340e+018	2.4482e+022	9.6139e+026	



*Figure 11.29. Amplitude response for the band-elimination filter of Example 11.19*

As in the previous example, we list the numerator  $b_n$  and denominator  $a_n$  coefficients in tabular form as shown below.

Power of $s$	Numerator $b_n$	Denominator $a_n$
$s^6$	1	1
$s^5$	$-7.6352 \times 10^{-12}$	$2.5133 \times 10^4$
$s^4$	$2.9609 \times 10^{-6}$	$3.2767 \times 10^9$
$s^3$	$-1.5071 \times 10^{-2}$	$5.1594 \times 10^{13}$
$s^2$	$2.9223 \times 10^{18}$	$3.2340 \times 10^{18}$
$s$	$-7.4374 \times 10^6$	$2.4482 \times 10^{22}$
Constant	$9.6139 \times 10^{26}$	$9.6139 \times 10^{26}$

In all of the above examples, we have shown the magnitude, but not the phase response of each filter type. However, we can use the MATLAB function **bode(num,den)** to generate both the magnitude and phase responses of any transfer function describing the filter type, as shown by the following example.

---

## Chapter 11 Analog and Digital Filters

---

### Example 11.20

Use the MATLAB **bode** function to plot the magnitude and phase characteristics of the 3-pole Butterworth low-pass filter with unity gain and normalized frequency at  $\omega_C = 1 \text{ rad/s}$ .

#### Solution:

We know, from Example 11.15, that the transfer function for this type of filter is

$$G(s) = \frac{1}{s^3 + 2s^2 + 2s + 1}$$

We can obtain the magnitude and phase characteristics with the following MATLAB code:

```
num=[0 0 0 1]; den=[1 2 2 1]; bode(num,den),...  
title('Bode Plot for 3-pole Butterworth Low-Pass Filter'); grid
```

The magnitude and phase characteristics are shown in Figure 11.30.

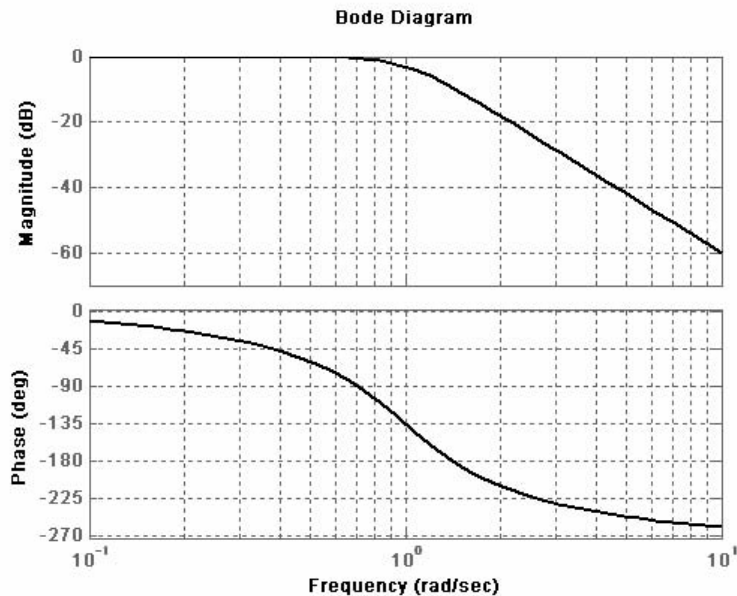


Figure 11.30. Bode plots for 3-pole Butterworth low-pass filter

We conclude the discussion on analog filters with Table 11.6 listing the advantages and disadvantages of each type.

TABLE 11.6 Advantages / Disadvantages of different types of filters

Filter Type	Advantages	Disadvantages
Butterworth	<ul style="list-style-type: none"> <li>• Simplest design</li> <li>• Flat pass band</li> </ul>	<ul style="list-style-type: none"> <li>• Slow rate of attenuation for order 4 or less</li> </ul>
Chebyshev Type I	<ul style="list-style-type: none"> <li>• Sharp cutoff rate in transition (pass to stop) band</li> </ul>	<ul style="list-style-type: none"> <li>• Ripple in pass band</li> <li>• Bad (non-linear) phase response</li> </ul>
Chebyshev Type II	<ul style="list-style-type: none"> <li>• Sharp cutoff rate in transition (pass to stop) band</li> </ul>	<ul style="list-style-type: none"> <li>• Ripple in stop band</li> <li>• Bad (non-linear) phase response</li> </ul>
Elliptic (Cauer)	<ul style="list-style-type: none"> <li>• Sharpest cutoff rate among all other types of filters</li> </ul>	<ul style="list-style-type: none"> <li>• Ripple in both pass band and stop band</li> <li>• Worst (most non-linear) phase response among the other types of filters.</li> </ul>

## 11.8 Digital Filters

A *digital filter* is essentially a computational process (algorithm) that converts one sequence of numbers  $x[n]$  representing the input, to another sequence  $y[n]$  that represents the output. Thus, a digital filter, in addition of filtering out desired bands of frequency, can also be used as a computational means of performing other functions such as integration, differentiation, and estimation.

The input-output difference equation that relates the output to the input can be expressed in the discrete time domain as a summation of the form

$$y[n] = \sum_{i=0}^k a_i x[n-i] - \sum_{i=0}^k b_i y[n-i] \tag{11.74}$$

or, in the  $z$ -domain as

$$G(z) = \frac{N(z)}{D(z)} = \frac{\sum_{i=0}^k a_i z^{-i}}{1 + \sum_{i=0}^k b_i z^{-i}} \tag{11.75}$$

Therefore, the design of a digital filter to perform a desired function, entails the determination of the coefficients  $a_i$  and  $b_i$ .

Digital filters are classified in terms of the duration of the impulse response, and in forms of realization.

### 1. Impulse Response Duration

- a. An *Infinite Impulse Response* (IIR) digital filter has infinite number of samples in its impulse response  $h[n]$
- b. A *Finite Impulse Response* (FIR) digital filter has a finite number of samples in its impulse response  $h[n]$

### 2. Realization

- a. In a *Recursive Realization* digital filter the output is dependent on the input and the *previous* values of the output. In a recursive digital filter, both the coefficients  $a_i$  and  $b_i$  are present.
- b. In a *Non-Recursive Realization* digital filter the output depends on present and past values of the input only. In a non-recursive digital filter, only the coefficients  $a_i$  are present, that is,  $b_i = 0$ .

Figure 11.31 shows third-order (3-delay element) recursive and non-recursive realizations.

Generally, IIR filters are implemented by recursive realization, whereas FIR filters are implemented by non-recursive realization.

Filter design methods have been established, and prototype circuits have been published. Thus, we can choose the appropriate prototype to satisfy the requirements. Transformation methods are also available to map an analog prototype to an equivalent digital filter. Three well known methods are the following:

1. The *Impulse Invariant Method* that produces a digital filter whose impulse response consists of the sampled values of the impulse response of an analog filter.
2. The *Step Invariant Method* that produces a digital filter whose step response consists of the sampled values of the step response of an analog filter.
3. The *Bilinear Transformation* that uses the transformation

$$s = \frac{z-1}{z+1} \quad (11.76)$$

or, alternately, the transformation

$$s = \frac{2}{T_s} \cdot \frac{z-1}{z+1} \quad (11.77)$$

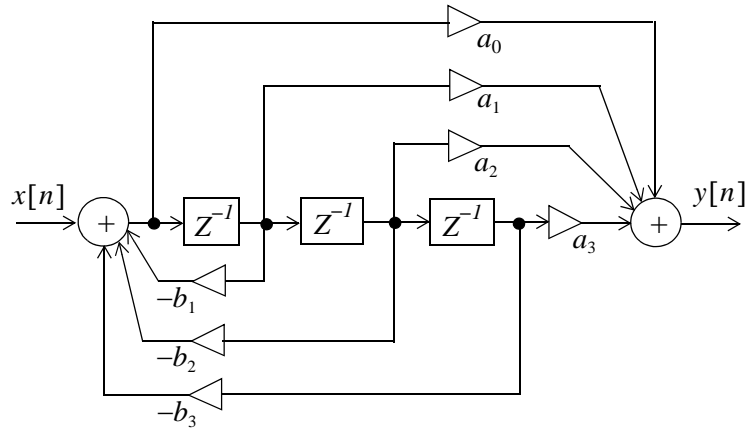
to transform the left-half of the  $s$ -plane into the interior of the unit circle in the  $z$ -plane.

We will discuss only the bilinear transformation.

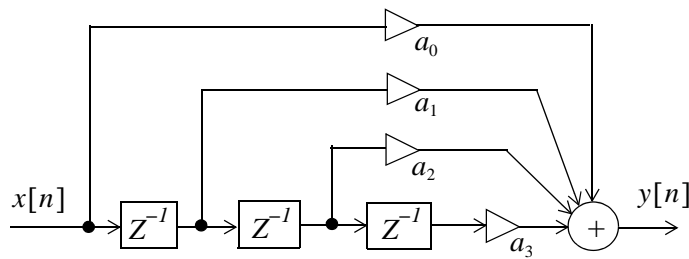
---

\*  $T_s$  is the sampling period, that is, the reciprocal of the sampling frequency  $f_s$

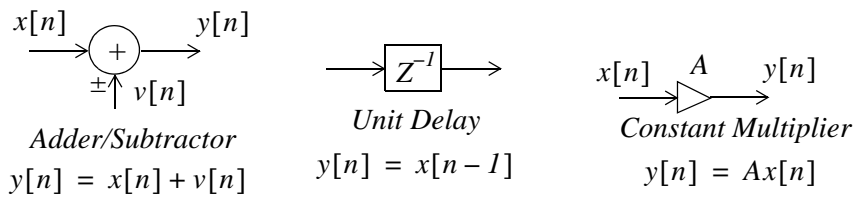




*Recursive Digital Filter Realization*



*Non-Recursive Digital Filter Realization*



*Figure 11.31. Recursive and non-recursive digital filters*

To understand the bilinear transformation, we rewrite (11.76) as

$$z = \frac{1+s}{1-s} \tag{11.78}$$

and by substitution of  $s = \alpha + j\beta$ , we get

$$z = \frac{(1+\alpha) + j\beta}{(1-\alpha) - j\beta} \tag{11.79}$$

for  $\alpha \leq 0$ ,  $|1-\alpha| \geq |1+\alpha|$  and thus  $|z| \leq 1$ .

## Chapter 11 Analog and Digital Filters

In the special case where  $s = j\omega$ , the  $j\omega$  axis of the  $s$ -plane is transformed to the circumference of the unit circle in the  $z$ -plane, as we have seen in Chapter 9, Figure 9.5.

To derive a relationship between the frequencies of the analog and digital filters, we let  $\omega_a$  and  $\omega_d$  denote the analog and digital frequencies respectively. Substitution of  $s = j\omega_a$  and  $z = e^{j\omega_d T_s}$  into (11.76) yields

$$j\omega_a = \frac{e^{j\omega_d T_s} - 1}{e^{j\omega_d T_s} + 1} = \frac{e^{j\omega_d T_s/2}}{e^{j\omega_d T_s/2}} \cdot \frac{e^{j\omega_d T_s/2} - e^{-j\omega_d T_s/2}}{e^{j\omega_d T_s/2} + e^{-j\omega_d T_s/2}} = \frac{2j \sin(\omega_d T_s/2)}{2 \cos(\omega_d T_s/2)}$$

or

$$\boxed{\omega_a = \tan \frac{\omega_d T_s}{2}} \quad (11.80)$$

We see that the analog frequency to digital frequency transformation results in a non-linear mapping; this condition is known as *warping*. For instance, the frequency range  $0 \leq \omega_a \leq \infty$  in the analog frequency is warped into the frequency range  $0 \leq \omega_d \leq \pi/T_s$  in the digital frequency.

Another form of the analog to digital frequency transformation can be derived from the alternate form of the bilinear transformation of (11.77), that is,

$$s = \frac{2}{T_s} \cdot \frac{z-1}{z+1} \quad (11.81)$$

We recall from (9.67) of Chapter 9 that

$$F(z) = G(z) = G(s) \Big|_{s = \frac{1}{T_s} \ln z} \quad (11.82)$$

But the relation  $s = \frac{1}{T_s} \ln z$  is a multi valued transformation and, as such, cannot be used to derive a rational form in  $z$ .

It is shown in complex variables theory that  $\frac{1}{T_s} \ln z$  can be approximated as

$$\frac{1}{T_s} \ln z \approx \frac{2}{T_s} \cdot \frac{z-1}{z+1} \quad (11.83)$$

Then, by substitution into (11.82),

$$G(z) = G\left(\frac{2}{T_s} \cdot \frac{z-1}{z+1}\right) \quad (11.84)$$

and with the substitution  $z = e^{j\omega_d}$ , we get

$$G(e^{j\omega_d}) = G\left(\frac{2}{T_s} \cdot \frac{e^{j\omega_d} - 1}{e^{j\omega_d} + 1}\right) \quad (11.85)$$

Since the  $z \rightarrow s$  transformation maps the unit circle into the  $j\omega$  axis on the  $s$ -plane, the quantity

$\frac{2}{T_s} \cdot \frac{e^{j\omega_d} - 1}{e^{j\omega_d} + 1}$  and  $j\omega$  must be equal to some point  $\omega = \omega_a$  on the  $j\omega$  axis, that is,

$$j\omega_a = \frac{2}{T_s} \cdot \frac{e^{j\omega_d} - 1}{e^{j\omega_d} + 1}$$

or

$$\omega_a = \frac{1}{j} \cdot \frac{2}{T_s} \cdot \frac{e^{j\omega_d} - 1}{e^{j\omega_d} + 1} = \frac{2}{T_s} \cdot \frac{1/(j2)}{1/2} \cdot \frac{e^{j\frac{\omega_d}{2}} - e^{-j\frac{\omega_d}{2}}}{e^{j\frac{\omega_d}{2}} + e^{-j\frac{\omega_d}{2}}} = \frac{2}{T_s} \frac{\sin\frac{\omega_d}{2}}{\cos\frac{\omega_d}{2}}$$

or

$$\boxed{\omega_a = \frac{2}{T_s} \cdot \tan\frac{\omega_d}{2}} \quad (11.86)$$

To express  $\omega_d$  in terms of  $\omega_a$ , we rewrite (11.86) as

$$\tan\frac{\omega_d}{2} = \frac{\omega_a T_s}{2}$$

Then,

$$\omega_d = 2 \tan^{-1} \frac{\omega_a T_s}{2}$$

and for small  $\omega_a T_s/2$ ,

$$\tan^{-1} \frac{\omega_a T_s}{2} \approx \frac{\omega_a T_s}{2}$$

Therefore,

$$\omega_d \approx 2 \frac{\omega_a T_s}{2} \approx \omega_a T_s \quad (11.87)$$

In MATLAB  $z$  is a function of normalized frequency and thus the range of frequencies in  $G(z)$  is from  $0$  to  $\pi$ . Then (11.87), when used with MATLAB, becomes

$$\boxed{\omega_d \approx \frac{\omega_a T_s}{\pi}} \quad (11.88)$$

The effect of warping can be eliminated by *pre-warping* the analog filter prior to application of the bilinear transformation. This is accomplished by the use of (11.80) or (11.86).

**Example 11.21**

Compute the transfer function  $G(z)$  of a low-pass digital filter with  $3 \text{ dB}$  cutoff frequency at  $20 \text{ Hz}$ , and attenuation of at least  $10 \text{ dB}$  for frequencies greater than  $40 \text{ Hz}$ . The sampling frequency  $f_s$  is  $200 \text{ Hz}$ .

**Solution:**

We will apply the bilinear transformation and, arbitrarily we choose a second order Butterworth low-pass filter which, as we see from the curves of Figure 11.12, meets the stop-band specification.

The transfer function  $G(s)$  of the analog low-pass filter with normalized frequency at  $\omega_c = 1 \text{ rad/s}$  is found with the MATLAB **buttap** function as follows:

```
[z,p,k]=buttap(2); [b,a] = zp2tf(z,p,k)
```

```
b =  
    0    0    1  
a =  
  1.0000    1.4142    1.0000
```

Thus, the transfer function with normalized frequency, denoted as  $G_n(s)$  is

$$G_n(s) = \frac{1}{s^2 + 1.414s + 1} \quad (11.89)$$

Now, we must transform this transfer function to another with the actual cutoff frequency at  $20 \text{ Hz}$ . We denote it as  $G_a(s)$ .

We will first pre-warp the analog frequency which, by (11.80), is related to the digital frequency as

$$\omega_a = \tan \frac{\omega_d T_s}{2}$$

where

$$T_s = \frac{1}{f_s} = \frac{1}{200}$$

Denoting the analog cutoff ( $3 \text{ dB}$ ) frequency as  $\omega_{ac}$ , and the attenuation frequency as  $\omega_{aa}$ , we get

$$\omega_{ac} = \tan \frac{2\pi \times 20}{2 \times 200} = \tan 0.3142 = 0.325 \quad (11.90)$$

and

$$\omega_{aa} = \tan \frac{2\pi \times 40}{2 \times 200} = \tan 0.6283 = 0.7265 \quad (11.91)$$

Next, to find  $G_a(s)$  from  $G_n(s)$ , we replace  $s$  with  $s/0.325$  in (11.89) and we get

$$G_a(s) = \frac{1}{(s/0.325)^2 + (1.414s)/0.325 + 1}$$

We will use MATLAB to simplify this expression.

```
syms s; simple(1/((s/0.325)^2+1.414*s/0.325+1))
```

```
1 / (1600/169*s^2+1414/325*s+1)
```

```
1600/169
```

```
ans =
```

```
9.4675
```

```
1414/325
```

```
ans =
```

```
4.3508
```

Then,

$$G_a(s) = \frac{1}{9.4675s^2 + 4.3508s + 1} = \frac{0.1056}{s^2 + 0.4596s + 0.1056} \quad (11.92)$$

and making the substitution of  $s = \frac{z-1}{z+1}$ , we get

$$G(z) = \frac{0.1056}{\left(\frac{z-1}{z+1}\right)^2 + \frac{0.4596(z-1)}{(z+1)} + 0.1056}$$

We use MATLAB to simplify this expression.

```
syms z; simple(0.1056/(((z-1)/(z+1))^2+0.4596*(z-1)/(z+1)+0.1056))
```

```
ans =
```

```
264*(z+1)^2 / (3913*z^2-4472*z+1615)
```

```
expand(264*(z+1)^2)
```

---

## Chapter 11 Analog and Digital Filters

---

ans =  
264\*z^2+528\*z+264

and thus

$$G(z) = \frac{264z^2 + 528z + 264}{3913z^2 - 4472z + 1615} \quad (11.93)$$

We will use the MATLAB **freqz** function to plot the magnitude of  $G(z)$ , but we must first express it in negative powers of  $z$ . Dividing each term of (11.93) by  $3913z^2$  we get

$$G(z) = \frac{0.0675 + 0.1349z^{-1} + 0.0675z^{-2}}{1 - 1.1429z^{-1} + 0.4127z^{-2}} \quad (11.94)$$

The MATLAB code below will generate  $G(z)$  and will plot the magnitude of this transfer function.

```
bz=[0.0675 0.1349 0.0675]; az=[1 -1.1429 0.4127]; [Gz, wT]=freqz(bz,az,20,200);...  
semilogx(wT,abs(Gz)), axis([0.1 1000 0 1]), hold on;...  
title('Digital Low-Pass Filter'), xlabel('Frequency in Hz'), ylabel('Magnitude'),grid
```

The magnitude is shown on the plot of Figure 11.32.

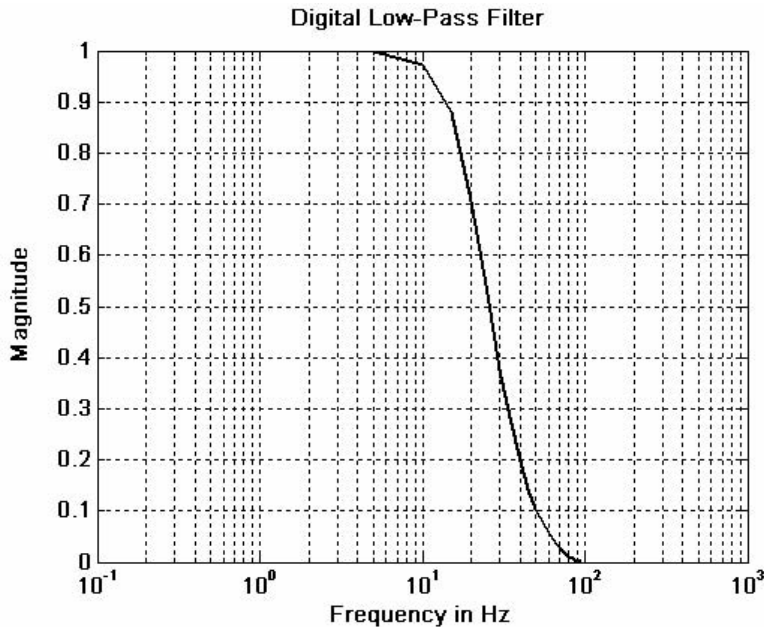


Figure 11.32. Frequency response for the digital low-pass filter of Example 11.21

Let us now plot the analog equivalent to compare the digital to the analog frequency response. The MATLAB code below produces the desired plot.

```
[z,p,k]=buttap(2); [b,a]=zp2tf(z,p,k); w=0:0.05*2*pi:100*2*pi; f=w/(2*pi);...
fc=20; wc=2*pi*fc; [bn,an]=lp2lp(b,a,wc); Gs=freqs(bn,an,w);...
semilogx(f,abs(Gs)), axis([0.1 1000 0 1]), hold on, title('Analog Low-Pass Filter'),...
xlabel('Frequency in Hz'), ylabel('Magnitude'), grid
```

The frequency response for the analog low-pass equivalent is shown in Figure 11.33.

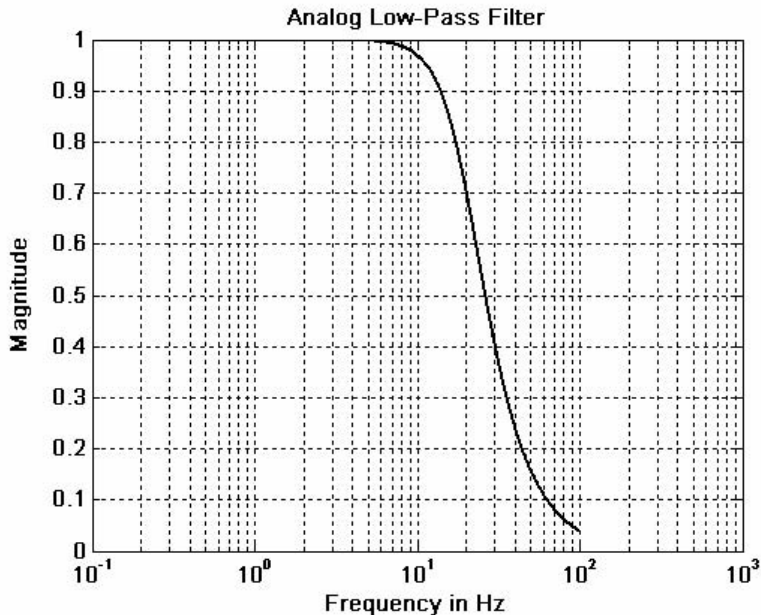


Figure 11.33. Frequency response for analog low-pass filter equivalent

Comparing the digital filter plot with the analog, we see that they are almost identical. Also, from both plots, we see that the amplitude is greater than  $0.707$  ( $-3$  dB) for frequencies less than  $20$  Hz, and is smaller than  $0.316$  ( $-10$  dB) for frequencies larger than  $40$  Hz. Therefore, the filter meets the required specifications.

An analog filter transfer function can be mapped to a digital filter transfer function directly with the MATLAB **bilinear** function. The procedure is illustrated with the following example.

### Example 11.22

Use the MATLAB **bilinear** function to derive the low-pass digital filter transfer function  $G(z)$  from a second-order Butterworth analog filter with a  $3$  dB cutoff frequency at  $50$  Hz, and sampling rate  $f_s = 500$  Hz.

#### Solution:

We will use the following MATLAB code to produce the desired digital filter transfer function.

---

## Chapter 11 Analog and Digital Filters

---

```
[z,p,k]=buttap(2); [num,den]=zp2tf(z,p,k); wc=2*pi*50;...  
[num1,den1]=lp2lp(num,den,wc); T=1/500; [numd,dend]=bilinear(num1,den1,1/T)
```

```
numd =  
    0.0640    0.1279    0.0640  
dend =  
    1.0000   -1.1683    0.4241
```

Therefore, the transfer function  $G(z)$  for this filter is

$$G(z) = \frac{0.0640z^2 + 0.1279z + 0.0640}{z^2 - 1.1683z + 0.4241} \quad (11.95)$$

MATLAB provides us with all the functions that we need to design digital filters using analog prototypes. These are listed below with the indicated notations.

**N** = order of the filter

**Wn** = normalized cutoff frequency

**Rp** = pass band ripple

**Rs** = stop band ripple

**B** = **B(z)**, i.e., the numerator of the discrete transfer function  $G(z) = B(z)/A(z)$

**A** = **A(z)**, i.e., the denominator of the discrete transfer function  $G(z)$

### For Low-Pass Filters

```
[B,A] = butter(N,Wn)
```

```
[B,A] = cheb1(N,Rp,Wn)
```

```
[B,A] = cheb2(N,Rs,Wn)
```

```
[B,A] = ellip(N,Rp,Rs,Wn)
```

### For High-Pass Filters

```
[B,A] = butter(N,Wn,'high')
```

```
[B,A] = cheb1(N,Rp,Wn,'high')
```

```
[B,A] = cheb2(N,Rs,Wn,'high')
```

```
[B,A] = ellip(N,Rp,Rs,Wn,'high')
```

### Band-Pass Filters

```
[B,A] = butter(N,[Wn1,Wn2])
```

```
[B,A] = cheb1(N,Rp,[Wn1,Wn2])
```

```
[B,A] = cheb2(N,Rs,[Wn1,Wn2])
```

```
[B,A] = ellip(N,Rp,Rs,[Wn1,Wn2])
```

### Band-Elimination Filters

```
[B,A] = butter(N,[Wn1,Wn2],'stop')
```

```
[B,A] = cheb1(N,Rp,[Wn1,Wn2],'stop')
```

```
[B,A] = cheb2(N,Rs,[Wn1,Wn2],'stop')
```

```
[B,A] = ellip(N,Rp,Rs,[Wn1,Wn2],'stop')
```



**Example 11.23**

The transfer functions of (11.96) through (11.99) below, describe different types of digital filters. Use the MATLAB `freqz` command to plot the magnitude versus radian frequency.

$$G_1(z) = \frac{(2.8982 + 8.6946z^{-1} + 8.6946z^{-2} + 2.8982z^{-3}) \cdot 10^{-3}}{1 - 2.3741z^{-1} + 1.9294z^{-2} - 0.5321z^{-3}} \quad (11.96)$$

$$G_2(z) = \frac{0.5276 - 1.5828z^{-1} + 1.5828z^{-2} - 0.5276z^{-3}}{1 - 1.7600z^{-1} + 1.1829z^{-2} - 0.2781z^{-3}} \quad (11.97)$$

$$G_3(z) = \frac{(6.8482 - 13.6964z^{-2} + 6.8482z^{-4}) \cdot 10^{-4}}{1 + 3.2033z^{-1} + 4.5244z^{-2} + 3.1390z^{-3} + 0.9603z^{-4}} \quad (11.98)$$

$$G_4(z) = \frac{0.9270 - 1.2079z^{-1} + 0.9270z^{-2}}{1 - 1.2079z^{-1} + 0.8541z^{-2}} \quad (11.99)$$

**Solution:**

The MATLAB code to compute and plot each of the transfer functions of (11.96) through (11.99), is given below.

```
% N=512 % Default
b1=[2.8982 8.6946 8.6946 2.8982]*10^(-3); a1=[1 -2.3741 1.9294 -0.5321];...
[G1z,w1T]=freqz(b1,a1);
%
b2=[0.5276 -1.5828 1.5828 -0.5276]; a2=[1 -1.7600 1.1829 -0.2781];...
[G2z,w2T]=freqz(b2,a2);
%
b3=[6.8482 0 -13.6964 0 6.8482]*10^(-4); a3=[1 3.2033 4.5244 3.1390 0.9603];...
[G3z,w3T]=freqz(b3,a3);
%
b4=[0.9270 -1.2079 0.9270]; a4=[1 -1.2079 0.8541];...
[G4z,w4T]=freqz(b4,a4);
clf; % clear current figure
%
subplot(221), semilogx(w1T,abs(G1z)), axis([0.1 1 0 1]), title('Filter for G1(z)')
xlabel(''),ylabel('Magnitude'),grid;
%
subplot(222), semilogx(w2T,abs(G2z)), axis([0.1 10 0 1]), title('Filter for G2(z)')
xlabel(''),ylabel('Magnitude'),grid;
%
subplot(223), semilogx(w3T,abs(G3z)), axis([1 10 0 1]), title('Filter for G3(z)')
xlabel(''),ylabel('Magnitude'),grid;
%
```

---

## Chapter 11 Analog and Digital Filters

---

```
subplot(224), semilogx(w4T,abs(G4z)), axis([0.1 10 0 1]), title('Filter for G4(z)')  
xlabel(''),ylabel('Magnitude'),grid;
```

The plots are shown in Figure 11.34. We see that the given transfer functions are for low-pass, high-pass, band-pass, and band-stop digital filters.

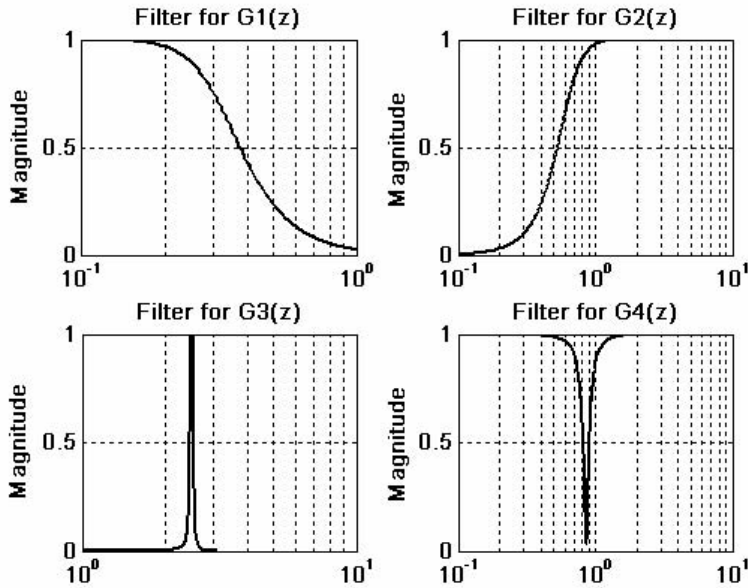


Figure 11.34. Plot for the transfer functions of Example 11.23

### Example 11.24

We are given a  $165 \text{ KHz}$  total bandwidth, and within this bandwidth we must accommodate four different signals. Each of these signals requires  $25 \text{ KHz}$  bandwidth. We are asked to define the types of filters and cutoff frequencies to avoid interference among these signals.

#### Solution:

We will use Butterworth filters up to order  $12$  to obtain sharp cutoffs, and the following types and bandwidths for each.

1. Low-pass filter with bandwidth  $0$  to  $25 \text{ KHz}$ , ( $3 \text{ dB}$  cutoff at  $25 \text{ KHz}$ )
2. Band-pass filter with bandwidth from  $40 \text{ KHz}$  to  $65 \text{ KHz}$
3. High-pass filter with  $3 \text{ dB}$  frequency at  $90 \text{ KHz}$
4. Band-elimination filter with stop-band from  $115 \text{ KHz}$  to  $140 \text{ KHz}$

The highest (Nyquist) frequency is  $165 \text{ kHz}$  so we choose a sampling frequency of  $330 \text{ kHz}$ .

The MATLAB **freqz** function in the code below normalizes the frequencies from  $0$  to  $\pi$  where  $\pi = \text{Nyquist frequency}$ .

```

% N=512      % Default
fs=330000   % Chosen sampling frequency
Ts=1/fs;    % Sampling period
fn=fs/2;    % Nyquist frequency
%
f1=25000/fn % Low-pass filter cutoff frequency (Signal 1 End)
f2=40000/fn % Band-pass left cutoff frequency (Signal 2 Start)
f3=65000/fn % Band-pass right cutoff frequency (Signal 2 End)
f4=90000/fn % High-pass filter cutoff frequency (Signal 3 Start)
f5=115000/fn % Band-stop filter left cutoff frequency (Signal 3 End)
f6=140000/fn % Band-stop filter right cutoff frequency (Signal 4 Start)
% Signal 4 will terminate at 165 kHz
[b1,a1]=butter(12,f1);
[b2,a2]=butter(12,[f2,f3]);
[b3,a3]=butter(12,f4,'high');
[b4,a4]=butter(12,[f5,f6],'stop');
%
[G1z,wT]=freqz(b1,a1);
[G2z,wT]=freqz(b2,a2);
[G3z,wT]=freqz(b3,a3);
[G4z,wT]=freqz(b4,a4);
%
Hz=wT/(2*pi*Ts);
%
clf; % clear current figure
%
plot(Hz,abs(G1z),Hz,abs(G2z),Hz,abs(G3z),Hz,abs(G4z)), axis([0 16*10^4 0 1])
title('Four signals separated by four digital filters');
xlabel('Hz'),ylabel('Magnitude'),grid;

```

The plot of Figure 11.35 shows the frequency separations for these four signals.

In the following example, we will demonstrate the MATLAB **filter** function that is being used to remove unwanted frequency components from a function. But before we use the **filter** function, we must design a filter that is capable of removing those unwanted components.

### Example 11.25

In Chapter 7, Example 7.6, we found that the half-wave rectifier can be represented by the trigonometric series

$$f(t) = \frac{A}{\pi} + \frac{A}{2} \sin t - \frac{A}{\pi} \left[ \frac{\cos 2t}{3} + \frac{\cos 4t}{15} + \frac{\cos 6t}{35} + \frac{\cos 8t}{63} + \dots \right]$$

In this example, we want to filter out just the first 2 terms, or, in other words, to remove all cosine terms. To simplify this expression, we let  $A = 3\pi$  and we truncate it by eliminating all terms beyond the third. Then,

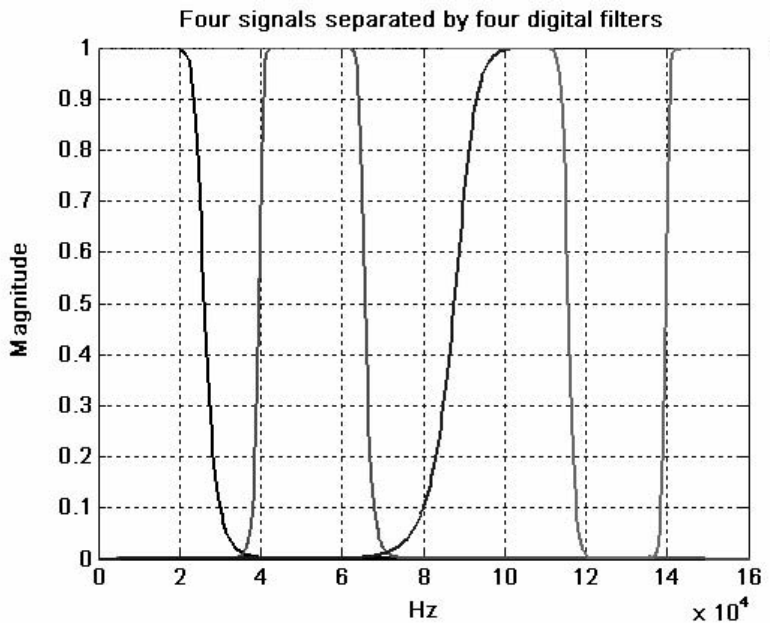


Figure 11.35. Frequency separations for the signals of Example 11.24

$$g(t) = 3 + 1.5 \sin t - \cos 2t \quad (11.100)$$

The problem now reduces to design a low-pass digital filter, and use the **filter** command to remove the cosine term in (11.100).

**Solution:**

We will use a *6-pole* digital low-pass Butterworth filter because we must have a sharp transition between the *1* and *2 rad/s* frequency range. Also, since the highest frequency component is *2 rad/s*, we must specify a sampling frequency of  $\omega_s = 4 \text{ rad/s}$  to avoid aliasing. Thus, the sampling frequency must be  $f_s = \omega_s / 2\pi = 2/\pi$  and the sampling period will be  $T_s = 1/f_s = \pi/2$ . We choose  $T = 0.5$ ; this is sufficiently small. Also, we choose the cutoff frequency of the filter to be  $\omega_C = 1.5 \text{ rad/s}$  in order to attenuate the cosine terms.

The MATLAB code below will perform the following steps:

1. Compute coefficients of the numerator and denominator of the transfer function with normalized cutoff frequency.
2. Will recompute the coefficients for the desired frequency.
3. Use the **bilinear** function to map the analog transfer function to a digital transfer function, and will plot the frequency response of the digital filter.
4. Will recompute the digital filter transfer function to account for the warping effect.

5. Will use the **filter** function to remove the cosine terms

```
% Step 1
%
[z,p,k]=buttap(6);
[b,a]=zp2tf(z,p,k);
%
% Step 2
%
wc=1.5; % Chosen cutoff frequency
[b1,a1]=lp2lp(b,a,wc); % Convert to actual cutoff frequency
%
% Step 3
%
T=0.5; % Define sampling period
[Nz,Dz]=bilinear(b1,a1,1/T); % Map to digital filter using the bilinear transformation
w=0:2*pi/300:pi; % Define range for plot
Gz=freqz(Nz,Dz,w); % The digital filter transfer function
%
clf
%
semilogx(w,abs(Gz)); grid; hold on
% We must remember that when z is used as a function of
% normalized frequency, the range of frequencies of G(z) are
% from zero to pi and the normalized cutoff frequency on the
% plot is wc*T=1.5*0.5=0.75 r/s.
%
xlabel('Radian Frequency w in rads/sec'),...
ylabel('Magnitude of G(z)'),...
title('Digital Filter Response in Normalized Frequency')
%
fprintf('Press any key to continue \n');
%
pause;
%
% Step 4
%
p=6; T=0.5; % Number of poles and Sampling period
wc=1.5; % Analog cutoff frequency in rad/sec
wd=wc*T/pi; % Normalized digital filter cutoff frequency by (11.81)
[Nzp,Dzp]=butter(p,wd);
fprintf('Summary: \n\n');
fprintf('WITHOUT PREWARPING: \n\n');
%
fprintf('The num N(z) coefficients in descending order of z are: \n\n');
```

---

## Chapter 11 Analog and Digital Filters

---

```
fprintf('%8.4f \t',[Nz]);
fprintf('\n\n');
fprintf('The den D(z) coefficients in descending order of z are: \n\n');
fprintf('%8.4f \t',[Dz]);
fprintf('\n\n');
fprintf('WITH PREWARPING: \n\n');
%
fprintf('The num N(z) coefficients in descending order of z are: \n\n');
fprintf('%8.4f \t',[Nzp]);
fprintf('\n\n');
fprintf('The den D(z) coefficients in descending order of z are: \n\n');
fprintf('%8.4f \t',[Dzp]);
fprintf('\n\n');
```

The plot of the low-pass filter that will remove the cosine terms is shown in Figure 11.36.

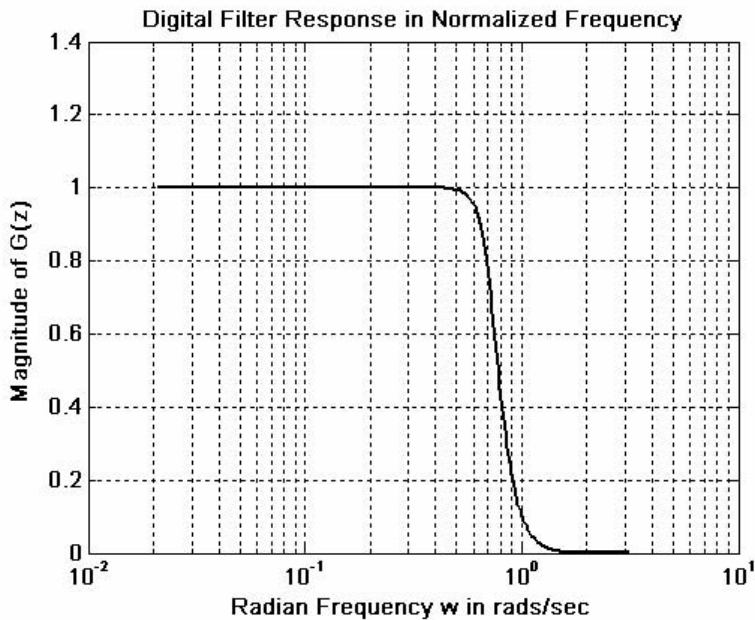


Figure 11.36. Plot of the low-pass filter of Example 11.23

Therefore,

WITHOUT PREWARPING:

The num N(z) coefficients in descending order of z are:

0.0007 0.0040 0.0100 0.0134 0.0100 0.0040 0.0007

The den D(z) coefficients in descending order of z are:

1.0000 -3.2379 4.7566 -3.9273 1.8999 -0.5064 0.0578

WITH PREWARPING:

The num  $N(z)$  coefficients in descending order of  $z$  are:

0.0008    0.0050    0.0125    0.0167    0.0125    0.0050    0.0008

The den  $D(z)$  coefficients in descending order of  $z$  are:

1.0000    -3.1138    4.4528    -3.5957    1.7075

```
%
% Step 5
%
Nzp=[0.0008 0.0050 0.0125 0.0167 0.0125 0.0050 0.0008];
Dzp=[1.0000 -3.1138 4.4528 -3.5957 1.7075 -0.4479 0.0504];
n=0:150;
T=0.5;
gt=3+1.5*sin(n*T)-cos(2*n*T);
yt=filter(Nzp,Dzp,gt);
%
% We will plot the unfiltered analog signal gta
%
t=0:0.1:12;
gta=3+1.5*sin(t)-cos(2*t);
subplot(211), plot(t,gta), axis([0,12, 0, 6]); hold on
xlabel('Continuous Time t'); ylabel('Function g(t)');
%
% We will plot the filtered analog signal y(t)
%
subplot(212), plot(n*T,yt), axis([0,12, 0, 6]); hold on
xlabel('Continuous Time t'); ylabel('Filtered Output y(t)');
%
fprintf('Press any key to continue \n'); pause;
%
% We will plot the unfiltered discrete time signal g(n*T)
%
subplot(211), stem(n*T,gt), axis([0,12, 0, 6]); hold on
xlabel('Discrete Time nT'); ylabel('Discrete Function g(n*T)');
%
% We will plot the filtered discrete time signal y(n*T)
subplot(212), stem(n*T,yt), axis([0,12, 0, 6]); hold on
xlabel('Discrete Time nT'); ylabel('Filtered Output y(n*T)');
```

The analog and digital inputs and outputs are shown in Figure 11.37.

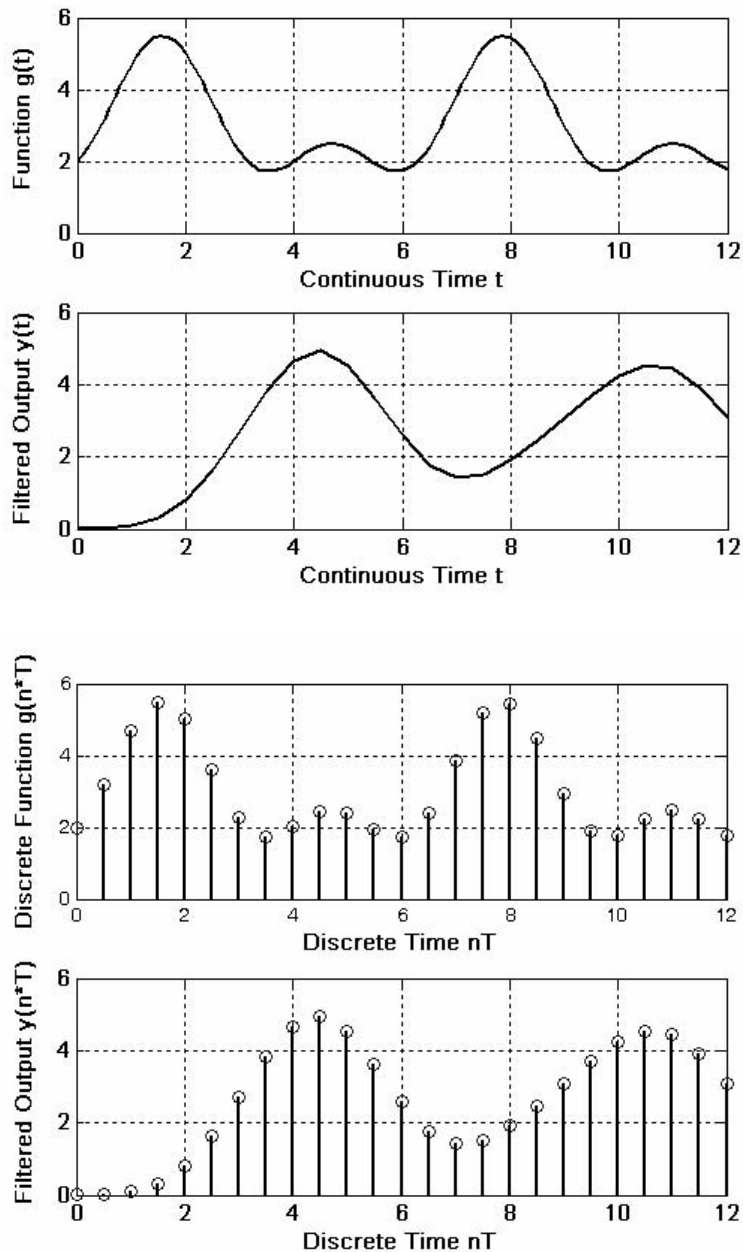


Figure 11.37. Input and output waveforms for Example 11.23

We will conclude this chapter with one more example to illustrate the use of the MATLAB **find** function. This function displays the subscripts of an array of numbers where a relational expression is true. For example,

```
x=-2:5; % Display the integers in the range -2 <= x <= 5
```



```

x =
    -2     -1     0     1     2     3     4     5
k=find(x>0.8); % Find the subscripts of the numbers for which x > 0.8
k =
     4     5     6     7     8
y=x(k); % Create a new array y using the indices in k
y =
     1     2     3     4     5

```

### Example 11.26

Given the function  $f(t) = 5\sin 2t - 10\cos 5t$ , use the MATLAB **randn** function to add random (Gaussian) noise to  $f(t)$  and plot this signal plus noise waveform which we denote as

$$x(t) = f(t) + \text{randn}(N) = 5\sin 2t - 10\cos 5t + \text{randn}(\text{size}(t)) \quad (11.101)$$

where  $0 \leq t \leq 512$ . Next, use the **fft** function to compute the frequency components of the 512-point FFT and plot the spectrum of this noisy signal. Finally, use the **find** function to restrict the frequency range of the spectrum identify the frequency components of the signal  $f(t)$ .

#### Solution:

The MATLAB code is shown below.

```

t=linspace(0, 10, 512); x=10*sin(2*t)-5*cos(5*t)+15*randn(size(t));
% We plot the signal to see what it looks like
%
subplot(221); plot(t,x),title('x(t)=Signal plus Noise')
%
% The input signal x is shown in the upper left corner of the graph
%
% Next, we will compute the frequency domain of the signal x
%
X=fft(x);
%
% The sampling period of x is found by the time difference of two samples
%
Ts=t(2)-t(1);
%
% and the sampling frequency is
%
Ws=2*pi/Ts;
%

```

---

## Chapter 11 Analog and Digital Filters

---

```
% As we know, the Nyquist frequency Wn is half the sampling frequency
%
Wn=Ws/2;
%
% Now, we will define the frequency domain axis
%
w=linspace(0,Wn,length(t)/2);
%
% The magnitude of the positive frequency components Xp are found from:
%
Xp=abs(X(1:length(t)/2));
% We want now to plot Xp versus radian frequency w
%
subplot(222); plot(w,Xp),title('Spectrum of Signal & Noise in Wide Range')
%
% We will select the frequencies of interest with the "find" function:
%
k=find(w<=20);
%
% Now we will plot this restricted range
%
subplot(212); plot(w(k), Xp(k)),title('Spectrum of Signal & Noise in Narrow Range')
%
% The last plot will have grid, labels and title
%
grid; xlabel('Frequency, rads/sec'); ylabel('Frequency Components');
title('Spectrum of Signal & Noise in Narrow Range')
```

The signal is shown in Figure 11.38.

We observe the appearance of the sinusoids at 2 and 5 *rad/s* in the lower plot. They were undistinguished in the time-domain of the upper left plot. The upper right plot indicates that the signal  $f(t)$  has frequency components in the lower range of frequencies, but these cannot be identified precisely.

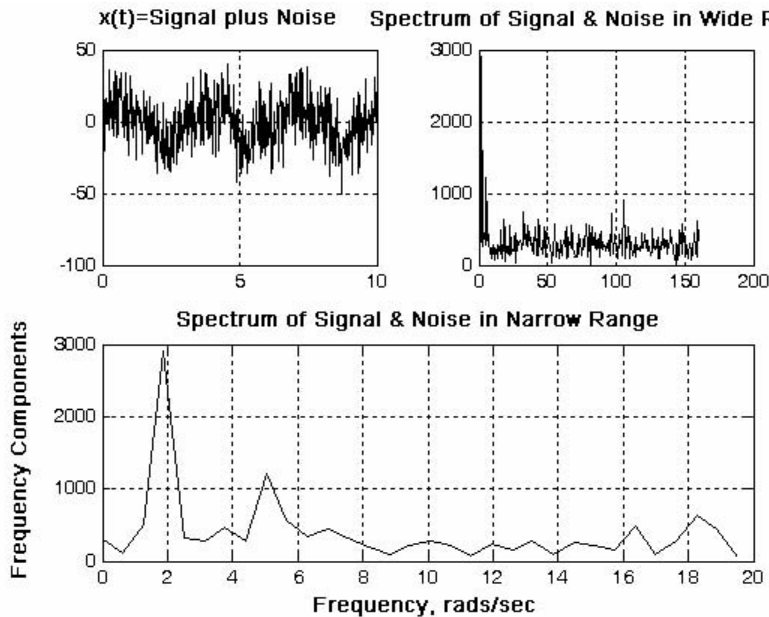


Figure 11.38. Waveforms for Example 11.26

## 11.9 Summary

- Analog filters are defined over a continuous range of frequencies. They are classified as low-pass, high-pass, band-pass and band-elimination (stop-band).
- An all-pass or phase shift filter has a constant amplitude response but its phase varies with frequency.
- A digital filter, in general, is a computational process, or algorithm that converts one sequence of numbers representing the input signal into another sequence representing the output signal.
- A digital filter, besides filtering out unwanted bands of frequency, can perform functions of differentiation, integration, and estimation.
- Analog filter functions have been used extensively as prototype models for designing digital filters.
- An analog filter can also be classified as passive or active. Passive filters consist of passive devices such as resistors, capacitors and inductors. Active filters are, generally, operational amplifiers with resistors and capacitors connected to them externally.
- If two frequencies  $\omega_1$  and  $\omega_2$  are such that  $\omega_2 = 2\omega_1$ , we say that these frequencies are separated by one octave, and if  $\omega_2 = 10\omega_1$ , they are separated by one decade.
- The analog low-pass filter is used as a basis. Using transformations, we can derive high-pass and the other types of filters from a basic low-pass filter.

---

## Chapter 11 Analog and Digital Filters

---

- In this chapter we discussed the Butterworth, Chebyshev Type I & II, and Cauer (elliptic) filters.
- The first step in the design of an analog low-pass filter is to find a suitable *amplitude-squared function*  $A^2(\omega)$ , and from it derive a  $G(s)$  function such that

$$A^2(\omega) = G(s) \cdot G(-s)|_{s=j\omega}$$

- The general form of the amplitude square function  $A^2(\omega)$  is

$$A^2(\omega) = \frac{C(b_k\omega^{2k} + b_{k-1}\omega^{2k-2} + \dots + b_0)}{a_k\omega^{2k} + a_{k-1}\omega^{2k-2} + \dots + a_0}$$

where  $C$  is the DC gain,  $a$  and  $b$  are constant coefficients, and  $k$  is a positive integer denoting the order of the filter.

- The amplitude-squared function of a Butterworth analog low-pass filter is

$$A^2(\omega) = \frac{1}{(\omega/\omega_c)^{2k} + 1}$$

where  $k$  is a positive integer indicating the order of the filter, and  $\omega_c$  is the cutoff ( $3 \text{ dB}$ ) frequency.

- All Butterworth filters have the property that all poles of the transfer functions that describes them, lie on a circumference of a circle of radius  $\omega_c$ , and they are  $2\pi/2k$  radians apart. Thus, if  $k = \text{odd}$ , the poles start at zero radians, and if  $k = \text{even}$ , they start at  $2\pi/2k$ . But regardless whether  $k$  is odd or even, the poles are distributed in symmetry with respect to the  $j\omega$  axis. For stability, we choose the poles of the left half of the  $s$ -plane to form  $G(s)$ .
- The general form of any analog low-pass (Butterworth, Chebyshev, Elliptic, etc.) filter is

$$G(s)|_{lp} = \frac{b_0}{a_k s^k + \dots + a_2 s^2 + a_1 s + a_0}$$

- The MATLAB **buttap** and **zp2tf** functions are very useful functions in the design of Butterworth filters. The first returns the zeros, poles, and gain for an  $N$ -th order normalized prototype Butterworth analog low-pass filter. The resulting filter has  $N$  poles around the unit circle in the left half plane, and no zeros. The second performs the zero-pole to transfer function conversion.
- The Type I Chebyshev filters are based on approximations derived from the Chebyshev polynomials  $C_k(x)$  that constitute a set of orthogonal functions. The coefficients of these polynomials are tabulated in math tables.
- We can use the MATLAB **cheb1ap** function to design a Type I Chebyshev analog low-pass filter. Thus, the **[z,p,k] = cheb1ap(N,Rp)** statement where **N** denotes the order of the filter, returns

the zeros, poles, and gain of an  $N$ -th order normalized prototype Type I Chebyshev analog low-pass filter with ripple **Rp** decibels in the pass band.

- The Inverted Chebyshev, also known as Type II Chebyshev, is characterized by the following amplitude-square approximation.

$$A^2(\omega) = \frac{\varepsilon^2 C_k^2(\omega_C/\omega)}{1 + \varepsilon^2 C_k^2(\omega_C/\omega)}$$

and has the ripple in the stop-band as opposed to Type I which has the ripple in the pass-band. The frequency  $\omega_C$  defines the beginning of the stop band.

- The elliptic (Cauer) filters are characterized by the low-pass amplitude-squared function

$$A^2(\omega) = \frac{1}{1 + R_k^2(\omega/\omega_C)}$$

where  $R_k(x)$  represents a rational elliptic function used with elliptic integrals. Elliptic filters have ripple in both the pass-band and the stop-band.

- We can design elliptic low-pass filters with the MATLAB **ellip** function. The statement **[b,a] = ellip(N,Rp,Rs,Wn,'s')** where **N** is the order of the filter, designs an  $N$ -th order low-pass filter with ripple **Rp** decibels in the pass band, a stop band with ripple **Rs** decibels, **Wn** is the cutoff frequency, and **'s'** is used to specify analog elliptic filters. If **'s'** is not included in the above statement, MATLAB designs a digital filter.
- Transformation methods have been developed where a low-pass filter can be converted to another type of filter simply by transforming the complex variable  $s$ . These transformations are listed in Table 11.5 where  $\omega_C$  is the cutoff frequency of a low-pass filter.
- We can use the MATLAB **lp2lp**, **lp2hp**, **lp2bp**, and **lp2bs** functions to transform a low pass filter with normalized cutoff frequency, to another low-pass filter with any other specified frequency, or to a high-pass filter, or to a band-pass filter, or to a band elimination filter respectively
- We can use the MATLAB function **bode(num,den)** to generate both the magnitude and phase responses of any transfer function describing the filter type.
- Digital filters are classified in terms of the duration of the impulse response, and in forms of realization.
- An Infinite Impulse Response (IIR) digital filter has infinite number of samples in its impulse response  $h[n]$
- A Finite Impulse Response (FIR) digital filter has a finite number of samples in its impulse response  $h[n]$

---

## Chapter 11 Analog and Digital Filters

---

- In a Recursive Realization digital filter the output is dependent on the input and the previous values of the output. In a recursive digital filter, both the coefficients  $a_i$  and  $b_i$  are present.
- In a Non-Recursive Realization digital filter the output depends on present and past values of the input only. In a non-recursive digital filter, only the coefficients  $a_i$  are present, that is,  $b_i = 0$ .
- Generally, IIR filters are implemented by recursive realization, whereas FIR filters are implemented by non-recursive realization.
- Transformation methods are also available to map an analog prototype to an equivalent digital filter. Three well known methods are the following:
  1. The Impulse Invariant Method that produces a digital filter whose impulse response consists of the sampled values of the impulse response of an analog filter.
  2. The Step Invariant Method that produces a digital filter whose step response consists of the sampled values of the step response of an analog filter.
  3. The Bilinear Transformation that uses the transformation

$$s = \frac{z-1}{z+1}$$

or, alternately, the transformation

$$s = \frac{2}{T_s} \cdot \frac{z-1}{z+1}$$

- The analog frequency to digital frequency transformation results in a non-linear mapping; this condition is known as warping.
- The effect of warping can be eliminated by pre-warping the analog filter prior to application of the bilinear transformation.
- We can use the MATLAB **freqz(b,a,N)** function to plot the magnitude of  $G(z)$
- An analog filter transfer function can be mapped to a digital filter transfer function directly with the MATLAB **bilinear(b,a,Fs)** function.
- The MATLAB **filter(b,a,X)** function can be used to remove unwanted frequency components from a function.
- We can use the MATLAB **find(X)** function to restrict the frequency range of the spectrum in order to identify the frequency components of the signal  $f(t)$ .

## 11.10 Exercises

1. The circuit of Figure 11.39 is a VCVS second-order high-pass filter whose transfer function is

$$G(s) = \frac{V_{out}(s)}{V_{in}(s)} = \frac{Ks^2}{s^2 + (a/b)\omega_c s + (1/b)\omega_c^2}$$

and for given values of  $a$ ,  $b$ , and desired cutoff frequency  $\omega_c$ , we can calculate the values of  $C_1$ ,  $C_2$ ,  $R_1$ ,  $R_2$ ,  $R_3$ , and  $R_4$  to achieve the desired cutoff frequency  $\omega_c$ .

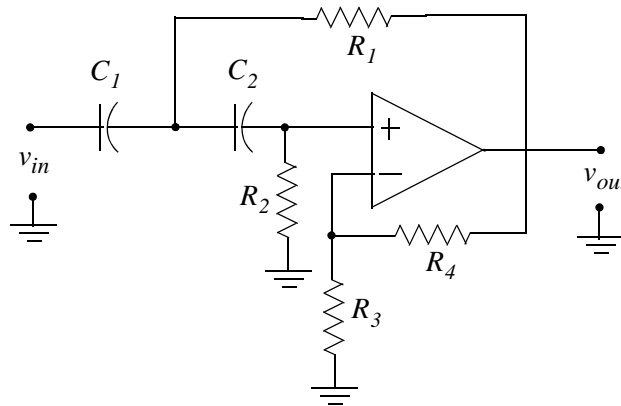


Figure 11.39. Circuit for Exercise 1

For this circuit,

$$R_2 = \frac{4b}{C_1 \left\{ a + [\sqrt{a^2 + 8b(K-1)}] \right\} \omega_c}$$

$$R_1 = \frac{b}{C_1^2 R_2 \omega_c^2}$$

$$R_3 = \frac{KR_2}{K-1}, \quad K \neq 1$$

$$R_4 = KR_2$$

and the gain  $K$  is

$$K = 1 + R_4/R_3$$

Using these relations, compute the appropriate values of the resistors to achieve the cutoff frequency  $f_c = 1 \text{ KHz}$ . Choose the capacitors as  $C_1 = 10/f_c \mu\text{F}$  and  $C_2 = C_1$ . Plot  $|G(s)|$  versus frequency.

Solution using MATLAB is highly recommended.

2. The circuit of Figure 11.40 is a VCVS second-order band-pass filter whose transfer function is

$$G(s) = \frac{V_{out}(s)}{V_{in}(s)} = \frac{K[BW]s}{s^2 + [BW]s + \omega_0^2}$$

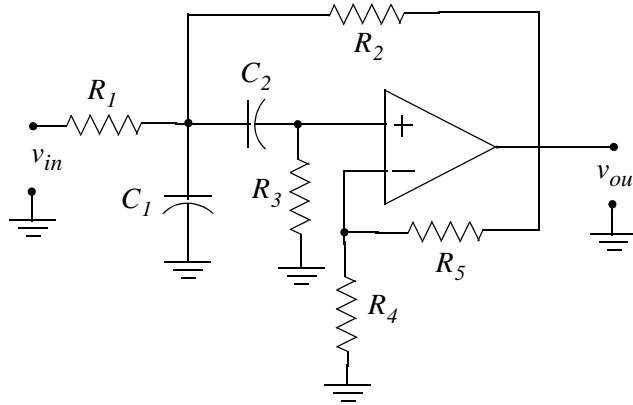


Figure 11.40. Circuit for Exercise 2

Let  $\omega_0 = \text{center frequency}$ ,  $\omega_2 = \text{upper cutoff frequency}$ ,  $\omega_1 = \text{lower cutoff frequency}$ ,  $\text{Bandwidth } BW = \omega_2 - \omega_1$ , and  $\text{Quality Factor } Q = \omega_0/BW$

We can calculate the values of  $C_1$ ,  $C_2$ ,  $R_1$ ,  $R_2$ ,  $R_3$ , and  $R_4$  to achieve the desired centered frequency  $\omega_0$  and bandwidth  $BW$ . For this circuit,

$$R_1 = \frac{2Q}{C_1\omega_0 K}$$

$$R_2 = \frac{2Q}{C_1\omega_0 \left\{ -1 + \sqrt{(K-1)^2 + 8Q^2} \right\}}$$

$$R_3 = \frac{1}{C_1^2\omega_0^2} \left( \frac{1}{R_1} + \frac{1}{R_2} \right)$$

$$R_4 = R_5 = 2R_3$$

Using these relations, compute the appropriate values of the resistors to achieve center frequency  $f_0 = 1 \text{ KHz}$ ,  $\text{Gain } K = 10$ , and  $Q = 10$ .

Choose the capacitors as  $C_1 = C_2 = 0.1 \mu\text{F}$ . Plot  $|G(s)|$  versus frequency.

Solution using MATLAB is highly recommended.



3. The circuit of Figure 11.41 is a VCVS second-order band elimination filter whose transfer function is

$$G(s) = \frac{V_{out}(s)}{V_{in}(s)} = \frac{K(s^2 + \omega_0^2)}{s^2 + [BW]s + \omega_0^2}$$

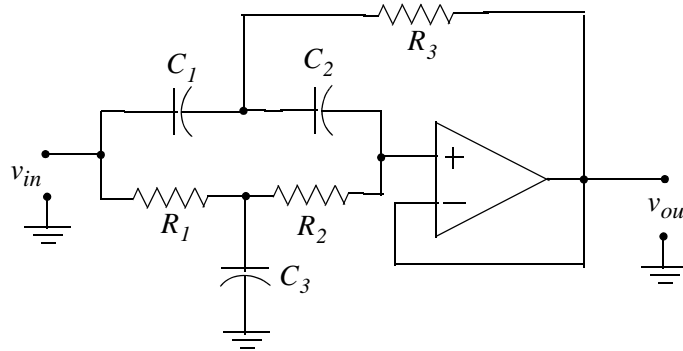


Figure 11.41. Circuit for Exercise 3

Let  $\omega_0$  = center frequency,  $\omega_2$  = upper cutoff frequency,  $\omega_1$  = lower cutoff frequency, Bandwidth  $BW = \omega_2 - \omega_1$ , Quality Factor  $Q = \omega_0/BW$ , and gain  $K = 1$

We can calculate the values of  $C_1$ ,  $C_2$ ,  $R_1$ ,  $R_2$ ,  $R_3$ , and  $R_4$  to achieve the desired centered frequency  $\omega_0$  and bandwidth  $BW$ . For this circuit,

$$R_1 = \frac{1}{2\omega_0 Q C_1}$$

$$R_2 = \frac{2Q}{\omega_0 C_1}$$

$$R_3 = \frac{2Q}{C_1 \omega_0 (4Q^2 + 1)}$$

The gain  $K$  must be unity, but  $Q$  can be up to 10. Using these relations, compute the appropriate values of the resistors to achieve center frequency  $f_0 = 1 \text{ KHz}$ , Gain  $K = 1$  and  $Q = 10$ .

Choose the capacitors as  $C_1 = C_2 = 0.1 \mu\text{F}$  and  $C_3 = 2C_1$ . Plot  $|G(s)|$  versus frequency.

Solution using MATLAB is highly recommended.

## Chapter 11 Analog and Digital Filters

4. The circuit of Figure 11.42 is a MFB second-order *all-pass filter* whose transfer function is

$$G(s) = \frac{V_{out}(s)}{V_{in}(s)} = \frac{K(s^2 - a\omega_0 s + b\omega_0^2)}{s^2 + a\omega_0 s + b\omega_0^2}$$

where the gain  $K = \text{constant}$ , ( $0 < K < 1$ ), and the phase is given by

$$\phi(\omega) = -2 \tan^{-1} \left( \frac{a\omega_0 \omega}{b\omega_0^2 - \omega^2} \right)$$

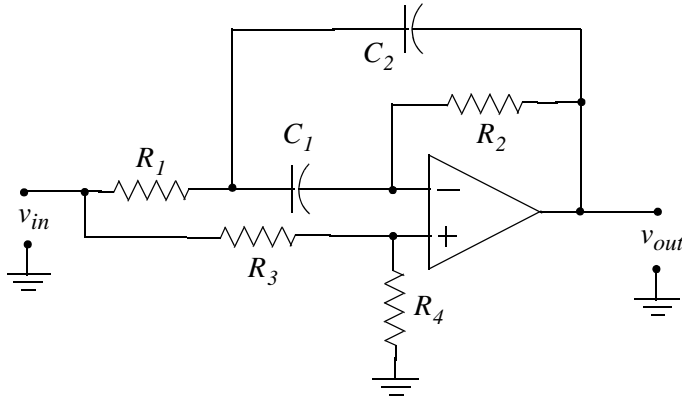


Figure 11.42. Circuit for Exercise 4

The coefficients  $a$  and  $b$  can be found from

$$\phi_0 = \phi(\omega_0) = -2 \tan^{-1} \left( \frac{a}{b-1} \right)$$

For arbitrary values of  $C_1 = C_2$ , we can compute the resistances from

$$\begin{aligned} R_2 &= \frac{2}{a\omega_0 C_1} \\ R_1 &= \frac{(1-K)R_2}{4K} \\ R_3 &= \frac{R_2}{K} \\ R_4 &= \frac{R_2}{1-K} \end{aligned}$$

For  $0 < \phi_0 < 180^\circ$ , we compute the coefficient  $a$  from

$$a = \frac{1-K}{2K \tan(\phi_0/2)} \left[ -1 + \sqrt{1 + \frac{4K}{1-K} \cdot \tan^2(\phi_0/2)} \right]$$

and for  $-180^\circ < \phi_0 < 0^\circ$ , from

$$a = \frac{1 - K}{2K \tan(\phi_0/2)} \left[ -1 - \sqrt{1 + \frac{4K}{1 - K} \cdot \tan^2(\phi_0/2)} \right]$$

Using these relations, compute the appropriate values of the resistors to achieve a phase shift  $\phi_0 = -90^\circ$  at  $f_0 = 1 \text{ KHz}$  with  $K = 0.75$ .

Choose the capacitors as  $C_1 = C_2 = 0.01 \mu\text{F}$  and plot phase versus frequency.

Solution using MATLAB is highly recommended.

5. The *Bessel filter* of Figure 11.43 has the same configuration as the low-pass filter of Example 11.3, and achieves a relatively constant time delay over a range  $0 < \omega < \omega_0$ . The second-order transfer function of this filter is

$$G(s) = \frac{V_{out}(s)}{V_{in}(s)} = \frac{3K\omega_0^2}{s^2 + 3\omega_0s + 3\omega_0^2}$$

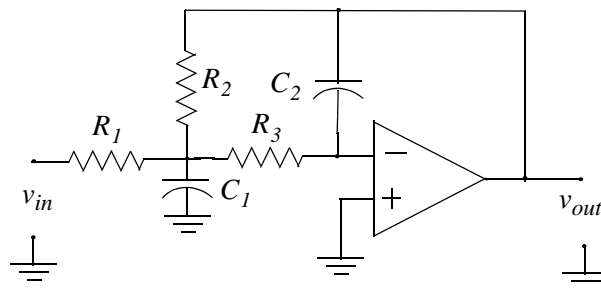


Figure 11.43. Circuit for Exercise 5

where  $K$  is the gain and the time delay  $T_0$  at  $\omega_0 = 2\pi f_0$  is given as

$$T_0 = T(\omega_0) = \frac{12}{13\omega_0} \text{ seconds}$$

We recognize the transfer function  $|G(s)|$  above as that of a low-pass filter where  $a = b = 3$  and the substitution of  $\omega_0 = \omega_c$ . Therefore, we can use a low-pass filter circuit such as that of Figure 11.43, to achieve a constant delay  $T_0$  by specifying the resistor and capacitor values of the circuit.

The resistor values are computed from

$$R_2 = \frac{2(K+1)}{(aC_1 + \sqrt{a^2 C_1^2 - 4bC_1 C_2(K-1)})\omega_0}$$

$$R_1 = \frac{R_2}{K}$$

$$R_3 = \frac{1}{bC_1 C_2 R_2 \omega_0^2}$$

Using these relations, compute the appropriate values of the resistors to achieve a time delay  $T_0 = 100 \mu s$  with  $K = 2$ . Use capacitors  $C_1 = 0.01 \mu F$  and  $C_2 = 0.002 \mu F$ . Plot  $|G(s)|$  versus frequency.

Solution using MATLAB is highly recommended.

6. Derive the transfer function of a fourth-order Butterworth filter with  $\omega_c = 1 \text{ rad/s}$ .
7. Derive the amplitude-squared function for a third-order Type I Chebyshev low-pass filter with  $1.5 \text{ dB}$  pass band ripple and cutoff frequency  $\omega_c = 1 \text{ rad/s}$ .
8. Use MATLAB to derive the transfer function  $G(z)$  and plot  $|G(z)|$  versus  $\omega$  for a two-pole, Type I Chebyshev high-pass digital filter with sampling period  $T_s = 0.25 \text{ s}$ . The equivalent analog filter cutoff frequency is  $\omega_c = 4 \text{ rad/s}$  and has  $3 \text{ dB}$  pass band ripple. Compute the coefficients of the numerator and denominator and plot  $|G(z)|$  with and without pre-warping.

## 11.11 Solutions to Exercises

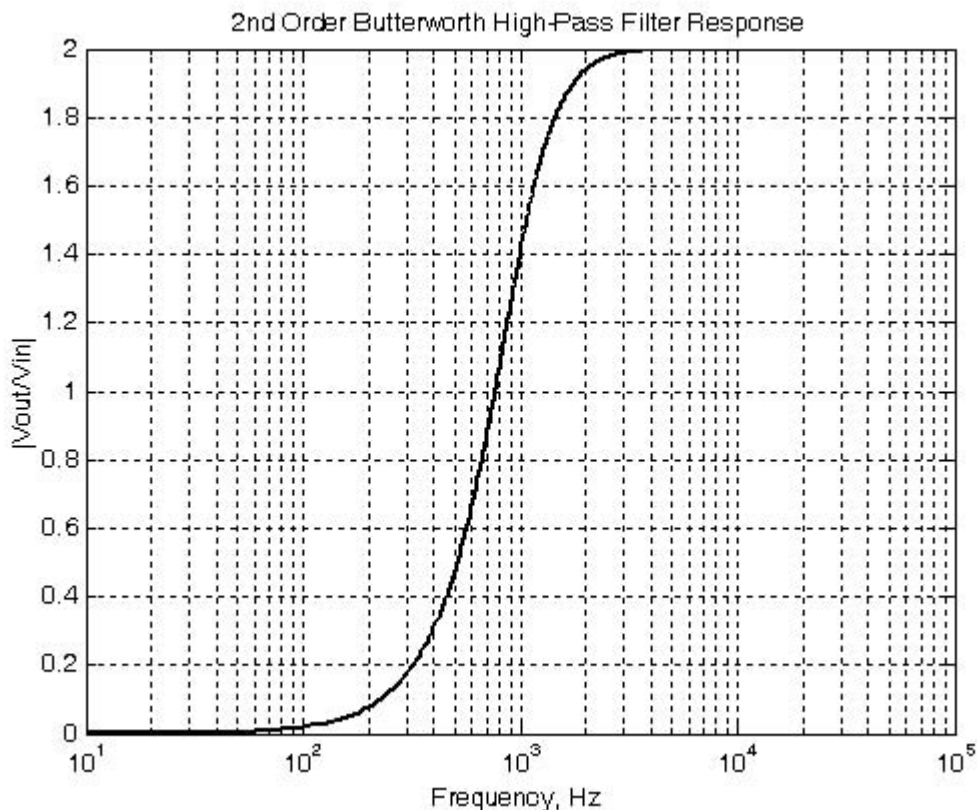
1. We will use MATLAB for all computations.

```
% PART I – Find Resistor values for second order Butterworth filter, a=sqrt(2), b = 1
a=sqrt(2); b = 1; C1=10 ^ (-8); C2=C1; fc=1000; wc=2*pi*fc; K=2;
R2=(4*b)/(C1*sqrt(a ^ 2+8*b*(K-1))*wc);
R1=b/(C1 ^ 2*R2*wc ^ 2); R3=(K*R2)/(K-1); R4=K*R2; fprintf(' \n');...
fprintf('R1 = %5.0f Ohms \t',R1); fprintf('R2 = %5.0f Ohms \t',R2);...
fprintf('R3 = %5.0f Ohms \t',R3); fprintf('R4 = %5.0f Ohms \t',R4)
```

R1=12582 Ohms    R2=20132 Ohms    R3=40263 Ohms    R4=40263 Ohms

We choose standard resistors as close as possible to those found above. These are shown in the MATLAB code below. Part II of the code is as follows:

```
f=10:10:20000; w=2*pi*f; R1=12700; R2=20000; R3=40200; R4=R3; K=1+R4/R3;...
wc=(4*b)/(C1*sqrt(a ^ 2+8*b*(K-1))*R2); s=w*j; Gw=(K.*s.^2)./(s.^2+a.*wc.*s./
b+wc.^2./b); semilogx(f,abs(Gw)); grid; hold on;...
xlabel('Frequency, Hz'), ylabel('|Vout/Vin|');...
title('2nd Order Butterworth High-Pass Filter Response')
```



---

## Chapter 11 Analog and Digital Filters

---

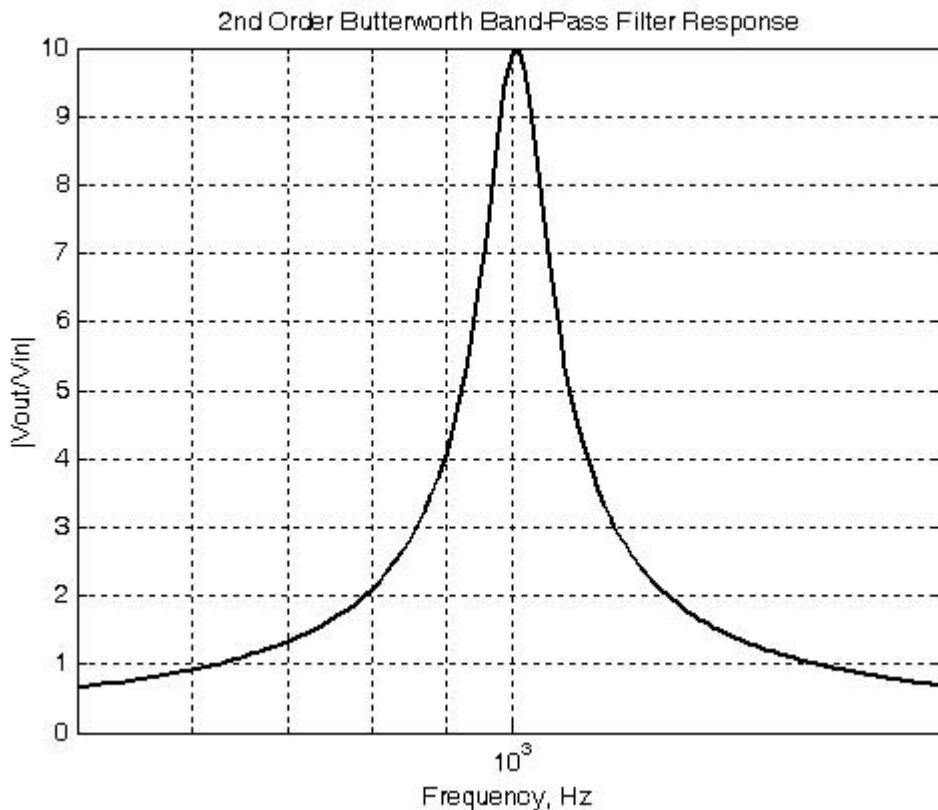
2. We will use MATLAB for all computations.

```
% PART I – Find Resistor values for second order band-pass filter f0 = 1 KHz
Q=10; K=10; C1=10^(-7); C2=C1; f0=1000; w0=2*pi*f0; R1=(2*Q)/(C1*w0*K);...
R2=(2*Q)/(C1*w0*(-1+sqrt((K-1)^2+8*Q^2))); R3=(1/(C1^2*w0^2))*(1/R1+1/R2);
R4=2*R3;...
R5=R4; fprintf(' \n'); fprintf('R1 = %5.0f Ohms \t',R1); fprintf('R2 = %5.0f Ohms \t',R2);...
fprintf('R3 = %5.0f Ohms \t',R3); fprintf('R4 = %5.0f Ohms \t',R4);...
fprintf('R5 = %5.0f Ohms \t',R5)
```

R1=3183 Ohms R2=1110 Ohms R3=3078 Ohms R4=6156 Ohms R5=6156 Ohms

We choose standard resistors as close as possible to those found above. These are shown in the MATLAB code below. Part II of the code is as follows:

```
K=10; Q=10; f=10:10:10000; w=2*pi*f; R1=3160; R2=1100; R3=3090; R4=6190;
R5=R4;...
w0=(2*Q)/(C1*R1*K); B=w0/Q; s=w*j; Gw=(K.*B.*s)./(s.^2+B.*s+w0.^2);...
semilogx(f,abs(Gw)); axis([500 2000 0 10]); grid; hold on; xlabel('Frequency, Hz'),...
ylabel('|Vout/Vin|'); title('2nd Order Butterworth Band-Pass Filter Response')
```



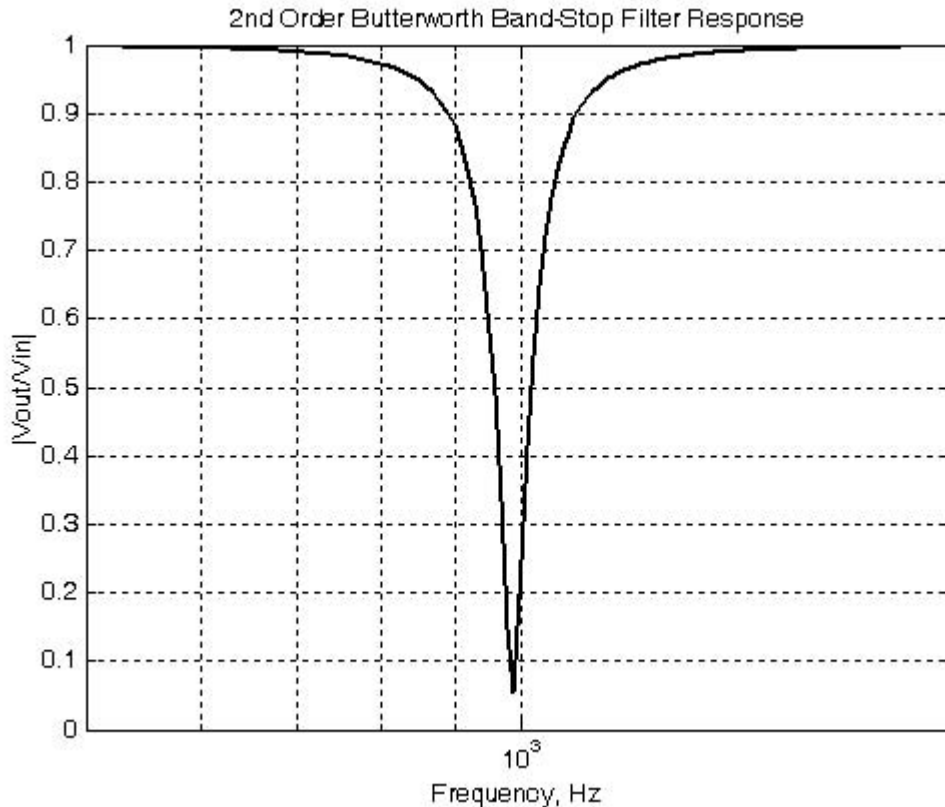
3. We will use MATLAB for all computations.

```
% PART I – Find Resistor values for second order Butterworth band-pass filter f0 = 1 KHz
Q=10; K=1; C1=10^(-7); C2=C1; C3=2*C1; f0=1000; w0=2*pi*f0; ...
R1=1/(2*w0*Q*C1); R2=(2*Q)/(w0*C1); R3=(2*Q)/(C1*w0*(4*Q^2+1)); fprintf(' \n');...
fprintf('R1 = %5.0f Ohms \t',R1); fprintf('R2 = %5.0f Ohms \t',R2);...
fprintf('R3 = %5.0f Ohms \t',R3)

R1=80 Ohms   R2=31831 Ohms   R3=79 Ohms
```

We choose standard resistors as close as possible to those found above. These are shown in the MATLAB code below. Part II of the code is as follows:

```
K=1; Q=10; f=10:10:10000; w=2*pi*f; R1=80.6; R2=31600; R3=78.7;...
w0=1/(2*R1*Q*C1); B=w0/Q; s=w*j; Gw=(K.*(s.^2+w0.^2))./(s.^2+B.*s+w0.^2);...
semilogx(f,abs(Gw)); axis([500 2000 0 1]); grid; hold on; xlabel('Frequency, Hz'),...
ylabel('|Vout/Vin|'), title('2nd Order Butterworth Band-Stop Filter Response')
```



---

## Chapter 11 Analog and Digital Filters

---

4. Let us first solve the relation

$$\phi_o = \phi(\omega_o) = -2 \tan^{-1} \left( \frac{a}{b-1} \right)$$

for  $b$  in terms of  $\phi_o$  and  $a$  so that we can find its value from the MATLAB code below. We rewrite the above relation as

$$\tan^{-1} \left( \frac{a}{b-1} \right) = -\frac{\phi_o}{2}$$

or

$$\tan \left( -\frac{\phi_o}{2} \right) = \frac{a}{b-1}$$

$$b \tan \left( -\frac{\phi_o}{2} \right) = a + \tan \left( -\frac{\phi_o}{2} \right)$$

$$b = \left[ a + \tan \left( -\frac{\phi_o}{2} \right) \right] / \tan \left( -\frac{\phi_o}{2} \right)$$

```
% MFB 2nd order all-pass filter, f0=1 KHz
% phase shift phi=-pi/2 and gain K=3/4. Gain must be 0<K<1
% PART I – Find Resistor, a and b values
phi0=-pi/2; K=0.75; C1=10^(-8); C2=C1; f0=1000; w0=2*pi*f0;...
a=((1-K)/(2*K*tan(phi0/2)))*(-1-sqrt((1+4*K/(1-K))*(tan(phi0/2))^2));...
b=(a+tan(-phi0/2))/tan(-phi0/2); R2=2/(a*w0*C1); R1=(1-K)*R2/(4*K); ...
R3=R2/K; R4=R2/(1-K); fprintf(' \n'); fprintf('R1 = %6.0f Ohms \t',R1);...
fprintf('R2 = %6.0f Ohms \t',R2); fprintf('R3 = %6.0f Ohms \t',R3);...
fprintf('R4 = %6.0f Ohms \t',R4); fprintf(' \n');...
fprintf('a = %5.3f \t', a); fprintf('b = %5.3f \t', b)

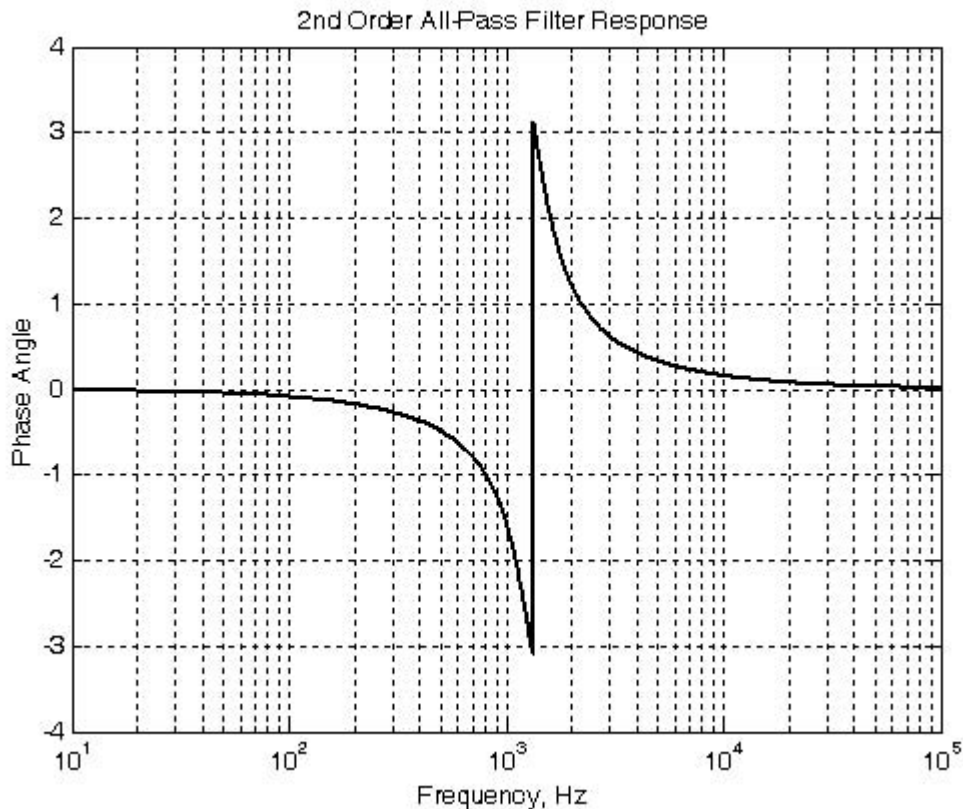
R1=3456 Ohms R2=41469 Ohms R3=55292 Ohms R4=165875 Ohms
a = 0.768 b = 1.768
```

We choose standard resistors as close as possible to those found above. These are shown in the MATLAB code below. Part II of the code is as follows:

```
K=3/4; a=0.768; b=1.768; C1=10^(-8); C2=C1; f=10:10:100000; w=2*pi*f;...
R1=3480; R2=41200; R3=54900; R4=165000; w0=2/(a*R2*C1); s=w*j;
Gw=(K.*(s.^2-a.*w0.*s+b.*w0.^2))./(s.^2+a.*w0.*s+b.*w0.^2);...
semilogx(f,angle(Gw)); grid; hold on; xlabel('Frequency, Hz'), ylabel('Phase Angle');...
title('2nd Order All-Pass Filter Response')
```

The plot shown below is the phase (not magnitude) response.





5. We will use MATLAB for all computations.

```
% MFB 2nd order Bessel filter, T0=100 microseconds, K=2
% PART I – Find resistor values
T0=100*10^(-6); K=2; C1=10^(-8); C2=2*10^(-9); a=3; b=3; w0=12/(13*T0);...
R2=(2*(K+1))/((a*C1+sqrt(a^2*C1^2-4*b*C1*C2*(K+1)))*w0); R1=R2/K;...
R3=1/(b*C1*C2*R2*w0^2); fprintf('\n'); fprintf('R1 = %5.0f Ohms \t',R1);...
fprintf('R2 = %5.0f Ohms \t',R2); fprintf('R3 = %5.0f Ohms \t',R3)

R1 = 7486 Ohms    R2 = 14971 Ohms    R3 = 13065 Ohms
```

We choose standard resistors as close as possible to those found above. These are shown in the MATLAB code below. Part II of the code is as follows:

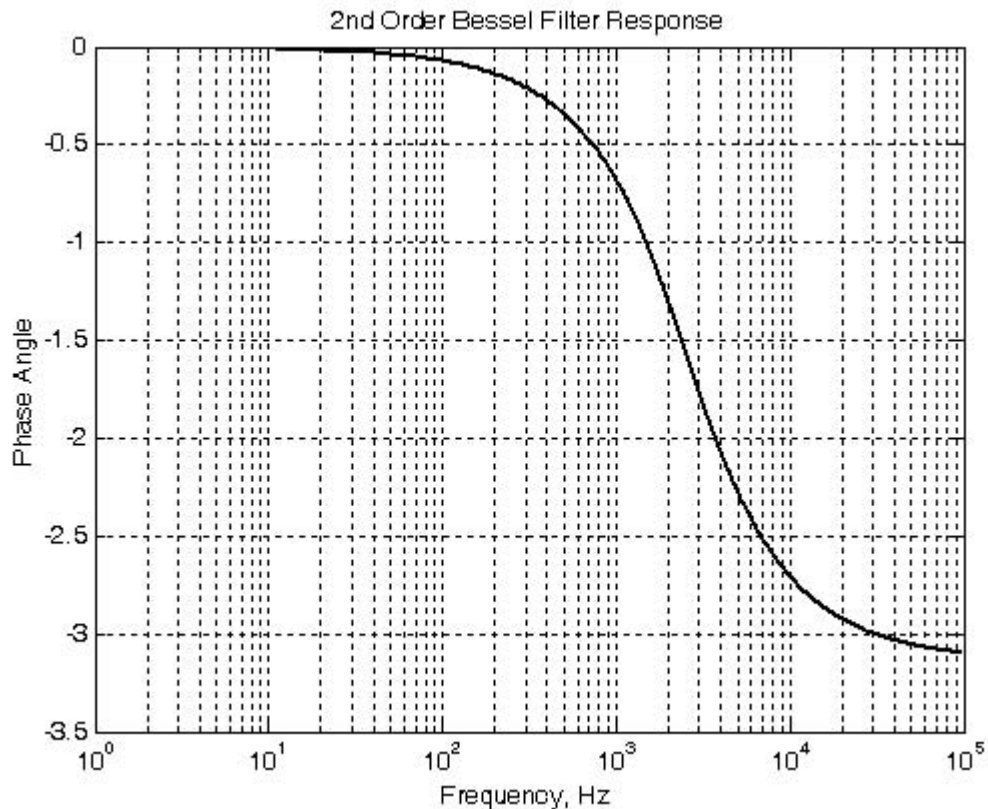
```
K=2; a=3; b=3; C1=10^(-8); C2=2*10^(-9); f=1:10:100000; w=2*pi*f; R1=7500;...
R2=15000; R3=13000;...
w0=(2*(K+1))/((a*C1+sqrt(a^2*C1^2-4*b*C1*C2*(K+1)))*R2);...
s=w*j; Gw=(3.*K.*w0.^2)./(s.^2+a.*w0.*s+b.*w0.^2);...
semilogx(f,angle(Gw)); grid; hold on;...
xlabel('Frequency, Hz'), ylabel('Phase Angle'); title('2nd Order Bessel Filter Response')
```

---

## Chapter 11 Analog and Digital Filters

---

The plot shown below is the phase (not magnitude) response. This filter has very good phase response but poor amplitude response. The group delay (the slope at a particular frequency) is practically flat at frequencies near DC.



6. From (11.20)

$$A^2(\omega) = \frac{1}{(\omega/\omega_c)^{2k} + 1}$$

and with  $\omega_c = 1 \text{ rad/s}$ , and  $k = 4$  we get

$$A^2(\omega) = \frac{1}{\omega^8 + 1}$$

Then,

$$G(s) \cdot G(-s) = \frac{1}{s^8 + 1}$$

We can use DeMoivre's theorem to find the roots of  $s^8 + 1$  but we will use MATLAB instead.

```
syms s; y=solve('s^8+1=0'); fprintf(' \n'); disp('s1 = '); disp(simple(y(1)));...
disp('s2 = '); disp(simple(y(2))); disp('s3 = '); disp(simple(y(3)));...
disp('s4 = '); disp(simple(y(4))); disp('s5 = '); disp(simple(y(5)));...
disp('s6 = '); disp(simple(y(6))); disp('s7 = '); disp(simple(y(7)));...
disp('s8 = '); disp(simple(y(8)))
```

$$\begin{aligned}
 s_1 &= 1/2 \cdot 2^{3/4} \cdot (1+i)^{1/2} & s_1 &= (1/2) \cdot \sqrt[4]{2^3} \cdot \sqrt{1+j} \\
 s_2 &= -1/2 \cdot 2^{3/4} \cdot (1+i)^{1/2} & s_2 &= -(1/2) \cdot \sqrt[4]{2^3} \cdot \sqrt{1+j} \\
 s_3 &= 1/2 \cdot i \cdot 2^{3/4} \cdot (1+i)^{1/2} & s_3 &= (1/2)j \cdot \sqrt[4]{2^3} \cdot \sqrt{1+j} \\
 s_4 &= -1/2 \cdot i \cdot 2^{3/4} \cdot (1+i)^{1/2} & s_4 &= -(1/2)j \cdot \sqrt[4]{2^3} \cdot \sqrt{1+j} \\
 s_5 &= 1/2 \cdot i \cdot 2^{3/4} \cdot (-1+i)^{1/2} & s_5 &= (1/2)j \cdot \sqrt[4]{2^3} \cdot \sqrt{-1+j} \\
 s_6 &= -1/2 \cdot i \cdot 2^{3/4} \cdot (-1+i)^{1/2} & s_6 &= -(1/2)j \cdot \sqrt[4]{2^3} \cdot \sqrt{-1+j} \\
 s_7 &= 1/2 \cdot 2^{3/4} \cdot (-1+i)^{1/2} & s_7 &= (1/2) \cdot \sqrt[4]{2^3} \cdot \sqrt{-1+j} \\
 s_8 &= -1/2 \cdot 2^{3/4} \cdot (-1+i)^{1/2} & s_8 &= -(1/2) \cdot \sqrt[4]{2^3} \cdot \sqrt{-1+j}
 \end{aligned}$$

Since we are only interested in the poles of the left half of the  $s$ -plane, we choose the roots  $s_2$ ,  $s_4$ ,  $s_6$ , and  $s_8$ . To express the denominator in polynomial form we use the following MATLAB code:

```
denGs=(s-s2)*(s-s4)*(s-s6)*(s-s8); r=vpa(denGs,4)
r = (s+.9240+.3827*i)*(s+.3827-.9240*i)*(s+.9240-.3827*i)*(s+.3827+.9240*i)
expand(r)

ans =
s^4+2.6134*s^3+3.41492978*s^2+2.614014906886*s
+1.0004706353613841
```

and thus

$$G(s) = \frac{1}{s^4 + 2.61s^3 + 3.41s^2 + 2.61s + 1}$$

7. From (11.45),

$$A^2(\omega) = \frac{\alpha}{1 + \varepsilon^2 C_k^2(\omega/\omega_C)} \quad (1)$$

and with  $\omega_C = 1$  and  $k = 3$ , we find from (11.44) that

$$C_k^2 = C_3^2 = (4\omega^3 - 3\omega)^2$$

---

## Chapter 11 Analog and Digital Filters

---

Also, from (11.52) with 1.5 dB ripple,

$$\varepsilon^2 = 10^{(1.5/10)} - 1 = 0.4125$$

and with these values (1) is written as

$$A^2(\omega) = \frac{\alpha}{1 + 0.4125 \cdot (4\omega^3 - 3\omega)^2}$$

To express the denominator in polynomial form, we use the following MATLAB code.

```
syms w; denA=1+0.4125*expand((4*w ^ 3-3*w) ^ 2);...  
denA = 1+33/5*w ^ 6-99/10*w ^ 4+297/80*w ^ 2
```

and thus

$$A^2(\omega) = \frac{\alpha}{6.6\omega^6 - 9.9\omega^4 + 3.7125\omega^2 + 1}$$

8. With the approximation of (11.87) with  $\omega_c = \omega_a$  we find that  $\omega_c = \omega_a \cdot T_s = 4 \times 0.25 = 1$ . However, using the exact relation of (11.86) and solving for  $\omega_d$  we find that

$$\omega_d = 2 \tan^{-1} (\omega_a T_s) / 2 = 0.9273$$

and this value is not very close to unity. Therefore we will compute  $G_I(z)$  with pre-warping using the following MATLAB code.

```
% This code designs a 2-pole Chebyshev Type 1 high-pass digital filter with  
% analog cutoff frequency wc=4 rads/sec, sampling period Ts=0.25 sec., with  
% pass band % ripple of 3 dB.
```

```
%
```

```
N=2; % # of poles
```

```
Rp=3; % Passband ripple in dB
```

```
Ts=0.25; % Sampling period
```

```
wc=4; % Analog cutoff frequency
```

```
% Let wd be the discrete time radian frequency. This frequency is related to  
% the continuous time radian frequency wc by wd=Ts*wc with no pre-warping.
```

```
% With prewarping it is related to wc by wdp=2*arctan(wc*Ts/2).
```

```
% We divide by pi to normalize the digital cutoff frequency.
```

```
wdp=2*atan(wc*Ts/2)/pi;
```

```
% To obtain the digital cutoff frequency without prewarping we use the relation
```

```
% wd=(wc*Ts)/pi;
```

```
[Nz,Dz]=cheby1(N,Rp,wdp,'high');
```

```
%
```

```
fprintf('The numerator N(z) coefficients in descending powers of z are: \n\n');
```

```
fprintf('%8.4f \t',[Nz]); fprintf(' \n');
```

```
fprintf('The denominator D(z) coefficients in descending powers of z are: \n\n');
```

```

fprintf('%8.4f \t',[Dz]); fprintf(' \n');
%
fprintf('Press any key to see the graph \n');
pause;
%
w=0:2*pi/300:pi; Gz=freqz(Nz,Dz,w); plot(w,abs(Gz)); grid; xlabel('Frequency (rads/sec)');
ylabel('|H|'); title('High-Pass Digital Filter with prewarping')

```

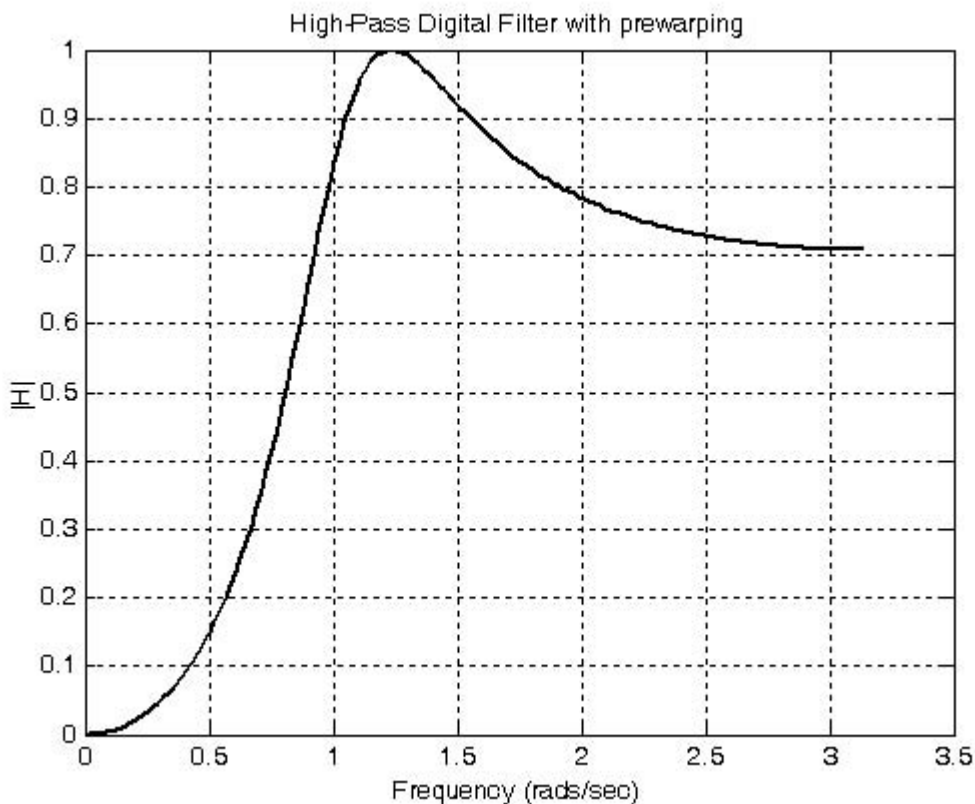
The numerator  $N(z)$  coefficients in descending powers of  $z$  are:  
 0.3914   -0.7829   0.3914

The denominator  $D(z)$  coefficients in descending powers of  $z$  are:

1.0000   -0.7153   0.4963

and thus the transfer function and the plot with pre-warping are as shown below.

$$G_I(z) = \frac{0.3914z^2 - 0.7829z + 0.3914}{z^2 - 0.7153z + 0.4963}$$



---

## Chapter 11 Analog and Digital Filters

---

Next, we will compute  $G_2(z)$  without pre-warping using the following MATLAB code:

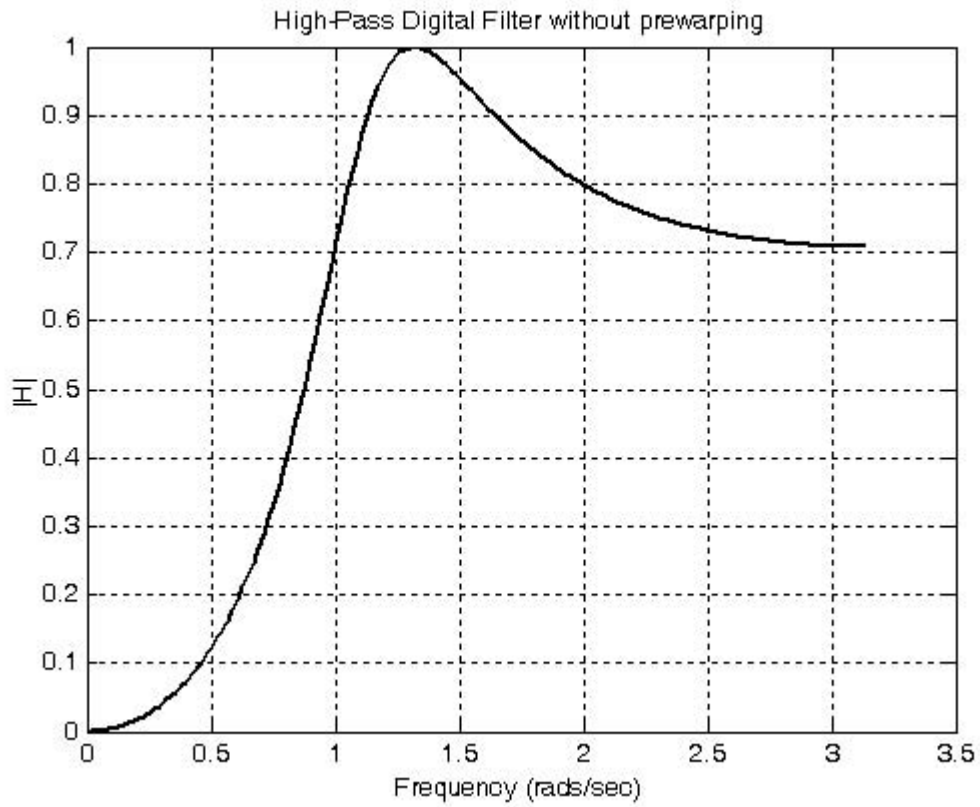
```
N=2;           % # of poles
Rp=3;         % Pass band ripple in dB
Ts=0.25;     % Sampling period
wc=4;        % Analog cutoff frequency
wd=(wc*Ts)/pi;
[Nz,Dz]=cheby1(N,Rp,wd,'high');
%
fprintf('The numerator N(z) coefficients in descending powers of z are: \n\n');
fprintf('%8.4f \t',[Nz]); fprintf(' \n');
fprintf('The denominator D(z) coefficients in descending powers of z are: \n\n');
fprintf('%8.4f \t',[Dz]); fprintf(' \n');
%
fprintf('Press any key to see the graph \n');
pause;
%
w=0:2*pi/300:pi; Gz=freqz(Nz,Dz,w); plot(w,abs(Gz)); grid; xlabel('Frequency (rads/sec)');
ylabel('|H|'); title('High-Pass Digital Filter without prewarping')

The numerator N(z) coefficients in descending powers of z are:
    0.3689   -0.7377    0.3689

The denominator D(z) coefficients in descending powers of z
are:
    1.0000   -0.6028    0.4814
```

and thus the transfer function and the plot without pre-warping are as shown below.

$$G_2(z) = \frac{0.3689z^2 - 0.7377z + 0.3689}{z^2 - 0.6028z + 0.4814}$$



### NOTES



This appendix serves as an introduction to the basic MATLAB commands and functions, procedures for naming and saving the user generated files, comment lines, access to MATLAB's Editor/Debugger, finding the roots of a polynomial, and making plots. Several examples are provided with detailed explanations.

### A.1 MATLAB® and Simulink®

MATLAB and Simulink are products of The MathWorks™ Inc. These are two outstanding software packages for scientific and engineering computations and are used in educational institutions and in industries including automotive, aerospace, electronics, telecommunications, and environmental applications. MATLAB enables us to solve many advanced numerical problems fast and efficiently. Simulink is a block diagram tool used for modeling and simulating dynamic systems such as controls, signal processing, and communications. In this appendix we will discuss MATLAB only.

### A.2 Command Window

To distinguish the screen displays from the user commands, important terms, and MATLAB functions, we will use the following conventions:

*Click:* Click the left button of the mouse

`Courier Font`: Screen displays

`Helvetica Font`: User inputs at MATLAB's command window prompt `>>` or `EDU>>`\*

**Helvetica Bold**: MATLAB functions

***Times Bold Italic***: Important terms and facts, notes and file names

When we first start MATLAB, we see the toolbar on top of the *command screen* and the prompt `EDU>>`. This prompt is displayed also after execution of a command; MATLAB now waits for a new command from the user. It is highly recommended that we use the *Editor/Debugger* to write our program, save it, and return to the command screen to execute the program as explained below.

To use the Editor/Debugger:

---

\* `EDU>>` is the MATLAB prompt in the Student Version

1. From the *File* menu on the toolbar, we choose *New* and click on *M-File*. This takes us to the *Editor Window* where we can type our *code* (list of statements) for a new file, or open a previously saved file. We must save our program with a file name which starts with a letter. **Important!** MATLAB is *case sensitive*, that is, it distinguishes between upper- and lower-case letters. Thus, *t* and *T* are two different characters in MATLAB language. The files that we create are saved with the file name we use and the extension *.m*; for example, *myfile01.m*. It is a good practice to save the code in a file name that is descriptive of our code content. For instance, if the code performs some matrix operations, we ought to name and save that file as *matrices01.m* or any other similar name. We should also use a floppy disk to backup our files.
2. Once the code is written and saved as an *m-file*, we may exit the *Editor/Debugger* window by clicking on *Exit Editor/Debugger* of the *File* menu. MATLAB then returns to the command window.
3. To execute a program, we type the file name **without** the *.m* extension at the `>>` prompt; then, we press `<enter>` and observe the execution and the values obtained from it. If we have saved our file in drive *a* or any other drive, we must make sure that it is added to the desired directory in MATLAB's search path. The MATLAB User's Guide provides more information on this topic.

Henceforth, it will be understood that each input command is typed after the `>>` prompt and followed by the `<enter>` key.

The command `help matlab\iofun` will display input/output information. To get help with other MATLAB topics, we can type `help` followed by any topic from the displayed menu. For example, to get information on graphics, we type `help matlab\graphics`. The MATLAB User's Guide contains numerous help topics.

To appreciate MATLAB's capabilities, we type `demo` and we see the MATLAB Demos menu. We can do this periodically to become familiar with them. Whenever we want to return to the command window, we click on the `Close` button.

When we are done and want to leave MATLAB, we type `quit` or `exit`. But if we want to clear all previous values, variables, and equations without exiting, we should use the command `clear`. This command erases everything; it is like exiting MATLAB and starting it again. The command `clc` clears the screen but MATLAB still remembers all values, variables and equations that we have already used. In other words, if we want to clear all previously entered commands, leaving only the `>>` prompt on the upper left of the screen, we use the `clc` command.

All text after the `%` (percent) symbol is interpreted as a *comment line* by MATLAB, and thus it is ignored during the execution of a program. A comment can be typed on the same line as the function or command or as a separate line. For instance,

```
conv(p,q) % performs multiplication of polynomials p and q.
```

```
% The next statement performs partial fraction expansion of p(x) / q(x)
```

```
are both correct.
```

One of the most powerful features of MATLAB is the ability to do computations involving *complex numbers*. We can use either  $i$ , or  $j$  to denote the imaginary part of a complex number, such as  $3-4i$  or  $3-4j$ . For example, the statement

```
z=3-4j
```

displays

```
z = 3.0000-4.0000i
```

In the above example, a multiplication (\*) sign between  $4$  and  $j$  was not necessary because the complex number consists of numerical constants. However, if the imaginary part is a function, or variable such as  $\cos(x)$ , we must use the multiplication sign, that is, we must type  $\cos(x)*j$  or  $j*\cos(x)$  for the imaginary part of the complex number.

### A.3 Roots of Polynomials

In MATLAB, a polynomial is expressed as a *row vector* of the form  $[a_n \ a_{n-1} \ \dots \ a_2 \ a_1 \ a_0]$ . These are the coefficients of the polynomial in descending order. **We must include terms whose coefficients are zero.**

We find the roots of any polynomial with the **roots(p)** function; **p** is a row vector containing the polynomial coefficients in descending order.

#### Example A.1

Find the roots of the polynomial

$$p_1(x) = x^4 - 10x^3 + 35x^2 - 50x + 24$$

#### Solution:

The roots are found with the following two statements where we have denoted the polynomial as **p1**, and the roots as **roots\_p1**.

```
p1=[1 -10 35 -50 24] % Specify and display the coefficients of p1(x)
```

```
p1 =
```

```
     1     -10     35    -50     24
```

```
roots_p1=roots(p1) % Find the roots of p1(x)
```

```
roots_p1 =
```

```
     4.0000
```

```
     3.0000
```

```
2.0000
```

```
1.0000
```

We observe that MATLAB displays the polynomial coefficients as a row vector, and the roots as a column vector.

### Example A.2

Find the roots of the polynomial

$$p_2(x) = x^5 - 7x^4 + 16x^2 + 25x + 52$$

### Solution:

There is no cube term; therefore, we must enter zero as its coefficient. The roots are found with the statements below, where we have defined the polynomial as **p2**, and the roots of this polynomial as **roots\_p2**. The result indicates that this polynomial has three real roots, and two complex roots. Of course, complex roots always occur in *complex conjugate*<sup>\*</sup> pairs.

```
p2=[1 -7 0 16 25 52]
```

```
p2 =
```

```
1 -7 0 16 25 52
```

```
roots_p2=roots(p2)
```

```
roots_p2 =
```

```
6.5014
```

```
2.7428
```

```
-1.5711
```

```
-0.3366+ 1.3202i
```

```
-0.3366- 1.3202i
```

## A.4 Polynomial Construction from Known Roots

We can compute the coefficients of a polynomial, from a given set of roots, with the **poly(r)** function where **r** is a row vector containing the roots.

---

\* By definition, the conjugate of a complex number  $A = a + jb$  is  $A^* = a - jb$ . Refer also to Appendix B.

### Example A.3

It is known that the roots of a polynomial are  $1, 2, 3,$  and  $4$ . Compute the coefficients of this polynomial.

#### Solution:

We first define a row vector, say  $r3$ , with the given roots as elements of this vector; then, we find the coefficients with the **poly(r)** function as shown below.

```
r3=[1 2 3 4]      % Specify the roots of the polynomial
```

```
r3 =
```

```
     1     2     3     4
```

```
poly_r3=poly(r3)  % Find the polynomial coefficients
```

```
poly_r3 =
```

```
     1    -10     35    -50     24
```

We observe that these are the coefficients of the polynomial  $p_1(x)$  of Example A.1.

### Example A.4

It is known that the roots of a polynomial are  $-1, -2, -3, 4+j5$  and  $4-j5$ . Find the coefficients of this polynomial.

#### Solution:

We form a row vector, say  $r4$ , with the given roots, and we find the polynomial coefficients with the **poly(r)** function as shown below.

```
r4=[-1 -2 -3 -4+5j -4-5j]
```

```
r4 =
```

```
Columns 1 through 4
```

```
-1.0000    -2.0000    -3.0000   -4.0000+ 5.0000i
```

```
Column 5
```

```
-4.0000- 5.0000i
```

```
poly_r4=poly(r4)
```

```
poly_r4 =
```

```
     1     14     100     340     499     246
```

Therefore, the polynomial is

$$p_4(x) = x^5 + 14x^4 + 100x^3 + 340x^2 + 499x + 246$$

## A.5 Evaluation of a Polynomial at Specified Values

The **polyval(p,x)** function evaluates a polynomial  $p(x)$  at some specified value of the independent variable  $x$ .

### Example A.5

Evaluate the polynomial

$$p_5(x) = x^6 - 3x^5 + 5x^3 - 4x^2 + 3x + 2 \quad (\text{A.1})$$

at  $x = -3$ .

#### Solution:

```
p5=[1 -3 0 5 -4 3 2]; % These are the coefficients
% The semicolon (;) after the right bracket suppresses the display of the row vector
% that contains the coefficients of p5.
%
val_minus3=polyval(p5, -3) % Evaluate p5 at x=-3; no semicolon is used here
                        % because we want the answer to be displayed

val_minus3 =
        1280
```

Other MATLAB functions used with polynomials are the following:

**conv(a,b)** – multiplies two polynomials **a** and **b**

**[q,r]=deconv(c,d)** –divides polynomial **c** by polynomial **d** and displays the quotient **q** and remainder **r**.

**polyder(p)** – produces the coefficients of the derivative of a polynomial **p**.

### Example A.6

Let

$$p_1 = x^5 - 3x^4 + 5x^2 + 7x + 9$$

and

$$p_2 = 2x^6 - 8x^4 + 4x^2 + 10x + 12$$

Compute the product  $p_1 \cdot p_2$  using the **conv(a,b)** function.

**Solution:**

```
p1=[1 -3 0 5 7 9];      % The coefficients of p1
p2=[2 0 -8 0 4 10 12]; % The coefficients of p2
p1p2=conv(p1,p2)       % Multiply p1 by p2 to compute coefficients of the product p1p2
p1p2 =
2   -6   -8   34   18  -24  -74  -88   78  166  174  108
```

Therefore,

$$p_1 \cdot p_2 = 2x^{11} - 6x^{10} - 8x^9 + 34x^8 + 18x^7 - 24x^6 - 74x^5 - 88x^4 + 78x^3 + 166x^2 + 174x + 108$$

### Example A.7

Let

$$p_3 = x^7 - 3x^5 + 5x^3 + 7x + 9$$

and

$$p_4 = 2x^6 - 8x^5 + 4x^2 + 10x + 12$$

Compute the quotient  $p_3/p_4$  using the **[q,r]=deconv(c,d)** function.

**Solution:**

% It is permissible to write two or more statements in one line separated by semicolons

```
p3=[1 0 -3 0 5 7 9]; p4=[2 -8 0 0 4 10 12]; [q,r]=deconv(p3,p4)
```

```
q =
0.5000
r =
0   4   -3   0   3   2   3
```

Therefore,

$$q = 0.5 \quad r = 4x^5 - 3x^4 + 3x^2 + 2x + 3$$

**Example A.8**

Let

$$p_5 = 2x^6 - 8x^4 + 4x^2 + 10x + 12$$

Compute the derivative  $\frac{d}{dx}p_5$  using the **polyder(p)** function.

**Solution:**

```
p5=[2 0 -8 0 4 10 12];      % The coefficients of p5
der_p5=polyder(p5)          % Compute the coefficients of the derivative of p5
der_p5 =
    12     0   -32     0     8    10
```

Therefore,

$$\frac{d}{dx}p_5 = 12x^5 - 32x^3 + 4x^2 + 8x + 10$$

**A.6 Rational Polynomials**

*Rational Polynomials* are those which can be expressed in ratio form, that is, as

$$R(x) = \frac{Num(x)}{Den(x)} = \frac{b_n x^n + b_{n-1} x^{n-1} + b_{n-2} x^{n-2} + \dots + b_1 x + b_0}{a_m x^m + a_{m-1} x^{m-1} + a_{m-2} x^{m-2} + \dots + a_1 x + a_0} \quad (\text{A.2})$$

where some of the terms in the numerator and/or denominator may be zero. We can find the roots of the numerator and denominator with the **roots(p)** function as before.

As noted in the comment line of Example A.7, we can write MATLAB statements in one line, if we separate them by commas or semicolons. **Commas will display the results whereas semicolons will suppress the display.**

**Example A.9**

Let

$$R(x) = \frac{P_{num}}{P_{den}} = \frac{x^5 - 3x^4 + 5x^2 + 7x + 9}{x^6 - 4x^4 + 2x^2 + 5x + 6}$$

Express the numerator and denominator in factored form, using the **roots(p)** function.



**Solution:**

```
num=[1 -3 0 5 7 9]; den=[1 0 -4 0 2 5 6]; % Do not display num and den coefficients
roots_num=roots(num), roots_den=roots(den) % Display num and den roots
```

```
roots_num =
    2.4186+ 1.0712i    2.4186- 1.0712i    -1.1633
   -0.3370+ 0.9961i   -0.3370- 0.9961i
```

```
roots_den =
    1.6760+0.4922i    1.6760-0.4922i    -1.9304
   -0.2108+0.9870i   -0.2108-0.9870i    -1.0000
```

As expected, the complex roots occur in complex conjugate pairs.

For the numerator, we have the factored form

$$p_{num} = (x-2.4186-j1.0712)(x-2.4186+j1.0712)(x+1.1633) \\ (x+0.3370-j0.9961)(x+0.3370+j0.9961)$$

and for the denominator, we have

$$p_{den} = (x-1.6760-j0.4922)(x-1.6760+j0.4922)(x+1.9304) \\ (x+0.2108-j0.9870)(x+0.2108+j0.9870)(x+1.0000)$$

We can also express the numerator and denominator of this rational function as a combination of *linear* and *quadratic* factors. We recall that, in a quadratic equation of the form  $x^2 + bx + c = 0$  whose roots are  $x_1$  and  $x_2$ , the negative sum of the roots is equal to the coefficient  $b$  of the  $x$  term, that is,  $-(x_1 + x_2) = b$ , while the product of the roots is equal to the constant term  $c$ , that is,  $x_1 \cdot x_2 = c$ . Accordingly, we form the coefficient  $b$  by addition of the complex conjugate roots and this is done by inspection; then we multiply the complex conjugate roots to obtain the constant term  $c$  using MATLAB as follows:

```
(2.4186 + 1.0712i)*(2.4186 -1.0712i)
```

```
ans = 6.9971
```

```
(-0.3370+ 0.9961i)*(-0.3370-0.9961i)
```

```
ans = 1.1058
```

```
(1.6760+ 0.4922i)*(1.6760-0.4922i)
```

```
ans = 3.0512
```

```
(-0.2108 + 0.9870i)*(-0.2108-0.9870i)
```

```
ans = 1.0186
```

Thus,

$$R(x) = \frac{P_{num}}{P_{den}} = \frac{(x^2 - 4.8372x + 6.9971)(x^2 + 0.6740x + 1.1058)(x + 1.1633)}{(x^2 - 3.3520x + 3.0512)(x^2 + 0.4216x + 1.0186)(x + 1.0000)(x + 1.9304)}$$

We can check this result with MATLAB's *Symbolic Math Toolbox* which is a collection of tools (functions) used in solving symbolic expressions. They are discussed in detail in MATLAB's Users Manual. For the present, our interest is in using the **collect(s)** function that is used to multiply two or more symbolic expressions to obtain the result in polynomial form. We must remember that the **conv(p,q)** function is used with numeric expressions only, that is, polynomial coefficients.

Before using a symbolic expression, we must create one or more symbolic variables such as  $x$ ,  $y$ ,  $t$ , and so on. For our example, we use the following code:

```
syms x % Define a symbolic variable and use collect(s) to express numerator in polynomial form
```

```
collect((x^2-4.8372*x+6.9971)*(x^2+0.6740*x+1.1058)*(x+1.1633))
```

```
ans =
```

```
x^5-29999/10000*x^4-1323/3125000*x^3+7813277909/  
1562500000*x^2+1750276323053/250000000000*x+4500454743147/  
500000000000
```

and if we simplify this, we find that is the same as the numerator of the given rational expression in polynomial form. We can use the same procedure to verify the denominator.

## A.7 Using MATLAB to Make Plots

Quite often, we want to plot a set of ordered pairs. This is a very easy task with the MATLAB **plot(x,y)** command that plots  $y$  versus  $x$ . Here,  $x$  is the horizontal axis (abscissa) and  $y$  is the vertical axis (ordinate).

### Example A.10

Consider the electric circuit of Figure A.1, where the radian frequency  $\omega$  (radians/second) of the applied voltage was varied from 300 to 3000 in steps of 100 radians/second, while the amplitude was held constant. The ammeter readings were then recorded for each frequency. The magnitude of the impedance  $|Z|$  was computed as  $|Z| = |V/A|$  and the data were tabulated on Table A.1.

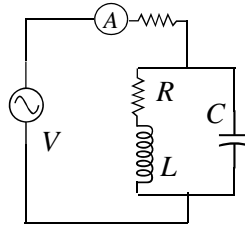


Figure A.1. Electric circuit for Example A.10

TABLE A.1 Table for Example A.10

$\omega$ (rads/s)	$ Z $ Ohms	$\omega$ (rads/s)	$ Z $ Ohms
300	39.339	1700	90.603
400	52.589	1800	81.088
500	71.184	1900	73.588
600	97.665	2000	67.513
700	140.437	2100	62.481
800	222.182	2200	58.240
900	436.056	2300	54.611
1000	1014.938	2400	51.428
1100	469.83	2500	48.717
1200	266.032	2600	46.286
1300	187.052	2700	44.122
1400	145.751	2800	42.182
1500	120.353	2900	40.432
1600	103.111	3000	38.845

Plot the magnitude of the impedance, that is,  $|Z|$  versus radian frequency  $\omega$ .

### Solution:

We cannot type  $\omega$  (omega) in the MATLAB command window, so we will use the English letter **w** instead.

If a statement, or a row vector is too long to fit in one line, it can be continued to the next line by typing three or more periods, then pressing `<enter>` to start a new line, and continue to enter data. This is illustrated below for the data of **w** and **z**. Also, as mentioned before, we use the semicolon (;) to suppress the display of numbers that we do not care to see on the screen.

The data are entered as follows:

```
w=[300 400 500 600 700 800 900 1000 1100 1200 1300 1400 1500 1600 1700 1800 1900...  
2000 2100 2200 2300 2400 2500 2600 2700 2800 2900 3000];  
%  
z=[39.339 52.789 71.104 97.665 140.437 222.182 436.056...  
1014.938 469.830 266.032 187.052 145.751 120.353 103.111...  
90.603 81.088 73.588 67.513 62.481 58.240 54.611 51.468...  
48.717 46.286 44.122 42.182 40.432 38.845];
```

Of course, if we want to see the values of  $w$  or  $z$  or both, we simply type  $w$  or  $z$ , and we press `<enter>`. To plot  $z$  (y-axis) versus  $w$  (x-axis), we use the **plot(x,y)** command. For this example, we use **plot(w,z)**. When this command is executed, MATLAB displays the plot on MATLAB's *graph screen*. This plot is shown in Figure A.2.

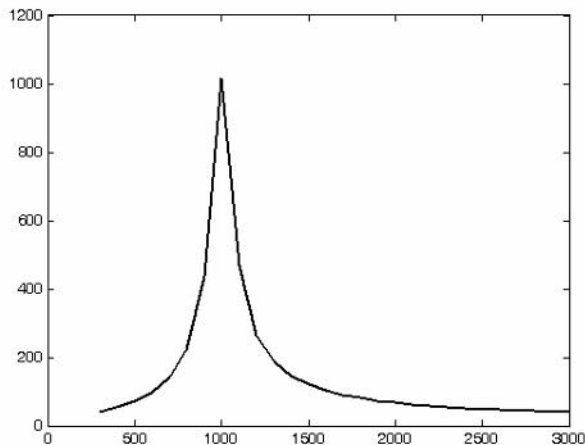


Figure A.2. Plot of impedance  $|z|$  versus frequency  $\omega$  for Example A.10

This plot is referred to as the *amplitude frequency response* of the circuit.

To return to the command window, we press any key, or from the *Window* pull-down menu, we select *MATLAB Command Window*. To see the graph again, we click on the *Window* pull-down menu, and we select *Figure*.

We can make the above, or any plot, more presentable with the following commands:

**grid on:** This command adds grid lines to the plot. The **grid off** command removes the grid. The command **grid** toggles them, that is, changes from off to on or vice versa. The default\* is off.

**box off:** This command removes the box (the solid lines which enclose the plot), and **box on** restores the box. The command **box** toggles them. The default is on.

**title('string')**: This command adds a line of the text **string** (label) at the top of the plot.

**xlabel('string')** and **ylabel('string')** are used to label the x- and y-axis respectively.

The amplitude frequency response is usually represented with the x-axis in a logarithmic scale. We can use the **semilogx(x,y)** command that is similar to the **plot(x,y)** command, except that the x-axis is represented as a log scale, and the y-axis as a linear scale. Likewise, the **semilogy(x,y)** command is similar to the **plot(x,y)** command, except that the y-axis is represented as a log scale, and the x-axis as a linear scale. The **loglog(x,y)** command uses logarithmic scales for both axes.

Throughout this text it will be understood that **log** is the common (base 10) logarithm, and **ln** is the natural (base e) logarithm. We must remember, however, the function **log(x)** in MATLAB is the natural logarithm, whereas the common logarithm is expressed as **log10(x)**, and the logarithm to the base 2 as **log2(x)**.

Let us now redraw the plot with the above options by adding the following statements:

```
semilogx(w,z); grid; % Replaces the plot(w,z) command
title('Magnitude of Impedance vs. Radian Frequency');
xlabel('w in rads/sec'); ylabel('|Z| in Ohms')
```

After execution of these commands, our plot is as shown in Figure A.3.

If the y-axis represents power, voltage or current, the x-axis of the frequency response is more often shown in a logarithmic scale, and the y-axis in dB (decibels).

To display the voltage  $v$  in *dB* units on the y-axis, we add the relation  $\text{dB}=20*\log_{10}(v)$ , and we replace the **semilogx(w,z)** command with **semilogx(w,dB)**.

The command **gtext('string')**\* switches to the current *Figure Window*, and displays a cross-hair that can be moved around with the mouse. For instance, we can use the command **gtext('Impedance |Z| versus Frequency')**, and this will place a cross-hair in the *Figure* window. Then, using the mouse, we can move the cross-hair to the position where we want our label to begin, and we press **<enter>**.

---

\* A default is a particular value for a variable that is assigned automatically by an operating system and remains in effect unless canceled or overridden by the operator.

\* With MATLAB Versions 6 and higher we can add text, lines and arrows directly into the graph using the tools provided on the *Figure Window*.

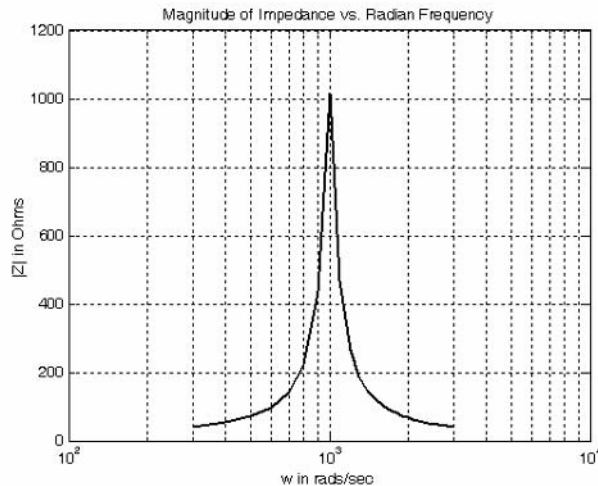


Figure A.3. Modified frequency response plot of Figure A.2.

The command **text(x,y,'string')** is similar to **gtext('string')**. It places a label on a plot in some specific location specified by **x** and **y**, and **string** is the label which we want to place at that location. We will illustrate its use with the following example that plots a *3-phase* sinusoidal waveform.

The first line of the code below has the form

**linspace(first\_value, last\_value, number\_of\_values)**

This function specifies *the number of data points* but not the increments between data points. An alternate function is

**x=first: increment: last**

and this specifies *the increments between points* but not the number of data points.

The code for the 3-phase plot is as follows:

```
x=linspace(0, 2*pi, 60);      % pi is a built-in function in MATLAB;
% we could have used x=0:0.02*pi:2*pi or x = (0: 0.02: 2)*pi instead;
y=sin(x); u=sin(x+2*pi/3); v=sin(x+4*pi/3);
plot(x,y,x,u,x,v);          % The x-axis must be specified for each function
grid on, box on,           % turn grid and axes box on
text(0.75, 0.65, 'sin(x)'); text(2.85, 0.65, 'sin(x+2*pi/3)'); text(4.95, 0.65, 'sin(x+4*pi/3)')
```

These three waveforms are shown on the same plot of Figure A.4.

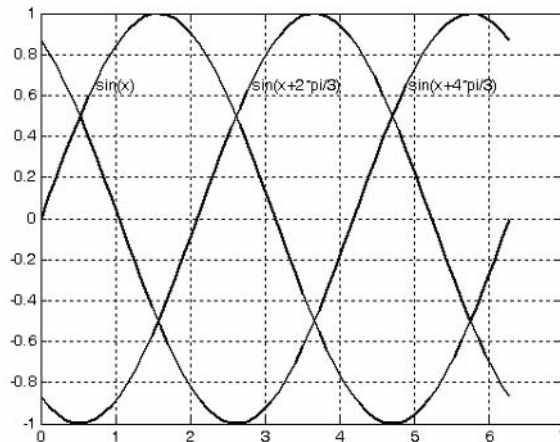


Figure A.4. Three-phase waveforms

In our previous examples, we did not specify line styles, markers, and colors for our plots. However, MATLAB allows us to specify various line types, plot symbols, and colors. These, or a combination of these, can be added with the **plot(x,y,s)** command, where **s** is a character string containing one or more characters shown on the three columns of Table A.2. MATLAB has no default color; it starts with blue and cycles through the first seven colors listed in Table A.2 for each additional line in the plot. Also, there is no default marker; no markers are drawn unless they are selected. The default line is the solid line.

For example, **plot(x,y,'m\*:')** plots a magenta dotted line with a star at each data point, and **plot(x,y,'rs')** plots a red square at each data point, but does not draw any line because no line was selected. If we want to connect the data points with a solid line, we must type **plot(x,y,'rs-')**. For additional information we can type **help plot** in MATLAB's command screen.

The plots we have discussed thus far are two-dimensional, that is, they are drawn on two axes. MATLAB has also a three-dimensional (three-axes) capability and this is discussed next.

The **plot3(x,y,z)** command plots a line in 3-space through the points whose coordinates are the elements of  $x$ ,  $y$ , and  $z$ , where  $x$ ,  $y$  and  $z$  are three vectors of the same length.

The general format is **plot3(x<sub>1</sub>,y<sub>1</sub>,z<sub>1</sub>,s<sub>1</sub>,x<sub>2</sub>,y<sub>2</sub>,z<sub>2</sub>,s<sub>2</sub>,x<sub>3</sub>,y<sub>3</sub>,z<sub>3</sub>,s<sub>3</sub>,...)** where  $\mathbf{x}_n$ ,  $\mathbf{y}_n$  and  $\mathbf{z}_n$  are vectors or matrices, and  $\mathbf{s}_n$  are strings specifying color, marker symbol, or line style. These strings are the same as those of the two-dimensional plots.

### Example A.11

Plot the function

$$z = -2x^3 + x + 3y^2 - 1 \quad (\text{A.3})$$

TABLE A.2 *Styles, colors, and markets used in MATLAB*

<i>Symbol</i>	<i>Color</i>	<i>Symbol</i>	<i>Marker</i>	<i>Symbol</i>	<i>Line Style</i>
b	blue	.	point	—	solid line
g	green	o	circle	:	dotted line
r	red	x	x-mark	—.	dash-dot line
c	cyan	+	plus	---	dashed line
m	magenta	*	star		
y	yellow	s	square		
k	black	d	diamond		
w	white	∨	triangle down		
		∧	triangle up		
		<	triangle left		
		>	triangle right		
		p	pentagram		
		h	hexagram		

**Solution:**

We arbitrarily choose the interval (length) shown on the code below.

```
x= -10: 0.5: 10;           % Length of vector x
y= x;                     % Length of vector y must be same as x
z= -2.*x.^3+x+3.*y.^2-1;% Vector z is function of both x and y*
plot3(x,y,z); grid
```

The three-dimensional plot is shown in Figure A.5

In a two-dimensional plot, we can set the limits of the *x*- and *y*-axes with the **axis([xmin xmax ymin ymax])** command. Likewise, in a three-dimensional plot we can set the limits of all three axes with the **axis([xmin xmax ymin ymax zmin zmax])** command. It must be placed after the **plot(x,y)** or **plot3(x,y,z)** commands, or on the same line without first executing the **plot** command. This must be done for each plot. The three-dimensional **text(x,y,z,'string')** command will place **string** beginning at the co-ordinate (x,y,z) on the plot.

For three-dimensional plots, **grid on** and **box off** are the default states.

---

\* This statement uses the so called dot multiplication, dot division, and dot exponentiation where the multiplication, division, and exponential operators are preceded by a dot. These operations will be explained in Section A.9.



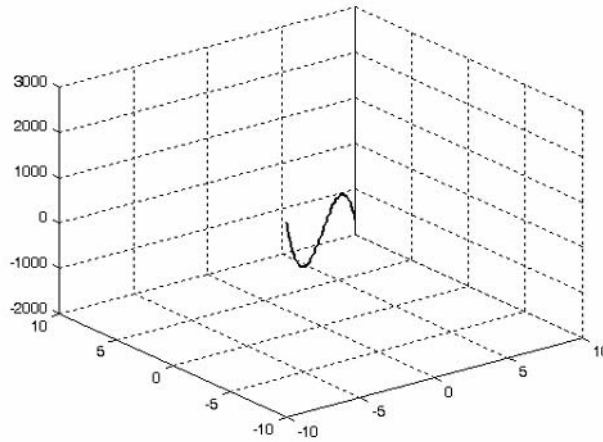


Figure A.5. Three dimensional plot for Example A.11

We can also use the **mesh(x,y,z)** command with two vector arguments. These must be defined as  $length(x) = n$  and  $length(y) = m$  where  $[m, n] = size(Z)$ . In this case, the vertices of the mesh lines are the triples  $\{x(j), y(i), Z(i, j)\}$ . We observe that **x** corresponds to the columns of **Z**, and **y** corresponds to the rows.

To produce a mesh plot of a function of two variables, say  $z = f(x, y)$ , we must first generate the **X** and **Y** matrices that consist of repeated rows and columns over the range of the variables  $x$  and  $y$ . We can generate the matrices **X** and **Y** with the **[X,Y]=meshgrid(x,y)** function that creates the matrix **X** whose rows are copies of the vector **x**, and the matrix **Y** whose columns are copies of the vector **y**.

### Example A.12

The volume  $V$  of a right circular cone of radius  $r$  and height  $h$  is given by

$$V = (1/3)\pi r^2 h \quad (\text{A.4})$$

Plot the volume of the cone as  $r$  and  $h$  vary on the intervals  $0 \leq r \leq 4$  and  $0 \leq h \leq 6$  meters.

#### Solution:

The volume of the cone is a function of both the radius  $r$  and the height  $h$ , that is,

$$V = f(r, h)$$

The three-dimensional plot is created with the following MATLAB code where, as in the previous example, in the second line we have used the dot multiplication, dot division, and dot exponentiation. As mentioned earlier, this will be explained in Section A.9.

```
[R,H]=meshgrid(0: 4, 0: 6);    % Creates R and H matrices from vectors r and h
V=(pi .* R .^ 2 .* H) ./ 3; mesh(R, H, V)
xlabel('x-axis, radius r (meters)'); ylabel('y-axis, altitude h (meters)');
zlabel('z-axis, volume (cubic meters)'); title('Volume of Right Circular Cone'); box on
```

The three-dimensional plot of Figure A.6, shows how the volume of the cone increases as the radius and height are increased.

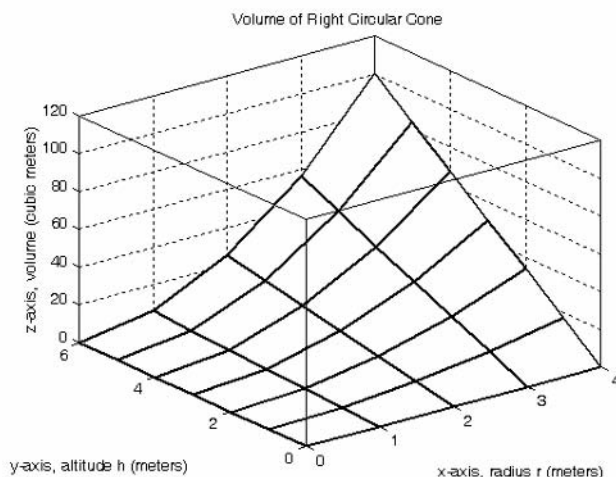


Figure A.6. Volume of a right circular cone.

This, and the plot of Figure A.5, are rudimentary; MATLAB can generate very sophisticated three-dimensional plots. The MATLAB User's manual contains more examples.

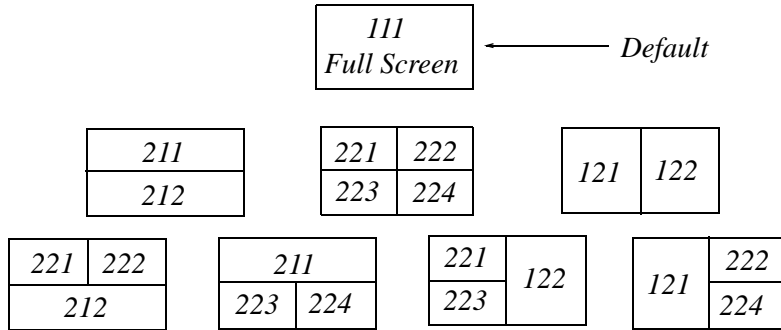
## A.8 Subplots

MATLAB can display up to four windows of different plots on the *Figure* window using the command **subplot(m,n,p)**. This command divides the window into an  $m \times n$  matrix of plotting areas and chooses the  $p$ th area to be active. No spaces or commas are required between the three integers  $m$ ,  $n$  and  $p$ . The possible combinations are shown in Figure A.7.

We will illustrate the use of the **subplot(m,n,p)** command following the discussion on multiplication, division and exponentiation that follows.

## A.9 Multiplication, Division and Exponentiation

MATLAB recognizes two types of multiplication, division, and exponentiation. These are the *matrix* multiplication, division, and exponentiation, and the *element-by-element* multiplication, division, and exponentiation. They are explained in the following paragraphs.



*Figure A.7. Possible subplot arrangements in MATLAB*

In Section A.2, the arrays  $[a \ b \ c \ \dots]$ , such as those that contained the coefficients of polynomials, consisted of one row and multiple columns, and thus are called **row vectors**. If an array has one column and multiple rows, it is called a **column vector**. We recall that the elements of a row vector are separated by spaces. To distinguish between row and column vectors, the elements of a column vector must be separated by semicolons. An easier way to construct a column vector, is to write it first as a row vector, and then transpose it into a column vector. MATLAB uses the single quotation character (') to transpose a vector. Thus, a column vector can be written either as  $\mathbf{b}=[-1; \mathbf{3}; \mathbf{6}; \mathbf{11}]$  or as  $\mathbf{b}=[-1 \ \mathbf{3} \ \mathbf{6} \ \mathbf{11}]'$ . MATLAB produces the same display with either format as shown below.

```
b=[-1; 3; 6; 11]
```

```
b =
    -1
     3
     6
    11
```

```
b=[-1 3 6 11]'
```

```
b =
    -1
     3
     6
    11
```

We will now define Matrix Multiplication and Element-by-Element multiplication.

### 1. Matrix Multiplication (multiplication of row by column vectors)

Let

$$\mathbf{A} = [a_1 \ a_2 \ a_3 \ \dots \ a_n]$$

and

$$\mathbf{B} = [b_1 \ b_2 \ b_3 \ \dots \ b_n]'$$

be two vectors. We observe that  $\mathbf{A}$  is defined as a row vector whereas  $\mathbf{B}$  is defined as a column vector, as indicated by the transpose operator ( $'$ ). Here, multiplication of the row vector  $\mathbf{A}$  by the column vector  $\mathbf{B}$ , is performed with the matrix multiplication operator ( $*$ ). Then,

$$\mathbf{A}*\mathbf{B} = [a_1b_1 + a_2b_2 + a_3b_3 + \dots + a_nb_n] = \text{single value} \quad (\text{A.5})$$

For example, if

$$\mathbf{A} = [1 \ 2 \ 3 \ 4 \ 5]$$

and

$$\mathbf{B} = [-2 \ 6 \ -3 \ 8 \ 7]'$$

the matrix multiplication  $\mathbf{A}*\mathbf{B}$  produces the single value 68, that is,

$$\mathbf{A}*\mathbf{B} = 1 \times (-2) + 2 \times 6 + 3 \times (-3) + 4 \times 8 + 5 \times 7 = 68$$

and this is verified with MATLAB as

```
A=[1 2 3 4 5]; B=[-2 6 -3 8 7]'; A*B
```

```
ans =
```

```
68
```

Now, let us suppose that both  $\mathbf{A}$  and  $\mathbf{B}$  are row vectors, and we attempt to perform a row-by-row multiplication using the following MATLAB statements

```
A=[1 2 3 4 5]; B=[-2 6 -3 8 7]; A*B
```

When these statements are executed, MATLAB displays the following message:

```
??? Error using ==> *
```

```
Inner matrix dimensions must agree.
```

Here, because we have used the matrix multiplication operator ( $*$ ) in  $\mathbf{A}*\mathbf{B}$ , MATLAB expects vector  $\mathbf{B}$  to be a column vector, not a row vector. It recognizes that  $\mathbf{B}$  is a row vector, and warns us that we cannot perform this multiplication using the matrix multiplication operator ( $*$ ). Accordingly, we must perform this type of multiplication with a different operator. This operator is defined below.

### 2.Element-by-Element Multiplication (multiplication of a row vector by another row vector)

Let

$$\mathbf{C} = [c_1 \ c_2 \ c_3 \ \dots \ c_n]$$

and

$$\mathbf{D} = [d_1 \ d_2 \ d_3 \ \dots \ d_n]$$

be two row vectors. Here, multiplication of the row vector  $\mathbf{C}$  by the row vector  $\mathbf{D}$  is performed with the **dot multiplication operator** ( $\cdot$ ). There is no space between the dot and the multiplication symbol. Thus,

$$\mathbf{C} \cdot \mathbf{D} = [c_1 d_1 \ c_2 d_2 \ c_3 d_3 \ \dots \ c_n d_n] \quad (\text{A.6})$$

This product is another row vector with the same number of elements, as the elements of  $\mathbf{C}$  and  $\mathbf{D}$ .

As an example, let

$$\mathbf{C} = [1 \ 2 \ 3 \ 4 \ 5]$$

and

$$\mathbf{D} = [-2 \ 6 \ -3 \ 8 \ 7]$$

Dot multiplication of these two row vectors produce the following result.

$$\mathbf{C} \cdot \mathbf{D} = 1 \times (-2) \ 2 \times 6 \ 3 \times (-3) \ 4 \times 8 \ 5 \times 7 = -2 \ 12 \ -9 \ 32 \ 35$$

Check with MATLAB:

```
C=[1 2 3 4 5];      % Vectors C and D must have
D=[-2 6 -3 8 7];   % same number of elements
C.*D                % We observe that this is a dot multiplication
```

```
ans =
```

```
-2    12    -9    32    35
```

Similarly, the division ( $/$ ) and exponentiation ( $\wedge$ ) operators, are used for matrix division and exponentiation, whereas dot division ( $\cdot /$ ) and dot exponentiation ( $\cdot \wedge$ ) are used for element-by-element division and exponentiation.

We must remember that **no space is allowed between the dot ( $\cdot$ ) and the multiplication, division, and exponentiation operators.**

**Note:** A dot ( $\cdot$ ) is never required with the plus (+) and minus ( $-$ ) operators.

#### Example A.13

Write the MATLAB code that produces a simple plot for the waveform defined as

$$y = f(t) = 3e^{-4t} \cos 5t - 2e^{-3t} \sin 2t + \frac{t^2}{t+1} \quad (\text{A.7})$$

in the  $0 \leq t \leq 5$  seconds interval.

**Solution:**

The MATLAB code for this example is as follows:

```
t=0:0.01:5           % Define t-axis in 0.01 increments
y=3.*exp(-4.*t).*cos(5.*t)-2.*exp(-3.*t).*sin(2.*t)+t.^2./(t+1);
plot(t,y); grid; xlabel('t'); ylabel('y=f(t)'); title('Plot for Example A.13')
```

Figure A.8 shows the plot for this example.

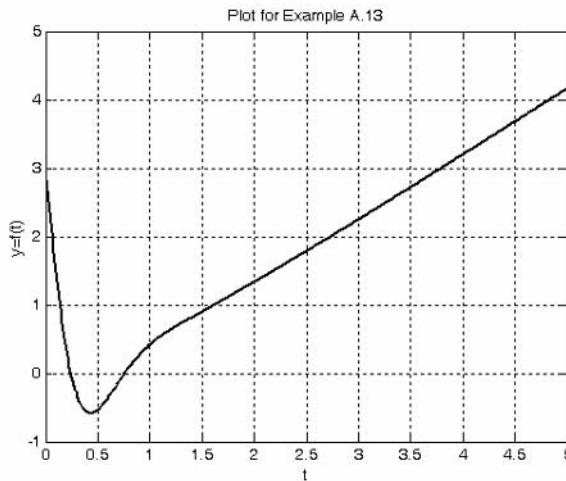


Figure A.8. Plot for Example A.13

Had we, in this example, defined the time interval starting with a negative value equal to or less than  $-1$ , say as  $-3 \leq t \leq 3$ , MATLAB would have displayed the following message:

Warning: Divide by zero.

This is because the last term (the rational fraction) of the given expression, is divided by zero when  $t = -1$ . To avoid division by zero, we use the special MATLAB function **eps**. This is a number approximately equal to  $2.2 \times 10^{-16}$ . It will be used with the next example.

The command **axis([xmin xmax ymin ymax])** scales the current plot to the values specified by the arguments **xmin**, **xmax**, **ymin** and **ymax**. There are no commas between these four arguments. This command must be placed *after* the plot command and must be repeated for each plot.

The following example illustrates the use of the dot multiplication, division, and exponentiation, the **eps** number, the **axis([xmin xmax ymin ymax])** command, and also MATLAB's capability of displaying up to four windows of different plots.

### Example A.14

Plot the functions

$$y = \sin^2x, \quad z = \cos^2x, \quad w = \sin^2x \cdot \cos^2x, \quad v = \sin^2x / \cos^2x$$

in the interval  $0 \leq x \leq 2\pi$  using 100 data points. Use the **subplot** command to display these functions as four windows on the same graph.

#### Solution:

The MATLAB code to produce the four subplots is as follows:

```
x=linspace(0,2*pi,100);           % Interval with 100 data points
y=(sin(x).^ 2); z=(cos(x).^ 2);
w=y.* z;
v=y./ (z+eps);                    % add eps to avoid division by zero
subplot(221);                      % upper left of four subplots
plot(x,y); axis([0 2*pi 0 1]);
title('y=(sinx)^ 2');
subplot(222);                      % upper right of four subplots
plot(x,z); axis([0 2*pi 0 1]);
title('z=(cosx)^ 2');
subplot(223);                      % lower left of four subplots
plot(x,w); axis([0 2*pi 0 0.3]);
title('w=(sinx)^ 2*(cosx)^ 2');
subplot(224);                      % lower right of four subplots
plot(x,v); axis([0 2*pi 0 400]);
title('v=(sinx)^ 2/(cosx)^ 2');
```

These subplots are shown in Figure A.9.

The next example illustrates MATLAB's capabilities with imaginary numbers. We will introduce the **real(z)** and **imag(z)** functions that display the real and imaginary parts of the complex quantity  $z = \mathbf{x} + \mathbf{iy}$ , the **abs(z)**, and the **angle(z)** functions that compute the absolute value (magnitude) and phase angle of the complex quantity  $z = \mathbf{x} + \mathbf{iy} = r\angle\theta$ . We will also use the **polar(theta,r)** function that produces a plot in polar coordinates, where **r** is the magnitude, **theta** is the angle in radians, and the **round(n)** function that rounds a number to its nearest integer.

### Example A.15

Consider the electric circuit of Figure A.10.

With the given values of resistance, inductance, and capacitance, the impedance  $Z_{ab}$  as a function of the radian frequency  $\omega$  can be computed from the following expression:

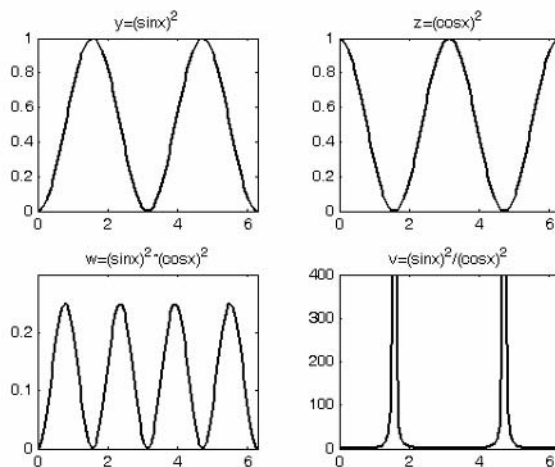


Figure A.9. Subplots for the functions of Example A.14

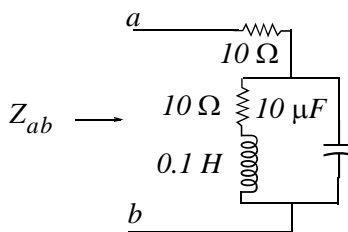


Figure A.10. Electric circuit for Example A.15

$$Z_{ab} = Z = 10 + \frac{10^4 - j(10^6/\omega)}{10 + j(0.1\omega - 10^5/\omega)} \quad (\text{A.8})$$

- Plot  $Re\{Z\}$  (the real part of the impedance  $Z$ ) versus frequency  $\omega$ .
- Plot  $Im\{Z\}$  (the imaginary part of the impedance  $Z$ ) versus frequency  $\omega$ .
- Plot the impedance  $Z$  versus frequency  $\omega$  in polar coordinates.

**Solution:**

The MATLAB code below computes the real and imaginary parts of  $Z_{ab}$  that is, for simplicity, denoted as  $z$ , and plots these as two separate graphs (parts a & b). It also displays a polar plot (part c).



```

w=0: 1: 2000; % Define interval with one radian interval
z=(10+(10.^ 4 -j.* 10.^ 6 ./ (w+eps)) ./ (10 + j.* (0.1 .* w -10.^ 5./ (w+eps))));
%
% The first five statements (next two lines) compute and plot Re{z}
real_part=real(z); plot(w,real_part); grid;
xlabel('radian frequency w'); ylabel('Real part of Z');
%
% The next five statements (next two lines) compute and plot Im{z}
imag_part=imag(z); plot(w,imag_part); grid;
xlabel('radian frequency w'); ylabel('Imaginary part of Z');
% The last six statements (next six lines) below produce the polar plot of z
mag=abs(z); % Computes |Z|
rndz=round(abs(z)); % Rounds |Z| to read polar plot easier
theta=angle(z); % Computes the phase angle of impedance Z
polar(theta,rndz); % Angle is the first argument
grid;
ylabel('Polar Plot of Z');

```

The real, imaginary, and polar plots are shown in Figures A.11, A.12, and A.13 respectively.

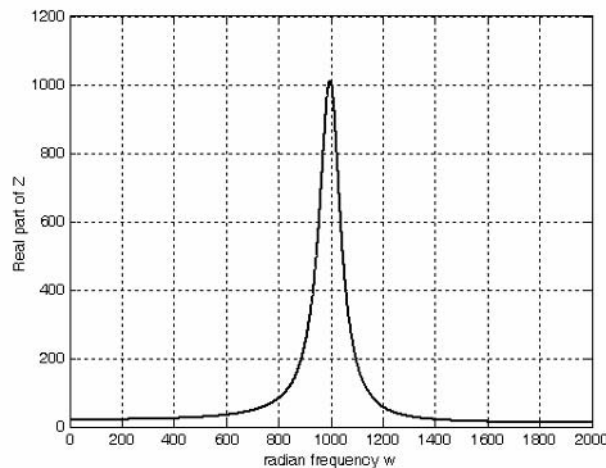


Figure A.11. Plot for the real part of the impedance in Example A.15

Example A.15 clearly illustrates how powerful, fast, accurate, and flexible MATLAB is.

## A.10 Script and Function Files

MATLAB recognizes two types of files: *script files* and *function files*. Both types are referred to as *m-files* since both require the *.m* extension.

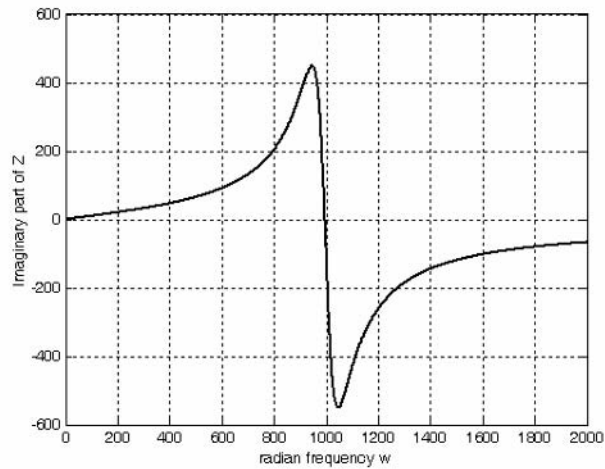


Figure A.12. Plot for the imaginary part of the impedance in Example A.15

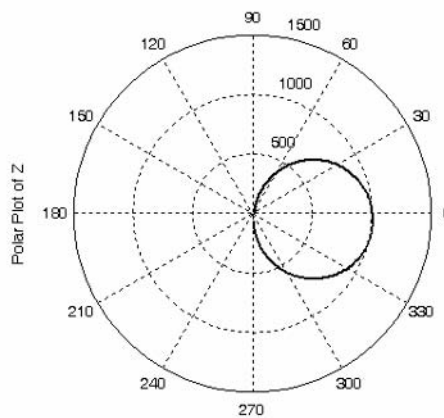


Figure A.13. Polar plot of the impedance in Example A.15

A **script file** consists of two or more built-in functions such as those we have discussed thus far. Thus, the code for each of the examples we discussed earlier, make up a script file. Generally, a script file is one which was generated and saved as an m-file with an editor such as the MATLAB's Editor/Debugger.

A **function file** is a user-defined function using MATLAB. We use function files for repetitive tasks. The first line of a function file must contain the word *function*, followed by the output argument, the equal sign (=), and the input argument enclosed in parentheses. The function name and file name must be the same, but the file name must have the extension **.m**. For example, the function file con-

sisting of the two lines below

```
function y = myfunction(x)
```

```
y=x.^ 3 + cos(3.* x)
```

is a function file and must be saved as *myfunction.m*

For the next example, we will use the following MATLAB functions.

**fzero(f,x)** tries to find a zero of a function of one variable, where **f** is a string containing the name of a real-valued function of a single real variable. MATLAB searches for a value near a point where the function **f** changes sign, and returns that value, or returns NaN if the search fails.

**Important:** We must remember that we use **roots(p)** to find the roots of polynomials only, such as those in Examples A.1 and A.2.

**fmin(f,x1,x2)**\* minimizes a function of one variable. It attempts to return a value of  $x$  where  $f(x)$  is minimum in the interval  $x_1 < x < x_2$ . The string **f** contains the name of the function to be minimized.

**Note:** MATLAB does not have a function to maximize a function of one variable, that is, there is no **fmax(f,x1,x2)** function in MATLAB; but since a maximum of  $f(x)$  is equal to a minimum of  $-f(x)$ , we can use **fmin(f,x1,x2)** to find both minimum and maximum values of a function.

**fplot(fcn,lims)** plots the function specified by the string **fcn** between the x-axis limits specified by **lims = [xmin xmax]**. Using **lims = [xmin xmax ymin ymax]** also controls the y-axis limits. The string **fcn** must be the name of an *m-file* function or a string with variable  $x$ .

**Note: NaN** (Not-a-Number) is not a function; it is MATLAB's response to an undefined expression such as  $0/0$ ,  $\infty/\infty$ , or inability to produce a result as described on the next paragraph. We can avoid division by zero using the **eps** number, that we mentioned earlier.

### Example A.16

Find the zeros, maxima and minima of the function

$$f(x) = \frac{1}{(x-0.1)^2 + 0.01} + \frac{1}{(x-1.2)^2 + 0.04} - 10$$

#### Solution:

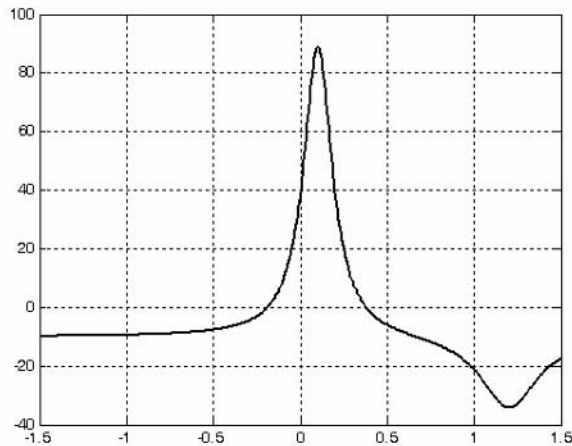
We first plot this function to observe the approximate zeros, maxima, and minima using the following code.

```
x=-1.5: 0.01: 1.5; y=1./((x-0.1).^ 2 + 0.01) -1./((x-1.2).^ 2 + 0.04) -10; plot(x,y); grid
```

---

\* This function is being replaced with the function **x = fminbnd(fun,x1,x2)**. This function starts at  $X0$  and finds a local minimizer **x** of the function **fun** in the interval  $x_1 < x < x_2$ .

The plot is shown in Figure A.14.



*Figure A.14. Plot for Example A.16 using the plot command*

The roots (zeros) of this function appear to be in the neighborhood of  $x = -0.2$  and  $x = 0.3$ . The maximum occurs at approximately  $x = 0.1$  where, approximately,  $y_{max} = 90$ , and the minimum occurs at approximately  $x = 1.2$  where, approximately,  $y_{min} = -34$ .

Next, we define and save  $f(x)$  as the **funczero01.m** function m-file with the following code:

```
function y=funczero01(x)
% Finding the zeros of the function shown below
y=1/((x-0.1)^2+0.01)-1/((x-1.2)^2+0.04)-10;
```

Now, we can use the **fplot(fcn,lims)** command to plot  $f(x)$  as follows.

```
fplot('funczero01', [-1.5 1.5]); grid
```

This plot is shown in Figure A.15. As expected, this plot is identical to the plot of Figure A.14 that was obtained with the **plot(x,y)** command.

We will use the **fzero(f,x)** function to compute the roots of  $f(x)$  in (A.20) more precisely. The code below must be saved with a file name, and then invoked with that file name.

```
x1= fzero('funczero01', -0.2);
x2= fzero('funczero01', 0.3);
fprintf('The roots (zeros) of this function are r1 = %3.4f, x1);
fprintf(' and r2 = %3.4f \n', x2)
```

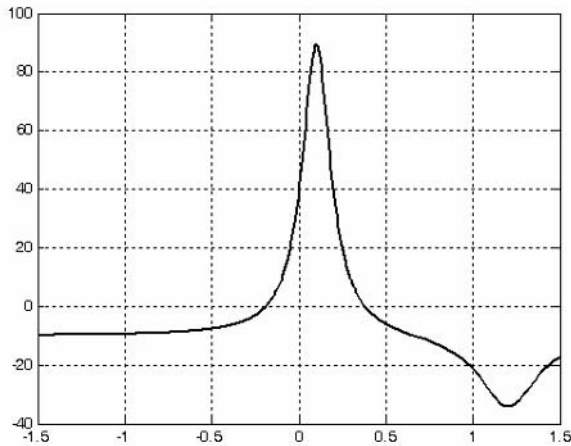


Figure A.15. Plot for Example A.16 using the `fplot` command

MATLAB displays the following:

The roots (zeros) of this function are  $r_1 = -0.1919$  and  $r_2 = 0.3788$

Whenever we use the `fmin(f,x1,x2)` or the `fminbnd(f,x1,x2)` function, we must remember that this function searches for a minimum and it may display the values of local minima\*, if any, before displaying the function minimum. We should, therefore, plot the function with either the `plot(x,y)` or the `fplot(fcn,lims)` command to find the smallest possible interval within which the function minimum lies. For this example, we specify the range  $0 \leq x \leq 1.5$  rather than the interval  $-1.5 \leq x \leq 1.5$ .

The minimum of  $f(x)$  is found with the `fmin(f,x1,x2)` function as follows.

```
min_val=fmin('funczero01', 0, 1.5)
min_val = 1.2012
```

This is the value of  $x$  at which  $y = f(x)$  is minimum. To find the value of  $y$  corresponding to this value of  $x$ , we substitute it into  $f(x)$ , that is,

```
x=1.2012; y=1 / ((x-0.1) ^ 2 + 0.01) - 1 / ((x-1.2) ^ 2 + 0.04) - 10
y = -34.1812
```

To find the maximum value, we must first define a new function *m-file* that will produce  $-f(x)$ . We define it as follows:

---

\* *Local maxima or local minima, are the maximum or minimum values of a function within a restricted range of values in the independent variable. When the entire range is considered, the maxima and minima are considered to be the maximum and minimum values in the entire range in which the function is defined.*

```
function y=minusfunczero01(x)
```

```
% It is used to find maximum value from -f(x)
```

```
y=-1/((x-0.1)^2+0.01)-1/((x-1.2)^2+0.04)-10;
```

We have placed the minus (-) sign in front of the right side of the last expression above, so that the maximum value will be displayed. Of course, this is equivalent to the negative of the **funczero01** function.

Now, we execute the following code to get the value of  $x$  where the maximum  $y = f(x)$  occurs.

```
max_val=fmin('minusfunczero01', 0,1)
```

```
max_val = 0.0999
```

```
x=0.0999; % Using this value find the corresponding value of y
```

```
y=1 / ((x-0.1)^2 + 0.01) - 1 / ((x-1.2)^2 + 0.04) - 10
```

```
y = 89.2000
```

### A.11 Display Formats

MATLAB displays the results on the screen in integer format without decimals if the result is an integer number, or in short floating point format with four decimals if it a fractional number. The format displayed has nothing to do with the accuracy in the computations. MATLAB performs all computations with accuracy up to 16 decimal places.

The output format can be changed with the **format** command. The available formats can be displayed with the **help format** command as follows:

```
help format
```

```
FORMAT Set output format.
```

All computations in MATLAB are done in double precision.

FORMAT may be used to switch between different output display formats as follows:

```
FORMAT Default. Same as SHORT.
```

```
FORMAT SHORT Scaled fixed point format with 5 digits.
```

```
FORMAT LONG Scaled fixed point format with 15 digits.
```

```
FORMAT SHORT E Floating point format with 5 digits.
```

```
FORMAT LONG E Floating point format with 15 digits.
```

```
FORMAT SHORT G Best of fixed or floating point format with 5 digits.
```

FORMAT LONG G Best of fixed or floating point format with 15 digits.

FORMAT HEX Hexadecimal format.

FORMAT + The symbols +, - and blank are printed for positive, negative and zero elements.  
Imaginary parts are ignored.

FORMAT BANK Fixed format for dollars and cents.

FORMAT RAT Approximation by ratio of small integers.

Spacing:

FORMAT COMPACT Suppress extra line-feeds.

FORMAT LOOSE Puts the extra line-feeds back in.

Some examples with different format displays are given below.

`format short 33.3335` Four decimal digits (default)

`format long 33.33333333333334` 16 digits

`format short e 3.3333e+01` Four decimal digits plus exponent

`format short g 33.333` Better of format short or format short e

`format bank 33.33` two decimal digits

`format +` only + or - or zero are printed

`format rat 100/3` rational approximation

The **disp(X)** command displays the array **X** without printing the array name. If **X** is a string, the text is displayed.

The **fprintf(format,array)** command displays and prints both text and arrays. It uses specifiers to indicate where and in which format the values would be displayed and printed. Thus, if **%f** is used, the values will be displayed and printed in fixed decimal format, and if **%e** is used, the values will be displayed and printed in scientific notation format. With this command only the real part of each parameter is processed.

NOTES



**T**his appendix is a review of the algebra of complex numbers. The basic operations are defined and illustrated by several examples. Applications using Euler's identities are presented, and the exponential and polar forms are discussed and illustrated with examples.

### B.1 Definition of a Complex Number

In the language of mathematics, the square root of minus one is denoted as  $i$ , that is,  $i = \sqrt{-1}$ . In the electrical engineering field, we denote  $i$  as  $j$  to avoid confusion with current  $i$ . Essentially,  $j$  is an operator that produces a 90-degree counterclockwise rotation to any vector to which it is applied as a multiplying factor. Thus, if it is given that a vector  $A$  has the direction along the right side of the x-axis as shown in Figure B.1, multiplication of this vector by the operator  $j$  will result in a new vector  $jA$  whose magnitude remains the same, but it has been rotated counterclockwise by  $90^\circ$ . Also, another multiplication of the new vector  $jA$  by  $j$  will produce another  $90^\circ$  counterclockwise direction. In this case, the vector  $A$  has rotated  $180^\circ$  and its new value now is  $-A$ . When this vector is rotated by another  $90^\circ$  for a total of  $270^\circ$ , its value becomes  $j(-A) = -jA$ . A fourth  $90^\circ$  rotation returns the vector to its original position, and thus its value is again  $A$ . Therefore, we conclude that  $j^2 = -1$ ,  $j^3 = -j$ , and  $j^4 = 1$ .

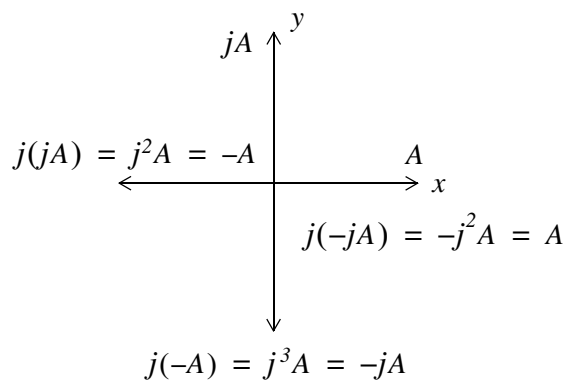


Figure B.1. The  $j$  operator

---

## A Review of Complex Numbers

---

**Note:** In our subsequent discussion, we will designate the x-axis (abscissa) as the *real axis*, and the y-axis (ordinate) as the *imaginary axis* with the understanding that the “imaginary” axis is just as “real” as the real axis. In other words, the imaginary axis is just as important as the real axis.\*

An *imaginary number* is the product of a real number, say  $r$ , by the operator  $j$ . Thus,  $r$  is a real number and  $jr$  is an imaginary number.

A *complex number* is the sum (or difference) of a real number and an imaginary number. For example, the number  $A = a + jb$  where  $a$  and  $b$  are both real numbers, is a complex number. Then,  $a = \text{Re}\{A\}$  and  $b = \text{Im}\{A\}$  where  $\text{Re}\{A\}$  denotes real part of  $A$ , and  $b = \text{Im}\{A\}$  the imaginary part of  $A$ .

By definition, two complex numbers  $A$  and  $B$  where  $A = a + jb$  and  $B = c + jd$ , are equal if and only if their real parts are equal, and also their imaginary parts are equal. Thus,  $A = B$  if and only if  $a = c$  and  $b = d$ .

### B.2 Addition and Subtraction of Complex Numbers

The sum of two complex numbers has a real component equal to the sum of the real components, and an imaginary component equal to the sum of the imaginary components. For subtraction, we change the signs of the components of the subtrahend and we perform addition. Thus, if

$$A = a + jb \text{ and } B = c + jd$$

then

$$A + B = (a + c) + j(b + d)$$

and

$$A - B = (a - c) + j(b - d)$$

#### Example B.1

It is given that  $A = 3 + j4$ , and  $B = 4 - j2$ . Find  $A + B$  and  $A - B$

**Solution:**

$$A + B = (3 + j4) + (4 - j2) = (3 + 4) + j(4 - 2) = 7 + j2$$

and

$$A - B = (3 + j4) - (4 - j2) = (3 - 4) + j(4 + 2) = -1 + j6$$

---

\* We may think the real axis as the cosine axis and the imaginary axis as the sine axis.

### B.3 Multiplication of Complex Numbers

Complex numbers are multiplied using the rules of elementary algebra, and making use of the fact that  $j^2 = -1$ . Thus, if

$$A = a + jb \text{ and } B = c + jd$$

then

$$A \cdot B = (a + jb) \cdot (c + jd) = ac + jad + jbc + j^2bd$$

and since  $j^2 = -1$ , it follows that

$$\begin{aligned} A \cdot B &= ac + jad + jbc - bd \\ &= (ac - bd) + j(ad + bc) \end{aligned} \tag{B.1}$$

#### Example B.2

It is given that  $A = 3 + j4$  and  $B = 4 - j2$ . Find  $A \cdot B$

**Solution:**

$$A \cdot B = (3 + j4) \cdot (4 - j2) = 12 - j6 + j16 - j^28 = 20 + j10$$

The *conjugate* of a complex number, denoted as  $A^*$ , is another complex number with the same real component, and with an imaginary component of opposite sign. Thus, if  $A = a + jb$ , then  $A^* = a - jb$ .

#### Example B.3

It is given that  $A = 3 + j5$ . Find  $A^*$

**Solution:**

The conjugate of the complex number  $A$  has the same real component, but the imaginary component has opposite sign. Then,  $A^* = 3 - j5$

*If a complex number  $A$  is multiplied by its conjugate, the result is a real number.* Thus, if  $A = a + jb$ , then

$$A \cdot A^* = (a + jb)(a - jb) = a^2 - jab + jab - j^2b^2 = a^2 + b^2$$

#### Example B.4

It is given that  $A = 3 + j5$ . Find  $A \cdot A^*$

**Solution:**

$$A \cdot A^* = (3 + j5)(3 - j5) = 3^2 + 5^2 = 9 + 25 = 34$$

---

## A Review of Complex Numbers

---

### B.4 Division of Complex Numbers

When performing division of complex numbers, it is desirable to obtain the quotient separated into a real part and an imaginary part. This procedure is called *rationalization of the quotient*, and it is done by multiplying the denominator by its conjugate. Thus, if  $A = a + jb$  and  $B = c + jd$ , then,

$$\begin{aligned}\frac{A}{B} &= \frac{a + jb}{c + jd} = \frac{(a + jb)(c - jd)}{(c + jd)(c - jd)} = \frac{A}{B} \cdot \frac{B^*}{B^*} = \frac{(ac + bd) + j(bc - ad)}{c^2 + d^2} \\ &= \frac{(ac + bd)}{c^2 + d^2} + j \frac{(bc - ad)}{c^2 + d^2}\end{aligned}\tag{B.2}$$

In (B.2), we multiplied both the numerator and denominator by the conjugate of the denominator to eliminate the  $j$  operator from the denominator of the quotient. Using this procedure, we see that the quotient is easily separated into a real and an imaginary part.

#### Example B.5

It is given that  $A = 3 + j4$ , and  $B = 4 + j3$ . Find  $A/B$

**Solution:**

Using the procedure of expression (B.2), we get

$$\frac{A}{B} = \frac{3 + j4}{4 + j3} = \frac{(3 + j4)(4 - j3)}{(4 + j3)(4 - j3)} = \frac{12 - j9 + j16 + 12}{4^2 + 3^2} = \frac{24 + j7}{25} = \frac{24}{25} + j\frac{7}{25} = 0.96 + j0.28$$

### B.5 Exponential and Polar Forms of Complex Numbers

The relations

$$e^{j\theta} = \cos\theta + j\sin\theta\tag{B.3}$$

and

$$e^{-j\theta} = \cos\theta - j\sin\theta\tag{B.4}$$

are known as the *Euler's identities*.

Multiplying (B.3) by the *real* positive constant  $C$  we get:

$$Ce^{j\theta} = C\cos\theta + jC\sin\theta\tag{B.5}$$

---

## Exponential and Polar Forms of Complex Numbers

---

This expression represents a complex number, say  $a + jb$ , and thus

$$Ce^{j\theta} = a + jb \quad (\text{B.6})$$

where the left side of (B.6) is the *exponential form*, and the right side is the *rectangular form*.

Equating real and imaginary parts in (B.5) and (B.6), we get

$$a = C \cos \theta \quad \text{and} \quad b = C \sin \theta \quad (\text{B.7})$$

Squaring and adding the expressions in (B.7), we get

$$a^2 + b^2 = (C \cos \theta)^2 + (C \sin \theta)^2 = C^2 (\cos^2 \theta + \sin^2 \theta) = C^2$$

Then,

$$C^2 = a^2 + b^2$$

or

$$\boxed{C = \sqrt{a^2 + b^2}} \quad (\text{B.8})$$

Also, from (B.7)

$$\frac{b}{a} = \frac{C \sin \theta}{C \cos \theta} = \tan \theta$$

or

$$\boxed{\theta = \tan^{-1}\left(\frac{b}{a}\right)} \quad (\text{B.9})$$

To convert a complex number from rectangular to exponential form, we use the expression

$$\boxed{a + jb = \sqrt{a^2 + b^2} e^{j\left(\tan^{-1} \frac{b}{a}\right)}} \quad (\text{B.10})$$

To convert a complex number from exponential to rectangular form, we use the expressions

$$\boxed{\begin{aligned} Ce^{j\theta} &= C \cos \theta + jC \sin \theta \\ Ce^{-j\theta} &= C \cos \theta - jC \sin \theta \end{aligned}} \quad (\text{B.11})$$

The *polar form* is essentially the same as the exponential form but the notation is different, that is,

$$\boxed{Ce^{j\theta} = C \angle \theta} \quad (\text{B.12})$$

---

## A Review of Complex Numbers

---

where the left side of (B.12) is the exponential form, and the right side is the polar form.

We must remember that *the phase angle  $\theta$  is always measured with respect to the positive real axis, and rotates in the counterclockwise direction.*

### Example B.6

Convert the following complex numbers to exponential and polar forms:

a.  $3 + j4$

b.  $-1 + j2$

c.  $-2 - j$

d.  $4 - j3$

**Solution:**

a. The real and imaginary components of this complex number are shown in Figure B.2.

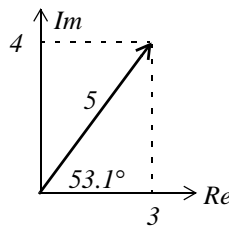


Figure B.2. The components of  $3 + j4$

Then,

$$3 + j4 = \sqrt{3^2 + 4^2} e^{j\left(\tan^{-1}\frac{4}{3}\right)} = 5e^{j53.1^\circ} = 5\angle 53.1^\circ$$

Check with MATLAB:

```
x=3+j*4; magx=abs(x); thetax=angle(x)*180/pi; disp(magx); disp(thetax)
```

```
5  
53.1301
```

b. The real and imaginary components of this complex number are shown in Figure B.3.

Then,

$$-1 + j2 = \sqrt{1^2 + 2^2} e^{j\left(\tan^{-1}\frac{2}{-1}\right)} = \sqrt{5}e^{j116.6^\circ} = \sqrt{5}\angle 116.6^\circ$$

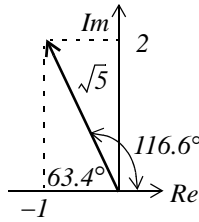


Figure B.3. The components of  $-1 + j2$

Check with MATLAB:

```
y=-1+j*2; magy=abs(y); thetay=angle(y)*180/pi; disp(magy); disp(thetay)
2.2361
116.5651
```

c. The real and imaginary components of this complex number are shown in Figure B.4.

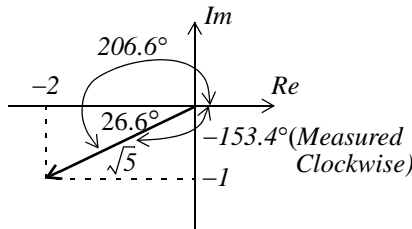


Figure B.4. The components of  $-2 - j$

Then,

$$-2-j = \sqrt{2^2 + 1^2} e^{j\left(\tan^{-1}\frac{-1}{-2}\right)} = \sqrt{5} e^{j206.6^\circ} = \sqrt{5} \angle 206.6^\circ = \sqrt{5} e^{j(-153.4)^\circ} = \sqrt{5} \angle -153.4^\circ$$

Check with MATLAB:

```
v=-2-j*1; magv=abs(v); thetav=angle(v)*180/pi; disp(magv); disp(thetav)
2.2361
-153.4349
```

d. The real and imaginary components of this complex number are shown in Figure B.5.

Then,

$$4-j3 = \sqrt{4^2 + 3^2} e^{j\left(\tan^{-1}\frac{-3}{4}\right)} = 5 e^{j323.1^\circ} = 5 \angle 323.1^\circ = 5 e^{-j36.9^\circ} = 5 \angle -36.9^\circ$$

# A Review of Complex Numbers

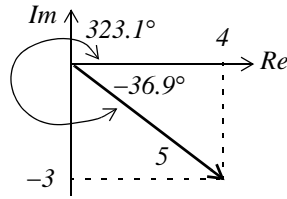


Figure B.5. The components of  $4 - j3$

Check with MATLAB:

```
w=4-j*3; magw=abs(w); thetaw=angle(w)*180/pi; disp(magw); disp(thetaw)
```

```
5
-36.8699
```

## Example B.7

Express the complex number  $-2\angle 30^\circ$  in exponential and in rectangular forms.

### Solution:

We recall that  $-1 = j^2$ . Since each  $j$  rotates a vector by  $90^\circ$  counterclockwise, then  $-2\angle 30^\circ$  is the same as  $2\angle 30^\circ$  rotated counterclockwise by  $180^\circ$ . Therefore,

$$-2\angle 30^\circ = 2\angle(30^\circ + 180^\circ) = 2\angle 210^\circ = 2\angle -150^\circ$$

The components of this complex number are shown in Figure B.6.

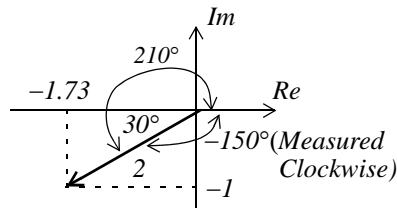


Figure B.6. The components of  $2\angle -150^\circ$

Then,

$$2\angle -150^\circ = 2e^{-j150^\circ} = 2(\cos 150^\circ - j\sin 150^\circ) = 2(-0.866 - j0.5) = -1.73 - j$$

**Note:** The rectangular form is most useful when we add or subtract complex numbers; however, the exponential and polar forms are most convenient when we multiply or divide complex numbers.

To multiply two complex numbers in exponential (or polar) form, we multiply the magnitudes and we add the phase angles, that is, if

$$A = M\angle\theta \quad \text{and} \quad B = N\angle\phi$$



then,

$$AB = MN\angle(\theta + \phi) = Me^{j\theta}Ne^{j\phi} = MNe^{j(\theta + \phi)} \quad (\text{B.13})$$

### Example B.8

Multiply  $A = 10\angle 53.1^\circ$  by  $B = 5\angle -36.9^\circ$

**Solution:**

Multiplication in polar form yields

$$AB = (10 \times 5)\angle[53.1^\circ + (-36.9^\circ)] = 50\angle 16.2^\circ$$

and multiplication in exponential form yields

$$AB = (10e^{j53.1^\circ})(5e^{-j36.9^\circ}) = 50e^{j(53.1^\circ - 36.9^\circ)} = 50e^{j16.2^\circ}$$

To divide one complex number by another when both are expressed in exponential or polar form, we divide the magnitude of the dividend by the magnitude of the divisor, and we subtract the phase angle of the divisor from the phase angle of the dividend, that is, if

$$A = M\angle\theta \quad \text{and} \quad B = N\angle\phi$$

then,

$$\frac{A}{B} = \frac{M}{N}\angle(\theta - \phi) = \frac{Me^{j\theta}}{Ne^{j\phi}} = \frac{M}{N}e^{j(\theta - \phi)} \quad (\text{B.14})$$

### Example B.9

Divide  $A = 10\angle 53.1^\circ$  by  $B = 5\angle -36.9^\circ$

**Solution:**

Division in polar form yields

$$\frac{A}{B} = \frac{10\angle 53.1^\circ}{5\angle -36.9^\circ} = 2\angle[53.1^\circ - (-36.9^\circ)] = 2\angle 90^\circ$$

Division in exponential form yields

$$\frac{A}{B} = \frac{10e^{j53.1^\circ}}{5e^{-j36.9^\circ}} = 2e^{j53.1^\circ}e^{j36.9^\circ} = 2e^{j90^\circ}$$

---

## A Review of Complex Numbers

---

### NOTES

This appendix is an introduction to matrices and matrix operations. Determinants, Cramer's rule, and Gauss's elimination method are reviewed. Some definitions and examples are not applicable to subsequent material presented in this text, but are included for subject continuity, and reference to more advance topics in matrix theory. These are denoted with a dagger (†) and may be skipped.

### C.1 Matrix Definition

A *matrix* is a rectangular array of numbers such as those shown below.

$$\begin{bmatrix} 2 & 3 & 7 \\ 1 & -1 & 5 \end{bmatrix} \quad \text{or} \quad \begin{bmatrix} 1 & 3 & 1 \\ -2 & 1 & -5 \\ 4 & -7 & 6 \end{bmatrix}$$

In general form, a matrix  $A$  is denoted as

$$A = \begin{bmatrix} a_{11} & a_{12} & a_{13} & \cdots & a_{1n} \\ a_{21} & a_{22} & a_{23} & \cdots & a_{2n} \\ a_{31} & a_{32} & a_{33} & \cdots & a_{3n} \\ \cdots & \cdots & \cdots & \cdots & \cdots \\ a_{m1} & a_{m2} & a_{m3} & \cdots & a_{mn} \end{bmatrix} \quad (\text{C.1})$$

The numbers  $a_{ij}$  are the *elements* of the matrix where the index  $i$  indicates the row, and  $j$  indicates the column in which each element is positioned. For instance,  $a_{43}$  indicates the element positioned in the fourth row and third column.

A matrix of  $m$  rows and  $n$  columns is said to be of  $m \times n$  *order matrix*.

If  $m = n$ , the matrix is said to be a *square matrix of order  $m$*  (or  $n$ ). Thus, if a matrix has five rows and five columns, it is said to be a square matrix of order 5.

In a square matrix, the elements  $a_{11}, a_{22}, a_{33}, \dots, a_{nn}$  are called the *main diagonal elements*. Alternatively, we say that the matrix elements  $a_{11}, a_{22}, a_{33}, \dots, a_{nn}$ , are located on the *main diagonal*.

† The sum of the diagonal elements of a square matrix  $A$  is called the *trace*<sup>\*</sup> of  $A$ .

† A matrix in which every element is zero, is called a *zero matrix*.

### C.2 Matrix Operations

Two matrices  $A = [a_{ij}]$  and  $B = [b_{ij}]$  are equal, that is,  $A = B$ , if and only if

$$a_{ij} = b_{ij} \quad i = 1, 2, 3, \dots, m \quad j = 1, 2, 3, \dots, n \quad (\text{C.2})$$

Two matrices are said to be *conformable for addition (subtraction)*, if they are of the same order  $m \times n$ .

If  $A = [a_{ij}]$  and  $B = [b_{ij}]$  are conformable for addition (subtraction), their sum (difference) will be another matrix  $C$  with the same order as  $A$  and  $B$ , where each element of  $C$  is the sum (difference) of the corresponding elements of  $A$  and  $B$ , that is,

$$C = A \pm B = [a_{ij} \pm b_{ij}] \quad (\text{C.3})$$

#### Example C.1

Compute  $A + B$  and  $A - B$  given that

$$A = \begin{bmatrix} 1 & 2 & 3 \\ 0 & 1 & 4 \end{bmatrix} \text{ and } B = \begin{bmatrix} 2 & 3 & 0 \\ -1 & 2 & 5 \end{bmatrix}$$

**Solution:**

$$A + B = \begin{bmatrix} 1+2 & 2+3 & 3+0 \\ 0-1 & 1+2 & 4+5 \end{bmatrix} = \begin{bmatrix} 3 & 5 & 3 \\ -1 & 3 & 9 \end{bmatrix}$$

and

$$A - B = \begin{bmatrix} 1-2 & 2-3 & 3-0 \\ 0+1 & 1-2 & 4-5 \end{bmatrix} = \begin{bmatrix} -1 & -1 & 3 \\ 1 & -1 & -1 \end{bmatrix}$$

Check with MATLAB:

```
A=[1 2 3; 0 1 4]; B=[2 3 0; -1 2 5]; % Define matrices A and B
A+B % Add A and B
```

---

\* Henceforth, all paragraphs and topics preceded by a dagger ( † ) may be skipped. These are discussed in matrix theory textbooks.

```
ans =
     3     5     3
    -1     3     9
```

**A-B** % Subtract B from A

```
ans =
    -1    -1     3
     1    -1    -1
```

If  $k$  is any scalar (a positive or negative number), and not  $[k]$  which is a  $1 \times 1$  matrix, then multiplication of a matrix  $A$  by the scalar  $k$  is the multiplication of every element of  $A$  by  $k$ .

**Example C.2**

Multiply the matrix

$$A = \begin{bmatrix} 1 & -2 \\ 2 & 3 \end{bmatrix}$$

by

- a.  $k_1 = 5$
- b.  $k_2 = -3 + j2$

**Solution:**

a.

$$k_1 \cdot A = 5 \times \begin{bmatrix} 1 & -2 \\ 2 & 3 \end{bmatrix} = \begin{bmatrix} 5 \times 1 & 5 \times (-2) \\ 5 \times 2 & 5 \times 3 \end{bmatrix} = \begin{bmatrix} 5 & -10 \\ 10 & 15 \end{bmatrix}$$

b.

$$k_2 \cdot A = (-3 + j2) \times \begin{bmatrix} 1 & -2 \\ 2 & 3 \end{bmatrix} = \begin{bmatrix} (-3 + j2) \times 1 & (-3 + j2) \times (-2) \\ (-3 + j2) \times 2 & (-3 + j2) \times 3 \end{bmatrix} = \begin{bmatrix} -3 + j2 & 6 - j4 \\ -6 + j4 & -9 + j6 \end{bmatrix}$$

Check with MATLAB:

```
k1=5; k2=(-3 + 2*j);    % Define scalars k1 and k2
A=[1 -2; 2 3];         % Define matrix A
k1*A                   % Multiply matrix A by constant k1
ans =
     5    -10
```



**Solution:**

The dimensions of matrices  $C$  and  $D$  are respectively  $1 \times 3$   $3 \times 1$ ; therefore the product  $C \cdot D$  is feasible, and will result in a  $1 \times 1$ , that is,

$$C \cdot D = [2 \ 3 \ 4] \begin{bmatrix} 1 \\ -1 \\ 2 \end{bmatrix} = [(2) \cdot (1) + (3) \cdot (-1) + (4) \cdot (2)] = [7]$$

The dimensions for  $D$  and  $C$  are respectively  $3 \times 1$   $1 \times 3$  and therefore, the product  $D \cdot C$  is also feasible. Multiplication of these will produce a  $3 \times 3$  matrix as follows:

$$D \cdot C = \begin{bmatrix} 1 \\ -1 \\ 2 \end{bmatrix} [2 \ 3 \ 4] = \begin{bmatrix} (1) \cdot (2) & (1) \cdot (3) & (1) \cdot (4) \\ (-1) \cdot (2) & (-1) \cdot (3) & (-1) \cdot (4) \\ (2) \cdot (2) & (2) \cdot (3) & (2) \cdot (4) \end{bmatrix} = \begin{bmatrix} 2 & 3 & 4 \\ -2 & -3 & -4 \\ 4 & 6 & 8 \end{bmatrix}$$

Check with MATLAB:

```
C=[2 3 4]; D=[1; -1; 2];    % Define matrices C and D
C*D                          % Multiply C by D
```

```
ans =
     7
```

```
D*C                          % Multiply D by C
```

```
ans =
     2     3     4
    -2    -3    -4
     4     6     8
```

Division of one matrix by another, is not defined. However, an equivalent operation exists, and it will become apparent later in this chapter, when we discuss the inverse of a matrix.

### C.3 Special Forms of Matrices

† A square matrix is said to be *upper triangular* when all the elements below the diagonal are zero. The matrix  $A$  of (C.4) is an upper triangular matrix.

In an upper triangular matrix, not all elements above the diagonal need to be non-zero.

† A square matrix is said to be *lower triangular*, when all the elements above the diagonal are zero. The matrix  $B$  of (C.5) is a lower triangular matrix.

$$A = \begin{bmatrix} a_{11} & a_{12} & a_{13} & \dots & a_{1n} \\ 0 & a_{22} & a_{23} & \dots & a_{2n} \\ 0 & 0 & \dots & \dots & \dots \\ \dots & \dots & 0 & \dots & \dots \\ 0 & 0 & 0 & \dots & a_{nn} \end{bmatrix} \quad (\text{C.4})$$

$$B = \begin{bmatrix} a_{11} & 0 & 0 & \dots & 0 \\ a_{21} & a_{22} & 0 & \dots & 0 \\ \dots & \dots & \dots & 0 & 0 \\ \dots & \dots & \dots & \dots & 0 \\ a_{m1} & a_{m2} & a_{m3} & \dots & a_{mn} \end{bmatrix} \quad (\text{C.5})$$

In a lower triangular matrix, not all elements below the diagonal need to be non-zero.

† A square matrix is said to be *diagonal*, if all elements are zero, except those in the diagonal. The matrix  $C$  of (C.6) is a diagonal matrix.

$$C = \begin{bmatrix} a_{11} & 0 & 0 & \dots & 0 \\ 0 & a_{22} & 0 & \dots & 0 \\ 0 & 0 & \dots & 0 & 0 \\ 0 & 0 & 0 & \dots & 0 \\ 0 & 0 & 0 & \dots & a_{nn} \end{bmatrix} \quad (\text{C.6})$$

† A diagonal matrix is called a *scalar matrix*, if  $a_{11} = a_{22} = a_{33} = \dots = a_{nn} = k$  where  $k$  is a scalar. The matrix  $D$  of (C.7) is a scalar matrix with  $k = 4$ .

$$D = \begin{bmatrix} 4 & 0 & 0 & 0 \\ 0 & 4 & 0 & 0 \\ 0 & 0 & 4 & 0 \\ 0 & 0 & 0 & 4 \end{bmatrix} \quad (\text{C.7})$$

A scalar matrix with  $k = 1$ , is called an *identity matrix*  $I$ . Shown below are  $2 \times 2$ ,  $3 \times 3$ , and  $4 \times 4$  identity matrices.



$$\begin{bmatrix} 1 & 0 \\ 0 & 1 \end{bmatrix} \quad \begin{bmatrix} 1 & 0 & 0 \\ 0 & 1 & 0 \\ 0 & 0 & 1 \end{bmatrix} \quad \begin{bmatrix} 1 & 0 & 0 & 0 \\ 0 & 1 & 0 & 0 \\ 0 & 0 & 1 & 0 \\ 0 & 0 & 0 & 1 \end{bmatrix} \quad (\text{C.8})$$

The MATLAB **eye(n)** function displays an  $n \times n$  identity matrix. For example,

```
eye(4)           % Display a 4 by 4 identity matrix
```

```
ans =
```

```

     1     0     0     0
     0     1     0     0
     0     0     1     0
     0     0     0     1
```

Likewise, the **eye(size(A))** function, produces an identity matrix whose size is the same as matrix  $A$ . For example, let matrix  $A$  be defined as

```
A=[1 3 1; -2 1 -5; 4 -7 6]      % Define matrix A
```

```
A =
```

```

     1     3     1
    -2     1    -5
     4    -7     6
```

then,

```
eye(size(A))
```

```
displays
```

```
ans =
```

```

     1     0     0
     0     1     0
     0     0     1
```

† The *transpose of a matrix*  $A$ , denoted as  $A^T$ , is the matrix that is obtained when the rows and columns of matrix  $A$  are interchanged. For example, if

$$A = \begin{bmatrix} 1 & 2 & 3 \\ 4 & 5 & 6 \end{bmatrix} \quad \text{then} \quad A^T = \begin{bmatrix} 1 & 4 \\ 2 & 5 \\ 3 & 6 \end{bmatrix} \quad (\text{C.9})$$

---

## Matrices and Determinants

---

In MATLAB we use the apostrophe (') symbol to denote and obtain the transpose of a matrix. Thus, for the above example,

```
A=[1 2 3; 4 5 6]           % Define matrix A
A =
     1     2     3
     4     5     6
A'                          % Display the transpose of A
ans =
     1     4
     2     5
     3     6
```

† A *symmetric matrix*  $A$  is a matrix such that  $A^T = A$ , that is, the transpose of a matrix  $A$  is the same as  $A$ . An example of a symmetric matrix is shown below.

$$A = \begin{bmatrix} 1 & 2 & 3 \\ 2 & 4 & -5 \\ 3 & -5 & 6 \end{bmatrix} \quad A^T = \begin{bmatrix} 1 & 2 & 3 \\ 2 & 4 & -5 \\ 3 & -5 & 6 \end{bmatrix} = A \quad (\text{C.10})$$

† If a matrix  $A$  has complex numbers as elements, the matrix obtained from  $A$  by replacing each element by its conjugate, is called the *conjugate of  $A$* , and it is denoted as  $A^*$

An example is shown below.

$$A = \begin{bmatrix} 1+j2 & j \\ 3 & 2-j3 \end{bmatrix} \quad A^* = \begin{bmatrix} 1-j2 & -j \\ 3 & 2+j3 \end{bmatrix}$$

MATLAB has two built-in functions which compute the complex conjugate of a number. The first, **conj(x)**, computes the complex conjugate of any complex number, and the second, **conj(A)**, computes the conjugate of a matrix  $A$ . Using MATLAB with the matrix  $A$  defined as above, we get

```
A = [1+2j j; 3 2-3j]       % Define and display matrix A
A =
 1.0000+ 2.0000i      0+ 1.0000i
 3.0000              2.0000- 3.0000i
conj_A=conj(A)         % Compute and display the conjugate of A
conj_A =
```

$$\begin{array}{r} 1.0000- 2.0000i \\ 3.0000 \end{array} \quad \begin{array}{r} 0- 1.0000i \\ 2.0000+ 3.0000i \end{array}$$

† A square matrix  $A$  such that  $A^T = -A$  is called *skew-symmetric*. For example,

$$A = \begin{bmatrix} 0 & 2 & -3 \\ -2 & 0 & -4 \\ 3 & 4 & 0 \end{bmatrix} \quad A^T = \begin{bmatrix} 0 & -2 & 3 \\ 2 & 0 & 4 \\ -3 & -4 & 0 \end{bmatrix} = -A$$

Therefore, matrix  $A$  above is skew symmetric.

† A square matrix  $A$  such that  $A^{T*} = A$  is called *Hermitian*. For example,

$$A = \begin{bmatrix} 1 & 1-j & 2 \\ 1+j & 3 & j \\ 2 & -j & 0 \end{bmatrix} \quad A^T = \begin{bmatrix} 1 & 1+j & 2 \\ 1-j & 3 & -j \\ 2 & j & 0 \end{bmatrix} \quad A^{T*} = \begin{bmatrix} 1 & 1+j & 2 \\ 1-j & 3 & -j \\ 2 & j & 0 \end{bmatrix} = A$$

Therefore, matrix  $A$  above is Hermitian.

† A square matrix  $A$  such that  $A^{T*} = -A$  is called *skew-Hermitian*. For example,

$$A = \begin{bmatrix} j & 1-j & 2 \\ -1-j & 3j & j \\ -2 & j & 0 \end{bmatrix} \quad A^T = \begin{bmatrix} j & -1-j & -2 \\ 1-j & 3j & j \\ 2 & j & 0 \end{bmatrix} \quad A^{T*} = \begin{bmatrix} -j & -1+j & -2 \\ 1+j & -3j & -j \\ 2 & -j & 0 \end{bmatrix} = -A$$

Therefore, matrix  $A$  above is skew-Hermitian.

## C.4 Determinants

Let matrix  $A$  be defined as the square matrix

$$A = \begin{bmatrix} a_{11} & a_{12} & a_{13} & \dots & a_{1n} \\ a_{21} & a_{22} & a_{23} & \dots & a_{2n} \\ a_{31} & a_{32} & a_{33} & \dots & a_{3n} \\ \dots & \dots & \dots & \dots & \dots \\ a_{n1} & a_{n2} & a_{n3} & \dots & a_{nn} \end{bmatrix} \tag{C.11}$$

then, the *determinant of  $A$* , denoted as  $\det A$ , is defined as

---

## Matrices and Determinants

---

$$\begin{aligned} \det A = & a_{11}a_{22}a_{33}\dots a_{nn} + a_{12}a_{23}a_{34}\dots a_{n1} + a_{13}a_{24}a_{35}\dots a_{n2} + \dots \\ & - a_{n1}\dots a_{22}a_{13}\dots - a_{n2}\dots a_{23}a_{14} - a_{n3}\dots a_{24}a_{15} - \dots \end{aligned} \quad (\text{C.12})$$

The determinant of a square matrix of order  $n$  is referred to as *determinant of order  $n$* .

Let  $A$  be a determinant of order 2, that is,

$$A = \begin{bmatrix} a_{11} & a_{12} \\ a_{21} & a_{22} \end{bmatrix} \quad (\text{C.13})$$

Then,

$$\det A = a_{11}a_{22} - a_{21}a_{12} \quad (\text{C.14})$$

### Example C.4

Matrices  $A$  and  $B$  are defined as

$$A = \begin{bmatrix} 1 & 2 \\ 3 & 4 \end{bmatrix} \text{ and } B = \begin{bmatrix} 2 & -1 \\ 2 & 0 \end{bmatrix}$$

Compute  $\det A$  and  $\det B$ .

**Solution:**

$$\begin{aligned} \det A &= 1 \cdot 4 - 3 \cdot 2 = 4 - 6 = -2 \\ \det B &= 2 \cdot 0 - 2 \cdot (-1) = 0 - (-2) = 2 \end{aligned}$$

Check with MATLAB:

```
A=[1 2; 3 4]; B=[2 -1; 2 0];      % Define matrices A and B
det(A)                            % Compute the determinant of A
```

```
ans =
    -2
```

```
det(B)                            % Compute the determinant of B
```

```
ans =
     2
```

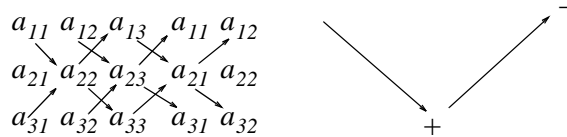
Let  $A$  be a matrix of order 3, that is,

$$A = \begin{bmatrix} a_{11} & a_{12} & a_{13} \\ a_{21} & a_{22} & a_{23} \\ a_{31} & a_{32} & a_{33} \end{bmatrix} \quad (\text{C.15})$$

then,  $\det A$  is found from

$$\begin{aligned} \det A &= a_{11}a_{22}a_{33} + a_{12}a_{23}a_{31} + a_{11}a_{22}a_{33} \\ &\quad - a_{11}a_{22}a_{33} - a_{11}a_{22}a_{33} - a_{11}a_{22}a_{33} \end{aligned} \tag{C.16}$$

A convenient method to evaluate the determinant of order 3, is to write the first two columns to the right of the  $3 \times 3$  matrix, and add the products formed by the diagonals from upper left to lower right; then subtract the products formed by the diagonals from lower left to upper right as shown on the diagram of the next page. When this is done properly, we obtain (C.16) above.



This method works only with second and third order determinants. To evaluate higher order determinants, we must first compute the *cofactors*; these will be defined shortly.

**Example C.5**

Compute  $\det A$  and  $\det B$  if matrices  $A$  and  $B$  are defined as

$$A = \begin{bmatrix} 2 & 3 & 5 \\ 1 & 0 & 1 \\ 2 & 1 & 0 \end{bmatrix} \quad \text{and} \quad B = \begin{bmatrix} 2 & -3 & -4 \\ 1 & 0 & -2 \\ 0 & -5 & -6 \end{bmatrix}$$

**Solution:**

$$\det A = \begin{array}{ccccc} 2 & 3 & 5 & 2 & 3 \\ 1 & 0 & 1 & 1 & 0 \\ 2 & 1 & 0 & 2 & 1 \end{array}$$

or

$$\begin{aligned} \det A &= (2 \times 0 \times 0) + (3 \times 1 \times 1) + (5 \times 1 \times 1) \\ &\quad - (2 \times 0 \times 5) - (1 \times 1 \times 2) - (0 \times 1 \times 3) = 11 - 2 = 9 \end{aligned}$$

Likewise,

$$\det B = \begin{array}{ccccc} 2 & -3 & -4 & 2 & -3 \\ 1 & 0 & -2 & 1 & -2 \\ 0 & -5 & -6 & 0 & -6 \end{array}$$

or

$$\begin{aligned} \det B &= [2 \times 0 \times (-6)] + [(-3) \times (-2) \times 0] + [(-4) \times 1 \times (-5)] \\ &\quad - [0 \times 0 \times (-4)] - [(-5) \times (-2) \times 2] - [(-6) \times 1 \times (-3)] = 20 - 38 = -18 \end{aligned}$$

Check with MATLAB:

```
A=[2 3 5; 1 0 1; 2 1 0]; det(A)      % Define matrix A and compute detA
ans =
     9
```

```
B=[2 -3 -4; 1 0 -2; 0 -5 -6]; det(B) % Define matrix B and compute detB
ans =
    -18
```

### C.5 Minors and Cofactors

Let matrix  $A$  be defined as the square matrix of order  $n$  as shown below.

$$A = \begin{bmatrix} a_{11} & a_{12} & a_{13} & \dots & a_{1n} \\ a_{21} & a_{22} & a_{23} & \dots & a_{2n} \\ a_{31} & a_{32} & a_{33} & \dots & a_{3n} \\ \dots & \dots & \dots & \dots & \dots \\ a_{n1} & a_{n2} & a_{n3} & \dots & a_{nn} \end{bmatrix} \quad (\text{C.17})$$

If we remove the elements of its  $i$ th row, and  $j$ th column, the remaining  $n - 1$  square matrix is called the *minor of  $A$* , and it is denoted as  $[M_{ij}]$ .

The signed minor  $(-1)^{i+j}[M_{ij}]$  is called the *cofactor* of  $a_{ij}$  and it is denoted as  $\alpha_{ij}$ .

#### Example C.6

Matrix  $A$  is defined as

$$A = \begin{bmatrix} a_{11} & a_{12} & a_{13} \\ a_{21} & a_{22} & a_{23} \\ a_{31} & a_{32} & a_{33} \end{bmatrix} \quad (\text{C.18})$$

Compute the minors  $[M_{11}]$ ,  $[M_{12}]$ ,  $[M_{13}]$  and the cofactors  $\alpha_{11}$ ,  $\alpha_{12}$  and  $\alpha_{13}$ .

**Solution:**

$$[M_{11}] = \begin{bmatrix} a_{22} & a_{23} \\ a_{32} & a_{33} \end{bmatrix} \quad [M_{12}] = \begin{bmatrix} a_{21} & a_{23} \\ a_{31} & a_{33} \end{bmatrix} \quad [M_{13}] = \begin{bmatrix} a_{21} & a_{22} \\ a_{31} & a_{32} \end{bmatrix}$$

and

$$\alpha_{11} = (-1)^{1+1} [M_{11}] = [M_{11}] \quad \alpha_{12} = (-1)^{1+2} [M_{12}] = -[M_{12}] \quad \alpha_{13} = [M_{13}] = (-1)^{1+3} [M_{13}]$$

The remaining minors

$$[M_{21}], [M_{22}], [M_{23}], [M_{31}], [M_{32}], [M_{33}]$$

and cofactors

$$\alpha_{21}, \alpha_{22}, \alpha_{23}, \alpha_{31}, \alpha_{32}, \text{ and } \alpha_{33}$$

are defined similarly.

### Example C.7

Compute the cofactors of matrix  $A$  defined as

$$A = \begin{bmatrix} 1 & 2 & -3 \\ 2 & -4 & 2 \\ -1 & 2 & -6 \end{bmatrix} \quad (\text{C.19})$$

**Solution:**

$$\alpha_{11} = (-1)^{1+1} \begin{bmatrix} -4 & 2 \\ 2 & -6 \end{bmatrix} = 20 \quad \alpha_{12} = (-1)^{1+2} \begin{bmatrix} 2 & 2 \\ -1 & -6 \end{bmatrix} = 10 \quad (\text{C.20})$$

$$\alpha_{13} = (-1)^{1+3} \begin{bmatrix} 2 & -4 \\ -1 & 2 \end{bmatrix} = 0 \quad \alpha_{21} = (-1)^{2+1} \begin{bmatrix} 2 & -3 \\ 2 & -6 \end{bmatrix} = 6 \quad (\text{C.21})$$

$$\alpha_{22} = (-1)^{2+2} \begin{bmatrix} 1 & -3 \\ -1 & -6 \end{bmatrix} = -9 \quad \alpha_{23} = (-1)^{2+3} \begin{bmatrix} 1 & 2 \\ -1 & 2 \end{bmatrix} = -4 \quad (\text{C.22})$$

$$\alpha_{31} = (-1)^{3+1} \begin{bmatrix} 2 & -3 \\ -4 & 2 \end{bmatrix} = -8, \quad \alpha_{32} = (-1)^{3+2} \begin{bmatrix} 1 & -3 \\ 2 & 2 \end{bmatrix} = -8 \quad (\text{C.23})$$

$$\alpha_{33} = (-1)^{3+3} \begin{bmatrix} 1 & 2 \\ 2 & -4 \end{bmatrix} = -8 \quad (\text{C.24})$$

---

## Matrices and Determinants

---

It is useful to remember that the signs of the cofactors follow the pattern

$$\begin{array}{cccccc} + & - & + & - & + & \\ & - & + & - & + & - \\ & & + & - & + & - \\ & & & - & + & - \\ & & & & + & - \\ & & & & & + & - & + \end{array}$$

that is, the cofactors on the diagonals have the same sign as their minors.

Let  $A$  be a square matrix of any size; the value of the determinant of  $A$  is the sum of the products obtained by multiplying each element of *any* row or *any* column by its cofactor.

### Example C.8

Matrix  $A$  is defined as

$$A = \begin{bmatrix} 1 & 2 & -3 \\ 2 & -4 & 2 \\ -1 & 2 & -6 \end{bmatrix} \quad (\text{C.25})$$

Compute the determinant of  $A$  using the elements of the first row.

**Solution:**

$$\det A = 1 \begin{vmatrix} -4 & 2 \\ 2 & -6 \end{vmatrix} - 2 \begin{vmatrix} 2 & 2 \\ -1 & -6 \end{vmatrix} - 3 \begin{vmatrix} 2 & -4 \\ -1 & 2 \end{vmatrix} = 1 \times 20 - 2 \times (-10) - 3 \times 0 = 40$$

Check with MATLAB:

```
A=[1 2 -3; 2 -4 2; -1 2 -6];det(A) % Define matrix A and compute detA
```

```
ans =  
40
```

We must use the above procedure to find the determinant of a matrix  $A$  of order 4 or higher. Thus, a fourth-order determinant can first be expressed as the sum of the products of the elements of its first row by its cofactor as shown below.

Determinants of order five or higher can be evaluated similarly.



$$\begin{aligned}
 A &= \begin{bmatrix} a_{11} & a_{12} & a_{13} & a_{14} \\ a_{21} & a_{22} & a_{23} & a_{24} \\ a_{31} & a_{32} & a_{33} & a_{34} \\ a_{41} & a_{42} & a_{43} & a_{44} \end{bmatrix} = a_{11} \begin{bmatrix} a_{22} & a_{23} & a_{24} \\ a_{32} & a_{33} & a_{34} \\ a_{42} & a_{43} & a_{44} \end{bmatrix} - a_{21} \begin{bmatrix} a_{12} & a_{13} & a_{14} \\ a_{32} & a_{33} & a_{34} \\ a_{42} & a_{43} & a_{44} \end{bmatrix} \\
 &\quad + a_{31} \begin{bmatrix} a_{12} & a_{13} & a_{14} \\ a_{22} & a_{23} & a_{24} \\ a_{42} & a_{43} & a_{44} \end{bmatrix} - a_{41} \begin{bmatrix} a_{12} & a_{13} & a_{14} \\ a_{22} & a_{23} & a_{24} \\ a_{32} & a_{33} & a_{34} \end{bmatrix}
 \end{aligned} \tag{C.26}$$

**Example C.9**

Compute the value of the determinant of the matrix  $A$  defined as

$$A = \begin{bmatrix} 2 & -1 & 0 & -3 \\ -1 & 1 & 0 & -1 \\ 4 & 0 & 3 & -2 \\ -3 & 0 & 0 & 1 \end{bmatrix} \tag{C.27}$$

**Solution:**

Using the above procedure, we will multiply each element of the first column by its cofactor. Then,

$$\begin{aligned}
 A &= 2 \underbrace{\begin{bmatrix} 1 & 0 & -1 \\ 0 & 3 & -2 \\ 0 & 0 & 1 \end{bmatrix}}_{[a]} - (-1) \underbrace{\begin{bmatrix} -1 & 0 & -3 \\ 0 & 3 & -2 \\ 0 & 0 & 1 \end{bmatrix}}_{[b]} + 4 \underbrace{\begin{bmatrix} -1 & 0 & -3 \\ 1 & 0 & -1 \\ 0 & 0 & 1 \end{bmatrix}}_{[c]} - (-3) \underbrace{\begin{bmatrix} -1 & 0 & -3 \\ 1 & 0 & -1 \\ 0 & 3 & -2 \end{bmatrix}}_{[d]}
 \end{aligned}$$

Next, using the procedure of Example C.5 or Example C.8, we find

$$[a] = 6, [b] = -3, [c] = 0, [d] = -36$$

and thus

$$\det A = [a] + [b] + [c] + [d] = 6 - 3 + 0 - 36 = -33$$

We can verify our answer with MATLAB as follows:

$$A = [2 \ -1 \ 0 \ -3; -1 \ 1 \ 0 \ -1; 4 \ 0 \ 3 \ -2; -3 \ 0 \ 0 \ 1]; \text{delta} = \det(A)$$

$$\begin{aligned}
 \text{delta} &= \\
 & -33
 \end{aligned}$$

Some useful properties of determinants are given below.

---

## Matrices and Determinants

---

**Property 1:** *If all elements of one row or one column are zero, the determinant is zero.* An example of this is the determinant of the cofactor [c] above.

**Property 2:** *If all the elements of one row or column are m times the corresponding elements of another row or column, the determinant is zero.* For example, if

$$A = \begin{bmatrix} 2 & 4 & 1 \\ 3 & 6 & 1 \\ 1 & 2 & 1 \end{bmatrix} \quad (\text{C.28})$$

then,

$$\det A = \begin{vmatrix} 2 & 4 & 1 \\ 3 & 6 & 1 \\ 1 & 2 & 1 \end{vmatrix} \begin{vmatrix} 2 & 4 \\ 3 & 6 \\ 1 & 2 \end{vmatrix} = 12 + 4 + 6 - 6 - 4 - 12 = 0 \quad (\text{C.29})$$

Here,  $\det A$  is zero because the second column in  $A$  is 2 times the first column.

Check with MATLAB:

```
A=[2 4 1; 3 6 1; 1 2 1];det(A)
```

```
ans =  
0
```

**Property 3:** *If two rows or two columns of a matrix are identical, the determinant is zero.* This follows from Property 2 with  $m = 1$ .

### C.6 Cramer's Rule

Let us consider the systems of the three equations below

$$\begin{aligned} a_{11}x + a_{12}y + a_{13}z &= A \\ a_{21}x + a_{22}y + a_{23}z &= B \\ a_{31}x + a_{32}y + a_{33}z &= C \end{aligned} \quad (\text{C.30})$$

and let

$$\Delta = \begin{vmatrix} a_{11} & a_{12} & a_{13} \\ a_{21} & a_{22} & a_{23} \\ a_{31} & a_{32} & a_{33} \end{vmatrix} \quad D_1 = \begin{vmatrix} A & a_{12} & a_{13} \\ B & a_{22} & a_{23} \\ C & a_{32} & a_{33} \end{vmatrix} \quad D_2 = \begin{vmatrix} a_{11} & A & a_{13} \\ a_{21} & B & a_{23} \\ a_{31} & C & a_{33} \end{vmatrix} \quad D_3 = \begin{vmatrix} a_{11} & a_{12} & A \\ a_{21} & a_{22} & B \\ a_{31} & a_{32} & C \end{vmatrix}$$

*Cramer's rule* states that the unknowns  $x$ ,  $y$ , and  $z$  can be found from the relations

$$x = \frac{D_1}{\Delta} \quad y = \frac{D_2}{\Delta} \quad z = \frac{D_3}{\Delta} \quad (\text{C.31})$$

provided that the determinant  $\Delta$  (delta) is not zero.

We observe that the numerators of (C.31) are determinants that are formed from  $\Delta$  by the substitution of the known values  $A$ ,  $B$ , and  $C$ , for the coefficients of the desired unknown.

Cramer's rule applies to systems of two or more equations.

If (C.30) is a homogeneous set of equations, that is, if  $A = B = C = 0$ , then,  $D_1$ ,  $D_2$ , and  $D_3$  are all zero as we found in Property 1 above. Then,  $x = y = z = 0$  also.

### Example C.10

Use Cramer's rule to find  $v_1$ ,  $v_2$ , and  $v_3$  if

$$\begin{aligned} 2v_1 - 5 - v_2 + 3v_3 &= 0 \\ -2v_3 - 3v_2 - 4v_1 &= 8 \\ v_2 + 3v_1 - 4 - v_3 &= 0 \end{aligned} \quad (\text{C.32})$$

and verify your answers with MATLAB.

#### Solution:

Rearranging the unknowns  $v$ , and transferring known values to the right side, we get

$$\begin{aligned} 2v_1 - v_2 + 3v_3 &= 5 \\ -4v_1 - 3v_2 - 2v_3 &= 8 \\ 3v_1 + v_2 - v_3 &= 4 \end{aligned} \quad (\text{C.33})$$

Now, by Cramer's rule,

$$\Delta = \begin{vmatrix} 2 & -1 & 3 \\ -4 & -3 & -2 \\ 3 & 1 & -1 \end{vmatrix} = \begin{vmatrix} 2 & -1 \\ -4 & -3 \\ 3 & 1 \end{vmatrix} = 6 + 6 - 12 + 27 + 4 + 4 = 35$$

$$D_1 = \begin{vmatrix} 5 & -1 & 3 \\ 8 & -3 & -2 \\ 4 & 1 & -1 \end{vmatrix} = \begin{vmatrix} 5 & -1 \\ 8 & -3 \\ 4 & 1 \end{vmatrix} = 15 + 8 + 24 + 36 + 10 - 8 = 85$$

$$D_2 = \begin{vmatrix} 2 & 5 & 3 \\ -4 & 8 & -2 \\ 3 & 4 & -1 \end{vmatrix} \begin{vmatrix} 2 & 5 \\ -4 & 8 \\ 3 & 4 \end{vmatrix} = -16 - 30 - 48 - 72 + 16 - 20 = -170$$

$$D_3 = \begin{vmatrix} 2 & -1 & 5 \\ -4 & -3 & 8 \\ 3 & 1 & 4 \end{vmatrix} \begin{vmatrix} 2 & -1 \\ -4 & -3 \\ 3 & 1 \end{vmatrix} = -24 - 24 - 20 + 45 - 16 - 16 = -55$$

Then, using (C.31) we get

$$x_1 = \frac{D_1}{\Delta} = \frac{85}{35} = \frac{17}{7} \quad x_2 = \frac{D_2}{\Delta} = \frac{-170}{35} = \frac{-34}{7} \quad x_3 = \frac{D_3}{\Delta} = \frac{-55}{35} = \frac{-11}{7} \quad (\text{C.34})$$

We will verify with MATLAB as follows.

% The following code will compute and display the values of  $v_1$ ,  $v_2$  and  $v_3$ .

```
format rat % Express answers in ratio form
B=[2 -1 3; -4 -3 -2; 3 1 -1]; % The elements of the determinant D of matrix B
delta=det(B); % Compute the determinant D of matrix B
d1=[5 -1 3; 8 -3 -2; 4 1 -1]; % The elements of D1
detd1=det(d1); % Compute the determinant of D1
d2=[2 5 3; -4 8 -2; 3 4 -1]; % The elements of D2
detd2=det(d2); % Compute the determinant of D2
d3=[2 -1 5; -4 -3 8; 3 1 4]; % The elements of D3
detd3=det(d3); % Compute the determinant of D3
v1=detd1/delta; % Compute the value of v1
v2=detd2/delta; % Compute the value of v2
v3=detd3/delta; % Compute the value of v3
%
disp('v1=');disp(v1); % Display the value of v1
disp('v2=');disp(v2); % Display the value of v2
disp('v3=');disp(v3); % Display the value of v3
```

```
v1=
    17/7
v2=
   -34/7
v3=
   -11/7
```

These are the same values as in (C.34)

## C.7 Gaussian Elimination Method

We can find the unknowns in a system of two or more equations also by the *Gaussian elimination method*. With this method, the objective is to eliminate one unknown at a time. This can be done by multiplying the terms of any of the equations of the system by a number such that we can add (or subtract) this equation to another equation in the system so that one of the unknowns will be eliminated. Then, by substitution to another equation with two unknowns, we can find the second unknown. Subsequently, substitution of the two values found can be made into an equation with three unknowns from which we can find the value of the third unknown. This procedure is repeated until all unknowns are found. This method is best illustrated with the following example which consists of the same equations as the previous example.

### Example C.11

Use the Gaussian elimination method to find  $v_1$ ,  $v_2$ , and  $v_3$  of the system of equations

$$\begin{aligned} 2v_1 - v_2 + 3v_3 &= 5 \\ -4v_1 - 3v_2 - 2v_3 &= 8 \\ 3v_1 + v_2 - v_3 &= 4 \end{aligned} \quad (\text{C.35})$$

#### Solution:

As a first step, we add the first equation of (C.35) with the third to eliminate the unknown  $v_2$  and we obtain the following equation.

$$5v_1 + 2v_3 = 9 \quad (\text{C.36})$$

Next, we multiply the third equation of (C.35) by 3, and we add it with the second to eliminate  $v_2$ . Then, we obtain the following equation.

$$5v_1 - 5v_3 = 20 \quad (\text{C.37})$$

Subtraction of (C.37) from (C.36) yields

$$7v_3 = -11 \quad \text{or} \quad v_3 = -\frac{11}{7} \quad (\text{C.38})$$

Now, we can find the unknown  $v_1$  from either (C.36) or (C.37). By substitution of (C.38) into (C.36) we get

$$5v_1 + 2 \cdot \left(-\frac{11}{7}\right) = 9 \quad \text{or} \quad v_1 = \frac{17}{7} \quad (\text{C.39})$$

Finally, we can find the last unknown  $v_2$  from any of the three equations of (C.35). By substitution into the first equation we get

$$v_2 = 2v_1 + 3v_3 - 5 = \frac{34}{7} - \frac{33}{7} - \frac{35}{7} = -\frac{34}{7} \quad (\text{C.40})$$

These are the same values as those we found in Example C.10.

The Gaussian elimination method works well if the coefficients of the unknowns are small integers, as in Example C.11. However, it becomes impractical if the coefficients are large or fractional numbers.

### C.8 The Adjoint of a Matrix

Let us assume that  $A$  is an  $n$  square matrix and  $\alpha_{ij}$  is the cofactor of  $a_{ij}$ . Then *the adjoint of  $A$* , denoted as  $\text{adj}A$ , is defined as the  $n$  square matrix below.

$$\text{adj}A = \begin{bmatrix} \alpha_{11} & \alpha_{21} & \alpha_{31} & \cdots & \alpha_{n1} \\ \alpha_{12} & \alpha_{22} & \alpha_{32} & \cdots & \alpha_{n2} \\ \alpha_{13} & \alpha_{23} & \alpha_{33} & \cdots & \alpha_{n3} \\ \cdots & \cdots & \cdots & \cdots & \cdots \\ \alpha_{1n} & \alpha_{2n} & \alpha_{3n} & \cdots & \alpha_{nn} \end{bmatrix} \quad (\text{C.41})$$

We observe that the cofactors of the elements of the  $i$ th row (column) of  $A$  are the elements of the  $i$ th column (row) of  $\text{adj}A$ .

#### Example C.12

Compute  $\text{adj}A$  if Matrix  $A$  is defined as

$$A = \begin{bmatrix} 1 & 2 & 3 \\ 1 & 3 & 4 \\ 1 & 4 & 3 \end{bmatrix} \quad (\text{C.42})$$

**Solution:**

$$\text{adj}A = \begin{bmatrix} \begin{bmatrix} 3 & 4 \\ 4 & 3 \end{bmatrix} & -\begin{bmatrix} 2 & 3 \\ 4 & 3 \end{bmatrix} & \begin{bmatrix} 2 & 3 \\ 3 & 4 \end{bmatrix} \\ -\begin{bmatrix} 1 & 4 \\ 1 & 3 \end{bmatrix} & \begin{bmatrix} 1 & 3 \\ 1 & 3 \end{bmatrix} & -\begin{bmatrix} 2 & 3 \\ 3 & 4 \end{bmatrix} \\ \begin{bmatrix} 1 & 3 \\ 1 & 4 \end{bmatrix} & -\begin{bmatrix} 1 & 2 \\ 1 & 4 \end{bmatrix} & \begin{bmatrix} 1 & 2 \\ 1 & 3 \end{bmatrix} \end{bmatrix} = \begin{bmatrix} -7 & 6 & -1 \\ 1 & 0 & -1 \\ 1 & -2 & 1 \end{bmatrix}$$

## C.9 Singular and Non-Singular Matrices

An  $n$  square matrix  $A$  is called *singular* if  $\det A = 0$ ; if  $\det A \neq 0$ ,  $A$  is called *non-singular*.

### Example C.13

Matrix  $A$  is defined as

$$A = \begin{bmatrix} 1 & 2 & 3 \\ 2 & 3 & 4 \\ 3 & 5 & 7 \end{bmatrix} \quad (\text{C.43})$$

Determine whether this matrix is singular or non-singular.

**Solution:**

$$\det A = \begin{vmatrix} 1 & 2 & 3 \\ 2 & 3 & 4 \\ 3 & 5 & 7 \end{vmatrix} \begin{matrix} 1 & 2 \\ 2 & 3 \\ 3 & 5 \end{matrix} = 21 + 24 + 30 - 27 - 20 - 28 = 0$$

Therefore, matrix  $A$  is singular.

## C.10 The Inverse of a Matrix

If  $A$  and  $B$  are  $n$  square matrices such that  $AB = BA = I$ , where  $I$  is the identity matrix,  $B$  is called the *inverse* of  $A$ , denoted as  $B = A^{-1}$ , and likewise,  $A$  is called the inverse of  $B$ , that is,  $A = B^{-1}$ .

If a matrix  $A$  is non-singular, we can compute its inverse  $A^{-1}$  from the relation

$$A^{-1} = \frac{1}{\det A} \text{adj} A \quad (\text{C.44})$$

### Example C.14

Matrix  $A$  is defined as

$$A = \begin{bmatrix} 1 & 2 & 3 \\ 1 & 3 & 4 \\ 1 & 4 & 3 \end{bmatrix} \quad (\text{C.45})$$

---

## Matrices and Determinants

---

Compute its inverse, that is, find  $A^{-1}$

**Solution:**

Here,  $\det A = 9 + 8 + 12 - 9 - 16 - 6 = -2$ , and since this is a non-zero value, it is possible to compute the inverse of  $A$  using (C.44).

From Example C.12,

$$\text{adj}A = \begin{bmatrix} -7 & 6 & -1 \\ 1 & 0 & -1 \\ 1 & -2 & 1 \end{bmatrix}$$

Then,

$$A^{-1} = \frac{1}{\det A} \text{adj}A = \frac{1}{-2} \begin{bmatrix} -7 & 6 & -1 \\ 1 & 0 & -1 \\ 1 & -2 & 1 \end{bmatrix} = \begin{bmatrix} 3.5 & -3 & 0.5 \\ -0.5 & 0 & 0.5 \\ -0.5 & 1 & -0.5 \end{bmatrix} \quad (\text{C.46})$$

Check with MATLAB:

```
A=[1 2 3; 1 3 4; 1 4 3], invA=inv(A) % Define matrix A and compute its inverse
```

```
A =
```

```
    1    2    3
    1    3    4
    1    4    3
```

```
invA =
```

```
    3.5000   -3.0000    0.5000
   -0.5000    0.0000    0.5000
   -0.5000    1.0000   -0.5000
```

Multiplication of a matrix  $A$  by its inverse  $A^{-1}$  produces the identity matrix  $I$ , that is,

$$AA^{-1} = I \text{ or } A^{-1}A = I \quad (\text{C.47})$$

### Example C.15

Prove the validity of (C.47) for the Matrix  $A$  defined as

$$A = \begin{bmatrix} 4 & 3 \\ 2 & 2 \end{bmatrix}$$



**Proof:**

$$\det A = 8 - 6 = 2 \quad \text{and} \quad \text{adj}A = \begin{bmatrix} 2 & -3 \\ -2 & 4 \end{bmatrix}$$

Then,

$$A^{-1} = \frac{1}{\det A} \text{adj}A = \frac{1}{2} \begin{bmatrix} 2 & -3 \\ -2 & 4 \end{bmatrix} = \begin{bmatrix} 1 & -3/2 \\ -1 & 2 \end{bmatrix}$$

and

$$AA^{-1} = \begin{bmatrix} 4 & 3 \\ 2 & 2 \end{bmatrix} \begin{bmatrix} 1 & -3/2 \\ -1 & 2 \end{bmatrix} = \begin{bmatrix} 4-3 & -6+6 \\ 2-2 & -3+4 \end{bmatrix} = \begin{bmatrix} 1 & 0 \\ 0 & 1 \end{bmatrix} = I$$

### C.11 Solution of Simultaneous Equations with Matrices

Consider the relation

$$AX = B \tag{C.48}$$

where  $A$  and  $B$  are matrices whose elements are known, and  $X$  is a matrix (a column vector) whose elements are the unknowns. We assume that  $A$  and  $X$  are conformable for multiplication. Multiplication of both sides of (C.48) by  $A^{-1}$  yields:

$$A^{-1}AX = A^{-1}B = IX = A^{-1}B \tag{C.49}$$

or

$$\boxed{X = A^{-1}B} \tag{C.50}$$

Therefore, we can use (C.50) to solve any set of simultaneous equations that have solutions. We will refer to this method as the *inverse matrix method of solution* of simultaneous equations.

#### Example C.16

For the system of the equations

$$\begin{cases} 2x_1 + 3x_2 + x_3 = 9 \\ x_1 + 2x_2 + 3x_3 = 6 \\ 3x_1 + x_2 + 2x_3 = 8 \end{cases} \tag{C.51}$$

compute the unknowns  $x_1$ ,  $x_2$ , and  $x_3$  using the inverse matrix method.

### Solution:

In matrix form, the given set of equations is  $AX = B$  where

$$A = \begin{bmatrix} 2 & 3 & 1 \\ 1 & 2 & 3 \\ 3 & 1 & 2 \end{bmatrix}, \quad X = \begin{bmatrix} x_1 \\ x_2 \\ x_3 \end{bmatrix}, \quad B = \begin{bmatrix} 9 \\ 6 \\ 8 \end{bmatrix} \quad (\text{C.52})$$

Then,

$$X = A^{-1}B \quad (\text{C.53})$$

or

$$\begin{bmatrix} x_1 \\ x_2 \\ x_3 \end{bmatrix} = \begin{bmatrix} 2 & 3 & 1 \\ 1 & 2 & 3 \\ 3 & 1 & 2 \end{bmatrix}^{-1} \begin{bmatrix} 9 \\ 6 \\ 8 \end{bmatrix} \quad (\text{C.54})$$

Next, we find the determinant  $\det A$ , and the adjoint  $\text{adj}A$

$$\det A = 18 \quad \text{and} \quad \text{adj}A = \begin{bmatrix} 1 & -5 & 7 \\ 7 & 1 & -5 \\ -5 & 7 & 1 \end{bmatrix}$$

Therefore,

$$A^{-1} = \frac{1}{\det A} \text{adj}A = \frac{1}{18} \begin{bmatrix} 1 & -5 & 7 \\ 7 & 1 & -5 \\ -5 & 7 & 1 \end{bmatrix}$$

and by (C.53) we obtain the solution as follows.

$$X = \begin{bmatrix} x_1 \\ x_2 \\ x_3 \end{bmatrix} = \frac{1}{18} \begin{bmatrix} 1 & -5 & 7 \\ 7 & 1 & -5 \\ -5 & 7 & 1 \end{bmatrix} \begin{bmatrix} 9 \\ 6 \\ 8 \end{bmatrix} = \frac{1}{18} \begin{bmatrix} 35 \\ 29 \\ 5 \end{bmatrix} = \begin{bmatrix} 35/18 \\ 29/18 \\ 5/18 \end{bmatrix} = \begin{bmatrix} 1.94 \\ 1.61 \\ 0.28 \end{bmatrix} \quad (\text{C.55})$$

To verify our results, we could use the MATLAB's **inv(A)** function, and then multiply  $A^{-1}$  by  $B$ . However, it is easier to use the *matrix left division* operation  $X = A \setminus B$ ; this is MATLAB's solution of  $A^{-1}B$  for the matrix equation  $A \cdot X = B$ , where matrix  $X$  is the same size as matrix  $B$ . For this example,

$$A = [2 \ 3 \ 1; 1 \ 2 \ 3; 3 \ 1 \ 2]; \quad B = [9 \ 6 \ 8];$$

$$X = A \setminus B$$

$$X =$$

$$\begin{matrix} 1.9444 \\ 1.6111 \\ 0.2778 \end{matrix}$$

**Example C.17**

For the electric circuit of Figure C.1,

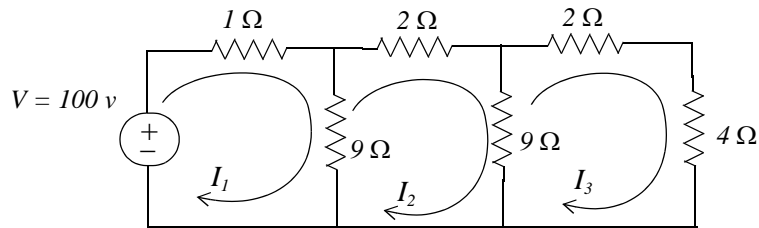


Figure C.1. Circuit for Example C.17

the loop equations are

$$\begin{aligned} 10I_1 - 9I_2 &= 100 \\ -9I_1 + 20I_2 - 9I_3 &= 0 \\ -9I_2 + 15I_3 &= 0 \end{aligned} \tag{C.56}$$

Use the inverse matrix method to compute the values of the currents  $I_1$ ,  $I_2$ , and  $I_3$

**Solution:**

For this example, the matrix equation is  $RI = V$  or  $I = R^{-1}V$ , where

$$R = \begin{bmatrix} 10 & -9 & 0 \\ -9 & 20 & -9 \\ 0 & -9 & 15 \end{bmatrix}, \quad V = \begin{bmatrix} 100 \\ 0 \\ 0 \end{bmatrix} \quad \text{and} \quad I = \begin{bmatrix} I_1 \\ I_2 \\ I_3 \end{bmatrix}$$

The next step is to find  $R^{-1}$ . This is found from the relation

$$R^{-1} = \frac{1}{\det R} \text{adj}R \tag{C.57}$$

---

## Matrices and Determinants

---

Therefore, we find the determinant and the adjoint of  $R$ . For this example, we find that

$$\det R = 975, \quad \text{adj}R = \begin{bmatrix} 219 & 135 & 81 \\ 135 & 150 & 90 \\ 81 & 90 & 119 \end{bmatrix} \quad (\text{C.58})$$

Then,

$$R^{-1} = \frac{1}{\det R} \text{adj}R = \frac{1}{975} \begin{bmatrix} 219 & 135 & 81 \\ 135 & 150 & 90 \\ 81 & 90 & 119 \end{bmatrix}$$

and

$$I = \begin{bmatrix} I_1 \\ I_2 \\ I_3 \end{bmatrix} = \frac{1}{975} \begin{bmatrix} 219 & 135 & 81 \\ 135 & 150 & 90 \\ 81 & 90 & 119 \end{bmatrix} \begin{bmatrix} 100 \\ 0 \\ 0 \end{bmatrix} = \frac{100}{975} \begin{bmatrix} 219 \\ 135 \\ 81 \end{bmatrix} = \begin{bmatrix} 22.46 \\ 13.85 \\ 8.31 \end{bmatrix}$$

Check with MATLAB:

```
R=[10 -9 0; -9 20 -9; 0 -9 15]; V=[100 0 0]'; I=R\V; fprintf('\n');...  
fprintf('I1 = %4.2f \t', I(1)); fprintf('I2 = %4.2f \t', I(2)); fprintf('I3 = %4.2f \t', I(3)); fprintf('\n')
```

```
I1 = 22.46    I2 = 13.85    I3 = 8.31
```

We can also use subscripts to address the individual elements of the matrix. Accordingly, the above code could also have been written as:

```
R(1,1)=10; R(1,2)=-9;          % No need to make entry for A(1,3) since it is zero.  
R(2,1)=-9; R(2,2)=20; R(2,3)=-9; R(3,2)=-9; R(3,3)=15; V=[100 0 0]'; I=R\V; fprintf('\n');...  
fprintf('I1 = %4.2f \t', I(1)); fprintf('I2 = %4.2f \t', I(2)); fprintf('I3 = %4.2f \t', I(3)); fprintf('\n')
```

```
I1 = 22.46    I2 = 13.85    I3 = 8.31
```

Spreadsheets also have the capability of solving simultaneous equations with real coefficients using the inverse matrix method. For instance, we can use Microsoft Excel's **MINVERSE** (Matrix Inverse) and **MMULT** (Matrix Multiplication) functions, to obtain the values of the three currents in Example C.17.

The procedure is as follows:

1. We start with a blank spreadsheet and in a block of cells, say B3:D5, we enter the elements of matrix  $R$  as shown in Figure C.2. Then, we enter the elements of matrix  $V$  in G3:G5.
2. Next, we compute and display the inverse of  $R$ , that is,  $R^{-1}$ . We choose B7:D9 for the elements of this inverted matrix. We format this block for number display with three decimal places. With this range highlighted and making sure that the cell marker is in B7, we type the formula

=MINVERSE(B3:D5)

and we press the *Ctrl-Shift-Enter* keys simultaneously.

We observe that  $R^{-1}$  appears in these cells.

- Now, we choose the block of cells G7:G9 for the values of the current  $I$ . As before, we highlight them, and with the cell marker positioned in G7, we type the formula

=MMULT(B7:D9,G3:G5)

and we press the *Ctrl-Shift-Enter* keys simultaneously. The values of  $I$  then appear in G7:G9.

	A	B	C	D	E	F	G	H
1	Spreadsheet for Matrix Inversion and Matrix Multiplication							
2								
3		10	-9	0			100	
4	R=	-9	20	-9		V=	0	
5		0	-9	15			0	
6								
7		0.225	0.138	0.083			22.462	
8	$R^{-1}$ =	0.138	0.154	0.092		I=	13.846	
9		0.083	0.092	0.122			8.3077	
10								

Figure C.2. Solution of Example C.17 with a spreadsheet

### Example C.18

For the phasor circuit of Figure C.18

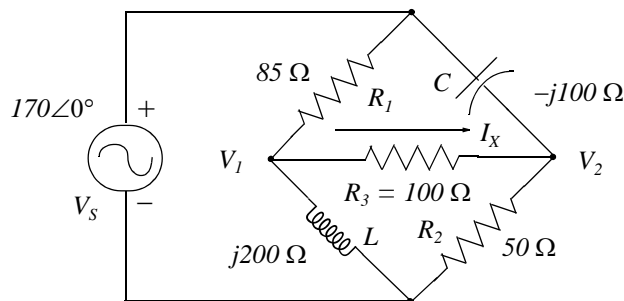


Figure C.3. Circuit for Example C.18

the current  $I_X$  can be found from the relation

$$I_x = \frac{V_1 - V_2}{R_3} \quad (\text{C.59})$$

and the voltages  $V_1$  and  $V_2$  can be computed from the nodal equations

$$\frac{V_1 - 170\angle 0^\circ}{85} + \frac{V_1 - V_2}{100} + \frac{V_1 - 0}{j200} = 0 \quad (\text{C.60})$$

and

$$\frac{V_2 - 170\angle 0^\circ}{-j100} + \frac{V_2 - V_1}{100} + \frac{V_2 - 0}{50} = 0 \quad (\text{C.61})$$

Compute, and express the current  $I_x$  in both rectangular and polar forms by first simplifying like terms, collecting, and then writing the above relations in matrix form as  $YV = I$ , where  $Y = \text{Admittance}$ ,  $V = \text{Voltage}$ , and  $I = \text{Current}$

### Solution:

The  $Y$  matrix elements are the coefficients of  $V_1$  and  $V_2$ . Simplifying and rearranging the nodal equations of (C.60) and (C.61), we get

$$\begin{aligned} (0.0218 - j0.005)V_1 - 0.01V_2 &= 2 \\ -0.01V_1 + (0.03 + j0.01)V_2 &= j1.7 \end{aligned} \quad (\text{C.62})$$

Next, we write (C.62) in matrix form as

$$\underbrace{\begin{bmatrix} 0.0218 - j0.005 & -0.01 \\ -0.01 & 0.03 + j0.01 \end{bmatrix}}_Y \underbrace{\begin{bmatrix} V_1 \\ V_2 \end{bmatrix}}_V = \underbrace{\begin{bmatrix} 2 \\ j1.7 \end{bmatrix}}_I \quad (\text{C.63})$$

where the matrices  $Y$ ,  $V$ , and  $I$  are as indicated.

We will use MATLAB to compute the voltages  $V_1$  and  $V_2$ , and to do all other computations. The code is shown below.

```
Y=[0.0218-0.005j -0.01; -0.01 0.03+0.01j]; I=[2; 1.7j]; V=Y\I;% Define Y, I, and find V
fprintf('\n'); % Insert a line
disp('V1 = '); disp(V(1)); disp('V2 = '); disp(V(2)); % Display values of V1 and V2
```

```
V1 =
1.0490e+002 + 4.9448e+001i
```

$$V_2 = 53.4162 + 55.3439i$$

Next, we find  $I_X$  from

$$R_3 = 100; I_X = (V(1) - V(2)) / R_3 \quad \% \text{ Compute the value of } I_X$$

$$I_X = 0.5149 - 0.0590i$$

This is the rectangular form of  $I_X$ . For the polar form we use

$$\text{mag}I_X = \text{abs}(I_X) \quad \% \text{ Compute the magnitude of } I_X$$

$$\text{mag}I_X = 0.5183$$

$$\text{theta}I_X = \text{angle}(I_X) * 180 / \pi \quad \% \text{ Compute angle theta in degrees}$$

$$\text{theta}I_X = -6.5326$$

Therefore, in polar form

$$I_X = 0.518 \angle -6.53^\circ$$

Spreadsheets have limited capabilities with complex numbers, and thus we cannot use them to compute matrices that include complex numbers in their elements as in Example C.18

### C.12 Exercises

For Exercises 1, 2, and 3 below, the matrices  $A$ ,  $B$ ,  $C$ , and  $D$  are defined as:

$$A = \begin{bmatrix} 1 & -1 & -4 \\ 5 & 7 & -2 \\ 3 & -5 & 6 \end{bmatrix} \quad B = \begin{bmatrix} 5 & 9 & -3 \\ -2 & 8 & 2 \\ 7 & -4 & 6 \end{bmatrix} \quad C = \begin{bmatrix} 4 & 6 \\ -3 & 8 \\ 5 & -2 \end{bmatrix} \quad D = \begin{bmatrix} 1 & -2 & 3 \\ -3 & 6 & -4 \end{bmatrix}$$

- Perform the following computations, if possible. Verify your answers with MATLAB.
  - $A + B$
  - $A + C$
  - $B + D$
  - $C + D$
  - $A - B$
  - $A - C$
  - $B - D$
  - $C - D$
- Perform the following computations, if possible. Verify your answers with MATLAB.
  - $A \cdot B$
  - $A \cdot C$
  - $B \cdot D$
  - $C \cdot D$
  - $B \cdot A$
  - $C \cdot A$
  - $D \cdot A$
  - $D \cdot C$
- Perform the following computations, if possible. Verify your answers with MATLAB.
  - $\det A$
  - $\det B$
  - $\det C$
  - $\det D$
  - $\det(A \cdot B)$
  - $\det(A \cdot C)$
- Solve the following systems of equations using Cramer's rule. Verify your answers with MATLAB.

$$\begin{array}{ll} x_1 - 2x_2 + x_3 = -4 & -x_1 + 2x_2 - 3x_3 + 5x_4 = 14 \\ \text{a. } -2x_1 + 3x_2 + x_3 = 9 & \text{b. } x_1 + 3x_2 + 2x_3 - x_4 = 9 \\ 3x_1 + 4x_2 - 5x_3 = 0 & 3x_1 - 3x_2 + 2x_3 + 4x_4 = 19 \\ & 4x_1 + 2x_2 + 5x_3 + x_4 = 27 \end{array}$$

- Repeat Exercise 4 using the Gaussian elimination method.
- Solve the following systems of equations using the inverse matrix method. Verify your answers with MATLAB.

$$\text{a. } \begin{bmatrix} 1 & 3 & 4 \\ 3 & 1 & -2 \\ 2 & 3 & 5 \end{bmatrix} \cdot \begin{bmatrix} x_1 \\ x_2 \\ x_3 \end{bmatrix} = \begin{bmatrix} -3 \\ -2 \\ 0 \end{bmatrix} \quad \text{b. } \begin{bmatrix} 2 & 4 & 3 & -2 \\ 2 & -4 & 1 & 3 \\ -1 & 3 & -4 & 2 \\ 2 & -2 & 2 & 1 \end{bmatrix} \cdot \begin{bmatrix} x_1 \\ x_2 \\ x_3 \\ x_4 \end{bmatrix} = \begin{bmatrix} 1 \\ 10 \\ -14 \\ 7 \end{bmatrix}$$



# Index

## Symbols

% (percent) symbol in MATLAB A-2

## A

**abs** MATLAB function A-23

adjoint of a matrix - see matrix

admittance 4-2, 4-10

capacitive 4-2

inductive 4-2

aliasing 10-13

all-pass filter - see filter

all-pole filter -see filter

alternate form of the trigonometric

Fourier series - see Fourier series

alternate method of partial fraction

expansion - see partial fraction expansion

amplitude-squared function 11-8

**angle** MATLAB function A-23

area under  $f(t)$  8-15

area under  $F(\omega)$  8-16

attenuation rate 11-9

**axis** MATLAB function A-16, A-22

## B

band-elimination filter - see filter

band-stop filter - see filter

Bessel filter - see filter

bilateral Laplace Transform 2-1

**bilinear** MATLAB function 11-57

bilinear transformation 11-50

**bode** MATLAB function 11-21, 11-48

**box** MATLAB function A-12

**buttap** MATLAB function 11-15, 11-39, 11-40, 11-46

butterfly operation 10-22

Butterworth low-pass filter - see filter

## C

**c2d** MATLAB function 9-46

Cauer filter - see filter

Cayley-Hamilton theorem 5-11

**cheb1ap** MATLAB function 11-32, 11-42

**cheb2ap** MATLAB function 11-35

Chebyshev filters - see filter

**clc** MATLAB function A-2

**clear** MATLAB function A-2

code in MATLAB A-2

cofactor of a matrix - see matrix

**collect** MATLAB function 3-12

column vector in MATLAB A-19

command screen in MATLAB A-1

command window in MATLAB A-1

commas in MATLAB A-8

comment line in MATLAB A-2

complex conjugate A-4, B-3

complex number A-3, B-2

complex poles 3-5

**conj** MATLAB function C-8

conjugate of a complex number - see complex conjugate

conjugate of a matrix - see matrix

conjugate time and frequency functions 8-13

contour integral 2-2, 9-20

contour integration 2-2, 9-20

**conv** MATLAB function A-6

convolution

in the complex frequency domain 2-12

in the continuous time domain 2-11

in the discrete frequency domain 9-9

in the discrete time domain 9-8

in the frequency ( $j\omega$ ) domain 8-15

convolution integral 6-8

graphical evaluation of 6-8

Cooley and Tukey algorithm 10-18

Cramer's rule C-16

## D

**d2c** MATLAB function 9-46

data points in MATLAB A-14

dB/decade 11-9

dB/octave 11-9

DC (average) component in Fourier series - see Fourier series

decade 11-9

decibel scale in MATLAB A-13

decimation in frequency 10-19, 10-20

decimation in time 10-19, 10-20

**deconv** MATLAB function A-6

default in MATLAB A-13

default color in MATLAB A-15

default line in MATLAB A-15

default marker in MATLAB A-15

delta function 1-12  
demo in MATLAB A-2  
DeMoivre's theorem 11-12  
determinant of a matrix - see matrix  
differentiation  
    in complex frequency (s) domain 2-6  
    in frequency ( $j\omega$ ) domain 8-13  
    in time domain 2-4  
digital filter - see filter  
**dimpulse** MATLAB function 9-28  
**dirac** MATLAB function 1-18  
direct term in MATLAB 3-4  
discontinuous function 1-2  
display formats in MATLAB A-30  
distinct poles 3-2  
Division in MATLAB  
    element-by-element operator A-21  
    matrix operator A-20  
    matrix left division C-24  
division of complex numbers B-4  
dot multiplication operator in MATLAB A-21  
double-memory technique 10-19  
doublet function 1-15

## E

editor window in MATLAB A-2  
editor/debugger in MATLAB A-1, A-2  
eigenvalues 5-11  
eigenvector 5-19  
elements of the matrix C-1  
**ellip** MATLAB function 11-36  
elliptic filter - see filter  
**eps** MATLAB function A-22  
Euler's identities B-4  
even function 6-5, 7-33  
even symmetry 7-7  
**exit** MATLAB command A-2  
exponential form of complex numbers B-4  
exponential form of the Fourier series 7-31  
exponential order function 2-2  
exponentiation in MATLAB  
    element-by-element operator A-21  
    matrix operator A-21  
**eye** MATLAB function C-7

## F

**factor** MATLAB function 3-4  
Fast Fourier Transform (FFT) 10-17

FFT 10-17  
FFT Category I and II algorithms 10-19  
**fft** MATLAB function 10-5, 11-67  
figure window in MATLAB A-13  
filter  
    all-pass 11-1  
    all-pole 11-18  
    band-elimination  
        analog 4-29, 11-1, 11-39, 11-46  
        digital 11-58  
    band-pass  
        analog 4-29, 11-1, 11-39, 11-44  
        digital 11-58  
    band-stop - see filter, band-elimination  
    Bessel 11-77  
    Butterworth  
        band-elimination 11-39, 11-46  
        band-pass 11-39, 11-44  
        high-pass 11-39  
        low-pass 11-7, 11-17, 11-20, 11-39  
    Cauer - see filter, elliptic  
    Chebyshev  
        Type I 11-22  
        Type II 11-34, 11-35  
    elliptic 11-34, 11-36  
    Inverted Chebyshev - see filter, Chebyshev Type II  
    high-pass  
        analog 4-28, 11-1, 11-4, 11-39, 11-42  
        digital 11-58  
    low-pass  
        analog 4-27, 11-1, 11-2, 11-7, 11-39, 11-42  
        digital 11-58  
    phase-shift - see filter, all-pass  
**filter** MATLAB function 11-62  
final value theorem  
    in Laplace transform 2-10  
    in Z transform 9-10  
**find** MATLAB function 11-67  
Finite Impulse Response (FIR) digital filter 11-50  
FIR digital filter 11-50  
first harmonic 7-1  
first order circuit 5-1  
fmax in MATLAB - using fmin to find max A-27  
**fmin** in MATLAB A-27  
**format** MATLAB command A-30  
**fourier** MATLAB function 8-33  
Fourier integral - see Fourier Transform  
Fourier series  
    alternate trigonometric form 7-25  
    DC (average) component 7-1

exponential form 7-31  
trigonometric form 7-1  
Fourier transform  
  definition of 8-1  
  derived from the Laplace Transform 8-25  
  of the cosine function 8-19  
  of the delta function 8-17  
  of the signum (sgn) function 8-20  
  of the sine function 8-20  
  of the unit step function 8-21  
  of unity 8-19  
Fourier transforms of common waveforms 8-27  
**fplot** MATLAB command A-27  
frequency response A-12  
frequency shift 10-12  
**freqz** MATLAB function 11-60  
full rectification waveform 2-36  
full-wave rectifier 7-21  
full-wave rectifier with even symmetry 7-24  
function file in MATLAB A-26  
fundamental frequency 7-1  
**fzero** MATLAB function A-27

## G

gamma function 2-15  
Gaussian elimination method C-19  
generalized factorial function 2-15  
geometric sequence in Z-transform 9-11  
Gibbs phenomenon 7-24  
Gram-Schmidt Orthogonalization Procedure 5-19  
**grid** MATLAB command A-12  
**gtext** MATLAB command A-13

## H

half-rectified sine wave 2-28  
half-wave rectifier 7-17  
half-wave rectifier with no symmetry 7-21  
half-wave symmetry 7-7, 7-33  
**Heaviside(t)** MATLAB function 1-18  
**help** in MATLAB A-2  
Hermitian matrix - see matrix  
high-pass filter - see filter

## I

identity matrix C-6  
**ifft** MATLAB function 10-5  
**ifourier** MATLAB function 8-33

**ilaplace** MATLAB function 3-4  
**imag** MATLAB function A-23  
imaginary axis B-2  
imaginary number B-2  
impedance 4-2, 4-8  
  capacitive 4-2  
  inductive 4-2  
improper integral 2-16  
improper rational function 3-1, 3-13  
impulse invariant method 11-50  
impulse response  
  in continuous time systems 6-1  
  in discrete time systems 9-40  
increments between points in MATLAB A-14  
inductive admittance - see admittance  
inductive impedance - see impedance  
IIR digital filter 11-50  
Infinite Impulse Response (IIR) digital filter 11-50  
initial value theorem  
  in Laplace transform 2-9  
  in Z transform 9-9  
in-place algorithm 10-20  
integration in complex frequency 2-8  
integration in time 2-6  
Inverse Fourier transform 8-1  
Inverse Laplace transform 2-1, 3-1  
inverse matrix method of solution of equations C-23  
inverse of a matrix - see matrix  
Inverse Z transform 9-1  
Inversion integral 9-32  
Inverted Chebyshev filter - see filter  
**iztrans** MATLAB function 9-27

## J

j operator B-1

## L

L' Hôpital's rule 2-15, 2-16  
Laplace transform of common functions 2-12  
Laplace transform of common waveforms 2-23  
Laplace Transformation 2-1  
leakage 10-13  
left shift in in discrete time domain 9-5  
Leibnitz's rule 2-6  
**lims=** in MATLAB A-27  
line spectrum 7-35  
linear difference equation 9-38  
linear factor A-9

linearity property  
in Fourier transform 8-9  
in Laplace transform 2-2  
in Z transform 9-3

**linspace** MATLAB command A-14

ln in MATLAB A-13

**log** MATLAB function A-13

**log10** MATLAB function A-13

**log2** MATLAB function A-13

**loglog** scale in MATLAB A-13

lower triangular matrix C-5

low-pass filter - see filter

**lp2bp** MATLAB function 11-40, 11-44

**lp2bs** MATLAB function 11-40, 11-46

**lp2hp** MATLAB function 11-40, 11-42

**lp2lp** MATLAB function 11-40, 11-41

## M

main diagonal elements of a matrix - see matrix

main diagonal of a matrix - see matrix

matrices

conformable for addition and subtraction C-2

conformable for multiplication C-4

matrix - see also determinant

adjoint of C-20

cofactor of C-12

conformable for addition and subtraction - see matrices

conformable for multiplication - see matrices

conjugate of C-8

definition of C-1

determinant of C-9

Hermitian, skew-Hermitian C-9

inverse of C-21

lower triangular C-5

main diagonal of C-1

minor of C-12

non-singular C-21

scalar C-6

singular C-21

size of C-7

square C-1

symmetric, skew-symmetric C-8, C-9

trace of C-2

transpose of C-7

upper triangular C-5

zero C-2

matrix left division in MATLAB C-24

matrix multiplication in MATLAB A-18

**mesh** MATLAB command A-17

**meshgrid** MATLAB command A-17

method of clearing the fractions 3-15

m-file in MATLAB A-2, A-25

minor of determinant C-12

MINVERSE Excel function C-26

MMULT Excel function C-26

modulated signals 8-12

multiple (repeated) poles 3-8

multiplication

in continuous time domain 2-12, 8-11

in discrete time systems 9-6

see also convolution

multiplication in MATLAB

element-by-element A-21

matrix A-20

multiplication of complex numbers B-3

## N

NaN in MATLAB A-27

natural input-output 10-19

non-recursive realization digital filter 11-50

normalized cutoff frequency 11-12

N-point DFT 10-2

numerical evaluation of Fourier coefficients 7-44

Nyquist frequency 10-13

## O

octave 11-9

odd function 6-5, 7-33

odd symmetry 7-7

orthogonal functions 7-2

orthogonal vectors 5-19

## P

Parseval's theorem 8-16

partial fraction expansion method 3-1, 3-15

phase shift filter - see filter

picket-fence effect 10-14

**plot** MATLAB command A-10

**plot3** MATLAB command A-15

polar form of complex numbers B-5

**polar** in MATLAB A-23

polar plot in MATLAB A-24

poles of rational functions 3-1

**poly** MATLAB function A-4

**polyder** MATLAB function A-8

**polyval** MATLAB function A-6  
pre-sampling filter 10-13  
pre-warping 11-54  
proper rational function 3-1

## Q

quadratic factor A-9  
**quit** MATLAB function A-2

## R

radius of absolute convergence 9-3  
**randn** MATLAB function 11-67  
rational polynomials A-8  
real axis B-2  
**real** MATLAB function A-23  
real number B-2  
rectangular form B-5  
recursive realization 11-50  
region of convergence 9-3, 9-14, 9-17  
region of divergence 9-3, 9-14, 9-17  
repeated poles - see multiple poles  
**residue** MATLAB function 3-3  
residue theorem 9-20  
residues 3-2  
**roots** MATLAB function 3-6, A-3  
**round** MATLAB function A-23  
row vector A-3, A-19  
Runge-Kutta method 5-1

## S

sampling property of the delta function 1-12  
sampling theorem 10-13  
sawtooth waveform with odd symmetry 7-16  
scaling property 2-4, 8-10  
script file in MATLAB A-25  
second harmonic 7-1  
second-order circuit 5-1  
semicolons in MATLAB A-8  
**semilogx** axis in MATLAB A-13  
**semilogy** axis in MATLAB A-13  
sgn function - see signum function  
Shannon's sampling theorem - see sampling theorem  
shifting property  
    in complex frequency ( $s$ ) domain 2-3  
    in frequency ( $j\omega$ ) domain 8-11  
    in continuous time domain 2-3, 8-11  
    in discrete time domain

    left shift 9-5  
    right shift 9-4  
sifting property of the delta function 1-13  
signal flow graph 10-23  
signum function 8-20  
spectrum analyzer 7-35  
square waveform with even symmetry 7-14  
square waveform with odd symmetry 7-12  
**ss2tf** MATLAB function 5-31  
state equations 5-1, 9-43  
state transition matrix 5-9  
state variables  
    for continuous time systems 5-1  
    for discrete time systems 9-43  
step invariant method 11-50  
**subplot** MATLAB command A-18  
symmetric rectangular pulse 1-6  
symmetric triangular waveform 1-6  
symmetry  
    in trigonometric Fourier series 7-7  
    in exponential Fourier series 7-33  
    property of Fourier transform 8-10  
system function 8-35  
    see also transfer function

## T

Taylor series 5-1  
**text** MATLAB command A-14  
**tf2ss** MATLAB function 5-32  
third harmonic 7-1  
time periodicity 2-8  
transfer function 4-15  
    in continuous time systems 4-13  
    in discrete time systems 9-40  
    see also system function  
triangular waveform 7-9, 7-17  
trigonometric form of Fourier series - See Fourier series  
triplet function 1-15

## U

unit impulse 1-8, 1-12  
unit ramp function  
    in continuous time 1-8, 1-10  
    in discrete time 9-18  
unit step function  
    in continuous time 1-2  
    in discrete time 9-3

## **V**

Vandermonde matrix 10-18

## **W**

warping 11-52

window function 10-13

## **X**

**xlabel** MATLAB function A-13

## **Y**

**ylabel** MATLAB function A-13

## **Z**

Z transform 9-1

**zlabel** MATLAB function A-18

**ztrans** MATLAB function 9-27